

Stenographer Grade C and D Examination 2020

Section : **General Intelligence and Reasoning**

Q.1 Select the number that is related to the third number in the same way as the second number is related to the first number.

14 : 238 :: 18 : ?

Ans 1. 301

2. 342

3. 651

4. 405

Question ID : 81616110981

Status : Answered

Chosen Option : 2

Q.2 Select the option that is related to the third letter-cluster in the same way as the second letter-cluster is related to the first letter-cluster.

MOCK : NLXP :: DART : ?

Ans 1. VZIH

2. WZIG

3. WZJG

4. ZYKI

Question ID : 81616110957

Status : Answered

Chosen Option : 3



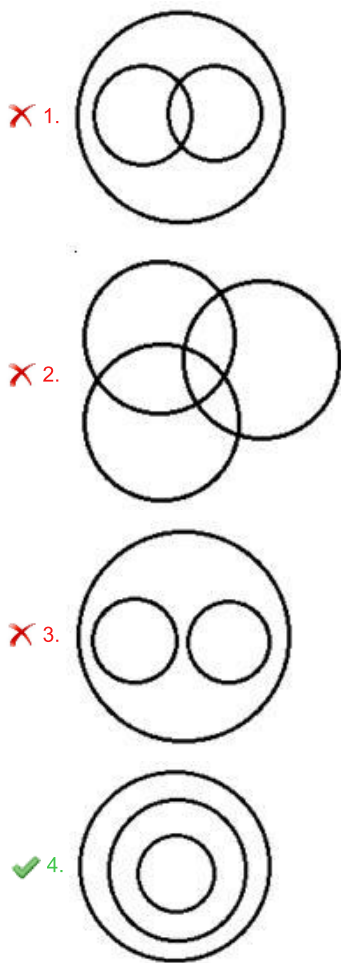
Download SSC CGL, CHSL E-BOOKS

[CLICK HERE](#)

Q.3 Select the Venn diagram that best illustrates the relationship between the following classes.

Eatables, Bananas, Fruits

Ans



Question ID : 81616110997
Status : Answered
Chosen Option : 4

Q.4 Which of the following letter-clusters will replace the question mark (?) in the given series?

DMKY, HQOC, MVTH, SBZN, ?

- Ans ✓ 1. ZIGU
✗ 2. ZKGV
✗ 3. AIHU
✗ 4. ZJGT

Question ID : 81616110951
Status : Answered
Chosen Option : 1

Q.5 Study the given pattern carefully and select the number that can replace the question mark (?) in it.

55 63 ?

48 58 40

49 25 49

Ans 1. 58

2. 51

3. 47

4. 49

Question ID : 81616110985

Status : Not Answered

Chosen Option : --

Q.6 Which two signs and two numbers should be interchanged in the following equation to make it correct?

$35 + 15 - 4 \times 45 \div 5 = 98$

Ans 1. 35 and 45; + and -

2. 15 and 5; \times and +

3. 35 and 45; \times and -

4. 15 and 35; \times and +

Question ID : 81616110984

Status : Answered

Chosen Option : 3

Q.7 Six persons, P, Q, R, S, T and U, are sitting in a room. There are equal males and females. There is at least one married couple in the room. Q is P's daughter. S is the father of two persons - one male and one female. P and T are daughters of U. Who is the married couple?

Ans 1. P and S

2. U and Q

3. U and S

4. Q and T

Question ID : 81616111584

Status : Answered

Chosen Option : 1

Q.8 If 'Red' is called 'Tomato', 'Tomato' is called 'Sweet', 'Sweet' is called 'Good', and 'Good' is called 'Clean', then what is the colour of blood?

Ans 1. Good

2. Clean

3. Tomato

4. Red

Question ID : 81616111575

Status : Answered

Chosen Option : 3



Q.9 Eight friends K, L, M, N, O, P, Q and R are sitting clockwise in the same sequence around a circular table, facing the centre, at equal distances from each other. If O is sitting in the south-east, then in which direction is R facing?

- Ans 1. East
 2. North
 3. South-west
 4. West

Question ID : 81616110990
Status : Answered
Chosen Option : 1

Q.10 If 'A' denotes 'addition', 'B' denotes 'multiplication', 'C' denotes 'subtraction', and 'D' denotes 'division', then what will be the value of the following expression?

$$43 A 22 C 15 B 4 A 72 D (10 C 2) = ?$$

- Ans 1. 44
 2. 18
 3. 14
 4. 32

Question ID : 81616110982
Status : Answered
Chosen Option : 3

Q.11 Among five pencils, A, B, C, D and E, the length of D is 10 cm. A is half the length of D but double the length of C. E is 2 cm longer than C. The length of B is equal to the lengths of A and E taken together. Which is the longest pencil?

- Ans 1. E
 2. D
 3. B
 4. C

Question ID : 81616110967
Status : Answered
Chosen Option : 2

Q.12 Select the correct combination of mathematical signs to sequentially replace the * signs from left to right to balance the given equation.

$$44 * 32 * 8 * 16 * 3 * 0$$

- Ans 1. +, x, -, ÷, =
 2. x, +, -, ÷, =
 3. +, -, x, ÷, =
 4. +, ÷, -, x, =

Question ID : 81616110983
Status : Answered
Chosen Option : 4

Q.13 Study the given pattern carefully and select the number that can replace the question mark (?) in it.

(13, 4, 18) (49, 24, 50) (87, 51, ?)

- Ans
- 1. 84
 - 2. 69
 - 3. 72
 - 4. 76

Question ID : 8161611601
Status : Answered
Chosen Option : 3

Q.14 Select the correct option that indicates the arrangement of the following words in a logical and meaningful order.

1. Drive vehicle
2. Unlock vehicle
3. Start vehicle
4. Reach destination
5. Parking of vehicle

- Ans
- 1. 2, 3, 4, 1, 5
 - 2. 2, 3, 1, 4, 5
 - 3. 1, 5, 4, 3, 2
 - 4. 2, 4, 1, 3, 5

Question ID : 81616110952
Status : Answered
Chosen Option : 2

Q.15 Study the given pattern carefully and select the number that can replace the question mark (?) in it.

4 8 128

3 9 108

5 10 ?

- Ans
- 1. 236
 - 2. 205
 - 3. 225
 - 4. 220

Question ID : 81616110782
Status : Answered
Chosen Option : 3

Q.16 Three of the following four letter-cluster pairs are alike in a certain way and one is different. Pick the odd one out.

- Ans
- 1. MAGIC : AMGCI
 - 2. FIRST : IFRTS
 - 3. LOGIC : OLGCI
 - 4. CREST : RCTES

Question ID : 81616110956
Status : Answered
Chosen Option : 4

Q.17 Three statements are given, followed by three conclusions numbered I, II and III. Assuming the statements to be true, even if they seem to be at variance with commonly known facts, decide which of the conclusions logically follow(s) from the statements.

Statements:

Some machines are coolers.
All coolers are robots.
Some microwaves are coolers.

Conclusions:

I. Some coolers are machines.
II. Some robots are machines.
III. No robot is a microwave.

- Ans
- 1. Either conclusion I or III follows
 - 2. Only conclusions I and III follow
 - 3. Only conclusions I and II follow
 - 4. All of the conclusions follow

Question ID : 81616110972

Status : Answered

Chosen Option : 3

Q.18 Select the number from among the given options that can replace the question mark (?) in the following series.

2, 11, 28, 53, ?, 127

- Ans
- 1. 86
 - 2. 92
 - 3. 74
 - 4. 98

Question ID : 81616111590

Status : Answered

Chosen Option : 1

Q.19 What was the day of the week on 19 February 2011?

- Ans
- 1. Monday
 - 2. Tuesday
 - 3. Saturday
 - 4. Sunday

Question ID : 81616110980

Status : Answered

Chosen Option : 2

Q.20 Which number will replace the question mark (?) in the given series?

14, 30, 64, 130, ?, 530, 1064

- Ans
- 1. 364
 - 2. 464
 - 3. 264
 - 4. 164

Question ID : 81616110771

Status : Answered

Chosen Option : 3

Q.21 'A + B' means 'A is the father of B'.
'A * B' means 'A is the daughter of B'.
'A % B' means 'A is the brother of B'.

If J + T % N % C * L * S, then how is J related to S?

- Ans
- 1. Son-in-law
 - 2. Paternal uncle
 - 3. Son
 - 4. Brother-in-law

Question ID : 81616110765
Status : Answered
Chosen Option : 1

Q.22 Select the correct option that indicates the arrangement of the given words in a logical and meaningful order.

- 1. Jewellery
- 2. Metal
- 3. Sell
- 4. Melt
- 5. Polish

- Ans
- 1. 2, 4, 5, 1, 3
 - 2. 2, 4, 1, 5, 3
 - 3. 1, 4, 2, 5, 3
 - 4. 1, 5, 3, 4, 2

Question ID : 81616111568
Status : Answered
Chosen Option : 1

Q.23 Select the option figure in which the given figure is embedded (rotation is NOT allowed).



Ans

- 1.
- 2.
- 3.
- 4.

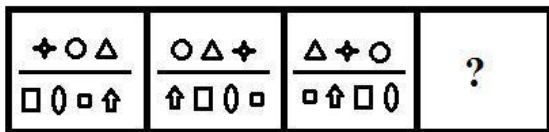
Question ID : 81616110994
Status : Answered
Chosen Option : 4

Q.24 Five houses K, L, M, N and O are situated in a row, all facing the north. M is to the immediate left of L. K is between O and M. N is third to the right of K. Which house is exactly in the middle?

- Ans
- 1. K
 - 2. L
 - 3. M
 - 4. N

Question ID : 81616110965
 Status : Answered
 Chosen Option : 3

Q.25 Select the figure that will replace the question mark (?) in the following figure series.



Ans

- 1.
- 2.
- 3.
- 4.

Question ID : 81616110993
 Status : Answered
 Chosen Option : 3

Q.26 Pointing towards Arti, Sukanya said, "She is my husband's mother-in-law's husband's daughter". How is Arti related to Sukanya?

- Ans
- 1. Maternal aunt
 - 2. Mother
 - 3. Sister-in-law
 - 4. Sister

Question ID : 81616110968
 Status : Answered
 Chosen Option : 4

Q.27 In a certain code language, 'YOUNGER' is written as 'AQWNECP'. How will 'NUMBERS' be written as in that language?

- Ans
- 1. LWOB CPU
 - 2. PWOB CPQ
 - 3. PYOB GPQ
 - 4. PWND CPQ

Question ID : 81616110756
Status : Answered
Chosen Option : 2

Q.28 If $Z = Y > R = M$ and $G > H = Z = Q$, then which of the following options is NOT correct?

- Ans
- 1. $H = Y$
 - 2. $G > Q$
 - 3. $R > Z$
 - 4. $Q > R$

Question ID : 81616110964
Status : Answered
Chosen Option : 3

Q.29 The average income of six friends A, B, C, D, E and F is ₹6,500. The total income of B, D, E and F is ₹25,000. If A's income is ₹4,000 less than C's income, then what is the income of C?

- Ans
- 1. ₹10,000
 - 2. ₹9,000
 - 3. ₹7,000
 - 4. ₹8,000

Question ID : 81616110978
Status : Answered
Chosen Option : 2

Q.30 Mridul cycles 145 m towards the east, and then turns left and cycles 155 m. Again, he turns left and cycles 225 m. He finally turns left and cycles 95 m to reach his home. What is the shortest distance between his home and the starting point?

- Ans
- 1. 100 m
 - 2. 140 m
 - 3. 120 m
 - 4. 60 m

Question ID : 81616110991
Status : Answered
Chosen Option : 1

Q.31 Meenal walks 45 m towards the north, and then turns left and walks 35 m. From there, she turns right and walks 26 m, and then she again turns right and walks 35 m. She finally takes a left turn and walks 17 m to reach her home. How far is she from the starting point?

- Ans
- 1. 85 m
 - 2. 83 m
 - 3. 88 m
 - 4. 80 m

Question ID : 81616110989
Status : Answered
Chosen Option : 3



Q.32 Three statements are given, followed by three conclusions numbered I, II and III. Assuming the statements to be true, even if they seem to be at variance with commonly known facts, decide which of the conclusions logically follow(s) from the statements.

Statements:

All tractors are roads.
No road is a park.
No tractor is a vehicle.

Conclusions:

I. No vehicle is a tractor.
II. No tractor is a park.
III. Some roads are tractors.

- Ans** 1. All of the conclusions follow
 2. Only conclusions II and III follow
 3. Only conclusion III follows
 4. Only conclusions I and III follow

Question ID : 81616110973

Status : Answered

Chosen Option : 1

Q.33 Study the given pattern carefully and select the number that can replace the question mark (?) in it.

15 12 81

17 14 93

15 11 ?

- Ans** 1. 104
 2. 113
 3. 97
 4. 181

Question ID : 81616110988

Status : Not Answered

Chosen Option : --

Q.34 Two statements are given, followed by three conclusions numbered I, II and III. Assuming the statements to be true, even if they seem to be at variance with commonly known facts, decide which of the conclusions logically follow(s) from the statements.

Statements:

Some carpenters are singers.
All singers are doctors.

Conclusions:

I. No doctor is a carpenter.
II. Some doctors are singers.
III. Some carpenters are doctors.

- Ans** 1. All of the conclusions follow
 2. Only conclusion II follows
 3. Only conclusion III follows
 4. Only conclusions II and III follow

Question ID : 81616110971

Status : Answered

Chosen Option : 4



Download SSC CGL, CHSL E-BOOKS

[CLICK HERE](#)

Q.35 In a certain code language, 'CURSOR' is written as '564' and 'BOY' is written as '126'.
How will 'FREE' be written as in that language?

- Ans
- 1. 126
 - 2. 154
 - 3. 136
 - 4. 130

Question ID : 81616110962
Status : Not Answered
Chosen Option : --

Q.36 Select the option that represents the correct order of the given words as they would appear in an English dictionary.

1. Logical
2. Logistics
3. Longevity
4. Locust
5. Loafer

- Ans
- 1. 3, 5, 1, 2, 4
 - 2. 5, 4, 2, 3, 1
 - 3. 5, 4, 2, 1, 3
 - 4. 5, 4, 1, 2, 3

Question ID : 81616110749
Status : Answered
Chosen Option : 4

Q.37 Three of the following four letter-clusters are alike in a certain way and one is different.
Pick the odd one out.

- Ans
- 1. GJOV
 - 2. WZFL
 - 3. SVAH
 - 4. CFKR

Question ID : 81616110955
Status : Answered
Chosen Option : 2

Q.38 Eight persons A, B, C, D, E, F, G and H are sitting in a straight line facing the north. C is between B and A. D is between B and H. E is third to the left of A. B is second to the right of A. G is between A and F. H is at one of the corners. Who is sitting at the other corner?

- Ans
- 1. E
 - 2. G
 - 3. B
 - 4. F

Question ID : 81616110966
Status : Answered
Chosen Option : 1

Q.39 Among five objects P, Q, R, S and T, Q is twice as heavy as P. S is twice as heavy as Q. R is half as heavy as T. T is equally as heavy as Q. Which is the heaviest among all five objects?

- Ans 1. Q
 2. S
 3. T
 4. R

Question ID : 81616110963
Status : Answered
Chosen Option : 2

Q.40 Which of the following letter-clusters will replace the question mark (?) in the given series?

RTCQ, TWGV, VZKA, XCOF, ?

- Ans 1. ZFTL
 2. ZGSL
 3. YFTK
 4. ZFSK

Question ID : 81616110950
Status : Answered
Chosen Option : 4

Q.41 Select the option that is related to the third letter-cluster in the same way as the second letter-cluster is related to the first letter-cluster.

FRAGILE : RLIGFEA :: CAUTION : ?

- Ans 1. UTOINCA
 2. OTUNICA
 3. UOTNICA
 4. UTONICA

Question ID : 81616110959
Status : Not Answered
Chosen Option : --

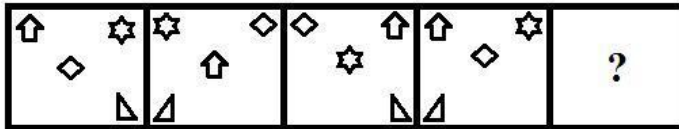
Q.42 Which of the following numbers will replace the question mark (?) in the given series?

56, 59, 65, 68, 74, ?, 83

- Ans 1. 85
 2. 77
 3. 82
 4. 78


Question ID : 81616110974
Status : Answered
Chosen Option : 2

Q.43 Select the figure that will replace the question mark (?) in the following figure series.




Ans


✗ 1.



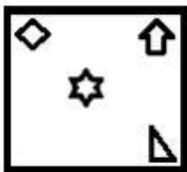
✗ 2.



✓ 3.



✗ 4.

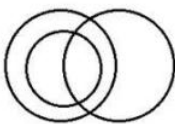


Question ID : 81616110992

Status : Answered

Chosen Option : 3

Q.44 Select the set of classes the relationship between which is best illustrated by the Venn diagram given below.



Ans

✗ 1. Brothers, Fathers, Uncles

✗ 2. Farmers, Sisters, Brothers

✓ 3. Farmers, Uncles, Males

✗ 4. Mothers, Females, Nephews

Question ID : 81616110998

Status : Answered

Chosen Option : 3



Download SSC CGL, CHSL E-BOOKS

[CLICK HERE](#)

Q.45 Which of the following letter-clusters will replace the question mark (?) in the given series?

JOD, FKZ, BGV, ?

Ans 1. WDR

2. YCR

3. XCS

4. XCR

Question ID : 81616110949

Status : Answered

Chosen Option : 4

Q.46 In a class of 45 students, all students participate in one or both of the two games, i.e. Chess and Badminton. 11 students participate in both the games, whereas 17 students participate only in Chess. How many total students participate in Badminton?

Ans 1. 24

2. 28

3. 30

4. 26

Question ID : 81616110979

Status : Answered

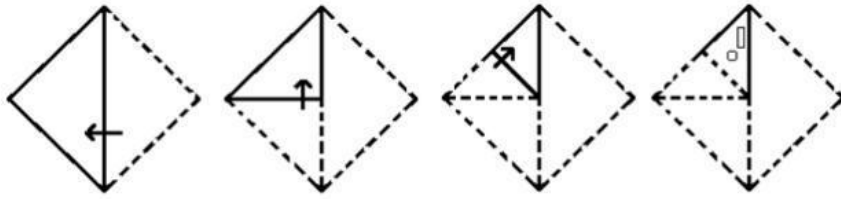
Chosen Option : 2



Download SSC CGL, CHSL E-BOOKS

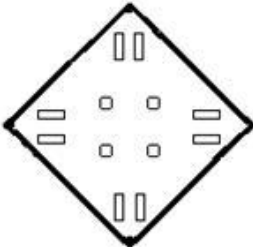
[CLICK HERE](#)

Q.47 A paper is folded and cut as shown below. How will it appear when unfolded?

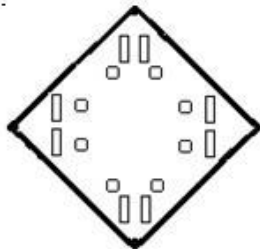


Ans

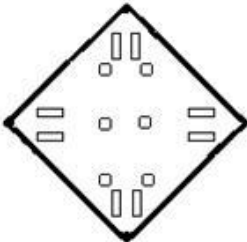
✗ 1.



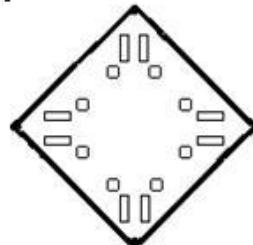
✗ 2.



✗ 3.



✓ 4.



Question ID : 81616110995

Status : Answered

Chosen Option : 4

Q.48 Select the option that is related to the third letter-cluster in the same way as the second letter-cluster is related to the first letter-cluster.

CARE : HUDF :: TOMB : ?

Ans ✗ 1. DPRX

✗ 2. EQRX

✗ 3. FPSW

✓ 4. EPRW

Question ID : 81616110958

Status : Answered

Chosen Option : 4

Q.49 Select the correct mirror image of the given figure when the mirror is placed at MN as shown below.



Ans

- ✓ 1.
- ✗ 2.
- ✗ 3.
- ✗ 4.

Question ID : 81616110996
Status : Answered
Chosen Option : 1

Q.50 Which of the following numbers will replace the question mark (?) in the given series?

77, 78, 74, 83, 67, ?

Ans

- ✗ 1. 188
- ✗ 2. 88
- ✓ 3. 92
- ✗ 4. 192

Question ID : 81616110977
Status : Answered
Chosen Option : 3