

Multi Tasking Non Technical Staff and Havaladar CBIC and CBN Examination 2024

Roll Number	
Candidate Name	
Venue Name	ION DIGITAL ZONE iDZ 2 WADI MIDC
Exam Date	22/10/2024
Exam Time	4:00 PM - 5:30 PM
Subject	MTS Non Tech Havaladar CBIC and CBN Examination 2024

Section : Numerical and Mathematical Ability

Q.1 A shopkeeper gives 4 shirts free on buying 6 shirts. Find the percentage of discount given to the customers.

- Answers
- 1. 20%
 - 2. 30%
 - 3. 40%
 - 4. 10%

Question Type : MCQ
Question ID : 630680629703
Option 1 ID : 6306802464707
Option 2 ID : 6306802464708
Option 3 ID : 6306802464709
Option 4 ID : 6306802464706
Status : Answered
Chosen Option : 4

Q.2 Find the average of the the first 15 multiples of 5.

- Ans
- 1. 45
 - 2. 35
 - 3. 30
 - 4. 40

Question Type : MCQ
Question ID : 630680466644
Option 1 ID : 6306801822559
Option 2 ID : 6306801822557
Option 3 ID : 6306801822556
Option 4 ID : 6306801822558
Status : Answered
Chosen Option : 3

Q.3 Find the simple interest (in ₹) on ₹3500 as a sum borrowed at 3% per year rate of interest for 4 years.

- Ans
- 1. 460
 - 2. 360
 - 3. 380
 - 4. 420

Question Type : MCQ
Question ID : 630680591960
Option 1 ID : 6306802316308
Option 2 ID : 6306802316309
Option 3 ID : 6306802316310
Option 4 ID : 6306802316307
Status : Answered
Chosen Option : 4

SSC MTS (Non Technical) EXAM STUDY KIT



FREE SHIPPING 

- ▶ 100% SSC MTS Exam Syllabus Covered
- ▶ PRINTED Notes
- ▶ 8 Books, 700+ Pages
- ▶ 2500+ MCQs
- ▶ Practice Papers
- ▶ 1 Year Current Affairs

50% OFF

SSCPORTAL.IN

SSC MTS PDF NOTES

100% Syllabus Covered



CLICK HERE

CLICK BELOW LINK TO DOWNLOAD PDF NOTES

<https://sscportal.in/study-kit/mts>

<https://sscportal.in/study-kit>

Q.4 The mean of the first 7 odd prime numbers is (rounded off to two decimal places):

- Ans
- 1. 5.41
 - 2. 8.61
 - 3. 7.91
 - 4. 10.71

Question Type : MCQ
Question ID : 630680239448
Option 1 ID : 630680928745
Option 2 ID : 630680928743
Option 3 ID : 630680928744
Option 4 ID : 630680928746
Status : Not Answered
Chosen Option : --

Q.5 The cost price of some table lamps is ₹25,000. The shopkeeper will get ₹15,000 more if he sells these table lamps for ₹1,200 per lamp instead of ₹900 per lamp. Find the selling price of 23 table lamps if he earned 21% profit.

- Ans
- 1. ₹12,919
 - 2. ₹14,917
 - 3. ₹12,585
 - 4. ₹13,915

Question Type : MCQ
Question ID : 630680472194
Option 1 ID : 6306801844498
Option 2 ID : 6306801844497
Option 3 ID : 6306801844496
Option 4 ID : 6306801844495
Status : Not Answered
Chosen Option : --

Q.6 Find the simple interest (in ₹) on ₹3500 as a sum borrowed at 5% per year rate of interest for 6 years.

- Ans
- 1. 1010
 - 2. 1090
 - 3. 990
 - 4. 1050

Question Type : MCQ
Question ID : 630680591972
Option 1 ID : 6306802316358
Option 2 ID : 6306802316356
Option 3 ID : 6306802316357
Option 4 ID : 6306802316355
Status : Answered
Chosen Option : 4

Q.7 Ravi walks a circular track of 1680m in circumference. If the speed of Ravi is 140m/min, then the time to cover one round is equal to:

- Ans
- 1. 8 min
 - 2. 14 min
 - 3. 12 min
 - 4. 10 min

Question Type : MCQ
Question ID : 63068078454
Option 1 ID : 630680303877
Option 2 ID : 630680303880
Option 3 ID : 630680303879
Option 4 ID : 630680303878
Status : Not Answered
Chosen Option : --

Q.8 A train 315 m long is running at a speed of 54 km/h. What time will it take to cross a pole on its route?

- Ans
- 1. 18 s
 - 2. 20 s
 - 3. 21 s
 - 4. 19 s

Question Type : MCQ
Question ID : 630680131218
Option 1 ID : 630680508140
Option 2 ID : 630680508139
Option 3 ID : 630680508138
Option 4 ID : 630680508141
Status : Not Answered
Chosen Option : --

Q.9 A farmer mixes two varieties of rice of price ₹60 per kg and ₹30 per kg in the ratio of 1 : 2. He sold the mixture for ₹3,000 to

- Ans
- 1. 22 kg
 - 2. 15 kg
 - 3. 18 kg
 - 4. 20 kg

Q.10 Find the LCM of 9, 21 and 63

- Ans
- 1. 63
 - 2. 9
 - 3. 3
 - 4. 72

Question Type : MCQ
Question ID : 630680105366
Option 1 ID : 630680409536
Option 2 ID : 630680409537
Option 3 ID : 630680409535
Option 4 ID : 630680409538
Status : Answered
Chosen Option : 3

Q.11 A solid metal cone of height 30 cm and radius of base 10 cm is melted in to the form of a solid sphere. Find the radius of the sphere (in cm).

- Ans
- 1. $5\sqrt{6}$
 - 2. $6\sqrt{5}$
 - 3. $6^3\sqrt{5}$
 - 4. $5^3\sqrt{6}$

Question Type : MCQ
Question ID : 630680385444
Option 1 ID : 6306801502591
Option 2 ID : 6306801502590
Option 3 ID : 6306801502593
Option 4 ID : 6306801502592
Status : Not Answered
Chosen Option : --

Q.12 Pooja invested a certain sum in a scheme at simple interest of $r\%$ per annum for 12.5 years and get interest equal to $\frac{3}{4}$ of sum in

Ans 1.6

2. $7\frac{1}{2}$
3. 4
4. $5\frac{3}{4}$

Question Type
Question ID
Option 1 ID
Option 2 ID
Option 3 ID
Option 4 ID
Status
Chosen Option

Q.13 A's salary increases by 60% and then decreases by 30%. On the whole, A's salary is increased by _____?

- Ans 1. 48%
2. 72%
3. 30%
4. 12%

Question Type : MCQ
Question ID : 630680464486
Option 1 ID : 6306801813981
Option 2 ID : 6306801813982
Option 3 ID : 6306801813980
Option 4 ID : 6306801813979
Status : Answered
Chosen Option : 4

Q.14

If the cost price of an article is 70.5% of its selling price, what is the profit percentage (rounded off to 1 decimal place)?

- Ans 1. 42.7%
2. 41.8%
3. 39.5%
4. 51.6%

Question Type : MCQ
Question ID : 630680471361
Option 1 ID : 6306801841168
Option 2 ID : 6306801841166
Option 3 ID : 6306801841169
Option 4 ID : 6306801841167
Status : Not Answered
Chosen Option : --

Q.15 Find the area of an equilateral triangle whose side is 16 cm.

- Ans 1. $64\sqrt{3}\text{cm}^2$
2. $60\sqrt{3}\text{cm}^2$
3. $68\sqrt{3}\text{cm}^2$
4. $62\sqrt{3}\text{cm}^2$

Question Type : MCQ
Question ID : 630680104376
Option 1 ID : 630680405713
Option 2 ID : 630680405711
Option 3 ID : 630680405714
Option 4 ID : 630680405712
Status : Not Answered
Chosen Option : --

Q.16 Find the fourth proportional of $4a + 7$, $11a + 3$ and $6a$ if $a = 2$.

- Ans
- 1. 25
 - 2. 15
 - 3. 30
 - 4. 20

Question Type : MCQ
 Question ID : 630680239508
 Option 1 ID : 630680928985
 Option 2 ID : 630680928983
 Option 3 ID : 630680928986
 Option 4 ID : 630680928984
 Status : Not Answered
 Chosen Option : --

Q.17 The given table shows data for the month of April 2023.

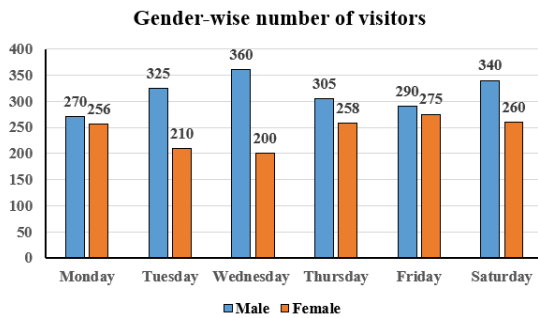
Company	Total number of employees	Number of female employees
W	16258	7580
X	12350	6950
Y	13090	7850
Z	14780	8590

What is the difference between the number of male employees in company Z and that in company X?

- Ans
- 1. 975
 - 2. 820
 - 3. 680
 - 4. 790

Question Type : MCQ
 Question ID : 630680523770
 Option 1 ID : 6306802047234
 Option 2 ID : 6306802047233
 Option 3 ID : 6306802047231
 Option 4 ID : 6306802047232
 Status : Not Answered
 Chosen Option : --

Q.18 The bar graph shows the gender-wise number of visitors in a library over 6 days.



Find the ratio of the number of male and female visitors on the day having maximum visitors.

- Ans
- 1. 17 : 13
 - 2. 9 : 5
 - 3. 58 : 55
 - 4. 65 : 42

Question Type : MCQ
 Question ID : 630680415778
 Option 1 ID : 6306801621857
 Option 2 ID : 6306801621855
 Option 3 ID : 6306801621856
 Option 4 ID : 6306801621858
 Status : Not Answered
 Chosen Option : --

Q.19 If the total surface area of a hemisphere is 1848 m^2 , then the diameter (in m) of the hemisphere is: (Use $\pi = \frac{22}{7}$)

- Ans
- 1. 7
 - 2. 14
 - 3. 28
 - 4. 21

Question Type : MCQ
Question ID : 630680526644
Option 1 ID : 6306802058645
Option 2 ID : 6306802058643
Option 3 ID : 6306802058642
Option 4 ID : 6306802058644
Status : Not Answered
Chosen Option : --

Q.20 The average weight of 16 containers is 80 kg. If 8 new containers are added, the new average increases by 2.5 kg. The average weight of the 8 new containers is:

- Ans
- 1. 87 kg
 - 2. 87.5 kg
 - 3. 82.5 kg
 - 4. 160 kg

Question Type : MCQ
Question ID : 630680447395
Option 1 ID : 6306801746833
Option 2 ID : 6306801746834
Option 3 ID : 6306801746835
Option 4 ID : 6306801746836
Status : Not Answered
Chosen Option : --

Section : Reasoning Ability and Problem Solving

Q.1 Select the figure from among the given options that can replace the question mark (?) in the following series and complete the pattern.

△	H	2	H	V	=	V	=	A	=	△	X	
	A		2			□		A				?
X	V	=	△	X	A	H	△	X	V	H	□	

Ans

✗ 1.

V	X	□
	4	
=	△	H

✗ 2.

V	=	△
	4	
H	□	X

✗ 3.

X	=	△
	4	
□	V	H

✓ 4.

△	X	□
	4	
=	V	H

Question Type : MCQ

Question ID : 630680441087

Option 1 ID : 6306801722003

Option 2 ID : 6306801722004

Option 3 ID : 6306801722005

Option 4 ID : 6306801722002

Status : Answered

Chosen Option : 4

Q.2 Select the set in which the numbers are related in the same way as are the numbers of the following sets.

(NOTE: Operations should be performed on the whole numbers, without breaking down the numbers into their constituent digits. E.g. 13 – Operations on 13 such as adding/subtracting/multiplying etc. to 13, can be performed. Breaking down 13 into 1 and 3 and then performing mathematical operations on 1 and 3 is not allowed.)

(18, 16, 34)

(21, 43, 64)

Ans ✗ 1. (23, 12, 76)

✗ 2. (39, 10, 53)

✓ 3. (32, 10, 42)

✗ 4. (22, 41, 73)

Question Type : MCQ

Question ID : 630680404574

Option 1 ID : 6306801577792

Option 2 ID : 6306801577791

Option 3 ID : 6306801577794

Option 4 ID : 6306801577793

Status : Answered

Chosen Option : 3

Q.3 Six people—A, B, C, D, E, and F—are sitting around a circular table, facing the centre (but not necessarily in the same order). A is an immediate neighbour of both E and F. C is second to the left of F. B is not an immediate neighbour of E. What is the position of D?

- Ans
- 1. Second to the right of B
 - 2. Immediate left of C
 - 3. Immediate left of A
 - 4. Immediate left of F

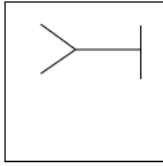
Question Type : MCQ
Question ID : 630680387037
Option 1 ID : 6306801508860
Option 2 ID : 6306801508858
Option 3 ID : 6306801508861
Option 4 ID : 6306801508859
Status : Answered
Chosen Option : 1

Q.4 Which two signs should be interchanged to make the given equation correct?
 $56 \div 8 \times 45 + 4 - 23 = 164$

- Ans
- 1. + and ×
 - 2. - and ×
 - 3. - and +
 - 4. + and ×

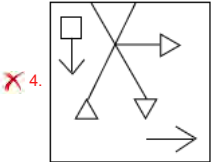
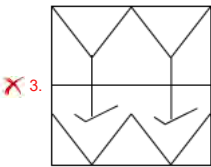
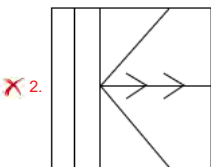
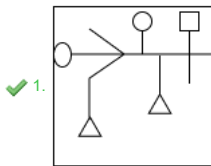
Question Type : MCQ
Question ID : 630680411995
Option 1 ID : 6306801606815
Option 2 ID : 6306801606817
Option 3 ID : 6306801606816
Option 4 ID : 6306801606818
Status : Answered
Chosen Option : 4

Q.5 Select the option figure in which the given figure (X) is embedded as its part (rotation is NOT allowed).



(X)

Ans



Question Type : MCQ

Question ID : 630680487603

Option 1 ID : 6306801904503

Option 2 ID : 6306801904504

Option 3 ID : 6306801904505

Option 4 ID : 6306801904502

Status : Answered

Chosen Option : 1

Q.6 JJDA is related to QQKH in a certain way based on the English alphabetical order. In the same way, ENHE is related to LUOL. To which of the following is TTNK related, following the same logic?

Ans ✗ 1. AUAR

✓ 2. AAUR

✗ 3. URAA

✗ 4. AURA

Question Type : MCQ

Question ID : 630680386859

Option 1 ID : 6306801508149

Option 2 ID : 6306801508146

Option 3 ID : 6306801508148

Option 4 ID : 6306801508147

Status : Answered

Chosen Option : 2

Q.7 In a certain code language, 'LOST' is coded as '5197' and 'TURN' is coded as '4562'.
What is the code for 'T' in that language?

- Ans
- 1. 2
 - 2. 5
 - 3. 7
 - 4. 4

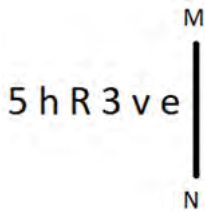
Question Type : MCQ
 Question ID : 630680435856
 Option 1 ID : 6306801701375
 Option 2 ID : 6306801701373
 Option 3 ID : 6306801701376
 Option 4 ID : 6306801701374
 Status : Answered
 Chosen Option : 2

Q.8 127 is related to 218 following a certain logic. Following the same logic, 3 is related to 10. To which of the following is 29 related, following the same logic?
 (NOTE : Operations should be performed on the whole numbers, without breaking down the numbers into its constituent digits. E.g. 13 – Operations on 13 such as adding / subtracting / multiplying, etc., to 13 can be performed. Breaking down 13 into 1 and 3 and then performing mathematical operations on 1 and 3 is not allowed.)

- Ans
- 1. 67
 - 2. 66
 - 3. 68
 - 4. 63

Question Type : MCQ
 Question ID : 630680450005
 Option 1 ID : 6306801757182
 Option 2 ID : 6306801757184
 Option 3 ID : 6306801757185
 Option 4 ID : 6306801757183
 Status : Answered
 Chosen Option : 3

Q.9 Select the correct mirror image of the given figure when the mirror is placed at MN as shown below.



- Ans
- 1. e v ε R 4 5
 - 2. e v ε R ɹ ɿ
 - 3. e v ε R 4 ɿ
 - 4. v e ε R ɿ

Question Type : MCQ
 Question ID : 630680525260
 Option 1 ID : 6306802053127
 Option 2 ID : 6306802053126
 Option 3 ID : 6306802053124
 Option 4 ID : 6306802053125
 Status : Answered
 Chosen Option : 2

Q.10 In a certain code language, 'EXIT' is coded as '1937' and 'ZERO' is coded as '6829'. What is the code for 'E' in the given code language?

- Ans
- 1. 8
 - 2. 2
 - 3. 9
 - 4. 1

Question Type : MCQ
Question ID : 630680388000
Option 1 ID : 6306801512617
Option 2 ID : 6306801512616
Option 3 ID : 6306801512614
Option 4 ID : 6306801512615
Status : Answered
Chosen Option : 3

Q.11 FRNQ is related to LXTW in a certain way based on the English alphabetical order. In the same way, XJFI is related to DPLO. To which of the following is VHDG related, following the same logic?

- Ans
- 1. BMNJ
 - 2. MNJB
 - 3. BNJM
 - 4. BJMN

Question Type : MCQ
Question ID : 630680443972
Option 1 ID : 6306801733197
Option 2 ID : 6306801733198
Option 3 ID : 6306801733195
Option 4 ID : 6306801733196
Status : Answered
Chosen Option : 3

Q.12 In a certain code language, 'bat ball game' is written as 'mq mp nr' and 'game hockey football' is written as 'mp mt ml' and 'ball player umpire' is written as 'nr mb mc'. How is 'bat' written in the given language?

- Ans
- 1. mt
 - 2. mq
 - 3. ml
 - 4. mb

Question Type : MCQ
Question ID : 630680439094
Option 1 ID : 6306801714189
Option 2 ID : 6306801714188
Option 3 ID : 6306801714191
Option 4 ID : 6306801714190
Status : Answered
Chosen Option : 2

Q.13 What will come in the place of the question mark (?) in the following equation if '+' and '-' are interchanged and '-' and 'x' are interchanged?

$$13 - 3 + 4 - 9 \div 10 - 3 \times 20 + 5 = ?$$

- Ans
- 1. -15
 - 2. 101
 - 3. 86
 - 4. 111

Question Type : MCQ
Question ID : 630680264627
Option 1 ID : 6306801028013
Option 2 ID : 6306801028012
Option 3 ID : 6306801028011
Option 4 ID : 6306801028014
Status : Answered
Chosen Option : 2

Q.14 In a certain code language, 'car is fast' is written as 'gq ip eb' and 'fast and furious' is written as 'hp qm ip'. How is 'fast' written in the given language?

- Ans
- 1. hp
 - 2. eb
 - 3. gq
 - 4. ip

Question Type : MCQ
Question ID : 630680502782
Option 1 ID : 6306801964711
Option 2 ID : 6306801964709
Option 3 ID : 6306801964712
Option 4 ID : 6306801964710
Status : Answered
Chosen Option : 4

Q.15 A, B, C, D, E, F and G are sitting around a circular table facing the centre (but not necessarily in the same order). G sits third to the right of A. D sits third to the right of G. E is an immediate neighbour of both A and F. C sits third to the right of F. How many people sit between E and D when counted from the right of E?

- Ans
- 1. 4
 - 2. 1
 - 3. 3
 - 4. 2

Question Type : MCQ
Question ID : 630680383282
Option 1 ID : 6306801494027
Option 2 ID : 6306801494030
Option 3 ID : 6306801494028
Option 4 ID : 6306801494029
Status : Answered
Chosen Option : 4

Q.16 Select the number from among the given options that can replace the question mark (?) in the following series.
33, 37, 46, 62, 87, ?

- Ans
- 1. 123
 - 2. 122
 - 3. 121
 - 4. 124

Question Type : MCQ
Question ID : 630680430573
Option 1 ID : 6306801680316
Option 2 ID : 6306801680315
Option 3 ID : 6306801680314
Option 4 ID : 6306801680317
Status : Answered
Chosen Option : 1

Q.17 Read the given statements and conclusions carefully. Assuming that the information given in the statements is true, even if it appears to be at variance with commonly known facts, decide which of the given conclusions logically follow(s) from the statements.

Statements: All papers are files. All files are secret.

Conclusions:

(I) All papers are secret.

(II) All secrets are files.

- Ans
- 1. Neither conclusion (I) nor (II) is follow .
 - 2. Only conclusion (II) is follow .
 - 3. Only conclusion (I) is follow .
 - 4. Both conclusions (I) and (II) are follow .

Question Type : MCQ
Question ID : 630680393923
Option 1 ID : 6306801536004
Option 2 ID : 6306801536003
Option 3 ID : 6306801536002
Option 4 ID : 6306801536005
Status : Answered
Chosen Option : 3

Q.18 Read the given statements and conclusions carefully. Assuming that the information given in the statements is true, even if it appears to be at variance with commonly known facts, decide which of the given conclusions logically follow(s) from the statements.

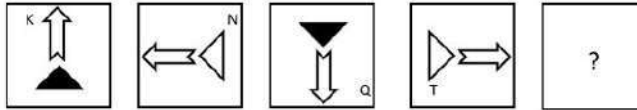
Statements:
All oranges are apples.
Some apples are kiwis.

Conclusions:
(I) Some oranges are not kiwis.
(II) All apples are oranges.

- Ans
- 1. Only conclusion I follows
 - 2. Neither conclusion I nor II follows
 - 3. Both conclusion I and II follow
 - 4. Only conclusion II follows

Question Type : MCQ
Question ID : 630680419670
Option 1 ID : 6306801637173
Option 2 ID : 6306801637176
Option 3 ID : 6306801637175
Option 4 ID : 6306801637174
Status : Answered
Chosen Option : 2

Q.19 Identify the figure given in the options which when put in place of ? will logically complete the series.



Ans

- 1.
- 2.
- 3.
- 4.

Question Type : MCQ
Question ID : 630680278502
Option 1 ID : 6306801082295
Option 2 ID : 6306801082294
Option 3 ID : 6306801082296
Option 4 ID : 6306801082293
Status : Answered
Chosen Option : 2

Q.20 What should come in place of the question mark (?) in the given series based on the English alphabetical order?

EFD, JKI, OPN, TUS, ?

- Ans
- 1. EVF
 - 2. YZX
 - 3. GUH
 - 4. EFU

Question Type : MCQ
Question ID : 630680443462
Option 1 ID : 6306801731241
Option 2 ID : 6306801731240
Option 3 ID : 6306801731242
Option 4 ID : 6306801731243
Status : Answered
Chosen Option : 2

Section : General Awareness

Q.1 Tirof Sing was the leader of which of the following revolts?

- Ans
- 1. Sanyasi Revolt
 - 2. Poligars's Revolt
 - 3. Khasi uprising
 - 4. Singpho's Rebellion

Question Type : MCQ
Question ID : 630680350907
Option 1 ID : 6306801365920
Option 2 ID : 6306801365917
Option 3 ID : 6306801365918
Option 4 ID : 6306801365919
Status : Not Answered
Chosen Option : --

Q.2 In India, who introduced the idea of the poverty line for the first time?

- Ans
- 1. Mahatma Gandhi
 - 2. Dadabhai Naoroji
 - 3. Jawaharlal Nehru
 - 4. Dr. BR Ambedkar

Question Type : MCQ
Question ID : 630680394652
Option 1 ID : 6306801538895
Option 2 ID : 6306801538897
Option 3 ID : 6306801538894
Option 4 ID : 6306801538896
Status : Marked For Review
Chosen Option : 3

Q.3 In which of the following years did Lord Curzon announce the partition of Bengal?

- Ans
- 1. 1900
 - 2. 1909
 - 3. 1905
 - 4. 1914

Question Type : MCQ
Question ID : 630680210812
Option 1 ID : 630680817407
Option 2 ID : 630680817408
Option 3 ID : 630680817410
Option 4 ID : 630680817409
Status : Answered
Chosen Option : 3

SSC MTS (Non Technical) EXAM STUDY KIT



FREE SHIPPING 

- ▶ 100% SSC MTS Exam Syllabus Covered
- ▶ PRINTED Notes
- ▶ 8 Books, 700+ Pages
- ▶ 2500+ MCQs
- ▶ Practice Papers
- ▶ 1 Year Current Affairs

50% OFF

 SSCPOTAL.IN

SSC MTS PDF NOTES

100% Syllabus Covered



CLICK HERE

CLICK BELOW LINK TO DOWNLOAD PDF NOTES

<https://sscpportal.in/study-kit/mts>

<https://sscpportal.in/study-kit>

Q.4 _____ dance is embedded in the stories from the epics Mahabharata, Ramayana and Puranas.

- Ans
- 1. Kuchipudi
 - 2. Kathakali
 - 3. Odissi
 - 4. Sattriya

Question Type : MCQ
Question ID : 630680465744
Option 1 ID : 6306801819013
Option 2 ID : 6306801819012
Option 3 ID : 6306801819011
Option 4 ID : 6306801819014
Status : Answered
Chosen Option : 4

Q.5 In which language was 'Mudraraksha' play written by Vishakhadatta?

- Ans
- 1. Tamil
 - 2. Sanskrit
 - 3. Hindi
 - 4. Telugu

Question Type : MCQ
Question ID : 630680127466
Option 1 ID : 630680494124
Option 2 ID : 630680494126
Option 3 ID : 630680494127
Option 4 ID : 630680494125
Status : Answered
Chosen Option : 3

Q.6 The Dravidian style of temple architecture can be largely seen from which part of India?

- Ans
- 1. Eastern India
 - 2. Northern India
 - 3. Southern India
 - 4. Western India

Question Type : MCQ
Question ID : 630680616081
Option 1 ID : 6306802411029
Option 2 ID : 6306802411026
Option 3 ID : 6306802411028
Option 4 ID : 6306802411027
Status : Not Answered
Chosen Option : --

Q.7 Which of the following is NOT a qualification/eligibility to become the President of India?

- Ans
- 1. Must be qualified for election as a member of the house of the people
 - 2. Must have completed the age of thirty-five years
 - 3. Must be a citizen of India
 - 4. Must hold any office of profit

Question Type : MCQ
Question ID : 630680172211
Option 1 ID : 630680667282
Option 2 ID : 630680667281
Option 3 ID : 630680667280
Option 4 ID : 630680667283
Status : Answered
Chosen Option : 1

Q.8 Which of the following dynasties of the Delhi Sultanate finally annexed Jaunpur into the empire of Delhi Sultanate?

- Ans
- 1. Lodi dynasty
 - 2. Sayyid dynasty
 - 3. Khalji dynasty
 - 4. Tughlaq dynasty

Question Type : MCQ
Question ID : 630680326299
Option 1 ID : 6306801269288
Option 2 ID : 6306801269287
Option 3 ID : 6306801269285
Option 4 ID : 6306801269286
Status : Answered
Chosen Option : 4

Q.9 The property by virtue of which carbon can form a C-C covalent bond is called _____.

- Ans
- 1. allotropy
 - 2. covalency
 - 3. tetravalency
 - 4. catenation

Question Type : MCQ
Question ID : 630680471465
Option 1 ID : 6306801841577
Option 2 ID : 6306801841576
Option 3 ID : 6306801841575
Option 4 ID : 6306801841574
Status : Answered
Chosen Option : 2

Q.10 Losoong festival is predominantly celebrated in Sikkim by which of the following tribes?

- Ans
- 1. Kurumba
 - 2. Khasi
 - 3. Bhil
 - 4. Bhutia

Question Type : MCQ
Question ID : 630680402997
Option 1 ID : 6306801571561
Option 2 ID : 6306801571562
Option 3 ID : 6306801571559
Option 4 ID : 6306801571560
Status : Not Answered
Chosen Option : --

Q.11 _____ received Padma Shri 2017 award for being an exponent of Nagpuri folk dance Jhumar.

- Ans
- 1. Mukund Nayak
 - 2. Purushottam Upadhyay
 - 3. Laishram Birendrakumar Singh
 - 4. Chemancheri Kunhiraman Nair

Question Type : MCQ
Question ID : 630680512028
Option 1 ID : 6306802001085
Option 2 ID : 6306802001082
Option 3 ID : 6306802001083
Option 4 ID : 6306802001084
Status : Not Answered
Chosen Option : --

Q.12 In 2018, Ganesh and Kumaresh Rajagopalan won the Sangeet Natak Akademi Award for Carnatic instrumental music. For playing which instrument did they win this award?

- Ans 1. Violin
 2. Sarangi
 3. Veena
 4. Sarod

Question Type : MCQ
Question ID : 630680482210
Option 1 ID : 6306801883356
Option 2 ID : 6306801883357
Option 3 ID : 6306801883355
Option 4 ID : 6306801883354
Status : Not Answered
Chosen Option : --

Q.13 Which of the following diseases is detected by the Widal test?

- Ans 1. Pneumonia
 2. Diphtheria
 3. Typhoid
 4. Influenza

Question Type : MCQ
Question ID : 63068078590
Option 1 ID : 630680304409
Option 2 ID : 630680304411
Option 3 ID : 630680304410
Option 4 ID : 630680304412
Status : Not Answered
Chosen Option : --

Q.14 To which state does the Indian tennis player Sumit Nagal belong?

- Ans 1. Maharashtra
 2. Odisha
 3. Haryana
 4. Karnataka

Question Type : MCQ
Question ID : 630680710803
Option 1 ID : 6306802784869
Option 2 ID : 6306802784870
Option 3 ID : 6306802784868
Option 4 ID : 6306802784871
Status : Marked For Review
Chosen Option : 3

Q.15 Which Indian Member of Parliament was given the 'India UK Outstanding Achievers Honour' in January 2023?

- Ans 1. Hemant Shriram Patil
 2. Haji Fazlur Rehman
 3. Hanuman Beniwal
 4. Raghav Chadha

Question Type : MCQ
Question ID : 630680468757
Option 1 ID : 6306801830822
Option 2 ID : 6306801830820
Option 3 ID : 6306801830821
Option 4 ID : 6306801830819
Status : Not Answered
Chosen Option : --

Q.16 Which of the following events and their hosts is correctly matched?

- Ans 1. ICC World Cup Men Cricket 2015 – India, Sri Lanka, Bangladesh
 2. ICC World Cup Men Cricket 2019 – England and Wales
 3. ICC World Cup Men Cricket 2007 – England
 4. ICC World Cup Men Cricket 2011 – Australia and New Zealand

Question Type : MCQ
Question ID : 630680510862
Option 1 ID : 6306801996580
Option 2 ID : 6306801996581
Option 3 ID : 6306801996578
Option 4 ID : 6306801996579
Status : Not Answered
Chosen Option : --

Q.17 Layers of varying thickness are found in which type of rock?

- Ans 1. Volcanic rock
 2. Igneous rock
 3. Sedimentary rock
 4. Metamorphic rock

Question Type : MCQ
Question ID : 630680456076
Option 1 ID : 6306801781246
Option 2 ID : 6306801781245
Option 3 ID : 6306801781243
Option 4 ID : 6306801781244
Status : Answered
Chosen Option : 1

Q.18 The Panchpatmali mineral deposit region is located in which state from the following?

- Ans 1. Rajasthan
 2. Himachal Pradesh
 3. Odisha
 4. Haryana

Question Type : MCQ
Question ID : 630680510951
Option 1 ID : 6306801996936
Option 2 ID : 6306801996934
Option 3 ID : 6306801996937
Option 4 ID : 6306801996935
Status : Marked For Review
Chosen Option : 3

Q.19 Constipation could be a sign that the person is suffering from a lack of _____.

- Ans 1. Calcium
 2. Vitamin
 3. Dietary Fibre
 4. Protein

Question Type : MCQ
Question ID : 630680544408
Option 1 ID : 6306802128407
Option 2 ID : 6306802128408
Option 3 ID : 6306802128409
Option 4 ID : 6306802128406
Status : Answered
Chosen Option : 3

Q.20 The Directive Principles of State Policy in the Indian Constitution are borrowed from which country's constitution?

- Ans
- 1. The Constitution of the Soviet Union
 - 2. The Constitution of the United Kingdom
 - 3. The Constitution of Ireland
 - 4. The Constitution of the United States

Question Type : MCQ
Question ID : 630680733641
Option 1 ID : 6306802875401
Option 2 ID : 6306802875400
Option 3 ID : 6306802875402
Option 4 ID : 6306802875399
Status : Answered
Chosen Option : 3

Q.21 In 2023, the Government of India has proposed to set up how many new 'Waste to Wealth' plants under GOBARdhan?

- Ans
- 1. 250
 - 2. 300
 - 3. 450
 - 4. 500

Question Type : MCQ
Question ID : 630680467074
Option 1 ID : 6306801824249
Option 2 ID : 6306801824250
Option 3 ID : 6306801824251
Option 4 ID : 6306801824252
Status : Not Answered
Chosen Option : --

Q.22 Who wrote the novel 'The Catcher in the Rye'?

- Ans
- 1. JD Salinger
 - 2. Ernest Hemingway
 - 3. HG Wells
 - 4. Mark Twain

Question Type : MCQ
Question ID : 630680467360
Option 1 ID : 6306801825387
Option 2 ID : 6306801825388
Option 3 ID : 6306801825389
Option 4 ID : 6306801825386
Status : Not Answered
Chosen Option : --

Q.23 What does M stand for in BHIM-UPI?

- Ans
- 1. Monetary
 - 2. Mobile
 - 3. Money
 - 4. Monthly

Question Type : MCQ
Question ID : 630680302538
Option 1 ID : 6306801176824
Option 2 ID : 6306801176822
Option 3 ID : 6306801176823
Option 4 ID : 6306801176825
Status : Answered
Chosen Option : 1

Q.24 As per Census 2011, what is the literacy rate of India?

- Ans
- 1. 65.46%
 - 2. 82.14%
 - 3. 70%
 - 4. 74.04%

Question Type : MCQ
Question ID : 630680697321
Option 1 ID : 6306802731372
Option 2 ID : 6306802731370
Option 3 ID : 6306802731373
Option 4 ID : 6306802731371
Status : Not Answered
Chosen Option : --

Q.25 Which is the largest agro-based Industry of India?

- Ans
- 1. Cotton textile industry
 - 2. Edible oil industry
 - 3. Tea industry
 - 4. Sugar industry

Question Type : MCQ
Question ID : 630680481997
Option 1 ID : 6306801882498
Option 2 ID : 6306801882497
Option 3 ID : 6306801882496
Option 4 ID : 6306801882495
Status : Marked For Review
Chosen Option : 1

Section : English Language and Comprehension

Q.1 Select the INCORRECTLY spelt word.

- Ans
- 1. calender
 - 2. tabular
 - 3. lying
 - 4. written

Question Type : MCQ
Question ID : 630680799091
Option 1 ID : 6306803131163
Option 2 ID : 6306803131162
Option 3 ID : 6306803131165
Option 4 ID : 6306803131164
Status : Answered
Chosen Option : 2

Q.2 The following sentence has been divided into parts. One of them may contain an error. Select the part that contains the error from the given options. If you don't find any error, mark 'No error' as your answer.

Spanish person are well known worldwide / for their warm hospitality / and food.

- Ans
- 1. and food
 - 2. Spanish person are well known worldwide
 - 3. No error
 - 4. for their warm hospitality

Question Type : MCQ
Question ID : 630680631377
Option 1 ID : 6306802471452
Option 2 ID : 6306802471450
Option 3 ID : 6306802471453
Option 4 ID : 6306802471451
Status : Answered
Chosen Option : 2

Q.3 Select the most appropriate ANTONYM of the underlined word.
They reinvested in their trades and indulged in unobtrusive consumption at home.

- Ans
- 1. Preposterous
 - 2. Conspicuous
 - 3. Faint
 - 4. Obscure

Question Type : MCQ
Question ID : 630680455444
Option 1 ID : 6306801778693
Option 2 ID : 6306801778690
Option 3 ID : 6306801778691
Option 4 ID : 6306801778692
Status : Answered
Chosen Option : 2

Q.4 Select the most appropriate option that can substitute the underlined segment in the given sentence.

Universal high-quality education is the best way forward for developing and maximising our country's rich talents and resources for the good in the individual, the society, the country and the world.

- Ans
- 1. good by the individual
 - 2. good of the individual
 - 3. good for the individual
 - 4. good on the individual

Question Type : MCQ
Question ID : 630680130478
Option 1 ID : 630680505225
Option 2 ID : 630680505223
Option 3 ID : 630680505224
Option 4 ID : 630680505222
Status : Answered
Chosen Option : 1

Q.5 Select the most appropriate option to fill in the blank.
My mother always _____ to help people.

- Ans
- 1. takes a rain check
 - 2. breaks the bank
 - 3. turns a deaf ear
 - 4. goes the extra mile

Question Type : MCQ
Question ID : 630680399117
Option 1 ID : 6306801556429
Option 2 ID : 6306801556426
Option 3 ID : 6306801556427
Option 4 ID : 6306801556428
Status : Answered
Chosen Option : 4

Q.6 Select the most appropriate synonym of the given word.
Recluse

- Ans
- 1. Closeness
 - 2. Solitary
 - 3. Sociable
 - 4. Candid

Question Type : MCQ
Question ID : 630680726529
Option 1 ID : 6306802847123
Option 2 ID : 6306802847122
Option 3 ID : 6306802847125
Option 4 ID : 6306802847124
Status : Not Answered
Chosen Option : --

Q.7 Select the most appropriate synonym of the given word.
Intractable

- Ans
- 1. Proper
 - 2. Compliant
 - 3. Versatile
 - 4. Defiant

Question Type : MCQ
Question ID : 630680435553
Option 1 ID : 6306801700153
Option 2 ID : 6306801700151
Option 3 ID : 6306801700152
Option 4 ID : 6306801700150
Status : Answered
Chosen Option : 4

Q.8 Select the correctly spelled sentence.

- Ans
- 1. The athlete ran quickley across the finish line.
 - 2. The athlete ran quickly across the finish line.
 - 3. The athlet ran quicly across the finnish line.
 - 4. The athelete ran quicly across the finish line.

Question Type : MCQ
Question ID : 630680616015
Option 1 ID : 6306802410764
Option 2 ID : 6306802410762
Option 3 ID : 6306802410765
Option 4 ID : 6306802410763
Status : Answered
Chosen Option : 4

Q.9 Select the most appropriate option that can substitute the highlighted word(s) in the given sentence.

Anybody can solve this problem if he tried.

- Ans
- 1. if they were tried
 - 2. for they tried
 - 3. because they try
 - 4. if they try

Question Type : MCQ
Question ID : 630680564286
Option 1 ID : 6306802206100
Option 2 ID : 6306802206101
Option 3 ID : 6306802206099
Option 4 ID : 6306802206102
Status : Answered
Chosen Option : 4

Q.10 Select the grammatically correct sentence.

- Ans
- 1. Having belief in yourself is the big key to success.
 - 2. Having belief in yourself is the biggest key to success.
 - 3. Having beliefs in yourself is the bigger key to success.
 - 4. Having belief in yourself is the most bigger key to success.

Question Type : MCQ
Question ID : 630680514588
Option 1 ID : 6306802010980
Option 2 ID : 6306802010979
Option 3 ID : 6306802010978
Option 4 ID : 6306802010977
Status : Answered
Chosen Option : 2

Q.11 Select the option that can be used as a one-word substitute for the highlighted group of words in the given sentence.

That scientist worked relentlessly to improve the instrument for measuring electric current.

- Ans 1. ammeter
 2. thermometer
 3. calculator
 4. compass

Question Type : MCQ
Question ID : 630680564316
Option 1 ID : 6306802206220
Option 2 ID : 6306802206219
Option 3 ID : 6306802206222
Option 4 ID : 6306802206221
Status : Answered
Chosen Option : 1

Q.12 Select the most appropriate option to fill in the blank.
It is being asked why there has been no _____ taken yet.

- Ans 1. attribution
 2. simplification
 3. distribution
 4. action

Question Type : MCQ
Question ID : 630680515218
Option 1 ID : 6306802013340
Option 2 ID : 6306802013339
Option 3 ID : 6306802013337
Option 4 ID : 6306802013338
Status : Answered
Chosen Option : 4

Q.13 Select the option that will improve the underlined part of the given sentence.
Indeed, Jack is one of the clever men I have ever met.

- Ans 1. the cleverest
 2. cleverer
 3. most clever
 4. clever

Question Type : MCQ
Question ID : 630680419723
Option 1 ID : 6306801637390
Option 2 ID : 6306801637392
Option 3 ID : 6306801637391
Option 4 ID : 6306801637389
Status : Answered
Chosen Option : 1

Q.14 Identify the sentence with an error with respect to the use of present tense.

- Ans 1. She has sung romantic songs.
 2. She sings romantic songs.
 3. She has been singing songs.
 4. She singing romantic songs.

Question Type : MCQ
Question ID : 630680460576
Option 1 ID : 6306801798592
Option 2 ID : 6306801798591
Option 3 ID : 6306801798593
Option 4 ID : 6306801798590
Status : Answered
Chosen Option : 2

Q.15 Select the grammatically correct sentence from the given options.

- Ans 1. It is strange to see a guy shouting in the mall without any reason.
 2. It is too stranger to see a guy shouting in the mall without any reason.
 3. It is too stranger to see a guy shouting in the mall beside any reason.
 4. It is too stranger to see a guy shout in the mall without any reason.

Question Type : MCQ
Question ID : 630680514694
Option 1 ID : 6306802011404
Option 2 ID : 6306802011401
Option 3 ID : 6306802011403
Option 4 ID : 6306802011402
Status : Answered
Chosen Option : 1

Q.16 Select the option that rectifies the spelling error of the underlined word.

Preserving our planet's biodiversity is essential for the health and sustainability of ecosystems and human life.

- Ans 1. sustainability
 2. sustainability
 3. sustanbility
 4. susteinabelety

Question Type : MCQ
Question ID : 630680419618
Option 1 ID : 6306801636970
Option 2 ID : 6306801636968
Option 3 ID : 6306801636969
Option 4 ID : 6306801636967
Status : Answered
Chosen Option : 1

Q.17 Select the most appropriate option that can substitute the underlined segment in the given sentence.

It is all one whether I go today or tomorrow.

- Ans 1. in one piece
 2. just the same
 3. proper
 4. together

Question Type : MCQ
Question ID : 630680799113
Option 1 ID : 6306803131253
Option 2 ID : 6306803131251
Option 3 ID : 6306803131252
Option 4 ID : 6306803131250
Status : Answered
Chosen Option : 2

Q.18 Select the option that can be used as a one-word substitute for the given group of words.

Constant efforts to achieve something

- Ans 1. Perspicacious
 2. Euphemism
 3. Perseverance
 4. Recant

Question Type : MCQ
Question ID : 630680316401
Option 1 ID : 6306801231228
Option 2 ID : 6306801231226
Option 3 ID : 6306801231225
Option 4 ID : 6306801231227
Status : Answered
Chosen Option : 3

Q.19 Select the most appropriate option to fill in the blank.

The street is crowded. You could easily get lost in this _____.

- Ans
- 1. phase
 - 2. faze
 - 3. maze
 - 4. maize

Question Type : MCQ
Question ID : 630680517505
Option 1 ID : 6306802022417
Option 2 ID : 6306802022416
Option 3 ID : 6306802022418
Option 4 ID : 6306802022419
Status : Answered
Chosen Option : 3

Q.20 Which of the following words is a synonym of 'Evanescent'?

- Ans
- 1. Exemplary
 - 2. Fleeting
 - 3. Imitation
 - 4. Delicious

Question Type : MCQ
Question ID : 630680415845
Option 1 ID : 6306801622147
Option 2 ID : 6306801622148
Option 3 ID : 6306801622150
Option 4 ID : 6306801622149
Status : Answered
Chosen Option : 3

Comprehension:

In the following passage, some words have been deleted. Read the passage carefully and select the most appropriate option to fill in each blank.

It (1)_____ no discriminations to nationality, race, religious beliefs, class or political opinions. It endeavours to (2)_____ the suffering of individuals, being guided solely by (3)_____ needs, and to give priority to the (4)_____ urgent cases of distress. It promotes mutual understanding, friendship, cooperation and lasting peace (5)_____ all people.

SubQuestion No : 21

Q.21 Select the most appropriate option to fill in blank number 1.

- Ans
- 1. had made
 - 2. make
 - 3. makes
 - 4. made

Question Type : MCQ
Question ID : 630680129818
Option 1 ID : 630680502869
Option 2 ID : 630680502866
Option 3 ID : 630680502868
Option 4 ID : 630680502867
Status : Answered
Chosen Option : 3

Comprehension:

In the following passage, some words have been deleted. Read the passage carefully and select the most appropriate option to fill in each blank.

It (1)_____ no discriminations to nationality, race, religious beliefs, class or political opinions. It endeavours to (2)_____ the suffering of individuals, being guided solely by (3)_____ needs, and to give priority to the (4)_____ urgent cases of distress. It promotes mutual understanding, friendship, cooperation and lasting peace (5)_____ all people.

SubQuestion No : 22

Q.22 Select the most appropriate option to fill in blank number 2.

- Ans 1. clear
 2. increase
 3. relieve
 4. decreased

Question Type : MCQ
Question ID : 630680129819
Option 1 ID : 630680502872
Option 2 ID : 630680502871
Option 3 ID : 630680502873
Option 4 ID : 630680502870
Status : Answered
Chosen Option : 3

Comprehension:

In the following passage, some words have been deleted. Read the passage carefully and select the most appropriate option to fill in each blank.

It (1)_____ no discriminations to nationality, race, religious beliefs, class or political opinions. It endeavours to (2)_____ the suffering of individuals, being guided solely by (3)_____ needs, and to give priority to the (4)_____ urgent cases of distress. It promotes mutual understanding, friendship, cooperation and lasting peace (5)_____ all people.

SubQuestion No : 23

Q.23 Select the most appropriate option to fill in blank number 3.

- Ans 1. his
 2. her
 3. your
 4. their

Question Type : MCQ
Question ID : 630680129820
Option 1 ID : 630680502874
Option 2 ID : 630680502875
Option 3 ID : 630680502876
Option 4 ID : 630680502877
Status : Answered
Chosen Option : 1

Comprehension:

In the following passage, some words have been deleted. Read the passage carefully and select the most appropriate option to fill in each blank.

It (1)_____ no discriminations to nationality, race, religious beliefs, class or political opinions. It endeavours to (2)_____ the suffering of individuals, being guided solely by (3)_____ needs, and to give priority to the (4)_____ urgent cases of distress. It promotes mutual understanding, friendship, cooperation and lasting peace (5)_____ all people.

SubQuestion No : 24

Q.24 Select the most appropriate option to fill in blank number 4.

- Ans 1. least
 2. most
 3. high
 4. more

Question Type : MCQ
Question ID : 630680129821
Option 1 ID : 630680502879
Option 2 ID : 630680502880
Option 3 ID : 630680502881
Option 4 ID : 630680502878
Status : Answered
Chosen Option : 2

SSC MTS (Non Technical) EXAM STUDY KIT



FREE SHIPPING 

- ▶ 100% SSC MTS Exam Syllabus Covered
- ▶ PRINTED Notes
- ▶ 8 Books, 700+ Pages
- ▶ 2500+ MCQs
- ▶ Practice Papers
- ▶ 1 Year Current Affairs

50% OFF

SSCPORTAL.IN

SSC MTS PDF NOTES

100% Syllabus Covered



CLICK HERE

CLICK BELOW LINK TO DOWNLOAD PDF NOTES

<https://sscpportal.in/study-kit/mts>

<https://sscpportal.in/study-kit>

Comprehension:

In the following passage, some words have been deleted. Read the passage carefully and select the most appropriate option to fill in each blank.

It (1)_____ no discriminations to nationality, race, religious beliefs, class or political opinions. It endeavours to (2)_____ the suffering of individuals, being guided solely by (3)_____ needs, and to give priority to the (4)_____ urgent cases of distress. It promotes mutual understanding, friendship, cooperation and lasting peace (5)_____ all people.

SubQuestion No : 25

Q.25 Select the most appropriate option to fill in blank number 5.

- Ans
- 1. into
 - 2. at
 - 3. amongst
 - 4. of

Question Type : MCQ

Question ID : 630680129822

Option 1 ID : 630680502885

Option 2 ID : 630680502883

Option 3 ID : 630680502882

Option 4 ID : 630680502884

Status : Answered

Chosen Option : 3