

Multi Tasking Non Technical Staff and Havaladar CBIC and CBN Examination 2024

| | |
|----------------|---|
| Roll Number | |
| Candidate Name | |
| Venue Name | iON Dizital Zone Faridabad |
| Exam Date | 18/10/2024 |
| Exam Time | 9:00 AM - 11:00 AM |
| Subject | MTS Non Tech Havaldar CBIC and CBN Examination 2024 |

Section : Numerical and Mathematical Ability

Q.1 Find the simple interest (in ₹) on ₹2500 as a sum borrowed at 6% per year rate of interest for 6 years.

Ans  1. 900

 2. 840

 3. 940

 4. 860

Question Type : MCQ

Question ID : 630680591907

Option 1 ID : 6306802316095

Option 2 ID : 6306802316097

Option 3 ID : 6306802316096

Option 4 ID : 6306802316098

Status : Answered

Chosen Option : 1

SSC MTS (Non Technical) EXAM STUDY KIT



FREE
SHIPPING 

- ▶ 100% SSC MTS Exam Syllabus Covered
- ▶ PRINTED Notes
- ▶ 8 Books, 700+ Pages
- ▶ 2500+ MCQs
- ▶ Practice Papers
- ▶ 1 Year Current Affairs

50%
OFF

 SSCPOTAL.IN

SSC MTS PDF NOTES

100% Syllabus Covered



50%
OFF

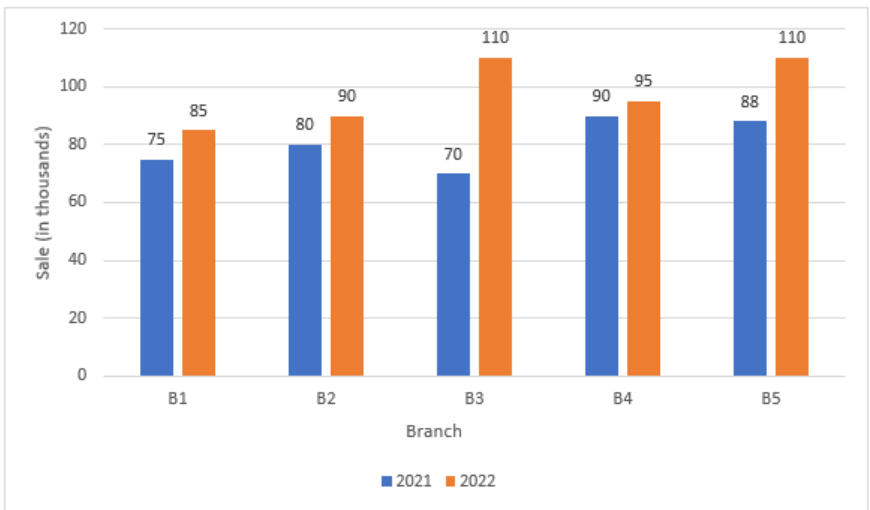
CLICK HERE

CLICK BELOW LINK TO DOWNLOAD PDF NOTES

<https://sscpportal.in/study-kit/mts>

<https://sscpportal.in/study-kit>

Q.2 The bar graph given below shows the sale of toys (in thousands) from five branches of a manufacturer for two consecutive years, 2021 and 2022.



Total sales of branch B4 for both years is what percentage of the total sales of branch B2 for both years? (up to two decimal places)

- Ans
- ☒ 1. 85.85%
 - ☒ 2. 91.89%
 - ☒ 3. 108.82%
 - ☒ 4. 116.47%

Question Type : MCQ
Question ID : 630680815893
Option 1 ID : 6306803196906
Option 2 ID : 6306803196908
Option 3 ID : 6306803196907
Option 4 ID : 6306803196905
Status : Answered
Chosen Option : 3

Q.3 What sum of money, when lent at 6% for 4 years, will produce the same interest as ₹800 earns in 5 years at $4\frac{1}{2}\%$?

- Ans
- ☒ 1. ₹ 700
 - ☒ 2. ₹ 650
 - ☒ 3. ₹ 750
 - ☒ 4. ₹ 625

Question Type : MCQ
Question ID : 630680410544
Option 1 ID : 6306801600898
Option 2 ID : 6306801600897
Option 3 ID : 6306801600899
Option 4 ID : 6306801600896
Status : Answered
Chosen Option : 3

Q.4 There are five persons with weights 58 kg, 38 kg, 45 kg, 34 kg and 55 kg. What is the average weight (in kg) of those persons whose weight is less than the average weight of the five persons?

- Ans ☒ 1. 39
☐ 2. 37
☐ 3. 43
☐ 4. 41

Question Type : MCQ
Question ID : 630680422189
Option 1 ID : 6306801647193
Option 2 ID : 6306801647192
Option 3 ID : 6306801647195
Option 4 ID : 6306801647194
Status : Answered
Chosen Option : 1

Q.5 The average of five numbers is 206. The average of two of them is 205. The average of another two of those numbers is 207.5. How many numbers can be accurately identified with this information?

- Ans ☐ 1. None
☐ 2. Three
☐ 3. Two
☒ 4. One

Question Type : MCQ
Question ID : 630680103832
Option 1 ID : 630680403562
Option 2 ID : 630680403559
Option 3 ID : 630680403560
Option 4 ID : 630680403561
Status : Answered
Chosen Option : 3

Q.6 The average of some natural numbers is 27. If 69 is added to the first number and 12 is subtracted from the last number, the average becomes 32.7, then the number of natural numbers is:

- Ans ☐ 1. 5
☐ 2. 8
☐ 3. 7
☒ 4. 10

Question Type : MCQ
Question ID : 630680402490
Option 1 ID : 6306801569522
Option 2 ID : 6306801569520
Option 3 ID : 6306801569521
Option 4 ID : 6306801569519
Status : Answered
Chosen Option : 4

Q.7 From a square with area a^2 another square made on mid points of the sides of the square is removed. What is the area left in the square?

Ans

✓ 1. $\frac{a^2}{2}$

✗ 2. $\frac{3a^2}{4}$

✗ 3. $\frac{2a^2}{3}$

✗ 4. $\frac{a^2}{4}$

Question Type : MCQ

Question ID : 63068094980

Option 1 ID : 630680368617

Option 2 ID : 630680368616

Option 3 ID : 630680368615

Option 4 ID : 630680368618

Status : Answered

Chosen Option : 1

Q.8 The price of a product increased by 20%. After some time, it decreased by 15%. What is the overall percentage change in the price?

Ans

✓ 1. 2%

✗ 2. 4%

✗ 3. 1%

✗ 4. 3%

Question Type : MCQ

Question ID : 630680481930

Option 1 ID : 6306801882209

Option 2 ID : 6306801882211

Option 3 ID : 6306801882208

Option 4 ID : 6306801882210

Status : Answered

Chosen Option : 1

Q.9 What is the mean proportional between 9 and 25?

Ans

✗ 1. 34

✗ 2. 16

✓ 3. 15

✗ 4. 17

Question Type : MCQ

Question ID : 630680108775

Option 1 ID : 630680422012

Option 2 ID : 630680422014

Option 3 ID : 630680422015

Option 4 ID : 630680422013

Status : Answered

Chosen Option : 3

Q.10 The external curved surface area of a metallic hemispherical bowl is 308 cm^2 . If the density of metal is 8.7 gm per cm^3 , then the mass of the bowl is equal to:

(Take $\pi = \frac{22}{7}$)

- Ans**
- ☒ 1. 6254.2 gm
 - ☒ 2. 5264.2 gm
 - ☒ 3. 6252.4 gm
 - ☒ 4. 5262.4 gm

Question Type : **MCQ**

Question ID : **630680388318**

Option 1 ID : **6306801513793**

Option 2 ID : **6306801513792**

Option 3 ID : **6306801513791**

Option 4 ID : **6306801513790**

Status : **Answered**

Chosen Option : **1**

Q.11 A thief is spotted by a policeman from a distance of 400 metres. When the policeman starts to chase the thief also starts running. If the speed of the thief is 18 km/h and that of the policeman 20 km/h , then how far would the thief have run before he is overtaken?

- Ans**
- ☒ 1. 2.5 km
 - ☒ 2. 9 km
 - ☒ 3. 1.8 km
 - ☒ 4. 3.6 km

Question Type : **MCQ**

Question ID : **630680262494**

Option 1 ID : **6306801019617**

Option 2 ID : **6306801019616**

Option 3 ID : **6306801019618**

Option 4 ID : **6306801019615**

Status : **Answered**

Chosen Option : **4**

Q.12 The average weight of a family of five members (in kg) whose weights are 40 kg, 49 kg, 56 kg, 67 kg and 39 kg is:

- Ans**
- ☒ 1. 49.2
 - ☒ 2. 50.2
 - ☒ 3. 51.2
 - ☒ 4. 52.2

Question Type : **MCQ**

Question ID : **630680551643**

Option 1 ID : **6306802156799**

Option 2 ID : **6306802156797**

Option 3 ID : **6306802156798**

Option 4 ID : **6306802156800**

Status : **Answered**

Chosen Option : **2**

Q.13 Pushkar buys an article for ₹27.50 and sells it for ₹28.60. Find his gain percentage.

- Ans ☒ 1. 3%
☒ 2. 6%
☒ 3. 4%
☒ 4. 7%

Question Type : MCQ
Question ID : 630680131775
Option 1 ID : 630680510313
Option 2 ID : 630680510312
Option 3 ID : 630680510310
Option 4 ID : 630680510311
Status : Answered
Chosen Option : 3

Q.14 Consider the production of three products, A, B and C, by three companies, X, Y and Z, in the given table.

| Product → Company ↓ | A | B | C |
|------------------------|-----|-----|-----|
| X | 100 | 115 | 95 |
| Y | 120 | 80 | 90 |
| Z | 70 | 110 | 120 |

Productions of how many products by company Y are more than the average production of all the products by company Y?

- Ans ☒ 1. 1
☒ 2. 0
☒ 3. 2
☒ 4. 3

Question Type : MCQ
Question ID : 630680523788
Option 1 ID : 6306802047304
Option 2 ID : 6306802047303
Option 3 ID : 6306802047305
Option 4 ID : 6306802047306
Status : Answered
Chosen Option : 1

Q.15 A shopkeeper sells a notebook that has a marked price of ₹80 at a discount of 8% and gives a pen costing ₹8.60 free with each notebook. Even then he makes a profit of 17%. Find the cost price of each note book correct to two places of decimals.

Ans ☒ 1. ₹55.56

☐ 2. ₹49.75

☐ 3. ₹51.32

☐ 4. ₹45.35

Question Type : MCQ

Question ID : 630680615913

Option 1 ID : 6306802410325

Option 2 ID : 6306802410323

Option 3 ID : 6306802410324

Option 4 ID : 6306802410322

Status : Answered

Chosen Option : 4

Q.16 An iron ball of radius 20 cm is melted and recast into 64 spherical balls of same radius. Find the radius of each spherical ball.

Ans ☐ 1. 8 cm

☐ 2. 7 cm

☒ 3. 5 cm

☐ 4. 6 cm

Question Type : MCQ

Question ID : 630680389737

Option 1 ID : 6306801519409

Option 2 ID : 6306801519408

Option 3 ID : 6306801519406

Option 4 ID : 6306801519407

Status : Answered

Chosen Option : 3

Q.17 By selling an article for ₹19.5, a dealer makes a profit of 30%. By how much should he increase his selling price (in ₹) so as to make a profit of 50%?

Ans ☐ 1. 5

☐ 2. 4

☐ 3. 6

☒ 4. 3

Question Type : MCQ

Question ID : 630680632594

Option 1 ID : 6306802476276

Option 2 ID : 6306802476275

Option 3 ID : 6306802476277

Option 4 ID : 6306802476274

Status : Answered

Chosen Option : 2

Q.18 x,y and z are divisible by 2,3 and 4, respectively. What is the highest common factor (HCF) of $6x, 4y$ and $3z$?

- Ans ☒ 1. At least 36
☒ 2. At least 16
☒ 3. At least 12
☒ 4. At least 18

Question Type : MCQ
Question ID : 63068094941
Option 1 ID : 630680368459
Option 2 ID : 630680368462
Option 3 ID : 630680368461
Option 4 ID : 630680368460
Status : Answered
Chosen Option : 3

Q.19 Find the simple interest (in ₹) on ₹3500 as a sum borrowed at 7% per year rate of interest for 2 years.

- Ans ☒ 1. 450
☒ 2. 430
☒ 3. 490
☒ 4. 530

Question Type : MCQ
Question ID : 630680591978
Option 1 ID : 6306802316382
Option 2 ID : 6306802316381
Option 3 ID : 6306802316379
Option 4 ID : 6306802316380
Status : Answered
Chosen Option : 3

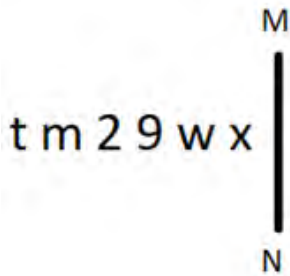
Q.20 Two bicycle riders started at a speed of 7 m/sec and 8 m/sec on a circular path in opposite directions at the same point. If the circumference of the circle is 300 m, then in what time will they first meet?

- Ans ☒ 1. 12 sec
☒ 2. 30 sec
☒ 3. 20 sec
☒ 4. 24 sec

Question Type : MCQ
Question ID : 630680195782
Option 1 ID : 630680759579
Option 2 ID : 630680759581
Option 3 ID : 630680759582
Option 4 ID : 630680759580
Status : Answered
Chosen Option : 3

Section : Reasoning Ability and Problem Solving

Q.1 Select the correct mirror image of the given figure when the mirror is placed at MN as shown below.



- Ans
- ☒ 1. x m e 2 m t
 - ☒ 2. x w 2 9 m t
 - ☒ 3. x w e s w t
 - ☒ 4. x w e s m t

Question Type : MCQ
Question ID : 630680525254
Option 1 ID : 6306802053103
Option 2 ID : 6306802053102
Option 3 ID : 6306802053100
Option 4 ID : 6306802053101
Status : Answered
Chosen Option : 4

Q.2 What will come in place of the question mark (?) in the following equation if '+' and '-' are interchanged and 'x' and '÷' are interchanged?
 $135 \times 5 - 12 \div 11 + 8 = ?$

- Ans
- ☒ 1. 169
 - ☒ 2. 136
 - ☒ 3. 121
 - ☒ 4. 151

Question Type : MCQ
Question ID : 630680378701
Option 1 ID : 6306801475853
Option 2 ID : 6306801475854
Option 3 ID : 6306801475851
Option 4 ID : 6306801475852
Status : Answered
Chosen Option : 4

Q.3 What will come in the place of '?' in the following equation, if '+' and '-' are interchanged and 'x' and '÷' are interchanged?
 $4 \div 8 \times 2 - 7 + 3 = ?$

- Ans ☒ 1. 16
☒ 2. 18
☒ 3. 20
☒ 4. 15

Question Type : MCQ
Question ID : 630680271471
Option 1 ID : 6306801054958
Option 2 ID : 6306801054959
Option 3 ID : 6306801054957
Option 4 ID : 6306801054956
Status : Answered
Chosen Option : 3

Q.4 HOJF is related to IPKG in a certain way based on the English alphabetical order. In the same way, KRMI is related to LSNJ. To which of the following is MTOK related following the same logic?

- Ans ☒ 1. NUPL
☒ 2. UNPL
☒ 3. UNLP
☒ 4. NULP

Question Type : MCQ
Question ID : 630680441609
Option 1 ID : 6306801724054
Option 2 ID : 6306801724056
Option 3 ID : 6306801724057
Option 4 ID : 6306801724055
Status : Answered
Chosen Option : 1

Q.5 Read the given statements and conclusions carefully. Assuming that the information given in the statements is true, even if it appears to be at variance with commonly known facts, decide which of the given conclusions logically follow(s) from the statements.

Statements:
No child is a man.
No man is an adult.

Conclusions:
(I) Some men are child.
(II) No child is an adult.

- Ans ☒ 1. Only conclusion I follows
☒ 2. Both conclusions I and II follow
☒ 3. Only conclusion II follows
☒ 4. Neither conclusion I nor II follow

Question Type : MCQ
Question ID : 630680815660
Option 1 ID : 6306803195941
Option 2 ID : 6306803195943
Option 3 ID : 6306803195942
Option 4 ID : 6306803195944
Status : Answered
Chosen Option : 4

Q.6 KPMI is related to LQNJ in a certain way based on the English alphabetical order. In the same way, NSPL is related to OTQM. To which of the following is RWTP related, following the same logic?

- Ans ☒ 1. SXUQ
☐ 2. XSQU
☐ 3. SXQU
☐ 4. XSUQ

Question Type : MCQ
Question ID : 630680430658
Option 1 ID : 6306801680655
Option 2 ID : 6306801680658
Option 3 ID : 6306801680656
Option 4 ID : 6306801680657
Status : Answered
Chosen Option : 1

Q.7 In a certain code language, 'SAND' is coded as '2468' and 'WEST' is coded as '3574'. What is the code for 'S' in the given code language?

- Ans ☐ 1. 2
☐ 2. 8
☒ 3. 4
☐ 4. 7

Question Type : MCQ
Question ID : 630680815673
Option 1 ID : 6306803195994
Option 2 ID : 6306803195996
Option 3 ID : 6306803195993
Option 4 ID : 6306803195995
Status : Answered
Chosen Option : 3

Q.8 In a certain code language, 'does she hear' is written as 'mt sp dt' and 'hear the music' is written as 'rb mt ch'. What is the code for 'hear' in that language?

- Ans ☐ 1. sp
☒ 2. mt
☐ 3. ch
☐ 4. rb

Question Type : MCQ
Question ID : 630680379157
Option 1 ID : 6306801477675
Option 2 ID : 6306801477678
Option 3 ID : 6306801477677
Option 4 ID : 6306801477676
Status : Answered
Chosen Option : 2

Q.9 What should come in place of the question mark (?) in the given series based on the English alphabetical order?

DXZ, HTV ,LPR ,PLN, ?

- Ans ☒ 1. THJ
☐ 2. THK
☐ 3. SHK
☐ 4. SHJ

Question Type : MCQ
Question ID : 630680459272
Option 1 ID : 6306801793941
Option 2 ID : 6306801793942
Option 3 ID : 6306801793944
Option 4 ID : 6306801793943
Status : Answered
Chosen Option : 1

Q.10 Select the set in which the numbers are related in the same way as are the numbers of the following sets.

(NOTE: Operations should be performed on the whole numbers, without breaking down the numbers into their constituent digits. E.g. 13 – Operations on 13 such as adding/subtracting/multiplying etc. to 13, can be performed. Breaking down 13 into 1 and 3 and then performing mathematical operations on 1 and 3 is not allowed.)
(8, 38, 11)
(3, 20, 7)

- Ans ☐ 1. (3, 20, 5)
☐ 2. (4, 14, 2)
☐ 3. (2, 52, 32)
☒ 4. (1, 26, 12)

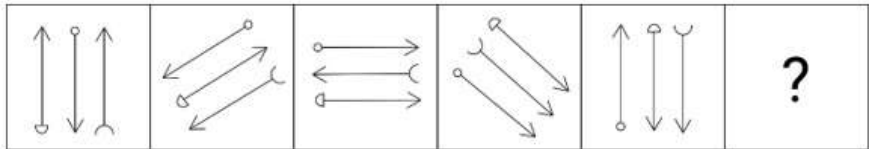
Question Type : MCQ
Question ID : 630680404554
Option 1 ID : 6306801577716
Option 2 ID : 6306801590926
Option 3 ID : 6306801577718
Option 4 ID : 6306801577717
Status : Answered
Chosen Option : 4

Q.11 In a certain code language, 'BOAT' is coded as '5197' and 'AIRS' is coded as '2418'. What is the code for 'A' in the given code language?

- Ans ☒ 1. 1
☐ 2. 4
☐ 3. 2
☐ 4. 9

Question Type : MCQ
Question ID : 630680435786
Option 1 ID : 6306801701057
Option 2 ID : 6306801701059
Option 3 ID : 6306801701058
Option 4 ID : 6306801701060
Status : Answered
Chosen Option : 1

Q.12 Select the figure from among the given options that can replace the question mark (?) in the following series.



Ans

- ☒ 1.
- ☒ 2.
- ☒ 3.
- ☒ 4.

Question Type : MCQ
Question ID : 630680525750
Option 1 ID : 6306802055087
Option 2 ID : 6306802055086
Option 3 ID : 6306802055084
Option 4 ID : 6306802055085
Status : Answered
Chosen Option : 4

Q.13 Six boys A, B, C, D, E and F sit around a circular table facing towards the centre (not necessarily in the same order). Two boys sit between B and F when counted either from the right or left of B. One boy sits between A and B when counted from the right of A. E sits second to the left of A. D sits second to the left of C. Which of the following statement(s) is/are not correct?
I. A is an immediate neighbour of D.
II. C is an immediate neighbour of F.

- Ans ☒ 1. Only I
- ☒ 2. Neither I nor II
- ☒ 3. Both I and II
- ☒ 4. Only II

Question Type : MCQ
Question ID : 630680387798
Option 1 ID : 6306801511826
Option 2 ID : 6306801511829
Option 3 ID : 6306801511828
Option 4 ID : 6306801511827
Status : Answered
Chosen Option : 4

Q.14 15 is related to 92 following a certain logic. Following the same logic, 18 is related to 110. To which of the following is 7 related, following the same logic?
(NOTE: Operations should be performed on the whole numbers, without breaking down the numbers into its constituent digits. E.g. 13 – Operations on 13 such as adding/subtracting/multiplying etc. to 13 can be performed. Breaking down 13 into 1 and 3 and then performing mathematical operations on 1 and 3 is not allowed.)

- Ans ☐ 1. 67
☐ 2. 56
☒ 3. 44
☐ 4. 76

Question Type : MCQ
Question ID : 630680450177
Option 1 ID : 6306801757855
Option 2 ID : 6306801757856
Option 3 ID : 6306801757858
Option 4 ID : 6306801757857
Status : Answered
Chosen Option : 3

Q.15 U, V, W, X, Y, Z and A are sitting around a circular table facing the centre (but not necessarily in the same order).
Only three people sit between X and Y when counted from the left of X. Only three people sit between Z and U when counted from the right of U. V sits to the immediate right of Z. W is an immediate neighbour of U as well as Y.
Who sits to the second to the left of A?

- Ans ☐ 1. Y
☐ 2. Z
☐ 3. U
☒ 4. W

Question Type : MCQ
Question ID : 630680404834
Option 1 ID : 6306801578828
Option 2 ID : 6306801578827
Option 3 ID : 6306801578830
Option 4 ID : 6306801578829
Status : Answered
Chosen Option : 2

SSC MTS (Non Technical) EXAM STUDY KIT



FREE
SHIPPING 

- ▶ 100% SSC MTS Exam Syllabus Covered
- ▶ PRINTED Notes
- ▶ 8 Books, 700+ Pages
- ▶ 2500+ MCQs
- ▶ Practice Papers
- ▶ 1 Year Current Affairs

50%
OFF

 **SSCPORTAL.IN**

SSC MTS PDF NOTES

100% Syllabus Covered



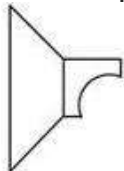
CLICK HERE

CLICK BELOW LINK TO DOWNLOAD PDF NOTES

<https://sscpportal.in/study-kit/mts>

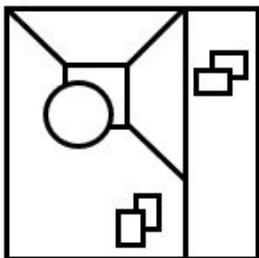
<https://sscpportal.in/study-kit>

Q.16 Select the option in which the given figure is embedded (rotation is NOT allowed).

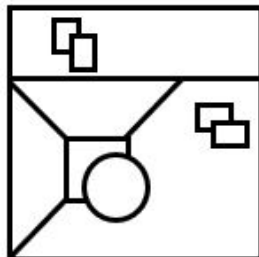


Ans

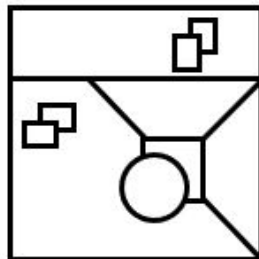
✗ 1.



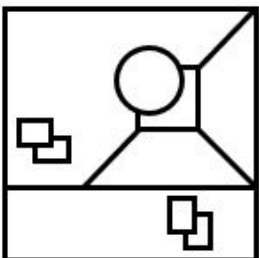
✓ 2.



✗ 3.



✗ 4.



Question Type : MCQ
Question ID : 630680524447
Option 1 ID : 6306802049887
Option 2 ID : 6306802049889
Option 3 ID : 6306802049890
Option 4 ID : 6306802049888
Status : Answered
Chosen Option : 2

Q.17 Read the given statements and conclusions carefully. Assuming that the information given in the statements is true, even if it appears to be at variance with commonly known facts, decide which of the given conclusions logically follow(s) from the statements.

Statements:

All bowling are billiards.

Some billiards are not chess.

Conclusions:

[1] All chess are bowling.

[2] All billiards are chess.

Ans ☒ 1. Neither conclusion [1] nor [2] follows

☐ 2. Only conclusion [2] follows

☐ 3. Both conclusions [1] and [2] follow

☐ 4. Only conclusion [1] follows

Question Type : MCQ

Question ID : 630680398020

Option 1 ID : 6306801552096

Option 2 ID : 6306801552095

Option 3 ID : 6306801552097

Option 4 ID : 6306801552094

Status : Answered

Chosen Option : 1

Q.18 What should come in place of the question mark (?) in the following series?

4, 10 ,28, 82, 244, ?

Ans ☐ 1. 732

☐ 2. 731

☐ 3. 734

☒ 4. 730

Question Type : MCQ

Question ID : 630680396937

Option 1 ID : 6306801547814

Option 2 ID : 6306801547813

Option 3 ID : 6306801547815

Option 4 ID : 6306801547812


Status : Answered

Chosen Option : 4


Q.19 Select the figure from among the given options that can replace the question mark (?) in the following series and complete the pattern.

| | | | | | | | | | | | | |
|---|---|---|---|---|---|---|---|---|---|---|---|---|
| K | = | 5 | 9 | □ | K | = | L | □ | K | 5 | = | |
| | | L | | = | | | 9 | | | L | | ? |
| □ | 9 | | L | 5 | 5 | K | 9 | □ | | | | |


Ans

 1.


| | | |
|---|---|---|
| L | = | □ |
| | | K |
| 5 | | 9 |

 2.

| | | |
|---|---|---|
| L | 9 | 5 |
| | | K |
| □ | | = |

 3.

| | | | |
|---|---|---|---|
| 5 | = | K | |
| | | □ | |
| | | L | 9 |

 4.

| | | |
|---|---|---|
| = | K | 5 |
| | | □ |
| | L | 9 |

Question Type : MCQ
Question ID : 630680441092
Option 1 ID : 6306801722022
Option 2 ID : 6306801722024
Option 3 ID : 6306801722025
Option 4 ID : 6306801722023
Status : Answered
Chosen Option : 3

Q.20 In a certain code language, 'will you go' is written as 'ht dt gt' and 'you can go' is written as 'gt st dt'. How will 'can' be written in the given code language?

- Ans
-  1. ht
 -  2. dt
 -  3. gt
 -  4. st

Question Type : MCQ
Question ID : 630680465152
Option 1 ID : 6306801816645
Option 2 ID : 6306801816644
Option 3 ID : 6306801816646
Option 4 ID : 6306801816643
Status : Answered
Chosen Option : 4

Section : General Awareness

Q.1 In May 2023, the Union Housing and Urban Affairs Ministry has extended the deadline of its Smart Cities Mission to _____.

Ans ☒ 1. June 2025

☒ 2. June 2026

☒ 3. June 2027

☒ 4. June 2024

Question Type : MCQ

Question ID : 630680465533

Option 1 ID : 6306801818170

Option 2 ID : 6306801818167

Option 3 ID : 6306801818168

Option 4 ID : 6306801818169

Status : Answered

Chosen Option : 2

Q.2 Which of the following cultural festivals of Himachal Pradesh is organised on the auspicious occasion of Basant Panchami at Hadimba Temple?

Ans ☒ 1. Bisua

☒ 2. Mopin

☒ 3. Ziro

☒ 4. Doongri

Question Type : MCQ

Question ID : 630680546736

Option 1 ID : 6306802137514

Option 2 ID : 6306802137517

Option 3 ID : 6306802137515

Option 4 ID : 6306802137516

Status : Answered

Chosen Option : 1

Q.3 At which of the following places was the Indian Civil Service Examination held for the first time in India?

Ans ☒ 1. Allahabad

☒ 2. Surat

☒ 3. Delhi

☒ 4. Calcutta

Question Type : MCQ

Question ID : 630680275263

Option 1 ID : 6306801069563

Option 2 ID : 6306801069565

Option 3 ID : 6306801069564

Option 4 ID : 6306801069566

Status : Answered

Chosen Option : 4

Q.4 'Ace Against Odds' is the autobiography of a sports personality playing the game of

- Ans ☒ 1. Tennis
- ☐ 2. Badminton
- ☐ 3. Cricket
- ☐ 4. Shooting

Question Type : MCQ
Question ID : 630680474194
Option 1 ID : 6306801852471
Option 2 ID : 6306801852472
Option 3 ID : 6306801852473
Option 4 ID : 6306801852470
Status : Answered
Chosen Option : 1

Q.5 Which inorganic compound is known to undergo solid state reaction to form urea?

- Ans ☐ 1. Ammonium acetate
- ☐ 2. Ammonium phosphate
- ☐ 3. Ammonium nitrate
- ☒ 4. Ammonium cyanate

Question Type : MCQ
Question ID : 630680403013
Option 1 ID : 6306801571624
Option 2 ID : 6306801571625
Option 3 ID : 6306801571626
Option 4 ID : 6306801571623
Status : Not Answered
Chosen Option : --

Q.6 The Pitti Bird Sanctuary is located in which Union Territory/State of India?

- Ans ☐ 1. Manipur
- ☒ 2. Lakshadweep
- ☐ 3. Andaman and Nicobar Islands
- ☐ 4. Tamil Nadu

Question Type : MCQ
Question ID : 630680510956
Option 1 ID : 6306801996956
Option 2 ID : 6306801996954
Option 3 ID : 6306801996957
Option 4 ID : 6306801996955
Status : Answered
Chosen Option : 3

Q.7 Sunil Chhetri made history by becoming the first Indian to score a hat-trick in the Hero ISL, which came in the _____ edition.

- Ans ☒ 1. 2016
☒ 2. 2013
☒ 3. 2014
☒ 4. 2015

Question Type : MCQ
Question ID : 630680551476
Option 1 ID : 6306802156132
Option 2 ID : 6306802156129
Option 3 ID : 6306802156130
Option 4 ID : 6306802156131
Status : Answered
Chosen Option : 1

Q.8 In which of the following years was the Child Marriage Restraint Act passed?

- Ans ☒ 1. 1929
☒ 2. 1872
☒ 3. 1856
☒ 4. 1902

Question Type : MCQ
Question ID : 630680652715
Option 1 ID : 6306802555333
Option 2 ID : 6306802555331
Option 3 ID : 6306802555330
Option 4 ID : 6306802555332
Status : Answered
Chosen Option : 2

Q.9 The classical dance form 'Kathakali' traces its origin to which of the following states of India?

- Ans ☒ 1. Odisha
☒ 2. Kerala
☒ 3. Tamil Nadu
☒ 4. Andhra Pradesh

Question Type : MCQ
Question ID : 630680309141
Option 1 ID : 6306801202741
Option 2 ID : 6306801202743
Option 3 ID : 6306801202742
Option 4 ID : 6306801202744
Status : Answered
Chosen Option : 2

Q.10 Which of the following is the first event in a triathlon?

- Ans ☒ 1. Putting the shot
☒ 2. Running
☒ 3. Swimming
☒ 4. Cycling

Question Type : MCQ
Question ID : 63068061633
Option 1 ID : 630680237853
Option 2 ID : 630680237851
Option 3 ID : 630680237852
Option 4 ID : 630680237850
Status : Answered
Chosen Option : 3

Q.11 Article 157 of the Constitution of India mentions the qualifications required for appointment of the _____ of a State.

- Ans ☒ 1. Election Commissioner
☒ 2. Governor
☒ 3. Chief Minister
☒ 4. Chief Justice of High Court

Question Type : MCQ
Question ID : 630680408944
Option 1 ID : 6306801594702
Option 2 ID : 6306801594700
Option 3 ID : 6306801594699
Option 4 ID : 6306801594701
Status : Answered
Chosen Option : 2

Q.12 The excavated ruins of the Nalanda University indicate that bright red _____ was/were used in its construction.

- Ans ☒ 1. bricks
☒ 2. stone
☒ 3. marble
☒ 4. granite

Question Type : MCQ
Question ID : 630680618468
Option 1 ID : 6306802420201
Option 2 ID : 6306802420202
Option 3 ID : 6306802420203
Option 4 ID : 6306802420204
Status : Answered
Chosen Option : 2

Q.13 Where was the Hindustani classical singer Kumar Gandharva born?

- Ans ☒ 1. Tamil Nadu
☒ 2. Tripura
☒ 3. Odisha
☒ 4. Karnataka

Question Type : MCQ
Question ID : 630680482471
Option 1 ID : 6306801884359
Option 2 ID : 6306801884360
Option 3 ID : 6306801884361
Option 4 ID : 6306801884358
Status : Not Answered
Chosen Option : --

Q.14 What is the primary function of the excretory system in animals?

- Ans ☒ 1. Removal of waste products
☒ 2. Digestion
☒ 3. Reproduction
☒ 4. Respiration

Question Type : MCQ
Question ID : 630680540426
Option 1 ID : 6306802112793
Option 2 ID : 6306802112794
Option 3 ID : 6306802112792
Option 4 ID : 6306802112791
Status : Not Answered
Chosen Option : --

Q.15 Which of the following is NOT an example of public goods?

- Ans ☒ 1. Driveway at our home
☒ 2. Access to clean air
☒ 3. Law enforcement
☒ 4. National defence

Question Type : MCQ
Question ID : 630680512425
Option 1 ID : 6306802002670
Option 2 ID : 6306802002673
Option 3 ID : 6306802002672
Option 4 ID : 6306802002671
Status : Answered
Chosen Option : 2

Q.16 With reference to agriculture in India, the term 'penda' is the name given to

- Ans ☒ 1. slash and burn agriculture
☐ 2. plantation agriculture
☐ 3. tea farming
☐ 4. agricultural season

Question Type : MCQ
Question ID : 630680473944
Option 1 ID : 6306801851467
Option 2 ID : 6306801851468
Option 3 ID : 6306801851470
Option 4 ID : 6306801851469
Status : Answered
Chosen Option : 2

Q.17 Who among the following scholars gave reference to the history of Kashmir?

- Ans ☐ 1. Harsha
☐ 2. Kalidas
☐ 3. Banbhatta
☒ 4. Kalhana

Question Type : MCQ
Question ID : 630680306409
Option 1 ID : 6306801191976
Option 2 ID : 6306801191975
Option 3 ID : 6306801191973
Option 4 ID : 6306801191974
Status : Answered
Chosen Option : 4

Q.18 The author of 'Arthashastra' was a contemporary of which of the following rulers?

- Ans ☐ 1. Ashoka
☐ 2. Samudragupta
☐ 3. Chandragupta Vikramaditya
☒ 4. Chandragupta Maurya

Question Type : MCQ
Question ID : 630680322639
Option 1 ID : 6306801255197
Option 2 ID : 6306801255199
Option 3 ID : 6306801255200
Option 4 ID : 6306801255198
Status : Answered
Chosen Option : 4

Q.19 Despite being eligible for the job of a Legal Officer, Mr. X was not called for an interview for the aforementioned post. Which of his rights was Mr. X unable to exercise?

- Ans ☒ 1. Protection against arrest
☒ 2. Equality before law
☒ 3. Right to education
☒ 4. Equality of opportunity

Question Type : MCQ
Question ID : 630680587172
Option 1 ID : 6306802297223
Option 2 ID : 6306802297220
Option 3 ID : 6306802297222
Option 4 ID : 6306802297221
Status : Answered
Chosen Option : 4

Q.20 Which of the following factors is primarily responsible for soil formation?

- Ans ☒ 1. Mining
☒ 2. Irrigation
☒ 3. Weathering
☒ 4. Degradation

Question Type : MCQ
Question ID : 630680403361
Option 1 ID : 6306801572955
Option 2 ID : 6306801572956
Option 3 ID : 6306801572954
Option 4 ID : 6306801572957
Status : Answered
Chosen Option : 2

Q.21 Shovana Narayan, a Padma Shri recipient, is an exponent of _____.

- Ans ☒ 1. Kuchipudi
☒ 2. Kathak
☒ 3. Bharatanatyam
☒ 4. Sattriya

Question Type : MCQ
Question ID : 630680323356
Option 1 ID : 6306801257935
Option 2 ID : 6306801257934
Option 3 ID : 6306801257933
Option 4 ID : 6306801257936
Status : Answered
Chosen Option : 3

Q.22 According to sympatric speciation, the rising of a new species occurs when:

- Ans ☒ 1. organisms from the same species start to show different behavioural characteristics
- ☒ 2. one species is separated into different groups due to geologic events like mountain formation
- ☒ 3. the two groups of organisms from the same species would phenotypically look different
- ☒ 4. two groups of the same species cannot interbreed among themselves despite living in the same geographic location

Question Type : MCQ
Question ID : 630680452375
Option 1 ID : 6306801766578
Option 2 ID : 6306801766576
Option 3 ID : 6306801766577
Option 4 ID : 6306801766575
Status : Not Answered
Chosen Option : --

Q.23 Which of the following states has the lowest child sex ratio according to Census of India, 2001?

- Ans ☒ 1. Uttarakhand
- ☒ 2. Haryana
- ☒ 3. Himachal Pradesh
- ☒ 4. Kerala

Question Type : MCQ
Question ID : 63068080408
Option 1 ID : 630680311660
Option 2 ID : 630680311657
Option 3 ID : 630680311659
Option 4 ID : 630680311658
Status : Answered
Chosen Option : 4

Q.24 In January 2023, three Indian-origin researchers were among nine scientists named recipients of the Blavatnik Awards for Young Scientists in the UK. Which of the following is NOT one of these three scientists?

- Ans ☒ 1. Mehul Malik
- ☒ 2. Gagandeep Kang
- ☒ 3. Tanmay Bharat
- ☒ 4. Rahul R Nair

Question Type : MCQ
Question ID : 630680595835
Option 1 ID : 6306802331529
Option 2 ID : 6306802331531
Option 3 ID : 6306802331530
Option 4 ID : 6306802331528
Status : Not Answered
Chosen Option : --

Q.25 As per Census 2011, which of the following states recorded negative growth in child sex ratio?

- Ans ☒ 1. Punjab
☒ 2. Maharashtra
☒ 3. Himachal Pradesh
☒ 4. Haryana

Question Type : MCQ
Question ID : 630680510918
Option 1 ID : 6306801996802
Option 2 ID : 6306801996805
Option 3 ID : 6306801996804
Option 4 ID : 6306801996803
Status : Answered
Chosen Option : 3

Section : English Language and Comprehension

Q.1 Which of the following sentences contains an adverbial error?

- Ans ☒ 1. She writes slowly and steadily.
☒ 2. The teacher spoke clear and concise.
☒ 3. They danced gracefully across the stage.
☒ 4. He sang beautifully at the talent show.

Question Type : MCQ
Question ID : 630680733520
Option 1 ID : 6306802874928
Option 2 ID : 6306802874930
Option 3 ID : 6306802874929
Option 4 ID : 6306802874927
Status : Answered
Chosen Option : 1

Q.2 Read the following sentence and select its future tense form from the options given below:

Ramya finished her dissertation early.

- Ans ☒ 1. Ramya is finishing her dissertation early.
☒ 2. Ramya had finished her dissertation early.
☒ 3. Ramya has finished her dissertation early.
☒ 4. Ramya will finish her dissertation early.

Question Type : MCQ
Question ID : 630680726463
Option 1 ID : 6306802846861
Option 2 ID : 6306802846858
Option 3 ID : 6306802846859
Option 4 ID : 6306802846860
Status : Answered
Chosen Option : 4

Q.3 Select the most appropriate option to fill in the blank.
David decided to _____ his old boat to get a new one.

- Ans ☒ 1. cell
☒ 2. sale
☒ 3. sell
☒ 4. ceil

Question Type : MCQ
Question ID : 630680459190
Option 1 ID : 6306801793613
Option 2 ID : 6306801793614
Option 3 ID : 6306801793616
Option 4 ID : 6306801793615
Status : Answered
Chosen Option : 3

Q.4 Select the most appropriate synonym of the word in bold in the given sentence.
It is universally acknowledged that trees are indispensable to us.

- Ans ☒ 1. Unusual
☒ 2. Essential
☒ 3. Rational
☒ 4. Fierce

Question Type : MCQ
Question ID : 630680397589
Option 1 ID : 6306801550278
Option 2 ID : 6306801550279
Option 3 ID : 6306801550280
Option 4 ID : 6306801550277
Status : Answered
Chosen Option : 2

Q.5 In the following sentence the underlined part contains an error. Alternatives to the underlined part are given as options.
Select the correct alternative.
Yesterday was the worse day of my life.

- Ans ☒ 1. bad
☒ 2. worst
☒ 3. most bad
☒ 4. ill

Question Type : MCQ
Question ID : 630680514705
Option 1 ID : 6306802011445
Option 2 ID : 6306802011447
Option 3 ID : 6306802011448
Option 4 ID : 6306802011446
Status : Answered
Chosen Option : 2

Q.6 Select the INCORRECTLY spelt word.

- Ans ☒ 1. Abandoned
☒ 2. Dangerous
☒ 3. Celibrate
☒ 4. Excellent

Question Type : MCQ
Question ID : 630680550036
Option 1 ID : 6306802150405
Option 2 ID : 6306802150408
Option 3 ID : 6306802150406
Option 4 ID : 6306802150407
Status : Answered
Chosen Option : 3

Q.7 Select the most appropriate option to substitute the underlined segment in the given sentence.

The branches of the tree is very long.

- Ans ☒ 1. had
☒ 2. was
☒ 3. are
☒ 4. has

Question Type : MCQ
Question ID : 630680552173
Option 1 ID : 6306802158880
Option 2 ID : 6306802158878
Option 3 ID : 6306802158877
Option 4 ID : 6306802158879
Status : Answered
Chosen Option : 3

Q.8 Select the option that will improve the underlined part of the given sentence. In case no improvement is needed, select 'No improvement required'.

He received the best employee award because he was the more hardworking.

- Ans ☒ 1. hardworking
☒ 2. No improvement required
☒ 3. the hardworking
☒ 4. most hardworking

Question Type : MCQ
Question ID : 6306801046640
Option 1 ID : 6306804108686
Option 2 ID : 6306804108688
Option 3 ID : 6306804108687
Option 4 ID : 6306804108685
Status : Answered
Chosen Option : 4

Q.9 Select the most appropriate option to fill in the blank.

The Chinese government has accepted slower economic development as the 'new normal', recognising the need for China to adopt a new growth model that depends less on fixed investment and exports and more on private consumption, services, and innovation to _____ economic growth.

Ans ☒ 1. drive

☐ 2. bridle

☐ 3. exhale

☐ 4. success

Question Type : MCQ

Question ID : 630680515262

Option 1 ID : 6306802013514

Option 2 ID : 6306802013513

Option 3 ID : 6306802013515

Option 4 ID : 6306802013516

Status : Answered

Chosen Option : 3

Q.10 Select the correct option of the given sentence.

Smt. Savithri is wisest than all others in the group.

Ans ☐ 1. Smt. Savithri is wise than all others in the group.

☐ 2. Smt. Savithri is the wise than all others in the group.

☒ 3. Smt. Savithri is wiser than all others in the group.

☐ 4. Smt. Savithri is the wiser than all others in the group.

Question Type : MCQ

Question ID : 630680514568

Option 1 ID : 6306802010899

Option 2 ID : 6306802010900

Option 3 ID : 6306802010898

Option 4 ID : 6306802010897

Status : Answered

Chosen Option : 3

Q.11 Select the most appropriate option that can substitute the underlined segment in the given sentence.

He possesses one of the slimmer handsets in the world.

Ans ☐ 1. most slim

☐ 2. slim

☒ 3. slimmest

☐ 4. most slimmest

Question Type : MCQ

Question ID : 630680514592

Option 1 ID : 6306802010994

Option 2 ID : 6306802010993

Option 3 ID : 6306802010995

Option 4 ID : 6306802010996

Status : Answered

Chosen Option : 3

Q.12 Select the word that has the same meaning (SYNONYM) as the underlined word in the given sentence.

The teacher made judicious use of technology to explain a sensitive topic.

- Ans ☒ 1. judgmental
☒ 2. difficult
☒ 3. prudent
☒ 4. prominent

Question Type : MCQ
Question ID : 630680446661
Option 1 ID : 6306801743946
Option 2 ID : 6306801743947
Option 3 ID : 6306801743949
Option 4 ID : 6306801743948
Status : Answered
Chosen Option : 1

Q.13 Select the most appropriate ANTONYM of the word provided in the brackets to fill in the blank.

The painting exhibited a _____ blend of colours. (harmonious)

- Ans ☒ 1. polyphonic
☒ 2. discordant
☒ 3. quavering
☒ 4. thrilling

Question Type : MCQ
Question ID : 630680517535
Option 1 ID : 6306802022537
Option 2 ID : 6306802022536
Option 3 ID : 6306802022539
Option 4 ID : 6306802022538
Status : Answered
Chosen Option : 2

Q.14 Select the INCORRECTLY spelt word.

- Ans ☒ 1. Amendment
☒ 2. Exhilerate
☒ 3. Mischievous
☒ 4. Incorrigible

Question Type : MCQ
Question ID : 630680547202
Option 1 ID : 6306802139372
Option 2 ID : 6306802139371
Option 3 ID : 6306802139374
Option 4 ID : 6306802139373
Status : Answered
Chosen Option : 2

Q.15 Select the appropriate meaning of the given idiom.
At the drop of a hat

- Ans ☒ 1. Crying without any reason
☒ 2. Willingness to do something instantly
☒ 3. Reveal a secret carelessly
☒ 4. Become easily frightened

Question Type : **MCQ**
Question ID : **630680411087**
Option 1 ID : **6306801603103**
Option 2 ID : **6306801603100**
Option 3 ID : **6306801603101**
Option 4 ID : **6306801603102**
Status : **Answered**
Chosen Option : **2**

Q.16 Select the most appropriate option to fill in the blank.
The teacher asked the students to stay _____ during the exam.

- Ans ☒ 1. quit
☒ 2. quote
☒ 3. quiet
☒ 4. quite

Question Type : **MCQ**
Question ID : **630680435721**
Option 1 ID : **6306801700807**
Option 2 ID : **6306801700808**
Option 3 ID : **6306801700806**
Option 4 ID : **6306801700805**
Status : **Answered**
Chosen Option : **4**

Q.17 Select the most appropriate option to fill in the blank.
Due to _____ 'eve teasing', parents conclude that it is not worth the danger of sending their daughters to school.

- Ans ☒ 1. narrow
☒ 2. localised
☒ 3. widespread
☒ 4. rectified

Question Type : **MCQ**
Question ID : **630680515257**
Option 1 ID : **6306802013493**
Option 2 ID : **6306802013495**
Option 3 ID : **6306802013496**
Option 4 ID : **6306802013494**
Status : **Answered**
Chosen Option : **1**

Q.18 Select the INCORRECTLY spelt word..

- Ans ☒ 1. separate
☒ 2. resistance
☒ 3. weather
☒ 4. tendancy

Question Type : MCQ
Question ID : 6306801106827
Option 1 ID : 6306804347773
Option 2 ID : 6306804347772
Option 3 ID : 6306804347775
Option 4 ID : 6306804347774
Status : Answered
Chosen Option : 1

Q.19 select the most appropriate option to fill in the blank to complete the idiom and make the sentence meaningful.
During the interview, the candidate was challenged to provide chapter and _____ on his proposed plan.

- Ans ☒ 1. cover
☒ 2. verse
☒ 3. lines
☒ 4. page

Question Type : MCQ
Question ID : 6306801106848
Option 1 ID : 6306804347856
Option 2 ID : 6306804347857
Option 3 ID : 6306804347859
Option 4 ID : 6306804347858
Status : Answered
Chosen Option : 2

Q.20 Select the option that can be used as a one-word substitute for the given group of words.
The place where soldiers live

- Ans ☒ 1. Unit
☒ 2. Barracks
☒ 3. Regiment
☒ 4. Brigade

Question Type : MCQ
Question ID : 630680435206
Option 1 ID : 6306801698748
Option 2 ID : 6306801698746
Option 3 ID : 6306801698747
Option 4 ID : 6306801698749
Status : Answered
Chosen Option : 2

Comprehension:

In the following passage, some words have been deleted. Read the passage carefully and select the most appropriate option to fill in each blank.
It is the mad (1)_____ for speed that is responsible for many motor accidents. Only last year, I (2)_____ what might have been a (3)_____ accident on Kashmir Road. I was motoring down (4)_____ Srinagar; and as I was nearing Kohala, I came upon the (5)_____ of two cars on the road.

SubQuestion No : 21

Q.21 Select the most appropriate option to fill in blank number 1.

- Ans ☒ 1. boredom
☒ 2. block
☒ 3. luck
☒ 4. craze

Question Type : MCQ
Question ID : 630680192312
Option 1 ID : 630680745846
Option 2 ID : 630680745848
Option 3 ID : 630680745847
Option 4 ID : 630680745845
Status : Answered
Chosen Option : 4

Comprehension:

In the following passage, some words have been deleted. Read the passage carefully and select the most appropriate option to fill in each blank.
It is the mad (1)_____ for speed that is responsible for many motor accidents. Only last year, I (2)_____ what might have been a (3)_____ accident on Kashmir Road. I was motoring down (4)_____ Srinagar; and as I was nearing Kohala, I came upon the (5)_____ of two cars on the road.

SubQuestion No : 22

Q.22 Select the most appropriate option to fill in blank number 2.

- Ans ☒ 1. checked
☒ 2. witnessed
☒ 3. argued
☒ 4. anticipated

Question Type : MCQ
Question ID : 630680192313
Option 1 ID : 630680745851
Option 2 ID : 630680745850
Option 3 ID : 630680745852
Option 4 ID : 630680745849
Status : Answered
Chosen Option : 2

Comprehension:

In the following passage, some words have been deleted. Read the passage carefully and select the most appropriate option to fill in each blank.

It is the mad (1)_____ for speed that is responsible for many motor accidents. Only last year, I (2)_____ what might have been a (3)_____ accident on Kashmir Road. I was motoring down (4)_____ Srinagar; and as I was nearing Kohala, I came upon the (5)_____ of two cars on the road.

SubQuestion No : 23

Q.23 Select the most appropriate option to fill in blank number 3.

- Ans ☒ 1. happening
☒ 2. harmless
☒ 3. wonderful
☒ 4. fatal

Question Type : **MCQ**

Question ID : **630680192314**

Option 1 ID : **630680745853**

Option 2 ID : **630680745854**

Option 3 ID : **630680745856**

Option 4 ID : **630680745855**

Status : **Answered**

Chosen Option : **4**

Comprehension:

In the following passage, some words have been deleted. Read the passage carefully and select the most appropriate option to fill in each blank.

It is the mad (1)_____ for speed that is responsible for many motor accidents. Only last year, I (2)_____ what might have been a (3)_____ accident on Kashmir Road. I was motoring down (4)_____ Srinagar; and as I was nearing Kohala, I came upon the (5)_____ of two cars on the road.

SubQuestion No : 24

Q.24 Select the most appropriate option to fill in blank number 4.

- Ans ☒ 1. on
☒ 2. from
☒ 3. since
☒ 4. besides

Question Type : **MCQ**

Question ID : **630680192315**

Option 1 ID : **630680745858**

Option 2 ID : **630680745860**

Option 3 ID : **630680745859**

Option 4 ID : **630680745857**

Status : **Answered**

Chosen Option : **2**

SSC MTS (Non Technical) EXAM STUDY KIT



FREE
SHIPPING 

- ▶ 100% SSC MTS Exam Syllabus Covered
- ▶ PRINTED Notes
- ▶ 8 Books, 700+ Pages
- ▶ 2500+ MCQs
- ▶ Practice Papers
- ▶ 1 Year Current Affairs

50%
OFF

 SSCPOTAL.IN

SSC MTS PDF NOTES

100% Syllabus Covered



CLICK HERE

CLICK BELOW LINK TO DOWNLOAD PDF NOTES

<https://sscpportal.in/study-kit/mts>

<https://sscpportal.in/study-kit>

Comprehension:

In the following passage, some words have been deleted. Read the passage carefully and select the most appropriate option to fill in each blank.

It is the mad (1)_____ for speed that is responsible for many motor accidents. Only last year, I (2)_____ what might have been a (3)_____ accident on Kashmir Road. I was motoring down (4)_____ Srinagar; and as I was nearing Kohala, I came upon the (5)_____ of two cars on the road.

SubQuestion No : 25

Q.25 Select the most appropriate option to fill in blank number 5.

- Ans ☒ 1. cluster
☒ 2. pile
☒ 3. collision
☒ 4. clatter

Question Type : **MCQ**

Question ID : **630680192316**

Option 1 ID : **630680745864**

Option 2 ID : **630680745861**

Option 3 ID : **630680745863**

Option 4 ID : **630680745862**

Status : **Answered**

Chosen Option : **3**