

Multi Tasking Non Technical Staff and Havaladar CBIC and CBN Examination 2024

Roll Number	
Candidate Name	
Venue Name	DD College
Exam Date	17/10/2024
Exam Time	4:00 PM - 5:30 PM
Subject	MTS Non Tech Havaladar CBIC and CBN Examination 2024

Section : Numerical and Mathematical Ability

Q.1 Amithab has scored an average of 72 runs in his six interschool matches. In the next match, he scored 96 runs. What is his revised average score?

Ans ☒ 1. 75.428

☐ 2. 74

☐ 3. 75

☐ 4. 75.3

Question Type : MCQ

Question ID : 630680108953

Option 1 ID : 630680422706

Option 2 ID : 630680422705

Option 3 ID : 630680422704

Option 4 ID : 630680422707

Status : Answered

Chosen Option : 1

Q.2 Find the simple interest (in ₹) on ₹3000 as a sum borrowed at 7% per year rate of interest for 3 years.

Ans ☐ 1. 570

☐ 2. 590

☒ 3. 630

☐ 4. 670

Question Type : MCQ

Question ID : 630680591944

Option 1 ID : 6306802316245

Option 2 ID : 6306802316246

Option 3 ID : 6306802316243

Option 4 ID : 6306802316244

Status : Answered

Chosen Option : 3

SSC MTS (Non Technical) EXAM STUDY KIT



FREE
SHIPPING 

- ▶ 100% SSC MTS Exam Syllabus Covered
- ▶ PRINTED Notes
- ▶ 8 Books, 700+ Pages
- ▶ 2500+ MCQs
- ▶ Practice Papers
- ▶ 1 Year Current Affairs

50%
OFF

 SSCPOTAL.IN

SSC MTS PDF NOTES

100% Syllabus Covered



CLICK HERE

CLICK BELOW LINK TO DOWNLOAD PDF NOTES

<https://sscpportal.in/study-kit/mts>

<https://sscpportal.in/study-kit>

Q.3 The average weight of a group of 8 people is 70 kg. After a new person joins the group, the average weight becomes 72 kg. What is the weight (in kg) of the new person?

- Ans ☒ 1. 86
☒ 2. 87
☒ 3. 89
☒ 4. 88

Question Type : MCQ
Question ID : 630680481444
Option 1 ID : 6306801880268
Option 2 ID : 6306801880269
Option 3 ID : 6306801880271
Option 4 ID : 6306801880270
Status : Answered
Chosen Option : 4

Q.4 A person invested a certain sum of money at 6% per annum simple interest and another sum at 8% per annum simple interest at the same time. After 4 years, he received interest ₹1,560 from both sums. One-fifth of the first sum is equal to one-sixth of the second sum. Find the total sum invested.

- Ans ☒ 1. ₹6,000
☒ 2. ₹5,000
☒ 3. ₹5,500
☒ 4. ₹4,500

Question Type : MCQ
Question ID : 630680413350
Option 1 ID : 6306801612242
Option 2 ID : 6306801612240
Option 3 ID : 6306801612241
Option 4 ID : 6306801612239
Status : Answered
Chosen Option : 3

Q.5 The side of a square exceeds the side of another square by 3 cm and the sum of the areas of the two squares is 225 cm^2 . Find the sum of the perimeter (in cm) of both squares.

- Ans ☒ 1. 74
☒ 2. 64
☒ 3. 94
☒ 4. 84

Question Type : MCQ
Question ID : 630680526621
Option 1 ID : 6306802058551
Option 2 ID : 6306802058550
Option 3 ID : 6306802058553
Option 4 ID : 6306802058552
Status : Answered
Chosen Option : 4

Q.6 If two positive integers x and y are written as $x = a^2b^3$ and $y = a^3b$; and a and b are prime numbers, then HCF (x, y) is:

- Ans
- ☒ 1. a^2b
 - ☐ 2. a^2b^2
 - ☐ 3. ab^2
 - ☐ 4. ab

Question Type : MCQ
 Question ID : 63068091847
 Option 1 ID : 630680356122
 Option 2 ID : 630680356123
 Option 3 ID : 630680356125
 Option 4 ID : 630680356124
 Status : Answered
 Chosen Option : 1

Q.7 A well with an internal diameter 10 m is dug to a depth of 10 m. Earth taken out of it is spread all around the well to a width of 12 m to form an embankment. What is the height (in m, rounded off to 2 decimal places) of the embankment?

- Ans
- ☐ 1. 0.88
 - ☐ 2. 1.02
 - ☐ 3. 1.12
 - ☒ 4. 0.95

Question Type : MCQ
 Question ID : 630680387073
 Option 1 ID : 6306801509004
 Option 2 ID : 6306801509003
 Option 3 ID : 6306801509005
 Option 4 ID : 6306801509002
 Status : Not Answered
 Chosen Option : --

Q.8 A thief is noticed by a policeman from a distance of 450m. The thief starts running and the policeman chases him. The thief and the policeman run at the rate of $10\frac{1}{2}$ km/h and $12\frac{1}{2}$ km/h, respectively. What will be the distance between them after 3 minutes?

- Ans
- ☐ 1. 200 m
 - ☐ 2. 100 m
 - ☒ 3. 350 m
 - ☐ 4. 150 m

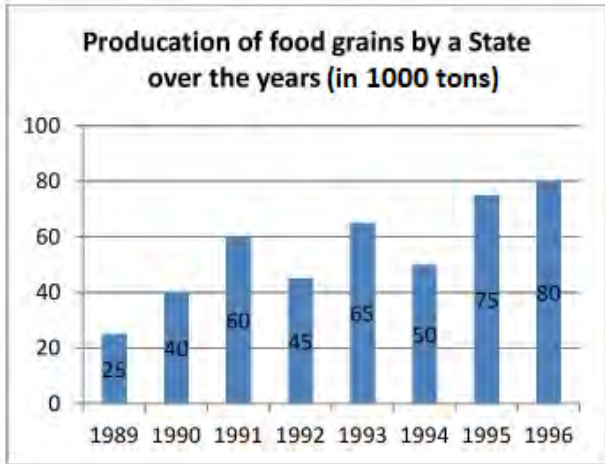
Question Type : MCQ
 Question ID : 630680262109
 Option 1 ID : 6306801018085
 Option 2 ID : 6306801018083
 Option 3 ID : 6306801018086
 Option 4 ID : 6306801018084
 Status : Answered
 Chosen Option : 3

Q.9 A shopkeeper marks his goods k% more than their cost price. If the shopkeeper allows a 20% discount and still gains 25%, then find the value of k.

- Ans
- ☒ 1. 56.52%
 - ☒ 2. 65.25%
 - ☒ 3. 65.52%
 - ☒ 4. 56.25%

Question Type : MCQ
Question ID : 630680121160
Option 1 ID : 630680469603
Option 2 ID : 630680469605
Option 3 ID : 630680469602
Option 4 ID : 630680469604
Status : Answered
Chosen Option : 4

Q.10 Study the following graph carefully and answer the question given below it.



In which of the following years was the percentage increase in production from the previous year the maximum among the given years?

- Ans
- ☒ 1. 1995
 - ☒ 2. 1993
 - ☒ 3. 1990
 - ☒ 4. 1991

Question Type : MCQ
Question ID : 630680404325
Option 1 ID : 6306801576804
Option 2 ID : 6306801576803
Option 3 ID : 6306801576805
Option 4 ID : 6306801576802
Status : Answered
Chosen Option : 3

Q.11 What sum (in ₹) will earn a simple interest of ₹360 in 2 years at 8% per year rate of interest?

- Ans ☒ 1. 2250
☒ 2. 1125
☒ 3. 3000
☒ 4. 4500

Question Type : MCQ
Question ID : 630680612182
Option 1 ID : 6306802395460
Option 2 ID : 6306802395461
Option 3 ID : 6306802395463
Option 4 ID : 6306802395462
Status : Answered
Chosen Option : 1

Q.12 Raima saves 14% from her income of ₹35,000. How much is her expenditure (in ₹)?

- Ans ☒ 1. 30100
☒ 2. 32000
☒ 3. 28600
☒ 4. 34000

Question Type : MCQ
Question ID : 630680464516
Option 1 ID : 6306801814101
Option 2 ID : 6306801814099
Option 3 ID : 6306801814102
Option 4 ID : 6306801814100
Status : Answered
Chosen Option : 1

Q.13 A thief is noticed by a policeman from a distance of 150 m. The thief starts running, and the policeman chases him. The thief and the policeman run at the rate of 8 m/s and 10 m/s, respectively. Find the distance travelled by the thief before being caught.

- Ans ☒ 1. 600 m
☒ 2. 700 m
☒ 3. 500 m
☒ 4. 550 m

Question Type : MCQ
Question ID : 630680627881
Option 1 ID : 6306802457611
Option 2 ID : 6306802457614
Option 3 ID : 6306802457612
Option 4 ID : 6306802457613
Status : Answered
Chosen Option : 1

Q.14 A dealer marked the price of an item 30% above the cost price. He allowed two successive discounts of 15% and 20% to a particular customer. As a result, he incurred a loss of ₹696. At what price did he sell the item to the customer?

- Ans ☒ 1. ₹5,304
☐ 2. ₹6,205
☐ 3. ₹4,904
☐ 4. ₹7,805

Question Type : MCQ
Question ID : 630680488655
Option 1 ID : 6306801908635
Option 2 ID : 6306801908638
Option 3 ID : 6306801908637
Option 4 ID : 6306801908636
Status : Answered
Chosen Option : 4

Q.15 The average of 70 values is 40. If each value is multiplied by 20, what will be the changed average?

- Ans ☐ 1. 60
☐ 2. 1400
☐ 3. 90
☒ 4. 800

Question Type : MCQ
Question ID : 630680239447
Option 1 ID : 630680928742
Option 2 ID : 630680928739
Option 3 ID : 630680928740
Option 4 ID : 630680928741
Status : Answered
Chosen Option : 4

Q.16 If the radius of the base of a right circular cylinder is reduced to one-third, keeping the height same, what is the ratio of the volume of the reduced cylinder to that of the original?

- Ans ☐ 1. 2 : 4
☒ 2. 1 : 9
☐ 3. 1 : 2
☐ 4. 2 : 3

Question Type : MCQ
Question ID : 630680109407
Option 1 ID : 630680424380
Option 2 ID : 630680424381
Option 3 ID : 630680424383
Option 4 ID : 630680424382
Status : Answered
Chosen Option : 2

Q.17 If two kinds of resins costing ₹160 per kg and ₹210 per kg are mixed in the ratio of 2 : 3, then find the cost (in ₹) of the mixture per kg.

Ans ☒ 1. 185

☒ 2. 190

☒ 3. 180

☒ 4. 200

Question Type : MCQ

Question ID : 630680404566

Option 1 ID : 6306801577895

Option 2 ID : 6306801577896

Option 3 ID : 6306801577897

Option 4 ID : 6306801577898

Status : Answered

Chosen Option : 2

Q.18 The selling price of an almirah is $33\frac{1}{3}\%$ of its cost price. Find the loss percentage.

Ans ☒ 1. $66\frac{2}{3}\%$

☒ 2. $44\frac{2}{3}\%$

☒ 3. $55\frac{1}{3}\%$

☒ 4. $33\frac{1}{3}\%$

Question Type : MCQ

Question ID : 630680468823

Option 1 ID : 6306801831074

Option 2 ID : 6306801831072

Option 3 ID : 6306801831073

Option 4 ID : 6306801831071

Status : Answered

Chosen Option : 1



Download SSC CGL, CHSL E-BOOKS

[CLICK HERE](#)

Q.19 Refer the following data table and answer the question.

Day of the week	Distance jogged (in kms)
Monday	3.5
Tuesday	4
Wednesday	4.2
Thursday	5.3
Friday	6.1
Saturday	3
Sunday	5.9

If 750 calories are burnt by jogging 6 km, how many calories were burnt in the given week?

- Ans ☒ 1. 4000
- ☐ 2. 3000
- ☐ 3. 2500
- ☐ 4. 3500

Question Type : MCQ
Question ID : 630680403219
Option 1 ID : 6306801572376
Option 2 ID : 6306801572374
Option 3 ID : 6306801572373
Option 4 ID : 6306801572375
Status : Answered
Chosen Option : 1

Q.20 A length of a violin string varies inversely with respect to the frequency of its vibrations. The frequency of a 14-inch-long violin string is 450 cycles per second. Find the frequency of a 12-inch violin string.

- Ans ☐ 1. 510 cycles per second
- ☒ 2. 525 cycles per second
- ☐ 3. 520 cycles per second
- ☐ 4. 515 cycles per second

Question Type : MCQ
Question ID : 630680262066
Option 1 ID : 6306801017911
Option 2 ID : 6306801017914
Option 3 ID : 6306801017913
Option 4 ID : 6306801017912
Status : Answered
Chosen Option : 2

Section : Reasoning Ability and Problem Solving

Q.1 KB 9 is related to ED 2 in a certain way. In the same way, XF 11 is related to RH 4. To which of the following is UH 8 related, following the same logic?

- Ans ☒ 1. OK 1
☒ 2. OK 3
☒ 3. OJ 3
☒ 4. OJ 1

Question Type : MCQ
Question ID : 630680393922
Option 1 ID : 6306801535998
Option 2 ID : 6306801536000
Option 3 ID : 6306801536001
Option 4 ID : 6306801535999
Status : Answered
Chosen Option : 4

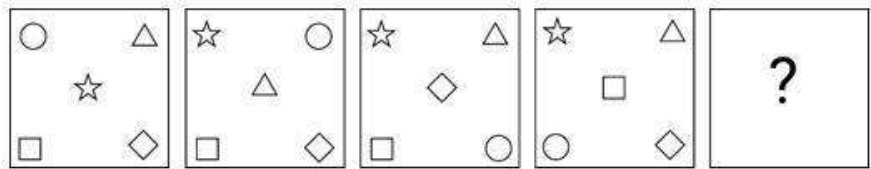
Q.2 326 is related to 335 following a certain logic. Following the same logic, 419 is related to 428. To which of the following is 566 related, following the same logic?

(NOTE : Operations should be performed on the whole numbers, without breaking down the numbers into its constituent digits. E.g. 13 – Operations on 13 such as adding / subtracting / multiplying, etc., to 13 can be performed. Breaking down 13 into 1 and 3 and then performing mathematical operations on 1 and 3 is not allowed.)

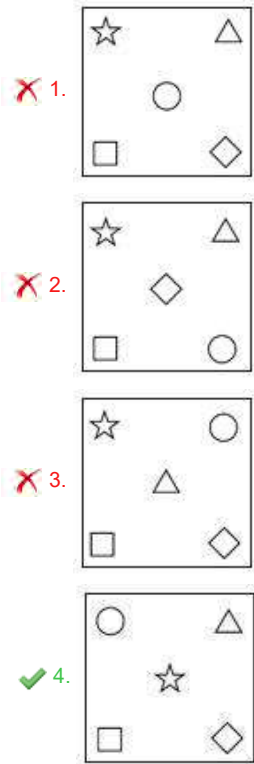
- Ans ☒ 1. 599
☒ 2. 582
☒ 3. 575
☒ 4. 571

Question Type : MCQ
Question ID : 630680441684
Option 1 ID : 6306801724353
Option 2 ID : 6306801724352
Option 3 ID : 6306801724351
Option 4 ID : 6306801724350
Status : Answered
Chosen Option : 3

Q.3 Select the figure from the given options, which when put in place of the question mark (?) will logically complete the series.



Ans



Question Type : MCQ
Question ID : 630680278578
Option 1 ID : 6306801082600
Option 2 ID : 6306801082597
Option 3 ID : 6306801082598
Option 4 ID : 6306801082599
Status : Answered
Chosen Option : 4

Q.4 In a certain code language, 'TREE' is coded as 'POCD' and 'FOOT' is coded as 'BLMS'. How will 'MIND' be coded in the same language?

- Ans
- ☒ 1. JEKD
 - ☒ 2. IFLC
 - ☒ 3. JFLD
 - ☒ 4. IEKD

Question Type : MCQ
Question ID : 630680465400
Option 1 ID : 6306801817635
Option 2 ID : 6306801817638
Option 3 ID : 6306801817636
Option 4 ID : 6306801817637
Status : Answered
Chosen Option : 2

Q.5 A, B, C, D, E, F and G are sitting around a circular table facing the centre(but not necessarily in the same order). F is sitting third to the left of A. A is sitting second to the left of G. G is sitting to the immediate right of E. B is sitting to the immediate left of D. What is the position of F with respect to E?

- Ans ☒ 1. Second to the left
☒ 2. Immediate left
☒ 3. Immediate right
☒ 4. Third to the right

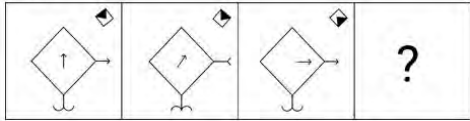
Question Type : MCQ
Question ID : 630680380492
Option 1 ID : 6306801482964
Option 2 ID : 6306801482965
Option 3 ID : 6306801482966
Option 4 ID : 6306801482963
Status : Answered
Chosen Option : 4

Q.6 In a certain code language, 'apple pen card' is coded as '136', 'doctor no apple' is coded as '243' and 'card is blocked' is coded as '695'. How is 'apple' coded in the given code language?

- Ans ☒ 1. 6
☒ 2. 4
☒ 3. 3
☒ 4. 1

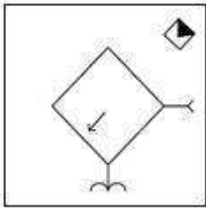
Question Type : MCQ
Question ID : 630680381037
Option 1 ID : 6306801485126
Option 2 ID : 6306801485125
Option 3 ID : 6306801485124
Option 4 ID : 6306801485123
Status : Answered
Chosen Option : 3

Q.7 Select the figure from among the given that will come in place of the question mark (?) and logically complete the series.

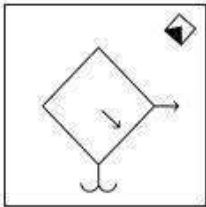


Ans

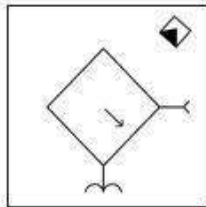
✗ 1.



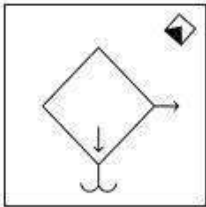
✗ 2.



✓ 3.



✗ 4.



Question Type : MCQ

Question ID : 630680272943

Option 1 ID : 6306801060333

Option 2 ID : 6306801060334

Option 3 ID : 6306801060332

Option 4 ID : 6306801060331

Status : Answered

Chosen Option : 3

Q.8 What should come in place of the question mark (?) in the given series based on the English alphabetical order?

PKQ ,OJP, NIO ,MHN, ?

Ans ✗ 1. NGL

✗ 2. LGN

✓ 3. LGM

✗ 4. MGL

Question Type : MCQ

Question ID : 630680457101

Option 1 ID : 6306801785344

Option 2 ID : 6306801785342

Option 3 ID : 6306801785341

Option 4 ID : 6306801785343

Status : Answered

Chosen Option : 3

Q.9 What will come in place of the question mark (?) of the following equation, if '+' and '-' are interchanged and 'x' and '÷' are interchanged?

$45 \times 3 + 9 - 18 \div 1 = ?$

- Ans ☒ 1. 12
☒ 2. 15
☒ 3. 24
☒ 4. 6

Question Type : MCQ
Question ID : 630680194967
Option 1 ID : 630680756360
Option 2 ID : 630680756357
Option 3 ID : 630680756358
Option 4 ID : 630680756359
Status : Answered
Chosen Option : 3

Q.10 What should come in place of the question mark (?) in the following series?
255, 248, 241, 234, 227, ?

- Ans ☒ 1. 207
☒ 2. 221
☒ 3. 220
☒ 4. 217

Question Type : MCQ
Question ID : 630680799062
Option 1 ID : 6306803131053
Option 2 ID : 6306803131050
Option 3 ID : 6306803131051
Option 4 ID : 6306803131052
Status : Answered
Chosen Option : 3

Q.11 Read the given statements and conclusions carefully. Assuming that the information given in the statements is true, even if it appears to be at variance with commonly known facts, decide which of the given conclusions logically follow(s) from the statements.

Statements:
All doors are locks.
Some locks are handles,

Conclusions:
(I) All handles are locks.
(II) No door is a handle.

- Ans ☒ 1. Only conclusion I follows
☒ 2. Only conclusion II follows
☒ 3. Neither conclusion I nor II follows
☒ 4. Both conclusions I and II follow

Question Type : MCQ
Question ID : 630680815658
Option 1 ID : 6306803195933
Option 2 ID : 6306803195934
Option 3 ID : 6306803195936
Option 4 ID : 6306803195935
Status : Answered
Chosen Option : 3

Q.12 Read the given statements and conclusions carefully. Assuming that the information given in the statements is true, even if it appears to be at variance with commonly known facts, decide which of the given conclusions logically follow(s) from the statement(s).

Statements: All cabbages are roses. All cabbages are tulips.

Conclusions: (I) At least some tulips are roses.

(II) All roses are cabbages.

- Ans ☒ 1. Only conclusion (I) follows
- ☐ 2. Only conclusion (II) follows
- ☐ 3. Both conclusions (I) and (II) follow
- ☐ 4. Neither conclusion (I) nor (II) follows

Question Type : MCQ
Question ID : 630680408724
Option 1 ID : 6306801593787
Option 2 ID : 6306801593788
Option 3 ID : 6306801593790
Option 4 ID : 6306801593789
Status : Answered
Chosen Option : 1

Q.13 Which two signs should be interchanged to make the given equation correct?
 $11 \times 7 - 48 + 6 \div 37 = 106$

- Ans ☒ 1. \div and $+$
- ☐ 2. $-$ and $+$
- ☐ 3. $+$ and \times
- ☐ 4. $-$ and \times

Question Type : MCQ
Question ID : 630680411994
Option 1 ID : 6306801606811
Option 2 ID : 6306801606812
Option 3 ID : 6306801606814
Option 4 ID : 6306801606813
Status : Answered
Chosen Option : 1

Q.14 In a certain code language, 'LIKE' is coded as '4682' and 'BEAM' is coded as '1358'. What is the code for 'E' in the given code language?

- Ans ☐ 1. 2
- ☐ 2. 5
- ☐ 3. 3
- ☒ 4. 8

Question Type : MCQ
Question ID : 630680388105
Option 1 ID : 6306801512995
Option 2 ID : 6306801512997
Option 3 ID : 6306801512996
Option 4 ID : 6306801512994
Status : Answered
Chosen Option : 4

Q.15 LQ87 is related to VA55 in a certain way. In the same way, QV59 is related to AF27. To which of the following is BG49 related, following the same logic?

- Ans ☒ 1. LQ19
☒ 2. LQ18
☒ 3. QL17
☒ 4. LQ17

Question Type : MCQ
Question ID : 6306801108775
Option 1 ID : 6306804355649
Option 2 ID : 6306804355647
Option 3 ID : 6306804355648
Option 4 ID : 6306804355646
Status : Answered
Chosen Option : 4

SSC MTS (Non Technical) EXAM STUDY KIT



FREE
SHIPPING 

- ▶ 100% SSC MTS Exam Syllabus Covered
- ▶ PRINTED Notes
- ▶ 8 Books, 700+ Pages
- ▶ 2500+ MCQs
- ▶ Practice Papers
- ▶ 1 Year Current Affairs

50%
OFF

 SSCPOTAL.IN

SSC MTS PDF NOTES

100% Syllabus Covered




CLICK HERE

CLICK BELOW LINK TO DOWNLOAD PDF NOTES

<https://sscpportal.in/study-kit/mts>


<https://sscpportal.in/study-kit>

Q.16 Select the option figure in which the given figure is embedded as its part (rotation is NOT allowed).




Ans


✓ 1.




✗ 2.



✗ 3.



✗ 4.



Question Type : MCQ

Question ID : 630680487080

Option 1 ID : 6306801902470

Option 2 ID : 6306801902472

Option 3 ID : 6306801902473

Option 4 ID : 6306801902471

Status : Answered

Chosen Option : 1

Q.17 In a code language, 'I want food' is written as ' sickota dongre dujubu', 'I want drink' is written as 'bluto sickota dujubu', 'food and drink' is written as 'dongre peppin bluto', then what is the code for the word 'peppin' in this language?

- Ans ☒ 1. I
☒ 2. drink
☒ 3. food
☒ 4. and

Question Type : MCQ
Question ID : 630680465337
Option 1 ID : 6306801817386
Option 2 ID : 6306801817384
Option 3 ID : 6306801817385
Option 4 ID : 6306801817383
Status : Answered
Chosen Option : 4

Q.18 T, N, S, P, R and M are sitting around a circular table facing the centre (but not necessarily in the same order). S is sitting second to the left of T. Only two people are sitting between S and R. M is not the immediate neighbour of S. P is sitting second to the right of R.
How many people are sitting between N and M, when counted from the right of N?

- Ans ☒ 1. Three
☒ 2. Two
☒ 3. Four
☒ 4. One

Question Type : MCQ
Question ID : 630680377861
Option 1 ID : 6306801472505
Option 2 ID : 6306801472504
Option 3 ID : 6306801472506
Option 4 ID : 6306801472503
Status : Answered
Chosen Option : 2

Q.19 In the following number-pairs, the second number is obtained by applying certain mathematical operations to the first number. Select the set in which the numbers are related in the same way as are the numbers of the following sets.

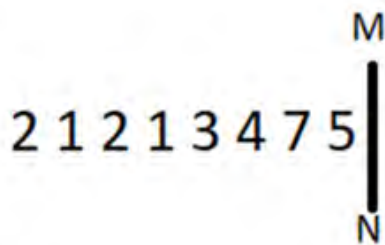
(NOTE: Operations should be performed on the whole numbers, without breaking down the numbers into its constituent digits. E.g. 13 – Operations on 13 such as adding/subtracting/multiplying etc. to 13 can be performed. Breaking down 13 into 1 and 3 and then performing mathematical operations on 1 and 3 is not allowed.)

11, 66
26, 156

- Ans ☒ 1. 18, 108
☒ 2. 20, 130
☒ 3. 26, 152
☒ 4. 15, 75

Question Type : MCQ
Question ID : 630680408142
Option 1 ID : 6306801591488
Option 2 ID : 6306801591489
Option 3 ID : 6306801591490
Option 4 ID : 6306801591487
Status : Answered
Chosen Option : 1

Q.20 Select the correct mirror image of the given figure when the mirror is placed at MN as shown below.



Ans

- ☒ 1. 2 1 2 1 3 4 7 5
- ☒ 2. 5 1 3 4 7 2 1 2
- ☒ 3. 5 1 3 4 7 2 1 2
- ☒ 4. 2 1 2 1 3 4 7 5

Question Type : MCQ
Question ID : 630680525318
Option 1 ID : 6306802053356
Option 2 ID : 6306802053357
Option 3 ID : 6306802053358
Option 4 ID : 6306802053359
Status : Answered
Chosen Option : 2

Section : General Awareness

Q.1 The weaker warm storms that grow stronger over time are finally converted into huge storms or hurricanes. Which of the following climate regions is the origin of such hurricanes?

- Ans
- ☒ 1. Semi-arid climate region
 - ☒ 2. Continental climate region
 - ☒ 3. Tropical climate region
 - ☒ 4. Arid climate region

Question Type : MCQ
Question ID : 630680404429
Option 1 ID : 6306801577219
Option 2 ID : 6306801577218
Option 3 ID : 6306801577216
Option 4 ID : 6306801577217
Status : Answered
Chosen Option : 3

Q.2 Which type of loan is supported by MUDRA?

- Ans ☒ 1. Primary loan
☒ 2. Real estate loan
☒ 3. Corporate loan
☒ 4. Non-farm loan

Question Type : MCQ
Question ID : 630680313559
Option 1 ID : 6306801220103
Option 2 ID : 6306801220104
Option 3 ID : 6306801220101
Option 4 ID : 6306801220102
Status : Answered
Chosen Option : 1

Q.3 India launched the 'National Social Assistance Programme' in:

- Ans ☒ 1. 1995
☒ 2. 1990
☒ 3. 1985
☒ 4. 2000

Question Type : MCQ
Question ID : 630680166381
Option 1 ID : 630680644476
Option 2 ID : 630680644479
Option 3 ID : 630680644478
Option 4 ID : 630680644477
Status : Answered
Chosen Option : 1

Q.4 The Iron Age site named Tekwada is located in _____.

- Ans ☒ 1. Tamil Nadu
☒ 2. Maharashtra
☒ 3. Madhya Pradesh
☒ 4. Andhra Pradesh

Question Type : MCQ
Question ID : 630680113849
Option 1 ID : 630680440923
Option 2 ID : 630680440924
Option 3 ID : 630680440925
Option 4 ID : 630680440922
Status : Answered
Chosen Option : 2

Q.5 In which of the following states is the Bissu Mela organised to thank Santoora Devi for the good harvest?

- Ans** ☒ 1. Punjab
☒ 2. Himachal Pradesh
☒ 3. Uttarakhand
☒ 4. Haryana

Question Type : **MCQ**
Question ID : **630680403380**
Option 1 ID : **6306801573032**
Option 2 ID : **6306801573031**
Option 3 ID : **6306801573030**
Option 4 ID : **6306801573033**
Status : **Answered**
Chosen Option : **2**

Q.6 In Union Budget 2023, a sub-scheme of which of the following Yojanas has been proposed with the investment of ₹6,000 crore to enable activities of fishermen, fish vendors and micro and small enterprises?

- Ans** ☒ 1. PM Mudra Yojana
☒ 2. PM Ujjwala Yojana
☒ 3. PM Fasal Bima Yojana
☒ 4. PM Matsya Sampada Yojana

Question Type : **MCQ**
Question ID : **630680467060**
Option 1 ID : **6306801824195**
Option 2 ID : **6306801824196**
Option 3 ID : **6306801824193**
Option 4 ID : **6306801824194**
Status : **Answered**
Chosen Option : **4**

Q.7 How many chances does a high jumper get for overcoming a certain height?

- Ans** ☒ 1. Six chances
☒ 2. Three chances
☒ 3. Two chances
☒ 4. Four chances

Question Type : **MCQ**
Question ID : **630680123989**
Option 1 ID : **630680480817**
Option 2 ID : **630680480815**
Option 3 ID : **630680480816**
Option 4 ID : **630680480814**
Status : **Answered**
Chosen Option : **1**

Q.8 In Harappan civilisation, cities were planned with the streets generally oriented along the _____ directions.

- Ans ☒ 1. incognito
☒ 2. cardinal
☒ 3. ordinal
☒ 4. anonymous

Question Type : MCQ
Question ID : 630680592828
Option 1 ID : 6306802319606
Option 2 ID : 6306802319605
Option 3 ID : 6306802319604
Option 4 ID : 6306802319607
Status : Answered
Chosen Option : 2

Q.9 In june 2022, Eknath Sambhaji Shinde became the Chief Minister of which of the following states?

- Ans ☒ 1. Gujarat
☒ 2. Haryana
☒ 3. Rajasthan
☒ 4. Maharashtra

Question Type : MCQ
Question ID : 630680467585
Option 1 ID : 6306801826270
Option 2 ID : 6306801826273
Option 3 ID : 6306801826271
Option 4 ID : 6306801826272
Status : Answered
Chosen Option : 4

Q.10 Which Census decade recorded the highest population growth rate (in terms of percentage) in India?

- Ans ☒ 1. 1971-1981
☒ 2. 1941-1951
☒ 3. 1961-1971
☒ 4. 2001-2011

Question Type : MCQ
Question ID : 630680510917
Option 1 ID : 6306801996800
Option 2 ID : 6306801996798
Option 3 ID : 6306801996799
Option 4 ID : 6306801996801
Status : Answered
Chosen Option : 1

Q.11 To which of the following groups do whales belong?

- Ans ☒ 1. Amphibia
☒ 2. Arthropoda
☒ 3. Mammalia
☒ 4. Pisces

Question Type : MCQ
Question ID : 630680422311
Option 1 ID : 6306801647682
Option 2 ID : 6306801647683
Option 3 ID : 6306801647680
Option 4 ID : 6306801647681
Status : Answered
Chosen Option : 3

Q.12 Who among the following received the Padma Shri 2021 for Panthi folk dance?

- Ans ☒ 1. Radhe Shyam Barle
☒ 2. Bhuri Bai
☒ 3. Jagdish Chaudhary
☒ 4. Gulfam Ahmed

Question Type : MCQ
Question ID : 630680160188
Option 1 ID : 630680620125
Option 2 ID : 630680620124
Option 3 ID : 630680620127
Option 4 ID : 630680620126
Status : Answered
Chosen Option : 1

Q.13 The term 'Aus', 'Aman' and 'Boro' are associated with which crop in India?

- Ans ☒ 1. Jute
☒ 2. Wheat
☒ 3. Paddy
☒ 4. Maize

Question Type : MCQ
Question ID : 630680798976
Option 1 ID : 6306803130703
Option 2 ID : 6306803130702
Option 3 ID : 6306803130704
Option 4 ID : 6306803130705
Status : Answered
Chosen Option : 1

Q.14 What is the percentage of 's' character in the carbon atom of acetylene?

- Ans ☒ 1. 50%
- ☐ 2. 33.33%
- ☐ 3. 25%
- ☐ 4. 75%

Question Type : MCQ
Question ID : 630680471468
Option 1 ID : 6306801841586
Option 2 ID : 6306801841588
Option 3 ID : 6306801841587
Option 4 ID : 6306801841589
Status : Answered
Chosen Option : 1

Q.15 Which of the following is the correct statement about the Rajya Sabha?

- Ans ☒ 1. It is known as the Council of the States.
- ☐ 2. It is known as the lower house of the parliament.
- ☐ 3. All the members are directly elected by the people.
- ☐ 4. The term of the members is for 5 years.

Question Type : MCQ
Question ID : 630680216169
Option 1 ID : 630680838653
Option 2 ID : 630680838651
Option 3 ID : 630680838652
Option 4 ID : 630680838654
Status : Answered
Chosen Option : 1

Q.16 Anorexia Nervosa is an eating disorder characterised by _____.
a) an abnormally heavy body weight
b) an intense fear of losing weight
c) a distorted perception of weight
d) trying to lose weight by exercising excessively

- Ans ☐ 1. a and b
- ☒ 2. c and d
- ☐ 3. a and c
- ☐ 4. b and c

Question Type : MCQ
Question ID : 630680422209
Option 1 ID : 6306801647272
Option 2 ID : 6306801647275
Option 3 ID : 6306801647273
Option 4 ID : 6306801647274
Status : Answered
Chosen Option : 2

Q.17 Buddhadev Dasgupta was a famous instrumentalist of which of the following instrument?

- Ans ☒ 1. Sitar
☒ 2. Surbahar
☒ 3. Santoor
☒ 4. Sarod

Question Type : **MCQ**
Question ID : **630680467382**
Option 1 ID : **6306801825475**
Option 2 ID : **6306801825477**
Option 3 ID : **6306801825474**
Option 4 ID : **6306801825476**
Status : **Answered**
Chosen Option : **1**

Q.18 Which of the following Mughal emperors issued silver coins in the honour of his wife Mehrunnisa?

- Ans ☒ 1. Jahangir
☒ 2. Aurangzeb
☒ 3. Akbar
☒ 4. Humayun

Question Type : **MCQ**
Question ID : **630680210808**
Option 1 ID : **630680817392**
Option 2 ID : **630680817391**
Option 3 ID : **630680817394**
Option 4 ID : **630680817393**
Status : **Answered**
Chosen Option : **1**

Q.19 The author of the Hindi novel 'Kohre Mein Kaid Rang' is:

- Ans ☒ 1. Govind Mishra
☒ 2. Kamleshwar
☒ 3. Uday Prakash
☒ 4. Chitra Mudgal

Question Type : **MCQ**
Question ID : **630680512335**
Option 1 ID : **6306802002310**
Option 2 ID : **6306802002311**
Option 3 ID : **6306802002312**
Option 4 ID : **6306802002313**
Status : **Answered**
Chosen Option : **2**

Q.20 Who among the following founded the 'Satyashodhak Samaj' in 1873?

- Ans ☒ 1. Gopal Ganesh Agarkar
- ☒ 2. Jyotiba Phule
- ☒ 3. Vinoba Bhave
- ☒ 4. Vinayak Damodar Savarkar

Question Type : MCQ
Question ID : 630680318903
Option 1 ID : 6306801240569
Option 2 ID : 6306801240570
Option 3 ID : 6306801240571
Option 4 ID : 6306801240572
Status : Answered
Chosen Option : 2

Q.21 Rabindranath Tagore referred to _____ as Nritya Samragini, which translates to 'the empress of dance'.

- Ans ☒ 1. Mrinalini Sarabhai
- ☒ 2. Sitara Devi
- ☒ 3. Gangu Bai
- ☒ 4. Rukmini Arundale

Question Type : MCQ
Question ID : 630680554551
Option 1 ID : 6306802167974
Option 2 ID : 6306802167976
Option 3 ID : 6306802167977
Option 4 ID : 6306802167975
Status : Answered
Chosen Option : 4

Q.22 Which of the following Fundamental Rights entails trafficking of human beings and forced labour?

- Ans ☒ 1. Cultural and Educational Rights
- ☒ 2. Right to Equality
- ☒ 3. Rights against Exploitation
- ☒ 4. Right to Freedom

Question Type : MCQ
Question ID : 630680587165
Option 1 ID : 6306802297195
Option 2 ID : 6306802297192
Option 3 ID : 6306802297193
Option 4 ID : 6306802297194
Status : Answered
Chosen Option : 3

Q.23 Who among the following founded the Asiatic Society of Bengal?

- Ans ☒ 1. Henry Colebrook
☒ 2. William Jones
☒ 3. Robert Clive
☒ 4. Warren Hastings

Question Type : MCQ
Question ID : 630680511605
Option 1 ID : 6306801999542
Option 2 ID : 6306801999543
Option 3 ID : 6306801999544
Option 4 ID : 6306801999545
Status : Answered
Chosen Option : 2

Q.24 Ujjwala was the mascot of which national sports event held in 2023?

- Ans ☒ 1. Khelo India University Games 2022
☒ 2. Khelo India Youth Games 2023
☒ 3. National Games 2023
☒ 4. Khelo India Para Games 2023

Question Type : MCQ
Question ID : 630680560685
Option 1 ID : 6306802191723
Option 2 ID : 6306802191722
Option 3 ID : 6306802191720
Option 4 ID : 6306802191721
Status : Answered
Chosen Option : 2

Q.25 Which of the following is NOT a physiographic division of India?

- Ans ☒ 1. The Tibetan Plateau
☒ 2. The Northern Plains
☒ 3. The Peninsular Plateau
☒ 4. The Himalayan Mountains

Question Type : MCQ
Question ID : 630680484507
Option 1 ID : 6306801892345
Option 2 ID : 6306801892343
Option 3 ID : 6306801892344
Option 4 ID : 6306801892342
Status : Answered
Chosen Option : 1

Section : English Language and Comprehension

Q.1 Select the most appropriate to substitute the underlined word in the given sentence.
Rohit asked Nita what was the most intriguing book she has read recently.

- Ans ☒ 1. subdued
☒ 2. encircled
☒ 3. tedious
☒ 4. arraigned

Question Type : MCQ
Question ID : 630680528726
Option 1 ID : 6306802066912
Option 2 ID : 6306802066913
Option 3 ID : 6306802066915
Option 4 ID : 6306802066914
Status : Answered
Chosen Option : 4

Q.2 Select the INCORRECTLY spelt word..

- Ans ☒ 1. Conscious
☒ 2. Receive
☒ 3. Occurance
☒ 4. Believe

Question Type : MCQ
Question ID : 630680556436
Option 1 ID : 6306802174939
Option 2 ID : 6306802174938
Option 3 ID : 6306802174940
Option 4 ID : 6306802174941
Status : Answered
Chosen Option : 3

Q.3 Select the most appropriate option to fill in the blank.
The ancient Greeks and pagans used to worship natural _____ as Gods and Goddesses.

- Ans ☒ 1. elements
☒ 2. impulses
☒ 3. instincts
☒ 4. mixtures

Question Type : MCQ
Question ID : 630680515252
Option 1 ID : 6306802013475
Option 2 ID : 6306802013476
Option 3 ID : 6306802013473
Option 4 ID : 6306802013474
Status : Answered
Chosen Option : 1

Q.4 Select the most appropriate idiom that can substitute the underlined segment in the given sentence.
Most women are facing the same problem when it comes to job satisfaction because of the pay parity in institutions.

- Ans ☒ 1. in the same boat
- ☐ 2. comparing apples to oranges
- ☐ 3. armchair experts
- ☐ 4. a drop in the ocean

Question Type : MCQ
Question ID : 630680396940
Option 1 ID : 6306801547825
Option 2 ID : 6306801547827
Option 3 ID : 6306801547826
Option 4 ID : 6306801547824
Status : Answered
Chosen Option : 1

Q.5 Parts of the following sentence have been given as options. Select the option that contains an error.

Rose painted the most beautifullest picture ever at the art class today!

- Ans ☐ 1. art class today!
- ☒ 2. the most beautifullest
- ☐ 3. picture ever at the
- ☐ 4. Rose painted

Question Type : MCQ
Question ID : 630680514392
Option 1 ID : 6306802010196
Option 2 ID : 6306802010194
Option 3 ID : 6306802010195
Option 4 ID : 6306802010193
Status : Answered
Chosen Option : 2

Q.6 Correct the underlined part of the sentence.

This mango is bitterer.

- Ans ☐ 1. most bitter
- ☒ 2. bitter
- ☐ 3. bitterest
- ☐ 4. more bitter

Question Type : MCQ
Question ID : 630680514554
Option 1 ID : 6306802010844
Option 2 ID : 6306802010842
Option 3 ID : 6306802010841
Option 4 ID : 6306802010843
Status : Answered
Chosen Option : 4

Q.7 Select the INCORRECTLY spelt word.

- Ans ☒ 1. Inflamous
☐ 2. Kerbstone
☐ 3. Arrangement
☐ 4. Subjugator

Question Type : MCQ
Question ID : 630680469840
Option 1 ID : 6306801835114
Option 2 ID : 6306801835117
Option 3 ID : 6306801835116
Option 4 ID : 6306801835115
Status : Answered
Chosen Option : 1

Q.8 Select the option that can be used as a one-word substitute for the given group of words.
one who does something for pleasure

- Ans ☐ 1. Atheist
☒ 2. Hedonist
☐ 3. Aggressor
☐ 4. Anarchist

Question Type : MCQ
Question ID : 630680515084
Option 1 ID : 6306802012854
Option 2 ID : 6306802012855
Option 3 ID : 6306802012853
Option 4 ID : 6306802012856
Status : Answered
Chosen Option : 2

Q.9 Select the most appropriate ANTONYM of the underlined word.
Raju is lazy and smart, but he does not attend the classes.

- Ans ☐ 1. lax
☒ 2. industrious
☐ 3. genius
☐ 4. snobbish

Question Type : MCQ
Question ID : 630680517458
Option 1 ID : 6306802022228
Option 2 ID : 6306802022229
Option 3 ID : 6306802022231
Option 4 ID : 6306802022230
Status : Answered
Chosen Option : 2

Q.10 Select the most appropriate option to fill in the blank.
He pressed the _____ just in time to avoid the accident.

- Ans ☒ 1. bike
☒ 2. brake
☒ 3. beak
☒ 4. break

Question Type : MCQ
Question ID : 630680435718
Option 1 ID : 6306801700796
Option 2 ID : 6306801700795
Option 3 ID : 6306801700793
Option 4 ID : 6306801700794
Status : Answered
Chosen Option : 2

Q.11 Select the most appropriate ANTONYM of the underlined word in the given sentence.

Even if an unlaced shoe is spotless, it is not neat.

- Ans ☒ 1. soiled
☒ 2. forged
☒ 3. agile
☒ 4. requisite

Question Type : MCQ
Question ID : 630680444391
Option 1 ID : 6306801734843
Option 2 ID : 6306801734841
Option 3 ID : 6306801734842
Option 4 ID : 6306801734840
Status : Answered
Chosen Option : 1

Q.12 Select the grammatically correct sentence..

- Ans ☒ 1. The traffic on the highway was heavy during an evening.
☒ 2. A traffic on the highway was heavy during an evening.
☒ 3. The traffic on a highway was heavy during an evening.
☒ 4. The traffic on the highway was heavy during the evening.

Question Type : MCQ
Question ID : 6306801106309
Option 1 ID : 6306804345675
Option 2 ID : 6306804345674
Option 3 ID : 6306804345677
Option 4 ID : 6306804345676
Status : Answered
Chosen Option : 1

Q.13 Select the most appropriate option that can substitute the underlined segment in the given sentence.

My brother asked me, "Can I exchange my phone from you?"

- Ans ☒ 1. my phone with yours
☐ 2. my phone since yours
☐ 3. my phone off yours
☐ 4. my phone within yours

Question Type : MCQ
Question ID : 630680551430
Option 1 ID : 6306802155947
Option 2 ID : 6306802155948
Option 3 ID : 6306802155946
Option 4 ID : 6306802155945
Status : Answered
Chosen Option : 1

Q.14 Select the most appropriate synonym of the underlined word in the given sentence.

Any declarations or practices of religious antipathy against ethnic minorities in a democratic country should not be tolerated.

- Ans ☒ 1. Enmity
☐ 2. Devaluation
☐ 3. Conformity
☐ 4. Passivity

Question Type : MCQ
Question ID : 630680412874
Option 1 ID : 6306801610320
Option 2 ID : 6306801610321
Option 3 ID : 6306801610322
Option 4 ID : 6306801610319
Status : Answered
Chosen Option : 1

Q.15 Select the option that expresses the given sentence in future perfect tense form.

I hope you wash all the clothes before you come into the house again.

- Ans ☐ 1. I hope you will have wash all the clothes before you come into the house again.
☐ 2. I hope you shall wash all the clothes before you come into the house again
☒ 3. I hope you will have washed all the clothes before you come into the house again.
☐ 4. I hope you will be washing all the clothes before you come into the house again.

Question Type : MCQ
Question ID : 63068087126
Option 1 ID : 630680337895
Option 2 ID : 630680337893
Option 3 ID : 630680337894
Option 4 ID : 630680337896
Status : Answered
Chosen Option : 3

Q.16 Select the INCORRECTLY spelt word...

- Ans ☒ 1. Battle
☒ 2. Comfortable
☒ 3. Depressed
☒ 4. Cheerful

Question Type : MCQ
Question ID : 630680726501
Option 1 ID : 6306802847013
Option 2 ID : 6306802847011
Option 3 ID : 6306802847010
Option 4 ID : 6306802847012
Status : Answered
Chosen Option : 3

Q.17 Select the most appropriate option that can substitute the underlined segment in the given sentence.

Everyone disliked the new CEO, Kushal, but nobody is ready to put themselves in dangerous situation by telling him their feelings.

- Ans ☒ 1. bell the cat
☒ 2. sit on the fence
☒ 3. pull a long face
☒ 4. rule the roost

Question Type : MCQ
Question ID : 630680404549
Option 1 ID : 6306801577699
Option 2 ID : 6306801577696
Option 3 ID : 6306801577698
Option 4 ID : 6306801577697
Status : Answered
Chosen Option : 1

Q.18 Select the grammatically correct sentence.

- Ans ☒ 1. The intrepid explorer stumbled upon the uncharted cavern deep within the heart of the rainforest.
☒ 2. An intrepid explorer stumbled upon an uncharted cavern deep within the heart of the rainforest.
☒ 3. The intrepid explorer stumbled upon an uncharted cavern deep within a heart of the rainforest.
☒ 4. An intrepid explorer stumbled upon the uncharted cavern deep within a heart of the rainforest.

Question Type : MCQ
Question ID : 630680597184
Option 1 ID : 6306802336783
Option 2 ID : 6306802336781
Option 3 ID : 6306802336782
Option 4 ID : 6306802336784
Status : Answered
Chosen Option : 2

Q.19 Read the sentence given below and identify if there is an error in it. The error can be in any segment of the sentence which are marked A, B, C, and D. Select option D if there is 'No error'.
(A) She sings / (B) the song / (C) beautiful in the party / (D) No error.

- Ans ☒ 1. A
☒ 2. B
☒ 3. D
☒ 4. C

Question Type : **MCQ**
Question ID : **6306801046638**
Option 1 ID : **6306804108677**
Option 2 ID : **6306804108678**
Option 3 ID : **6306804108680**
Option 4 ID : **6306804108679**
Status : **Answered**
Chosen Option : **4**

Q.20 Select the most appropriate option to fill in the blank.
I am calling to thank you _____ the present you sent.

- Ans ☒ 1. of
☒ 2. in
☒ 3. for
☒ 4. with

Question Type : **MCQ**
Question ID : **630680515237**
Option 1 ID : **6306802013415**
Option 2 ID : **6306802013416**
Option 3 ID : **6306802013414**
Option 4 ID : **6306802013413**
Status : **Answered**
Chosen Option : **3**

Comprehension:

In the following passage, some words have been deleted. Read the passage carefully and select the most appropriate option to fill in each blank.

Newspapers are like mirrors (1)_____ the diverse facets of society, capturing the voices, stories, and events that define our shared human experience. They serve as a forum (2)_____ dialogue, debate, and discussion, amplifying voices from all walks of life and fostering (3)_____ sense of community. Beyond reporting news, newspapers also celebrate achievements, highlight cultural (4)_____, and showcase human resilience in the face of adversity. They are archives of history, chronicling the triumphs and trials of generations, and serving as a reminder of how far we have come and how much further we can go. In an age of digital transformation, newspapers continue to (5)_____, adapting to new mediums while upholding the core values of journalism: accuracy, integrity, and accountability.

SubQuestion No : 21

Q.21 Select the most appropriate option to fill in blank number 1.

- Ans ☒ 1. reflects
☒ 2. reflect
☒ 3. reflected
☒ 4. reflecting

Question Type : MCQ
Question ID : 630680726267
Option 1 ID : 6306802846079
Option 2 ID : 6306802846081
Option 3 ID : 6306802846082
Option 4 ID : 6306802846080
Status : Answered
Chosen Option : 4

Comprehension:

In the following passage, some words have been deleted. Read the passage carefully and select the most appropriate option to fill in each blank.

Newspapers are like mirrors (1)_____ the diverse facets of society, capturing the voices, stories, and events that define our shared human experience. They serve as a forum (2)_____ dialogue, debate, and discussion, amplifying voices from all walks of life and fostering (3)_____ sense of community. Beyond reporting news, newspapers also celebrate achievements, highlight cultural (4)_____, and showcase human resilience in the face of adversity. They are archives of history, chronicling the triumphs and trials of generations, and serving as a reminder of how far we have come and how much further we can go. In an age of digital transformation, newspapers continue to (5)_____, adapting to new mediums while upholding the core values of journalism: accuracy, integrity, and accountability.

SubQuestion No : 22

Q.22 Select the most appropriate option to fill in blank number 2.

- Ans ☒ 1. on
☒ 2. into
☒ 3. by
☒ 4. for

Question Type : MCQ
Question ID : 630680726268
Option 1 ID : 6306802846086
Option 2 ID : 6306802846084
Option 3 ID : 6306802846085
Option 4 ID : 6306802846083
Status : Answered
Chosen Option : 4

Comprehension:

In the following passage, some words have been deleted. Read the passage carefully and select the most appropriate option to fill in each blank.

Newspapers are like mirrors (1)_____ the diverse facets of society, capturing the voices, stories, and events that define our shared human experience. They serve as a forum (2)_____ dialogue, debate, and discussion, amplifying voices from all walks of life and fostering (3)_____ sense of community. Beyond reporting news, newspapers also celebrate achievements, highlight cultural (4)_____, and showcase human resilience in the face of adversity. They are archives of history, chronicling the triumphs and trials of generations, and serving as a reminder of how far we have come and how much further we can go. In an age of digital transformation, newspapers continue to (5)_____, adapting to new mediums while upholding the core values of journalism: accuracy, integrity, and accountability.

SubQuestion No : 23

Q.23 Select the most appropriate option to fill in blank number 3.

- Ans ☒ 1. the
☒ 2. a
☒ 3. No article required
☒ 4. an

Question Type : MCQ
Question ID : 630680726269
Option 1 ID : 6306802846089
Option 2 ID : 6306802846087
Option 3 ID : 6306802846090
Option 4 ID : 6306802846088
Status : Answered
Chosen Option : 2

Comprehension:

In the following passage, some words have been deleted. Read the passage carefully and select the most appropriate option to fill in each blank.

Newspapers are like mirrors (1)_____ the diverse facets of society, capturing the voices, stories, and events that define our shared human experience. They serve as a forum (2)_____ dialogue, debate, and discussion, amplifying voices from all walks of life and fostering (3)_____ sense of community. Beyond reporting news, newspapers also celebrate achievements, highlight cultural (4)_____, and showcase human resilience in the face of adversity. They are archives of history, chronicling the triumphs and trials of generations, and serving as a reminder of how far we have come and how much further we can go. In an age of digital transformation, newspapers continue to (5)_____, adapting to new mediums while upholding the core values of journalism: accuracy, integrity, and accountability.

SubQuestion No : 24

Q.24 Select the most appropriate option to fill in blank number 4.

- Ans ☒ 1. richness
☒ 2. richer
☒ 3. richest
☒ 4. richly

Question Type : MCQ
Question ID : 630680726270
Option 1 ID : 6306802846093
Option 2 ID : 6306802846091
Option 3 ID : 6306802846094
Option 4 ID : 6306802846092
Status : Answered
Chosen Option : 1

SSC MTS (Non Technical) EXAM STUDY KIT



FREE
SHIPPING 

- ▶ 100% SSC MTS Exam Syllabus Covered
- ▶ PRINTED Notes
- ▶ 8 Books, 700+ Pages
- ▶ 2500+ MCQs
- ▶ Practice Papers
- ▶ 1 Year Current Affairs

50%
OFF

 **SSCPORTAL.IN**

SSC MTS PDF NOTES

100% Syllabus Covered



CLICK HERE

CLICK BELOW LINK TO DOWNLOAD PDF NOTES

<https://sscpportal.in/study-kit/mts>

<https://sscpportal.in/study-kit>

Comprehension:

In the following passage, some words have been deleted. Read the passage carefully and select the most appropriate option to fill in each blank.

Newspapers are like mirrors (1)_____ the diverse facets of society, capturing the voices, stories, and events that define our shared human experience. They serve as a forum (2)_____ dialogue, debate, and discussion, amplifying voices from all walks of life and fostering (3)_____ sense of community. Beyond reporting news, newspapers also celebrate achievements, highlight cultural (4)_____, and showcase human resilience in the face of adversity. They are archives of history, chronicling the triumphs and trials of generations, and serving as a reminder of how far we have come and how much further we can go. In an age of digital transformation, newspapers continue to (5)_____, adapting to new mediums while upholding the core values of journalism: accuracy, integrity, and accountability.

SubQuestion No : 25

Q.25 Select the most appropriate option to fill in blank number 5.

- Ans ☒ 1. involve
☒ 2. dissolve
☒ 3. revolve
☒ 4. evolve

Question Type : MCQ
Question ID : 630680726271
Option 1 ID : 6306802846098
Option 2 ID : 6306802846095
Option 3 ID : 6306802846097
Option 4 ID : 6306802846096
Status : Answered
Chosen Option : 4