

Multi Tasking Non Technical Staff and Havaladar CBIC and CBN Examination 2024

Roll Number	
Candidate Name	
Venue Name	KSM Solutions
Exam Date	17/10/2024
Exam Time	12:30 PM - 2:30 PM
Subject	MTS Non Tech Havaladar CBIC and CBN Examination 2024

Section : Numerical and Mathematical Ability

Q.1 The diameter of a right circular cone is 56 metres and its slant height is 35 metres.
Find its volume (rounded off to the nearest integer). (Take $\pi = \frac{22}{7}$.)

- Ans
- ☒ 1. 28,747 m³
 - ☒ 2. 12,936 m³
 - ☒ 3. 17,248 m³
 - ☒ 4. 25,872 m³

Question Type : MCQ
Question ID : 630680387895
Option 1 ID : 6306801512204
Option 2 ID : 6306801512205
Option 3 ID : 6306801512203
Option 4 ID : 6306801512202
Status : Not Answered
Chosen Option : --

SSC MTS (Non Technical) EXAM STUDY KIT



FREE
SHIPPING 

- ▶ 100% SSC MTS Exam Syllabus Covered
- ▶ PRINTED Notes
- ▶ 8 Books, 700+ Pages
- ▶ 2500+ MCQs
- ▶ Practice Papers
- ▶ 1 Year Current Affairs

50%
OFF

 SSCPOTAL.IN

SSC MTS PDF NOTES

100% Syllabus Covered



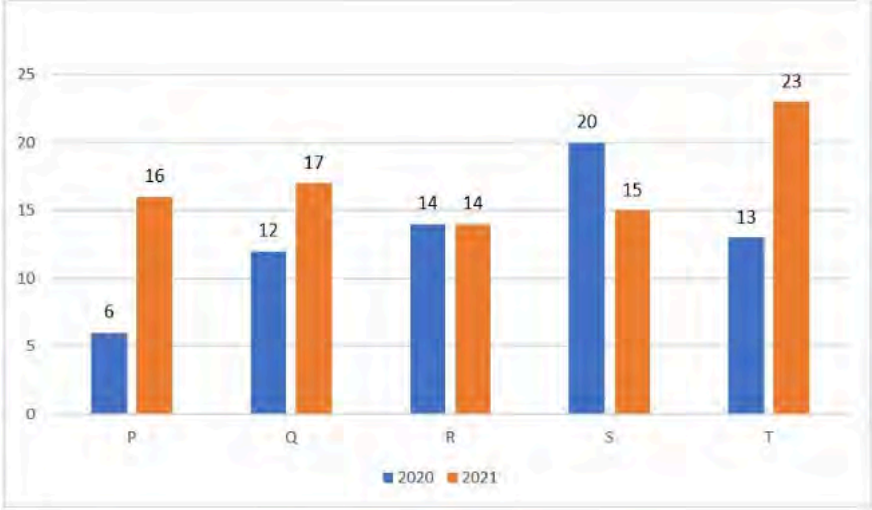
CLICK HERE

CLICK BELOW LINK TO DOWNLOAD PDF NOTES

<https://sscpportal.in/study-kit/mts>

<https://sscpportal.in/study-kit>

Q.2 The following graph represents the production of electric scooters (in thousands) for the years 2020 and 2021 from five manufacturers P, Q, R, S, and T.



The ratio of the average production by all manufacturers in 2021 to the average production by all manufacturers in 2020 is:

- Ans
- ☒ 1. 14 : 15
 - ☒ 2. 13 : 14
 - ☒ 3. 17 : 13
 - ☒ 4. 15 : 17

Question Type : MCQ
Question ID : 630680425425
Option 1 ID : 6306801659997
Option 2 ID : 6306801659995
Option 3 ID : 6306801659996
Option 4 ID : 6306801659998
Status : Answered
Chosen Option : 3

Q.3 Five athletes are weighed consecutively, and after each measurement, their average weight is calculated. If the average weight increases by 1.5 kg each time, then how much heavier is the last player than the first player?

- Ans
- ☒ 1. 15.5 kg
 - ☒ 2. 12 kg
 - ☒ 3. 10 kg
 - ☒ 4. 18 kg

Question Type : MCQ
Question ID : 630680456320
Option 1 ID : 6306801782253
Option 2 ID : 6306801782252
Option 3 ID : 6306801782251
Option 4 ID : 6306801782254
Status : Not Answered
Chosen Option : --

Q.4 It takes 15 seconds for a 375-m long train to pass a pole. How long will it take to pass a 975-m long platform?

- Ans ☒ 1. 60 seconds
☒ 2. 90 seconds
☒ 3. 54 seconds
☒ 4. 72 seconds

Question Type : MCQ
Question ID : 630680585096
Option 1 ID : 6306802289148
Option 2 ID : 6306802289146
Option 3 ID : 6306802289149
Option 4 ID : 6306802289147
Status : Answered
Chosen Option : 3

Q.5 What is the cost of a tadpole required to make a conical tent with slant height 15 m and height 9 m, when one square meter tadpole costs ₹147?

- Ans ☒ 1. Rs.49,896
☒ 2. Rs.83,160
☒ 3. Rs.62,370
☒ 4. Rs.67,842

Question Type : MCQ
Question ID : 630680110232
Option 1 ID : 630680427291
Option 2 ID : 630680427293
Option 3 ID : 630680427292
Option 4 ID : 630680427294
Status : Not Answered
Chosen Option : --

Q.6 A thief steals a bike at 10:30 am and drives it at 50 km/hr. But the thief is found after half an hour. The bike owner started to chase him by another bike at 60 km/hr. The time at which the thief is caught is:

- Ans ☒ 1. 12: 30 pm
☒ 2. 1: 00 pm
☒ 3. 2: 30 pm
☒ 4. 1: 30 pm

Question Type : MCQ
Question ID : 630680227108
Option 1 ID : 630680881123
Option 2 ID : 630680881126
Option 3 ID : 630680881124
Option 4 ID : 630680881125
Status : Answered
Chosen Option : 4

Q.7 Shankar comes to buy a T-shirt in a showroom. He purchases a shirt which costs ₹1,020 after a discount. He pays his bill in the form of 50 paise, 20 paise and 10 paise coins in the ratio 2 : 3 : 4 (assume for the sake of the problem). What is the number of 10 paise coins he used to pay his bill?

- Ans ☒ 1. 1020
☒ 2. 2040
☒ 3. 1530
☒ 4. 510

Question Type : MCQ

Question ID : 630680815865

Option 1 ID : 6306803196794

Option 2 ID : 6306803196796

Option 3 ID : 6306803196795

Option 4 ID : 6306803196793

Status : Answered

Chosen Option : 2

Q.8 The greatest number of four digits which is divisible by each one of the numbers 15, 25, 40 and 75 is:

- Ans ☒ 1. 9500
☒ 2. 9800
☒ 3. 9400
☒ 4. 9600

Question Type : MCQ

Question ID : 63068070931

Option 1 ID : 630680274335

Option 2 ID : 630680274337

Option 3 ID : 630680274336

Option 4 ID : 630680274334

Status : Answered

Chosen Option : 4

Q.9 Rakesh obtained a simple interest of ₹3,195 on a certain principal in 6 years at the rate of 15% per annum. What amount of simple interest would he get if he invested ₹1,250 more than the previous principal for 3 years at the same rate of interest?

- Ans ☒ 1. ₹2,255
☒ 2. ₹2,050
☒ 3. ₹2,160
☒ 4. ₹2,400

Question Type : MCQ

Question ID : 630680401024

Option 1 ID : 6306801563928

Option 2 ID : 6306801563927

Option 3 ID : 6306801563925

Option 4 ID : 6306801563926

Status : Not Answered

Chosen Option : --

Q. Find the gain percentage, given that Aditi sold her scooter for ₹40675 gaining $\frac{1}{5}$ th of the selling price.

Ans ☒ 1. 35%

☒ 2. 5%

☒ 3. 25%

☒ 4. 15%

Question Type : MCQ

Question ID : 630680931107

Option 1 ID : 6306803649236

Option 2 ID : 6306803649235

Option 3 ID : 6306803649234

Option 4 ID : 6306803649237

Status : Answered

Chosen Option : 3

Q.11 If the marked price of an article is $\frac{4}{3}$ times the cost price and the selling price is $\frac{9}{11}$ times the marked price, then what is the profit/loss percentage?

Ans ☒ 1. $9\frac{1}{11}\%$ profit

☒ 2. $9\frac{1}{2}\%$ loss

☒ 3. $9\frac{1}{11}\%$ loss

☒ 4. $9\frac{1}{2}\%$ profit

Question Type : MCQ

Question ID : 630680115639

Option 1 ID : 630680447907

Option 2 ID : 630680447908

Option 3 ID : 630680447906

Option 4 ID : 630680447909

Status : Answered

Chosen Option : 1

Q.12 A conical cavity is drilled in a solid circular cylinder of 7 cm height and 48 cm base diameter. The height and base diameter of the cone are the same as those of the cylinder. What is the total surface area of the remaining solid?

Ans ☒ 1. $1420\pi \text{ cm}^2$

☒ 2. $1654\pi \text{ cm}^2$

☒ 3. $1512\pi \text{ cm}^2$

☒ 4. $1076\pi \text{ cm}^2$

Question Type : MCQ

Question ID : 630680384353

Option 1 ID : 6306801498300

Option 2 ID : 6306801498298

Option 3 ID : 6306801498299

Option 4 ID : 6306801498301

Status : Not Answered

Chosen Option : --

Q.13 When the price of a laptop was reduced by 15%, its sales increased by 10%. What was the net effect on the sale?

- Ans ☒ 1. 3.5% increase
☒ 2. 3.5% decrease
☒ 3. 6.5% decrease
☒ 4. 6.5% increase

Question Type : MCQ
Question ID : 630680484338
Option 1 ID : 6306801891699
Option 2 ID : 6306801891701
Option 3 ID : 6306801891700
Option 4 ID : 6306801891698
Status : Answered
Chosen Option : 1

Q.14 The following table shows the number of students from five different schools who have participated in football and cricket.

School	Total Students	Percentage of Students Participating in:	
		Football	Cricket
A	660	15%	35%
B	800	23%	37%
C	600	30%	50%
D	500	35%	35%
E	1000	25%	30%

From which two schools have an equal percentage of students participated in cricket?

- Ans ☒ 1. B and D
☒ 2. A and D
☒ 3. Band C
☒ 4. C and E

Question Type : MCQ
Question ID : 630680523734
Option 1 ID : 6306802047090
Option 2 ID : 6306802047087
Option 3 ID : 6306802047089
Option 4 ID : 6306802047088
Status : Answered
Chosen Option : 2

Q.15 Find the simple interest (in ₹) on ₹2000 as a sum borrowed at 7% per year rate of interest for 6 years.

Ans ☒ 1. 840

☐ 2. 780

☐ 3. 800

☐ 4. 880

Question Type : MCQ

Question ID : 630680591877

Option 1 ID : 6306802315975

Option 2 ID : 6306802315977

Option 3 ID : 6306802315978

Option 4 ID : 6306802315976

Status : Answered

Chosen Option : 1

Q.16 The average age of a class of 39 students is 20 years. If the age of the teacher is included, then the average increases by 6 months. Find the age of the teacher (in years).

Ans ☐ 1. 30

☒ 2. 40

☐ 3. 50

☐ 4. 45

Question Type : MCQ

Question ID : 630680481014

Option 1 ID : 6306801878640

Option 2 ID : 6306801878641

Option 3 ID : 6306801878643

Option 4 ID : 6306801878642

Status : Answered

Chosen Option : 2

Q.17 In what proportion must a man mix milk worth ₹3.3/litre with milk worth ₹1.8/litre so that the mixture may be worth ₹2.4/litre?

Ans ☐ 1. 4 : 5

☒ 2. 2 : 3

☐ 3. 3 : 2

☐ 4. 1 : 3

Question Type : MCQ

Question ID : 630680410214

Option 1 ID : 6306801599632

Option 2 ID : 6306801599633

Option 3 ID : 6306801599631

Option 4 ID : 6306801599634

Status : Answered

Chosen Option : 2

Q.18 Find the simple interest (in ₹) on ₹2500 as a sum borrowed at 5% per year rate of interest for 3 years.

- Ans ☒ 1. 335
☒ 2. 415
☒ 3. 375
☒ 4. 315

Question Type : MCQ
Question ID : 630680591899
Option 1 ID : 6306802316066
Option 2 ID : 6306802316064
Option 3 ID : 6306802316063
Option 4 ID : 6306802316065
Status : Answered
Chosen Option : 3

Q.19 The average weight of a family of five members (in kg) whose weights are 40 kg, 49 kg, 56 kg, 71 kg and 38 kg is:

- Ans ☒ 1. 52.8
☒ 2. 49.8
☒ 3. 51.8
☒ 4. 50.8

Question Type : MCQ
Question ID : 630680551662
Option 1 ID : 6306802156876
Option 2 ID : 6306802156875
Option 3 ID : 6306802156874
Option 4 ID : 6306802156873
Status : Answered
Chosen Option : 4

Q.20 Ramesh purchased a piano, marked at ₹18,000 at a successive discounts of 12% and 15%, respectively. Ramesh gave ₹536 as transportation charge and sold it at ₹21,000. What is his gain percentage?

- Ans ☒ 1. 35%
☒ 2. 48%
☒ 3. 50%
☒ 4. 40%

Question Type : MCQ
Question ID : 630680395545
Option 1 ID : 6306801542344
Option 2 ID : 6306801542346
Option 3 ID : 6306801542347
Option 4 ID : 6306801542345
Status : Answered
Chosen Option : 3

Section : Reasoning Ability and Problem Solving

Q.1 17 is related to 119 following a certain logic. Following the same logic, 31 is related to 217. To which of the following is 32 related, following the same logic?

(NOTE : Operations should be performed on the whole numbers, without breaking down the numbers into its constituent digits. E.g. 13 – Operations on 13 such as adding / subtracting / multiplying, etc., to 13 can be performed. Breaking down 13 into 1 and 3 and then performing mathematical operations on 1 and 3 is not allowed.)

Ans ☒ 1. 226

☒ 2. 228

☒ 3. 230

☒ 4. 224

Question Type : MCQ

Question ID : 630680441695

Option 1 ID : 6306801724395

Option 2 ID : 6306801724396

Option 3 ID : 6306801724397

Option 4 ID : 6306801724394

Status : Answered

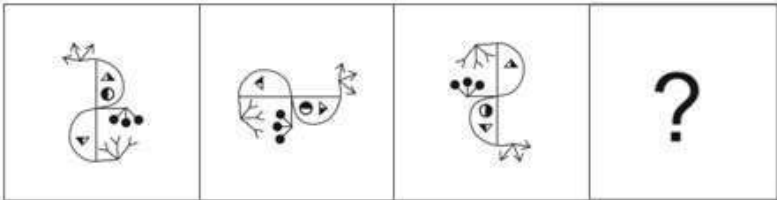
Chosen Option : 4



Download SSC CGL, CHSL E-BOOKS

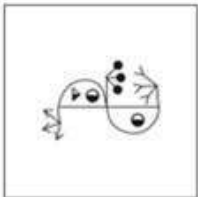
[CLICK HERE](#)

Q.2 Identify the figure given in the options which when put in place of ? will logically complete the series.

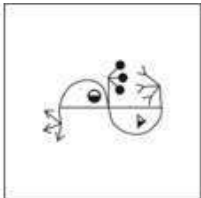


Ans


☒ 1.



☒ 2.



☒ 3.

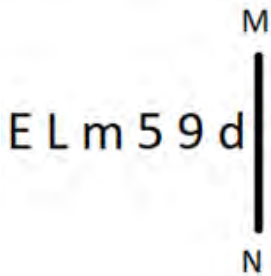


☒ 4.



Question Type : MCQ
Question ID : 630680280693
Option 1 ID : 6306801091007
Option 2 ID : 6306801091010
Option 3 ID : 6306801091009
Option 4 ID : 6306801091008
Status : Not Answered
Chosen Option : --

Q.3 Select the correct mirror image of the given figure when the mirror is placed at MN as shown below.



- Ans
- ☒ 1. b e s w 7 3
 - ☒ 2. b e 2 m 1 3
 - ☒ 3. b e 2 m 7 3
 - ☒ 4. 9 d 2 m 1 3

Question Type : MCQ
Question ID : 630680525238
Option 1 ID : 6306802053039
Option 2 ID : 6306802053038
Option 3 ID : 6306802053036
Option 4 ID : 6306802053037
Status : Answered
Chosen Option : 2

Q.4 What will come in the place of '?' in the following equation, if '+' and '-' are interchanged and 'x' and '÷' are interchanged?
 $14 \div 6 + 9 \times 3 - 2 = ?$

- Ans
- ☒ 1. 76
 - ☒ 2. 75
 - ☒ 3. 81
 - ☒ 4. 83

Question Type : MCQ
Question ID : 630680382166
Option 1 ID : 6306801489579
Option 2 ID : 6306801489582
Option 3 ID : 6306801489581
Option 4 ID : 6306801489580
Status : Answered
Chosen Option : 4

Q.5 A, B, C, D, E, F and G are sitting around a circular table facing the centre (but not necessarily in the same order).
Only one person sits between D and A when counted from the right of D. Only one person sits between A and B. Only one person sits between D and G. Only two people sit between E and B, when counted from the right of E. Only one person sits between F and G.
Who sits third to the right of C ?

- Ans** ☒ 1. D
☒ 2. A
☒ 3. F
☒ 4. B

Question Type : **MCQ**
Question ID : **630680411173**
Option 1 ID : **6306801603450**
Option 2 ID : **6306801603448**
Option 3 ID : **6306801603451**
Option 4 ID : **6306801603449**
Status : **Not Answered**
Chosen Option : --

Q.6 Select the set in which the numbers are related in the same way as are the numbers of the following sets.

(NOTE: Operations should be performed on the whole numbers, without breaking down the numbers into their constituent digits. E.g. 13 – Operations on 13 such as adding/subtracting/multiplying to 13 can be performed. Breaking down 13 into 1 and 3 and then performing mathematical operations on 1 and 3 is not allowed.)

(37, 58, 100)
(35, 70, 110)

- Ans** ☒ 1. (85, 75, 65)
☒ 2. (74, 33, 12)
☒ 3. (43, 44, 132)
☒ 4. (8, 13, 26)

Question Type : **MCQ**
Question ID : **6306801031222**
Option 1 ID : **6306804047640**
Option 2 ID : **6306804047642**
Option 3 ID : **6306804047641**
Option 4 ID : **6306804047639**
Status : **Answered**
Chosen Option : **4**

Q.7 Read the given statements and conclusions carefully. You have to take the given statements to be true even if they seem to be at variance from commonly known facts. You have to decide which conclusion/s logically follow/s from the given statements.

Statements:

All boxes are glasses. All glasses are cups. Some cups are bottles.

Conclusions:

(I): All boxes are cups.

(II): Some glasses are bottles.

- Ans ☒ 1. Both conclusions I and II follow.
- ☒ 2. Neither conclusion I nor II follows.
- ☒ 3. Only conclusion II follows.
- ☒ 4. Only conclusion I follows.

Question Type : MCQ
Question ID : 630680815656
Option 1 ID : 6306803195927
Option 2 ID : 6306803195928
Option 3 ID : 6306803195926
Option 4 ID : 6306803195925
Status : Answered
Chosen Option : 4

Q.8 IOZU is related to HNYT in a certain way based on the English alphabetical order. In the same way, PDYC is related to OCXB. To which of the following is EJSW related, following the same logic?

- Ans ☒ 1. DIRW
- ☒ 2. EIRV
- ☒ 3. DIRV
- ☒ 4. DJSV

Question Type : MCQ
Question ID : 630680911313
Option 1 ID : 6306803570173
Option 2 ID : 6306803570174
Option 3 ID : 6306803570176
Option 4 ID : 6306803570175
Status : Answered
Chosen Option : 3

Q.9 In a certain code, 'curtain door window' is coded as 'la ph ba', 'lock window key' is coded as 'ep zm la', 'key curtain handle' is coded as 'fd ba zm'. What is the code for 'curtain' in that language?(Note: All the codes are two-letter coded only.)

- Ans ☒ 1. zm
- ☒ 2. la
- ☒ 3. ba
- ☒ 4. ep

Question Type : MCQ
Question ID : 630680436137
Option 1 ID : 6306801702491
Option 2 ID : 6306801702490
Option 3 ID : 6306801702489
Option 4 ID : 6306801702492
Status : Answered
Chosen Option : 3

Q.10 What will come in place of the question mark (?) in the following equation, if '+' and '-' are interchanged and 'x' and '÷' are interchanged?
 $66 \times 6 - 15 \div 3 + 9 = ?$

- Ans ☒ 1. 49
☒ 2. 47
☒ 3. 48
☒ 4. 46

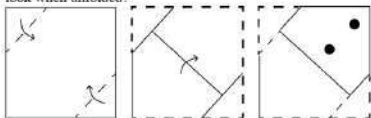
Question Type : MCQ
Question ID : 630680379458
Option 1 ID : 6306801478878
Option 2 ID : 6306801478876
Option 3 ID : 6306801478877
Option 4 ID : 6306801478875
Status : Answered
Chosen Option : 2

Q.11 A, D, K, N, Y and Z are sitting around a circular table facing the centre (but not necessarily in the same order). Z is sitting third to the right of D. K is not the immediate neighbour of Z. A is sitting second to the left of Z. N is not the immediate neighbour of A.
Who is the immediate neighbour of both between A and K?

- Ans ☒ 1. D
☒ 2. Y
☒ 3. N
☒ 4. Z


Question Type : MCQ
Question ID : 630680377862
Option 1 ID : 6306801472509
Option 2 ID : 6306801472507
Option 3 ID : 6306801472510
Option 4 ID : 6306801472508
Status : Not Answered
Chosen Option : --

Q.12 A square sheet of paper is folded along the dotted line successively along the directions shown and is then punched in the last. How would the paper look when unfolded?




Ans


☐ 1.




☒ 2.



☐ 3.



☐ 4.



Question Type : MCQ
Question ID : 630680524421
Option 1 ID : 6306802049786
Option 2 ID : 6306802049785
Option 3 ID : 6306802049784
Option 4 ID : 6306802049783
Status : Answered
Chosen Option : 2

Q.13 Read the given statements and conclusions carefully. Assuming that the information given in the statements is true, even if it appears to be at variance with commonly known facts, decide which of the given conclusions logically follow(s) from the statements.

Statements:
Some books are wood.
All wood is fire.

Conclusions:
(I) Some fire is wood.
(II) All books are fire.

- Ans ☒ 1. Both conclusions (I) and (II) follow
☒ 2. Only conclusion (II) follows
☒ 3. Neither conclusion (I) nor (II) follows
☒ 4. Only conclusion (I) follows

Question Type : MCQ
Question ID : 630680412053
Option 1 ID : 6306801607050
Option 2 ID : 6306801607048
Option 3 ID : 6306801607049
Option 4 ID : 6306801607047
Status : Answered
Chosen Option : 4

Q.14 What should come in place of the question mark (?) in the given series?

219 222 227 234 ? 254

- Ans ☒ 1. 243
☒ 2. 242
☒ 3. 244
☒ 4. 241

Question Type : MCQ
Question ID : 630680816802
Option 1 ID : 6306803206324
Option 2 ID : 6306803206323
Option 3 ID : 6306803206325
Option 4 ID : 6306803206322
Status : Answered
Chosen Option : 1

Q.15 What should come in place of the question mark (?) in the given series based on the English alphabetical order?

GJD ,IHH, KFL, MDP, ?

- Ans ☒ 1. PBT
☒ 2. PAT
☒ 3. OBS
☒ 4. OBT

Question Type : MCQ
Question ID : 630680815701
Option 1 ID : 6306803196107
Option 2 ID : 6306803196108
Option 3 ID : 6306803196106
Option 4 ID : 6306803196105
Status : Answered
Chosen Option : 4

SSC MTS (Non Technical) EXAM STUDY KIT



FREE
SHIPPING 

- ▶ 100% SSC MTS Exam Syllabus Covered
- ▶ PRINTED Notes
- ▶ 8 Books, 700+ Pages
- ▶ 2500+ MCQs
- ▶ Practice Papers
- ▶ 1 Year Current Affairs

50%
OFF

 SSCPOTAL.IN

SSC MTS PDF NOTES

100% Syllabus Covered



CLICK HERE

CLICK BELOW LINK TO DOWNLOAD PDF NOTES

<https://sscpportal.in/study-kit/mts>

<https://sscpportal.in/study-kit>

Q.16 In a certain code language, 'complete the task' is written as 'je tc xo' and 'work is complete' is coded as 'xo ig lx'. How is 'complete' coded in the given language?

- Ans ☒ 1. tc
☒ 2. je
☒ 3. lx
☒ 4. xo

Question Type : MCQ
Question ID : 630680509059
Option 1 ID : 6306801989534
Option 2 ID : 6306801989533
Option 3 ID : 6306801989535
Option 4 ID : 6306801989532
Status : Answered
Chosen Option : 4

Q.17 OT11 is related to PU15 in a certain way. In the same way, WB21 is related to XC25. To which of the following is DI31 related, following the same logic?

- Ans ☒ 1. DJ35
☒ 2. EJ35
☒ 3. EF53
☒ 4. EJ53

Question Type : MCQ
Question ID : 6306801108786
Option 1 ID : 6306804355691
Option 2 ID : 6306804355690
Option 3 ID : 6306804355692
Option 4 ID : 6306804355693
Status : Answered
Chosen Option : 2

Q.18 In a certain code language, 'this is book' is written as 'lo mo ro' and 'this is me' is written as 'mo lo po'. How is 'me' written in the given code language?

- Ans ☒ 1. lo
☒ 2. ro
☒ 3. mo
☒ 4. po

Question Type : MCQ
Question ID : 630680377762
Option 1 ID : 6306801472107
Option 2 ID : 6306801472109
Option 3 ID : 6306801472110
Option 4 ID : 6306801472108
Status : Answered
Chosen Option : 4

Q.19 Select the figure from among the given options that can replace the question mark (?) in the following series and complete the pattern.

☆		7		T		↑		
C	A	T	☆	C	A	A	7	☆
		O		T		C		☆

Ans

☒ 1.

A		
7	☆	T
		↑

☒ 2.

☆		
7	T	A
		↑

☒ 3.

☆		
7	↑	T
		A

☒ 4.

☆		
A	7	T
		↑

Question Type : MCQ
Question ID : 630680441088
Option 1 ID : 6306801722007
Option 2 ID : 6306801722006
Option 3 ID : 6306801722008
Option 4 ID : 6306801722009
Status : Answered
Chosen Option : 2

Q.20 In a certain code language, 'FITCH' is coded as '47601' and 'DITCH' is coded as '70619'. What is the code for 'D' in the given code language?

- Ans ☒ 1. 1
☒ 2. 7
☒ 3. 9
☒ 4. 0

Question Type : MCQ
Question ID : 630680377759
Option 1 ID : 6306801472096
Option 2 ID : 6306801472098
Option 3 ID : 6306801472097
Option 4 ID : 6306801472095
Status : Answered
Chosen Option : 3

Section : General Awareness

Q.1 Match the awardees who received the Sangeet Natak Akademi Amrit Award, 2022 in column A with their corresponding dance forms in column B.

Column A (Name of the Awardee)

- a. Padma Sharma
- b. Siba Prasad Das
- c. Thankamani Kutty
- d. Smita Rajeshbhai Shastri

Column B (Dance form)

- i. Chhau Dance
- ii. Bharatanatyam
- iii. Kathak
- iv. Kuchipudi

- Ans**
- ☒ 1. a-(ii), b-(iv), c-(iii), d-(i)
 - ☒ 2. a-(iii), b-(i), c-(ii), d-(iv)
 - ☒ 3. a-(iv), b-(iii), c-(i), d-(ii)
 - ☒ 4. a-(i), b-(ii), c-(iv), d-(iii)

Question Type : MCQ
Question ID : 630680511995
Option 1 ID : 6306802000952
Option 2 ID : 6306802000950
Option 3 ID : 6306802000953
Option 4 ID : 6306802000951
Status : Not Answered
Chosen Option : --

Q.2 'Bayalata' is a famous folk dance of which of the following Indian states?

- Ans**
- ☒ 1. Himachal Pradesh
 - ☒ 2. Bihar
 - ☒ 3. Punjab
 - ☒ 4. Karnataka

Question Type : MCQ
Question ID : 630680163285
Option 1 ID : 630680632347
Option 2 ID : 630680632346
Option 3 ID : 630680632345
Option 4 ID : 630680632344
Status : Answered
Chosen Option : 3

Q.3 In which year was the first session of the Indian National Congress held?

- Ans**
- ☒ 1. 1882
 - ☒ 2. 1886
 - ☒ 3. 1885
 - ☒ 4. 1887

Question Type : MCQ
Question ID : 630680214224
Option 1 ID : 630680830944
Option 2 ID : 630680830943
Option 3 ID : 630680830945
Option 4 ID : 630680830946
Status : Answered
Chosen Option : 3

Q.4 At what temperature do Celsius and Fahrenheit scales have the same value?

Ans

- ☐ 1. 40°C
- ☐ 2. 32°C
- ☐ 3. -32°C
- ☒ 4. -40°C

Question Type : MCQ

Question ID : 630680411213

Option 1 ID : 6306801603609

Option 2 ID : 6306801603611

Option 3 ID : 6306801603610

Option 4 ID : 6306801603608

Status : Answered

Chosen Option : 3

Q.5 In a laterite soil profile, which of the following elements is present in an excessive amount?

Ans

- ☐ 1. feldspar
- ☐ 2. Nitrogen
- ☐ 3. Lime
- ☒ 4. Iron

Question Type : MCQ

Question ID : 630680403391

Option 1 ID : 6306801573075

Option 2 ID : 6306801573076

Option 3 ID : 6306801573077

Option 4 ID : 6306801573074

Status : Answered

Chosen Option : 4

Q.6 What is the chemical reaction that occurs when sugar is heated and turns into a caramel syrup?

Ans

- ☐ 1. Precipitation
- ☐ 2. Neutralisation
- ☒ 3. Caramelisation
- ☐ 4. Maillard reaction

Question Type : MCQ

Question ID : 630680540603

Option 1 ID : 6306802113487

Option 2 ID : 6306802113488

Option 3 ID : 6306802113490

Option 4 ID : 6306802113489

Status : Answered

Chosen Option : 3

Q.7 Who among the following is known as the 'Mozart of Madras'?

- Ans ☒ 1. Shankar Mahadevan
☒ 2. MM Kreem
☒ 3. AR Rahman
☒ 4. Ilaiyaraaja

Question Type : MCQ
Question ID : 630680540643
Option 1 ID : 6306802113650
Option 2 ID : 6306802113648
Option 3 ID : 6306802113649
Option 4 ID : 6306802113647
Status : Not Answered
Chosen Option : --

Q.8 Devendra Fadnavis became the _____ of the state of Maharashtra on 30th June 2022.

- Ans ☒ 1. Chief Justice of High Court
☒ 2. Deputy Chief Minister
☒ 3. Governor
☒ 4. Chief Minister

Question Type : MCQ
Question ID : 630680468456
Option 1 ID : 6306801829625
Option 2 ID : 6306801829623
Option 3 ID : 6306801829624
Option 4 ID : 6306801829622
Status : Answered
Chosen Option : 2

Q.9 Which of the following States/Union Territories is NOT a part of Indus River Basin?

- Ans ☒ 1. Himachal Pradesh
☒ 2. Ladakh
☒ 3. Jammu and Kashmir
☒ 4. Sikkim

Question Type : MCQ
Question ID : 630680484524
Option 1 ID : 6306801892412
Option 2 ID : 6306801892410
Option 3 ID : 6306801892411
Option 4 ID : 6306801892413
Status : Answered
Chosen Option : 4

Q.10 The Fundamental Rights Sub-Committee of the Constituent Assembly was headed by

- Ans ☒ 1. Harnam Singh
☒ 2. Alladi Krishnaswami Ayyar
☒ 3. JB Kripalani
☒ 4. Jawaharlal Nehru

Question Type : MCQ
Question ID : 630680735741
Option 1 ID : 6306802883682
Option 2 ID : 6306802883681
Option 3 ID : 6306802883680
Option 4 ID : 6306802883683
Status : Answered
Chosen Option : 3

Q.11 In which of the following months is the Konark Dance festival organised in Odisha?

- Ans ☒ 1. March
☒ 2. June
☒ 3. January
☒ 4. December

Question Type : MCQ
Question ID : 630680403386
Option 1 ID : 6306801573055
Option 2 ID : 6306801573056
Option 3 ID : 6306801573054
Option 4 ID : 6306801573057
Status : Not Answered
Chosen Option : --

Q.12 The Hathigumpha Inscription was inscribed in which of the following historical regions of India?

- Ans ☒ 1. Kalinga
☒ 2. Vaishali
☒ 3. Taxila
☒ 4. Suvarnagiri

Question Type : MCQ
Question ID : 630680176026
Option 1 ID : 630680682354
Option 2 ID : 630680682355
Option 3 ID : 630680682352
Option 4 ID : 630680682353
Status : Not Answered
Chosen Option : --

Q.13 The transportation mechanism in cells by which food or other useful molecules from the outside are carried inside the cell is known as _____.

- Ans ☒ 1. Endocytosis
- ☒ 2. Osmosis
- ☒ 3. Exocytosis
- ☒ 4. Fusion

Question Type : MCQ
Question ID : 630680544091
Option 1 ID : 6306802127141
Option 2 ID : 6306802127140
Option 3 ID : 6306802127139
Option 4 ID : 6306802127138
Status : Answered
Chosen Option : 4

Q.14 Where does the cash grants in aid from foreign countries are classified?

- Ans ☒ 1. Non-tax revenue
- ☒ 2. Capital receipt
- ☒ 3. Tax revenue
- ☒ 4. Revenue expenditure

Question Type : MCQ
Question ID : 63068082806
Option 1 ID : 630680321090
Option 2 ID : 630680321089
Option 3 ID : 630680321088
Option 4 ID : 630680321091
Status : Answered
Chosen Option : 2

Q.15 Sachin Tendulkar scored his 100th international century against which country?

- Ans ☒ 1. Australia
- ☒ 2. England
- ☒ 3. Bangladesh
- ☒ 4. Pakistan

Question Type : MCQ
Question ID : 630680430530
Option 1 ID : 6306801680145
Option 2 ID : 6306801680148
Option 3 ID : 6306801680146
Option 4 ID : 6306801680147
Status : Answered
Chosen Option : 2

Q.16 Which of the following para athletes is associated with the javelin throw event?

- Ans ☒ 1. Sharad Kumar
☒ 2. Devendra Jhajharia
☒ 3. Pramod Bhagat
☒ 4. Karamjyoti Dalal

Question Type : MCQ
Question ID : 630680571110
Option 1 ID : 6306802233493
Option 2 ID : 6306802233492
Option 3 ID : 6306802233495
Option 4 ID : 6306802233494
Status : Answered
Chosen Option : 2

Q.17 When was 'Nai Chetna-Pahal Badlav Ki' campaign launched?

- Ans ☒ 1. November 2022
☒ 2. December 2022
☒ 3. January 2023
☒ 4. March 2023

Question Type : MCQ
Question ID : 630680465526
Option 1 ID : 6306801818141
Option 2 ID : 6306801818142
Option 3 ID : 6306801818140
Option 4 ID : 6306801818139
Status : Not Answered
Chosen Option : --

Q.18 What is the full form of INSAT?

- Ans ☒ 1. Indian Navigational Satellite System
☒ 2. International Navigation Satellite System
☒ 3. Indian National Standard System
☒ 4. Indian National Satellite System

Question Type : MCQ
Question ID : 630680482409
Option 1 ID : 6306801884131
Option 2 ID : 6306801884133
Option 3 ID : 6306801884130
Option 4 ID : 6306801884132
Status : Answered
Chosen Option : 4

Q.19 Under the influence of the Greeks, which of the following art styles flourished in India?

- Ans ☒ 1. Gandhar
- ☒ 2. Mathura
- ☒ 3. Amravati
- ☒ 4. Kandhar

Question Type : MCQ
Question ID : 630680616112
Option 1 ID : 6306802411153
Option 2 ID : 6306802411150
Option 3 ID : 6306802411151
Option 4 ID : 6306802411152
Status : Not Answered
Chosen Option : --

Q.20 National Urban Livelihood Mission (NULM) was launched in which of the following Five Year plans?

- Ans ☒ 1. Tenth Five Year Plan
- ☒ 2. Sixth Five Year Plan
- ☒ 3. Eighth Five Year Plan
- ☒ 4. Twelfth Five Year Plan


Question Type : MCQ
Question ID : 630680711120
Option 1 ID : 6306802786138
Option 2 ID : 6306802786136
Option 3 ID : 6306802786137
Option 4 ID : 6306802786139
Status : Not Answered
Chosen Option : --


Q.21 According to Census 2011 of India, which Union Territory has the second highest percentage of urban population?


- Ans ☒ 1. Daman and Diu
- ☒ 2. Delhi
- ☒ 3. Chandigarh
- ☒ 4. Puducherry


Question Type : MCQ
Question ID : 630680304956
Option 1 ID : 6306801186376
Option 2 ID : 6306801186373
Option 3 ID : 6306801186374
Option 4 ID : 6306801186375
Status : Answered
Chosen Option : 4

Q.22 'Unbreakable' is an autobiography of _____ published in 2013.

Ans  1. Abhinav Bindra

 2. MC Mary Kom

 3. Milkha Singh

 4. Geeta Phogat

Question Type : MCQ

Question ID : 630680798915

Option 1 ID : 6306803130466

Option 2 ID : 6306803130469


Option 3 ID : 6306803130467


Option 4 ID : 6306803130468


Status : Answered


Chosen Option : 2

Q.23 Which of the following events took place in the year 1928?

Ans  1. Kakori Incident

 2. Bardoli Satyagraha

 3. Kheda Satyagraha

 4. Dandi March

Question Type : MCQ

Question ID : 630680511612

Option 1 ID : 6306801999573

Option 2 ID : 6306801999571


Option 3 ID : 6306801999570


Option 4 ID : 6306801999572


Status : Answered


Chosen Option : 2

Q.24 As per the treaty of Purandar, how many forts were surrendered by Shivaji to Mughals?

Ans  1. 23

 2. 18

 3. 11

 4. 35

Question Type : MCQ

Question ID : 630680326302

Option 1 ID : 6306801269298

Option 2 ID : 6306801269299

Option 3 ID : 6306801269300

Option 4 ID : 6306801269297

Status : Answered

Chosen Option : 1

Q.25 The number of Rajya Sabha members to be elected from each State of India has been fixed by the _____ Schedule of the Constitution.

- Ans ☒ 1. Sixth
☒ 2. Eighth
☒ 3. Third
☒ 4. Fourth

Question Type : MCQ
Question ID : 630680754984
Option 1 ID : 6306802959127
Option 2 ID : 6306802959126
Option 3 ID : 6306802959125
Option 4 ID : 6306802959124
Status : Answered
Chosen Option : 4

Section : English Language and Comprehension

Q.1 Select the most appropriate option to fill in the blank.
In order to maintain good governance, every government servant must be held _____ for his/her decisions.

- Ans ☒ 1. irresponsible
☒ 2. accountable
☒ 3. unaccountable
☒ 4. flexible

Question Type : MCQ
Question ID : 630680515146
Option 1 ID : 6306802013092
Option 2 ID : 6306802013090
Option 3 ID : 6306802013089
Option 4 ID : 6306802013091
Status : Answered
Chosen Option : 2

Q.2 Select the most appropriate ANTONYM that can substitute the underlined segment in the given sentence.

The team was gradually realising that the social gatherings were draining.

- Ans ☒ 1. absorbing
☒ 2. flippant
☒ 3. unfruitful
☒ 4. frivolous

Question Type : MCQ
Question ID : 630680799097
Option 1 ID : 6306803131188
Option 2 ID : 6306803131189
Option 3 ID : 6306803131186
Option 4 ID : 6306803131187
Status : Answered
Chosen Option : 4

Q.3 Select the most appropriate ANTONYM of the highlighted word in the given sentence.
The author's writing style is characterised by a subtle and nuanced use of language.

- Ans ☒ 1. Elaborate
☒ 2. Elegant
☒ 3. Delicate
☒ 4. Sturdy

Question Type : MCQ
Question ID : 630680549428
Option 1 ID : 6306802148161
Option 2 ID : 6306802148163
Option 3 ID : 6306802148164
Option 4 ID : 6306802148162
Status : Answered
Chosen Option : 4

Q.4 Select the INCORRECTLY spelt word in the given sentence.

Many biologists have stated the fact that most of the herbs are perinnial and have healing qualities with added flavour.

- Ans ☒ 1. Biologists
☒ 2. Healing
☒ 3. Perinnial
☒ 4. Qualities

Question Type : MCQ
Question ID : 630680531832
Option 1 ID : 6306802079105
Option 2 ID : 6306802079106
Option 3 ID : 6306802079104
Option 4 ID : 6306802079107
Status : Answered
Chosen Option : 3

Q.5 The following sentence has been split into four segments. Identify the segment that contains a grammatical error.
In addition with / the existing crisis in economy, / the rise of hunger index / is another cause of worry.

- Ans ☒ 1. In addition with
☒ 2. the rise of hunger index
☒ 3. the existing crisis in economy
☒ 4. is another cause of worry

Question Type : MCQ
Question ID : 630680192932
Option 1 ID : 630680748273
Option 2 ID : 630680748275
Option 3 ID : 630680748274
Option 4 ID : 630680748276
Status : Answered
Chosen Option : 4

Q.6 Select the most appropriate option to fill in the blank.
The inclusion of Durga Puja in the UNESCO's list of Intangible Cultural Heritage was only possible due to the arduous _____ of all stakeholders.

- Ans** ☒ 1. efforts
☐ 2. passivity
☐ 3. affects
☐ 4. ignorance

Question Type : **MCQ**
Question ID : **630680515247**
Option 1 ID : **6306802013456**
Option 2 ID : **6306802013455**
Option 3 ID : **6306802013454**
Option 4 ID : **6306802013453**
Status : **Answered**
Chosen Option : **1**

Q.7 The following sentence has been split into four segments. Identify the segment that contains a grammatical error.

My sister Mona / never drinks coffee; / she prefer tea / in the morning.

- Ans** ☐ 1. in the morning
☒ 2. she prefer tea
☐ 3. never drinks coffee;
☐ 4. My sister Mona

Question Type : **MCQ**
Question ID : **630680533289**
Option 1 ID : **6306802084640**
Option 2 ID : **6306802084639**
Option 3 ID : **6306802084638**
Option 4 ID : **6306802084637**
Status : **Answered**
Chosen Option : **2**

Q.8 Select the **INCORRECTLY** spelt word.

- Ans** ☒ 1. Machinery
☐ 2. Motto
☐ 3. Idol
☐ 4. Hymn

Question Type : **MCQ**
Question ID : **630680624155**
Option 1 ID : **6306802442767**
Option 2 ID : **6306802442768**
Option 3 ID : **6306802442769**
Option 4 ID : **6306802442766**
Status : **Answered**
Chosen Option : **2**

Q.9 The following sentence has been split into four segments. Identify the segment that contains a grammatical error.
Most probably, / he come / to office / next Tuesday.

- Ans** ☒ 1. next Tuesday
☒ 2. most probably
☒ 3. to office
☒ 4. he come

Question Type : **MCQ**
Question ID : **630680156562**
Option 1 ID : **630680605907**
Option 2 ID : **630680605904**
Option 3 ID : **630680605906**
Option 4 ID : **630680605905**
Status : **Answered**
Chosen Option : **4**

Q.10 Select the option that will improve the underlined part of the given sentence.

The bishop sadly declared that the poor gentleman who was dead was quieter of the community.

- Ans** ☒ 1. most quiet
☒ 2. the quietest
☒ 3. quiet
☒ 4. the quieter

Question Type : **MCQ**
Question ID : **630680419724**
Option 1 ID : **6306801637393**
Option 2 ID : **6306801637396**
Option 3 ID : **6306801637394**
Option 4 ID : **6306801637395**
Status : **Answered**
Chosen Option : **3**

Q.11 Select the **INCORRECTLY** spelt word in the given sentence.
The neighbour came in disgoise and attacked her children.

- Ans** ☒ 1. attacked
☒ 2. disgoise
☒ 3. children
☒ 4. neighbour

Question Type : **MCQ**
Question ID : **6306801106838**
Option 1 ID : **6306804347817**
Option 2 ID : **6306804347816**
Option 3 ID : **6306804347819**
Option 4 ID : **6306804347818**
Status : **Answered**
Chosen Option : **2**

Q.12 Select the most appropriate option that can substitute the underlined word in the given sentence.

Reduced price of cooking gas brought happy to the face of every citizen.

- Ans
- ☒ 1. happiest
 - ☒ 2. happily
 - ☒ 3. happier
 - ☒ 4. happiness

Question Type : MCQ

Question ID : 630680542602

Option 1 ID : 6306802121340

Option 2 ID : 6306802121338

Option 3 ID : 6306802121339

Option 4 ID : 6306802121337

Status : Answered

Chosen Option : 4

Q.13 Select the most appropriate option that can substitute the underlined segment in the given sentence. If there is no need to substitute it, select 'No substitution required'.

Rishi Sunak, the Prime Minister of the United Kingdom and Leader of the Conservative Party, was born into Southampton to parents of Indian descent who immigrated to Britain from East Africa in the 1960s.

- Ans
- ☒ 1. was born in
 - ☒ 2. was born on
 - ☒ 3. No substitution required
 - ☒ 4. was born with

Question Type : MCQ

Question ID : 630680798897

Option 1 ID : 6306803130396

Option 2 ID : 6306803130394

Option 3 ID : 6306803130397

Option 4 ID : 6306803130395

Status : Answered

Chosen Option : 1

Q.14 Select the option that will improve the underlined part of the given sentence.

The moment James saw Regena, he fell head on to his heels in love with her.

- Ans
- ☒ 1. heels of the head
 - ☒ 2. head over heels
 - ☒ 3. head and heels
 - ☒ 4. heads in the heels

Question Type : MCQ

Question ID : 63068064347

Option 1 ID : 630680248374

Option 2 ID : 630680248376

Option 3 ID : 630680248377

Option 4 ID : 630680248375

Status : Answered

Chosen Option : 2

Q.15 Select the most appropriate meaning of the given idiom.
Beat around the bush

- Ans ☒ 1. To speak rashly
- ☒ 2. To avoid getting to the point of an issue
- ☒ 3. To speak convincingly
- ☒ 4. To speak abusively

Question Type : **MCQ**
Question ID : **630680413895**
Option 1 ID : **6306801614424**
Option 2 ID : **6306801614423**
Option 3 ID : **6306801614426**
Option 4 ID : **6306801614425**
Status : **Answered**
Chosen Option : **2**

Q.16 Select the most appropriate ANTONYM of the bracketed word to fill in the blank.

The rainbow arched gracefully across the sky, painting it in _____ (lifeless) hues.

- Ans ☒ 1. muted
- ☒ 2. vibrant
- ☒ 3. spiritual
- ☒ 4. ashless

Question Type : **MCQ**
Question ID : **630680799114**
Option 1 ID : **6306803131255**
Option 2 ID : **6306803131254**
Option 3 ID : **6306803131256**
Option 4 ID : **6306803131257**
Status : **Answered**
Chosen Option : **2**

Q.17 Select the most appropriate ANTONYM of the given word.

Pacify

- Ans ☒ 1. Restore
- ☒ 2. Negate
- ☒ 3. Enrage
- ☒ 4. Amuse

Question Type : **MCQ**
Question ID : **630680562979**
Option 1 ID : **6306802200872**
Option 2 ID : **6306802200870**
Option 3 ID : **6306802200871**
Option 4 ID : **6306802200869**
Status : **Answered**
Chosen Option : **3**

Q.18 Read the following sentence and select its future tense form from the following options.

The food company promoted newly launched products at affordable prices.

- Ans ☒ 1. The food company is promoting newly launched products at affordable prices.
☒ 2. The food company will be promoting newly launched products at affordable prices.
☐ 3. The food company promotes newly launched products at affordable prices.
☐ 4. The food company had promoted newly launched products at affordable prices.

Question Type : MCQ
Question ID : 6306801106302
Option 1 ID : 6306804345638
Option 2 ID : 6306804345641
Option 3 ID : 6306804345639
Option 4 ID : 6306804345640
Status : Answered
Chosen Option : 2

Q.19 Select the most appropriate adverb to fill in the blank.

The explorers trekked _____ through the dense jungle.

- Ans ☒ 1. bravely
☐ 2. before
☐ 3. rarely
☐ 4. ever

Question Type : MCQ
Question ID : 630680729323
Option 1 ID : 6306802857978
Option 2 ID : 6306802857977
Option 3 ID : 6306802857976
Option 4 ID : 6306802857979
Status : Answered
Chosen Option : 1

Q.20 Select the most appropriate ANTONYM of the given word.
Delay

- Ans ☒ 1. Hasten
☐ 2. Lag
☐ 3. Intervene
☐ 4. Wait

Question Type : MCQ
Question ID : 630680403039
Option 1 ID : 6306801571728
Option 2 ID : 6306801571727
Option 3 ID : 6306801571729
Option 4 ID : 6306801571730
Status : Answered
Chosen Option : 1

Comprehension:

In the following passage, some words have been deleted. Read the passage carefully and select the most appropriate option to fill in each blank.

We're a society fixated on numbers. So, it's no (1)_____ we use measurements and equations to score our weight. The most (2)_____ is BMI, a measure of our body weight to height ratio. BMI (3)_____ bodies as underweight, normal or healthy weight, overweight or obese and can be a useful tool for weight and health (4)_____. But it shouldn't be used as the single (5)_____ of what it means to be a healthy weight when we set our weight loss goals.

SubQuestion No : 21

Q.21 Select the most appropriate option to fill in blank number 1.

- Ans ☒ 1. surprise
☐ 2. vibrance
☐ 3. persistence
☐ 4. resolution

Question Type : MCQ

Question ID : 630680615438

Option 1 ID : 6306802408450

Option 2 ID : 6306802408451

Option 3 ID : 6306802408453

Option 4 ID : 6306802408452

Status : Answered

Chosen Option : 1

Comprehension:

In the following passage, some words have been deleted. Read the passage carefully and select the most appropriate option to fill in each blank.

We're a society fixated on numbers. So, it's no (1)_____ we use measurements and equations to score our weight. The most (2)_____ is BMI, a measure of our body weight to height ratio. BMI (3)_____ bodies as underweight, normal or healthy weight, overweight or obese and can be a useful tool for weight and health (4)_____. But it shouldn't be used as the single (5)_____ of what it means to be a healthy weight when we set our weight loss goals.

SubQuestion No : 22

Q.22 Select the most appropriate option to fill in blank number 2.

- Ans ☐ 1. uncharted
☐ 2. indistinct
☐ 3. imprecise
☒ 4. popular

Question Type : MCQ

Question ID : 630680615439

Option 1 ID : 6306802408454

Option 2 ID : 6306802408457

Option 3 ID : 6306802408455

Option 4 ID : 6306802408456

Status : Answered

Chosen Option : 4

Comprehension:

In the following passage, some words have been deleted. Read the passage carefully and select the most appropriate option to fill in each blank.

We're a society fixated on numbers. So, it's no (1)_____ we use measurements and equations to score our weight. The most (2)_____ is BMI, a measure of our body weight to height ratio. BMI (3)_____ bodies as underweight, normal or healthy weight, overweight or obese and can be a useful tool for weight and health (4)_____. But it shouldn't be used as the single (5)_____ of what it means to be a healthy weight when we set our weight loss goals.

SubQuestion No : 23

Q.23 Select the most appropriate option to fill in blank number 3.

- Ans ☒ 1. speculates
☒ 2. meanders
☒ 3. dissuades
☒ 4. classifies

Question Type : MCQ

Question ID : 630680615440

Option 1 ID : 6306802408459

Option 2 ID : 6306802408460

Option 3 ID : 6306802408458

Option 4 ID : 6306802408461

Status : Answered

Chosen Option : 4

Comprehension:

In the following passage, some words have been deleted. Read the passage carefully and select the most appropriate option to fill in each blank.

We're a society fixated on numbers. So, it's no (1)_____ we use measurements and equations to score our weight. The most (2)_____ is BMI, a measure of our body weight to height ratio. BMI (3)_____ bodies as underweight, normal or healthy weight, overweight or obese and can be a useful tool for weight and health (4)_____. But it shouldn't be used as the single (5)_____ of what it means to be a healthy weight when we set our weight loss goals.

SubQuestion No : 24

Q.24 Select the most appropriate option to fill in blank number 4.

- Ans ☒ 1. screening
☒ 2. landing
☒ 3. hastening
☒ 4. planting

Question Type : MCQ

Question ID : 630680615441

Option 1 ID : 6306802408464

Option 2 ID : 6306802408462

Option 3 ID : 6306802408465

Option 4 ID : 6306802408463

Status : Answered

Chosen Option : 1

SSC MTS (Non Technical) EXAM STUDY KIT



FREE
SHIPPING 

- ▶ 100% SSC MTS Exam Syllabus Covered
- ▶ PRINTED Notes
- ▶ 8 Books, 700+ Pages
- ▶ 2500+ MCQs
- ▶ Practice Papers
- ▶ 1 Year Current Affairs

50%
OFF

 SSCPOTAL.IN

SSC MTS PDF NOTES

100% Syllabus Covered



CLICK HERE

CLICK BELOW LINK TO DOWNLOAD PDF NOTES

<https://sscpportal.in/study-kit/mts>

<https://sscpportal.in/study-kit>

Comprehension:

In the following passage, some words have been deleted. Read the passage carefully and select the most appropriate option to fill in each blank.

We're a society fixated on numbers. So, it's no (1)_____ we use measurements and equations to score our weight. The most (2)_____ is BMI, a measure of our body weight to height ratio. BMI (3)_____ bodies as underweight, normal or healthy weight, overweight or obese and can be a useful tool for weight and health (4)_____. But it shouldn't be used as the single (5)_____ of what it means to be a healthy weight when we set our weight loss goals.

SubQuestion No : 25

Q.25 Select the most appropriate option to fill in blank number 5.

Ans  1. measure

 2. serendipity

 3. evanesce

 4. wobble

Question Type : MCQ

Question ID : 630680615442

Option 1 ID : 6306802408467

Option 2 ID : 6306802408468

Option 3 ID : 6306802408469

Option 4 ID : 6306802408466

Status : Answered

Chosen Option : 4