

Multi Tasking Non Technical Staff and Havaladar CBIC and CBN Examination 2024

Roll Number	
Candidate Name	
Venue Name	Indian Institute Of Computer Education - CENTER 2
Exam Date	15/10/2024
Exam Time	4:00 PM - 5:30 PM
Subject	MTS Non Tech Havaladar CBIC and CBN Examination 2024

Section : Numerical and Mathematical Ability

Q.1 A thief is spotted by a policeman at a distance of 300 m. the policeman chases the thief at speed of 10 km/h and the thief is running at a speed of 11 km/h, then the distance between them after 12 minutes is:

- Ans ☒ 1. 200 m
☒ 2. 500 m
☒ 3. 250 m
☒ 4. 100 m

Question Type : MCQ
Question ID : 630680135790
Option 1 ID : 630680525879
Option 2 ID : 630680525881
Option 3 ID : 630680525880
Option 4 ID : 630680525878
Status : Marked For Review
Chosen Option : 4

Q.2 Find the simple interest (in ₹) on ₹2000 as a sum borrowed at 7% per year rate of interest for 2 years.

- Ans ☒ 1. 320
☒ 2. 240
☒ 3. 220
☒ 4. 280

Question Type : MCQ
Question ID : 630680591873
Option 1 ID : 6306802315960
Option 2 ID : 6306802315962
Option 3 ID : 6306802315961
Option 4 ID : 6306802315959
Status : Answered
Chosen Option : 4

Q.3 A solid metallic sphere of radius 15 cm is melted and recast into solid spherical balls of radius 3 cm each. What is the ratio of the surface area of the original sphere to the sum of the surface areas of all the balls?

Ans ☒ 1. 1 : 5

☐ 2. 2 : 7

☐ 3. 3 : 8

☐ 4. 1 : 3

Question Type : MCQ

Question ID : 630680526647

Option 1 ID : 6306802058654

Option 2 ID : 6306802058655

Option 3 ID : 6306802058656

Option 4 ID : 6306802058657

Status : Marked For Review

Chosen Option : 1

Q.4 The marked price of an article is ₹1,500 and it is sold at a discount of 19%. If there is a gain of 8%, then by what per cent above the cost price was the article marked?

Ans ☒ 1. $33\frac{1}{3}\%$

☐ 2. $29\frac{1}{3}\%$

☐ 3. $36\frac{1}{3}\%$

☐ 4. $31\frac{1}{3}\%$

Question Type : MCQ

Question ID : 630680422107

Option 1 ID : 6306801646865

Option 2 ID : 6306801646863

Option 3 ID : 6306801646866

Option 4 ID : 6306801646864

Status : Answered

Chosen Option : 2

SSC MTS (Non Technical) EXAM STUDY KIT



FREE
SHIPPING 

- ▶ 100% SSC MTS Exam Syllabus Covered
- ▶ PRINTED Notes
- ▶ 8 Books, 700+ Pages
- ▶ 2500+ MCQs
- ▶ Practice Papers
- ▶ 1 Year Current Affairs

50%
OFF

 SSCPOTAL.IN

SSC MTS PDF NOTES

100% Syllabus Covered



50%
OFF

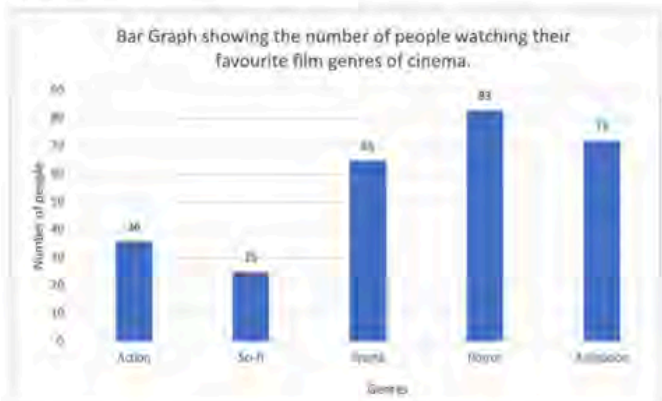
CLICK HERE

CLICK BELOW LINK TO DOWNLOAD PDF NOTES

<https://sscportal.in/study-kit/mts>

<https://sscportal.in/study-kit>

Q.5 The bar graph below shows the number of people watching films of their favourite genres.



The number of people watching Action, Sci-fi and Animation films is what percentage (rounded off to the nearest integer) of the number of people watching Drama and Horror films?

- Ans ☒ 1. 90%
- ☒ 2. 87%
- ☒ 3. 93%
- ☒ 4. 89%

Question Type : MCQ
Question ID : 630680523716
Option 1 ID : 6306802047015
Option 2 ID : 6306802047018
Option 3 ID : 6306802047017
Option 4 ID : 6306802047016
Status : Answered
Chosen Option : 2

Q.6 As part of the partial work from home process, Amita went to office every 2nd day, Amrita went to office every 3rd day, and Tosita went to office every 6th day, respectively. All three went to office on 31 October 2021. On how many days did all three attend office on the same date during the remaining two months of the year?

- Ans ☒ 1. 10
- ☒ 2. 12
- ☒ 3. 9
- ☒ 4. 11

Question Type : MCQ
Question ID : 630680104262
Option 1 ID : 630680405264
Option 2 ID : 630680405266
Option 3 ID : 630680405263
Option 4 ID : 630680405265
Status : Answered
Chosen Option : 1

Q.7 Find the simple interest on ₹3,500 at 15% per annum for 5 years.

- Ans ☒ 1. ₹2,675
☒ 2. ₹2,700
☒ 3. ₹2,625
☒ 4. ₹2,650

Question Type : MCQ
Question ID : 630680426372
Option 1 ID : 6306801663583
Option 2 ID : 6306801663584
Option 3 ID : 6306801663581
Option 4 ID : 6306801663582
Status : Answered
Chosen Option : 3

Q.8 Study the given table and answer the question that follows.
The given table shows the number of different types of batteries (numbers in lakhs) sold by a company over the years.

Year	Types of Batteries			
	7AH	32AH	35AH	55AH
2010	75	112	110	90
2011	82	100	130	120
2012	60	135	128	145
2013	85	165	112	162

The total number of all types of batteries sold in 2013 is what percentage more or less (rounded off to the nearest integer) than the total number of all types of batteries sold in 2011?

- Ans ☒ 1. Less, 21%
☒ 2. Less, 24%
☒ 3. More, 21%
☒ 4. More, 24%

Question Type : MCQ
Question ID : 630680523748
Option 1 ID : 6306802047144
Option 2 ID : 6306802047146
Option 3 ID : 6306802047143
Option 4 ID : 6306802047145
Status : Answered
Chosen Option : 3

Q.9 A student's final grade is determined by their final examination scores (weighted at 60%) and a final project score (weighted at 40%). If the student scores 75 in the final examination and 90 in the project, then the final grade of the student is:

- Ans ☒ 1. 82.5
☒ 2. 81.5
☒ 3. 81
☒ 4. 82

Question Type : MCQ
Question ID : 630680481526
Option 1 ID : 6306801880599
Option 2 ID : 6306801880597
Option 3 ID : 6306801880596
Option 4 ID : 6306801880598
Status : Answered
Chosen Option : 3

Q.10 A trader sells 25 kg of rice at ₹1,400. A customer asks for 15% discount. The shopkeeper agrees to it but instead of 1 kg he gives 10% less rice. What is the effective discount that the customer gets (correct to one decimal place)?

- Ans ☒ 1. 5.1%
☒ 2. 5.7%
☒ 3. 5.6%
☒ 4. 5.8%

Question Type : MCQ
Question ID : 630680115648
Option 1 ID : 630680447942
Option 2 ID : 630680447943
Option 3 ID : 630680447944
Option 4 ID : 630680447945
Status : Answered
Chosen Option : 1

Q.11 The average weight of a family of five members (in kg) whose weights are 40 kg, 49 kg, 56 kg, 67 kg and 38 kg is:

- Ans ☒ 1. 52
☒ 2. 51
☒ 3. 50
☒ 4. 49

Question Type : MCQ
Question ID : 630680551642
Option 1 ID : 6306802156796
Option 2 ID : 6306802156794
Option 3 ID : 6306802156793
Option 4 ID : 6306802156795
Status : Answered
Chosen Option : 3

Q.12 The ratio of the incomes of Rama and Ganga is 4 : 3 and the ratio of their expenditures is 3 : 2. If each person saves ₹2,700, then find their expenditures, respectively.

- Ans
- ☒ 1. ₹8,000 and ₹5,400
 - ☒ 2. ₹8,100 and ₹5,400
 - ☒ 3. ₹8,000 and ₹5,000
 - ☒ 4. ₹8,100 and ₹5,000

Question Type : MCQ

Question ID : 630680565487

Option 1 ID : 6306802210908

Option 2 ID : 6306802210907

Option 3 ID : 6306802210909

Option 4 ID : 6306802210906

Status : Answered

Chosen Option : 1

Q.13 The ratio of the base radii of two cylinders is 5 : 6 and the ratio of their corresponding heights is 49 : 36. Find the ratio of their volumes.

- Ans
- ☒ 1. $\frac{1225}{1296}$
 - ☒ 2. $\frac{1220}{1296}$
 - ☒ 3. $\frac{1230}{1296}$
 - ☒ 4. $\frac{1235}{1296}$

Question Type : MCQ

Question ID : 630680386151

Option 1 ID : 6306801505315

Option 2 ID : 6306801505314

Option 3 ID : 6306801505316

Option 4 ID : 6306801505317

Status : Answered

Chosen Option : 3

Q.14 The average of nine consecutive integers is 54. The second largest of these numbers is:

- Ans
- ☒ 1. 57
 - ☒ 2. 50
 - ☒ 3. 58
 - ☒ 4. 59

Question Type : MCQ

Question ID : 630680815872

Option 1 ID : 6306803196822

Option 2 ID : 6306803196821

Option 3 ID : 6306803196823

Option 4 ID : 6306803196824

Status : Marked For Review

Chosen Option : 1

Q.15 In an election between A and B, A gets double the votes of B and wins with a margin of 150 votes. 10% of votes were invalid. What is the total number of votes polled in the election?

- Ans ☒ 1. 600
☒ 2. 550
☒ 3. 450
☒ 4. 500

Question Type : MCQ
Question ID : 630680464523
Option 1 ID : 6306801814128
Option 2 ID : 6306801814129
Option 3 ID : 6306801814130
Option 4 ID : 6306801814127
Status : Answered
Chosen Option : 4

Q.16 A sum of ₹312 was divided among 100 boys and girls in such a way that each boy gets ₹3.60 and each girl ₹2.40. The number of girls is:

- Ans ☒ 1. 65
☒ 2. 40
☒ 3. 35
☒ 4. 60

Question Type : MCQ
Question ID : 630680277300
Option 1 ID : 6306801077652
Option 2 ID : 6306801077649
Option 3 ID : 6306801077651
Option 4 ID : 6306801077650
Status : Answered
Chosen Option : 1

Q.17 Two trains 280 metres and 260 metres long, respectively, are running towards each other on parallel lines, one at the speed of 58 km/hr and another at the speed of 50 km/hr. How much time (in seconds) will they take to cross each other?

- Ans ☒ 1. 15
☒ 2. 18
☒ 3. 17
☒ 4. 12

Question Type : MCQ
Question ID : 630680603386
Option 1 ID : 6306802361019
Option 2 ID : 6306802361017
Option 3 ID : 6306802361018
Option 4 ID : 6306802361016
Status : Answered
Chosen Option : 3

Q.18 Raman purchased an iron at a cost of ₹2,400 and sold it to Rohan at a loss of 8%. Rohan sold it to Soham at a gain of 12.5%. At what price should Soham sell the iron to gain 15%?

Ans ☒ 1. ₹2,856.60

☐ 2. ₹2,658.60

☐ 3. ₹2,860.56

☐ 4. ₹2,568.60

Question Type : MCQ

Question ID : 630680460208

Option 1 ID : 6306801797280

Option 2 ID : 6306801797279

Option 3 ID : 6306801797281

Option 4 ID : 6306801797278

Status : Answered

Chosen Option : 2

Q.19 Find the area of an equilateral triangle whose side is 14 cm.

Ans ☐ 1. $46\sqrt{3}\text{cm}^2$

☐ 2. $44\sqrt{3}\text{cm}^2$

☐ 3. $36\sqrt{3}\text{cm}^2$

☒ 4. $49\sqrt{3}\text{cm}^2$

Question Type : MCQ

Question ID : 630680103507

Option 1 ID : 630680402273

Option 2 ID : 630680402272

Option 3 ID : 630680402271

Option 4 ID : 630680402274

Status : Answered

Chosen Option : 4

Q.20 Find the simple interest (in ₹) on ₹4000 as a sum borrowed at 4% per year rate of interest for 5 years.

Ans ☐ 1. 840

☐ 2. 760

☒ 3. 800

☐ 4. 740

Question Type : MCQ

Question ID : 630680592001

Option 1 ID : 6306802316472

Option 2 ID : 6306802316474

Option 3 ID : 6306802316471

Option 4 ID : 6306802316473

Status : Answered

Chosen Option : 3

Section : Reasoning Ability and Problem Solving

Q.1 In a certain code language, 'CORNER' is written as 'REORNC' and 'BUDGET' is written as 'TEUDGB'. How will 'DEVICE' be written in that language?

- Ans
- ☐ 1. ECIVED
 - ☐ 2. EDEVIC
 - ☐ 3. EVECID
 - ☒ 4. ECEVID

Question Type : MCQ
Question ID : 630680379925
Option 1 ID : 6306801480736
Option 2 ID : 6306801480735
Option 3 ID : 6306801480738
Option 4 ID : 6306801480737
Status : Answered
Chosen Option : 4

Q.2 Read the given statements and conclusions carefully. Assuming that the information given in the statements is true, even if it appears to be at variance with commonly known facts, decide which of the given conclusions logically follow(s) from the statements.

Statements:

- All pens are markers.
- Some erasers are pens.

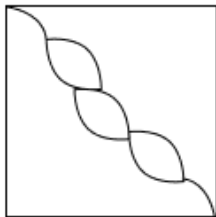
Conclusions:

- (I) Some markers are erasers.
- (II) All markers are pens.

- Ans
- ☒ 1. Only conclusion (I) follows
 - ☐ 2. Neither conclusion (I) nor (II) follows
 - ☐ 3. Only conclusion (II) follows
 - ☐ 4. Both conclusions (I) and (II) follow

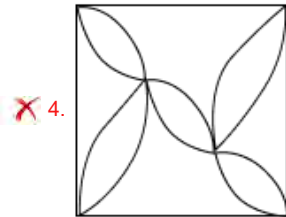
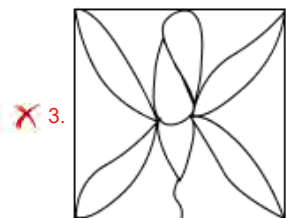
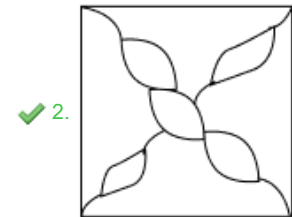
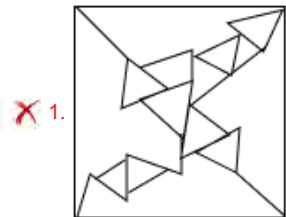
Question Type : MCQ
Question ID : 630680404883
Option 1 ID : 6306801579024
Option 2 ID : 6306801579025
Option 3 ID : 6306801579023
Option 4 ID : 6306801579026
Status : Answered
Chosen Option : 2

Q.3 Select the option figure in which the given figure (X) is embedded as its part (rotation is NOT allowed).



(X)

Ans



Question Type : MCQ
Question ID : 630680487592
Option 1 ID : 6306801904476
Option 2 ID : 6306801904477
Option 3 ID : 6306801904474
Option 4 ID : 6306801904475
Status : Answered
Chosen Option : 2

Q.4 CJ16 is related to EL26 in a certain way. In the same way, MT42 is related to OV52. To which of the following is HO11 related following the same logic?

- Ans ☒ 1. JQ31
☒ 2. KS31
☒ 3. JQ21
☒ 4. JK21

Question Type : MCQ
Question ID : 630680438839
Option 1 ID : 6306801713171
Option 2 ID : 6306801713170
Option 3 ID : 6306801713168
Option 4 ID : 6306801713169
Status : Answered
Chosen Option : 3

Q.5 What will come in the place of '?' in the following equation, if '+' and '-' are interchanged and 'x' and '÷' are interchanged?

$16 \div 8 + 13 + 36 \times 18 - 3 = ?$

- Ans ☒ 1. 98
☒ 2. 96
☒ 3. 100
☒ 4. 116

Question Type : MCQ
Question ID : 630680399416
Option 1 ID : 6306801557577
Option 2 ID : 6306801557578
Option 3 ID : 6306801557575
Option 4 ID : 6306801557576
Status : Answered
Chosen Option : 4

Q.6 In a code language, 'FORK' is coded as 'GLWD' and 'CAVF' is coded as 'DXAY'. How will 'TRHA' be coded in that language?

- Ans ☒ 1. UOMT
☒ 2. UOPR
☒ 3. UNMS
☒ 4. UONQ

Question Type : MCQ
Question ID : 630680465305
Option 1 ID : 6306801817257
Option 2 ID : 6306801817258
Option 3 ID : 6306801817255
Option 4 ID : 6306801817256
Status : Answered
Chosen Option : 1

Q.7 JMGI is related to QTNP in a certain way based on the English alphabetical order. In the same way, GJDF is related to NQKM. To which of the following is DGAC related, following the same logic?

- Ans ☒ 1. NKJH
☒ 2. KNHJ
☒ 3. NKHJ
☒ 4. KNJH

Question Type : MCQ
Question ID : 630680846764
Option 1 ID : 6306803316787
Option 2 ID : 6306803316784
Option 3 ID : 6306803316786
Option 4 ID : 6306803316785
Status : Answered
Chosen Option : 2

Q.8 What should come in place of the question mark (?) in the given series?

2, 3, 6, 12, 10, 21, 14, ?

- Ans ☒ 1. 25
☒ 2. 29
☒ 3. 30
☒ 4. 27

Question Type : MCQ
Question ID : 630680405871
Option 1 ID : 6306801582614
Option 2 ID : 6306801582613
Option 3 ID : 6306801582612
Option 4 ID : 6306801582615
Status : Answered
Chosen Option : 3

Q.9 In a certain code language, 'pen pencil eraser' is written as 'pq rq lq' and 'pages book eraser' is written as 'rq mq bq'. How is 'eraser' written in the given language?

- Ans ☒ 1. pq
☒ 2. rq
☒ 3. lq
☒ 4. bq

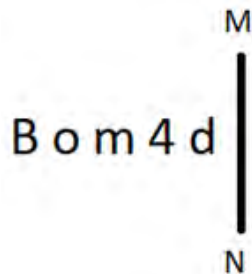
Question Type : MCQ
Question ID : 630680439092
Option 1 ID : 6306801714181
Option 2 ID : 6306801714180
Option 3 ID : 6306801714182
Option 4 ID : 6306801714183
Status : Answered
Chosen Option : 2

Q.10 A, B, C, D, E, F and G are sitting around a circular table facing the centre (but not necessarily in the same order). D sits third to the left of E. G sits second to the left of B. Only E sits between F and G. A is not an immediate neighbour of D. Who sits fourth to the right of C?

- Ans
- ☒ 1. E
 - ☒ 2. D
 - ☒ 3. B
 - ☒ 4. A

Question Type : MCQ
Question ID : 630680411166
Option 1 ID : 6306801603423
Option 2 ID : 6306801603422
Option 3 ID : 6306801603421
Option 4 ID : 6306801603420
Status : Answered
Chosen Option : 4

Q.11 Select the correct mirror image of the given figure when the mirror is placed at MN as shown below.



- Ans
- ☒ 1. b 4 m o B
 - ☒ 2. p 7 m o g
 - ☒ 3. b 4 m o B
 - ☒ 4. 4 d m o B

Question Type : MCQ
Question ID : 630680525271
Option 1 ID : 6306802053168
Option 2 ID : 6306802053171
Option 3 ID : 6306802053169
Option 4 ID : 6306802053170
Status : Answered
Chosen Option : 3

Q.12 In the following number-pairs, the second number is obtained by applying certain mathematical operations to the first number. Select the set in which the numbers are related in the same way as are the numbers of the following sets.
(NOTE: Operations should be performed on the whole numbers, without breaking down the numbers into their constituent digits. E.g. 13 – Operations on 13 such as adding/ subtracting /multiplying to 13 can be performed. Breaking down 13 into 1 and 3 and then performing mathematical operations on 1 and 3 is not allowed.)
22, 31
26, 35

- Ans ☒ 1. 48, 52
☒ 2. 32, 49
☒ 3. 44, 59
☒ 4. 38, 47

Question Type : MCQ
Question ID : 630680399137
Option 1 ID : 6306801556509
Option 2 ID : 6306801556506
Option 3 ID : 6306801556508
Option 4 ID : 6306801556507
Status : Answered
Chosen Option : 4

Q.13 In a certain code language, 'car drive steady' is coded as 'mi ku pa' and 'steady is safe' is coded as 'tu an mi'. How is 'steady' coded in the given language?

- Ans ☒ 1. an
☒ 2. tu
☒ 3. mi
☒ 4. ku

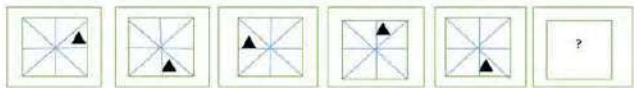
Question Type : MCQ
Question ID : 630680378941
Option 1 ID : 6306801476814
Option 2 ID : 6306801476813
Option 3 ID : 6306801476811
Option 4 ID : 6306801476812
Status : Answered
Chosen Option : 3

Q.14 3 is related to 8 following a certain logic. Following the same logic, 24 is related to 35. To which of the following is 99 related, following the same logic?
(NOTE: Operations should be performed on the whole numbers, without breaking down the numbers into their constituent digits. E.g. 13 – Operations on 13 such as adding/subtracting/multiplying to 13 can be performed. Breaking down 13 into 1 and 3 and then performing mathematical operations on 1 and 3 is not allowed.)

- Ans ☒ 1. 120
☒ 2. 80
☒ 3. 143
☒ 4. 110

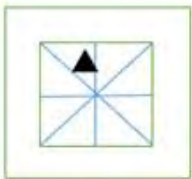
Question Type : MCQ
Question ID : 630680449983
Option 1 ID : 6306801757095
Option 2 ID : 6306801757094
Option 3 ID : 6306801757097
Option 4 ID : 6306801757096
Status : Answered
Chosen Option : 1

Q.15 Select the figure from among the given options that can replace the question mark (?) in the following series.

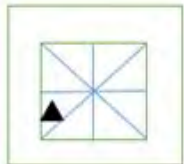


Ans

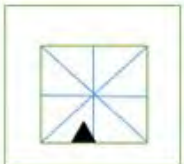
✗ 1.



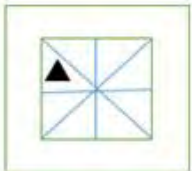
✓ 2.



✗ 3.

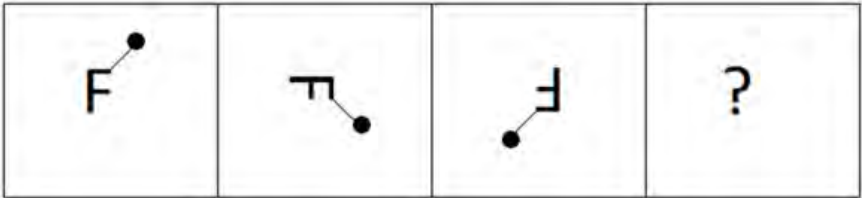


✗ 4.



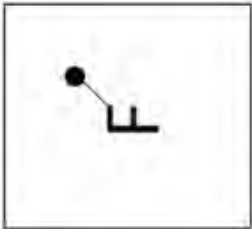
Question Type : MCQ
Question ID : 63068082590
Option 1 ID : 630680320367
Option 2 ID : 630680320364
Option 3 ID : 630680320365
Option 4 ID : 630680320366
Status : Answered
Chosen Option : 2

Q.16 Select the figure that will come next in the following figure series.

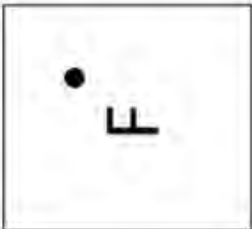


Ans

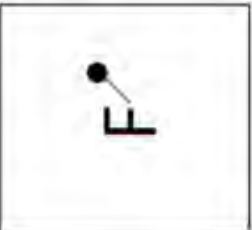
✓ 1.



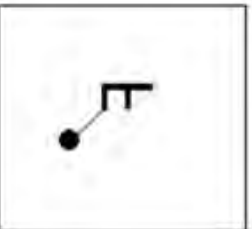
✗ 2.



✗ 3.



✗ 4.



Question Type : MCQ
Question ID : 630680467991
Option 1 ID : 6306801827868
Option 2 ID : 6306801827866
Option 3 ID : 6306801827867
Option 4 ID : 6306801827869
Status : Answered
Chosen Option : 1

SSC MTS (Non Technical) EXAM STUDY KIT



FREE
SHIPPING 

- ▶ 100% SSC MTS Exam Syllabus Covered
- ▶ PRINTED Notes
- ▶ 8 Books, 700+ Pages
- ▶ 2500+ MCQs
- ▶ Practice Papers
- ▶ 1 Year Current Affairs

50%
OFF

 **SSCPORTAL.IN**

SSC MTS PDF NOTES

100% Syllabus Covered



CLICK HERE

CLICK BELOW LINK TO DOWNLOAD PDF NOTES

<https://sscpportal.in/study-kit/mts>

<https://sscpportal.in/study-kit>

Q.17 Read the given statements and conclusions carefully. Assuming that the information given in the statements is true, even if it appears to be at variance with commonly known facts, decide which of the given conclusions logically follow(s) from the statements.

Statements:

Some flutes are violins.

Some violins are tablas.

All tablas are sitars.

Conclusions:

(I): Some violins are sitars.

(II): Some flutes are tablas.

- Ans
- ☒ 1. Only conclusion (II) follows
 - ☒ 2. Neither conclusion (I) nor (II) follows
 - ☒ 3. Only conclusion (I) follows
 - ☒ 4. Both conclusions (I) and (II) follow

Question Type : MCQ

Question ID : 630680387101

Option 1 ID : 6306801509115

Option 2 ID : 6306801509116

Option 3 ID : 6306801509114

Option 4 ID : 6306801509117

Status : Answered

Chosen Option : 4

Q.18 What should come in place of the question mark (?) in the given series based on the English alphabetical order?

BDG, EGJ , HJM, KMP, ?

- Ans
- ☒ 1. NPS
 - ☒ 2. PNS
 - ☒ 3. PSN
 - ☒ 4. NSP

Question Type : MCQ

Question ID : 630680457104

Option 1 ID : 6306801785353

Option 2 ID : 6306801785356

Option 3 ID : 6306801785355

Option 4 ID : 6306801785354

Status : Answered

Chosen Option : 1

Q.19 Seven friends, A, B, C, D, E, F and G, are sitting around a circular table, facing the centre (but not necessarily in the same order) . D is an immediate neighbour of both A and F. B is sitting to the immediate right of F. C is sitting second to the left of A. G and E both are C's immediate neighbours and G is not an immediate neighbour of A. Who is the immediate neighbour of both B and D?

- Ans
- ☒ 1. G
 - ☒ 2. A
 - ☒ 3. C
 - ☒ 4. F

Question Type : MCQ

Question ID : 630680381526

Option 1 ID : 6306801487036

Option 2 ID : 6306801487037

Option 3 ID : 6306801487038

Option 4 ID : 6306801487035

Status : Answered

Chosen Option : 4

Q.20 What will come in the place of '?' in the following equation, if '+' and '-' are interchanged and 'x' and '÷' are interchanged?
 $35 \times 7 \div 6 + 3 - 14 = ?$

- Ans ☒ 1. 35
☒ 2. 42
☒ 3. 39
☒ 4. 41

Question Type : MCQ
Question ID : 630680271474
Option 1 ID : 6306801054969
Option 2 ID : 6306801054970
Option 3 ID : 6306801054968
Option 4 ID : 6306801054971
Status : Answered
Chosen Option : 4

Section : General Awareness

Q.1 Where was the inaugural match of the first edition of the Women's Premier League (WPL) organised in the year 2023?

- Ans ☒ 1. Gujarat
☒ 2. Dharamshala
☒ 3. Mumbai
☒ 4. Bengaluru

Question Type : MCQ
Question ID : 630680572116
Option 1 ID : 6306802237321
Option 2 ID : 6306802237322
Option 3 ID : 6306802237320
Option 4 ID : 6306802237323
Status : Answered
Chosen Option : 1

Q.2 The cytoplasmic zone surrounding the Golgi complex possesses no cell organelles. This zone of clear cytoplasm is called:

- Ans ☒ 1. zone of exclusion
☒ 2. cytosol
☒ 3. cytosine
☒ 4. cytochrome

Question Type : MCQ
Question ID : 630680311126
Option 1 ID : 6306801210617
Option 2 ID : 6306801210618
Option 3 ID : 6306801210619
Option 4 ID : 6306801210620
Status : Answered
Chosen Option : 4

Q.3 Which of the following is NOT included in the three main dimensions of the New Industrial Policy, 1991, announced by the Government of India?

- Ans ☒ 1. Liberalisation
☒ 2. Globalisation
☒ 3. Privatisation
☒ 4. Urbanisation

Question Type : MCQ
Question ID : 630680484467
Option 1 ID : 6306801892186
Option 2 ID : 6306801892189
Option 3 ID : 6306801892188
Option 4 ID : 6306801892187
Status : Answered
Chosen Option : 4

Q.4 When was India's first ever budget presented?

- Ans ☒ 1. 1948
☒ 2. 1860
☒ 3. 1935
☒ 4. 1857

Question Type : MCQ
Question ID : 63068054228
Option 1 ID : 630680208957
Option 2 ID : 630680208955
Option 3 ID : 630680208956
Option 4 ID : 630680208954
Status : Answered
Chosen Option : 1

Q.5 Udit Narayan was conferred the Padma Bhushan in 2016 for which of the following fields?

- Ans ☒ 1. Art - Playback Singing
☒ 2. Art - Theatre
☒ 3. Art - Classical Dance
☒ 4. Public Affairs

Question Type : MCQ
Question ID : 630680487618
Option 1 ID : 6306801904542
Option 2 ID : 6306801904545
Option 3 ID : 6306801904543
Option 4 ID : 6306801904544
Status : Answered
Chosen Option : 1

Q.6 If an Indian citizen is denied entry to a public place because of his caste, which of the following Fundamental Rights is denied to him?

- Ans ☒ 1. Right against exploitation
☒ 2. Right to equality
☒ 3. Right to constitutional remedies
☒ 4. Cultural and educational right

Question Type : MCQ
Question ID : 630680273061
Option 1 ID : 6306801060795
Option 2 ID : 6306801060796
Option 3 ID : 6306801060798
Option 4 ID : 6306801060797
Status : Answered
Chosen Option : 2

Q.7 Who among the following was one of the founders of the Indian National Congress in 1885?

- Ans ☒ 1. Charles Freer Andrews
☒ 2. Mahatma Gandhi
☒ 3. Allan Octavian Hume
☒ 4. Annie Besant

Question Type : MCQ
Question ID : 630680210813
Option 1 ID : 630680817414
Option 2 ID : 630680817413
Option 3 ID : 630680817411
Option 4 ID : 630680817412
Status : Answered
Chosen Option : 3

Q.8 'Ram Navami' is celebrated in India to commemorate the:

- Ans ☒ 1. death of Ravana.
☒ 2. birth of Lord Rama.
☒ 3. return of Lord Rama from forest.
☒ 4. coronation ceremony of Lord Rama as a king.

Question Type : MCQ
Question ID : 630680157889
Option 1 ID : 630680611087
Option 2 ID : 630680611086
Option 3 ID : 630680611084
Option 4 ID : 630680611085
Status : Answered
Chosen Option : 3

Q.9 Which river is known as ‘Langchen Khambab’ in Tibet?

- Ans ☒ 1. Indus
☒ 2. Sutlej
☒ 3. Kosi
☒ 4. Tista

Question Type : MCQ
Question ID : 630680511002
Option 1 ID : 6306801997139
Option 2 ID : 6306801997138
Option 3 ID : 6306801997141
Option 4 ID : 6306801997140
Status : Answered
Chosen Option : 1

Q.10 As per the reforms of the Mines and Minerals (Development and Regulation) Amendment Bill, 2023, how many minerals have been removed from the list of atomic minerals?

- Ans ☒ 1. 6
☒ 2. 3
☒ 3. 8
☒ 4. 11

Question Type : MCQ
Question ID : 630680465515
Option 1 ID : 6306801818096
Option 2 ID : 6306801818095
Option 3 ID : 6306801818097
Option 4 ID : 6306801818098
Status : Answered
Chosen Option : 1

Q.11 Who was the highest run scorer in Men’s World Cup cricket - 2019?

- Ans ☒ 1. Virat Kohli
☒ 2. Shikhar Dhawan
☒ 3. Rohit Sharma
☒ 4. DA Warner

Question Type : MCQ
Question ID : 630680115881
Option 1 ID : 630680448854
Option 2 ID : 630680448856
Option 3 ID : 630680448855
Option 4 ID : 630680448857
Status : Answered
Chosen Option : 3

Q.12 'Chakyar Koothu', the folk dance form in which the entire story is presented by a single performer, primarily belongs to which of the following states?

- Ans ☒ 1. Kerala
☐ 2. Tamil Nadu
☐ 3. Tripura
☐ 4. Sikkim

Question Type : MCQ
Question ID : 630680309151
Option 1 ID : 6306801202783
Option 2 ID : 6306801202784
Option 3 ID : 6306801202782
Option 4 ID : 6306801202781
Status : Answered
Chosen Option : 2

Q.13 Which of the following statements is/are correct in context of Buddhist architecture?
i. Uddeshika stupa was created as a memorial.
ii. Paribhogika stupa contained the buried bodily remains of Buddha
iii. Bharhut stupa is situated in Uttar Pradesh.

- Ans ☐ 1. Only i and iii
☒ 2. Only i and ii
☐ 3. i, ii and iii
☐ 4. Only i

Question Type : MCQ
Question ID : 630680547291
Option 1 ID : 6306802139729
Option 2 ID : 6306802139728
Option 3 ID : 6306802139730
Option 4 ID : 6306802139727
Status : Answered
Chosen Option : 3

Q.14 In February 2024, who took an oath as the 12th Chief Minister of Jharkhand?

- Ans ☐ 1. Saryu Rai
☐ 2. Babulal Marandi
☒ 3. Champai Soren
☐ 4. Arjun Munda

Question Type : MCQ
Question ID : 630680595842
Option 1 ID : 6306802331559
Option 2 ID : 6306802331557
Option 3 ID : 6306802331558
Option 4 ID : 6306802331556
Status : Answered
Chosen Option : 3

Q.15 National Prophylaxis Program, which was launched in 1970 as an immediate remedial measure to address which of the following medical conditions /diseases caused by nutritional deficiencies?

- Ans ☒ 1. Hypercalcemia
☒ 2. Blindness
☒ 3. Beriberi
☒ 4. Goitre

Question Type : MCQ
Question ID : 630680404302
Option 1 ID : 6306801576711
Option 2 ID : 6306801576712
Option 3 ID : 6306801576713
Option 4 ID : 6306801576710
Status : Answered
Chosen Option : 1

Q.16 Which Article of the Constitution directs the Council of Ministers to aid and advise the Governor?

- Ans ☒ 1. Article 157
☒ 2. Article 163
☒ 3. Article 153
☒ 4. Article 167

Question Type : MCQ
Question ID : 630680162980
Option 1 ID : 630680631149
Option 2 ID : 630680631150
Option 3 ID : 630680631148
Option 4 ID : 630680631151
Status : Answered
Chosen Option : 2

Q.17 The approximate number of water molecules present in 9 gm of water is ____.

- Ans ☒ 1. 6.022×10^{22}
☒ 2. 6.022×10^{23}
☒ 3. 3.011×10^{23}
☒ 4. 9.023×10^{23}

Question Type : MCQ
Question ID : 630680426397
Option 1 ID : 6306801663680
Option 2 ID : 6306801663677
Option 3 ID : 6306801663678
Option 4 ID : 6306801663679
Status : Answered
Chosen Option : 2

Q.18 K Kalyanasundaram Pillai was honoured with the Sangeet Natak Akademi Award, 1999, for his contribution to which of the following dance forms?

- Ans ☒ 1. Mohiniyattam
☒ 2. Kuchipudi
☒ 3. Bharatnatyam
☒ 4. Manipuri

Question Type : MCQ
Question ID : 630680483940
Option 1 ID : 6306801890124
Option 2 ID : 6306801890122
Option 3 ID : 6306801890123
Option 4 ID : 6306801890125
Status : Answered
Chosen Option : 1

Q.19 'The Blue Umbrella', 'The Cherry Tree', 'The Hidden Pool' are novels written by who among the following authors?

- Ans ☒ 1. Sudha Murthy
☒ 2. Anant Pai
☒ 3. Twinkle Khanna
☒ 4. Ruskin Bond

Question Type : MCQ
Question ID : 630680512096
Option 1 ID : 6306802001355
Option 2 ID : 6306802001357
Option 3 ID : 6306802001354
Option 4 ID : 6306802001356
Status : Answered
Chosen Option : 4

Q.20 Who among the following was defeated by Babur in the Battle of Khanwa in 1527 CE?

- Ans ☒ 1. Hasan Khan
☒ 2. Medini Rai
☒ 3. Rana Sanga
☒ 4. Ibrahim Lodi

Question Type : MCQ
Question ID : 630680214217
Option 1 ID : 630680830917
Option 2 ID : 630680830916
Option 3 ID : 630680830918
Option 4 ID : 630680830915
Status : Answered
Chosen Option : 2

Q.21 Which of the following sectors had the largest percentage of workforce in urban India in the year 2019-2020?

- Ans ☒ 1. Service
☐ 2. Agriculture
☐ 3. Mining
☐ 4. Industry

Question Type : MCQ
Question ID : 630680510909
Option 1 ID : 6306801996769
Option 2 ID : 6306801996766
Option 3 ID : 6306801996768
Option 4 ID : 6306801996767
Status : Answered
Chosen Option : 1

Q.22 Bal Gangadhar described _____ as a diamond of India.

- Ans ☐ 1. Motilal Nehru
☐ 2. Mahatma Gandhi
☐ 3. Baba Saheb Ambedkar
☒ 4. Gopal Krishna Gokhale

Question Type : MCQ
Question ID : 630680275920
Option 1 ID : 6306801072194
Option 2 ID : 6306801072192
Option 3 ID : 6306801072193
Option 4 ID : 6306801072191
Status : Answered
Chosen Option : 2

Q.23 A portion of landmass from the shore line up to the shelf break that is submerged under shallow water is known as:

- Ans ☐ 1. Continental Drift
☐ 2. Oceanic Basin
☐ 3. Trenches
☒ 4. Continental Shelf

Question Type : MCQ
Question ID : 630680453401
Option 1 ID : 6306801770614
Option 2 ID : 6306801770613
Option 3 ID : 6306801770615
Option 4 ID : 6306801770612
Status : Answered
Chosen Option : 4

Q.24 What is the overarching programme introduced in the Union Budget, 2018-19 by Government of India, for the school education sector?

- Ans ☒ 1. Right to Education
☒ 2. Samagra Shiksha
☒ 3. Rashtriya Unnat Shiksha Abhiyan
☒ 4. Sarva Vidya Abhiyan

Question Type : MCQ
Question ID : 630680488270
Option 1 ID : 6306801907138
Option 2 ID : 6306801907136
Option 3 ID : 6306801907137
Option 4 ID : 6306801907135
Status : Answered
Chosen Option : 3

Q.25 Harshvardhan's ambitions of extending his power to Deccan and South India were stopped by:

- Ans ☒ 1. Pulakesin II
☒ 2. Ashoka
☒ 3. Rajaraja I
☒ 4. Vikramaditya

Question Type : MCQ
Question ID : 630680433781
Option 1 ID : 6306801693090
Option 2 ID : 6306801693088
Option 3 ID : 6306801693089
Option 4 ID : 6306801693087
Status : Answered
Chosen Option : 1

Section : English Language and Comprehension

Q.1 The following sentence has been split into four segments. Identify the segment that contains a grammatical error.
I have lived with my parents / in Mumbai / in a residential flat / yet two years.

- Ans ☒ 1. in Mumbai
☒ 2. I have lived with my parents
☒ 3. yet two years
☒ 4. in a residential flat

Question Type : MCQ
Question ID : 630680129869
Option 1 ID : 630680503067
Option 2 ID : 630680503066
Option 3 ID : 630680503069
Option 4 ID : 630680503068
Status : Answered
Chosen Option : 3

Q.2 In the following passage, some words have been deleted. Read the passage carefully and select the most appropriate option to fill in the blanks.
Mosquito means small fly. It has a transmitter segmented body and a _____ of wings. Male mosquitoes mainly feed on plant _____.

- Ans**
- ☒ 1. couple; liquor
 - ☒ 2. set; beverage
 - ☒ 3. pair; nectar
 - ☒ 4. kind; drink

Question Type : **MCQ**
Question ID : **630680515126**
Option 1 ID : **6306802013020**
Option 2 ID : **6306802013017**
Option 3 ID : **6306802013019**
Option 4 ID : **6306802013018**
Status : **Answered**
Chosen Option : **3**

Q.3 Select the most appropriate synonym of the word given in brackets to fill in the blank.

Many fraud companies _____ (deceive) innocent customers and earn millions of dollars.

- Ans**
- ☒ 1. facilitate
 - ☒ 2. mislead
 - ☒ 3. hamper
 - ☒ 4. resolve

Question Type : **MCQ**
Question ID : **630680522080**
Option 1 ID : **6306802040649**
Option 2 ID : **6306802040648**
Option 3 ID : **6306802040651**
Option 4 ID : **6306802040650**
Status : **Answered**
Chosen Option : **2**

Q.4 Select the most appropriate option that can substitute the underlined segment in the given sentence. If there is no need to substitute it, select 'No substitution required'.

She prepares an unique dish in the cooking competition and won it.

- Ans**
- ☒ 1. prepared an unique
 - ☒ 2. prepares a unique
 - ☒ 3. prepared a unique
 - ☒ 4. No substitution required

Question Type : **MCQ**
Question ID : **630680477586**
Option 1 ID : **6306801865496**
Option 2 ID : **6306801865497**
Option 3 ID : **6306801865498**
Option 4 ID : **6306801865499**
Status : **Answered**
Chosen Option : **3**

Q.5 Parts of the following sentence have been given as options. Select the option that contains an error.
A fox and an hyena were spotted in the animal reserve.

- Ans ☒ 1. were spotted in
☒ 2. the animal reserve
☒ 3. and an hyena
☒ 4. A fox

Question Type : MCQ
Question ID : 63068084880
Option 1 ID : 630680329038
Option 2 ID : 630680329039
Option 3 ID : 630680329037
Option 4 ID : 630680329036
Status : Answered
Chosen Option : 3

Q.6 Select the most appropriate meaning of the given proverb.

Bite the bullet

- Ans ☒ 1. To be the first to attack someone
☒ 2. To face up to trouble with fortitude
☒ 3. To buy something with no prior inspection
☒ 4. To take the blame for something one didn't do

Question Type : MCQ
Question ID : 630680545703
Option 1 ID : 6306802133403
Option 2 ID : 6306802133402
Option 3 ID : 6306802133400
Option 4 ID : 6306802133401
Status : Answered
Chosen Option : 4

Q.7 Select the most appropriate synonym of the underlined word in the following sentence.

I graciously welcomed my boss at my birthday party.

- Ans ☒ 1. Cleverly
☒ 2. Courageously
☒ 3. Bravely
☒ 4. Nicely

Question Type : MCQ
Question ID : 630680394912
Option 1 ID : 6306801539931
Option 2 ID : 6306801539930
Option 3 ID : 6306801539929
Option 4 ID : 6306801539928
Status : Answered
Chosen Option : 4

Q.8 Select the most appropriate synonym of the underlined word in the given sentence.
To his surprise, it swung back at his touch.

- Ans ☒ 1. Shock
☐ 2. Anger
☐ 3. Boredom
☐ 4. Regret

Question Type : MCQ
Question ID : 630680726544
Option 1 ID : 6306802847183
Option 2 ID : 6306802847182
Option 3 ID : 6306802847184
Option 4 ID : 6306802847185
Status : Answered
Chosen Option : 3

Q.9 Select the most appropriate option that can substitute the underlined segment in the given sentence.

The questions in part B looks difficult than the questions in part A.

- Ans ☐ 1. most difficult
☐ 2. difficultier
☐ 3. difficultly
☒ 4. more difficult

Question Type : MCQ
Question ID : 630680514604
Option 1 ID : 6306802011042
Option 2 ID : 6306802011043
Option 3 ID : 6306802011044
Option 4 ID : 6306802011041
Status : Answered
Chosen Option : 4

Q.10 Select the most appropriate option that can substitute the underlined segment in the given sentence. If there is no need to substitute it, select 'No substitution required'.

The soldiers are all on their toes and anxiously waiting for the orders to start marching towards the enemy.

- Ans ☐ 1. all on their fingers and anxiously waiting
☐ 2. paying through the nose
☒ 3. No substitution required
☐ 4. all on their toes and anxiously dancing

Question Type : MCQ
Question ID : 630680615425
Option 1 ID : 6306802408403
Option 2 ID : 6306802408404
Option 3 ID : 6306802408405
Option 4 ID : 6306802408402
Status : Answered
Chosen Option : 4

Q.11 What is the correct substitution for the word 'screw' in the idiom 'Hit the screw on the head'?

- Ans ☒ 1. Crew
☒ 2. Bolt
☒ 3. Tack
☒ 4. Nail

Question Type : MCQ
Question ID : 630680726527
Option 1 ID : 6306802847117
Option 2 ID : 6306802847116
Option 3 ID : 6306802847115
Option 4 ID : 6306802847114
Status : Answered
Chosen Option : 2

Q.12 Select the most appropriate synonym of the given word.
Futile

- Ans ☒ 1. Thoughtful
☒ 2. Useless
☒ 3. Vicious
☒ 4. Adequate

Question Type : MCQ
Question ID : 630680430577
Option 1 ID : 6306801680330
Option 2 ID : 6306801680332
Option 3 ID : 6306801680331
Option 4 ID : 6306801680333
Status : Answered
Chosen Option : 1

Q.13 Select the option that rectifies the spelling of the underlined word in the given sentence.

We have pledged our allegance to the nation.

- Ans ☒ 1. allegaince
☒ 2. alegiance
☒ 3. ellegance
☒ 4. allegiance

Question Type : MCQ
Question ID : 630680799110
Option 1 ID : 6306803131239
Option 2 ID : 6306803131241
Option 3 ID : 6306803131240
Option 4 ID : 6306803131238
Status : Answered
Chosen Option : 1

Q.14 Select the sentence that has a grammatical error.

- Ans ☒ 1. She always cuts out unhealthy snacks.
- ☒ 2. Can you cut through the traffic to get here on time?
- ☒ 3. They need to cut down the old tree in the garden.
- ☒ 4. The manager cuts the discussion to address an urgent matter.

Question Type : MCQ
Question ID : 630680600861
Option 1 ID : 6306802351184
Option 2 ID : 6306802351185
Option 3 ID : 6306802351183
Option 4 ID : 6306802351182
Status : Answered
Chosen Option : 4

Q.15 Select the most appropriate synonym of the given word.
Ephemeral

- Ans ☒ 1. Ugly
- ☒ 2. Permanent
- ☒ 3. Pleasing
- ☒ 4. Transient

Question Type : MCQ
Question ID : 630680726520
Option 1 ID : 6306802847088
Option 2 ID : 6306802847089
Option 3 ID : 6306802847086
Option 4 ID : 6306802847087
Status : Answered
Chosen Option : 3

Q.16 Select the most appropriate option to fill in the blank.

The student received an _____ for his outstanding performance.

- Ans ☒ 1. acolayd
- ☒ 2. accolade
- ☒ 3. acolade
- ☒ 4. accolad

Question Type : MCQ
Question ID : 630680726498
Option 1 ID : 6306802847001
Option 2 ID : 6306802847000
Option 3 ID : 6306802846999
Option 4 ID : 6306802846998
Status : Answered
Chosen Option : 2

Q.17 Select the most appropriate option that can substitute the underlined segment in the given sentence.

We have perhaps never seen an ablest series of advocates than these ten standing in a row.

- Ans ☒ 1. the ablest
☒ 2. abler
☒ 3. more able
☒ 4. most ablest

Question Type : MCQ
Question ID : 630680514606
Option 1 ID : 6306802011049
Option 2 ID : 6306802011051
Option 3 ID : 6306802011050
Option 4 ID : 6306802011052
Status : Answered
Chosen Option : 2

Q.18 Select the most appropriate option to fill in the blank.
He had always wanted to work for himself; so, last year he _____ his job at the bank and is now running a tool business.

- Ans ☒ 1. left
☒ 2. cleft
☒ 3. bereft
☒ 4. halted

Question Type : MCQ
Question ID : 630680515230
Option 1 ID : 6306802013387
Option 2 ID : 6306802013385
Option 3 ID : 6306802013386
Option 4 ID : 6306802013388
Status : Answered
Chosen Option : 1

Q.19 Select the INCORRECTLY spelt word from the given sentence.

The chef's delicious recipies are a favourite among the restaurant's patrons.

- Ans ☒ 1. Recipies
☒ 2. Chef's
☒ 3. Delicious
☒ 4. Restaurant's

Question Type : MCQ
Question ID : 630680615925
Option 1 ID : 6306802410372
Option 2 ID : 6306802410370
Option 3 ID : 6306802410371
Option 4 ID : 6306802410373
Status : Answered
Chosen Option : 2

Q.20 Select the most appropriate degree of comparison to fill in the blank.

Work in this office is done in the _____ way.

- Ans ☒ 1. lesser efficient way
☒ 2. less efficient
☒ 3. least efficient
☒ 4. little efficient

Question Type : MCQ
Question ID : 63068069773
Option 1 ID : 630680269751
Option 2 ID : 630680269750
Option 3 ID : 630680269753
Option 4 ID : 630680269752
Status : Answered
Chosen Option : 2

Comprehension:

In the following passage, some words have been deleted. Read the passage carefully and select the most appropriate option to fill in each blank.
Are you familiar with the movie 'Jurassic Park'? Do you recall the enormous dinosaurs? Do you know that there is still a mammal that is as big and amazing as them? Blue whales are the world's largest living things and (1)_____ vast oceanic expanses. The adult is more than 100 feet long and (2)_____ more than 190 metric tons. According to scientists, a blue whale's heart weighs as much as a car while its tongue weighs as much as an elephant! They eat meat, but they don't have teeth. They gulp and swallow huge quantities of krill and shrimp for their diet. Their mouths have bristles that look like combs and remove water while keeping their food (3)_____.
Whales are social animals that live in 'pods', which are made up of more females than males. They take care of their children. Another female takes over and cares for the calf if one mother is unable to provide it with milk. Their bond is very strong, and they cry when another whale dies. The male makes sure that everyone in the pod gets their fair share of food. Whistles, clock-like sounds, and songs—frequent, high-pitched sounds—are the means by which the whales (4)_____ with one another. It assists them in locating one another, locating the position of the pod, searching for prey, and attracting mates. Every pod has a distinctive song that sets it apart from the others. These songs can be heard for not only hours, but also days (5)_____ miles of ocean.

SubQuestion No : 21

Q.21 Select the most appropriate option to fill in blank no. 1.

- Ans ☒ 1. depart
☒ 2. inhabit
☒ 3. engage
☒ 4. employ

Question Type : MCQ
Question ID : 630680206436
Option 1 ID : 630680800392
Option 2 ID : 630680800391
Option 3 ID : 630680800393
Option 4 ID : 630680800394
Status : Answered
Chosen Option : 2

Comprehension:

In the following passage, some words have been deleted. Read the passage carefully and select the most appropriate option to fill in each blank.
Are you familiar with the movie 'Jurassic Park'? Do you recall the enormous dinosaurs? Do you know that there is still a mammal that is as big and amazing as them? Blue whales are the world's largest living things and (1)_____ vast oceanic expanses. The adult is more than 100 feet long and (2)_____ more than 190 metric tons. According to scientists, a blue whale's heart weighs as much as a car while its tongue weighs as much as an elephant! They eat meat, but they don't have teeth. They gulp and swallow huge quantities of krill and shrimp for their diet. Their mouths have bristles that look like combs and remove water while keeping their food (3)_____.
Whales are social animals that live in 'pods', which are made up of more females than males. They take care of their children. Another female takes over and cares for the calf if one mother is unable to provide it with milk. Their bond is very strong, and they cry when another whale dies. The male makes sure that everyone in the pod gets their fair share of food. Whistles, clock-like sounds, and songs—frequent, high-pitched sounds—are the means by which the whales (4)_____ with one another. It assists them in locating one another, locating the position of the pod, searching for prey, and attracting mates. Every pod has a distinctive song that sets it apart from the others. These songs can be heard for not only hours, but also days (5)_____ miles of ocean.

SubQuestion No : 22

Q.22 Select the most appropriate option to fill in blank no. 2.

- Ans** ☒ 1. loads
☒ 2. lifts
☒ 3. weighs
☒ 4. counts

Question Type : **MCQ**
Question ID : **630680206437**
Option 1 ID : **630680800398**
Option 2 ID : **630680800395**
Option 3 ID : **630680800396**
Option 4 ID : **630680800397**
Status : **Answered**
Chosen Option : **3**

Comprehension:

In the following passage, some words have been deleted. Read the passage carefully and select the most appropriate option to fill in each blank.

Are you familiar with the movie 'Jurassic Park'? Do you recall the enormous dinosaurs? Do you know that there is still a mammal that is as big and amazing as them? Blue whales are the world's largest living things and (1)_____ vast oceanic expanses. The adult is more than 100 feet long and (2)_____ more than 190 metric tons. According to scientists, a blue whale's heart weighs as much as a car while its tongue weighs as much as an elephant! They eat meat, but they don't have teeth. They gulp and swallow huge quantities of krill and shrimp for their diet. Their mouths have bristles that look like combs and remove water while keeping their food (3)_____.

Whales are social animals that live in 'pods', which are made up of more females than males. They take care of their children. Another female takes over and cares for the calf if one mother is unable to provide it with milk. Their bond is very strong, and they cry when another whale dies. The male makes sure that everyone in the pod gets their fair share of food. Whistles, clock-like sounds, and songs—frequent, high-pitched sounds—are the means by which the whales (4)_____ with one another. It assists them in locating one another, locating the position of the pod, searching for prey, and attracting mates. Every pod has a distinctive song that sets it apart from the others. These songs can be heard for not only hours, but also days (5)_____ miles of ocean.

SubQuestion No : 23

Q.23 Select the most appropriate option to fill in blank no. 3.

- Ans ☒ 1. beckon
- ☒ 2. intact
- ☒ 3. brokerage
- ☒ 4. fair

Question Type : MCQ
Question ID : 630680206438
Option 1 ID : 630680800402
Option 2 ID : 630680800401
Option 3 ID : 630680800399
Option 4 ID : 630680800400
Status : Answered
Chosen Option : 4

SSC MTS (Non Technical) EXAM STUDY KIT



FREE
SHIPPING 

- ▶ 100% SSC MTS Exam Syllabus Covered
- ▶ PRINTED Notes
- ▶ 8 Books, 700+ Pages
- ▶ 2500+ MCQs
- ▶ Practice Papers
- ▶ 1 Year Current Affairs

50%
OFF

 SSCPOTAL.IN

SSC MTS PDF NOTES

100% Syllabus Covered



CLICK HERE

CLICK BELOW LINK TO DOWNLOAD PDF NOTES

<https://sscpportal.in/study-kit/mts>

<https://sscpportal.in/study-kit>

Comprehension:

In the following passage, some words have been deleted. Read the passage carefully and select the most appropriate option to fill in each blank.
Are you familiar with the movie 'Jurassic Park'? Do you recall the enormous dinosaurs? Do you know that there is still a mammal that is as big and amazing as them? Blue whales are the world's largest living things and (1)_____ vast oceanic expanses. The adult is more than 100 feet long and (2)_____ more than 190 metric tons. According to scientists, a blue whale's heart weighs as much as a car while its tongue weighs as much as an elephant! They eat meat, but they don't have teeth. They gulp and swallow huge quantities of krill and shrimp for their diet. Their mouths have bristles that look like combs and remove water while keeping their food (3)_____.
Whales are social animals that live in 'pods', which are made up of more females than males. They take care of their children. Another female takes over and cares for the calf if one mother is unable to provide it with milk. Their bond is very strong, and they cry when another whale dies. The male makes sure that everyone in the pod gets their fair share of food. Whistles, clock-like sounds, and songs—frequent, high-pitched sounds—are the means by which the whales (4)_____ with one another. It assists them in locating one another, locating the position of the pod, searching for prey, and attracting mates. Every pod has a distinctive song that sets it apart from the others. These songs can be heard for not only hours, but also days (5)_____ miles of ocean.

SubQuestion No : 24

Q.24 Select the most appropriate option to fill in blank no. 4.

- Ans ☒ 1. meet
☒ 2. horrid
☒ 3. communicate
☒ 4. catch

Question Type : MCQ
Question ID : 630680206439
Option 1 ID : 630680800404
Option 2 ID : 630680800403
Option 3 ID : 630680800406
Option 4 ID : 630680800405
Status : Answered
Chosen Option : 3

Comprehension:

In the following passage, some words have been deleted. Read the passage carefully and select the most appropriate option to fill in each blank.
Are you familiar with the movie 'Jurassic Park'? Do you recall the enormous dinosaurs? Do you know that there is still a mammal that is as big and amazing as them? Blue whales are the world's largest living things and (1)_____ vast oceanic expanses. The adult is more than 100 feet long and (2)_____ more than 190 metric tons. According to scientists, a blue whale's heart weighs as much as a car while its tongue weighs as much as an elephant! They eat meat, but they don't have teeth. They gulp and swallow huge quantities of krill and shrimp for their diet. Their mouths have bristles that look like combs and remove water while keeping their food (3)_____.
Whales are social animals that live in 'pods', which are made up of more females than males. They take care of their children. Another female takes over and cares for the calf if one mother is unable to provide it with milk. Their bond is very strong, and they cry when another whale dies. The male makes sure that everyone in the pod gets their fair share of food. Whistles, clock-like sounds, and songs—frequent, high-pitched sounds—are the means by which the whales (4)_____ with one another. It assists them in locating one another, locating the position of the pod, searching for prey, and attracting mates. Every pod has a distinctive song that sets it apart from the others. These songs can be heard for not only hours, but also days (5)_____ miles of ocean.

SubQuestion No : 25

Q.25 Select the most appropriate option to fill in blank no. 5.

- Ans ☒ 1. although
☒ 2. across
☒ 3. off
☒ 4. beside

Question Type : MCQ
Question ID : 630680206440
Option 1 ID : 630680800410
Option 2 ID : 630680800407
Option 3 ID : 630680800408
Option 4 ID : 630680800409
Status : Answered
Chosen Option : 2