

Multi Tasking Non Technical Staff and Havaladar CBIC and CBN Examination 2024

Roll Number	
Candidate Name	
Venue Name	iON Digital Zone iDZ3 Patliputra
Exam Date	15/10/2024
Exam Time	9:00 AM - 11:00 AM
Subject	MTS Non Tech Havaladar CBIC and CBN Examination 2024

Section : Numerical and Mathematical Ability

Q.1 The radius and the height of a right circular cone are in the ratio of 7 : 24 and its volume is 1232 cm<sup>3</sup>. Find the total surface area of the cone. (Use  $\pi = \frac{22}{7}$ )

- Ans ☒ 1. 862 cm<sup>2</sup>  
☒ 2. 704 cm<sup>2</sup>  
☒ 3. 826 cm<sup>2</sup>  
☒ 4. 628 cm<sup>2</sup>

Question Type : MCQ  
Question ID : 630680384007  
Option 1 ID : 6306801496923  
Option 2 ID : 6306801496926  
Option 3 ID : 6306801496925  
Option 4 ID : 6306801496924  
Status : Answered  
Chosen Option : 2

Q.2 A person sees another person snatching a chain from a lady, at a distance of 300 metres. He starts running and catches the thief by running at 10 km/h after running a total distance of 1.5 km. The speed at which the thief was running was:

- Ans ☒ 1. 8 km/h  
☒ 2. 9.5 km/h  
☒ 3. 9 km/h  
☒ 4. 8.5 km/h

Question Type : MCQ  
Question ID : 630680267442  
Option 1 ID : 6306801039143  
Option 2 ID : 6306801039146  
Option 3 ID : 6306801039144  
Option 4 ID : 6306801039145  
Status : Not Answered  
Chosen Option : --

Q.3 The greatest possible length of a scale that can exactly measure a cloth of lengths 250 cm, 420 cm and 710 cm is:

- Ans ☒ 1. 170 cm  
☒ 2. 10 cm  
☒ 3. 460 cm  
☒ 4. 71 cm

Question Type : MCQ  
Question ID : 630680106521  
Option 1 ID : 630680413871  
Option 2 ID : 630680413873  
Option 3 ID : 630680413870  
Option 4 ID : 630680413872  
Status : Answered  
Chosen Option : 2

Q.4 The average age of 14 students and their teacher is 18 years. If the teacher's age is excluded, the average reduces by 1 year. What is the teacher's age?

- Ans ☒ 1. 32  
☒ 2. 35  
☒ 3. 37  
☒ 4. 34

Question Type : MCQ  
Question ID : 630680447415  
Option 1 ID : 6306801746916  
Option 2 ID : 6306801746914  
Option 3 ID : 6306801746913  
Option 4 ID : 6306801746915  
Status : Answered  
Chosen Option : 1

Q.5 A wholesale dealer announced during the festival season that they are offering 'buy 4 shirts, get one free', then find the net discount percentage given by the dealer.

- Ans ☒ 1. 20%  
☒ 2. 10%  
☒ 3. 5%  
☒ 4. 15%

Question Type : MCQ  
Question ID : 630680405077  
Option 1 ID : 6306801579744  
Option 2 ID : 6306801579741  
Option 3 ID : 6306801579743  
Option 4 ID : 6306801579742  
Status : Answered  
Chosen Option : 1

# SSC MTS (Non Technical) EXAM STUDY KIT



FREE  
SHIPPING 

- ▶ 100% SSC MTS Exam Syllabus Covered
- ▶ PRINTED Notes
- ▶ 8 Books, 700+ Pages
- ▶ 2500+ MCQs
- ▶ Practice Papers
- ▶ 1 Year Current Affairs

**50%**  
**OFF**

 **SSCPORTAL.IN**

# SSC MTS PDF NOTES

100% Syllabus Covered



**50%**  
**OFF**

**CLICK HERE**

**CLICK BELOW LINK TO DOWNLOAD PDF NOTES**

<https://sscpportal.in/study-kit/mts>

<https://sscpportal.in/study-kit>

Q.6 An investment grows by 15% in the first month, 20% in the second month, and then decreases by 10% in the third month. If the initial investment was ₹5000, then the final amount (in ₹) is:

- Ans ☒ 1. 6,340  
☒ 2. 6,210  
☒ 3. 6,602  
☒ 4. 6,420

Question Type : MCQ  
Question ID : 630680481963  
Option 1 ID : 6306801882351  
Option 2 ID : 6306801882348  
Option 3 ID : 6306801882349  
Option 4 ID : 6306801882350  
Status : Answered  
Chosen Option : 2

Q.7 A runner runs 300 metres race in 36 seconds. The runner's speed in km/h is:

- Ans ☒ 1. 24  
☒ 2. 48  
☒ 3. 30  
☒ 4. 36

Question Type : MCQ  
Question ID : 630680102893  
Option 1 ID : 630680399831  
Option 2 ID : 630680399834  
Option 3 ID : 630680399832  
Option 4 ID : 630680399833  
Status : Answered  
Chosen Option : 3

Q.8 When a class of 40 students took a science test, 25 students had an average score of 80, and the remaining students had an average score of 90. What was the average score of the whole class?

- Ans ☒ 1. 82.75  
☒ 2. 80.75  
☒ 3. 83.75  
☒ 4. 81.75

Question Type : MCQ  
Question ID : 630680466668  
Option 1 ID : 6306801822653  
Option 2 ID : 6306801822655  
Option 3 ID : 6306801822652  
Option 4 ID : 6306801822654  
Status : Answered  
Chosen Option : 3

Q.9 Find the simple interest (in ₹) on ₹3000 as a sum borrowed at 8% per year rate of interest for 6 years.

- Ans ☒ 1. 1440  
☐ 2. 1400  
☐ 3. 1380  
☐ 4. 1480

Question Type : MCQ  
Question ID : 630680591952  
Option 1 ID : 6306802316275  
Option 2 ID : 6306802316278  
Option 3 ID : 6306802316277  
Option 4 ID : 6306802316276  
Status : Answered  
Chosen Option : 1

Q.10 If the average marks of three batches of 40, 50 and 60 students, respectively, is 50, 60 and 75, then the average marks of all the students is:

- Ans ☐ 1. 70.00  
☒ 2. 63.33  
☐ 3. 65.50  
☐ 4. 61.25

Question Type : MCQ  
Question ID : 630680447416  
Option 1 ID : 6306801746917  
Option 2 ID : 6306801746919  
Option 3 ID : 6306801746918  
Option 4 ID : 6306801746920  
Status : Answered  
Chosen Option : 2

Q.11 In an amusement park, all rides are equally priced, and the entry ticket for the park costs an additional ₹180. Rohan had 15 rides and paid a total of ₹1,380 for his visit to the park. How much (in ₹) in all would Rohan have to pay for his visit to the amusement park if he had opted for 20 rides?

- Ans ☐ 1. 1800  
☐ 2. 1760  
☒ 3. 1780  
☐ 4. 1840

Question Type : MCQ  
Question ID : 630680310176  
Option 1 ID : 6306801206836  
Option 2 ID : 6306801206835  
Option 3 ID : 6306801206833  
Option 4 ID : 6306801206834  
Status : Answered  
Chosen Option : 3

Q.12 A dishonest shopkeeper promises to sell his goods at cost price. However, he uses a weight that actually weighs 19% less than what is written on it. Find his profit percentage.

- Ans
- ☒ 1.  $25\frac{74}{81}\%$
  - ☒ 2.  $22\frac{37}{81}\%$
  - ☒ 3.  $23\frac{37}{81}\%$
  - ☒ 4.  $24\frac{38}{81}\%$

Question Type : MCQ

Question ID : 630680919326

Option 1 ID : 6306803602495

Option 2 ID : 6306803602496

Option 3 ID : 6306803602494

Option 4 ID : 6306803602497

Status : Answered

Chosen Option : 3

Q.13 The volume of a right circular cylinder is  $2425.5 \text{ cm}^3$  and its base area is  $346.5 \text{ cm}^2$ . What is the curved surface area of the cylinder (in  $\text{cm}^2$ )?

- Ans
- ☒ 1. 284
  - ☒ 2. 364
  - ☒ 3. 588
  - ☒ 4. 462

Question Type : MCQ

Question ID : 630680378019

Option 1 ID : 6306801473136

Option 2 ID : 6306801473135

Option 3 ID : 6306801473137

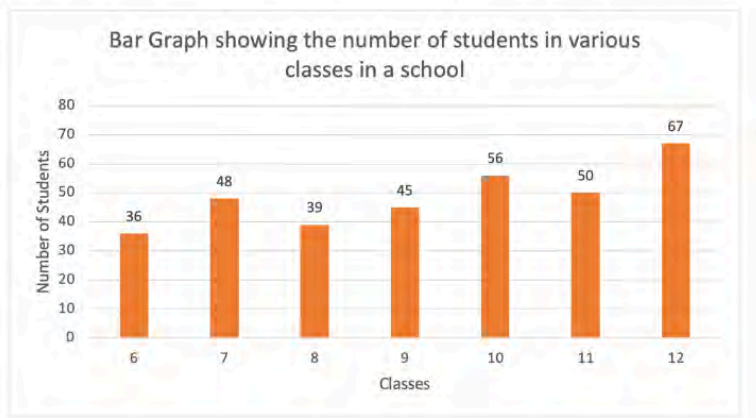
Option 4 ID : 6306801473138

Status : Not Answered

Chosen Option : --

Q.14

The bar graph below shows the number of students in various classes in a school. Study the graph below and answer the following question:



What is the ratio of the average number of students in classes 8, 9, 11, and 12 to the average number of students in classes 6, 7, 8, 9, 10 and 12?

- Ans ☒ 1. 201 : 194
- ☐ 2. 121 : 291
- ☐ 3. 194 : 201
- ☐ 4. 291 : 101

Question Type : MCQ  
Question ID : 630680421296  
Option 1 ID : 6306801643661  
Option 2 ID : 6306801643662  
Option 3 ID : 6306801643659  
Option 4 ID : 6306801643660  
Status : Answered  
Chosen Option : 1

Q.15 Vipul, Ashima, and Priya invested a total of ₹21,000 at 3%, 6%, and 5% per annum, respectively, on simple interest. If at the end of the year, all three persons received an equal amount of interest, then the amount (in ₹) invested by Ashima is:

- Ans ☐ 1. 3,000
- ☐ 2. 4,000
- ☒ 3. 5,000
- ☐ 4. 2,000

Question Type : MCQ  
Question ID : 630680397464  
Option 1 ID : 6306801549779  
Option 2 ID : 6306801549780  
Option 3 ID : 6306801549781  
Option 4 ID : 6306801549778  
Status : Answered  
Chosen Option : 3



Q.16 Consider the cost of services A and B by companies C, D, E and F in the given table.

Service → Company ↓	A	B
C	100	120
D	90	110
E	88	115
F	104	108

How much more percentage cost is charged for service B as compared to the cost of service A by company E?

- Ans ☒ 1. 36.08%  
☒ 2. 38.06%  
☒ 3. 30.68%  
☒ 4. 30.33%

Question Type : MCQ  
Question ID : 630680523787  
Option 1 ID : 6306802047302  
Option 2 ID : 6306802047300  
Option 3 ID : 6306802047301  
Option 4 ID : 6306802047299  
Status : Answered  
Chosen Option : 3

Q.17 The cost price of 25 balls is the same as the selling price of 20 balls. Find the profit percentage.

- Ans ☒ 1. 15%  
☒ 2. 18%  
☒ 3. 25%  
☒ 4. 16.66%

Question Type : MCQ  
Question ID : 630680109189  
Option 1 ID : 630680423571  
Option 2 ID : 630680423569  
Option 3 ID : 630680423570  
Option 4 ID : 630680423568  
Status : Answered  
Chosen Option : 3

Q.18 The batting average of a cricket player for 40 innings is 60 runs. His highest score in an innings exceeds his lowest score by 110 runs. If these two innings are excluded, the average score of the remaining 38 innings is 58 runs. Find his highest score.

- Ans ☒ 1. 153  
☒ 2. 220  
☒ 3. 310  
☒ 4. 290

Question Type : MCQ  
Question ID : 630680449396  
Option 1 ID : 6306801754712  
Option 2 ID : 6306801754709  
Option 3 ID : 6306801754711  
Option 4 ID : 6306801754710  
Status : Answered  
Chosen Option : 1



**Q.19** If the diagonal of a rectangle is 16 cm long and its perimeter is 48 cm long, find the area of the rectangle.

- Ans ☒ 1. 148 cm<sup>2</sup>  
☒ 2. 120 cm<sup>2</sup>  
☒ 3. 140 cm<sup>2</sup>  
☒ 4. 160 cm<sup>2</sup>

Question Type : **MCQ**  
Question ID : **63068068428**  
Option 1 ID : **630680264418**  
Option 2 ID : **630680264420**  
Option 3 ID : **630680264419**  
Option 4 ID : **630680264421**  
Status : **Not Answered**  
Chosen Option : --

**Q.20** Find the simple interest (in ₹) on ₹2000 as a sum borrowed at 7% per year rate of interest for 3 years.

- Ans ☒ 1. 380  
☒ 2. 420  
☒ 3. 360  
☒ 4. 460

Question Type : **MCQ**  
Question ID : **630680591874**  
Option 1 ID : **6306802315966**  
Option 2 ID : **6306802315963**  
Option 3 ID : **6306802315965**  
Option 4 ID : **6306802315964**  
Status : **Answered**  
Chosen Option : 2

Section : Reasoning Ability and Problem Solving

**Q.1** 4 is related to 32 following a certain logic. Following the same logic, 11 is related to 88.  
To which of the following is 6 related, following the same logic?  
(Note: Operations should be performed on the whole numbers, without breaking down the numbers into its constituent digits. E.g. 13 - Operations on 13 such as adding/subtracting/multiplying etc. to 13 can be performed. Breaking down 13 into 1 and 3 and then performing mathematical operations on 1 and 3 is not allowed.)

- Ans ☒ 1. 36  
☒ 2. 48  
☒ 3. 42  
☒ 4. 56

Question Type : **MCQ**  
Question ID : **630680799054**  
Option 1 ID : **6306803131019**  
Option 2 ID : **6306803131020**  
Option 3 ID : **6306803131018**  
Option 4 ID : **6306803131021**  
Status : **Answered**  
Chosen Option : 2

Q.2 VOJP is related to SLGM in a certain way based on the English alphabetical order. In the same way, XQLR is related to UNIO. To which of the following is ZSNT related following the same logic?

Ans ☒ 1. WPKQ

☐ 2. PWKQ

☐ 3. WPQK

☐ 4. PWQK

Question Type : MCQ

Question ID : 630680436066

Option 1 ID : 6306801702205

Option 2 ID : 6306801702207

Option 3 ID : 6306801702206

Option 4 ID : 6306801702208

Status : Answered

Chosen Option : 1

Q.3 Read the given statements and conclusions carefully. Assuming that the information given in the statements is true, even if it appears to be at variance with commonly known facts, decide which of the given conclusions logically follow(s) from the statements.

Statements:

- No book is a copy.
- All stones are books.

Conclusions:

(I) No copy is a stone.

(II) All books are stones.

Ans ☐ 1. Both conclusions (I) and (II) follow

☐ 2. Neither conclusion (I) nor (II) follows

☐ 3. Only conclusion (II) follows

☒ 4. Only conclusion (I) follows

Question Type : MCQ

Question ID : 630680404885

Option 1 ID : 6306801579034

Option 2 ID : 6306801579033

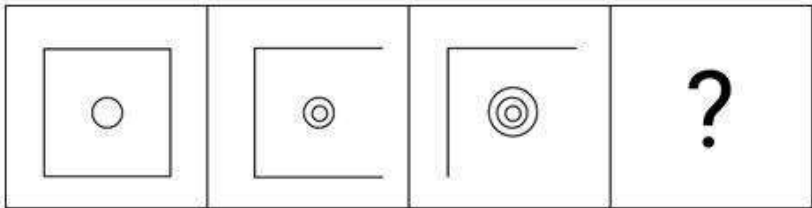
Option 3 ID : 6306801579032

Option 4 ID : 6306801579031

Status : Answered

Chosen Option : 4

Q.4 Identify the figure given in the options which when put in place of (?) will logically complete the series.

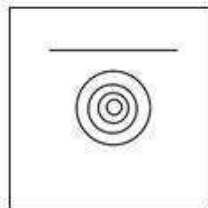


Ans

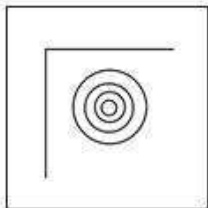
✗ 1.



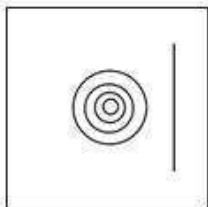
✓ 2.



✗ 3.



✗ 4.



Question Type : MCQ  
Question ID : 630680273999  
Option 1 ID : 6306801064517  
Option 2 ID : 6306801064516  
Option 3 ID : 6306801064515  
Option 4 ID : 6306801064518  
Status : Answered  
Chosen Option : 2

Q.5 Seven people A, B, C, D, E, F and G are sitting around a circular table, facing the centre (but not necessarily in the same order). Only three people are sitting between C and G when counted from the right of C. E is sitting third to the left of G. Exactly one person is sitting between E and F when counted from the left of E. D is sitting to the immediate left of B. How many people are sitting between A and D when counted from the left of A?

- Ans ☒ 1. 4  
☒ 2. 2  
☒ 3. 1  
☒ 4. 3

Question Type : MCQ  
Question ID : 630680387576  
Option 1 ID : 6306801510989  
Option 2 ID : 6306801510987  
Option 3 ID : 6306801510986  
Option 4 ID : 6306801510988  
Status : Answered  
Chosen Option : 4

Q.6 M, N, O, P, Q, R and S are sitting around a circular table facing the centre (but not necessarily in the same order). Q is an immediate neighbour of both R and P. M sits second to the left of R. O sits second to the left of M. S is not an immediate neighbour of O. The position of how many persons will remain unchanged if all persons are arranged in alphabetical order in a clockwise direction starting from 'M'?

- Ans ☒ 1. Six  
☒ 2. Four  
☒ 3. Seven  
☒ 4. Five

Question Type : MCQ  
Question ID : 630680383283  
Option 1 ID : 6306801494032  
Option 2 ID : 6306801494034  
Option 3 ID : 6306801494031  
Option 4 ID : 6306801494033  
Status : Answered  
Chosen Option : 4

Q.7 What should come in place of the question mark (?) in the following series based on the English alphabetical order?  
YDY, WGT, UJO, SMJ, ?

- Ans ☒ 1. PPE  
☒ 2. QPE  
☒ 3. PPD  
☒ 4. PPF

Question Type : MCQ  
Question ID : 630680459283  
Option 1 ID : 6306801793986  
Option 2 ID : 6306801793985  
Option 3 ID : 6306801793988  
Option 4 ID : 6306801793987  
Status : Answered  
Chosen Option : 2

Q.8 In a certain code language, 'MANAGE' is coded as 'KEREQ' and 'RACE' is coded as 'IGEV'. What is the code for 'SYMPHONY' in the given code language?

- Ans  1. CRSLSQCW  
 2. CRSLTQCW  
 3. CRSLTRCW  
 4. CRSLTPCW

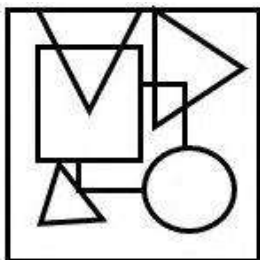
Question Type : MCQ  
Question ID : 630680387812  
Option 1 ID : 6306801511885  
Option 2 ID : 6306801511882  
Option 3 ID : 6306801511883  
Option 4 ID : 6306801511884  
Status : Answered  
Chosen Option : 2

Q.9 Select the option in which the given figure is embedded (rotation is NOT allowed).

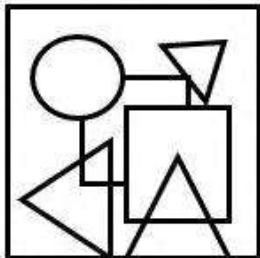


Ans

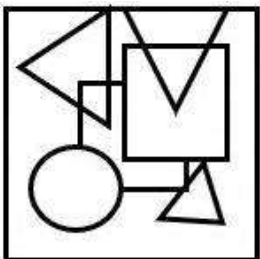
✗ 1.



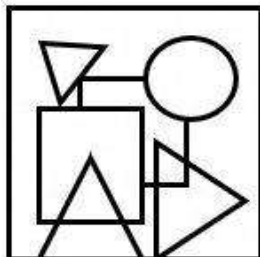
✗ 2.



✗ 3.



✓ 4.



Question Type : MCQ  
Question ID : 630680524455  
Option 1 ID : 6306802049922  
Option 2 ID : 6306802049919  
Option 3 ID : 6306802049920  
Option 4 ID : 6306802049921  
Status : Answered  
Chosen Option : 4

Q.10 What should come in place of the question mark (?) in the given series?

647 614 581 548 515 ?

- Ans ☒ 1. 402  
☒ 2. 482  
☒ 3. 505  
☒ 4. 491

Question Type : MCQ  
Question ID : 630680816786  
Option 1 ID : 6306803209232  
Option 2 ID : 6306803209235  
Option 3 ID : 6306803209233  
Option 4 ID : 6306803209234  
Status : Answered  
Chosen Option : 2

Q.11 Select the set in which the numbers are related in the same way as are the numbers of the following sets.

(NOTE : Operations should be performed on the whole numbers, without breaking down the numbers into its constituent digits. E.g. 13 – Operations on 13 such as adding /deleting /multiplying etc. to 13 can be performed. Breaking down 13 into 1 and 3 and then performing mathematical operations on 1 and 3 is not allowed)  
(9, 63, 7)  
(27, 189, 21)

- Ans ☒ 1. (45, 310, 35)  
☒ 2. (45, 315, 35)  
☒ 3. (45, 315, 33)  
☒ 4. (40, 315, 35)

Question Type : MCQ  
Question ID : 630680381026  
Option 1 ID : 6306801485081  
Option 2 ID : 6306801485082  
Option 3 ID : 6306801485079  
Option 4 ID : 6306801485080  
Status : Not Answered  
Chosen Option : --

Q.12 Which two numbers should be interchanged to make the following equation correct?

$(15 \div 3) \times 11 + 48 - 21 \times 2 + 8 = 57$

(Note: Interchange should be done of the entire number and not individual digits of a given number.)

- Ans ☒ 1. 15 and 21  
☒ 2. 11 and 8  
☒ 3. 21 and 8  
☒ 4. 15 and 48

Question Type : MCQ  
Question ID : 630680397647  
Option 1 ID : 6306801550512  
Option 2 ID : 6306801550511  
Option 3 ID : 6306801550510  
Option 4 ID : 6306801550509  
Status : Not Answered  
Chosen Option : --

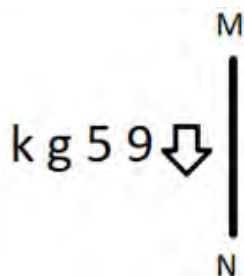






Q.13 In a code language, 'HWCY' is coded as 'KBJH' and 'REPU' is coded as 'UJWD'. How will 'AXMQ' be coded in that language?

- Ans ☒ 1. CBSY  
☒ 2. DCTZ  
☒ 3. ECUZ  
☒ 4. DBTY

Question Type : MCQ  
Question ID : 630680465311  
Option 1 ID : 6306801817281  
Option 2 ID : 6306801817282  
Option 3 ID : 6306801817279  
Option 4 ID : 6306801817280  
Status : Answered  
Chosen Option : 2

Q.14 Select the correct mirror image of the given figure when the mirror is placed at MN as shown below.



- Ans ☒ 1.  e z k g  
☒ 2.  e z g k  
☒ 3.  e z g k  
☒ 4.  e z k g

Question Type : MCQ  
Question ID : 630680525277  
Option 1 ID : 6306802053194  
Option 2 ID : 6306802053193  
Option 3 ID : 6306802053192  
Option 4 ID : 6306802053195  
Status : Answered  
Chosen Option : 2

# SSC MTS (Non Technical) EXAM STUDY KIT



FREE  
SHIPPING 

- ▶ 100% SSC MTS Exam Syllabus Covered
- ▶ PRINTED Notes
- ▶ 8 Books, 700+ Pages
- ▶ 2500+ MCQs
- ▶ Practice Papers
- ▶ 1 Year Current Affairs

**50%**  
OFF

 SSCPOTAL.IN

# SSC MTS PDF NOTES

100% Syllabus Covered



CLICK HERE

CLICK BELOW LINK TO DOWNLOAD PDF NOTES

<https://sscpportal.in/study-kit/mts>

<https://sscpportal.in/study-kit>

Q.15 Select the figure from among the given options that can replace the question mark (?) in the following series and complete the pattern.

N	Y	P	3	N	O	Y	3	
	O		Y		P		O	?
3	P	O	N	3	Y	P	N	

Ans

✓ 1.

N	P	
	Y	
3		O

✗ 2.

N	P	
	O	
3		Y

✗ 3.

N	P	
	3	
	O	Y

✗ 4.

N	Y	
	3	
	O	P

Question Type : MCQ  
Question ID : 630680441077  
Option 1 ID : 6306801721964  
Option 2 ID : 6306801721962  
Option 3 ID : 6306801721963  
Option 4 ID : 6306801721965  
Status : Answered  
Chosen Option : 1

Q.16 What will come in place of the question mark (?) in the following equation, if '+' and '-' are interchanged and 'x' and '÷' are interchanged?  
 $18 \div 5 + 8 \times 4 - 3 = ?$

- Ans
- ✗ 1. 85
- ✗ 2. 83
- ✓ 3. 91
- ✗ 4. 78

Question Type : MCQ  
Question ID : 630680392940  
Option 1 ID : 6306801532098  
Option 2 ID : 6306801532099  
Option 3 ID : 6306801532101  
Option 4 ID : 6306801532100  
Status : Answered  
Chosen Option : 3

Q.17 In a certain code language, 'DONE' is coded as '7139' and 'TERM' is coded as '6874'. What is the code for 'E' in the given code language?

- Ans ☒ 1. 9  
☒ 2. 6  
☒ 3. 7  
☒ 4. 8

Question Type : MCQ  
Question ID : 630680435933  
Option 1 ID : 6306801701684  
Option 2 ID : 6306801701682  
Option 3 ID : 6306801701681  
Option 4 ID : 6306801701683  
Status : Answered  
Chosen Option : 3

Q.18 Read the given statement(s) and conclusions carefully. Assuming that the information given in the statements is true, even if it appears to be at variance with commonly known facts, decide which of the given conclusions logically follow(s) from the statement(s).

Statements:  
Some branches are leaves.  
Some leaves are cables.

Conclusions:  
(I) Atleast some cables are branches.  
(II) Some cables are leaves.

- Ans ☒ 1. Only conclusion (I) follows.  
☒ 2. Both conclusions (I) and (II) follow.  
☒ 3. Only conclusion (II) follows.  
☒ 4. Neither conclusion (I) nor (II) follows.

Question Type : MCQ  
Question ID : 630680410520  
Option 1 ID : 6306801600800  
Option 2 ID : 6306801600803  
Option 3 ID : 6306801600801  
Option 4 ID : 6306801600802  
Status : Answered  
Chosen Option : 3

Q.19 In a certain code language, 'CAREER' is coded as 'EBTFGS' and 'CARING' is coded as 'EBTJPH'. How will 'CENTER' be coded in the same language?

- Ans ☒ 1. DGOVFT  
☒ 2. EFPUGS  
☒ 3. EFPVGS  
☒ 4. DFPVFT

Question Type : MCQ  
Question ID : 630680465302  
Option 1 ID : 6306801817243  
Option 2 ID : 6306801817244  
Option 3 ID : 6306801817245  
Option 4 ID : 6306801817246  
Status : Answered  
Chosen Option : 2

Q.20 FD7 is related to KI12 in a certain way. In the same way, PN18 is related to US23. To which of the following is AY21 related following the same logic?

- Ans
- ☒ 1. FD25
  - ☒ 2. HF25
  - ☒ 3. HF26
  - ☒ 4. FD26

Question Type : MCQ  
Question ID : 630680438831  
Option 1 ID : 6306801713136  
Option 2 ID : 6306801713139  
Option 3 ID : 6306801713137  
Option 4 ID : 6306801713138  
Status : Answered  
Chosen Option : 4

Section : General Awareness

Q.1 The last Chalukyan King, defeated by the Rashtrakuta King Dantidurga, was

- Ans
- ☒ 1. Vikramaditya I
  - ☒ 2. Kirtivarman II
  - ☒ 3. Vikramaditya II
  - ☒ 4. Pulakesin II

Question Type : MCQ  
Question ID : 630680682730  
Option 1 ID : 6306802673665  
Option 2 ID : 6306802673666  
Option 3 ID : 6306802673664  
Option 4 ID : 6306802673663  
Status : Answered  
Chosen Option : 2

Q.2 A disease like COVID-19 is a kind of:

- Ans
- ☒ 1. Zoonotic disease
  - ☒ 2. Protein Deficiency disease
  - ☒ 3. Waterborne disease
  - ☒ 4. Foodborne disease

Question Type : MCQ  
Question ID : 630680451633  
Option 1 ID : 6306801763630  
Option 2 ID : 6306801763633  
Option 3 ID : 6306801763631  
Option 4 ID : 6306801763632  
Status : Answered  
Chosen Option : 1

Q.3 Who among the following is the dance guru from Odisha credited with having revived the Odissi dance form?

- Ans ☒ 1. Birju Maharaj  
☒ 2. Sujata Mohapatra  
☒ 3. Vyjayanthimala  
☒ 4. Kelucharan Mohapatra

Question Type : MCQ  
Question ID : 630680537241  
Option 1 ID : 6306802100232  
Option 2 ID : 6306802100233  
Option 3 ID : 6306802100235  
Option 4 ID : 6306802100234  
Status : Answered  
Chosen Option : 4

Q.4 As per Census 2011, which of the following states has the highest percentage of Buddhist population in India?

- Ans ☒ 1. Arunachal Pradesh  
☒ 2. Himachal Pradesh  
☒ 3. Sikkim  
☒ 4. Karnataka

Question Type : MCQ  
Question ID : 630680510922  
Option 1 ID : 6306801996819  
Option 2 ID : 6306801996820  
Option 3 ID : 6306801996818  
Option 4 ID : 6306801996821  
Status : Answered  
Chosen Option : 2

Q.5 Which of the following harvest and cultural festivals is celebrated by the Tamil community every year in January?

- Ans ☒ 1. Makaravillakku  
☒ 2. Vishu  
☒ 3. Theyyam  
☒ 4. Pongal

Question Type : MCQ  
Question ID : 630680546731  
Option 1 ID : 6306802137494  
Option 2 ID : 6306802137497  
Option 3 ID : 6306802137496  
Option 4 ID : 6306802137495  
Status : Answered  
Chosen Option : 4

Q.6 In 2023, which repository is proposed to be set up in a digital epigraphy museum, with digitisation of one lakh ancient inscriptions in the first stage?

- Ans ☒ 1. Progressive Repository of Indigenous Folklore  
☒ 2. Amrit Repository of Numismatic Collection  
☒ 3. Bharat Shared Repository of Inscriptions  
☒ 4. Indian Repository of Classical Coins

Question Type : MCQ  
Question ID : 630680467067  
Option 1 ID : 6306801824223  
Option 2 ID : 6306801824224  
Option 3 ID : 6306801824221  
Option 4 ID : 6306801824222  
Status : Not Answered  
Chosen Option : --

Q.7 In 1836, \_\_\_\_\_ became the Governor General of India.

- Ans ☒ 1. Lord Hastings  
☒ 2. Earl of Auckland  
☒ 3. Lord Curzon  
☒ 4. Robert Clive

Question Type : MCQ  
Question ID : 630680275905  
Option 1 ID : 6306801072134  
Option 2 ID : 6306801072131  
Option 3 ID : 6306801072132  
Option 4 ID : 6306801072133  
Status : Answered  
Chosen Option : 1

Q.8 In which year was the first Senior Women's National Football Championship held in India?

- Ans ☒ 1. 2000  
☒ 2. 1995  
☒ 3. 1992  
☒ 4. 1950

Question Type : MCQ  
Question ID : 630680572012  
Option 1 ID : 6306802236919  
Option 2 ID : 6306802236917  
Option 3 ID : 6306802236916  
Option 4 ID : 6306802236918  
Status : Not Answered  
Chosen Option : --



Q.9 The GV Raja Memorial Trophy, Sir Ashutosh Mukherjee Trophy and Santosh Trophy are related to which of the following sports in India?

- Ans ☒ 1. Hockey  
☒ 2. Cricket  
☒ 3. Tennis  
☒ 4. Football

Question Type : MCQ  
Question ID : 630680546830  
Option 1 ID : 6306802137888  
Option 2 ID : 6306802137887  
Option 3 ID : 6306802137890  
Option 4 ID : 6306802137889  
Status : Not Answered  
Chosen Option : --

Q.10 In February 2023, who was appointed as the new Governor of Himachal Pradesh?

- Ans ☒ 1. Satyadev Narayan Arya  
☒ 2. Kalraj Mishra  
☒ 3. Bandaru Dattatreya  
☒ 4. Shiv Pratap Shukla

Question Type : MCQ  
Question ID : 630680488536  
Option 1 ID : 6306801908177  
Option 2 ID : 6306801908178  
Option 3 ID : 6306801908176  
Option 4 ID : 6306801908175  
Status : Not Answered  
Chosen Option : --

Q.11 The temperature of  $-273.15^{\circ}\text{C}$  is called \_\_\_\_\_.

- Ans ☒ 1. standard temperature  
☒ 2. zero-point energy  
☒ 3. freezing point of water  
☒ 4. absolute zero temperature

Question Type : MCQ  
Question ID : 630680471364  
Option 1 ID : 6306801841181  
Option 2 ID : 6306801841179  
Option 3 ID : 6306801841180  
Option 4 ID : 6306801841178  
Status : Not Answered  
Chosen Option : --

Q.12 As per Article 163 of the Constitution of India, any advice tendered by Ministers to the \_\_\_\_\_ shall not be inquired into in any court.

- Ans ☒ 1. Governor
- ☐ 2. President
- ☐ 3. Chief Minister
- ☐ 4. Chief Justice

Question Type : MCQ  
Question ID : 630680302224  
Option 1 ID : 6306801175571  
Option 2 ID : 6306801175570  
Option 3 ID : 6306801175572  
Option 4 ID : 6306801175573  
Status : Answered  
Chosen Option : 1

Q.13 Who is properly known as the 'Grand Old Lady' of the Independence Movement?

- Ans ☒ 1. Aruna Asaf Ali
- ☐ 2. Sarojini Naidu
- ☐ 3. Madam Kama
- ☐ 4. Usha Mehta

Question Type : MCQ  
Question ID : 630680511598  
Option 1 ID : 6306801999516  
Option 2 ID : 6306801999515  
Option 3 ID : 6306801999514  
Option 4 ID : 6306801999517  
Status : Answered  
Chosen Option : 2

Q.14 Which of the following river valleys is NOT known for coal deposits in India?

- Ans ☐ 1. Mahanadi
- ☒ 2. Satluj
- ☐ 3. Godavari
- ☐ 4. Son

Question Type : MCQ  
Question ID : 630680510952  
Option 1 ID : 6306801996939  
Option 2 ID : 6306801996941  
Option 3 ID : 6306801996938  
Option 4 ID : 6306801996940  
Status : Not Answered  
Chosen Option : --

Q.15 In which of the following cities was the first successful textile mill established in India in the year 1854?

- Ans ☒ 1. Bombay
- ☐ 2. Bhopal
- ☐ 3. Calcutta
- ☐ 4. New Delhi

Question Type : MCQ  
Question ID : 630680798972  
Option 1 ID : 6306803130686  
Option 2 ID : 6306803130688  
Option 3 ID : 6306803130687  
Option 4 ID : 6306803130689  
Status : Answered  
Chosen Option : 3

Q.16 The Directive Principles of State Policy are influenced by which of the following?

- Ans ☒ 1. Gandhian philosophy
- ☐ 2. American declaration of independence
- ☐ 3. Rule of Law of England
- ☐ 4. French declaration of human rights

Question Type : MCQ  
Question ID : 630680759515  
Option 1 ID : 6306802976972  
Option 2 ID : 6306802976971  
Option 3 ID : 6306802976973  
Option 4 ID : 6306802976970  
Status : Answered  
Chosen Option : 1

Q.17 The amount of dissolved oxygen in water becomes lowest at what time of the day?

- Ans ☐ 1. In the evening
- ☐ 2. In the afternoon
- ☐ 3. At night time
- ☒ 4. In the dawn

Question Type : MCQ  
Question ID : 630680404256  
Option 1 ID : 6306801576529  
Option 2 ID : 6306801576527  
Option 3 ID : 6306801576528  
Option 4 ID : 6306801576526  
Status : Answered  
Chosen Option : 2

Q.18 Chitti Babu is a famous player of which of the following musical instruments?

- Ans ☒ 1. Mridangam  
☒ 2. Veena  
☒ 3. Nadaswaran  
☒ 4. Sarangi

Question Type : MCQ  
Question ID : 630680482428  
Option 1 ID : 6306801884191  
Option 2 ID : 6306801884192  
Option 3 ID : 6306801884190  
Option 4 ID : 6306801884193  
Status : Not Answered  
Chosen Option : --

Q.19 Which of the following awards was conferred upon the Chhau dancer Siba Prasad Das in 2022?

- Ans ☒ 1. Sangeet Natak Akademi Fellowship  
☒ 2. Ustad Bismillah Khan Yuva Puraskar  
☒ 3. Padma Shri  
☒ 4. Sangeet Natak Akademi Amrit Award

Question Type : MCQ  
Question ID : 630680215985  
Option 1 ID : 630680837915  
Option 2 ID : 630680837917  
Option 3 ID : 630680837918  
Option 4 ID : 630680837916  
Status : Not Answered  
Chosen Option : --

Q.20 Which of the following microfinance units were established in India at the time of independence?

- Ans ☒ 1. Self Help Groups  
☒ 2. Grameen Model Banks  
☒ 3. Rural Cooperatives  
☒ 4. Joint Liability Groups

Question Type : MCQ  
Question ID : 630680100172  
Option 1 ID : 630680389384  
Option 2 ID : 630680389387  
Option 3 ID : 630680389386  
Option 4 ID : 630680389385  
Status : Answered  
Chosen Option : 1

Q.21 The Early Vedic economy was primarily based on \_\_\_\_\_ activity.

- Ans ☒ 1. pastoral  
☐ 2. agricultural  
☐ 3. Mining Iron ore  
☐ 4. trading

Question Type : MCQ  
Question ID : 630680200001  
Option 1 ID : 630680775441  
Option 2 ID : 630680775443  
Option 3 ID : 630680775440  
Option 4 ID : 630680775442  
Status : Answered  
Chosen Option : 1

Q.22 Select the correct combination of famous palaces and their locations in Rajasthan.

- Ans ☐ 1. Umaid Bhawan Palace – Udaipur  
☒ 2. Lalgarh Palace - Bikaner  
☐ 3. Rambagh Palace – Jodhpur  
☐ 4. Taj Lake Palace – Jaipur

Question Type : MCQ  
Question ID : 630680512076  
Option 1 ID : 6306802001276  
Option 2 ID : 6306802001275  
Option 3 ID : 6306802001277  
Option 4 ID : 6306802001274  
Status : Not Answered  
Chosen Option : --

Q.23 Who is the author of the novel 'Life and Death of Sambhaji' published in the year 2021?

- Ans ☐ 1. Rita Banerji  
☒ 2. Medha Deshmukh Bhaskaran  
☐ 3. Chitra Banerjee Divakaruni  
☐ 4. Amish Tripathi

Question Type : MCQ  
Question ID : 630680512099  
Option 1 ID : 6306802001367  
Option 2 ID : 6306802001366  
Option 3 ID : 6306802001369  
Option 4 ID : 6306802001368  
Status : Not Answered  
Chosen Option : --

Q.24 What does Age Structure represent?

- Ans ☒ 1. The number of females per 100 males in a given area at a specified time period
- ☒ 2. The proportion of persons in different age groups relative to the total population
- ☒ 3. The number of females per 1000 males in a given area at a specified time period
- ☒ 4. A measure comparing the portion of a population composed of dependents with the portion that is in the working age group

Question Type : MCQ  
Question ID : 630680100543  
Option 1 ID : 630680390868  
Option 2 ID : 630680390869  
Option 3 ID : 630680390870  
Option 4 ID : 630680390871  
Status : Not Answered  
Chosen Option : --

Q.25 The percentage of sunlight energy absorbed by the green plants in a terrestrial ecosystem is about \_\_\_\_\_.

- Ans ☒ 1. 0.5%
- ☒ 2. 1%
- ☒ 3. 1.5%
- ☒ 4. 2%

Question Type : MCQ  
Question ID : 630680743308  
Option 1 ID : 6306802913531  
Option 2 ID : 6306802913532  
Option 3 ID : 6306802913533  
Option 4 ID : 6306802913534  
Status : Answered  
Chosen Option : 2

Section : English Language and Comprehension

Q.1 Select the most appropriate ANTONYM of the underlined word in the given sentence.

Although our new boss knew he was wrong, he was too obstinate to accept that.

- Ans ☒ 1. Flexible
- ☒ 2. Competent
- ☒ 3. Adamant
- ☒ 4. Fearless

Question Type : MCQ  
Question ID : 630680523389  
Option 1 ID : 6306802045733  
Option 2 ID : 6306802045735  
Option 3 ID : 6306802045734  
Option 4 ID : 6306802045736  
Status : Answered  
Chosen Option : 1

Q.2 Select the most appropriate ANTONYM of the given word.

Procrastination

- Ans ☒ 1. Timidness  
☒ 2. Hesitance  
☒ 3. Eagerness  
☒ 4. Hawing

Question Type : MCQ  
Question ID : 630680799102  
Option 1 ID : 6306803131209  
Option 2 ID : 6306803131207  
Option 3 ID : 6306803131206  
Option 4 ID : 6306803131208  
Status : Not Answered  
Chosen Option : --

Q.3 Select the most appropriate meaning of the given idiom.  
Like a bat out of hell

- Ans ☒ 1. Defeated  
☒ 2. In a bad situation  
☒ 3. Impossible  
☒ 4. Very fast and wildly

Question Type : MCQ  
Question ID : 630680436142  
Option 1 ID : 6306801702510  
Option 2 ID : 6306801702509  
Option 3 ID : 6306801702511  
Option 4 ID : 6306801702512  
Status : Not Answered  
Chosen Option : --

Q.4 In the following sentence the underlined part contains as error. Alternatives to the underlined part are given as options. Select the correct alternative.  
He is truest to his words.

- Ans ☒ 1. truly  
☒ 2. most truly  
☒ 3. truer  
☒ 4. true

Question Type : MCQ  
Question ID : 630680514724  
Option 1 ID : 6306802011523  
Option 2 ID : 6306802011522  
Option 3 ID : 6306802011521  
Option 4 ID : 6306802011524  
Status : Answered  
Chosen Option : 4



**Q.5** The following sentence has been divided into parts. One of them may contain an error. Select the part that contains the error from the given options. If you don't find any error, mark 'No error' as your answer.  
This is the best novel / I have read, / in a very long time.

- Ans** ☒ 1. No error  
☐ 2. I have read  
☐ 3. in a very long time  
☐ 4. This is the best novel

Question Type : **MCQ**  
Question ID : **630680449838**  
Option 1 ID : **6306801756522**  
Option 2 ID : **6306801756520**  
Option 3 ID : **6306801756521**  
Option 4 ID : **6306801756519**  
Status : **Answered**  
Chosen Option : **3**

**Q.6** Select the option that will improve the underlined part of the given sentence.  
Seizing the opportunity, Akhil decided to take the bull with the horns.

- Ans** ☐ 1. take the bull at the horns  
☐ 2. take the bull on the horns  
☒ 3. take the bull by the horns  
☐ 4. take the bull in the horns

Question Type : **MCQ**  
Question ID : **630680527010**  
Option 1 ID : **6306802060076**  
Option 2 ID : **6306802060074**  
Option 3 ID : **6306802060075**  
Option 4 ID : **6306802060073**  
Status : **Not Answered**  
Chosen Option : **--**

**Q.7** In the following sentence the underlined part contains as error. Alternatives to the underlined part are given as options. Select the correct alternative.  
He was studying in the dimmer light.

- Ans** ☐ 1. most dim  
☐ 2. dimmest  
☐ 3. more dim  
☒ 4. dim

Question Type : **MCQ**  
Question ID : **630680514722**  
Option 1 ID : **6306802011514**  
Option 2 ID : **6306802011516**  
Option 3 ID : **6306802011513**  
Option 4 ID : **6306802011515**  
Status : **Answered**  
Chosen Option : **2**

Q.8 Select the most appropriate synonym of the underlined word.  
Her austere lifestyle reflected her minimalist approach to living.

- Ans ☒ 1. Luxurious  
☒ 2. Giddy  
☒ 3. Happy  
☒ 4. Sombre

Question Type : MCQ  
Question ID : 630680726514  
Option 1 ID : 6306802847063  
Option 2 ID : 6306802847062  
Option 3 ID : 6306802847064  
Option 4 ID : 6306802847065  
Status : Answered  
Chosen Option : 1

Q.9 Identify the word that can replace the INCORRECTLY spelt word  
in the given sentence.

The explorer discovered a hiddden cave deep in the heart of the  
jungle.

- Ans ☒ 1. hiddeen  
☒ 2. hidden  
☒ 3. hiden  
☒ 4. hiddenn

Question Type : MCQ  
Question ID : 630680474901  
Option 1 ID : 6306801855218  
Option 2 ID : 6306801855220  
Option 3 ID : 6306801855219  
Option 4 ID : 6306801855221  
Status : Answered  
Chosen Option : 2

Q.10 Select the most appropriate option to fill in the blank.  
Please \_\_\_\_\_ with me for a while

- Ans ☒ 1. bear  
☒ 2. bairn  
☒ 3. bar  
☒ 4. bare

Question Type : MCQ  
Question ID : 630680435050  
Option 1 ID : 6306801698115  
Option 2 ID : 6306801698117  
Option 3 ID : 6306801698118  
Option 4 ID : 6306801698116  
Status : Answered  
Chosen Option : 1

Q.11 The following sentence has been split into four segments. Identify the segment that contains a grammatical error.

The sky is covering / with dark clouds and / I hope soon it / will begin to rain.

Ans ☒ 1. The sky is covering

☐ 2. will begin to rain

☐ 3. I hope soon it

☐ 4. with dark clouds and

Question Type : MCQ

Question ID : 630680533291

Option 1 ID : 6306802084645

Option 2 ID : 6306802084648

Option 3 ID : 6306802084647

Option 4 ID : 6306802084646

Status : Answered

Chosen Option : 4

Q.12 Select the most appropriate ANTONYM of the underlined word.  
You seem to be mean to your seniors.

Ans ☐ 1. modest

☐ 2. apathetic

☒ 3. sympathetic

☐ 4. rude

Question Type : MCQ

Question ID : 630680517459

Option 1 ID : 6306802022235

Option 2 ID : 6306802022233

Option 3 ID : 6306802022234

Option 4 ID : 6306802022232

Status : Answered

Chosen Option : 4

Q.13 Select the most appropriate option to substitute the underlined segment in the given sentence.

Heba dropped of the club unexpectedly to say hello and catch up.

Ans ☒ 1. dropped by the club unexpectedly

☐ 2. dropped between the club unexpectedly

☐ 3. dropped besides the club unexpectedly

☐ 4. dropped for the club unexpectedly

Question Type : MCQ

Question ID : 630680549229

Option 1 ID : 6306802147381

Option 2 ID : 6306802147383

Option 3 ID : 6306802147384

Option 4 ID : 6306802147382

Status : Answered

Chosen Option : 2

Q.14 Select the option that correctly rectifies the underlined spelling error in the given sentence.  
Women and children were often employed in the textile industry during the first centuary of industrialisation.

- Ans ☒ 1. century  
☐ 2. centuarie  
☐ 3. centuari  
☐ 4. centurie

Question Type : MCQ  
Question ID : 630680467632  
Option 1 ID : 6306801826458  
Option 2 ID : 6306801826461  
Option 3 ID : 6306801826459  
Option 4 ID : 6306801826460  
Status : Answered  
Chosen Option : 1

Q.15 Select the most appropriate option to fill in the blank.  
\_\_\_\_\_ we gave them was some homemade ice cream.

- Ans ☐ 1. While  
☐ 2. Which  
☒ 3. What  
☐ 4. When

Question Type : MCQ  
Question ID : 630680515219  
Option 1 ID : 6306802013342  
Option 2 ID : 6306802013343  
Option 3 ID : 6306802013344  
Option 4 ID : 6306802013341  
Status : Answered  
Chosen Option : 4

Q.16 The given sentence is divided into three segments. Select the option that has the segment with a grammatical error. If there is no error, select 'No error'.  
The committee has careful / considered the report which you sent us / and has decided to take action.

- Ans ☐ 1. considered the report which you sent us  
☐ 2. and has decided to take action.  
☐ 3. No error  
☒ 4. The committee has careful

Question Type : MCQ  
Question ID : 630680295249  
Option 1 ID : 6306801148721  
Option 2 ID : 6306801148722  
Option 3 ID : 6306801148723  
Option 4 ID : 6306801148720  
Status : Answered  
Chosen Option : 1

Q.17 Select the option that rectifies the spelling error in the following sentence.

In his persuit of excellence, he forgot to take care of his health.

- Ans ☒ 1. pursuite  
☒ 2. pursuit  
☒ 3. persuite  
☒ 4. persoot

Question Type : MCQ  
Question ID : 630680566507  
Option 1 ID : 6306802215019  
Option 2 ID : 6306802215017  
Option 3 ID : 6306802215018  
Option 4 ID : 6306802215016  
Status : Answered  
Chosen Option : 2

Q.18 The following sentence has been divided into parts. One of them may contain an error.  
Select the part that contains the error from the given options. If you don't find any error, mark 'No error' as your answer.  
Sam and Teena / had wondering / what to do this weekend.

- Ans ☒ 1. Sam and Teena  
☒ 2. had wondering  
☒ 3. what to do this weekend  
☒ 4. No error

Question Type : MCQ  
Question ID : 630680421193  
Option 1 ID : 6306801643247  
Option 2 ID : 6306801643248  
Option 3 ID : 6306801643249  
Option 4 ID : 6306801643250  
Status : Answered  
Chosen Option : 2

Q.19 Select the most appropriate option to fill in the blank.  
The rising interest in and concern about animal welfare resulted in legislative laws and the formation of The Animal \_\_\_\_\_ Committee in many nations.

- Ans ☒ 1. Considers  
☒ 2. Ethics  
☒ 3. Customs  
☒ 4. Resistant

Question Type : MCQ  
Question ID : 630680515259  
Option 1 ID : 6306802013502  
Option 2 ID : 6306802013501  
Option 3 ID : 6306802013504  
Option 4 ID : 6306802013503  
Status : Answered  
Chosen Option : 1

Q.20 Select the most appropriate meaning of the given idiom.

at top of your lungs

- Ans ☒ 1. pretend superiority  
☒ 2. exhausted  
☒ 3. extremely silly  
☒ 4. extremely loudly

Question Type : MCQ

Question ID : 630680441748

Option 1 ID : 6306801724598

Option 2 ID : 6306801724601

Option 3 ID : 6306801724600

Option 4 ID : 6306801724599

Status : Answered

Chosen Option : 4

**Comprehension:**

In the following passage, some words have been deleted. Read the passage carefully and select the most appropriate option to fill in each blank.

Language is a powerful device that (1)\_\_\_\_\_ communication and interaction between individuals. It serves as a crucial tool for expressing thoughts, emotions, and ideas. (2)\_\_\_\_\_ richness of language can be observed in various forms, including spoken and written interaction. People employ language to convey their intentions, share knowledge, and build relationships. It is a fundamental aspect of human interaction and plays a vital role in shaping societies and cultures. Without language, cooperation would be (3)\_\_\_\_\_, as it serves as the foundation for collaboration and understanding among diverse communities. Furthermore, language is dynamic and stationary, evolving over time to adapt to changing environments. New words are (4)\_\_\_\_\_ into the vocabulary, reflecting advancements in technology, science and culture. The ability to modify and adapt language is a key aspect of linguistic competence. (5)\_\_\_\_\_, the importance of language cannot be underestimated. It is a fundamental tool for human expression and interaction, facilitating the exchange of ideas and the formation of connections among people.

SubQuestion No : 21

Q.21 Select the most appropriate option to fill in blank number 1.

- Ans ☒ 1. delays  
☒ 2. facilitates  
☒ 3. qualifies  
☒ 4. experiences

Question Type : MCQ

Question ID : 630680555946

Option 1 ID : 6306802173162

Option 2 ID : 6306802173163

Option 3 ID : 6306802173161

Option 4 ID : 6306802173160

Status : Answered

Chosen Option : 2

**Comprehension:**

In the following passage, some words have been deleted. Read the passage carefully and select the most appropriate option to fill in each blank.

Language is a powerful device that (1)\_\_\_\_\_ communication and interaction between individuals. It serves as a crucial tool for expressing thoughts, emotions, and ideas. (2)\_\_\_\_\_ richness of language can be observed in various forms, including spoken and written interaction. People employ language to convey their intentions, share knowledge, and build relationships. It is a fundamental aspect of human interaction and plays a vital role in shaping societies and cultures. Without language, cooperation would be (3)\_\_\_\_\_, as it serves as the foundation for collaboration and understanding among diverse communities. Furthermore, language is dynamic and stationary, evolving over time to adapt to changing environments. New words are (4)\_\_\_\_\_ into the vocabulary, reflecting advancements in technology, science and culture. The ability to modify and adapt language is a key aspect of linguistic competence. (5)\_\_\_\_\_, the importance of language cannot be underestimated. It is a fundamental tool for human expression and interaction, facilitating the exchange of ideas and the formation of connections among people.

**SubQuestion No : 22**

**Q.22** Select the most appropriate option to fill in blank number 2.

- Ans ☒ 1. A  
☒ 2. The  
☐ 3. No article  
☐ 4. An

Question Type : **MCQ**  
Question ID : **630680555948**  
Option 1 ID : **6306802173169**  
Option 2 ID : **6306802173168**  
Option 3 ID : **6306802173171**  
Option 4 ID : **6306802173170**  
Status : **Answered**  
Chosen Option : **1**

**Comprehension:**

In the following passage, some words have been deleted. Read the passage carefully and select the most appropriate option to fill in each blank.

Language is a powerful device that (1)\_\_\_\_\_ communication and interaction between individuals. It serves as a crucial tool for expressing thoughts, emotions, and ideas. (2)\_\_\_\_\_ richness of language can be observed in various forms, including spoken and written interaction. People employ language to convey their intentions, share knowledge, and build relationships. It is a fundamental aspect of human interaction and plays a vital role in shaping societies and cultures. Without language, cooperation would be (3)\_\_\_\_\_, as it serves as the foundation for collaboration and understanding among diverse communities. Furthermore, language is dynamic and stationary, evolving over time to adapt to changing environments. New words are (4)\_\_\_\_\_ into the vocabulary, reflecting advancements in technology, science and culture. The ability to modify and adapt language is a key aspect of linguistic competence. (5)\_\_\_\_\_, the importance of language cannot be underestimated. It is a fundamental tool for human expression and interaction, facilitating the exchange of ideas and the formation of connections among people.

**SubQuestion No : 23**

**Q.23** Select the most appropriate option to fill in blank number 3.

- Ans ☐ 1. challenge  
☒ 2. challenging  
☐ 3. challenges  
☐ 4. challenger

Question Type : **MCQ**  
Question ID : **630680555949**  
Option 1 ID : **6306802173172**  
Option 2 ID : **6306802173173**  
Option 3 ID : **6306802173175**  
Option 4 ID : **6306802173174**  
Status : **Answered**  
Chosen Option : **2**



# SSC MTS (Non Technical) EXAM STUDY KIT



FREE  
SHIPPING 

- ▶ 100% SSC MTS Exam Syllabus Covered
- ▶ PRINTED Notes
- ▶ 8 Books, 700+ Pages
- ▶ 2500+ MCQs
- ▶ Practice Papers
- ▶ 1 Year Current Affairs

**50%**  
**OFF**

 **SSCPORTAL.IN**

# SSC MTS PDF NOTES

100% Syllabus Covered



**CLICK HERE**

**CLICK BELOW LINK TO DOWNLOAD PDF NOTES**

<https://sscpportal.in/study-kit/mts>

<https://sscpportal.in/study-kit>

**Comprehension:**

In the following passage, some words have been deleted. Read the passage carefully and select the most appropriate option to fill in each blank.

Language is a powerful device that (1)\_\_\_\_\_ communication and interaction between individuals. It serves as a crucial tool for expressing thoughts, emotions, and ideas. (2)\_\_\_\_\_ richness of language can be observed in various forms, including spoken and written interaction. People employ language to convey their intentions, share knowledge, and build relationships. It is a fundamental aspect of human interaction and plays a vital role in shaping societies and cultures. Without language, cooperation would be (3)\_\_\_\_\_, as it serves as the foundation for collaboration and understanding among diverse communities. Furthermore, language is dynamic and stationary, evolving over time to adapt to changing environments. New words are (4)\_\_\_\_\_ into the vocabulary, reflecting advancements in technology, science and culture. The ability to modify and adapt language is a key aspect of linguistic competence. (5)\_\_\_\_\_, the importance of language cannot be underestimated. It is a fundamental tool for human expression and interaction, facilitating the exchange of ideas and the formation of connections among people.

**SubQuestion No : 24**

**Q.24** Select the most appropriate option to fill in blank number 4.

- Ans ☒ 1. integrated  
☒ 2. integral  
☒ 3. integrity  
☒ 4. integration

Question Type : MCQ  
Question ID : 630680555950  
Option 1 ID : 6306802173178  
Option 2 ID : 6306802173176  
Option 3 ID : 6306802173179  
Option 4 ID : 6306802173177  
Status : Answered  
Chosen Option : 1

**Comprehension:**

In the following passage, some words have been deleted. Read the passage carefully and select the most appropriate option to fill in each blank.

Language is a powerful device that (1)\_\_\_\_\_ communication and interaction between individuals. It serves as a crucial tool for expressing thoughts, emotions, and ideas. (2)\_\_\_\_\_ richness of language can be observed in various forms, including spoken and written interaction. People employ language to convey their intentions, share knowledge, and build relationships. It is a fundamental aspect of human interaction and plays a vital role in shaping societies and cultures. Without language, cooperation would be (3)\_\_\_\_\_, as it serves as the foundation for collaboration and understanding among diverse communities. Furthermore, language is dynamic and stationary, evolving over time to adapt to changing environments. New words are (4)\_\_\_\_\_ into the vocabulary, reflecting advancements in technology, science and culture. The ability to modify and adapt language is a key aspect of linguistic competence. (5)\_\_\_\_\_, the importance of language cannot be underestimated. It is a fundamental tool for human expression and interaction, facilitating the exchange of ideas and the formation of connections among people.

**SubQuestion No : 25**

**Q.25** Select the most appropriate option to fill in blank number 5.

- Ans ☒ 1. In order to  
☒ 2. In conclusive  
☒ 3. In spite of  
☒ 4. In any case

Question Type : MCQ  
Question ID : 630680555951  
Option 1 ID : 6306802173182  
Option 2 ID : 6306802173181  
Option 3 ID : 6306802173183  
Option 4 ID : 6306802173180  
Status : Answered  
Chosen Option : 2