

Multi Tasking Non Technical Staff and Havaladar CBIC and CBN Examination 2024

Roll Number	
Candidate Name	
Venue Name	iON Digital Zone iDZ Kovilambakkam
Exam Date	14/10/2024
Exam Time	12:30 PM - 2:30 PM
Subject	MTS Non Tech Havaladar CBIC and CBN Examination 2024

Section : Numerical and Mathematical Ability

Q.1 A tradesman marks his goods 30% more than the cost price. If he allows a discount of

$6\frac{1}{4}\%$, then his gain percentage is:

Ans

✓ 1. $21\frac{7}{8}\%$

✗ 2. 22%

✗ 3. $22\frac{3}{4}\%$

✗ 4. 21%

Question Type : MCQ

Question ID : 630680410314

Option 1 ID : 6306801599989

Option 2 ID : 6306801599988

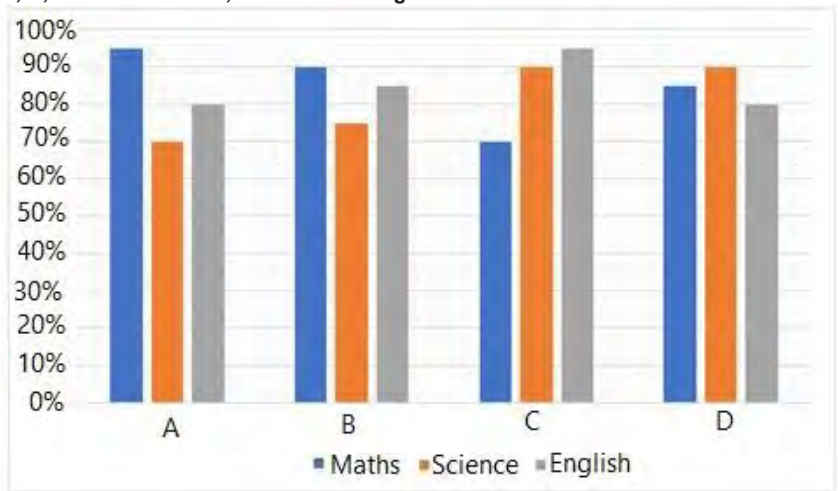
Option 3 ID : 6306801599987

Option 4 ID : 6306801599990

Status : Answered

Chosen Option : 3

Q.2 Study the given bar graph and answer the question that follows.
The bar graph given below shows the percentage of marks obtained by four students A, B, C and D in Maths, Science and English.



If the full marks in Maths are 150, Science are 100 and English are 140, then find the total marks obtained by Student B in Maths and Student A in English.

- Ans
- ☒ 1. 275
 - ☒ 2. 257
 - ☒ 3. 247
 - ☒ 4. 250

Question Type : MCQ
Question ID : 630680392621
Option 1 ID : 6306801530833
Option 2 ID : 6306801530832
Option 3 ID : 6306801530830
Option 4 ID : 6306801530831
Status : Answered
Chosen Option : 3

Q.3 The average weight of 20 boys in a class is 65 kg and that of remaining 35 boys is 32 kg. What is the average weight of all the boys in the class?

- Ans
- ☒ 1. 46 kg
 - ☒ 2. 48 kg
 - ☒ 3. 44 kg
 - ☒ 4. 56 kg

Question Type : MCQ
Question ID : 630680490323
Option 1 ID : 6306801915210
Option 2 ID : 6306801915207
Option 3 ID : 6306801915208
Option 4 ID : 6306801915209
Status : Answered
Chosen Option : 3

Q.4 The LCM of 140,180 and 240 is:

- Ans ☒ 1. 1680
☒ 2. 5040
☒ 3. 1008
☒ 4. 5000

Question Type : MCQ
Question ID : 630680108446
Option 1 ID : 630680420748
Option 2 ID : 630680420750
Option 3 ID : 630680420749
Option 4 ID : 630680420751
Status : Answered
Chosen Option : 2

Q.5 The average of five numbers, where the difference between any two consecutive numbers is 5, is 215. Find the least number.

- Ans ☒ 1. 220
☒ 2. 225
☒ 3. 205
☒ 4. 215

Question Type : MCQ
Question ID : 630680480891
Option 1 ID : 6306801878158
Option 2 ID : 6306801878160
Option 3 ID : 6306801878159
Option 4 ID : 6306801878157
Status : Answered
Chosen Option : 3

Q.6 A policeman sees a thief at a distance of 100 m and starts chasing him at a speed of 6 m/s while the thief runs at a speed of 5 m/s. What is the distance (in m) covered by the thief when he is caught?

- Ans ☒ 1. 600
☒ 2. 400
☒ 3. 300
☒ 4. 500

Question Type : MCQ
Question ID : 630680166143
Option 1 ID : 630680643547
Option 2 ID : 630680643545
Option 3 ID : 630680643544
Option 4 ID : 630680643546
Status : Answered
Chosen Option : 3

Q.7 Two stations A and B are 1800 km apart. A train starts from A towards B at 7 A.M. at a speed of 100 km/h. Another train starts from B towards A at 8 A.M. on the same day at a speed of 325 km/h. At what time will they cross each other?

Ans ☒ 1. 3 P.M.

☒ 2. 12 P.M.

☒ 3. 11 A.M.

☒ 4. 9 A.M.

Question Type : MCQ

Question ID : 630680239305

Option 1 ID : 630680928231

Option 2 ID : 630680928230

Option 3 ID : 630680928229

Option 4 ID : 630680928228

Status : Answered

Chosen Option : 3

Q.8 A sum of money invested at simple interest becomes 5 times in 12 years. How many times will it become in 27 years?

Ans ☒ 1. 9

☒ 2. 11

☒ 3. 12

☒ 4. 10

Question Type : MCQ

Question ID : 630680815900

Option 1 ID : 6306803196933

Option 2 ID : 6306803196935

Option 3 ID : 6306803196936

Option 4 ID : 6306803196934

Status : Answered

Chosen Option : 3

Q.9 Study the table and answer the question that follows.

Measured on birthday	Height of the child (in cm)
3 rd	90
4 th	100
5 th	108
6 th	115
7 th	125
8 th	130
9 th	140
10 th	150
11 th	162
12 th	170
13 th	178
14 th	184
15 th	190

What was the percentage increase in the height of the child from the 7th birthday to the 10th birthday?

- Ans ☒ 1. 25%
☒ 2. 10%
☒ 3. 20%
☒ 4. 15%

Question Type : MCQ
Question ID : 630680523825
Option 1 ID : 6306802047453
Option 2 ID : 6306802047451
Option 3 ID : 6306802047454
Option 4 ID : 6306802047452
Status : Answered
Chosen Option : 3

Q.10 Due to a fault in the voting machine, the invalid votes are counted in votes of the candidate B, who gets 5 times the invalid votes. A gets the votes 8 times the invalid votes and wins the election by 28. What is the total number of votes polled?

- Ans ☒ 1. 176
☒ 2. 168
☒ 3. 184
☒ 4. 196

Question Type : MCQ
Question ID : 630680464522
Option 1 ID : 6306801814125
Option 2 ID : 6306801814123
Option 3 ID : 6306801814126
Option 4 ID : 6306801814124
Status : Answered
Chosen Option : 3

Q.11 What sum (in ₹) will earn a simple interest of ₹240 in 3 years at 4% per year rate of interest?

- Ans ☒ 1. 1000
☒ 2. 2000
☒ 3. 4000
☒ 4. 3000

Question Type : MCQ

Question ID : 630680612172

Option 1 ID : 6306802395421

Option 2 ID : 6306802395420

Option 3 ID : 6306802395422

Option 4 ID : 6306802395423

Status : Answered

Chosen Option : 2

Q.12 What sum (in ₹) will earn a simple interest of ₹240 in 3 years at 8% per year rate of interest?

- Ans ☒ 1. 500
☒ 2. 1000
☒ 3. 2000
☒ 4. 1500

Question Type : MCQ

Question ID : 630680612173

Option 1 ID : 6306802395425

Option 2 ID : 6306802395424

Option 3 ID : 6306802395426

Option 4 ID : 6306802395427

Status : Answered

Chosen Option : 2

Q.13 The cost price of 20 articles is the same as the selling price of 15 articles. The profit percentage in the transaction is:

- Ans ☒ 1. $33\frac{1}{3}\%$
☒ 2. 30%
☒ 3. 50%
☒ 4. 25%

Question Type : MCQ

Question ID : 630680277313

Option 1 ID : 6306801077703

Option 2 ID : 6306801077702

Option 3 ID : 6306801077704

Option 4 ID : 6306801077701

Status : Answered

Chosen Option : 1

Q.14 The curved surface area of a cylinder of height 42 cm is 3960 cm^2 . Find its volume. ($\pi = \frac{22}{7}$)

- Ans ☒ 1. $19,800 \text{ cm}^3$
☒ 2. $29,700 \text{ cm}^3$
☒ 3. $27,900 \text{ cm}^3$
☒ 4. 1980 cm^3

Question Type : MCQ

Question ID : 630680384361

Option 1 ID : 6306801498330

Option 2 ID : 6306801498331

Option 3 ID : 6306801498332

Option 4 ID : 6306801498333

Status : Answered

Chosen Option : 3

Q.15 The length and breadth of a rectangular field are in the ratio 3 : 2. If the area of the field is 3456 m^2 , then the cost of fencing the field at ₹3.50 per metre is:

- Ans ☒ 1. Rs. 840
☒ 2. Rs. 420
☒ 3. Rs. 240
☒ 4. Rs. 480

Question Type : MCQ

Question ID : 630680103656

Option 1 ID : 630680402856

Option 2 ID : 630680402857

Option 3 ID : 630680402855

Option 4 ID : 630680402858

Status : Answered

Chosen Option : 3

Q.16 If $x : 6 :: 6 : y$ and $x : y :: y : 6$, then which of the options below gives the correct values of x and y in that order?

- Ans ☒ 1. 6 and 12
☒ 2. 12 and 12
☒ 3. 12 and 6
☒ 4. 6 and 6

Question Type : MCQ

Question ID : 630680239512

Option 1 ID : 630680929000

Option 2 ID : 630680929002

Option 3 ID : 630680929001

Option 4 ID : 630680928999

Status : Answered

Chosen Option : 3

Q.17 Out of 8 lecturers of a college, one lecturer retires and at his place a new lecturer of age 32 years joins. As a result, the average age of lecturers is reduced by 4 years. The age of the retired lecturer is:

- Ans ☒ 1. 63 years
☒ 2. 65 years
☒ 3. 62 years
☒ 4. 64 years

Question Type : MCQ
Question ID : 630680447474
Option 1 ID : 6306801747150
Option 2 ID : 6306801747152
Option 3 ID : 6306801747149
Option 4 ID : 6306801747151
Status : Answered
Chosen Option : 3

Q.18 In what ratio must a shopkeeper mix two types of rice worth ₹60/kg and ₹80/kg, respectively, so that, the average cost of the mixture is ₹75/kg?

- Ans ☒ 1. 2 : 3
☒ 2. 1 : 3
☒ 3. 3 : 4
☒ 4. 1 : 2

Question Type : MCQ
Question ID : 630680469609
Option 1 ID : 6306801834199
Option 2 ID : 6306801834201
Option 3 ID : 6306801834200
Option 4 ID : 6306801834202
Status : Answered
Chosen Option : 2

Q.19 By selling an article for ₹19, a dealer makes a profit of 10%. By how much should he increase his selling price (in ₹, rounded off to two decimal place) so as to make a profit of 50%?

- Ans ☒ 1. 8.91
☒ 2. 7.91
☒ 3. 6.91
☒ 4. 9.91

Question Type : MCQ
Question ID : 630680632584
Option 1 ID : 6306802476236
Option 2 ID : 6306802476235
Option 3 ID : 6306802476234
Option 4 ID : 6306802476237
Status : Answered
Chosen Option : 3

Q.20 A medicine capsule is shaped like a cylinder with two hemispheres attached to each of its ends.
The length of the entire capsule is 15 mm, and its diameter is 6 mm.
Calculate the surface area (in mm², rounded to the nearest integer) of the capsule. (Use $\pi = \frac{22}{7}$)

- Ans** ☒ 1. 289
☒ 2. 280
☒ 3. 286
☒ 4. 283

Question Type : **MCQ**
Question ID : **630680379658**
Option 1 ID : **6306801479678**
Option 2 ID : **6306801479675**
Option 3 ID : **6306801479677**
Option 4 ID : **6306801479676**
Status : **Answered**
Chosen Option : **3**

Section : Reasoning Ability and Problem Solving

Q.1 BI 2 is related to EF 5 in a certain way. In the same way, KR 8 is related to NO 11. To which of the following is TI 3 related, following the same logic?

- Ans** ☒ 1. WF 6
☒ 2. WF 8
☒ 3. WG 6
☒ 4. WG 8

Question Type : **MCQ**
Question ID : **630680422975**
Option 1 ID : **6306801650270**
Option 2 ID : **6306801650269**
Option 3 ID : **6306801650267**
Option 4 ID : **6306801650268**
Status : **Answered**
Chosen Option : **3**

Q.2 What will come in the place of the question mark (?) in the following equation, if '+' and '÷' are interchanged and 'x' and '-' are interchanged?
 $18 \div 6 + 2 - 3 \times 4 = ?$

- Ans** ☒ 1. 26
☒ 2. 23
☒ 3. 38
☒ 4. 32

Question Type : **MCQ**
Question ID : **630680388207**
Option 1 ID : **6306801513391**
Option 2 ID : **6306801513390**
Option 3 ID : **6306801513393**
Option 4 ID : **6306801513392**
Status : **Answered**
Chosen Option : **2**

Q.3 What should come in place of the question mark (?) in the given series based on the English alphabetical order?

ESG, GTK, IUO, KVS, ?

- Ans ☒ 1. MWW
☐ 2. NWW
☐ 3. NWX
☐ 4. MWX

Question Type : MCQ
Question ID : 630680459275
Option 1 ID : 6306801793953
Option 2 ID : 6306801793955
Option 3 ID : 6306801793956
Option 4 ID : 6306801793954
Status : Answered
Chosen Option : 1

Q.4 What will come in place of the question mark (?) in the following equation if '+' and '-' are interchanged and 'x' and '÷' are interchanged?
 $2 \div 8 - 25 \times 5 + 9 = ?$

- Ans ☐ 1. 6
☐ 2. 27
☒ 3. 12
☐ 4. 30

Question Type : MCQ
Question ID : 630680378772
Option 1 ID : 6306801476138
Option 2 ID : 6306801476135
Option 3 ID : 6306801476137
Option 4 ID : 6306801476136
Status : Answered
Chosen Option : 3

Q.5 In a certain code language, 'INTO' is coded as '2684' and 'OPEN' is coded as '3567'. What is the code for 'O' in the given code language?

- Ans ☐ 1. 3
☐ 2. 5
☒ 3. 6
☐ 4. 4

Question Type : MCQ
Question ID : 630680388107
Option 1 ID : 6306801513003
Option 2 ID : 6306801513005
Option 3 ID : 6306801513002
Option 4 ID : 6306801513004
Status : Answered
Chosen Option : 3

Q.6 In a certain code language, 'BALE' is coded as '2496' and 'LORD' is coded as '3759'.
What is the code for 'L' in the given code language?

- Ans ☒ 1. 3
☒ 2. 2
☒ 3. 5
☒ 4. 9

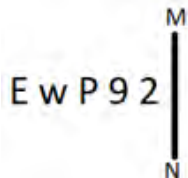
Question Type : MCQ
Question ID : 630680846724
Option 1 ID : 6306803316625
Option 2 ID : 6306803316626
Option 3 ID : 6306803316627
Option 4 ID : 6306803316624
Status : Answered
Chosen Option : 4

Q.7 In a certain code language, 'TIME' is coded as 61 and 'POND' is coded as 59. How will
'BLUE' be coded in the same language?

- Ans ☒ 1. 72
☒ 2. 71
☒ 3. 68
☒ 4. 69

Question Type : MCQ
Question ID : 630680465401
Option 1 ID : 6306801817639
Option 2 ID : 6306801817640
Option 3 ID : 6306801817642
Option 4 ID : 6306801817641
Status : Answered
Chosen Option : 3

Q.8 Select the correct mirror image of the given figure when the mirror is placed at MN as
shown below.



- Ans ☒ 1. 2 6 9 w E
☒ 2. 2 e 9 w 3
☒ 3. 2 e 9 w E
☒ 4. 2 e w P 3

Question Type : MCQ
Question ID : 630680525322
Option 1 ID : 6306802053375
Option 2 ID : 6306802053373
Option 3 ID : 6306802053372
Option 4 ID : 6306802053374
Status : Answered
Chosen Option : 2

Q.9 In a certain code language, 'HEAP' is coded as '7395' and 'PEAS' is coded as '9571'.
What is the code for 'S' in the given code language?

- Ans ☒ 1. 5
☒ 2. 9
☒ 3. 7
☒ 4. 1

Question Type : MCQ
Question ID : 630680503083
Option 1 ID : 6306801965918
Option 2 ID : 6306801965917
Option 3 ID : 6306801965919
Option 4 ID : 6306801965920
Status : Answered
Chosen Option : 4

Q.10 Read the given statements and conclusions carefully. Assuming that the information given in the statements is true, even if it appears to be at variance with commonly known facts, decide which of the given conclusions logically follow(s) from the statements.

Statements:
A. Some guns are swords.
B. All swords are onions.

Conclusions:
I. All guns are onions.
II. Some guns are swords.

- Ans ☒ 1. Only conclusion II follows.
☒ 2. Only conclusion I follows.
☒ 3. None of the conclusions follow.
☒ 4. Both the conclusions follow.

Question Type : MCQ
Question ID : 630680399067
Option 1 ID : 6306801556271
Option 2 ID : 6306801556270
Option 3 ID : 6306801556273
Option 4 ID : 6306801556272
Status : Answered
Chosen Option : 1

Q.11 Read the given statement(s) and conclusions carefully. Assuming that the information given in the statements is true, even if it appears to be at variance with commonly known facts, decide which of the given conclusions logically follow(s) from the statement(s).

Statements:

All bars are clubs.

Some bars are gyms.

Conclusions:

(I) Some clubs are gyms.

(II) Some gyms are not bars.

- Ans ☒ 1. Neither conclusion I nor II follows.
- ☒ 2. Only conclusion I follows.
- ☒ 3. Both conclusions I and II follow.
- ☒ 4. Only conclusion II follows.

Question Type : MCQ

Question ID : 630680815691

Option 1 ID : 6306803196068

Option 2 ID : 6306803196065

Option 3 ID : 6306803196067

Option 4 ID : 6306803196066

Status : Answered

Chosen Option : 3

Q.12 18 is related to 60 following a certain logic. Following the same logic, 42 is related to 140. To which of the following is 33 related, following the same logic?
(NOTE: Operations should be performed on the whole numbers, without breaking down the numbers into its constituent digits. E.g. 13 – Operations on 13 such as adding / subtracting / multiplying etc., to 13 can be performed. Breaking down 13 into 1 and 3 and then performing mathematical operations on 1 and 3 is not allowed.)

- Ans ☒ 1. 95
- ☒ 2. 130
- ☒ 3. 80
- ☒ 4. 110

Question Type : MCQ

Question ID : 630680449085

Option 1 ID : 6306801753498

Option 2 ID : 6306801753500

Option 3 ID : 6306801753501

Option 4 ID : 6306801753499

Status : Answered

Chosen Option : 3

Q.13 21 is related to 73 following a certain logic. Following the same logic, 28 is related to 94. To which of the following is 35 related, following the same logic?(NOTE: Operations should be performed on the whole numbers, without breaking down the numbers into its constituent digits. E.g. 13 – Operations on 13 such as adding /subtracting /multiplying etc. to 13 can be performed. Breaking down 13 into 1 and 3 and then performing mathematical operations on 1 and 3 is not allowed)

- Ans ☒ 1. 105
☒ 2. 110
☒ 3. 115
☒ 4. 101

Question Type : MCQ
Question ID : 630680446722
Option 1 ID : 6306801744184
Option 2 ID : 6306801744183
Option 3 ID : 6306801744182
Option 4 ID : 6306801744185
Status : Answered
Chosen Option : 3

Q.14 Seven people A, B, C, D, E, F and G are sitting around a circular table, facing the center (but not necessarily in the same order). C is sitting to the immediate right of B. E is sitting third to the left of B. D is the immediate neighbour of E and F. A is sitting to the immediate right of C.

What is the position of G with respect to B?

- Ans ☒ 1. Second to the right
☒ 2. Third to the right
☒ 3. Second to the left
☒ 4. To the immediate left

Question Type : MCQ
Question ID : 630680379515
Option 1 ID : 6306801479105
Option 2 ID : 6306801479104
Option 3 ID : 6306801479103
Option 4 ID : 6306801479106
Status : Answered
Chosen Option : 3

Q.15 WY 13 is related to UW 16 in a certain way. In the same way, SU 19 is related to QS 22. To which of the following is OQ 17 related, following the same logic?

- Ans ☒ 1. NM 19
☒ 2. MN 20
☒ 3. MO 20
☒ 4. MO 19

Question Type : MCQ
Question ID : 630680439407
Option 1 ID : 6306801715422
Option 2 ID : 6306801715424
Option 3 ID : 6306801715425
Option 4 ID : 6306801715423
Status : Answered
Chosen Option : 3

Q.16 Select the figure from among the given options that can replace the question mark (?) in the following series and complete the pattern.

C		3	3	C	T			T	
L			O	L	3	C	O	3	?
O		T	T			O	L	L	C

Ans

☒ 1.

C		L
	T	
3		O

☒ 2.

O		3
L	C	
		T

☒ 3.

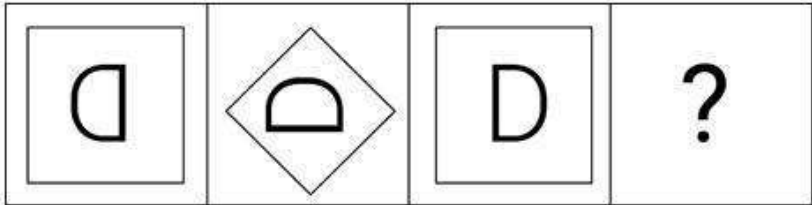
L		C
	T	
O		3

☒ 4.

L		3
	C	
O		T


Question Type : MCQ
Question ID : 630680441072
Option 1 ID : 6306801721942
Option 2 ID : 6306801721944
Option 3 ID : 6306801721943
Option 4 ID : 6306801721945
Status : Answered
Chosen Option : 3

Q.17 Identify the figure from the given options that can replace the question mark (?) and logically complete the series.

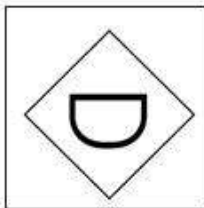


Ans

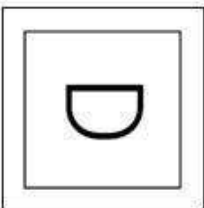
✗ 1.



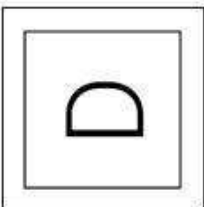
✓ 2.



✗ 3.



✗ 4.



Question Type : MCQ
Question ID : 630680279234
Option 1 ID : 6306801085204
Option 2 ID : 6306801085205
Option 3 ID : 6306801085206
Option 4 ID : 6306801085203
Status : Answered
Chosen Option : 2

Q.18 What should come in place of the question mark (?) in the given series?

6, ?, 7, 10, 8, 11

- Ans ☒ 1. 8
- ☒ 2. 9
- ☒ 3. 5
- ☒ 4. 12

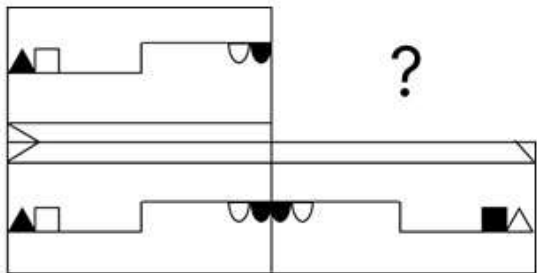
Question Type : MCQ
Question ID : 630680402489
Option 1 ID : 6306801569517
Option 2 ID : 6306801569516
Option 3 ID : 6306801569518
Option 4 ID : 6306801569515
Status : Answered
Chosen Option : 2

Q.19 Six teachers are sitting around a circular table facing the centre (but not necessarily in the same order). C is an immediate neighbour of both A and F. E is sitting second to the left of F. D is sitting fourth to the left of C. A is sitting second to the right of F. Which of the following statements is true?

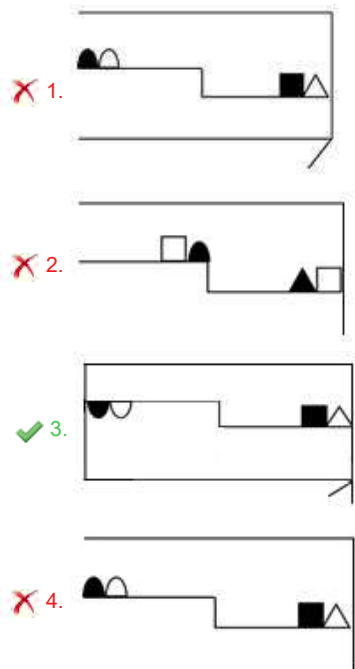
- Ans ☒ 1. B is immediate right of F.
- ☒ 2. F and D are immediate neighbours.
- ☒ 3. B is immediate left of F.
- ☒ 4. D is to the immediate right of E.

Question Type : MCQ
Question ID : 630680383299
Option 1 ID : 6306801494095
Option 2 ID : 6306801494096
Option 3 ID : 6306801494098
Option 4 ID : 6306801494097
Status : Answered
Chosen Option : 3

Q.20 Select the figure from the given options that will replace the question mark (?) in the figure given below to complete the pattern.



Ans



Question Type : MCQ
Question ID : 630680525743
Option 1 ID : 6306802055056
Option 2 ID : 6306802055058
Option 3 ID : 6306802055059
Option 4 ID : 6306802055057
Status : Answered
Chosen Option : 3

Section : General Awareness

Q.1 Identify the primary characteristic of the Cooperative Development Foundation (CDF) model of SHGs regarding its focus on membership from the following.

- Ans
- ☒ 1. It exclusively targets non-poor members.
 - ☒ 2. It exclusively targets poor members.
 - ☒ 3. It includes both poor and non-poor members.
 - ☒ 4. It excludes women from membership.

Question Type : MCQ
Question ID : 630680798965
Option 1 ID : 6306803130659
Option 2 ID : 6306803130660
Option 3 ID : 6306803130658
Option 4 ID : 6306803130661
Status : Answered
Chosen Option : 2

Q.2 In Jain Basti temple of Karnataka, over the garbhagriha is raised a _____ storied nirandhara vimana with a square griva and sikhara.

- Ans ☒ 1. five
☒ 2. seven
☒ 3. three
☒ 4. eleven

Question Type : MCQ
Question ID : 630680593382
Option 1 ID : 6306802321821
Option 2 ID : 6306802321822
Option 3 ID : 6306802321820
Option 4 ID : 6306802321823
Status : Answered
Chosen Option : 3

Q.3 The zone where the earthquake waves are not observed is called:

- Ans ☒ 1. Hypocentre
☒ 2. Benthic Zone
☒ 3. Shadow Zone
☒ 4. Epicentre

Question Type : MCQ
Question ID : 630680455676
Option 1 ID : 6306801779654
Option 2 ID : 6306801779656
Option 3 ID : 6306801779653
Option 4 ID : 6306801779655
Status : Answered
Chosen Option : 2

Q.4 Which of the following dance forms is inspired by the sculptures of the ancient temple of Chidambaram?

- Ans ☒ 1. Sattriya
☒ 2. Kuchipudi
☒ 3. Manipuri
☒ 4. Bharatanatyam

Question Type : MCQ
Question ID : 630680403226
Option 1 ID : 6306801572402
Option 2 ID : 6306801572404
Option 3 ID : 6306801572401
Option 4 ID : 6306801572403
Status : Answered
Chosen Option : 4

Q.5 'Straight from the Heart' is an autobiography of the famous cricketer _____.

- Ans ☒ 1. Madan Lal
☒ 2. Mohinder Amarnath
☒ 3. Kapil Dev
☒ 4. Sunil Gavaskar

Question Type : MCQ
Question ID : 630680798914
Option 1 ID : 6306803130463
Option 2 ID : 6306803130465
Option 3 ID : 6306803130464
Option 4 ID : 6306803130462
Status : Answered
Chosen Option : 3

Q.6 Who among the following dancers won the prestigious Padma Shree award in the year 2021, for her contribution to folk dance?

- Ans ☒ 1. Amubi Singh
☒ 2. Matha B Manjamma Jogathi
☒ 3. Teejan Bai
☒ 4. Kumudini Lakhia

Question Type : MCQ
Question ID : 63068084248
Option 1 ID : 630680326544
Option 2 ID : 630680326546
Option 3 ID : 630680326545
Option 4 ID : 630680326547
Status : Answered
Chosen Option : 3

Q.7 Select the INCORRECT statement from the following.

- Ans ☒ 1. Evaporation is a surface phenomenon.
☒ 2. Both boiling and evaporation are bulk phenomena.
☒ 3. Evaporation causes cooling.
☒ 4. Boiling is a bulk phenomenon.

Question Type : MCQ
Question ID : 630680422665
Option 1 ID : 6306801649096
Option 2 ID : 6306801649097
Option 3 ID : 6306801649098
Option 4 ID : 6306801649095
Status : Answered
Chosen Option : 3

Q.8 In 1974, MS Subbulakshmi became the first Indian musician to win _____.

- Ans ☒ 1. Right Livelihood Award
☒ 2. Grammy Award
☒ 3. Pulitzer Prize Award
☒ 4. Ramon Magsaysay Award

Question Type : MCQ
Question ID : 630680481978
Option 1 ID : 6306801882414
Option 2 ID : 6306801882413
Option 3 ID : 6306801882411
Option 4 ID : 6306801882412
Status : Answered
Chosen Option : 4

Q.9 Which state government of India launched the 'Swanirbhar Nari' aimed at making the weavers of the state self-reliant?

- Ans ☒ 1. Bihar
☒ 2. Jharkhand
☒ 3. Assam
☒ 4. Chhattisgarh

Question Type : MCQ
Question ID : 630680467044
Option 1 ID : 6306801824131
Option 2 ID : 6306801824130
Option 3 ID : 6306801824132
Option 4 ID : 6306801824129
Status : Answered
Chosen Option : 2

Q.10 As per Census of India 2011, which of the following states has the highest percentage of urban population in India?

- Ans ☒ 1. Maharashtra
☒ 2. Mizoram
☒ 3. Gujarat
☒ 4. Tamil Nadu

Question Type : MCQ
Question ID : 630680510924
Option 1 ID : 6306801996826
Option 2 ID : 6306801996827
Option 3 ID : 6306801996829
Option 4 ID : 6306801996828
Status : Answered
Chosen Option : 1

Q.11 The iodine value of oil and fat indicates:

- Ans ☒ 1. degree of unsaturation
- ☐ 2. degree of saturation
- ☐ 3. number of iodine atoms present
- ☐ 4. number of C atoms present

Question Type : MCQ
Question ID : 630680276089
Option 1 ID : 6306801072869
Option 2 ID : 6306801072868
Option 3 ID : 6306801072870
Option 4 ID : 6306801072867
Status : Answered
Chosen Option : 2

Q.12 The number of organisms in the population divided by a regular unit of area or volume is called _____.

- Ans ☒ 1. population density
- ☐ 2. birth rate
- ☐ 3. death rate
- ☐ 4. population size

Question Type : MCQ
Question ID : 630680611029
Option 1 ID : 6306802390977
Option 2 ID : 6306802390978
Option 3 ID : 6306802390979
Option 4 ID : 6306802390976
Status : Answered
Chosen Option : 1

Q.13 In November 2023, who was re-appointed as the Chairman of the Armed Forces Tribunal?

- Ans ☐ 1. Justice NV Ramana
- ☐ 2. Justice Sharad Arvind Bobde
- ☒ 3. Justice Rajendra Menon
- ☐ 4. Justice RF Nariman

Question Type : MCQ
Question ID : 630680488599
Option 1 ID : 6306801908420
Option 2 ID : 6306801908421
Option 3 ID : 6306801908422
Option 4 ID : 6306801908419
Status : Answered
Chosen Option : 3

Q.14 Seleucus Nicator was a contemporary of _____.

- Ans ☒ 1. Chanakya
☐ 2. Kalashoka
☐ 3. Ashoka
☐ 4. Kanishka

Question Type : MCQ
Question ID : 630680649797
Option 1 ID : 6306802544322
Option 2 ID : 6306802544325
Option 3 ID : 6306802544323
Option 4 ID : 6306802544324
Status : Answered
Chosen Option : 3

Q.15 Neville Steven Joseph D'Souza is associated with which game?

- Ans ☒ 1. Football
☐ 2. Tennis
☐ 3. Kabaddi
☐ 4. Wrestling

Question Type : MCQ
Question ID : 630680543554
Option 1 ID : 6306802125022
Option 2 ID : 6306802125023
Option 3 ID : 6306802125024
Option 4 ID : 6306802125021
Status : Answered
Chosen Option : 2

Q.16 According to the advancing of monsoon in India, which of the following cities receives rainfall after 15 June every year?

- Ans ☐ 1. Hyderabad
☐ 2. Bengaluru
☐ 3. Imphal
☒ 4. Jaipur

Question Type : MCQ
Question ID : 630680484486
Option 1 ID : 6306801892261
Option 2 ID : 6306801892260
Option 3 ID : 6306801892259
Option 4 ID : 6306801892258
Status : Answered
Chosen Option : 2

Q.17 Which of the following sultans of Delhi set up three different markets for different commodities in Delhi?

- Ans ☒ 1. Ghiyasuddin Balban
☒ 2. Muhammad Bin Tughlaq
☒ 3. Sikandar Lodi
☒ 4. Alauddin Khalji

Question Type : MCQ
Question ID : 630680333887
Option 1 ID : 6306801298823
Option 2 ID : 6306801298821
Option 3 ID : 6306801298822
Option 4 ID : 6306801298824
Status : Answered
Chosen Option : 4

Q.18 With which of the following festivals does the five-day long festival of Diwali end?

- Ans ☒ 1. Dhanteras
☒ 2. Bhai Dooj
☒ 3. Govardhan Puja
☒ 4. Narak Chaturdashi

Question Type : MCQ
Question ID : 630680546739
Option 1 ID : 6306802137529
Option 2 ID : 6306802137527
Option 3 ID : 6306802137526
Option 4 ID : 6306802137528
Status : Answered
Chosen Option : 4

Q.19 Bhakra Dam is built on which of the following rivers?

- Ans ☒ 1. Ravi
☒ 2. Beas
☒ 3. Chenab
☒ 4. Satluj

Question Type : MCQ
Question ID : 630680404330
Option 1 ID : 6306801576822
Option 2 ID : 6306801576823
Option 3 ID : 6306801576825
Option 4 ID : 6306801576824
Status : Answered
Chosen Option : 4

Q.20 What is the stump height of a cricket wicket as per international standards?

- Ans ☒ 1. 31 inches
☒ 2. 30 inches
☒ 3. 29 inches
☒ 4. 28 inches

Question Type : MCQ
Question ID : 630680552192
Option 1 ID : 6306802158956
Option 2 ID : 6306802158955
Option 3 ID : 6306802158954
Option 4 ID : 6306802158953
Status : Answered
Chosen Option : 1

Q.21 Which Chapter of Part VI of the Indian Constitution is concerned with the State Legislatures?

- Ans ☒ 1. Chapter III
☒ 2. Chapter V
☒ 3. Chapter VII
☒ 4. Chapter II

Question Type : MCQ
Question ID : 630680493672
Option 1 ID : 6306801928417
Option 2 ID : 6306801928418
Option 3 ID : 6306801928419
Option 4 ID : 6306801928416
Status : Answered
Chosen Option : 4

Q.22 The Permanent Settlement introduced by Cornwallis was NOT prevalent in which of the following regions of India?

- Ans ☒ 1. Punjab
☒ 2. Bengal
☒ 3. Odisha
☒ 4. Bihar

Question Type : MCQ
Question ID : 630680303406
Option 1 ID : 6306801180275
Option 2 ID : 6306801180277
Option 3 ID : 6306801180276
Option 4 ID : 6306801180274
Status : Answered
Chosen Option : 1

Q.23 Which Article of the Constitution of India governs the Population Census?

- Ans ☒ 1. Article 128
☒ 2. Article 246
☒ 3. Article 233
☒ 4. Article 179

Question Type : MCQ
Question ID : 630680113510
Option 1 ID : 630680439577
Option 2 ID : 630680439574
Option 3 ID : 630680439575
Option 4 ID : 630680439576
Status : Answered
Chosen Option : 3

Q.24 With which of the following Amendment Acts of the Indian Constitution was 11th Fundamental Duty added?

- Ans ☒ 1. 70th
☒ 2. 86th
☒ 3. 53rd
☒ 4. 42nd

Question Type : MCQ
Question ID : 630680549068
Option 1 ID : 6306802146750
Option 2 ID : 6306802146751
Option 3 ID : 6306802146749
Option 4 ID : 6306802146748
Status : Answered
Chosen Option : 2

Q.25 Which of the two following countries were formed as a result of the partition of India?

- Ans ☒ 1. India and Bangladesh
☒ 2. India and Nepal
☒ 3. India and Sri Lanka
☒ 4. India and Pakistan

Question Type : MCQ
Question ID : 630680682885
Option 1 ID : 6306802674283
Option 2 ID : 6306802674284
Option 3 ID : 6306802674285
Option 4 ID : 6306802674286
Status : Answered
Chosen Option : 4

Section : English Language and Comprehension

Q.1 Select the option that can be used as one-word substitute for the given group of words.

Detailed examination of something complex

- Ans ☒ 1. Dialysis
☒ 2. Analysis
☒ 3. Synthesis
☒ 4. Symbiosis

Question Type : MCQ
Question ID : 630680438005
Option 1 ID : 6306801709842
Option 2 ID : 6306801709843
Option 3 ID : 6306801709840
Option 4 ID : 6306801709841
Status : Answered
Chosen Option : 2

Q.2 Identify the spelling error in the given sentence.

The restaurant offered a diverse menu with a wide rengen of culinary options.

- Ans ☒ 1. options
☒ 2. diverse
☒ 3. restaurant
☒ 4. rengen

Question Type : MCQ
Question ID : 630680619871
Option 1 ID : 6306802425615
Option 2 ID : 6306802425614
Option 3 ID : 6306802425613
Option 4 ID : 6306802425616
Status : Answered
Chosen Option : 4

Q.3 Select the most appropriate option to fill in the blank.
The Kumbh Mela (the festival of the sacred Pitcher) is the world's biggest peaceful gathering of pilgrims, with participants bathing or taking the dip in the _____ river.

- Ans ☒ 1. shallow
☒ 2. depth
☒ 3. profane
☒ 4. sacred

Question Type : MCQ
Question ID : 630680515246
Option 1 ID : 6306802013451
Option 2 ID : 6306802013450
Option 3 ID : 6306802013449
Option 4 ID : 6306802013452
Status : Answered
Chosen Option : 4

Q.4 Which of the following sentences contains an error in the use of a phrasal verb?

- Ans ☒ 1. Clean out the backyard this weekend.
- ☒ 2. The old lady broke down when she heard her son lost his job.
- ☒ 3. Make over the bed daily. It is a good habit.
- ☒ 4. Try your level best before you decide to give up.

Question Type : MCQ
Question ID : 630680460599
Option 1 ID : 6306801798684
Option 2 ID : 6306801798682
Option 3 ID : 6306801798685
Option 4 ID : 6306801798683
Status : Answered
Chosen Option : 1

Q.5 Select the most appropriate synonym of the given word to fill in the blank.

Averted

Rohit _____ looking at Sheena's face while we were talking about domestic violence.

- Ans ☒ 1. confronted
- ☒ 2. avoided
- ☒ 3. fostered
- ☒ 4. saw

Question Type : MCQ
Question ID : 630680393349
Option 1 ID : 6306801533722
Option 2 ID : 6306801533723
Option 3 ID : 6306801533725
Option 4 ID : 6306801533724
Status : Marked For Review
Chosen Option : 2

Q.6 Select the most appropriate synonym of the given word.

Illicit

- Ans ☒ 1. Inessential
- ☒ 2. Integral
- ☒ 3. Illegal
- ☒ 4. Inaugural

Question Type : MCQ
Question ID : 630680438011
Option 1 ID : 6306801709867
Option 2 ID : 6306801709866
Option 3 ID : 6306801709864
Option 4 ID : 6306801709865
Status : Answered
Chosen Option : 3

Q.7 Select the most appropriate synonym that can substitute the underlined word in the given sentence.

The author's writing was so captivating that readers were enthralled by every word.

Ans ☒ 1. fascinated

☐ 2. bored

☐ 3. annoyed

☐ 4. jaded

Question Type : MCQ

Question ID : 630680726553

Option 1 ID : 6306802847220

Option 2 ID : 6306802847218

Option 3 ID : 6306802847221

Option 4 ID : 6306802847219

Status : Answered

Chosen Option : 1

Q.8 Select the most appropriate meaning of the given idiom.
A dime a dozen

Ans ☐ 1. To be in a difficult situation

☐ 2. Very rare

☒ 3. Very common

☐ 4. To take revenge

Question Type : MCQ

Question ID : 630680454081

Option 1 ID : 6306801773261

Option 2 ID : 6306801773260

Option 3 ID : 6306801773259

Option 4 ID : 6306801773262

Status : Answered

Chosen Option : 3

Q.9 Select the most appropriate meaning of the given idiom.

Brought to light

Ans ☒ 1. To disclose

☐ 2. To burn

☐ 3. In favour of

☐ 4. To seem likely

Question Type : MCQ

Question ID : 630680799115

Option 1 ID : 6306803131259

Option 2 ID : 6306803131258

Option 3 ID : 6306803131261

Option 4 ID : 6306803131260

Status : Marked For Review

Chosen Option : 3

Q.10 The following sentence contains an error. Select the option that correctly rectifies the error.

Along with his friend, he walked till the end of the street and came back immediately.

- Ans ☒ 1. Near with his friend,
☒ 2. for came back immediately
☒ 3. end by the street
☒ 4. he walked to the

Question Type : **MCQ**
Question ID : **63068087112**
Option 1 ID : **630680337837**
Option 2 ID : **630680337840**
Option 3 ID : **630680337839**
Option 4 ID : **630680337838**
Status : **Answered**
Chosen Option : **4**

Q.11 Select the option that expresses the given sentence in present perfect continuous tense form
Rama is working on this project.

- Ans ☒ 1. Rama has worked on this project for six months
☒ 2. Rama has been working on this project since six months.
☒ 3. Rama is working on this project for six months.
☒ 4. Rama has been working on this project for six months.

Question Type : **MCQ**
Question ID : **63068082883**
Option 1 ID : **630680321397**
Option 2 ID : **630680321399**
Option 3 ID : **630680321396**
Option 4 ID : **630680321398**
Status : **Answered**
Chosen Option : **4**

Q.12 The following sentence has been split into four segments. Identify the segment that contains a grammatical error.

He climbed of / the steep mountain trail, / his backpack heavy / with supplies for the journey.

- Ans ☒ 1. his backpack heavy
☒ 2. the steep mountain trail,
☒ 3. with supplies for the journey.
☒ 4. He climbed of

Question Type : **MCQ**
Question ID : **630680618990**
Option 1 ID : **6306802422238**
Option 2 ID : **6306802422237**
Option 3 ID : **6306802422239**
Option 4 ID : **6306802422236**
Status : **Marked For Review**
Chosen Option : **4**

Q.13 Select the INCORRECTLY spelt word.

"The architektüre of the building is marvellous", said the spectators.

- Ans ☒ 1. Architektüre
☐ 2. Spectators
☐ 3. Building
☐ 4. Marvellous

Question Type : MCQ
Question ID : 6306801046657
Option 1 ID : 6306804108753
Option 2 ID : 6306804108756
Option 3 ID : 6306804108754
Option 4 ID : 6306804108755
Status : Answered
Chosen Option : 1

Q.14 Select the option that rectifies the given sentence.
She runs very quick in marathons.

- Ans ☐ 1. She run very quick in marathons.
☒ 2. She runs very quickly in marathons.
☐ 3. She run much quickly in marathons.
☐ 4. She runs much quickly in marathons.

Question Type : MCQ
Question ID : 630680726465
Option 1 ID : 6306802846869
Option 2 ID : 6306802846868
Option 3 ID : 6306802846866
Option 4 ID : 6306802846867
Status : Answered
Chosen Option : 2

Q.15 Select the most appropriate idiom that can substitute the underlined segment in the given sentence.

Lisa was very excited about her promotion; she was very happy and delighted.

- Ans ☐ 1. on the attack
☒ 2. on cloud nine
☐ 3. under the weather
☐ 4. on the ball

Question Type : MCQ
Question ID : 630680540018
Option 1 ID : 6306802111173
Option 2 ID : 6306802111172
Option 3 ID : 6306802111174
Option 4 ID : 6306802111175
Status : Answered
Chosen Option : 2

Q.16 Select the most appropriate synonym of the given word.

Odious

- Ans ☒ 1. Repugnant
☐ 2. Beautiful
☐ 3. Acceptable
☐ 4. Pleasant

Question Type : MCQ
Question ID : 630680597312
Option 1 ID : 6306802337289
Option 2 ID : 6306802337292
Option 3 ID : 6306802337291
Option 4 ID : 6306802337290
Status : Answered
Chosen Option : 1

Q.17 Select the most appropriate meaning of the given word.
Fragile

- Ans ☐ 1. Juicy
☒ 2. Brittle
☐ 3. Strong
☐ 4. Florid

Question Type : MCQ
Question ID : 630680452046
Option 1 ID : 6306801765276
Option 2 ID : 6306801765274
Option 3 ID : 6306801765275
Option 4 ID : 6306801765277
Status : Answered
Chosen Option : 2

Q.18 In the following sentence the underlined part contains an error. Alternatives to the underlined part are given as options. Select the correct alternative.
The table looks proper in the centre than in the corner.

- Ans ☐ 1. most proper
☐ 2. properer
☒ 3. more proper
☐ 4. properly

Question Type : MCQ
Question ID : 630680514729
Option 1 ID : 6306802011543
Option 2 ID : 6306802011541
Option 3 ID : 6306802011542
Option 4 ID : 6306802011544
Status : Answered
Chosen Option : 3

Q.19 Select the most appropriate option to fill in the blank.

The charismatic leader's speeches were known for their _____ impact on motivating people to take positive actions.

- Ans ☒ 1. frugal
☒ 2. profound
☐ 3. impenitence
☐ 4. doldrums

Question Type : MCQ
Question ID : 630680598077
Option 1 ID : 6306802340114
Option 2 ID : 6306802340115
Option 3 ID : 6306802340116
Option 4 ID : 6306802340117
Status : Answered
Chosen Option : 2

Q.20 Select the correct spelling from the given options to fill in the blank.
They may vary and seem very different, but they are not _____.

- Ans ☒ 1. irreconcilable
☐ 2. irrecincilable
☐ 3. ireconcilable
☐ 4. irrecosilable

Question Type : MCQ
Question ID : 630680310025
Option 1 ID : 6306801206247
Option 2 ID : 6306801206248
Option 3 ID : 6306801206245
Option 4 ID : 6306801206246
Status : Answered
Chosen Option : 1

Comprehension:

In the following passage, some words have been deleted. Read the passage carefully and select the most appropriate option to fill in each blank.

Hyojeng, a twenty-five-year-old South Korean Youtuber (1)_____ since the age of 16. She (2)_____ around twenty-five countries so far. (3)_____ India was high on her wish list. She is currently soaking in the energy of Mumbai and planning to (4)_____ more of this beautiful city. Unfortunately, her experience of the city turned sour recently. She was filming on the streets of Mumbai and two men tried to hug and kiss her, which was captured in her video. The video (5)_____ viral and the Mumbai police swung into action.

SubQuestion No : 21

Q.21 Select the most appropriate option to fill in blank number 1.

- Ans ☒ 1. has been travelling
☐ 2. will be travelling
☐ 3. would have travelled
☐ 4. have been travelling

Question Type : MCQ
Question ID : 630680206299
Option 1 ID : 630680799984
Option 2 ID : 630680799986
Option 3 ID : 630680799985
Option 4 ID : 630680799983
Status : Answered
Chosen Option : 1

Comprehension:

In the following passage, some words have been deleted. Read the passage carefully and select the most appropriate option to fill in each blank.

Hyojeng, a twenty-five-year-old South Korean Youtuber (1)_____ since the age of 16. She (2)_____ around twenty-five countries so far. (3)_____ India was high on her wish list. She is currently soaking in the energy of Mumbai and planning to (4)_____ more of this beautiful city. Unfortunately, her experience of the city turned sour recently. She was filming on the streets of Mumbai and two men tried to hug and kiss her, which was captured in her video. The video (5)_____ viral and the Mumbai police swung into action.

SubQuestion No : 22

Q.22 Select the most appropriate option to fill in blank number 2.

Ans ☒ 1. has covered

☐ 2. will have covered

☐ 3. had been covered

☐ 4. was covered

Question Type : **MCQ**

Question ID : **630680206300**

Option 1 ID : **630680799987**

Option 2 ID : **630680799990**

Option 3 ID : **630680799989**

Option 4 ID : **630680799988**

Status : **Answered**

Chosen Option : **1**

Comprehension:

In the following passage, some words have been deleted. Read the passage carefully and select the most appropriate option to fill in each blank.

Hyojeng, a twenty-five-year-old South Korean Youtuber (1)_____ since the age of 16. She (2)_____ around twenty-five countries so far. (3)_____ India was high on her wish list. She is currently soaking in the energy of Mumbai and planning to (4)_____ more of this beautiful city. Unfortunately, her experience of the city turned sour recently. She was filming on the streets of Mumbai and two men tried to hug and kiss her, which was captured in her video. The video (5)_____ viral and the Mumbai police swung into action.

SubQuestion No : 23

Q.23 Select the most appropriate option to fill in blank number 3.

Ans ☐ 1. Moving

☒ 2. Visiting

☐ 3. Moved

☐ 4. Visit

Question Type : **MCQ**

Question ID : **630680206301**

Option 1 ID : **630680799993**

Option 2 ID : **630680799992**

Option 3 ID : **630680799994**

Option 4 ID : **630680799991**

Status : **Answered**

Chosen Option : **2**

Comprehension:

In the following passage, some words have been deleted. Read the passage carefully and select the most appropriate option to fill in each blank.

Hyojeng, a twenty-five-year-old South Korean Youtuber (1)_____ since the age of 16. She (2)_____ around twenty-five countries so far. (3)_____ India was high on her wish list. She is currently soaking in the energy of Mumbai and planning to (4)_____ more of this beautiful city. Unfortunately, her experience of the city turned sour recently. She was filming on the streets of Mumbai and two men tried to hug and kiss her, which was captured in her video. The video (5)_____ viral and the Mumbai police swung into action.

SubQuestion No : 24

Q.24 Select the most appropriate option to fill in blank number 4.

- Ans ☒ 1. having explored
☒ 2. to be explored
☒ 3. exploring
☒ 4. explore

Question Type : **MCQ**
Question ID : **630680206302**
Option 1 ID : **630680799998**
Option 2 ID : **630680799996**
Option 3 ID : **630680799995**
Option 4 ID : **630680799997**
Status : **Answered**
Chosen Option : **4**

Comprehension:

In the following passage, some words have been deleted. Read the passage carefully and select the most appropriate option to fill in each blank.

Hyojeng, a twenty-five-year-old South Korean Youtuber (1)_____ since the age of 16. She (2)_____ around twenty-five countries so far. (3)_____ India was high on her wish list. She is currently soaking in the energy of Mumbai and planning to (4)_____ more of this beautiful city. Unfortunately, her experience of the city turned sour recently. She was filming on the streets of Mumbai and two men tried to hug and kiss her, which was captured in her video. The video (5)_____ viral and the Mumbai police swung into action.

SubQuestion No : 25

Q.25 Select the most appropriate option to fill in blank number 5.

- Ans ☒ 1. gone
☒ 2. went
☒ 3. go
☒ 4. going

Question Type : **MCQ**
Question ID : **630680206303**
Option 1 ID : **630680799999**
Option 2 ID : **630680800001**
Option 3 ID : **630680800000**
Option 4 ID : **630680800002**
Status : **Answered**
Chosen Option : **1**