

Multi Tasking Non Technical Staff and Havaladar CBIC and CBN Examination 2024

| | |
|----------------|--|
| Roll Number | |
| Candidate Name | |
| Venue Name | TCS Gito Bitan |
| Exam Date | 14/11/2024 |
| Exam Time | 12:30 PM - 2:30 PM |
| Subject | MTS Non Tech Havaladar CBIC and CBN Examination 2024 |

Section : Numerical and Mathematical Ability

Q.1 Rice worth ₹84 per kg and ₹96 per kg is mixed with a third variety of rice in the ratio 1 : 1 : 2. If the mixture is worth ₹99 per kg, the price of the third variety per kg is:

- Ans ☒ 1. ₹112
☒ 2. ₹110
☒ 3. ₹115
☒ 4. ₹108

Question Type : MCQ
Question ID : 630680815859
Option 1 ID : 6306803196771
Option 2 ID : 6306803196770
Option 3 ID : 6306803196772
Option 4 ID : 6306803196769
Status : Answered
Chosen Option : 4

Q.2 The rate of interest p.a. at which a sum becomes three times of itself in 20 years at simple interest will be :

- Ans ☒ 1. 8%
☒ 2. 12%
☒ 3. 6%
☒ 4. 10%

Question Type : MCQ
Question ID : 630680426364
Option 1 ID : 6306801663555
Option 2 ID : 6306801663557
Option 3 ID : 6306801663554
Option 4 ID : 6306801663556
Status : Answered
Chosen Option : 4

Q.3 The sum of the radius of the base and the height of a solid cylinder is 96 meters. If the total surface area of the cylinder is 12672 m^2 , what is the curved surface area and volume of the cylinder respectively ? (use $\pi = \frac{22}{7}$)

- Ans
- ☒ 1. 8600 m^2 , 105850 m^3
 - ☒ 2. 7660 m^2 , 93990 m^3
 - ☒ 3. 9500 m^2 , 113550 m^3
 - ☒ 4. 9900 m^2 , 103950 m^3

Question Type : MCQ

Question ID : 630680378583

Option 1 ID : 6306801475382

Option 2 ID : 6306801475379

Option 3 ID : 6306801475380

Option 4 ID : 6306801475381

Status : Answered

Chosen Option : 1

Q.4 The average of six numbers is 30. If one number is excluded, the average becomes 28. Find the excluded number.

- Ans
- ☒ 1. 30
 - ☒ 2. 35
 - ☒ 3. 36
 - ☒ 4. 40

Question Type : MCQ

Question ID : 630680131113

Option 1 ID : 630680507722

Option 2 ID : 630680507723

Option 3 ID : 630680507724

Option 4 ID : 630680507725

Status : Answered

Chosen Option : 4

Q.5 On selling a book for ₹348, a shopkeeper loses 13%. In order to gain 22%, he must sell that book for:

- Ans
- ☒ 1. ₹379
 - ☒ 2. ₹369
 - ☒ 3. ₹488
 - ☒ 4. ₹424

Question Type : MCQ

Question ID : 630680455632

Option 1 ID : 6306801779444

Option 2 ID : 6306801779442

Option 3 ID : 6306801779443

Option 4 ID : 6306801779445

Status : Answered

Chosen Option : 3

Q.6 Find the simple interest (in ₹) on ₹3000 as a sum borrowed at 4% per year rate of interest for 4 years.

- Ans
- ☒ 1. 520
 - ☒ 2. 420
 - ☒ 3. 480
 - ☒ 4. 440

Question Type : MCQ

Question ID : 630680591930

Option 1 ID : 6306802316188

Option 2 ID : 6306802316189

Option 3 ID : 6306802316187

Option 4 ID : 6306802316190

Status : Answered

Chosen Option : 3

Q.7 A hollow hemispherical steel bowl can contain $\frac{686}{3}\pi$ cubic unit of liquid. The outer radius is 9 units. How much steel is used in making the bowl?

- Ans
- ☒ 1. $\frac{727}{3}\pi$ cubic units
 - ☒ 2. $\frac{772}{3}\pi$ cubic units
 - ☒ 3. $\frac{433}{3}\pi$ cubic units
 - ☒ 4. $\frac{343}{3}\pi$ cubic units

Question Type : MCQ

Question ID : 630680386240

Option 1 ID : 6306801505671

Option 2 ID : 6306801505670

Option 3 ID : 6306801505673

Option 4 ID : 6306801505672

Status : Answered

Chosen Option : 2

Q.8 Marks (out of 100) of four students in Hindi, English and Mathematics are given in the following table. Study the table carefully and answer the question that follows.

| Students/Subjects | Hindi | English | Mathematics |
|-------------------|-------|---------|-------------|
| Mukesh | 75 | 80 | 95 |
| Shivam | 80 | 75 | 90 |
| Soumya | 70 | 65 | 85 |
| Shilpee | 80 | 70 | 81 |

What is the overall percentage marks obtained by Shilpee in the given three subjects?

- Ans ☒ 1. 80%
☒ 2. 79%
☒ 3. 77%
☒ 4. 78%

Question Type : MCQ
Question ID : 630680523763
Option 1 ID : 6306802047206
Option 2 ID : 6306802047205
Option 3 ID : 6306802047203
Option 4 ID : 6306802047204
Status : Answered
Chosen Option : 3

Q.9 A shopkeeper normally gives a discount of 40%. To increase his sale before off season, he announces an additional discount of 4% upto a specific date. How much additional discount (in ₹) will a customer get on an item marked for ₹500?

- Ans ☒ 1. ₹19
☒ 2. ₹11
☒ 3. ₹15
☒ 4. ₹12

Question Type : MCQ
Question ID : 630680131203
Option 1 ID : 630680508081
Option 2 ID : 630680508078
Option 3 ID : 630680508079
Option 4 ID : 630680508080
Status : Answered
Chosen Option : 4

Q.10 Air is leaking from a spherical-shaped advertising balloon at the rate of 24 cubic feet per minute. If the radius of the balloon is 8 feet, how long would it take for the balloon to empty? Round your answer to the nearest minute. Use the approximate of value of π , that is 3.14.

- Ans
- ☐ 1. 94 minutes
 - ☐ 2. 80 minutes
 - ☒ 3. 89 minutes
 - ☐ 4. 65 minutes

Question Type : MCQ
Question ID : 630680101504
Option 1 ID : 630680394538
Option 2 ID : 630680394536
Option 3 ID : 630680394539
Option 4 ID : 630680394537
Status : Answered
Chosen Option : 2

Q.11 Rakesh travels the first 320 km by train at a speed of 80 km/hr and the next 250 km by bus at 50 km/hr. Ignoring the buffer time between different modes of travel, the average speed (in km/hr) for his tour was:

- Ans
- ☒ 1. $63\frac{1}{3}$
 - ☐ 2. 69
 - ☐ 3. $60\frac{1}{4}$
 - ☐ 4. $61\frac{1}{2}$

Question Type : MCQ
Question ID : 630680627876
Option 1 ID : 6306802457593
Option 2 ID : 6306802457594
Option 3 ID : 6306802457591
Option 4 ID : 6306802457592
Status : Answered
Chosen Option : 1

Q.12 The amount of profit and loss will be the same if an article is sold at ₹19,125 and ₹14,625. Find the percentage of profit if an article is sold at ₹19,125.

- Ans ☒ 1. 12%
☒ 2. $12\frac{1}{4}\%$
☒ 3. $13\frac{1}{3}\%$
☒ 4. $11\frac{3}{4}\%$

Question Type : MCQ

Question ID : 630680457436

Option 1 ID : 6306801786660

Option 2 ID : 6306801786659

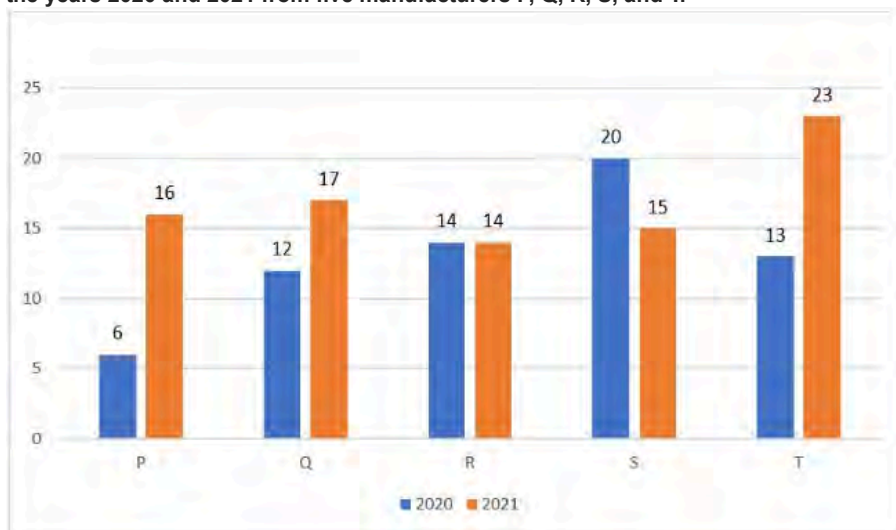
Option 3 ID : 6306801786658

Option 4 ID : 6306801786657

Status : Answered

Chosen Option : 2

Q.13 The following graph represents the production of electric scooters (in thousands) for the years 2020 and 2021 from five manufacturers P, Q, R, S, and T.



What is the percentage by which the total production of all manufacturers in the year 2021 exceeds the total production of manufacturers in the year 2020? (Round to the nearest integer)

- Ans ☒ 1. 38%
☒ 2. 42%
☒ 3. 31%
☒ 4. 29%

Question Type : MCQ

Question ID : 630680426088

Option 1 ID : 6306801662470

Option 2 ID : 6306801662468

Option 3 ID : 6306801662469

Option 4 ID : 6306801662467

Status : Answered

Chosen Option : 3

Q.14 What sum (in ₹) will earn a simple interest of ₹360 in 3 years at 8% per year rate of interest?

- Ans ☒ 1. 3000
☒ 2. 750
☒ 3. 2000
☒ 4. 1500

Question Type : MCQ

Question ID : 630680612187

Option 1 ID : 6306802395482

Option 2 ID : 6306802395481

Option 3 ID : 6306802395483

Option 4 ID : 6306802395480

Status : Answered

Chosen Option : 4

Q.15 The scale of a map is given as 1:250. Two cities are 6.5 km apart on the map. The actual distance between them is

- Ans ☒ 1. 1625 km
☒ 2. 1250 km
☒ 3. 1000 km
☒ 4. 1200 km

Question Type : MCQ

Question ID : 630680262101

Option 1 ID : 6306801018051

Option 2 ID : 6306801018053

Option 3 ID : 6306801018054

Option 4 ID : 6306801018052

Status : Answered

Chosen Option : 1

Q.16 The LCM of $\frac{1}{6}, \frac{4}{15}, \frac{5}{9}, \frac{7}{27}, \frac{8}{3}$ is:

- Ans ☒ 1. $93\frac{1}{3}$
☒ 2. $92\frac{1}{3}$
☒ 3. $93\frac{2}{3}$
☒ 4. $92\frac{2}{3}$

Question Type : MCQ

Question ID : 630680103475

Option 1 ID : 630680402143

Option 2 ID : 630680402146

Option 3 ID : 630680402144

Option 4 ID : 630680402145

Status : Answered

Chosen Option : 3

Q.17 The average of 20, 40, 60, 80, 100, 120 and 140 is:

- Ans ☒ 1. 70
☒ 2. 80
☒ 3. 90
☒ 4. 85

Question Type : MCQ
Question ID : 630680125142
Option 1 ID : 630680485348
Option 2 ID : 630680485346
Option 3 ID : 630680485347
Option 4 ID : 630680485349
Status : Answered
Chosen Option : 2

Q.18 The average income of 25 persons is ₹2,400 and that of another 20 persons is ₹1,500.
The average income of all of them together is:

- Ans ☒ 1. ₹2,100
☒ 2. ₹1,950
☒ 3. ₹2,000
☒ 4. ₹2,150

Question Type : MCQ
Question ID : 630680455610
Option 1 ID : 6306801779352
Option 2 ID : 6306801779351
Option 3 ID : 6306801779350
Option 4 ID : 6306801779353
Status : Answered
Chosen Option : 3

Q.19 A boat can travel at a speed of 13 km/h in still water. If the speed of the stream is 4 km/h, find the time taken by the boat to go 68 km downstream.

- Ans ☒ 1. 3 hours
☒ 2. 5 hours
☒ 3. 6 hours
☒ 4. 4 hours

Question Type : MCQ
Question ID : 630680120232
Option 1 ID : 630680465965
Option 2 ID : 630680465963
Option 3 ID : 630680465964
Option 4 ID : 630680465962
Status : Answered
Chosen Option : 4

Q.20 If 45% of the sum of the two numbers is equal to 60% of the difference between the two numbers, find the ratio of the smallest number to the greatest number.

- Ans ☒ 1. 3 : 4
☒ 2. 1 : 7
☒ 3. 7 : 1
☒ 4. 4 : 3

Question Type : **MCQ**
Question ID : **630680464483**
Option 1 ID : **6306801813967**
Option 2 ID : **6306801813970**
Option 3 ID : **6306801813968**
Option 4 ID : **6306801813969**
Status : **Answered**
Chosen Option : **2**

Section : Reasoning Ability and Problem Solving

Q.1 Select the set in which the numbers are related in the same way as are the numbers of the following sets.

(NOTE: Operations should be performed on the whole numbers, without breaking down the numbers into their constituent digits. E.g. 13 – Operations on 13 such as adding/subtracting/multiplying etc. to 13, can be performed. Breaking down 13 into 1 and 3 and then performing mathematical operations on 1 and 3 is not allowed.)
(1, 16, 5)
(2, 19, 7)

- Ans ☒ 1. (3, 35, 5)
☒ 2. (5, 20, 6)
☒ 3. (8, 22, 4)
☒ 4. (6, 40, 3)

Question Type : **MCQ**
Question ID : **630680404981**
Option 1 ID : **6306801579355**
Option 2 ID : **6306801579358**
Option 3 ID : **6306801579357**
Option 4 ID : **6306801579356**
Status : **Answered**
Chosen Option : **2**

Q.2 Read the given statements and conclusions carefully. Assuming that the information given in the statements is true, even if it appears to be at variance with commonly known facts, decide which of the given conclusions logically follow(s) from the statements.

Statements:

All lions are cheetahs.

Some cheetahs are tigers.

Conclusions:

(I) Some tigers are not cheetahs.

(II) All cheetahs are lions.

Ans  1. Neither conclusion I nor II follows

 2. Only conclusion I follows

 3. Both conclusions I and II follow

 4. Only conclusion II follows

Question Type : **MCQ**

Question ID : **630680410643**

Option 1 ID : **6306801601335**

Option 2 ID : **6306801601332**

Option 3 ID : **6306801601334**

Option 4 ID : **6306801601333**

Status : **Marked For Review**

Chosen Option : **2**

Q.3 What should come in place of the question mark (?) in the given series based on the English alphabetical order?
CHK, GKO, ? , OQW, STA

Ans  1. KNT

 2. LOS

 3. KNS

 4. LOT

Question Type : **MCQ**

Question ID : **630680334786**

Option 1 ID : **6306801302403**

Option 2 ID : **6306801302404**

Option 3 ID : **6306801302401**

Option 4 ID : **6306801302402**

Status : **Answered**

Chosen Option : **3**

Q.4 Which two numbers should be interchanged to make the given equation correct?

$$28 - 4 \times 5 + 36 \div 9 + 2 \times 3 = 53$$

(Note: Interchange should be done of entire number and not individual digits of a given number)

- Ans
- ☐ 1. 4 and 9
 - ☐ 2. 5 and 3
 - ☐ 3. 28 and 36
 - ☒ 4. 2 and 9

Question Type : MCQ

Question ID : 630680413407

Option 1 ID : 6306801612454

Option 2 ID : 6306801612453

Option 3 ID : 6306801612452

Option 4 ID : 6306801612455

Status : Answered

Chosen Option : 4

Q.5 Select the figure from among the given options that can replace the question mark (?) in the following series and complete the pattern.

| | | | | |
|-----------|-----------|-----|---------|---|
| 4 = P X X | 4 = P T X | P 2 | 2 T X P | ? |
| 2 T T | 2 4 = | = | 4 | |

Ans

✓ 1.

| |
|---------|
| = 2 P 4 |
| T X |

✗ 2.

| |
|---------|
| = X T 2 |
| 4 P |

✗ 3.

| |
|---------|
| T = 4 X |
| 2 P |

✗ 4.

| |
|---------|
| P X T 4 |
| 2 = |

Question Type : MCQ
Question ID : 630680441079
Option 1 ID : 6306801721971
Option 2 ID : 6306801721970
Option 3 ID : 6306801721972
Option 4 ID : 6306801721973
Status : Answered
Chosen Option : 1

Q.6 In a certain code language, 'CREATE' is coded as '84' and 'FLOP' is coded as '56'.
What is the code for 'PURPOSEFULLY' in the given code language?

- Ans ☒ 1. 117
☒ 2. 168
☒ 3. 142
☒ 4. 170

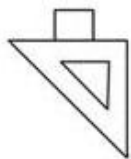
Question Type : **MCQ**
Question ID : **630680387811**
Option 1 ID : **6306801511878**
Option 2 ID : **6306801511880**
Option 3 ID : **6306801511879**
Option 4 ID : **6306801511881**
Status : **Answered**
Chosen Option : **2**

Q.7 In a certain code language, 'shreya goes to temple' is written as 'ci bi di fi' and 'veer might visit temple' is written as 'ti fi ji vi'. How is 'temple' written in the given language?

- Ans ☒ 1. ti
☒ 2. fi
☒ 3. ji
☒ 4. ci

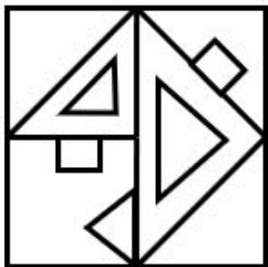
Question Type : **MCQ**
Question ID : **630680439032**
Option 1 ID : **6306801713941**
Option 2 ID : **6306801713942**
Option 3 ID : **6306801713943**
Option 4 ID : **6306801713940**
Status : **Answered**
Chosen Option : **2**

Q.8 Select the option in which the given figure is embedded (rotation is NOT allowed).

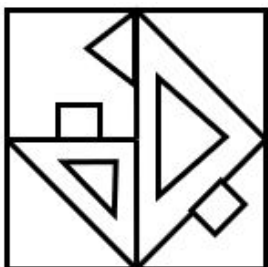


Ans

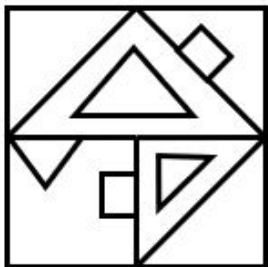
✗ 1.



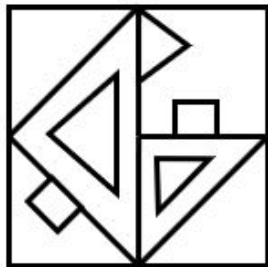
✓ 2.



✗ 3.



✗ 4.



Question Type : MCQ
Question ID : 630680524441
Option 1 ID : 6306802049865
Option 2 ID : 6306802049864
Option 3 ID : 6306802049863
Option 4 ID : 6306802049866
Status : Answered
Chosen Option : 2

Q.9 What will come in the place of '?' in the following equation, if '+' and '-' are interchanged and 'x' and '÷' are interchanged?
 $16 - 4 \times 2 \div 3 + 6 = ?$

- Ans
- ☐ 1. 8
 - ☐ 2. 24
 - ☐ 3. 12
 - ☒ 4. 16

Question Type : MCQ
Question ID : 630680271473
Option 1 ID : 6306801054967
Option 2 ID : 6306801054964
Option 3 ID : 6306801054965
Option 4 ID : 6306801054966
Status : Answered
Chosen Option : 4

Q.10 Read the given statements and conclusions carefully. Assuming that the information given in the statements is true, even if it appears to be at variance with commonly known facts, decide which of the given conclusions logically follow(s) from the statements.

Statements:

- All hands are legs.
- Some hands are eyes.

Conclusion (I): All legs are hands.

Conclusion (II): Some legs are eyes.

- Ans
- ☐ 1. Both Conclusions I and II follow
 - ☐ 2. Neither Conclusion I nor II follows
 - ☐ 3. Only Conclusion I follows
 - ☒ 4. Only Conclusion II follows

Question Type : MCQ
Question ID : 630680396216
Option 1 ID : 6306801544978
Option 2 ID : 6306801544979
Option 3 ID : 6306801544976
Option 4 ID : 6306801544977
Status : Answered
Chosen Option : 4

Q.11 Identify the figure from the given options that when put in place of the question mark (?) will logically complete the series.

| | | | | |
|-----------------|---------------|-----------------|-----------------|---|
| Q △ ● ☆ ☆ | R ● △ △ | S ☆ △ ● ● | T △ ● ● ☆ | ? |
|-----------------|---------------|-----------------|-----------------|---|

Ans

- ✖ 1.

R

●

☆ △
- ✔ 2.

U

●

☆ △
- ✖ 3.

P

●

△ ☆
- ✖ 4.

T

☆

● △

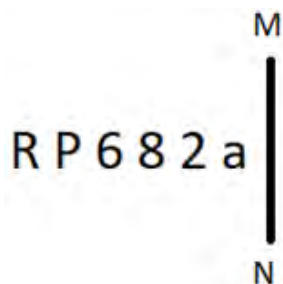
Question Type : MCQ
Question ID : 630680287253
Option 1 ID : 6306801116922
Option 2 ID : 6306801116919
Option 3 ID : 6306801116920
Option 4 ID : 6306801116921
Status : Answered
Chosen Option : 2

Q.12 In a certain code language, 'use the force' is coded as 'gp sb cn' and 'force is strong' is coded as 'hv sk gp'. How is 'force' coded in that language?

- Ans ☒ 1. sk
☒ 2. gp
☒ 3. hv
☒ 4. cn

Question Type : MCQ
Question ID : 630680825485
Option 1 ID : 6306803233488
Option 2 ID : 6306803233486
Option 3 ID : 6306803233487
Option 4 ID : 6306803233485
Status : Answered
Chosen Option : 2

Q.13 Select the correct mirror image of the given figure when the mirror is placed at MN as shown below.



- Ans ☒ 1. 2 a 8 ɔ ɹ Я
☒ 2. ɹ ɔ 8 ɹ Я
☒ 3. a ɔ 8 9 d Я
☒ 4. ɹ ɔ 8 ɔ R P

Question Type : MCQ
Question ID : 630680525237
Option 1 ID : 6306802053035
Option 2 ID : 6306802053032
Option 3 ID : 6306802053034
Option 4 ID : 6306802053033
Status : Answered
Chosen Option : 2

Q.14 NKBI is related to PIDG in a certain way based on the English alphabetical order. In the same way, SMFG is related to UKHE. To which of the following is UPQR related, following the same logic?

- Ans ☒ 1. TRDW
☒ 2. YGBF
☒ 3. WNSP
☒ 4. WRSD

Question Type : **MCQ**
Question ID : **630680387609**
Option 1 ID : **6306801511103**
Option 2 ID : **6306801511102**
Option 3 ID : **6306801511105**
Option 4 ID : **6306801511104**
Status : **Answered**
Chosen Option : **3**

Q.15 In a certain code language, 'he played well' is written as 'yt pu jk' and 'well in manner' is written as 'pu nt cr'. How is 'well' written in the given language?

- Ans ☒ 1. yt
☒ 2. pu
☒ 3. jk
☒ 4. cr

Question Type : **MCQ**
Question ID : **630680439113**
Option 1 ID : **6306801714264**
Option 2 ID : **6306801714265**
Option 3 ID : **6306801714266**
Option 4 ID : **6306801714267**
Status : **Answered**
Chosen Option : **2**

Q.16 192 is related to 38 following a certain logic. Following the same logic, 270 is related to 51. To which of the following is 258 related, following the same logic?

(NOTE: Operations should be performed on the whole numbers, without breaking down the numbers into its constituent digits. E.g. 13 – Operations on 13 such as adding/subtracting/multiplying etc. to 13 can be performed. Breaking down 13 into 1 and 3 and then performing mathematical operations on 1 and 3 is not allowed.)

- Ans ☒ 1. 43
☒ 2. 46
☒ 3. 41
☒ 4. 49

Question Type : **MCQ**
Question ID : **630680436303**
Option 1 ID : **6306801703153**
Option 2 ID : **6306801703155**
Option 3 ID : **6306801703154**
Option 4 ID : **6306801703156**
Status : **Answered**
Chosen Option : **2**

Q.17 What should come in place of the question mark (?) in the given series?

4, 7, 11, 18, 29, 47, 76, ?, 199

Ans  1. 123

 2. 127

 3. 125

 4. 130

Question Type : MCQ

Question ID : 630680402513

Option 1 ID : 6306801569608

Option 2 ID : 6306801569609

Option 3 ID : 6306801569607

Option 4 ID : 6306801569610

Status : Answered

Chosen Option : 2

Q.18 M, N, O, P, Q, R and S are sitting around a circular table facing the centre (but not necessarily in the same order). P is sitting fourth to the right of N. Q is sitting third to the left of O. M is sitting to the immediate right of Q. R is sitting to the immediate right of N. How many people are sitting between P and S when counted from the left of S?

Ans  1. 1

 2. 2

 3. 4

 4. 3

Question Type : MCQ

Question ID : 630680377733

Option 1 ID : 6306801471991

Option 2 ID : 6306801471992

Option 3 ID : 6306801471994

Option 4 ID : 6306801471993

Status : Answered

Chosen Option : 2

Q.19 RQ 45 is related to TS 50 in a certain way. In the same way, UX 19 is related to WZ 24. To which of the following is CF 68 related following the same logic?

Ans  1. EH 73

 2. NT 45

 3. NV 37

 4. ST 55

Question Type : MCQ

Question ID : 630680436088

Option 1 ID : 6306801702295

Option 2 ID : 6306801702293

Option 3 ID : 6306801702296

Option 4 ID : 6306801702294

Status : Answered

Chosen Option : 2

Q.20 A, B, C, L, M, Y and X are sitting around a circular table facing the centre (but not necessarily in the same order). C sits fourth to the left of M. Only one person sits between L and Y when counted from the left of L. Only one person sits between Y and X when counted from left of Y. Only two people sit between A and Y when counted from the right of A. Who sits third to the right of B?

- Ans ☒ 1. X
☒ 2. L
☒ 3. A
☒ 4. C

Question Type : MCQ
Question ID : 630680382202
Option 1 ID : 6306801489726
Option 2 ID : 6306801489725
Option 3 ID : 6306801489723
Option 4 ID : 6306801489724
Status : Answered
Chosen Option : 3

Section : General Awareness

Q.1 'Waiting for a Visa' is a 20-page autobiography of _____.

- Ans ☒ 1. Mahatma Gandhi
☒ 2. Sadar Vallabhbhai Patel
☒ 3. Dr Bhim Rao Ambedkar
☒ 4. Jawahar Lal Nehru

Question Type : MCQ
Question ID : 630680798917
Option 1 ID : 6306803130476
Option 2 ID : 6306803130477
Option 3 ID : 6306803130474
Option 4 ID : 6306803130475
Status : Answered
Chosen Option : 1

Q.2 Which of the following is the residential place of Buddhist priests?

- Ans ☒ 1. Stupa
☒ 2. Chaitya
☒ 3. Vihara
☒ 4. Stambha

Question Type : MCQ
Question ID : 630680567230
Option 1 ID : 6306802217918
Option 2 ID : 6306802217919
Option 3 ID : 6306802217917
Option 4 ID : 6306802217920
Status : Answered
Chosen Option : 3

Q.3 Which of the following is an artificial port in India?

- Ans ☒ 1. Chennai port
☐ 2. Mumbai port
☐ 3. Deendayal port
☐ 4. Kolkata port

Question Type : MCQ
Question ID : 630680142996
Option 1 ID : 630680553446
Option 2 ID : 630680553447
Option 3 ID : 630680553449
Option 4 ID : 630680553448
Status : Answered
Chosen Option : 1

Q.4 Which of the following possesses the largest isolated single cell?

- Ans ☐ 1. Human brain
☐ 2. Blue whale
☒ 3. Ostrich egg
☐ 4. Amoeba

Question Type : MCQ
Question ID : 630680270224
Option 1 ID : 6306801050147
Option 2 ID : 6306801050148
Option 3 ID : 6306801050150
Option 4 ID : 6306801050149
Status : Answered
Chosen Option : 3

Q.5 The National Programme for Civil Services Capacity Building (NPCSCB) envisaged by the Central Government is called _____.

- Ans ☐ 1. Sahakar Mitra Scheme
☐ 2. Seed Scheme
☒ 3. Mission Karmayogi
☐ 4. Seva Nidhi Scheme

Question Type : MCQ
Question ID : 630680481192
Option 1 ID : 6306801879339
Option 2 ID : 6306801879337
Option 3 ID : 6306801879338
Option 4 ID : 6306801879336
Status : Answered
Chosen Option : 3

Q.6 Name the Union territory with the lowest density of population as per Census of India 2011.

- Ans ☒ 1. Lakshdweep
☒ 2. New Delhi
☒ 3. Daman and Diu
☒ 4. Andaman and Nicobar Islands

Question Type : **MCQ**
Question ID : **630680488631**
Option 1 ID : **6306801908543**
Option 2 ID : **6306801908545**
Option 3 ID : **6306801908544**
Option 4 ID : **6306801908546**
Status : **Answered**
Chosen Option : **4**

Q.7 Which festival commemorates the death of Hussain Ibn Ali?

- Ans ☒ 1. Milad-un-nabi
☒ 2. Eid-ul-fitr
☒ 3. Shab-i-baraat
☒ 4. Muharram

Question Type : **MCQ**
Question ID : **630680449833**
Option 1 ID : **6306801756502**
Option 2 ID : **6306801756500**
Option 3 ID : **6306801756501**
Option 4 ID : **6306801756503**
Status : **Answered**
Chosen Option : **2**

Q.8 Which of the following instruments is played by Shreya Bhattacharjee, an eminent musician from Assam?

- Ans ☒ 1. Flute
☒ 2. Violin
☒ 3. Tabla
☒ 4. Sitar

Question Type : **MCQ**
Question ID : **630680646213**
Option 1 ID : **6306802530131**
Option 2 ID : **6306802530130**
Option 3 ID : **6306802530128**
Option 4 ID : **6306802530129**
Status : **Not Answered**
Chosen Option : **--**

Q.9 Which of the following dance forms emotes a play through dancing in which the song is customarily in Manipravala language?

- Ans ☒ 1. Kathak
☒ 2. Sattriya
☒ 3. Mohiniattam
☒ 4. Kuchipudi

Question Type : MCQ
Question ID : 630680403234
Option 1 ID : 6306801572435
Option 2 ID : 6306801572436
Option 3 ID : 6306801572433
Option 4 ID : 6306801572434
Status : Answered
Chosen Option : 3

Q.10 Which of the following Commissions was set up to investigate the incident of Jallianwala Bagh in 1919?

- Ans ☒ 1. Peel Commission
☒ 2. Sadler Commission
☒ 3. Simon Commission
☒ 4. Hunter Commission

Question Type : MCQ
Question ID : 630680198461
Option 1 ID : 630680769805
Option 2 ID : 630680769804
Option 3 ID : 630680769803
Option 4 ID : 630680769806
Status : Answered
Chosen Option : 2

Q.11 Which of the following national income aggregates is generally recognised as National Income of a country?

- Ans ☒ 1. Gross Domestic Product at Factor Cost
☒ 2. Net National Product at Factor Cost
☒ 3. Gross National Product at Market Prices
☒ 4. Net National Product at Market Prices

Question Type : MCQ
Question ID : 630680422535
Option 1 ID : 6306801648576
Option 2 ID : 6306801648578
Option 3 ID : 6306801648577
Option 4 ID : 6306801648579
Status : Answered
Chosen Option : 4

Q.12 In a food chain of Algae-Shrimp-Fish-Bird, if the energy available at the bird is 4 kJ, then the energy available at the shrimp is:

- Ans ☒ 1. 4 kJ
☒ 2. 0.04 kJ
☒ 3. 400 kJ
☒ 4. 4000 kJ

Question Type : MCQ
Question ID : 630680635446
Option 1 ID : 6306802487669
Option 2 ID : 6306802487667
Option 3 ID : 6306802487666
Option 4 ID : 6306802487668
Status : Answered
Chosen Option : 3

Q.13 Who among the following has been appointed as the new Director General of the Geological Survey of India (GSI) in June 2023?

- Ans ☒ 1. Janardan Prasad
☒ 2. Ajay Yadav
☒ 3. Amarendu Prakash
☒ 4. Ashwani Kumar

Question Type : MCQ
Question ID : 630680465509
Option 1 ID : 6306801818072
Option 2 ID : 6306801818073
Option 3 ID : 6306801818074
Option 4 ID : 6306801818071
Status : Not Answered
Chosen Option : --

Q.14 According to the census of India 2011, which union territory from the following has the highest sex ratio?

- Ans ☒ 1. Puducherry
☒ 2. Daman and Diu
☒ 3. Lakshadweep
☒ 4. Chandigarh

Question Type : MCQ
Question ID : 630680321623
Option 1 ID : 6306801251189
Option 2 ID : 6306801251192
Option 3 ID : 6306801251191
Option 4 ID : 6306801251190
Status : Answered
Chosen Option : 1

Q.15 The Directive Principles of State Policy are considered fundamental in the governance of the country, but they are not enforceable by any court. This concept is mentioned in which Article?

Ans ☒ 1. Article 37

☒ 2. Article 49

☒ 3. Article 38

☒ 4. Article 32

Question Type : **MCQ**

Question ID : **630680540819**

Option 1 ID : **6306802114314**

Option 2 ID : **6306802114316**

Option 3 ID : **6306802114317**

Option 4 ID : **6306802114315**

Status : **Answered**

Chosen Option : **2**

Q.16 From which state in India did the legendary volleyball player Jimmy George hail?

Ans ☒ 1. Kerala

☒ 2. Telangana

☒ 3. Maharashtra

☒ 4. Odisha

Question Type : **MCQ**

Question ID : **630680563615**

Option 1 ID : **6306802203413**

Option 2 ID : **6306802203414**

Option 3 ID : **6306802203415**

Option 4 ID : **6306802203416**

Status : **Not Answered**

Chosen Option : **--**

Q.17 Find the acceleration (in m/s^2) of a body which accelerates from 5 m/s to 10 m/s in 2 seconds.

Ans ☒ 1. 7.5 m/sec^2

☒ 2. 2.5 m/sec^2

☒ 3. 5 m/sec^2

☒ 4. 10 m/sec^2

Question Type : **MCQ**

Question ID : **630680531250**

Option 1 ID : **6306802076814**

Option 2 ID : **6306802076815**

Option 3 ID : **6306802076813**

Option 4 ID : **6306802076816**

Status : **Answered**

Chosen Option : **2**

Q.18 The Mawsynram receives the highest average annual rainfall in the world. It is located in which hills?

- Ans ☒ 1. Maikala hills
☒ 2. Khasi hills
☒ 3. Jaintia hills
☒ 4. Garo hills

Question Type : MCQ
Question ID : 630680510959
Option 1 ID : 6306801996968
Option 2 ID : 6306801996966
Option 3 ID : 6306801996969
Option 4 ID : 6306801996967
Status : Answered
Chosen Option : 2

Q.19 Pulakeshin II was the famous ruler of which of the following dynasties?

- Ans ☒ 1. Maitraka
☒ 2. Vakataka
☒ 3. Chalukya
☒ 4. Gauda

Question Type : MCQ
Question ID : 630680176032
Option 1 ID : 630680682377
Option 2 ID : 630680682376
Option 3 ID : 630680682379
Option 4 ID : 630680682378
Status : Answered
Chosen Option : 3

Q.20 In Maikal hills, which of the following minerals is deposited?

- Ans ☒ 1. Copper
☒ 2. Coal
☒ 3. Bauxite
☒ 4. Iron

Question Type : MCQ
Question ID : 630680456065
Option 1 ID : 6306801781200
Option 2 ID : 6306801781201
Option 3 ID : 6306801781199
Option 4 ID : 6306801781202
Status : Not Answered
Chosen Option : --

Q.21 The _____ Polo Club is the home of the Ezra Cup event, the world's oldest polo tournament, started in 1880.

Ans ☒ 1. Hyderabad

☒ 2. Calcutta

☒ 3. Jaipur

☒ 4. Delhi

Question Type : MCQ

Question ID : 630680546836

Option 1 ID : 6306802137913

Option 2 ID : 6306802137914

Option 3 ID : 6306802137911

Option 4 ID : 6306802137912

Status : Answered

Chosen Option : 1

Q.22 The Home Rule League Movement of Bal Gangadhar Tilak had its base across Karnataka and Maharashtra, but excluding which of the following?

Ans ☒ 1. Nagpur

☒ 2. Berar

☒ 3. Bombay

☒ 4. Poona

Question Type : MCQ

Question ID : 630680303402

Option 1 ID : 6306801180260

Option 2 ID : 6306801180261

Option 3 ID : 6306801180258

Option 4 ID : 6306801180259

Status : Answered

Chosen Option : 4

Q.23 For the development of agriculture, a new department, Diwan-i-Amir-Kohi was established by which of the following Sultans of Delhi?

Ans ☒ 1. Shamsuddin Iltutmish

☒ 2. Ghiyasuddin Balban

☒ 3. Alauddin Khalji

☒ 4. Muhammad Bin Tughlaq

Question Type : MCQ

Question ID : 630680282897

Option 1 ID : 6306801099720

Option 2 ID : 6306801099722

Option 3 ID : 6306801099719

Option 4 ID : 6306801099721

Status : Answered

Chosen Option : 1

Q.24 Who presides over the House in absence of the Speaker and the Deputy Speaker in the Indian political system?

- Ans** ☒ 1. Chief Justice of the Supreme Court
☒ 2. Prime Minister
☒ 3. President
☒ 4. Chairperson so nominated

Question Type : **MCQ**
Question ID : **63068099137**
Option 1 ID : **630680385254**
Option 2 ID : **630680385253**
Option 3 ID : **630680385252**
Option 4 ID : **630680385255**
Status : **Answered**
Chosen Option : **4**

Q.25 Who is the first Indian Female Dancer to receive the highest Padma award, Padma Vibhushan?

- Ans** ☒ 1. Shobha Naidu
☒ 2. Sonal Mansingh
☒ 3. Sanjukta Panigrahi
☒ 4. Madhavi Mudgal

Question Type : **MCQ**
Question ID : **630680433358**
Option 1 ID : **6306801691401**
Option 2 ID : **6306801691400**
Option 3 ID : **6306801691399**
Option 4 ID : **6306801691402**
Status : **Answered**
Chosen Option : **2**

Section : **English Language and Comprehension**

Q.1 Parts of the following sentence have been given as options. Select the option that contains an error.
He bought strange vintage car on auction from the customs department.

- Ans** ☒ 1. on auction
☒ 2. He bought
☒ 3. strange vintage car
☒ 4. from the customs department

Question Type : **MCQ**
Question ID : **630680514362**
Option 1 ID : **6306802010075**
Option 2 ID : **6306802010073**
Option 3 ID : **6306802010074**
Option 4 ID : **6306802010076**
Status : **Answered**
Chosen Option : **3**

Q.2 Select the most appropriate option to substitute the underlined idiom/phrase in the given sentence.

The salesman informed the customers that if they had any questions, they could drop a line.

- Ans**
- ☒ 1. complain against him
 - ☒ 2. come back with the items
 - ☒ 3. call his secretary
 - ☒ 4. send a brief letter

Question Type : **MCQ**
Question ID : **6306801106846**
Option 1 ID : **6306804347851**
Option 2 ID : **6306804347848**
Option 3 ID : **6306804347849**
Option 4 ID : **6306804347850**
Status : **Answered**
Chosen Option : **4**

Q.3 Select the most appropriate option to fill in the blank.

His business was so successful that Mark was able to _____ at the age of 50.

- Ans**
- ☒ 1. succeed
 - ☒ 2. admit
 - ☒ 3. give up
 - ☒ 4. retire

Question Type : **MCQ**
Question ID : **630680515226**
Option 1 ID : **6306802013369**
Option 2 ID : **6306802013370**
Option 3 ID : **6306802013372**
Option 4 ID : **6306802013371**
Status : **Answered**
Chosen Option : **1**

Q.4 Select the option with the correct spelling to replace the underlined word in the given sentence.

As the roller coaster reached its highest point, a surge of addrenalline coursed through her veins, making her heart race with excitement.

- Ans**
- ☒ 1. adrennalline
 - ☒ 2. adreneline
 - ☒ 3. adrenaline
 - ☒ 4. adrineline

Question Type : **MCQ**
Question ID : **630680799104**
Option 1 ID : **6306803131217**
Option 2 ID : **6306803131215**
Option 3 ID : **6306803131214**
Option 4 ID : **6306803131216**
Status : **Not Answered**
Chosen Option : **--**

Q.5 Select the most appropriate synonym of the underlined word in the given sentence.
Wine glass is very fragile; you must handle it with care.

- Ans ☒ 1. Sturdy
☒ 2. Delicate
☒ 3. Rough
☒ 4. Resilient

Question Type : **MCQ**
Question ID : **630680726525**
Option 1 ID : **6306802847106**
Option 2 ID : **6306802847107**
Option 3 ID : **6306802847108**
Option 4 ID : **6306802847109**
Status : **Answered**
Chosen Option : **2**

Q.6 Select the most appropriate option to fill in the blank.

Please bring some milk from _____ refrigerator in the kitchen.

- Ans ☒ 1. an
☒ 2. a
☒ 3. No article required
☒ 4. the

Question Type : **MCQ**
Question ID : **630680748925**
Option 1 ID : **6306802935234**
Option 2 ID : **6306802935235**
Option 3 ID : **6306802935232**
Option 4 ID : **6306802935233**
Status : **Answered**
Chosen Option : **4**

Q.7 The following sentence has been divided into parts. One of them may contain an error.
Select the part that contains the error from the given options. If you don't find any error, mark 'No error' as your answer.
Tara has been playing / cricket with her friends / since noon.

- Ans ☒ 1. Tara has been playing
☒ 2. Since noon
☒ 3. Cricket with her friends
☒ 4. No error

Question Type : **MCQ**
Question ID : **630680156742**
Option 1 ID : **630680606608**
Option 2 ID : **630680606610**
Option 3 ID : **630680606609**
Option 4 ID : **630680606611**
Status : **Answered**
Chosen Option : **4**

Q.8 Select the option that will improve the underlined part of the given sentence.

Just when they reach the airport, the flight had departed from the runway.

- Ans ☒ 1. After they just reach
☒ 2. Just before they reached
☒ 3. Just when they have reached
☒ 4. Just they reach

Question Type : MCQ
Question ID : 630680483353
Option 1 ID : 6306801887791
Option 2 ID : 6306801887790
Option 3 ID : 6306801887792
Option 4 ID : 6306801887793
Status : Answered
Chosen Option : 2

Q.9 Select the most appropriate option to fill in the blank.

Sathish remained unwavering in the face of the assaulting gang, standing as resolute as _____.

- Ans ☒ 1. still
☒ 2. stall
☒ 3. steel
☒ 4. steal

Question Type : MCQ
Question ID : 630680459193
Option 1 ID : 6306801793625
Option 2 ID : 6306801793628
Option 3 ID : 6306801793627
Option 4 ID : 6306801793626
Status : Answered
Chosen Option : 1

Q.10 Select the most appropriate ANTONYM of the highlighted word.

As long as I live, I shall be obliged to my Uncle.

- Ans ☒ 1. thankless
☒ 2. indebted
☒ 3. grateful
☒ 4. pleased

Question Type : MCQ
Question ID : 630680799100
Option 1 ID : 6306803131200
Option 2 ID : 6306803131201
Option 3 ID : 6306803131198
Option 4 ID : 6306803131199
Status : Answered
Chosen Option : 1

Q.11 Select the most appropriate option to fill in the blank.

Though Amal took continuous medication, he was not able to _____ his injury.

Ans ☒ 1. heal

☐ 2. heel

☐ 3. hill

☐ 4. hail

Question Type : MCQ

Question ID : 630680459191

Option 1 ID : 6306801793620

Option 2 ID : 6306801793619

Option 3 ID : 6306801793617

Option 4 ID : 6306801793618

Status : Answered

Chosen Option : 1

Q.12 The following sentence has been split into four parts. Identify the part that contains a grammatical error.

Surprisingly!! dark chocolates/ are most bitterer/ in taste.

Ans ☐ 1. Surprisingly!

☐ 2. dark chocolates

☐ 3. in taste.

☒ 4. are most bitterer

Question Type : MCQ

Question ID : 630680514648

Option 1 ID : 6306802011217

Option 2 ID : 6306802011218

Option 3 ID : 6306802011220

Option 4 ID : 6306802011219

Status : Answered

Chosen Option : 4

Q.13 Select the most appropriate synonym of the underlined word.

The company's new product received affirmative feedback from customers.

Ans ☒ 1. positive

☐ 2. detailed

☐ 3. reflective

☐ 4. critical

Question Type : MCQ

Question ID : 630680517470

Option 1 ID : 6306802022277

Option 2 ID : 6306802022276

Option 3 ID : 6306802022278

Option 4 ID : 6306802022279

Status : Answered

Chosen Option : 4

Q.14 The following sentence has been divided into parts. One of them may contain an error. Select the part that contains the error from the given options. If you don't find any error, mark 'No error' as your answer.

I had never saw/ such a sight/ before I visited Switzerland.

- Ans ☒ 1. No error
- ☒ 2. I had never saw
- ☒ 3. before I visited Switzerland.
- ☒ 4. such a sight

Question Type : MCQ
Question ID : 630680421191
Option 1 ID : 6306801643242
Option 2 ID : 6306801643239
Option 3 ID : 6306801643241
Option 4 ID : 6306801643240
Status : Answered
Chosen Option : 2

Q.15 Select the INCORRECTLY spelt word.

- Ans ☒ 1. Kinetic
- ☒ 2. Hektic
- ☒ 3. Gentle
- ☒ 4. Brilliant

Question Type : MCQ
Question ID : 630680539879
Option 1 ID : 6306802110619
Option 2 ID : 6306802110618
Option 3 ID : 6306802110617
Option 4 ID : 6306802110616
Status : Answered
Chosen Option : 2

Q.16 Select the option that rectifies the underlined spelling error.

The permissibe limit of vehicle speed has been increased in India by the Road Transport Corporation.

- Ans ☒ 1. permisibble
- ☒ 2. parmited
- ☒ 3. permissible
- ☒ 4. parmissible

Question Type : MCQ
Question ID : 630680565281
Option 1 ID : 6306802210100
Option 2 ID : 6306802210099
Option 3 ID : 6306802210098
Option 4 ID : 6306802210097
Status : Answered
Chosen Option : 3

Q.17 Select the option that can be used as a one-word substitute for the given group of words.

A person who is mentally ill

- Ans ☒ 1. Mercenary
☒ 2. Psychiatrist
☒ 3. Lunatic
☒ 4. Psychologist

Question Type : MCQ

Question ID : 630680553342

Option 1 ID : 6306802163283

Option 2 ID : 6306802163281

Option 3 ID : 6306802163280

Option 4 ID : 6306802163282

Status : Answered

Chosen Option : 1

Q.18 Select the most appropriate option that can substitute the underlined segment in the given sentence.

She confided in me on her anxious, whispering her secrets between sips of coffee.

- Ans ☒ 1. about her anxiety
☒ 2. regarding herself's anxiousness
☒ 3. on her anxiousness
☒ 4. about her anxious

Question Type : MCQ

Question ID : 630680539831

Option 1 ID : 6306802110424

Option 2 ID : 6306802110425

Option 3 ID : 6306802110426

Option 4 ID : 6306802110427

Status : Answered

Chosen Option : 3

Q.19 Select the most appropriate phrase to replace the underlined word.

She is feeling unwell today, so she will not be going to work.

- Ans ☒ 1. face like thunder
☒ 2. head in the clouds
☒ 3. under the weather
☒ 4. chase rainbows

Question Type : MCQ
Question ID : 630680399120
Option 1 ID : 6306801556441
Option 2 ID : 6306801556440
Option 3 ID : 6306801556439
Option 4 ID : 6306801556438
Status : Answered
Chosen Option : 3

Q.20 The following sentence has been split into four segments. Identify the segment that contains a grammatical error.

She told me / her name but / I'm not remembering / it now.

- Ans ☒ 1. it now
☒ 2. I'm not remembering
☒ 3. her name but
☒ 4. She told me

Question Type : MCQ
Question ID : 630680726462
Option 1 ID : 6306802846855
Option 2 ID : 6306802846856
Option 3 ID : 6306802846854
Option 4 ID : 6306802846857
Status : Answered
Chosen Option : 2

Comprehension:

In the following passage, some words have been deleted. Read the passage carefully and select the most appropriate option to fill in each blank.

These letters are not intended to dominate your way of thinking or to persuade you to _____ 1_____ to the way the writer thinks or feels. It is really a dialogue _____ 2_____ two friends talking about their problems. You must have observed the state of our society, and that there must be a _____ 3_____ transformation in the way human beings live, their relation to each other, and in every way possible. We are deeply concerned for our students. The teacher is the _____ 4_____ important person in the school, for on her or him depends the future welfare of mankind. As the society is disintegrating, these schools must be centres for the regeneration _____ 5_____ the mind.

SubQuestion No : 21

Q.21 Select the most appropriate option to fill in blank number 1.

Ans ☒ 1. conform

☐ 2. control

☐ 3. confirm

☐ 4. affirm

Question Type : **MCQ**

Question ID : **630680484419**

Option 1 ID : **6306801892004**

Option 2 ID : **6306801892005**

Option 3 ID : **6306801892003**

Option 4 ID : **6306801892002**

Status : **Answered**

Chosen Option : **3**

Comprehension:

In the following passage, some words have been deleted. Read the passage carefully and select the most appropriate option to fill in each blank.

These letters are not intended to dominate your way of thinking or to persuade you to _____ 1_____ to the way the writer thinks or feels. It is really a dialogue _____ 2_____ two friends talking about their problems. You must have observed the state of our society, and that there must be a _____ 3_____ transformation in the way human beings live, their relation to each other, and in every way possible. We are deeply concerned for our students. The teacher is the _____ 4_____ important person in the school, for on her or him depends the future welfare of mankind. As the society is disintegrating, these schools must be centres for the regeneration _____ 5_____ the mind.

SubQuestion No : 22

Q.22 Select the most appropriate option to fill in blank number 2.

Ans ☐ 1. unless

☐ 2. behind

☐ 3. before

☒ 4. between

Question Type : **MCQ**

Question ID : **630680484420**

Option 1 ID : **6306801892006**

Option 2 ID : **6306801892009**

Option 3 ID : **6306801892008**

Option 4 ID : **6306801892007**

Status : **Answered**

Chosen Option : **4**

Comprehension:

In the following passage, some words have been deleted. Read the passage carefully and select the most appropriate option to fill in each blank.

These letters are not intended to dominate your way of thinking or to persuade you to _____ 1_____ to the way the writer thinks or feels. It is really a dialogue _____ 2_____ two friends talking about their problems. You must have observed the state of our society, and that there must be a _____ 3_____ transformation in the way human beings live, their relation to each other, and in every way possible. We are deeply concerned for our students. The teacher is the _____ 4_____ important person in the school, for on her or him depends the future welfare of mankind. As the society is disintegrating, these schools must be centres for the regeneration _____ 5_____ the mind.

SubQuestion No : 23

Q.23 Select the most appropriate option to fill in blank number 3.

- Ans ☒ 1. highly
☒ 2. radical
☐ 3. radial
☐ 4. avoidable

Question Type : **MCQ**
Question ID : **630680484421**
Option 1 ID : **6306801892012**
Option 2 ID : **6306801892011**
Option 3 ID : **6306801892010**
Option 4 ID : **6306801892013**
Status : **Answered**
Chosen Option : **2**

Comprehension:

In the following passage, some words have been deleted. Read the passage carefully and select the most appropriate option to fill in each blank.

These letters are not intended to dominate your way of thinking or to persuade you to _____ 1_____ to the way the writer thinks or feels. It is really a dialogue _____ 2_____ two friends talking about their problems. You must have observed the state of our society, and that there must be a _____ 3_____ transformation in the way human beings live, their relation to each other, and in every way possible. We are deeply concerned for our students. The teacher is the _____ 4_____ important person in the school, for on her or him depends the future welfare of mankind. As the society is disintegrating, these schools must be centres for the regeneration _____ 5_____ the mind.

SubQuestion No : 24

Q.24 Select the most appropriate option to fill in blank number 4.

- Ans ☒ 1. most
☐ 2. much
☐ 3. more
☐ 4. not

Question Type : **MCQ**
Question ID : **630680484422**
Option 1 ID : **6306801892017**
Option 2 ID : **6306801892016**
Option 3 ID : **6306801892015**
Option 4 ID : **6306801892014**
Status : **Answered**
Chosen Option : **1**


Comprehension:

In the following passage, some words have been deleted. Read the passage carefully and select the most appropriate option to fill in each blank.

These letters are not intended to dominate your way of thinking or to persuade you to _____ 1_____ to the way the writer thinks or feels. It is really a dialogue _____ 2_____ two friends talking about their problems. You must have observed the state of our society, and that there must be a _____ 3_____ transformation in the way human beings live, their relation to each other, and in every way possible. We are deeply concerned for our students. The teacher is the _____ 4_____ important person in the school, for on her or him depends the future welfare of mankind. As the society is disintegrating, these schools must be centres for the regeneration _____ 5_____ the mind.

SubQuestion No : 25

Q.25 Select the most appropriate option to fill in blank number 5.

- Ans  1. off
-  2. of
-  3. although
-  4. under

Question Type : **MCQ**
Question ID : **630680484423**
Option 1 ID : **6306801892019**
Option 2 ID : **6306801892018**
Option 3 ID : **6306801892020**
Option 4 ID : **6306801892021**
Status : **Answered**
Chosen Option : **2**