

Multi Tasking Non Technical Staff and Havaladar CBIC and CBN Examination 2024

Roll Number	
Candidate Name	
Venue Name	iON Digital Zone iDZ Chitoura Road
Exam Date	14/11/2024
Exam Time	9:00 AM - 11:00 AM
Subject	MTS Non Tech Havaladar CBIC and CBN Examination 2024

Section : Numerical and Mathematical Ability

Q.1 A bought an item for ₹384 and sold it for ₹576, and B bought another item for ₹1,254 and sold it for ₹1,672. What is the ratio of gain percentage of A to gain percentage of B?

- Ans
- ☒ 1. $\frac{5}{3}$
- ☒ 2. $\frac{3}{2}$
- ☐ 3. $\frac{5}{2}$
- ☐ 4. $\frac{3}{4}$

Question Type : MCQ
Question ID : 630680287143
Option 1 ID : 6306801116482
Option 2 ID : 6306801116481
Option 3 ID : 6306801116479
Option 4 ID : 6306801116480
Status : Answered
Chosen Option : 2

Q.2 Among three numbers, the second number is half of the first number and the third number is 4 less than the second number. If the average of the first and third numbers is 16, what is the second number?

- Ans
- ☒ 1. 12
- ☐ 2. 10
- ☐ 3. 18
- ☐ 4. 16

Question Type : MCQ
Question ID : 6306801108824
Option 1 ID : 6306804355883
Option 2 ID : 6306804355882
Option 3 ID : 6306804355885
Option 4 ID : 6306804355884
Status : Answered
Chosen Option : 1

Q.3 Find the simple interest (in ₹) on ₹3000 as a sum borrowed at 4% per year rate of interest for 5 years.

- Ans ☐ 1. 640
☐ 2. 560
☒ 3. 600
☐ 4. 540

Question Type : MCQ

Question ID : 630680591931

Option 1 ID : 6306802316192

Option 2 ID : 6306802316194

Option 3 ID : 6306802316191

Option 4 ID : 6306802316193

Status : Answered

Chosen Option : 3

Q.4 After successive discounts of 26% and 22.5%, an item was sold at a profit of 24%. If the cost price of the item was ₹925, what was the marked price (in ₹) of the item?

- Ans ☐ 1. 1,975
☒ 2. 2,000
☐ 3. 2,200
☐ 4. 2,250

Question Type : MCQ

Question ID : 630680324996

Option 1 ID : 6306801264384

Option 2 ID : 6306801264381

Option 3 ID : 6306801264383

Option 4 ID : 6306801264382

Status : Answered

Chosen Option : 2

Q.5 A class teacher conducted a unit test in the class. If out of 25 students, 11 students' average score is 77 and rest 14 students' average score is 69, then the weighted average score is:

- Ans ☐ 1. 68.54
☒ 2. 72.52
☐ 3. 74.65
☐ 4. 70.29

Question Type : MCQ

Question ID : 630680477510

Option 1 ID : 6306801865198

Option 2 ID : 6306801865199

Option 3 ID : 6306801865200

Option 4 ID : 6306801865197

Status : Answered

Chosen Option : 1

Q.6 If two trains 200 m and 150 m long are running on parallel rails at the rate of 50 km/h and 30 km/h, respectively, find the relative speed if they are running in the same direction.

Ans

☒ 1. $\frac{25}{9}$ m/sec

☒ 2. $\frac{58}{18}$ m/sec

☒ 3. $\frac{25}{18}$ m/sec

☒ 4. $\frac{50}{9}$ m/sec

Question Type : MCQ

Question ID : 630680121585

Option 1 ID : 630680471301

Option 2 ID : 630680471300

Option 3 ID : 630680471298

Option 4 ID : 630680471299

Status : Answered

Chosen Option : 4

Q.7 ABCD is a quadrilateral in which diagonal BD = 62 cm, AL ⊥ BD and CM ⊥ BD, such that AL = 14.3 cm and CM = 17.7 cm. The area of the quadrilateral ABCD is:

Ans

☒ 1. 982 cm²

☒ 2. 900 cm²

☒ 3. 902 cm²

☒ 4. 992 cm²

Question Type : MCQ

Question ID : 630680526615

Option 1 ID : 6306802058528

Option 2 ID : 6306802058527

Option 3 ID : 6306802058526

Option 4 ID : 6306802058529

Status : Answered

Chosen Option : 3

Q.8 Monthly incentives (in ₹) of three employees Rohit, Juli and Ankit of a company during three months are given in the following table. Study the table carefully and answer the question that follows.

Employee/Month	May	June	July
Rohit	25,500	20,000	22,250
Juli	15,000	12,000	18,000
Ankit	10,000	11,500	9,600

What is the ratio of incentives received by Juli and Rohit in May?

- Ans
- ☐ 1. 60 : 89
 - ☐ 2. 17 : 10
 - ☒ 3. 10 : 17
 - ☐ 4. 89 : 60

Question Type : MCQ
Question ID : 630680523762
Option 1 ID : 6306802047201
Option 2 ID : 6306802047200
Option 3 ID : 6306802047199
Option 4 ID : 6306802047202
Status : Answered
Chosen Option : 2

Q.9 A bicycle goes 11 metres in 9 seconds. Find its speed in km/h.

- Ans
- ☒ 1. $4\frac{2}{5}$
 - ☐ 2. $4\frac{1}{5}$
 - ☐ 3. $3\frac{2}{5}$
 - ☐ 4. $3\frac{3}{5}$

Question Type : MCQ
Question ID : 63068085732
Option 1 ID : 630680332388
Option 2 ID : 630680332390
Option 3 ID : 630680332389
Option 4 ID : 630680332391
Status : Answered
Chosen Option : 1

Q.10 Ravish had ₹1,500 with him. Sunaina had 24% more money than what Ravish had, while Sanatan had 10% less money than what Sunaina had. How much money did Sanatan have?

Ans ☒ 1. ₹1,674

☐ 2. ₹1,764

☐ 3. ₹1,664

☐ 4. ₹1,774

Question Type : MCQ

Question ID : 630680524014

Option 1 ID : 6306802048210

Option 2 ID : 6306802048207

Option 3 ID : 6306802048208

Option 4 ID : 6306802048209

Status : Answered

Chosen Option : 1

Q.11 A park has an average number of 420 visitors on Sunday and 120 on other days. The average number of visitors per day in a month of 30 days beginning with Sunday, is:

Ans ☐ 1. 270

☒ 2. 170

☐ 3. 150

☐ 4. 160

Question Type : MCQ

Question ID : 630680484320

Option 1 ID : 6306801891628

Option 2 ID : 6306801891627

Option 3 ID : 6306801891629

Option 4 ID : 6306801891626

Status : Answered

Chosen Option : 3

Q.12 When x is added to each of 2, 3, 30 and 35, then the numbers obtained in this order are in proportion. What is the second largest part in the proportion?

Ans ☒ 1. 35

☐ 2. 45

☐ 3. 30

☐ 4. 40

Question Type : MCQ

Question ID : 630680454432

Option 1 ID : 6306801774644

Option 2 ID : 6306801774643

Option 3 ID : 6306801774641

Option 4 ID : 6306801774642

Status : Answered

Chosen Option : 2

Q.13 The average of 20 results is 15 and the average of other 25 results is 24. What is the average of all the results?

- Ans ☒ 1. 40
☒ 2. 22
☒ 3. 39
☒ 4. 20

Question Type : MCQ

Question ID : 630680447475

Option 1 ID : 6306801747154

Option 2 ID : 6306801747156

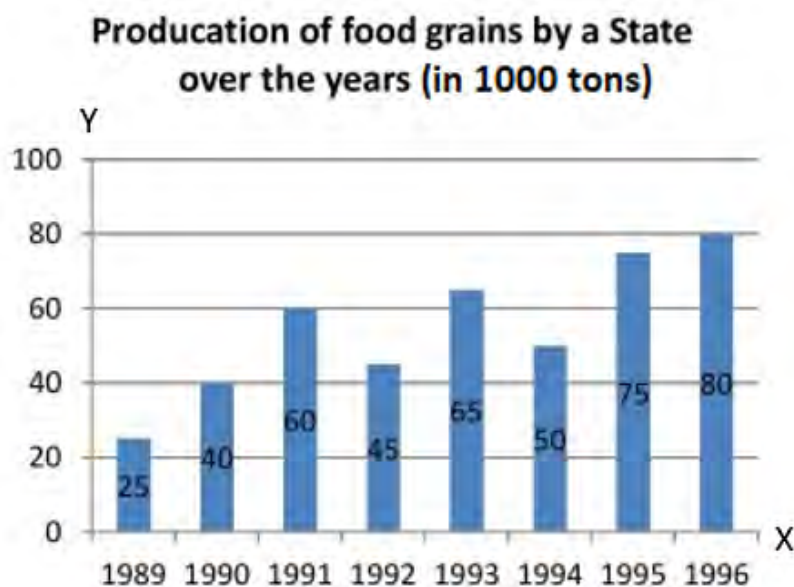
Option 3 ID : 6306801747155

Option 4 ID : 6306801747153

Status : Answered

Chosen Option : 2

Q.14 The given graph shows the production of food grains by a state (in 1000 tons) over the years from 1989 to 1996. Study the graph carefully and answer the question that follows.



In how many of the given years was the production of food grains more than the average production of the given years?

- Ans ☒ 1. 2
☒ 2. 4
☒ 3. 3
☒ 4. 1

Question Type : MCQ

Question ID : 630680404767

Option 1 ID : 6306801578575

Option 2 ID : 6306801578577

Option 3 ID : 6306801578576

Option 4 ID : 6306801578578

Status : Answered

Chosen Option : 2

Q.15 How long (in months) will it take a sum of money invested at 5% per annum on simple interest to increase its value by 22.5%?

- Ans ☒ 1. 48
☒ 2. 44
☒ 3. 50
☒ 4. 54

Question Type : MCQ

Question ID : 630680422110

Option 1 ID : 6306801646876

Option 2 ID : 6306801646878

Option 3 ID : 6306801646877

Option 4 ID : 6306801646875

Status : Answered

Chosen Option : 4

Q.16 A right circular conical vessel has a capacity of 9240 m³. The radius of the cone is 21 m. What will be the total cost (in ₹) of painting the outer curved surface area of cone at the rate of ₹10/m²?

Take $\pi = \frac{22}{7}$

- Ans ☒ 1. 18140
☒ 2. 92400
☒ 3. 19140
☒ 4. 33000

Question Type : MCQ

Question ID : 630680526562

Option 1 ID : 6306802058314

Option 2 ID : 6306802058316

Option 3 ID : 6306802058315

Option 4 ID : 6306802058317

Status : Answered

Chosen Option : 3

Q.17 A dealer mixes 26 kg of a variety of tea at ₹200 per kg with 30 kg of another variety of tea at ₹360 per kg, and sells the mixture at ₹300 per kg. His profit percentage is:

- Ans ☒ 1. 5%
☒ 2. 8%
☒ 3. 14%
☒ 4. 12%

Question Type : MCQ

Question ID : 630680120023

Option 1 ID : 630680465126

Option 2 ID : 630680465127

Option 3 ID : 630680465129

Option 4 ID : 630680465128

Status : Answered

Chosen Option : 2

Q.18

What is the LCM of $\frac{2}{3}$, $\frac{4}{9}$ and $\frac{5}{6}$?

Ans

✓ 1. $\frac{20}{3}$

✗ 2. $\frac{10}{3}$

✗ 3. 10

✗ 4. $\frac{40}{3}$

Question Type : MCQ

Question ID : 630680103082

Option 1 ID : 630680400588

Option 2 ID : 630680400587

Option 3 ID : 630680400589

Option 4 ID : 630680400590

Status : Answered

Chosen Option : 1

Q.19 Find the simple interest (in ₹) on ₹2500 as a sum borrowed at 7% per year rate of interest for 6 years.

Ans

✗ 1. 990

✗ 2. 1010

✓ 3. 1050

✗ 4. 1090

Question Type : MCQ

Question ID : 630680591912

Option 1 ID : 6306802316117

Option 2 ID : 6306802316118

Option 3 ID : 6306802316115

Option 4 ID : 6306802316116

Status : Answered

Chosen Option : 3

Q.20 If the radii of two right circular cylinders are in the ratio of 2:3 and their heights are in the ratio of 5:4, then find the ratio of their curved surface areas?

- Ans ☒ 1. 5 : 6
- ☐ 2. 6 : 5
- ☐ 3. 6 : 10
- ☐ 4. 10 : 6

Question Type : MCQ
Question ID : 630680103121
Option 1 ID : 630680400744
Option 2 ID : 630680400745
Option 3 ID : 630680400743
Option 4 ID : 630680400746
Status : Answered
Chosen Option : 3

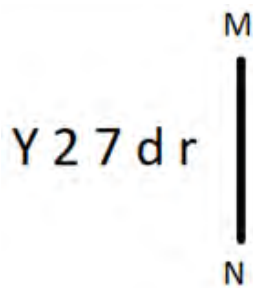
Section : Reasoning Ability and Problem Solving

Q.1 In a code language, 'PARENT' is written as 'PWRANT' and 'SING' is written as 'SENG'.
How will 'TERMINATE' be written in the same language?

- Ans ☐ 1. SARMENWTA
- ☒ 2. TARMENWTA
- ☐ 3. TERMANWTA
- ☐ 4. SERMANWTA

Question Type : MCQ
Question ID : 630680465222
Option 1 ID : 6306801816926
Option 2 ID : 6306801816924
Option 3 ID : 6306801816923
Option 4 ID : 6306801816925
Status : Answered
Chosen Option : 2

Q.2 Select the correct mirror image of the given figure when the mirror is placed at MN as shown below.



- Ans
- ☒ 1. ɹ b 2 7 Y
 - ☒ 2. ɹ b ʌ ʌ ʌ
 - ☒ 3. ɹ b ʌ ʌ Y
 - ☒ 4. ɹ p ʌ ʌ Y

Question Type : MCQ
Question ID : 630680525244
Option 1 ID : 6306802053061
Option 2 ID : 6306802053063
Option 3 ID : 6306802053060
Option 4 ID : 6306802053062
Status : Answered
Chosen Option : 3

Q.3 EJDI is related to CHBG in a certain way based on the English alphabetical order. In the same way, JOIN is related to HMGL. To which of the following is NSMR related, following the same logic?

- Ans
- ☒ 1. PQKL
 - ☒ 2. LQPK
 - ☒ 3. LQKP
 - ☒ 4. PQLK

Question Type : MCQ
Question ID : 630680387785
Option 1 ID : 6306801511773
Option 2 ID : 6306801511775
Option 3 ID : 6306801511774
Option 4 ID : 6306801511772
Status : Answered
Chosen Option : 3

Q.4 Read the given statements and conclusions carefully. Assuming that the information given in the statements is true, even if it appears to be at variance with commonly known facts, decide which of the given conclusions logically follow(s) from the statements.

Statements:

All juices are burgers.

Some burgers are chocolates.

Conclusions:

(I) Some burgers are juices.

(II) Some juices are chocolates.

- Ans**
- ☒ 1. Both conclusions I and II follow
 - ☒ 2. Neither conclusion I nor II follows
 - ☒ 3. Only conclusion I follows
 - ☒ 4. Only conclusion II follows

Question Type : **MCQ**

Question ID : **630680379576**

Option 1 ID : **6306801479349**

Option 2 ID : **6306801479350**

Option 3 ID : **6306801479347**

Option 4 ID : **6306801479348**

Status : **Answered**

Chosen Option : **3**

Q.5 In a certain code language, 'MUST' is coded as '7913' and 'TALE' is coded as '8672'. What is the code for 'T' in the given code language?

- Ans**
- ☒ 1. 7
 - ☒ 2. 3
 - ☒ 3. 6
 - ☒ 4. 8

Question Type : **MCQ**

Question ID : **630680387982**

Option 1 ID : **6306801512542**

Option 2 ID : **6306801512543**

Option 3 ID : **6306801512545**

Option 4 ID : **6306801512544**

Status : **Answered**


Chosen Option : **1**

Q.6 A square sheet of paper is folded along the dotted line successively along the directions shown and is then punched in the last. How would the paper look when unfolded?




Ans


☐ 1.




☐ 2.



☐ 3.



☒ 4.



Question Type : **MCQ**
Question ID : **630680524419**
Option 1 ID : **6306802049778**
Option 2 ID : **6306802049776**
Option 3 ID : **6306802049775**
Option 4 ID : **6306802049777**
Status : **Answered**
Chosen Option : **4**

Q.7 A, B, C, D, E, F and G are sitting around a circular table facing the centre (but not necessarily in the same order). Only 2 people sit between A and C when counted from the right of C. B sits 2nd to the left of C. F sits immediate on the right of D. E is not an immediate neighbour of C. Who sits immediate to the right of A?

- Ans ☒ 1. G
☒ 2. E
☒ 3. D
☒ 4. F

Question Type : MCQ
Question ID : 630680379476
Option 1 ID : 6306801478949
Option 2 ID : 6306801478947
Option 3 ID : 6306801478950
Option 4 ID : 6306801478948
Status : Answered
Chosen Option : 2

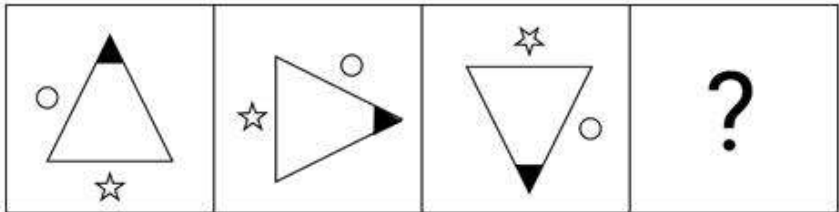
Q.8 What should come in place of the question mark (?) in the given series?

216 219 224 227 232 ?

- Ans ☒ 1. 233
☒ 2. 235
☒ 3. 234
☒ 4. 236

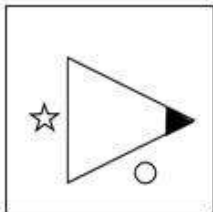
Question Type : MCQ
Question ID : 630680816736
Option 1 ID : 6306803209256
Option 2 ID : 6306803209258
Option 3 ID : 6306803209257
Option 4 ID : 6306803209259
Status : Answered
Chosen Option : 2

Q.9 Identify the figure given in the options which when put in place of (?) will logically complete the series.

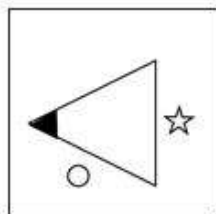


Ans

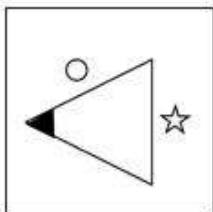
✗ 1.



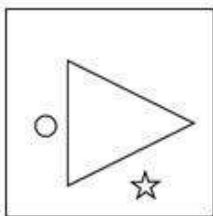
✓ 2.



✗ 3.



✗ 4.



Question Type : MCQ

Question ID : 630680273994

Option 1 ID : 6306801064497

Option 2 ID : 6306801064495

Option 3 ID : 6306801064496

Option 4 ID : 6306801064498

Status : Answered

Chosen Option : 2

Q.10 What will come in place of the question mark (?) of the following equation, if '+' and '-' are interchanged and 'x' and '÷' are interchanged?

$15 + 9 \div 2 - 63 \times 3 = ?$

- Ans ☐ 1. 25
- ☐ 2. 33
- ☐ 3. 12
- ☒ 4. 18

Question Type : MCQ
Question ID : 630680194968
Option 1 ID : 630680756362
Option 2 ID : 630680756363
Option 3 ID : 630680756361
Option 4 ID : 630680756364
Status : Answered
Chosen Option : 4

Q.11 In a certain code language, 'rep sho pel' means 'goats are bleating'; 'sho jin ken' means 'goats and cows' and 'met rep pi' means 'dogs are mad'. What is the code for 'are' in that code language?

- Ans ☐ 1. sho
- ☐ 2. pi
- ☒ 3. rep
- ☐ 4. met

Question Type : MCQ
Question ID : 630680381552
Option 1 ID : 6306801487142
Option 2 ID : 6306801487141
Option 3 ID : 6306801487139
Option 4 ID : 6306801487140
Status : Answered
Chosen Option : 3

Q.12 Which two numbers should be interchanged to make the given equation correct?
 $6 \times 4 - (60 \div 5) + 15 + (33 \div 3) \times 2 = 59$
(Note: Interchange should be done of entire number and not individual digits of a given number)

- Ans ☐ 1. 2 and 5
- ☒ 2. 2 and 4
- ☐ 3. 6 and 5
- ☐ 4. 5 and 15

Question Type : MCQ
Question ID : 630680413404
Option 1 ID : 6306801612442
Option 2 ID : 6306801612440
Option 3 ID : 6306801612441
Option 4 ID : 6306801612443
Status : Answered
Chosen Option : 2

Q.13 8 is related to 33 following a certain logic. Following the same logic, 11 is related to 45.
To which of the following is 24 related, following the same logic?

(NOTE : Operations should be performed on the whole numbers, without breaking down the numbers into its constituent digits. E.g. 13 – Operations on 13 such as adding / subtracting / multiplying, etc., to 13 can be performed. Breaking down 13 into 1 and 3 and then performing mathematical operations on 1 and 3 is not allowed.)

Ans ☒ 1. 97

☐ 2. 98

☐ 3. 95

☐ 4. 99

Question Type : MCQ

Question ID : 630680441681

Option 1 ID : 6306801724339

Option 2 ID : 6306801724340

Option 3 ID : 6306801724338

Option 4 ID : 6306801724341

Status : Answered

Chosen Option : 1

Q.14 EJ68 is related to OT55 in a certain way. In the same way, KP47 is related to UZ34. To which of the following is QV29 related, following the same logic?

Ans ☐ 1. FA16

☐ 2. AF20

☒ 3. AF16

☐ 4. FA20

Question Type : MCQ

Question ID : 6306801108765

Option 1 ID : 6306804355608

Option 2 ID : 6306804355607

Option 3 ID : 6306804355606

Option 4 ID : 6306804355609

Status : Answered

Chosen Option : 3

Q.15 A, B, C, D, E, F and G are sitting around a circular table facing the centre (but not necessarily in the same order).
G sits to the immediate left of B. A sits to the immediate left of D. D sits second to the left of E. C sits third to the left of B.
How many people sit between B and D when counted from the left of D?

Ans ☒ 1. 2

☐ 2. 3

☐ 3. 1

☐ 4. 4

Question Type : MCQ

Question ID : 630680815679

Option 1 ID : 6306803196018

Option 2 ID : 6306803196019

Option 3 ID : 6306803196017

Option 4 ID : 6306803196020

Status : Answered

Chosen Option : 1

Q.16 Read the given statement(s) and conclusions carefully. Assuming that the information given in the statements is true, even if it appears to be at variance with commonly known facts, decide which of the given conclusions logically follow(s) from the statement(s).

Statements: All the pianos are instruments. All the instruments are flutes.

Conclusions:

(I) All the flutes are instruments.

(II) All the pianos are flutes.

Ans  1. Neither conclusion (I) nor (II) follows.

 2. Only Conclusion (II) follows.

 3. Only Conclusion (I) follows.

 4. Both conclusion (I) and (II) follow.

Question Type : **MCQ**

Question ID : **630680439096**

Option 1 ID : **6306801714198**

Option 2 ID : **6306801714197**

Option 3 ID : **6306801714196**

Option 4 ID : **6306801714199**

Status : **Answered**

Chosen Option : **2**

Q.17 In the following number-pairs, the second number is obtained by applying certain mathematical operations to the first number. Select the set in which the numbers are related in the same way as are the numbers of the following sets.

(NOTE: Operations should be performed on the whole numbers, without breaking down the numbers into their constituent digits. E.g. 13 – Operations on 13 such as adding/subtracting/multiplying to 13 can be performed. Breaking down 13 into 1 and 3 and then performing mathematical operations on 1 and 3 is not allowed.)

9, 43
13, 63

Ans  1. 18, 82

 2. 18, 83

 3. 17, 83

 4. 17, 82

Question Type : **MCQ**

Question ID : **6306801027617**

Option 1 ID : **6306804033156**

Option 2 ID : **6306804033155**

Option 3 ID : **6306804033153**

Option 4 ID : **6306804033154**

Status : **Answered**

Chosen Option : **3**

Q.18 What should come in place of the question mark (?) in the given series based on the English alphabetical order?

HKR, DGN, ZCJ ,VYF, ?

Ans  1. RBK

 2. RUB

 3. RBY

 4. RFG

Question Type : MCQ

Question ID : 630680459409

Option 1 ID : 6306801794496

Option 2 ID : 6306801794493

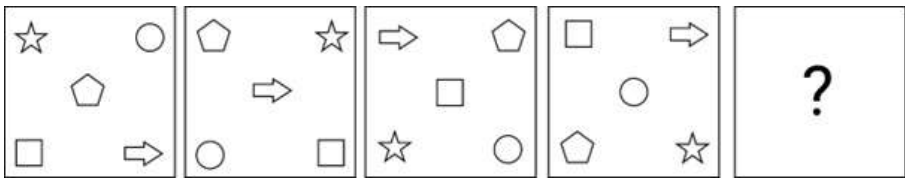
Option 3 ID : 6306801794495

Option 4 ID : 6306801794494

Status : Answered

Chosen Option : 2

Q.19 Identify the figure given in the options which when put in place of '?' will logically complete the series.



Ans

- ✖ 1.

✖ 2.

✖ 3.

✔ 4.

Question Type : MCQ
Question ID : 630680277140
Option 1 ID : 6306801077054
Option 2 ID : 6306801077056
Option 3 ID : 6306801077053
Option 4 ID : 6306801077055
Status : Answered
Chosen Option : 4

Download SSC CGL, CHSL E-BOOKS [CLICK HERE](#)

Q.20 In a certain code language, 'ZERO' is coded as '2468' and 'OILY' is coded as '5679'.
What is the code for 'O' in that language?

- Ans** ☒ 1. 9
☒ 2. 6
☒ 3. 8
☒ 4. 5

Question Type : **MCQ**
Question ID : **630680449947**
Option 1 ID : **6306801756961**
Option 2 ID : **6306801756958**
Option 3 ID : **6306801756960**
Option 4 ID : **6306801756959**
Status : **Answered**
Chosen Option : **2**

Section : **General Awareness**

Q.1 Which of the following is the legislative organ of the Union Government?

- Ans** ☒ 1. State Executive
☒ 2. Executive
☒ 3. Judiciary
☒ 4. Parliament

Question Type : **MCQ**
Question ID : **630680511448**
Option 1 ID : **6306801998925**
Option 2 ID : **6306801998923**
Option 3 ID : **6306801998924**
Option 4 ID : **6306801998922**
Status : **Answered**
Chosen Option : **4**

Q.2 Which type of coal is found in Damodar valley?

- Ans** ☒ 1. Anthracite
☒ 2. Peat
☒ 3. Bituminous
☒ 4. Lignite

Question Type : **MCQ**
Question ID : **630680456069**
Option 1 ID : **6306801781216**
Option 2 ID : **6306801781218**
Option 3 ID : **6306801781215**
Option 4 ID : **6306801781217**
Status : **Answered**
Chosen Option : **3**

Q.3 Which of the following are building blocks of proteins?

- Ans ☒ 1. Acids
☒ 2. Bases
☒ 3. Cells
☒ 4. Amino acids

Question Type : MCQ
Question ID : 630680214103
Option 1 ID : 630680830460
Option 2 ID : 630680830459
Option 3 ID : 630680830461
Option 4 ID : 630680830462
Status : Answered
Chosen Option : 4

Q.4 In which the following sports do caddies play the role of helper for the player?

- Ans ☒ 1. Cycling
☒ 2. Golf
☒ 3. Shooting
☒ 4. Boxing

Question Type : MCQ
Question ID : 630680459724
Option 1 ID : 6306801795744
Option 2 ID : 6306801795741
Option 3 ID : 6306801795743
Option 4 ID : 6306801795742
Status : Answered
Chosen Option : 2

Q.5 Under which category did Ricky Kej secure his third Grammy award?

- Ans ☒ 1. Best Immersive Audio Album
☒ 2. Best Contemporary Instrumental Album
☒ 3. Song of the year
☒ 4. Best Audio Album of the year

Question Type : MCQ
Question ID : 630680555195
Option 1 ID : 6306802170236
Option 2 ID : 6306802170237
Option 3 ID : 6306802170238
Option 4 ID : 6306802170239
Status : Answered
Chosen Option : 4

Q.6 What is the total length of 'Atal Tunnel', which is located in Himachal Pradesh state?

- Ans ☐ 1. 9.5 kilometres
☐ 2. 9.8 kilometres
☒ 3. 9.02 kilometres
☐ 4. 9 kilometres

Question Type : MCQ

Question ID : 630680482211

Option 1 ID : 6306801883358

Option 2 ID : 6306801883359

Option 3 ID : 6306801883361

Option 4 ID : 6306801883360

Status : Answered

Chosen Option : 3

Q.7 Who among the following is the author of the famous novel, 'One Amazing Thing'?

- Ans ☐ 1. Sonali Dev
☐ 2. Khushwant Singh
☒ 3. Chitra Banerjee Divakurni
☐ 4. Amitav Ghosh

Question Type : MCQ

Question ID : 63068084271

Option 1 ID : 630680326636

Option 2 ID : 630680326639

Option 3 ID : 630680326638

Option 4 ID : 630680326637

Status : Answered

Chosen Option : 3

Q.8 The 'Servants of India Society' was founded by which of the following freedom fighters?

- Ans ☐ 1. Chittaranjan Das
☐ 2. Motilal Nehru
☐ 3. Mahatma Gandhi
☒ 4. Gopal Krishna Gokhale

Question Type : MCQ

Question ID : 630680198470

Option 1 ID : 630680769840

Option 2 ID : 630680769841

Option 3 ID : 630680769839

Option 4 ID : 630680769842

Status : Answered

Chosen Option : 4

Q.9 _____, which translates to 'dance of the enchantress,' stands out as one of the most captivating expressions in the Indian classical dance repertoire.

- Ans ☒ 1. Manipuri
☒ 2. Kuchipudi
☒ 3. Mohiniyattam
☒ 4. Kuttiyatam

Question Type : MCQ
Question ID : 630680554374
Option 1 ID : 6306802167353
Option 2 ID : 6306802167352
Option 3 ID : 6306802167351
Option 4 ID : 6306802167350
Status : Answered
Chosen Option : 3

Q.10 Who among the following Mughal emperors had a great interest in paintings?

- Ans ☒ 1. Humayun
☒ 2. Babur
☒ 3. Shahjahan
☒ 4. Jahangir

Question Type : MCQ
Question ID : 630680146010
Option 1 ID : 630680564941
Option 2 ID : 630680564940
Option 3 ID : 630680564939
Option 4 ID : 630680564938
Status : Answered
Chosen Option : 4

Q.11 Which of the following states in India had the LOWEST poverty ratio in 2011-2012 as per the Economic Survey 2013-14, released by the Ministry of Finance, Government of India?

- Ans ☒ 1. Kerala
☒ 2. Haryana
☒ 3. Gujarat
☒ 4. Karnataka

Question Type : MCQ
Question ID : 630680511217
Option 1 ID : 6306801997998
Option 2 ID : 6306801997999
Option 3 ID : 6306801998000
Option 4 ID : 6306801998001
Status : Answered
Chosen Option : 1

Q.12 According to the Indian calendar, the March and April months are known as

- Ans ☒ 1. Asvina-Kartika
☒ 2. Jyaistha-Asadha
☒ 3. Chaitra-Vaisakha
☒ 4. Magha-Phalgun

Question Type : MCQ
Question ID : 630680321589
Option 1 ID : 6306801251054
Option 2 ID : 6306801251055
Option 3 ID : 6306801251053
Option 4 ID : 6306801251056
Status : Answered
Chosen Option : 3

Q.13 Name the Sri Lankan Buddhist text that provides details of the Mauryan empire.

- Ans ☒ 1. Dipavamsa
☒ 2. Divyavadana
☒ 3. Ashokavadana
☒ 4. Parishishtaparvan

Question Type : MCQ
Question ID : 63068084291
Option 1 ID : 630680326718
Option 2 ID : 630680326716
Option 3 ID : 630680326717
Option 4 ID : 630680326719
Status : Answered
Chosen Option : 1

Q.14 Which of the following statements about the Sangeet Natak Akademi is/are true?

1. The Sangeet Natak Akademi has been functioning as the apex body of the performing arts in the country.
2. The main objective of the Akademi is to coordinate and collaborate with the government and performing artists.
3. The Sangeet Natak Akademi comes under the Ministry of Culture of the government of India.

- Ans ☒ 1. 1, 2, and 3
☒ 2. Only 2 and 3
☒ 3. Only 1 and 2
☒ 4. Only 1 and 3

Question Type : MCQ
Question ID : 630680512002
Option 1 ID : 6306802000981
Option 2 ID : 6306802000980
Option 3 ID : 6306802000978
Option 4 ID : 6306802000979
Status : Answered
Chosen Option : 3

Q.15 How much amount is provided per month as assistance to the female head of the family under the Gruha Lakshmi Scheme launched by the Karnataka Government in July 2023?

- Ans ☐ 1. ₹3,500
☒ 2. ₹2,000
☐ 3. ₹1,500
☐ 4. ₹5,000

Question Type : MCQ
Question ID : 630680465522
Option 1 ID : 6306801818125
Option 2 ID : 6306801818124
Option 3 ID : 6306801818123
Option 4 ID : 6306801818126
Status : Answered
Chosen Option : 3

Q.16 What is the salt measurement in hypersaline lagoons?

- Ans ☐ 1. 30 to 35
☐ 2. Less than 5
☐ 3. Less than 100
☒ 4. More than 100

Question Type : MCQ
Question ID : 63068078577
Option 1 ID : 630680304358
Option 2 ID : 630680304360
Option 3 ID : 630680304359
Option 4 ID : 630680304357
Status : Answered
Chosen Option : 1

Q.17 Who among the following became the Chairperson of the Parliamentary Committee on Science and Technology, Environment, Forests and Climate Change as on 30th September 2023?

- Ans ☒ 1. Jairam Ramesh
☐ 2. Neeraj Shekhar
☐ 3. Surendra Singh Nagar
☐ 4. Satish Chandra Dubey

Question Type : MCQ
Question ID : 630680468936
Option 1 ID : 6306801831511
Option 2 ID : 6306801831512
Option 3 ID : 6306801831513
Option 4 ID : 6306801831514
Status : Answered
Chosen Option : 1

Q.18 Chhath Puja falls in which month of the Hindu calendar?

- Ans ☒ 1. Jyeshtha
☒ 2. Kartika
☒ 3. Ashadha
☒ 4. Phalguna

Question Type : MCQ

Question ID : 630680368829

Option 1 ID : 6306801436736

Option 2 ID : 6306801436733

Option 3 ID : 6306801436734

Option 4 ID : 6306801436735

Status : Answered

Chosen Option : 2

Q.19 Which of the following is a NOT a feature of the Indian Parliamentary form of Government?

- Ans ☒ 1. Dissolution of the Lower House
☒ 2. Leadership of the Prime Minister
☒ 3. Majority party rule
☒ 4. Non membership of the ministers in Legislature

Question Type : MCQ

Question ID : 630680587088

Option 1 ID : 6306802296894

Option 2 ID : 6306802296893

Option 3 ID : 6306802296896

Option 4 ID : 6306802296895

Status : Answered

Chosen Option : 4

Q.20 The Bara Imambara in Lucknow was built in the year 1784 by _____.

- Ans ☒ 1. Jahangir
☒ 2. Nawab Asaf-ud-Daula
☒ 3. Nawab Siraj-ud-Daula
☒ 4. Akbar

Question Type : MCQ

Question ID : 630680158687

Option 1 ID : 630680614243

Option 2 ID : 630680614240

Option 3 ID : 630680614241

Option 4 ID : 630680614242

Status : Answered

Chosen Option : 2

Q.21 What is the process of a substance changing directly from a solid to a gas without passing through the liquid state called?

- Ans ☒ 1. Evaporation
☒ 2. Fusion
☒ 3. Condensation
☒ 4. Sublimation

Question Type : MCQ
Question ID : 630680411209
Option 1 ID : 6306801603593
Option 2 ID : 6306801603595
Option 3 ID : 6306801603592
Option 4 ID : 6306801603594
Status : Answered
Chosen Option : 4

Q.22 Which of the following is the quality of the public goods?

- Ans ☒ 1. Non-rivalrous
☒ 2. Rivalrous
☒ 3. Excludable
☒ 4. Non-divisible

Question Type : MCQ
Question ID : 63068082805
Option 1 ID : 630680321084
Option 2 ID : 630680321085
Option 3 ID : 630680321086
Option 4 ID : 630680321087
Status : Answered
Chosen Option : 2

Q.23 What is the player who sits at the centre of the rectangular field in Kho Kho called?

- Ans ☒ 1. Chaser
☒ 2. Captain
☒ 3. Master
☒ 4. Defender

Question Type : MCQ
Question ID : 630680466243
Option 1 ID : 6306801820992
Option 2 ID : 6306801820990
Option 3 ID : 6306801820991
Option 4 ID : 6306801820993
Status : Answered
Chosen Option : 1

Q.24 Which of the following is the national fruit of Sri Lanka?

- Ans ☐ 1. Orange
☐ 2. Strawberry
☐ 3. Mango
☒ 4. Jackfruit

Question Type : MCQ
Question ID : 63068080433
Option 1 ID : 630680311759
Option 2 ID : 630680311760
Option 3 ID : 630680311758
Option 4 ID : 630680311757
Status : Answered
Chosen Option : 4

Q.25 Shree Narayana Dharma Paripalana Yogam (SNDP), founded in 1903, to carry on the work of social reform was active in which of the following states?

- Ans ☐ 1. Assam
☒ 2. Kerala
☐ 3. Punjab
☐ 4. Bihar

Question Type : MCQ
Question ID : 630680198482
Option 1 ID : 630680769888
Option 2 ID : 630680769887
Option 3 ID : 630680769889
Option 4 ID : 630680769890
Status : Answered
Chosen Option : 2

Section : English Language and Comprehension

Q.1 Select the most appropriate meaning of the given phrase.
Jump on the bandwagon

- Ans ☐ 1. To oppose the idea of a group gaining popularity
☐ 2. To support ideas that are less popular
☒ 3. To join or support something which is gaining popularity
☐ 4. To jump to a conclusion

Question Type : MCQ
Question ID : 630680502961
Option 1 ID : 6306801965427
Option 2 ID : 6306801965428
Option 3 ID : 6306801965425
Option 4 ID : 6306801965426
Status : Answered
Chosen Option : 1

Q.2 Select the option that rectifies the underlined spelling error.

Participating in the marthon was a challenging experience.

- Ans ☒ 1. mereton
☒ 2. marathon
☒ 3. marethon
☒ 4. merethon

Question Type : MCQ
Question ID : 630680620438
Option 1 ID : 6306802427828
Option 2 ID : 6306802427827
Option 3 ID : 6306802427825
Option 4 ID : 6306802427826
Status : Answered
Chosen Option : 2

Q.3 Select the option that can be used as a one-word substitute for the given group of words.

A person who loves music

- Ans ☒ 1. Astrophile
☒ 2. Chromatophilic
☒ 3. Melophile
☒ 4. Discophile

Question Type : MCQ
Question ID : 630680597020
Option 1 ID : 6306802336123
Option 2 ID : 6306802336122
Option 3 ID : 6306802336121
Option 4 ID : 6306802336124
Status : Answered
Chosen Option : 3

Q.4 Select the most appropriate option that can substitute the underlined segment in the given sentence.

The Rungrado is the large football stadium in the world.

- Ans ☒ 1. most largest
☒ 2. largest
☒ 3. larger
☒ 4. more larger

Question Type : MCQ
Question ID : 630680514600
Option 1 ID : 6306802011028
Option 2 ID : 6306802011025
Option 3 ID : 6306802011026
Option 4 ID : 6306802011027
Status : Answered
Chosen Option : 2

Q.5 Select the most appropriate option that can substitute the underlined segment in the given sentence.
If we want to promote national integrity in our country, then we must desist our tendency of taking up with others.

- Ans** ☒ 1. coming round
☒ 2. setting out
☒ 3. looking down upon
☒ 4. bringing forward

Question Type : **MCQ**
Question ID : **63068054475**
Option 1 ID : **630680209944**
Option 2 ID : **630680209943**
Option 3 ID : **630680209945**
Option 4 ID : **630680209942**
Status : **Answered**
Chosen Option : **3**

Q.6 Select the **INCORRECTLY** spelt word.

- Ans** ☒ 1.
Chauvinism
☒ 2.
Noctummbulism
☒ 3.
Alcoholism
☒ 4.
Somnambulism

Question Type : **MCQ**
Question ID : **630680477170**
Option 1 ID : **6306801863852**
Option 2 ID : **6306801863850**
Option 3 ID : **6306801863851**
Option 4 ID : **6306801863849**
Status : **Answered**
Chosen Option : **2**

Q.7 Select the most appropriate **ANTONYM** of the given word.

Whimsical

- Ans** ☒ 1. Confident
☒ 2. Practical
☒ 3. Illogical
☒ 4. Fickle

Question Type : **MCQ**
Question ID : **630680444379**
Option 1 ID : **6306801734795**
Option 2 ID : **6306801734793**
Option 3 ID : **6306801734792**
Option 4 ID : **6306801734794**
Status : **Answered**
Chosen Option : **2**

Q.8 Select the most appropriate option that can substitute the underlined segment in the given sentence. If there is no need to substitute it, select 'No substitution required'.

Mahira is an more efficient and hardworking employee of her company.

- Ans ☒ 1. No substitution required
- ☒ 2. Mahira is an efficient
- ☒ 3. Mahira is the efficient
- ☒ 4. Mahira is the more efficient

Question Type : MCQ
Question ID : 630680507782
Option 1 ID : 6306801984432
Option 2 ID : 6306801984429
Option 3 ID : 6306801984431
Option 4 ID : 6306801984430
Status : Answered
Chosen Option : 2

Q.9 Select the most appropriate option to fill the blank.
The strike, that the truck association called, caused a minor _____ of food in our village.

- Ans ☒ 1. less
- ☒ 2. dearth
- ☒ 3. leak
- ☒ 4. availability

Question Type : MCQ
Question ID : 630680515295
Option 1 ID : 6306802013633
Option 2 ID : 6306802013634
Option 3 ID : 6306802013635
Option 4 ID : 6306802013636
Status : Answered
Chosen Option : 2

Q.10 Select the most appropriate option to fill in the blank.
The company implemented a new _____ to improve efficiency.

- Ans ☒ 1. stratagy
- ☒ 2. strateji
- ☒ 3. strategie
- ☒ 4. strategy

Question Type : MCQ
Question ID : 630680726497
Option 1 ID : 6306802846995
Option 2 ID : 6306802846994
Option 3 ID : 6306802846996
Option 4 ID : 6306802846997
Status : Answered
Chosen Option : 1

Q.11 Select the most appropriate meaning of the given idiom.

Pay off old scores

- Ans ☒ 1. To be successful
☒ 2. To have one's revenge
☒ 3. To clear one's debt
☒ 4. To score good marks

Question Type : MCQ
Question ID : 630680751865
Option 1 ID : 6306802946871
Option 2 ID : 6306802946869
Option 3 ID : 6306802946870
Option 4 ID : 6306802946872
Status : Answered
Chosen Option : 2

Q.12 Select the most appropriate synonym of the given word to fill in the blank.

Desist

Every Indian should ____ from acts of corruption.

- Ans ☒ 1. pledge
☒ 2. show
☒ 3. insist
☒ 4. refrain

Question Type : MCQ
Question ID : 630680393350
Option 1 ID : 6306801533726
Option 2 ID : 6306801533727
Option 3 ID : 6306801533729
Option 4 ID : 6306801533728
Status : Answered
Chosen Option : 4

Q.13 Select the most appropriate option with the correct usage of the preposition to substitute the underlined segment in the given sentence.

UNESCO's mission is to contribute to the building of a culture of peace, the eradication of poverty, sustainable development and intercultural dialogue with education, the sciences, culture, communication and information.

- Ans ☒ 1. intercultural dialogue from education
☒ 2. intercultural dialogue through education
☒ 3. intercultural dialogue in education
☒ 4. intercultural dialogue by education

Question Type : MCQ
Question ID : 630680623595
Option 1 ID : 6306802440503
Option 2 ID : 6306802440505
Option 3 ID : 6306802440502
Option 4 ID : 6306802440504
Status : Answered
Chosen Option : 4

Q.14 Select the most appropriate synonym of the given word.
Avoid

- Ans ☒ 1. Evade
☐ 2. Pursue
☐ 3. Reflect
☐ 4. Accept

Question Type : MCQ
Question ID : 630680204325
Option 1 ID : 630680792383
Option 2 ID : 630680792384
Option 3 ID : 630680792386
Option 4 ID : 630680792385
Status : Answered
Chosen Option : 1

Q.15 Select the most appropriate option to fill in the blank.
Indian Meteorological Department (IMD) had _____ that the city would witness
rainfall on Thursday.

- Ans ☐ 1. contest
☐ 2. prolong
☒ 3. forecast
☐ 4. manifest

Question Type : MCQ
Question ID : 630680515223
Option 1 ID : 6306802013357
Option 2 ID : 6306802013360
Option 3 ID : 6306802013359
Option 4 ID : 6306802013358
Status : Answered
Chosen Option : 3

Q.16 Select the grammatically correct sentence.

- Ans ☒ 1. The carpenter kept furniture in the backyard of his house.
☐ 2. The carpenter kept the furniture in a backyard of his house.
☐ 3. The carpenter kept the furniture in backyard of his house.
☐ 4. The carpenter kept a furniture in the backyard of his house.

Question Type : MCQ
Question ID : 630680116047
Option 1 ID : 630680449518
Option 2 ID : 630680449520
Option 3 ID : 630680449521
Option 4 ID : 630680449519
Status : Answered
Chosen Option : 1

Q.17 Select the most appropriate option to fill in the blank.

Where have you _____ all this time?

- Ans ☒ 1. bine
☒ 2. been
☒ 3. bean
☒ 4. bin

Question Type : MCQ
Question ID : 630680517510
Option 1 ID : 6306802022439
Option 2 ID : 6306802022436
Option 3 ID : 6306802022438
Option 4 ID : 6306802022437
Status : Answered
Chosen Option : 2

Q.18 Select the most appropriate homonym to fill in the blank.

During the _____ of Queen Victoria, England made all-round progress.

- Ans ☒ 1. rain
☒ 2. rein
☒ 3. reign
☒ 4. rhine

Question Type : MCQ
Question ID : 630680446527
Option 1 ID : 6306801743411
Option 2 ID : 6306801743410
Option 3 ID : 6306801743413
Option 4 ID : 6306801743412
Status : Answered
Chosen Option : 3

Q.19 Parts of the following sentence have been given as options. Select the option that contains an error.
John searched thoroughly but could not find his coat nowhere in the house.

- Ans ☒ 1. but could not
☒ 2. John searched thoroughly
☒ 3. nowhere in the house.
☒ 4. find his coat

Question Type : MCQ
Question ID : 630680192275
Option 1 ID : 630680745702
Option 2 ID : 630680745701
Option 3 ID : 630680745704
Option 4 ID : 630680745703
Status : Answered
Chosen Option : 2

Q.20 Select the most appropriate option to fill in the blank.

We should always _____ our best to help others.

- Ans ☒ 1. done
☒ 2. do
☒ 3. did
☒ 4. does

Question Type : MCQ
Question ID : 630680490356
Option 1 ID : 6306801915342
Option 2 ID : 6306801915340
Option 3 ID : 6306801915341
Option 4 ID : 6306801915339
Status : Answered
Chosen Option : 2

Comprehension:

In the following passage, some words have been deleted. Read the passage carefully and select the most appropriate option to fill in each blank.

Our (1)_____ revolve around our work. For the most part, males have to labour with their hands in order to (2)_____ themselves. But everyone needs to work in some (3)_____. It provides honour and credit to us. Nothing in life can be accomplished without it. Man is great only because of his labours. (4)_____ comes from work. The secret to success is this. Nobody can advance without labour. It truly is the (5)_____ idea of existence. Without it, life is even less meaningful.

SubQuestion No : 21

Q.21 Select the most appropriate option to fill in blank number 1.

- Ans ☒ 1. creatures
☒ 2. mortals
☒ 3. lives
☒ 4. histories

Question Type : MCQ
Question ID : 630680538093
Option 1 ID : 6306802103577
Option 2 ID : 6306802103578
Option 3 ID : 6306802103576
Option 4 ID : 6306802103579
Status : Answered
Chosen Option : 3

Comprehension:

In the following passage, some words have been deleted. Read the passage carefully and select the most appropriate option to fill in each blank.

Our (1)_____ revolve around our work. For the most part, males have to labour with their hands in order to (2)_____ themselves. But everyone needs to work in some (3)_____. It provides honour and credit to us. Nothing in life can be accomplished without it. Man is great only because of his labours. (4)_____ comes from work. The secret to success is this. Nobody can advance without labour. It truly is the (5)_____ idea of existence. Without it, life is even less meaningful.

SubQuestion No : 22

Q.22 Select the most appropriate option to fill in blank number 2.

- Ans ☒ 1. support
☐ 2. bear
☐ 3. promote
☐ 4. embrace

Question Type : **MCQ**
Question ID : **630680538094**
Option 1 ID : **6306802103582**
Option 2 ID : **6306802103580**
Option 3 ID : **6306802103583**
Option 4 ID : **6306802103581**
Status : **Answered**
Chosen Option : **3**

Comprehension:

In the following passage, some words have been deleted. Read the passage carefully and select the most appropriate option to fill in each blank.

Our (1)_____ revolve around our work. For the most part, males have to labour with their hands in order to (2)_____ themselves. But everyone needs to work in some (3)_____. It provides honour and credit to us. Nothing in life can be accomplished without it. Man is great only because of his labours. (4)_____ comes from work. The secret to success is this. Nobody can advance without labour. It truly is the (5)_____ idea of existence. Without it, life is even less meaningful.

SubQuestion No : 23

Q.23 Select the most appropriate option to fill in blank number 3.

- Ans ☐ 1. measurement
☐ 2. magnitude
☐ 3. volume
☒ 4. capacity

Question Type : **MCQ**
Question ID : **630680538095**
Option 1 ID : **6306802103585**
Option 2 ID : **6306802103586**
Option 3 ID : **6306802103584**
Option 4 ID : **6306802103587**
Status : **Answered**
Chosen Option : **1**

Comprehension:

In the following passage, some words have been deleted. Read the passage carefully and select the most appropriate option to fill in each blank.

Our (1)_____ revolve around our work. For the most part, males have to labour with their hands in order to (2)_____ themselves. But everyone needs to work in some (3)_____. It provides honour and credit to us. Nothing in life can be accomplished without it. Man is great only because of his labours. (4)_____ comes from work. The secret to success is this. Nobody can advance without labour. It truly is the (5)_____ idea of existence. Without it, life is even less meaningful.

SubQuestion No : 24

Q.24 Select the most appropriate option to fill in blank number 4.

- Ans ☒ 1. Boast
☒ 2. Remedy
☒ 3. Shame
☒ 4. Glory

Question Type : **MCQ**
Question ID : **630680538096**
Option 1 ID : **6306802103591**
Option 2 ID : **6306802103590**
Option 3 ID : **6306802103589**
Option 4 ID : **6306802103588**
Status : **Answered**
Chosen Option : **4**

Comprehension:

In the following passage, some words have been deleted. Read the passage carefully and select the most appropriate option to fill in each blank.

Our (1)_____ revolve around our work. For the most part, males have to labour with their hands in order to (2)_____ themselves. But everyone needs to work in some (3)_____. It provides honour and credit to us. Nothing in life can be accomplished without it. Man is great only because of his labours. (4)_____ comes from work. The secret to success is this. Nobody can advance without labour. It truly is the (5)_____ idea of existence. Without it, life is even less meaningful.

SubQuestion No : 25

Q.25 Select the most appropriate option to fill in blank number 5.

- Ans ☒ 1. uproar
☒ 2. secondary
☒ 3. fundamental
☒ 4. demean

Question Type : **MCQ**
Question ID : **630680538097**
Option 1 ID : **6306802103595**
Option 2 ID : **6306802103592**
Option 3 ID : **6306802103593**
Option 4 ID : **6306802103594**
Status : **Answered**
Chosen Option : **3**