

Multi Tasking Non Technical Staff and Havaladar CBIC and CBN Examination 2024

Roll Number	
Candidate Name	
Venue Name	TCS Gito Bitan
Exam Date	13/11/2024
Exam Time	4:00 PM - 5:30 PM
Subject	MTS Non Tech Havaladar CBIC and CBN Examination 2024

Section : Numerical and Mathematical Ability

Q.1 Study the given table and answer the question that follows.
The table shows the marks obtained by three students: A, B and C in Mathematics, Chemistry and Physics.
Maximum marks for each subject is 100.

Subject → Student ↓	Mathematics	Chemistry	Physics
A	80	74	72
B	82	79	70
C	77	71	73

What is the difference in the average marks per student in Mathematics and Physics, respectively?

- Ans ☒ 1. 8.5
☒ 2. 6.5
☒ 3. 8
☒ 4. 6

Question Type : MCQ
Question ID : 630680523801
Option 1 ID : 6306802047358
Option 2 ID : 6306802047356
Option 3 ID : 6306802047355
Option 4 ID : 6306802047357
Status : Answered
Chosen Option : 3

Q.2 Find the gain percentage, given that Komal sold her scooter for ₹1980 gaining $\frac{1}{5}$ th of the selling price.

Ans

- ☐ 1. 45%
- ☐ 2. 20%
- ☐ 3. 40%
- ☒ 4. 25%

Question Type : MCQ
Question ID : 630680931112
Option 1 ID : 6306803649257
Option 2 ID : 6306803649256
Option 3 ID : 6306803649255
Option 4 ID : 6306803649254
Status : Answered
Chosen Option : 2

Q.3 The average weight of a family of five members (in kg) whose weights are 40 kg, 49 kg, 56 kg, 69 kg and 39 kg is:

- Ans ☐ 1. 51.6
- ☐ 2. 52.6
- ☒ 3. 50.6
- ☐ 4. 49.6

Question Type : MCQ
Question ID : 630680551653
Option 1 ID : 6306802156839
Option 2 ID : 6306802156840
Option 3 ID : 6306802156837
Option 4 ID : 6306802156838
Status : Answered
Chosen Option : 3

Q.4 The average weight of a family of five members (in kg) whose weights are 40 kg, 49 kg, 56 kg, 68 kg and 37 kg is:

- Ans ☐ 1. 51
- ☐ 2. 49
- ☒ 3. 50
- ☐ 4. 52

Question Type : MCQ
Question ID : 630680551646
Option 1 ID : 6306802156810
Option 2 ID : 6306802156811
Option 3 ID : 6306802156809
Option 4 ID : 6306802156812
Status : Answered
Chosen Option : 3

Q.5 In a group of sports persons, 20 wrestlers have an average weight of 90 kg, while some athletes have an average weight of 68 kg. If the average weight of all sports persons is 78 kg, then the number of athletes is:

- Ans ☒ 1. 39
☒ 2. 24
☒ 3. 30
☒ 4. 52

Question Type : MCQ
Question ID : 630680456322
Option 1 ID : 6306801782259
Option 2 ID : 6306801782262
Option 3 ID : 6306801782260
Option 4 ID : 6306801782261
Status : Answered
Chosen Option : 1

Q.6 A man covers 30 km by car at a speed of 60 km/h and another 20 km by cycle. His whole journey is completed in 3 hours. What is the speed (in km/h) of the cycle?

- Ans ☒ 1. 6
☒ 2. 8
☒ 3. 12
☒ 4. 10

Question Type : MCQ
Question ID : 630680396872
Option 1 ID : 6306801547556
Option 2 ID : 6306801547557
Option 3 ID : 6306801547559
Option 4 ID : 6306801547558
Status : Answered
Chosen Option : 2

Q.7 What sum (in ₹) will earn a simple interest of ₹240 in 3 years at 20% per year rate of interest?

- Ans ☒ 1. 400
☒ 2. 200
☒ 3. 600
☒ 4. 800

Question Type : MCQ
Question ID : 630680612175
Option 1 ID : 6306802395432
Option 2 ID : 6306802395433
Option 3 ID : 6306802395435
Option 4 ID : 6306802395434
Status : Answered
Chosen Option : 1

Q.8 What sum (in ₹) will earn a simple interest of ₹360 in 2 years at 20% per year rate of interest?

- Ans ☐ 1. 1200
☐ 2. 1800
☐ 3. 450
☒ 4. 900

Question Type : MCQ

Question ID : 630680612185

Option 1 ID : 6306802395475

Option 2 ID : 6306802395474

Option 3 ID : 6306802395473

Option 4 ID : 6306802395472

Status : Answered

Chosen Option : 4

Q.9 If the length and breadth of a rectangle are 7cm and 5cm, respectively, the area of the rectangle is:

- Ans ☐ 1. 12 cm²
☐ 2. 30 cm²
☒ 3. 35 cm²
☐ 4. 28 cm²

Question Type : MCQ

Question ID : 63068078469

Option 1 ID : 630680303927

Option 2 ID : 630680303928

Option 3 ID : 630680303925

Option 4 ID : 630680303926

Status : Answered

Chosen Option : 3

Q.10 The average score of boys in an examination in a school is 71 and that of the girls is 73. The average score of the school is 71.8. The ratio of the number of boys to that of the girls that appeared in the examination is:

- Ans ☐ 1. 4 : 3
☐ 2. 3 : 4
☒ 3. 3 : 2
☐ 4. 2 : 3

Question Type : MCQ

Question ID : 630680404081

Option 1 ID : 6306801575811

Option 2 ID : 6306801575810

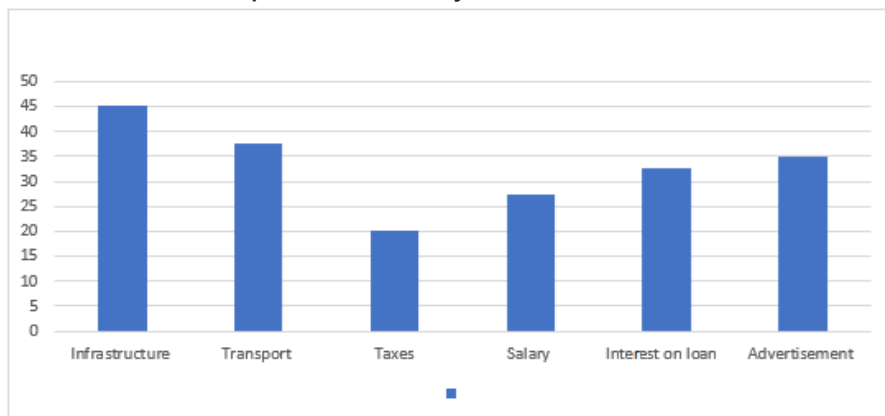
Option 3 ID : 6306801575812

Option 4 ID : 6306801575813

Status : Answered

Chosen Option : 3

Q.11 The given bar graph shows the distribution of the total expenditure (in hundreds) of a school under various expense heads in the year 2022.



The total amount of expenditure of the school is how many times of its expenditure on advertisement?

Ans

- ☒ 1. $\frac{97}{14}$ times
- ☒ 2. $\frac{79}{14}$ times
- ☒ 3. 18 times
- ☒ 4. 20 times

Question Type : MCQ

Question ID : 630680523741

Option 1 ID : 6306802047116

Option 2 ID : 6306802047118

Option 3 ID : 6306802047115

Option 4 ID : 6306802047117

Status : Answered

Chosen Option : 2

Q.12 The product of LCM and HCF of two numbers is 24. If the difference between the two numbers is 2, then find the numbers.

Ans

- ☒ 1. 8 and 6
- ☒ 2. 6 and 4
- ☒ 3. 2 and 4
- ☒ 4. 5 and 3

Question Type : MCQ

Question ID : 630680107354

Option 1 ID : 630680416780

Option 2 ID : 630680416783

Option 3 ID : 630680416782

Option 4 ID : 630680416781

Status : Answered

Chosen Option : 2

Q.13 If $49 : x :: x : 81$ and $64 : y :: y : 169$, where x and y are both natural numbers, then find the value of $2x + 3y$.

- Ans ☐ 1. 348
☐ 2. 312
☒ 3. 438
☐ 4. 126

Question Type : MCQ

Question ID : 630680239510

Option 1 ID : 630680928991

Option 2 ID : 630680928993

Option 3 ID : 630680928992

Option 4 ID : 630680928994

Status : Answered

Chosen Option : 3

Q.14 The height of Aaryan was 120 cm. After 1 year, his height increased by 15%, and in the next 1 year, his height increased by 16%. What will be the height (in cm) of Aaryan after the second years?

- Ans ☐ 1. 161.08
☒ 2. 160.08
☐ 3. 150.56
☐ 4. 138

Question Type : MCQ

Question ID : 630680464546

Option 1 ID : 6306801814219

Option 2 ID : 6306801814220

Option 3 ID : 6306801814222

Option 4 ID : 6306801814221

Status : Answered

Chosen Option : 2

Q.15 A person can complete a journey in 21 hours. He covers the first one-third of the journey at the speed of 40 km/h and the remaining distance at the speed of 60 km/h. What is the total distance of his journey?

- Ans ☒ 1. 1080 km
☐ 2. 1140 km
☐ 3. 360 km
☐ 4. 720 km

Question Type : MCQ

Question ID : 630680233075

Option 1 ID : 630680904422

Option 2 ID : 630680904423

Option 3 ID : 630680904421

Option 4 ID : 630680904424

Status : Answered

Chosen Option : 1

Q.16 Ramesh bought a watch for Rs.460 and sold it for Rs.414. Find his percentage of loss

- Ans
- ☐ 1. 5%
 - ☐ 2. 20%
 - ☒ 3. 10%
 - ☐ 4. 11%

Question Type : MCQ

Question ID : 630680105377

Option 1 ID : 630680409581

Option 2 ID : 630680409582

Option 3 ID : 630680409580

Option 4 ID : 630680409579

Status : Answered

Chosen Option : 3

Q.17 The diameter of the base of a right circular cylinder is 98 cm and its height is 42 cm. Find the total surface area of the cylinder. (Take $\pi = \frac{22}{7}$)

- Ans
- ☒ 1. 28028 cm²
 - ☐ 2. 20828 cm²
 - ☐ 3. 20882 cm²
 - ☐ 4. 28082 cm²

Question Type : MCQ

Question ID : 630680387745

Option 1 ID : 6306801511615

Option 2 ID : 6306801511614

Option 3 ID : 6306801511617

Option 4 ID : 6306801511616

Status : Answered

Chosen Option : 1

Q.18 By selling a book for ₹480 at marked price, a shopkeeper gains 20%. During a clearance sale, the shopkeeper allows a discount of 10% on the marked price. What is his gain per cent during the sale?

- Ans
- ☐ 1. 12%
 - ☒ 2. 8%
 - ☐ 3. 16%
 - ☐ 4. 18%

Question Type : MCQ

Question ID : 630680500480

Option 1 ID : 6306801955543

Option 2 ID : 6306801955545

Option 3 ID : 6306801955542

Option 4 ID : 6306801955544

Status : Answered

Chosen Option : 2

Q.19 The radius of a solid right circular cone is 36 cm and its height is 105 cm.
The total surface area (in cm^2) of the cone is (use $\pi = \frac{22}{7}$):

- Ans
- ☒ 1. 17838
 - ☒ 2. 18821
 - ☒ 3. 14856
 - ☒ 4. 16632

Question Type : MCQ

Question ID : 630680378016

Option 1 ID : 6306801473126

Option 2 ID : 6306801473124

Option 3 ID : 6306801473125

Option 4 ID : 6306801473123

Status : Answered

Chosen Option : 4

Q.20 The difference between simple interests on a certain sum at the annual rate of 6% for 6 years and 8% for 8 years is ₹1,176. What is the sum?

- Ans
- ☒ 1. ₹4,400
 - ☒ 2. ₹4,000
 - ☒ 3. ₹3,800
 - ☒ 4. ₹4,200

Question Type : MCQ

Question ID : 6306801108823

Option 1 ID : 6306804355881

Option 2 ID : 6306804355879

Option 3 ID : 6306804355878

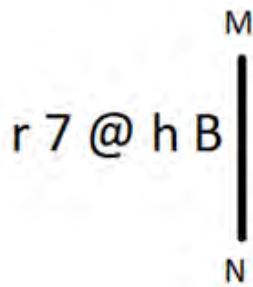
Option 4 ID : 6306804355880

Status : Answered

Chosen Option : 4

Section : Reasoning Ability and Problem Solving

Q.1 Select the correct mirror image of the given figure when the mirror is placed at MN as shown below.



- Ans
- ☒ 1. h B @ 7 r
 - ☒ 2. B h @ 7 r
 - ☒ 3. h B @ 7 r
 - ☒ 4. B h @ 7 r

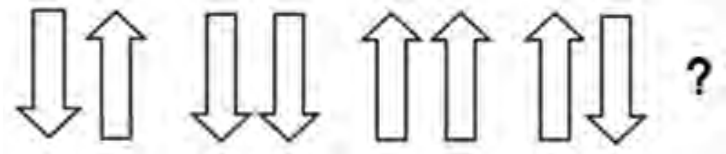
Question Type : MCQ
Question ID : 630680525249
Option 1 ID : 6306802053081
Option 2 ID : 6306802053080
Option 3 ID : 6306802053083
Option 4 ID : 6306802053082
Status : Answered
Chosen Option : 3

Q.2 CMGW is related to XHDT in a certain way based on the English alphabetical order. In the same way, SCAQ is related to NXXN. To which of the following is ISUK related, following the same logic?

- Ans
- ☒ 1. CMRG
 - ☒ 2. DNRH
 - ☒ 3. EORG
 - ☒ 4. ENSH

Question Type : MCQ
Question ID : 630680528963
Option 1 ID : 6306802067841
Option 2 ID : 6306802067842
Option 3 ID : 6306802067843
Option 4 ID : 6306802067840
Status : Answered
Chosen Option : 2

Q.3 Select the pattern that can replace the question mark (?) in the following series.



Ans

- ☒ 1.
- ☒ 2.
- ☒ 3.
- ☒ 4.

Question Type : MCQ
Question ID : 630680468014
Option 1 ID : 6306801827959
Option 2 ID : 6306801827960
Option 3 ID : 6306801827961
Option 4 ID : 6306801827958
Status : Answered
Chosen Option : 3

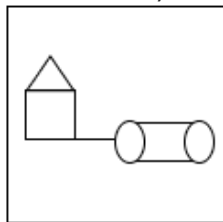
Q.4 12 is related to 61 following a certain logic. Following the same logic, 15 is related to 76. To which of the following is 18 related, following the same logic?

(NOTE: Operations should be performed on the whole numbers, without breaking down the numbers into their constituent digits. E.g. 13 – Operations on 13 such as adding/subtracting/multiplying to 13 can be performed. Breaking down 13 into 1 and 3 and then performing mathematical operations on 1 and 3 is not allowed.)

- Ans
- ☒ 1. 97
- ☒ 2. 95
- ☒ 3. 93
- ☒ 4. 91

Question Type : MCQ
Question ID : 6306801027549
Option 1 ID : 6306804032888
Option 2 ID : 6306804032887
Option 3 ID : 6306804032886
Option 4 ID : 6306804032885
Status : Answered
Chosen Option : 4

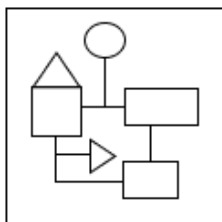
Q.5 Select the option figure in which the given figure (X) is embedded as its part (rotation is NOT allowed).



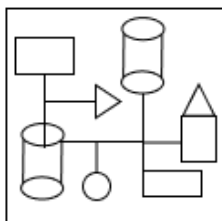
(X)

Ans

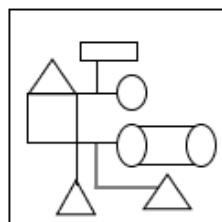
✗ 1.



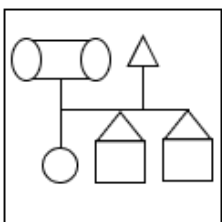
✗ 2.



✓ 3.



✗ 4.



Question Type : MCQ
Question ID : 630680487619
Option 1 ID : 6306801904547
Option 2 ID : 6306801904546
Option 3 ID : 6306801904549
Option 4 ID : 6306801904548
Status : Answered
Chosen Option : 3

Q.6 Read the given statements and conclusions carefully. Assuming that the information given in the statements is true, even if it appears to be at variance with commonly known facts, decide which of the given conclusion(s) logically follow(s) from the statement(s).

Statements:

Some salaries are bonus.

All wages are bonus.

Conclusions:

(I) Some salaries are wages.

(II) All bonus are wages.

- Ans** ☐ 1. Only conclusion (I) follows.
- ☐ 2. Both conclusions (I) and (II) follow.
- ☐ 3. Only conclusion (II) follows.
- ☒ 4. Neither conclusion (I) nor (II) follows.

Question Type : **MCQ**

Question ID : **630680832756**

Option 1 ID : **6306803262005**

Option 2 ID : **6306803262008**

Option 3 ID : **6306803262006**

Option 4 ID : **6306803262007**

Status : **Answered**

Chosen Option : **4**

Q.7 2 is related to 15 following a certain logic. Following the same logic, 6 is related to 43. To which of the following is 9 related, following the same logic?

(NOTE: Operations should be performed on the whole numbers, without breaking down the numbers into its constituent digits. E.g. 13 - Operations on 13 such as adding/subtracting/multiplying etc. to 13 can be performed. Breaking down 13 into 1 and 3 and then performing mathematical operations on 1 and 3 is not allowed.)

- Ans** ☐ 1. 68
- ☒ 2. 64
- ☐ 3. 58
- ☐ 4. 53

Question Type : **MCQ**

Question ID : **630680799052**

Option 1 ID : **6306803131010**

Option 2 ID : **6306803131011**

Option 3 ID : **6306803131012**

Option 4 ID : **6306803131013**

Status : **Answered**

Chosen Option : **2**

Q.8 What will come in the place of '?' in the following equation, if '-' and '÷' are interchanged and '×' and '+' are interchanged?
 $70 \div 90 - 10 + 20 \times 80 = ?$

- Ans
- ☒ 1. -45
 - ☒ 2. -10
 - ☒ 3. -30
 - ☒ 4. -40

Question Type : **MCQ**

Question ID : **630680388346**

Option 1 ID : **6306801513902**

Option 2 ID : **6306801513905**

Option 3 ID : **6306801513904**

Option 4 ID : **6306801513903**

Status : **Answered**

Chosen Option : **3**

Q.9 Select the figure from among the given options that can replace the question mark (?) in the following series and complete the pattern.

<div>△ ☆ I △ 0 5 △ 0</div>	
<div>0 5 I ☆ ☆ △ I 5</div>	<div>?</div>

Ans

✓ 1.

I ☆

△

5 0

✗ 2.

0 ☆

△

5 I

✗ 3.

I 5

△

☆ 0

✗ 4.

5 I

△

0 ☆

Question Type : MCQ
Question ID : 630680441101
Option 1 ID : 6306801722059
Option 2 ID : 6306801722058
Option 3 ID : 6306801722060
Option 4 ID : 6306801722061
Status : Answered
Chosen Option : 1

Q.10 What should come in place of the question mark (?) in the given series?

36, 39, 44, 51, 60, 71, 84, ?

- Ans ☒ 1. 90
☒ 2. 95
☒ 3. 99
☒ 4. 97

Question Type : MCQ
Question ID : 630680402480
Option 1 ID : 6306801569486
Option 2 ID : 6306801569485
Option 3 ID : 6306801569484
Option 4 ID : 6306801569483
Status : Answered
Chosen Option : 3

Q.11 What will come in place of the question mark (?) in the following equation, if '+' and '-' are interchanged and 'x' and '÷' are interchanged?
 $81 \times 3 - 9 \div 3 + 2 = ?$

- Ans ☒ 1. 3
☒ 2. 56
☒ 3. 52
☒ 4. 2

Question Type : MCQ
Question ID : 630680799068
Option 1 ID : 6306803131075
Option 2 ID : 6306803131077
Option 3 ID : 6306803131074
Option 4 ID : 6306803131076
Status : Answered
Chosen Option : 3

Q.12 In a certain code language, 'black dark night' is coded as 'ck th lp' and 'dark cloudy sky' is coded as 'eg lp sc'. How is 'dark' coded in the given language?

- Ans ☒ 1. th
☒ 2. eg
☒ 3. sc
☒ 4. lp

Question Type : MCQ
Question ID : 630680825484
Option 1 ID : 6306803233481
Option 2 ID : 6306803233482
Option 3 ID : 6306803233483
Option 4 ID : 6306803233484
Status : Answered
Chosen Option : 4

Q.13 Seven people A, B, C, D, E, F and G are sitting around a circular table, facing the centre (but not necessarily in the same order). D is sitting second to the left of F. A is sitting third to the right of B. C is sitting to the immediate right of D. Only two people are sitting between F and G. How many people are sitting between C and G when counted from the left of G?

Ans  1. Three

 2. Four

 3. Two

 4. One

Question Type : MCQ

Question ID : 630680382734

Option 1 ID : 6306801491851

Option 2 ID : 6306801491854

Option 3 ID : 6306801491852

Option 4 ID : 6306801491853

Status : Answered

Chosen Option : 3

Q.14 What should come in place of the question mark (?) in the given series based on the English alphabetical order?

AGK, FLP, KQU, PVZ, ?

Ans  1. VGY

 2. UAE

 3. UEA

 4. UES

Question Type : MCQ

Question ID : 630680458064

Option 1 ID : 6306801789140

Option 2 ID : 6306801789142

Option 3 ID : 6306801789143

Option 4 ID : 6306801789141

Status : Answered

Chosen Option : 2

Q.15 Read the given statements and conclusions carefully. Assuming that the information given in the statements is true, even if it appears to be at variance with commonly known facts, decide which of the given conclusions logically follow(s) from the statements.

Statements:

Some doors are rocks.

All rocks are woods.

Conclusions:

(I) At least some woods are doors.

(II) All woods are rocks.

- Ans** ☒ 1. Only conclusion (I) follows
- ☐ 2. Neither conclusion (I) nor (II) follows
- ☐ 3. Both conclusions (I) and (II) follow
- ☐ 4. Only conclusion (II) follows

Question Type : **MCQ**

Question ID : **630680404840**

Option 1 ID : **6306801578851**

Option 2 ID : **6306801578853**

Option 3 ID : **6306801578854**

Option 4 ID : **6306801578852**

Status : **Answered**

Chosen Option : **1**

Q.16 In a certain code language, 'WEAR' is coded as 'PI1O' and 'EARS' is coded as 'I4OP'. What is the code for 'S' in the given code language?

- Ans** ☐ 1. I
- ☐ 2. P
- ☐ 3. O
- ☒ 4. 4

Question Type : **MCQ**

Question ID : **630680503084**

Option 1 ID : **6306801965921**

Option 2 ID : **6306801965924**

Option 3 ID : **6306801965923**

Option 4 ID : **6306801965922**

Status : **Answered**

Chosen Option : **4**

Q.17 A, E, I, O, U, S and K are sitting around a circular table facing the centre (but not necessarily in the same order). K is to the immediate right of O. E is the immediate neighbour of both O and S. I is neither an immediate neighbour of S nor A. Who sits to the immediate right of U?

Ans ☒ 1. A

☐ 2. K

☐ 3. S

☐ 4. I

Question Type : MCQ

Question ID : 630680383183

Option 1 ID : 6306801493639

Option 2 ID : 6306801493641

Option 3 ID : 6306801493640

Option 4 ID : 6306801493642

Status : Answered

Chosen Option : 1

Q.18 In a certain code language, 'shirt pant coat' is coded as 'ek ph bq', 'coat jacket sweater' is coded as 'ek lh to', 'jacket shirt watch' is coded as 'fd bq lh'. What is the code for 'coat' in that language? (Note: All the codes are two-letter coded only.)

Ans ☒ 1. ek

☐ 2. bq

☐ 3. to

☐ 4. lh

Question Type : MCQ

Question ID : 630680436136

Option 1 ID : 6306801702485

Option 2 ID : 6306801702486

Option 3 ID : 6306801702488

Option 4 ID : 6306801702487

Status : Answered

Chosen Option : 1

Q.19 GNEE is related to JQHH in a certain way based on the English alphabetical order. In the same way, BHYY is related to EKBB. To which of the following is QXOO related, following the same logic?

Ans ☐ 1. RRAT

☐ 2. ATRR

☒ 3. TARR

☐ 4. RRTA

Question Type : MCQ

Question ID : 630680386856

Option 1 ID : 6306801508137

Option 2 ID : 6306801508135

Option 3 ID : 6306801508134

Option 4 ID : 6306801508136

Status : Answered

Chosen Option : 3

Q.20 In a certain code language, 'JUMP' is coded as '4682' and 'MIND' is coded as '3741'.What is the code for 'M' in the given code language?

- Ans ☒ 1. 8
☒ 2. 7
☒ 3. 4
☒ 4. 3

Question Type : MCQ
Question ID : 630680388106
Option 1 ID : 6306801513001
Option 2 ID : 6306801513000
Option 3 ID : 6306801512998
Option 4 ID : 6306801512999
Status : Answered
Chosen Option : 3

Section : General Awareness

Q.1 Anuradhapura, the old capital of Sri Lanka, was destroyed by which of the following dynasties of South India in the 10th century AD?

- Ans ☒ 1. Rashtrakuta
☒ 2. Chalukyas of Vengi
☒ 3. Chola
☒ 4. Chalukyas of Badami

Question Type : MCQ
Question ID : 630680333525
Option 1 ID : 6306801297373
Option 2 ID : 6306801297376
Option 3 ID : 6306801297374
Option 4 ID : 6306801297375
Status : Answered
Chosen Option : 3

Q.2 What is the atomic number of uranium (U)?

- Ans ☒ 1. 104
☒ 2. 90
☒ 3. 94
☒ 4. 92

Question Type : MCQ
Question ID : 630680411206
Option 1 ID : 6306801603583
Option 2 ID : 6306801603580
Option 3 ID : 6306801603582
Option 4 ID : 6306801603581
Status : Answered
Chosen Option : 4

Q.3 When was the Jallianwala Bagh massacre brought into action by the Britishers in Amritsar?

- Ans ☐ 1. 23 April, 1918
☐ 2. 13 March 1919
☐ 3. 13 April, 1918
☒ 4. 13 April, 1919

Question Type : MCQ
Question ID : 630680326303
Option 1 ID : 6306801269303
Option 2 ID : 6306801269301
Option 3 ID : 6306801269302
Option 4 ID : 6306801269304
Status : Answered
Chosen Option : 4

Q.4 Kanaka Raju, who kept the tribal folk dance Gussadi alive, was honoured with which of the following civilian awards of India in 2021?

- Ans ☐ 1. Bharat Ratna
☐ 2. Padma Bhushan
☒ 3. Padma Shri
☐ 4. Padma Vibhushan

Question Type : MCQ
Question ID : 630680433369
Option 1 ID : 6306801691446
Option 2 ID : 6306801691445
Option 3 ID : 6306801691444
Option 4 ID : 6306801691443
Status : Answered
Chosen Option : 3

Q.5 The Citadel area has a huge mud _____ platform, which is 6 m high and underlies all the construction.

- Ans ☐ 1. wood
☒ 2. brick
☐ 3. rock
☐ 4. stone

Question Type : MCQ
Question ID : 630680511898
Option 1 ID : 6306802000565
Option 2 ID : 6306802000564
Option 3 ID : 6306802000562
Option 4 ID : 6306802000563
Status : Answered
Chosen Option : 2

Q.6 The Indus Water Treaty took place in _____ between India and Pakistan.

- Ans ☒ 1. 1970
☒ 2. 1960
☒ 3. 1955
☒ 4. 1965

Question Type : MCQ
Question ID : 630680477105
Option 1 ID : 6306801863613
Option 2 ID : 6306801863615
Option 3 ID : 6306801863614
Option 4 ID : 6306801863616
Status : Answered
Chosen Option : 2

Q.7 The planned large-scale disruption of rail communications and the seizure of arms in Bengal were undertaken under the leadership of _____.

- Ans ☒ 1. Aurobindo Ghose
☒ 2. Chittaranjan Das
☒ 3. Jatin Mukherjee
☒ 4. Surendranath Banerjee

Question Type : MCQ
Question ID : 630680214229
Option 1 ID : 630680830963
Option 2 ID : 630680830965
Option 3 ID : 630680830964
Option 4 ID : 630680830966
Status : Answered
Chosen Option : 1

Q.8 The revival of the art form in the late 1940s was spearheaded by maestros such as Kelucharan Mohapatra and Raghunath Dutta in the field of _____.

- Ans ☒ 1. Manipuri
☒ 2. Odissi
☒ 3. Sattriya
☒ 4. Chhau

Question Type : MCQ
Question ID : 630680554552
Option 1 ID : 6306802167979
Option 2 ID : 6306802167978
Option 3 ID : 6306802167981
Option 4 ID : 6306802167980
Status : Answered
Chosen Option : 2

Q.9 A child is a picky eater. He does not consume milk at all and barely eats other kinds of food. When he started losing his baby teeth, they were not getting replaced with new teeth. This can be solved by giving him _____.

- Ans ☒ 1. vitamin C
☒ 2. calcium supplements
☒ 3. carbohydrate-rich food
☒ 4. vitamin B complex

Question Type : MCQ
Question ID : 630680539614
Option 1 ID : 6306802109583
Option 2 ID : 6306802109582
Option 3 ID : 6306802109581
Option 4 ID : 6306802109584
Status : Answered
Chosen Option : 2

Q.10 Which of the following is included in the estimation of Gross National Product?

- Ans ☒ 1. Sale of used cars
☒ 2. Pension payments
☒ 3. Sale of new shirts
☒ 4. Sale of securities

Question Type : MCQ
Question ID : 63068059127
Option 1 ID : 630680228132
Option 2 ID : 630680228131
Option 3 ID : 630680228133
Option 4 ID : 630680228130
Status : Answered
Chosen Option : 3

Q.11 Which of the following Indian cities was the host of the ICC Men's World Cup final cricket match in 2023?

- Ans ☒ 1. New Delhi
☒ 2. Ahmedabad
☒ 3. Mumbai
☒ 4. Chennai

Question Type : MCQ
Question ID : 630680799002
Option 1 ID : 6306803130812
Option 2 ID : 6306803130811
Option 3 ID : 6306803130810
Option 4 ID : 6306803130813
Status : Answered
Chosen Option : 2

Q.12 Kala Ramnath belonged to which of the following gharanas?

- Ans ☒ 1. Indore gharana
☒ 2. Mewati gharana
☒ 3. Agra gharana
☒ 4. Kirana gharana

Question Type : MCQ
Question ID : 630680488696
Option 1 ID : 6306801908802
Option 2 ID : 6306801908799
Option 3 ID : 6306801908801
Option 4 ID : 6306801908800
Status : Answered
Chosen Option : 4

Q.13 The 9th Asian Games was hosted by which of the following countries?

- Ans ☒ 1. China
☒ 2. South Korea
☒ 3. Japan
☒ 4. India

Question Type : MCQ
Question ID : 630680799008
Option 1 ID : 6306803130836
Option 2 ID : 6306803130837
Option 3 ID : 6306803130835
Option 4 ID : 6306803130834
Status : Answered
Chosen Option : 4

Q.14 In January 2023, the Chief Minister's Residential Land Rights Scheme (Mukhyamantri Awasiya Bhu Adhikar Yojana) was launched in which Indian state?

- Ans ☒ 1. Haryana
☒ 2. Uttar Pradesh
☒ 3. Madhya Pradesh
☒ 4. Punjab

Question Type : MCQ
Question ID : 630680469429
Option 1 ID : 6306801833484
Option 2 ID : 6306801833485
Option 3 ID : 6306801833486
Option 4 ID : 6306801833483
Status : Answered
Chosen Option : 2

Q.15 As per Census 2011, which of the following states has the lowest child sex ratio?

- Ans ☒ 1. Rajasthan
☒ 2. Madhya Pradesh
☒ 3. Haryana
☒ 4. Punjab

Question Type : MCQ
Question ID : 630680510920
Option 1 ID : 6306801996812
Option 2 ID : 6306801996813
Option 3 ID : 6306801996810
Option 4 ID : 6306801996811
Status : Answered
Chosen Option : 1

Q.16 Every year, Karthik Purnima marks the end of a livestock fair in Pushkar, where the main animal on display is:

- Ans ☒ 1. cow
☒ 2. buffalo
☒ 3. camel
☒ 4. horse

Question Type : MCQ
Question ID : 630680798928
Option 1 ID : 6306803130518
Option 2 ID : 6306803130519
Option 3 ID : 6306803130520
Option 4 ID : 6306803130521
Status : Answered
Chosen Option : 3

Q.17 Select the INCORRECT statement regarding Ozone.

- Ans ☒ 1. Ozone is formed from oxygen in the presence of ultraviolet radiation.
☒ 2. Ozone (O₃), like oxygen, is a life-supporting gas.
☒ 3. Ozone is a deadly poison
☒ 4. Ultraviolet radiation causes skin cancer.

Question Type : MCQ
Question ID : 630680421838
Option 1 ID : 6306801645793
Option 2 ID : 6306801645792
Option 3 ID : 6306801645794
Option 4 ID : 6306801645795
Status : Answered
Chosen Option : 2

Q.18 Who is the author of the English novel 'Voting at Fostergeranj'?

- Ans ☒ 1. Ruskin Bond
- ☐ 2. RK Narayan
- ☐ 3. Sudha Murty
- ☐ 4. Akshat Gupta

Question Type : MCQ
Question ID : 630680512100
Option 1 ID : 6306802001371
Option 2 ID : 6306802001370
Option 3 ID : 6306802001372
Option 4 ID : 6306802001373
Status : Answered
Chosen Option : 4

Q.19 Which writ is issued by the High Court or Supreme Court when a lower court considers a case going beyond its jurisdiction?

- Ans ☐ 1. Mandamus
- ☒ 2. Prohibition
- ☐ 3. Habeas Corpus
- ☐ 4. Quo warranto

Question Type : MCQ
Question ID : 630680270112
Option 1 ID : 6306801049701
Option 2 ID : 6306801049699
Option 3 ID : 6306801049700
Option 4 ID : 6306801049702
Status : Answered
Chosen Option : 2

Q.20 Tsunami is a natural disaster that originates from the ocean. The cause of Tsunami in the ocean is:

- Ans ☒ 1. The movement of tectonic plates under the ocean
- ☐ 2. The presence of excessive carbon dioxide in the water
- ☐ 3. The alarmingly increasing amount of acid in water
- ☐ 4. The accumulation of high amount of radioactive pollutants in the ocean

Question Type : MCQ
Question ID : 630680404259
Option 1 ID : 6306801576538
Option 2 ID : 6306801576541
Option 3 ID : 6306801576539
Option 4 ID : 6306801576540
Status : Answered
Chosen Option : 1

Q.21 Which of the following organisations in India provides facilities for acquisition of satellite data and its processing?

- Ans ☐ 1. Indian Institute of Remote Sensing (IIRS)
☐ 2. Forest Research Institute (FRI)
☒ 3. National Remote Sensing Centre (NRSC)
☐ 4. Wildlife Institute of India (WII)

Question Type : MCQ

Question ID : 630680482445

Option 1 ID : 6306801884256

Option 2 ID : 6306801884258

Option 3 ID : 6306801884259

Option 4 ID : 6306801884257

Status : Answered

Chosen Option : 1

Q.22 Which of the following periods in India is also associated with the Iron Age?

- Ans ☐ 1. Palaeolithic Age
☒ 2. Later Vedic Age
☐ 3. Harappan Age
☐ 4. Neolithic Age

Question Type : MCQ

Question ID : 63068070537

Option 1 ID : 630680272771

Option 2 ID : 630680272773

Option 3 ID : 630680272770

Option 4 ID : 630680272772

Status : Answered

Chosen Option : 2

Q.23 What was the unemployment rate of Gujarat in November 2021?

- Ans ☐ 1. 3.4%
☐ 2. 2.4%
☒ 3. 1.4%
☐ 4. 4.4%

Question Type : MCQ

Question ID : 63068069569

Option 1 ID : 630680268943

Option 2 ID : 630680268944

Option 3 ID : 630680268945

Option 4 ID : 630680268942

Status : Answered

Chosen Option : 2

Q.24 An Indian Parliamentary delegation led by Minister of Parliamentary Affairs, Coal and Mines _____ visited Brazil from 11 to 13 June 2023.

- Ans ☒ 1. Arjun Munda
☒ 2. Narayan Rane
☒ 3. Pralhad Joshi
☒ 4. Virendra Kumar

Question Type : MCQ
Question ID : 630680468941
Option 1 ID : 6306801831533
Option 2 ID : 6306801831532
Option 3 ID : 6306801831531
Option 4 ID : 6306801831534
Status : Answered
Chosen Option : 3

Q.25 As per Article 157 of the Constitution of India, a person needs to complete the age of _____ years to be appointed as Governor.

- Ans ☒ 1. 41
☒ 2. 45
☒ 3. 35
☒ 4. 32

Question Type : MCQ
Question ID : 630680493668
Option 1 ID : 6306801928402
Option 2 ID : 6306801928403
Option 3 ID : 6306801928401
Option 4 ID : 6306801928400
Status : Answered
Chosen Option : 3

Section : English Language and Comprehension

Q.1 Select the most appropriate option that can substitute the underlined segment in the given sentence.

Whoever got the few answers correct has to leave the room.

- Ans ☒ 1. more fewer
☒ 2. fewest
☒ 3. most few
☒ 4. fewer

Question Type : MCQ
Question ID : 630680514596
Option 1 ID : 6306802011010
Option 2 ID : 6306802011012
Option 3 ID : 6306802011011
Option 4 ID : 6306802011009
Status : Answered
Chosen Option : 4

Q.2 Select the most appropriate ANTONYM of the underlined word in the given sentence.

The vegetation in this area of the forest is very dense.

- Ans ☒ 1. Sparse
☐ 2. Spare
☐ 3. Spatial
☐ 4. Spruce

Question Type : MCQ
Question ID : 630680439319
Option 1 ID : 6306801715076
Option 2 ID : 6306801715078
Option 3 ID : 6306801715079
Option 4 ID : 6306801715077
Status : Answered
Chosen Option : 3

Q.3 Select the most appropriate option that can substitute the underlined words in the given sentence.

Adi had not only assisted her by giving evidence in the case but also provided many examples to prove her point in the court.

- Ans ☐ 1. assisted not only her by
☐ 2. assisted not only by her
☒ 3. assisted her not only by
☐ 4. assisted her only not by

Question Type : MCQ
Question ID : 630680404608
Option 1 ID : 6306801577934
Option 2 ID : 6306801577931
Option 3 ID : 6306801577932
Option 4 ID : 6306801577933
Status : Answered
Chosen Option : 3

Q.4 Parts of the following sentence have been given as options. Select the option that contains an error.
My aunt came from Switzerland by the flight which was landing at 5:00 a.m. yesterday.

- Ans ☒ 1. flight which was landing
☐ 2. at 5:00 a.m. yesterday.
☐ 3. Switzerland by the
☐ 4. My aunt came from

Question Type : MCQ
Question ID : 630680397282
Option 1 ID : 6306801549186
Option 2 ID : 6306801549187
Option 3 ID : 6306801549185
Option 4 ID : 6306801549184
Status : Answered
Chosen Option : 1

Q.5 Parts of the following sentence have been given as options. Select the option that contains an error.
The car which I bought last year was cheap than my bike.

Ans ☒ 1. was cheap than my bike

☐ 2. which I bought

☐ 3. The car

☐ 4. last year

Question Type : **MCQ**

Question ID : **630680514376**

Option 1 ID : **6306802010132**

Option 2 ID : **6306802010130**

Option 3 ID : **6306802010129**

Option 4 ID : **6306802010131**

Status : **Answered**

Chosen Option : **1**

Q.6 Select the most appropriate meaning of the given idiom/phrase.

Throw in the towel

Ans ☐ 1. To prepare to fight

☐ 2. To cause an activity or process to continue

☐ 3. To take responsibility for a situation while another person is temporarily absent

☒ 4. To give up or surrender

Question Type : **MCQ**

Question ID : **630680545706**

Option 1 ID : **6306802133413**

Option 2 ID : **6306802133415**

Option 3 ID : **6306802133414**

Option 4 ID : **6306802133412**

Status : **Answered**

Chosen Option : **4**

Q.7 Select the most appropriate option to fill in the blank.

The plan was very _____ and took a lot of time to develop.

Ans ☐ 1. elaborates

☐ 2. being elaborate

☒ 3. elaborate

☐ 4. elaboration

Question Type : **MCQ**

Question ID : **630680553932**

Option 1 ID : **6306802165583**

Option 2 ID : **6306802165585**

Option 3 ID : **6306802165582**

Option 4 ID : **6306802165584**

Status : **Answered**

Chosen Option : **3**

Q.8 Select the option that can be used as a one-word substitute for the given group of words.

A serpent having many heads in Greek mythology

Ans ☒ 1. Hydra

☐ 2. Eopsin

☐ 3. Cobra

☐ 4. Python

Question Type : **MCQ**

Question ID : **630680565570**

Option 1 ID : **6306802211226**

Option 2 ID : **6306802211227**

Option 3 ID : **6306802211228**

Option 4 ID : **6306802211229**

Status : **Answered**

Chosen Option : **2**

Q.9 Select the **INCORRECTLY** spelt word.

Ans ☒ 1. Infinite

☐ 2. Eternal

☐ 3. Novelist

☐ 4. Throw

Question Type : **MCQ**

Question ID : **630680435674**

Option 1 ID : **6306801700622**

Option 2 ID : **6306801700621**

Option 3 ID : **6306801700623**

Option 4 ID : **6306801700624**

Status : **Answered**

Chosen Option : **1**

Q.10 The following sentence has been split into four segments. Identify the segment that contains a grammatical error.

(1) We knocked across (2) early on Saturday (3) to enjoy (4) the beautiful weather.

Ans ☐ 1. the beautiful weather.

☐ 2. early on Saturday

☒ 3. We knocked across

☐ 4. to enjoy

Question Type : **MCQ**

Question ID : **63068082678**

Option 1 ID : **630680320643**

Option 2 ID : **630680320641**

Option 3 ID : **630680320640**

Option 4 ID : **630680320642**

Status : **Answered**

Chosen Option : **3**

Q.11 Select the most appropriate antonym for the word provided in the bracket to fill in the blank.
The professor delivered a _____ lecture on quantum physics.
(simplified)

- Ans ☒ 1. Plain
☒ 2. Complex
☒ 3. Lengthy
☒ 4. Refined

Question Type : **MCQ**
Question ID : **630680517326**
Option 1 ID : **6306802021700**
Option 2 ID : **6306802021702**
Option 3 ID : **6306802021703**
Option 4 ID : **6306802021701**
Status : **Answered**
Chosen Option : **2**

Q.12 Select the appropriate option that can substitute the underlined idiom in the given sentence.

The interns explained the whole issue to the coordinator in a nutshell.

- Ans ☒ 1. in a discouraging manner
☒ 2. in a secret way
☒ 3. in an uncertain way
☒ 4. in a brief manner

Question Type : **MCQ**
Question ID : **630680134117**
Option 1 ID : **630680519363**
Option 2 ID : **630680519364**
Option 3 ID : **630680519362**
Option 4 ID : **630680519365**
Status : **Answered**
Chosen Option : **4**

Q.13 Select the INCORRECTLY spelt word.

- Ans ☒ 1. Creative
☒ 2. Credeble
☒ 3. Explosive
☒ 4. Devoted

Question Type : **MCQ**
Question ID : **630680539877**
Option 1 ID : **6306802110611**
Option 2 ID : **6306802110608**
Option 3 ID : **6306802110610**
Option 4 ID : **6306802110609**
Status : **Answered**
Chosen Option : **2**

Q.14 Parts of the following sentence have been given as options. Select the option that contains an error.
Please hang with for two minutes while I finish cleaning the utensils.

- Ans ☒ 1. for two minutes
☒ 2. the utensils
☒ 3. Please hang with
☒ 4. while I finish cleaning

Question Type : **MCQ**
Question ID : **630680514357**
Option 1 ID : **6306802010054**
Option 2 ID : **6306802010056**
Option 3 ID : **6306802010053**
Option 4 ID : **6306802010055**
Status : **Answered**
Chosen Option : **3**

Q.15 Select the most appropriate synonym of the given word.

Hamper

- Ans ☒ 1. Hinder
☒ 2. Gift
☒ 3. Irritate
☒ 4. Pamper

Question Type : **MCQ**
Question ID : **630680393361**
Option 1 ID : **6306801533770**
Option 2 ID : **6306801533771**
Option 3 ID : **6306801533773**
Option 4 ID : **6306801533772**
Status : **Answered**
Chosen Option : **1**

Q.16 Select the most appropriate option to fill in the blanks.
A buzzing _____ can _____ dangerous.

- Ans ☒ 1. dear; deer
☒ 2. be; bee
☒ 3. bee; be
☒ 4. deer; dear

Question Type : **MCQ**
Question ID : **630680517443**
Option 1 ID : **6306802022171**
Option 2 ID : **6306802022169**
Option 3 ID : **6306802022168**
Option 4 ID : **6306802022170**
Status : **Answered**
Chosen Option : **3**

Q.17 Select the most appropriate option to fill in the blank.

With the increasing reliance on digital systems, ensuring robust cybersecurity measures is _____ to protect against online threats.

- Ans ☒ 1. superfluous
☒ 2. paramount
☒ 3. impartial
☒ 4. extraneous

Question Type : MCQ
Question ID : 630680480882
Option 1 ID : 6306801878126
Option 2 ID : 6306801878125
Option 3 ID : 6306801878128
Option 4 ID : 6306801878127
Status : Answered
Chosen Option : 2

Q.18 Select the correctly spelled sentence.

- Ans ☒ 1. The sceintist discovered a new palnet in the galaxy.
☒ 2. The scienetist discovered a new planet in the galaxy.
☒ 3. The scientist discovered a new planet in the galaxy.
☒ 4. The scientist discovred a new planet in the galaxy.

Question Type : MCQ
Question ID : 630680616025
Option 1 ID : 6306802410804
Option 2 ID : 6306802410802
Option 3 ID : 6306802410805
Option 4 ID : 6306802410803
Status : Answered
Chosen Option : 3

Q.19 Select the most appropriate ANTONYM for the underlined word in the given sentence.

Her profile was complete on the company website.

- Ans ☒ 1. created
☒ 2. uploaded
☒ 3. incomplete
☒ 4. received

Question Type : MCQ
Question ID : 630680502809
Option 1 ID : 6306801964819
Option 2 ID : 6306801964818
Option 3 ID : 6306801964817
Option 4 ID : 6306801964820
Status : Answered
Chosen Option : 3

Q.20 Identify the error in the usage of the future tense in the given sentence and choose the correct sentence from the following options.

Parvati finish the painting in one hour.

- Ans** ☒ 1. Parvati will finish the painting in one hour.
☐ 2. Parvati was finished the painting in one hour.
☐ 3. Parvati has been finishing the painting in one hour.
☐ 4. Parvati had been finishing the painting in one hour.

Question Type : **MCQ**

Question ID : **630680549053**

Option 1 ID : **6306802146689**

Option 2 ID : **6306802146691**

Option 3 ID : **6306802146690**

Option 4 ID : **6306802146688**

Status : **Answered**

Chosen Option : **1**

Comprehension:

In the following passage, some words have been deleted. Read the passage carefully and select the most appropriate option to fill in each blank.

Until that moment, every director in Hollywood had accepted as gospel (1)_____ that the audience should not be taxed too much. Welles struck a (2)_____ at these beliefs, without displaying the slightest of qualms. Visually, 'Citizen Kane' was shot with a harsh sharpness which (3)_____ every scene. Traditionally, every make-up man and cameraman in Hollywood had to keep a careful (4)_____ on the appearance of the heroine. Welles refused to follow this (5)_____ in the case of his own heroine. For the first time, dialogue was presented in its realistic form.

SubQuestion No : 21

Q.21 Select the most appropriate option to fill in blank number 1

- Ans** ☒ 1. truth
☐ 2. Bible
☐ 3. followers
☐ 4. blasphemy

Question Type : **MCQ**

Question ID : **630680634022**

Option 1 ID : **6306802481969**

Option 2 ID : **6306802481968**

Option 3 ID : **6306802481971**

Option 4 ID : **6306802481970**

Status : **Answered**

Chosen Option : **1**

Comprehension:

In the following passage, some words have been deleted. Read the passage carefully and select the most appropriate option to fill in each blank.

Until that moment, every director in Hollywood had accepted as gospel (1)_____ that the audience should not be taxed too much. Welles struck a (2)_____ at these beliefs, without displaying the slightest of qualms. Visually, 'Citizen Kane' was shot with a harsh sharpness which (3)_____ every scene. Traditionally, every make-up man and cameraman in Hollywood had to keep a careful (4)_____ on the appearance of the heroine. Welles refused to follow this (5)_____ in the case of his own heroine. For the first time, dialogue was presented in its realistic form.

SubQuestion No : 22

Q.22 Select the most appropriate option to fill in blank number 2

- Ans ☒ 1. bellow
☒ 2. blue
☒ 3. blow
☒ 4. blew

Question Type : **MCQ**
Question ID : **630680634023**
Option 1 ID : **6306802481975**
Option 2 ID : **6306802481973**
Option 3 ID : **6306802481972**
Option 4 ID : **6306802481974**
Status : **Answered**
Chosen Option : **3**

Comprehension:

In the following passage, some words have been deleted. Read the passage carefully and select the most appropriate option to fill in each blank.

Until that moment, every director in Hollywood had accepted as gospel (1)_____ that the audience should not be taxed too much. Welles struck a (2)_____ at these beliefs, without displaying the slightest of qualms. Visually, 'Citizen Kane' was shot with a harsh sharpness which (3)_____ every scene. Traditionally, every make-up man and cameraman in Hollywood had to keep a careful (4)_____ on the appearance of the heroine. Welles refused to follow this (5)_____ in the case of his own heroine. For the first time, dialogue was presented in its realistic form.

SubQuestion No : 23

Q.23 Select the most appropriate option to fill in blank number 3

- Ans ☒ 1. permitted
☒ 2. prevented
☒ 3. permeated
☒ 4. promoted

Question Type : **MCQ**
Question ID : **630680634024**
Option 1 ID : **6306802481977**
Option 2 ID : **6306802481979**
Option 3 ID : **6306802481978**
Option 4 ID : **6306802481976**
Status : **Answered**
Chosen Option : **4**

Comprehension:

In the following passage, some words have been deleted. Read the passage carefully and select the most appropriate option to fill in each blank.

Until that moment, every director in Hollywood had accepted as gospel (1)_____ that the audience should not be taxed too much. Welles struck a (2)_____ at these beliefs, without displaying the slightest of qualms. Visually, 'Citizen Kane' was shot with a harsh sharpness which (3)_____ every scene. Traditionally, every make-up man and cameraman in Hollywood had to keep a careful (4)_____ on the appearance of the heroine. Welles refused to follow this (5)_____ in the case of his own heroine. For the first time, dialogue was presented in its realistic form.

SubQuestion No : 24

Q.24 Select the most appropriate option to fill in blank number 4

- Ans ☒ 1. ear
☒ 2. leg
☒ 3. eye
☒ 4. nose

Question Type : **MCQ**
Question ID : **630680634025**
Option 1 ID : **6306802481980**
Option 2 ID : **6306802481982**
Option 3 ID : **6306802481981**
Option 4 ID : **6306802481983**
Status : **Answered**
Chosen Option : **3**

Comprehension:

In the following passage, some words have been deleted. Read the passage carefully and select the most appropriate option to fill in each blank.

Until that moment, every director in Hollywood had accepted as gospel (1)_____ that the audience should not be taxed too much. Welles struck a (2)_____ at these beliefs, without displaying the slightest of qualms. Visually, 'Citizen Kane' was shot with a harsh sharpness which (3)_____ every scene. Traditionally, every make-up man and cameraman in Hollywood had to keep a careful (4)_____ on the appearance of the heroine. Welles refused to follow this (5)_____ in the case of his own heroine. For the first time, dialogue was presented in its realistic form.

SubQuestion No : 25

Q.25 Select the most appropriate option to fill in blank number 5

- Ans ☒ 1. prose
☒ 2. practicals
☒ 3. practice
☒ 4. practise

Question Type : **MCQ**
Question ID : **630680634026**
Option 1 ID : **6306802481986**
Option 2 ID : **6306802481985**
Option 3 ID : **6306802481987**
Option 4 ID : **6306802481984**
Status : **Answered**
Chosen Option : **3**