

Multi Tasking Non Technical Staff and Havaladar CBIC and CBN Examination 2024

Roll Number	
Candidate Name	
Venue Name	Jyothi Technologies
Exam Date	13/11/2024
Exam Time	12:30 PM - 2:30 PM
Subject	MTS Non Tech Havaladar CBIC and CBN Examination 2024

Section : Numerical and Mathematical Ability

Q.1 The average weight of a family of five members (in kg) whose weights are 40 kg, 49 kg, 56 kg, 71 kg and 36 kg is:

- Ans ☒ 1. 51.4
☒ 2. 50.4
☐ 3. 52.4
☐ 4. 49.4

Question Type : MCQ
Question ID : 630680551660
Option 1 ID : 6306802156866
Option 2 ID : 6306802156865
Option 3 ID : 6306802156868
Option 4 ID : 6306802156867
Status : Answered
Chosen Option : 2

Q.2 Find the gain percentage, given that Aditi sold her scooter for ₹53585 gaining $\frac{1}{5}$ th of the selling price.

- Ans ☒ 1. 25%
☐ 2. 35%
☐ 3. 40%
☐ 4. 15%

Question Type : MCQ
Question ID : 630680931103
Option 1 ID : 6306803649218
Option 2 ID : 6306803649220
Option 3 ID : 6306803649219
Option 4 ID : 6306803649221
Status : Answered
Chosen Option : 1

Q.3 What sum (in ₹) will earn a simple interest of ₹240 in 4 years at 4% per year rate of interest?

- Ans ☐ 1. 750
☒ 2. 1500
☐ 3. 2000
☐ 4. 3000

Question Type : MCQ

Question ID : 630680612176

Option 1 ID : 6306802395437

Option 2 ID : 6306802395436

Option 3 ID : 6306802395439

Option 4 ID : 6306802395438

Status : Answered

Chosen Option : 2

Q.4 The average age of the 28 boys in a class is 16 years and that of the 26 girls is 15 years. The approximate average age (in years) for the whole class is:

- Ans ☐ 1. 15
☐ 2. $14\frac{1}{2}$
☒ 3. $15\frac{1}{2}$
☐ 4. $14\frac{3}{4}$

Question Type : MCQ

Question ID : 630680469561

Option 1 ID : 6306801834011

Option 2 ID : 6306801834014

Option 3 ID : 6306801834013

Option 4 ID : 6306801834012

Status : Answered

Chosen Option : 3

Q.5 The ratio of two numbers is 15 : 26. If the difference between the numbers is 352, then find the smallest number.

- Ans ☐ 1. 238
☒ 2. 480
☐ 3. 832
☐ 4. 840

Question Type : MCQ

Question ID : 630680493243

Option 1 ID : 6306801926720

Option 2 ID : 6306801926719

Option 3 ID : 6306801926721

Option 4 ID : 6306801926722

Status : Answered

Chosen Option : 2

Q.6 Calculate the simple interest on ₹36,000 at $8\frac{1}{3}\%$ per annum for a period of 7 months.

- Ans
- ☐ 1. ₹1,800
 - ☐ 2. ₹1,850
 - ☐ 3. ₹1,700
 - ☒ 4. ₹1,750

Question Type : MCQ
Question ID : 630680426366
Option 1 ID : 6306801663563
Option 2 ID : 6306801663564
Option 3 ID : 6306801663561
Option 4 ID : 6306801663562
Status : Answered
Chosen Option : 4

Q.7 A certain shopping site gave successive discounts of 20% and 30% on purses during a new year sale. What is the actual discount received by the customer?

- Ans
- ☒ 1. 44%
 - ☐ 2. 39%
 - ☐ 3. 47%
 - ☐ 4. 41%

Question Type : MCQ
Question ID : 630680464482
Option 1 ID : 6306801813963
Option 2 ID : 6306801813966
Option 3 ID : 6306801813964
Option 4 ID : 6306801813965
Status : Answered
Chosen Option : 1

Q.8 Find the greatest possible length which can be used to measure exactly the lengths 2 m 25 cm, 2 m 70 cm, 3 m 15 cm.

- Ans
- ☐ 1. 15 cm
 - ☐ 2. 25 cm
 - ☒ 3. 45 cm
 - ☐ 4. 35 cm

Question Type : MCQ
Question ID : 630680108117
Option 1 ID : 630680419544
Option 2 ID : 630680419546
Option 3 ID : 630680419545
Option 4 ID : 630680419547
Status : Answered
Chosen Option : 3

Q.9 Two trains start at the same time from Agra and Meerut and proceed towards each other at speeds of 16 km/h and 32 km/h, respectively. When they meet, it is found that one train has travelled 64 km more than the other. The distance between the two stations is:

- Ans** ☒ 1. 208km
☒ 2. 192km
☒ 3. 176km
☒ 4. 156km

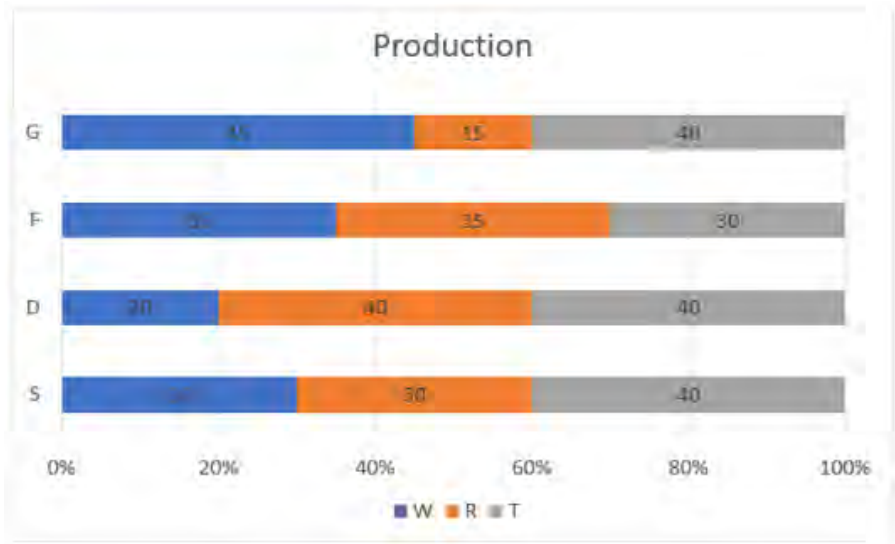
Question Type : **MCQ**
Question ID : **630680101826**
Option 1 ID : **630680395664**
Option 2 ID : **630680395666**
Option 3 ID : **630680395665**
Option 4 ID : **630680395667**
Status : **Not Attempted and Marked For Review**
Chosen Option : --

Q.10 The average weight of a family of five members (in kg) whose weights are 40 kg, 49 kg, 56 kg, 71 kg and 35 kg is:

- Ans** ☒ 1. 52.2
☒ 2. 51.2
☒ 3. 50.2
☒ 4. 49.2

Question Type : **MCQ**
Question ID : **630680551659**
Option 1 ID : **6306802156864**
Option 2 ID : **6306802156862**
Option 3 ID : **6306802156861**
Option 4 ID : **6306802156863**
Status : **Answered**
Chosen Option : **3**

Q.11 Study the given graph and answer the question that follows.
The graph shows the data of production of items: W, R and T by four companies: S, D, F and G as percentage of their total productions.



If the total productions of F and S are 2000 and 3000, respectively, the difference in the productions of R by these companies is:

- Ans ☒ 1. 200
☒ 2. 250
☒ 3. 150
☒ 4. 100

Question Type : MCQ
Question ID : 630680523797
Option 1 ID : 6306802047339
Option 2 ID : 6306802047342
Option 3 ID : 6306802047341
Option 4 ID : 6306802047340
Status : Answered
Chosen Option : 1

Q.12 Find the simple interest (in ₹) on ₹2000 as a sum borrowed at 6% per year rate of interest for 4 years.

- Ans ☒ 1. 440
☒ 2. 520
☒ 3. 420
☒ 4. 480

Question Type : MCQ
Question ID : 630680591870
Option 1 ID : 6306802315950
Option 2 ID : 6306802315948
Option 3 ID : 6306802315949
Option 4 ID : 6306802315947
Status : Answered
Chosen Option : 4

Q.13 The radius of a circle is equal to the side of a square. The perimeters of the square and circle are in the ratio 7 : 11, then the ratio of the areas will be:(Use $\pi = 22/7$)

- Ans ☐ 1. 14 : 22
☐ 2. 22 : 7
☐ 3. 22 : 14
☒ 4. 7 : 22

Question Type : MCQ
Question ID : 63068070806
Option 1 ID : 630680273839
Option 2 ID : 630680273841
Option 3 ID : 630680273840
Option 4 ID : 630680273838
Status : Answered
Chosen Option : 4

Q.14 Annu buys a dress from an online designer portal during a festival sale, marked at a price of ₹9,600. She gets a 15% festive discount and a further 10% discount on checkout as it is her first order from the site. How much did she actually pay for the dress?

- Ans ☐ 1. ₹7,934
☒ 2. ₹7,344
☐ 3. ₹7,554
☐ 4. ₹8,160

Question Type : MCQ
Question ID : 630680815837
Option 1 ID : 6306803196682
Option 2 ID : 6306803196684
Option 3 ID : 6306803196683
Option 4 ID : 6306803196681
Status : Answered
Chosen Option : 2

Q.15 A shopkeeper mixes three types of pulses costing ₹88/kg, ₹72/kg and ₹62/kg in the ratio of 5 : 2 : 3. The average cost (in ₹) of the mixture per kg is:

- Ans ☐ 1. 84
☒ 2. 77
☐ 3. 89
☐ 4. 97

Question Type : MCQ
Question ID : 630680402502
Option 1 ID : 6306801569568
Option 2 ID : 6306801569567
Option 3 ID : 6306801569569
Option 4 ID : 6306801569570
Status : Answered
Chosen Option : 2

Q.16 A shopkeeper sells one-fourth of his items at a loss of 12%, one-third of the remaining items at a profit of 44%, and the rest at a loss of 7%. What is his overall profit/loss percentage?

- Ans ☒ 1. 4.5% loss
☒ 2. 4.5% gain
☒ 3. 2% loss
☒ 4. 2% gain

Question Type : MCQ
Question ID : 630680135755
Option 1 ID : 630680525738
Option 2 ID : 630680525741
Option 3 ID : 630680525740
Option 4 ID : 630680525739
Status : Answered
Chosen Option : 2

Q.17 A thief Rohan is spotted by a policeman Ramesh from a distance of 250 m. When they see each other, they start running. How much distance is covered by Rohan, who is running at the speed of 20 km/h, before being caught by Ramesh, who is running at the speed of 25 km/h?

- Ans ☒ 1. 1 km
☒ 2. 2 km
☒ 3. 4 km
☒ 4. 3 km

Question Type : MCQ
Question ID : 630680131139
Option 1 ID : 630680507826
Option 2 ID : 630680507827
Option 3 ID : 630680507829
Option 4 ID : 630680507828
Status : Answered
Chosen Option : 1

Q.18 The internal and external diameters of a bowl in the shape of a hemisphere are 26.6 cm and 28 cm, respectively. What is the cost (in ₹, to the nearest rupee) of painting it, all over, at the rate of ₹3.75/cm²?

(Take $\pi = \frac{22}{7}$)

- Ans ☒ 1. 9,015
☒ 2. 9,380
☒ 3. 9,000
☒ 4. 8,950

Question Type : MCQ
Question ID : 630680387992
Option 1 ID : 6306801512585
Option 2 ID : 6306801512583
Option 3 ID : 6306801512582
Option 4 ID : 6306801512584
Status : Not Answered
Chosen Option : --

Q.19 The table below shows the number of students admitted in to a university for higher education in architecture, computer science and pure sciences programmes over the years from 2002 to 2005.

Year/Number of Students	Number of Students in Architecture Programme	Number of Students in Computer Science Programme	Number of Students in Pure Sciences Programme
2002	370	450	300
2003	650	600	550
2004	800	980	1020
2005	450	990	1400

For which programme and in which year were a lesser number of students admitted in to the university as compared to the number of students admitted in the previous year?

- Ans**  1. Pure Sciences Programme, 2003
 2. Architecture Programme, 2005
 3. Architecture Programme, 2004
 4. Computer Science Programme, 2004

Question Type : **MCQ**
Question ID : **630680523730**
Option 1 ID : **6306802047072**
Option 2 ID : **6306802047074**
Option 3 ID : **6306802047073**
Option 4 ID : **6306802047071**
Status : **Answered**
Chosen Option : **2**

Q.20 Find the cost of painting (in ₹) a solid metallic sphere of radius 12 cm at the rate of ₹7/cm² (use $\pi = \frac{22}{7}$).

- Ans**  1. 12689
 2. 11889
 3. 12672
 4. 11368

Question Type : **MCQ**
Question ID : **630680395102**
Option 1 ID : **6306801540679**
Option 2 ID : **6306801540677**
Option 3 ID : **6306801540678**
Option 4 ID : **6306801540676**
Status : **Answered**
Chosen Option : **3**

Section : Reasoning Ability and Problem Solving

Q.1 Find the missing term in the below series:
F, I, K, N, P, ?, U.

- Ans ☒ 1. S
☐ 2. R
☐ 3. T
☐ 4. V

Question Type : MCQ
Question ID : 630680401282
Option 1 ID : 6306801564934
Option 2 ID : 6306801564933
Option 3 ID : 6306801564935
Option 4 ID : 6306801564936
Status : Answered
Chosen Option : 1

Q.2 Read the given statements and conclusions carefully. Assuming that the information given in the statements is true, even if it appears to be at variance with commonly known facts, decide which of the given conclusions logically follow(s) from the statements.
Statements:
A. Some dogs are frogs.
B. Some swans are dogs.
Conclusions:
I. Some frogs are swans.
II. No dogs are swans.

- Ans ☐ 1. Both the conclusions follow.
☐ 2. Only conclusion II follows.
☐ 3. Only conclusion I follows.
☒ 4. None of the conclusions follow.

Question Type : MCQ
Question ID : 630680179923
Option 1 ID : 630680697482
Option 2 ID : 630680697481
Option 3 ID : 630680697480
Option 4 ID : 630680697483
Status : Answered
Chosen Option : 4

Q.3 In a certain code language, 'FISH' is coded as '8426' and 'SAND' is coded as '5749'. What is the code for 'S' in the given code language?

- Ans ☐ 1. 9
☐ 2. 2
☒ 3. 4
☐ 4. 5

Question Type : MCQ
Question ID : 630680422197
Option 1 ID : 6306801647227
Option 2 ID : 6306801647225
Option 3 ID : 6306801647224
Option 4 ID : 6306801647226
Status : Answered
Chosen Option : 3

Q.4 In a certain code language, 'BAKED' is coded as '02-01-11-05-04' and 'MORE' is coded as '13-15-18-05'. How is 'EXTRA' coded in the given language?

- Ans**
- ☒ 1. 05-24-20-18-01
 - ☐ 2. 05-23-20-17-01
 - ☐ 3. 04-23-20-16-02
 - ☐ 4. 04-24-20-18-01

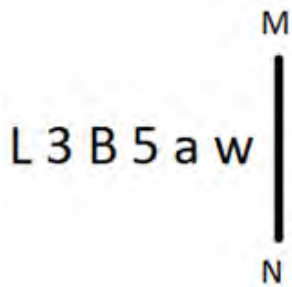
Question Type : **MCQ**
Question ID : **630680439091**
Option 1 ID : **6306801714176**
Option 2 ID : **6306801714177**
Option 3 ID : **6306801714179**
Option 4 ID : **6306801714178**
Status : **Answered**
Chosen Option : **1**

Q.5 Six players Jadeja, Ashwin, Karthik, Murli, Sarfaraz and Virat are sitting around a circular table, facing the centre (but not necessarily in the same order). Virat is sitting to the immediate right of Jadeja. Only Sarfaraz is sitting between Virat and Murli. Jadeja is an immediate neighbour of Ashwin. Who is immediate neighbour of both Sarfaraz and Jadeja?

- Ans**
- ☐ 1. Karthik
 - ☐ 2. Murli
 - ☐ 3. Ashwin
 - ☒ 4. Virat

Question Type : **MCQ**
Question ID : **630680387050**
Option 1 ID : **6306801508911**
Option 2 ID : **6306801508912**
Option 3 ID : **6306801508910**
Option 4 ID : **6306801508913**
Status : **Answered**
Chosen Option : **4**

Q.6 Select the correct mirror image of the given figure when the mirror is placed at MN as shown below.



- Ans
- ☒ 1. w 6 2 3 B J
 - ☒ 2. w e 2 B 3 L
 - ☒ 3. w e 2 B 3 L
 - ☒ 4. w 6 2 3 B J

Question Type : MCQ
Question ID : 630680525243
Option 1 ID : 6306802053056
Option 2 ID : 6306802053059
Option 3 ID : 6306802053057
Option 4 ID : 6306802053058
Status : Answered
Chosen Option : 4

Q.7 KL42 is related to PQ50 in a certain way. In the same way, RS52 is related to WX60. To which of the following is DE62 related, following the same logic?

- Ans
- ☒ 1. IG17
 - ☒ 2. JI70
 - ☒ 3. IK17
 - ☒ 4. IJ70

Question Type : MCQ
Question ID : 6306801108789
Option 1 ID : 6306804355705
Option 2 ID : 6306804355703
Option 3 ID : 6306804355704
Option 4 ID : 6306804355702
Status : Answered
Chosen Option : 4

Q.8 UMSO is related to RJPL in a certain way based on the English alphabetical order. In the same way, QIOK is related to NFLH. To which of the following is MEKG related, following the same logic?

Ans  1. JBHD

 2. JBDH

 3. BJDH

 4. BJHD

Question Type : MCQ

Question ID : 630680436058

Option 1 ID : 6306801702173

Option 2 ID : 6306801702174

Option 3 ID : 6306801702176

Option 4 ID : 6306801702175

Status : Answered

Chosen Option : 1

Q.9 M, N, O, P, Q, R and S are sitting around a circular table facing the centre (but not necessarily in the same order). Q sits second to the right of M. P sits third to the left of M. N is an immediate neighbour of S and P. R is not an immediate neighbour of P. Who sits third to the left of R ?

Ans  1. O

 2. M

 3. N

 4. S

Question Type : MCQ

Question ID : 630680401315

Option 1 ID : 6306801565063

Option 2 ID : 6306801565062

Option 3 ID : 6306801565064

Option 4 ID : 6306801565061

Status : Answered

Chosen Option : 3

Q.10 Three statements are given, followed by two conclusions numbered 1 and 2. Assuming the statements to be true, even if they seem to be at variance with commonly known facts, decide which of the conclusions logically follow(s) from the statements.

Statements:

All Mangoes are Kiwis

All Kiwis are Guavas

No Guava is an Apple

Conclusions:

1. All Apples are Mangoes

2. Some Guavas are Apples

- Ans**
- ☒ 1. Only conclusion 2 follows
 - ☒ 2. Both conclusions 1 and 2 follow
 - ☒ 3. Only conclusion 1 follows
 - ☒ 4. Neither conclusion 1 nor 2 follows

Question Type : **MCQ**

Question ID : **630680519823**

Option 1 ID : **6306802031717**

Option 2 ID : **6306802031718**

Option 3 ID : **6306802031716**

Option 4 ID : **6306802031719**

Status : **Answered**

Chosen Option : **4**

Q.11 Select the figure from among the given options that can replace the question mark (?) in the following series and complete the pattern.

L O V E	E ♥ O L	△ O ♥ V	V L O △	?
♥ △	△ V	L E	E ♥	

Ans

✓ 1.

E O L ♥
△ V

✗ 2.

E O L V
♥ △

✗ 3.

♥ O L E
△ V

✗ 4.


△ O L ♥
V E

Question Type : MCQ
Question ID : 630680441091
Option 1 ID : 6306801722021
Option 2 ID : 6306801722018
Option 3 ID : 6306801722019
Option 4 ID : 6306801722020
Status : Answered
Chosen Option : 1

Q.12 146 is related to 208.4 following a certain logic. Following the same logic, 112 is related to 174.4. To which of the following is 135 related, following the same logic?

(NOTE: Operations should be performed on the whole numbers, without breaking down the numbers into its constituent digits. E.g. 13 – Operations on 13 such as adding/subtracting/multiplying etc. to 13 can be performed. Breaking down 13 into 1 and 3 and then performing mathematical operations on 1 and 3 is not allowed.)

Ans  1. 197.4

 2. 188.4

 3. 192.4

 4. 179.4

Question Type : **MCQ**

Question ID : **630680436302**

Option 1 ID : **6306801703151**

Option 2 ID : **6306801703150**

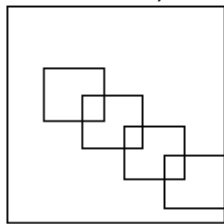
Option 3 ID : **6306801703152**

Option 4 ID : **6306801703149**

Status : **Answered**

Chosen Option : **1**

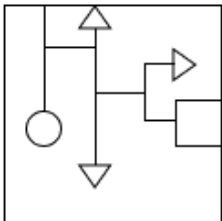
Q.13 Select the option figure in which the given figure (X) is embedded as its part (rotation is NOT allowed).



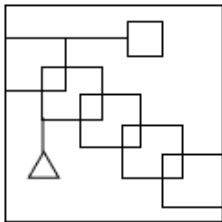
(X)

Ans

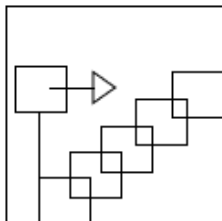
1.



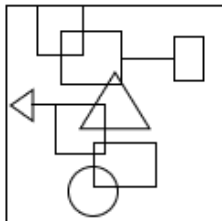
2.



3.



4.



Question Type : MCQ
Question ID : 630680487617
Option 1 ID : 6306801904538
Option 2 ID : 6306801904541
Option 3 ID : 6306801904539
Option 4 ID : 6306801904540
Status : Answered
Chosen Option : 2

Q.14 What should come in place of '?' in the given series?

13, 24, 75, 296, 1485, ?

Ans ☒ 1. 7430

☒ 2. 8916

☒ 3. 8904

☒ 4. 7420

Question Type : MCQ

Question ID : 630680531535

Option 1 ID : 6306802077934

Option 2 ID : 6306802077933

Option 3 ID : 6306802077936

Option 4 ID : 6306802077935

Status : Answered

Chosen Option : 3

Q.15 What will come in the place of the question mark (?) in the following equation if '+' and '-' are interchanged and 'x' and '÷' are interchanged?

$75 \div 27 \times 27 + 93 - 20 = ?$

Ans ☒ 1. 2

☒ 2. 3

☒ 3. 5

☒ 4. 4

Question Type : MCQ

Question ID : 630680379286

Option 1 ID : 6306801478187

Option 2 ID : 6306801478188

Option 3 ID : 6306801478190

Option 4 ID : 6306801478189

Status : Answered

Chosen Option : 1

Q.16 In a certain code language, 'GAVE' is coded as '7485' and 'CAGE' is coded as '4589'. What is the code for 'C' in that language?

Ans ☒ 1. 9

☒ 2. 8

☒ 3. 7

☒ 4. 5

Question Type : MCQ

Question ID : 630680465154

Option 1 ID : 6306801816651

Option 2 ID : 6306801816654

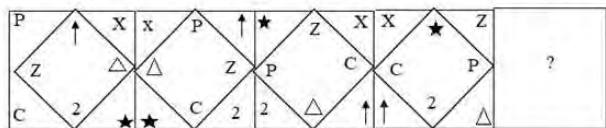
Option 3 ID : 6306801816652

Option 4 ID : 6306801816653

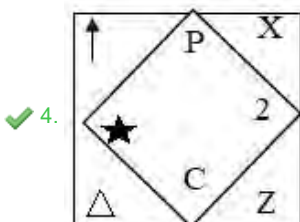
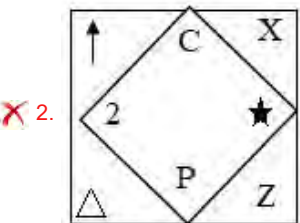
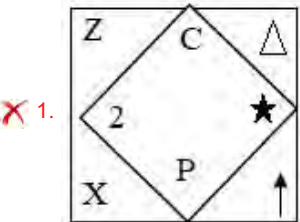
Status : Answered

Chosen Option : 1

Q.17 Select the figure from among the given options that can replace the question mark (?) in the following series.



Ans



Question Type : MCQ

Question ID : 63068057475

Option 1 ID : 630680221745

Option 2 ID : 630680221742

Option 3 ID : 630680221743

Option 4 ID : 630680221744

Status : Answered

Chosen Option : 4

Q.18 Select the set in which the numbers are related in the same way as are the numbers of the following sets.

(10, 8, 65)

(16, 6, 81)

(NOTE: Operations should be performed on the whole numbers, without breaking down the numbers into its constituent digits. E.g. 13 – Operations on 13 such as adding /deleting /multiplying etc. to 13 can be performed. Breaking down 13 into 1 and 3 and then performing mathematical operations on 1 and 3 is not allowed.)

Ans ☒ 1. (4, 9, 16)

☒ 2. (12, 4, 114)

☒ 3. (7, 5, 20)

☒ 4. (5, 15, 65)

Question Type : MCQ

Question ID : 630680388382

Option 1 ID : 6306801514049

Option 2 ID : 6306801514046

Option 3 ID : 6306801514047

Option 4 ID : 6306801514048

Status : Not Attempted and
Marked For Review

Chosen Option : --

Q.19 In a certain code language, 'GAME' is coded as '5279' and 'META' is coded as '7942'. What is the code for 'T' in that language?

Ans ☒ 1. 5

☒ 2. 9

☒ 3. 7

☒ 4. 4

Question Type : MCQ

Question ID : 630680379159

Option 1 ID : 6306801477686

Option 2 ID : 6306801477684

Option 3 ID : 6306801477685

Option 4 ID : 6306801477683

Status : Answered

Chosen Option : 4

Q.20 What will come in place of the question mark (?) in the following equation if '+' and '-' are interchanged and 'x' and '÷' are interchanged?
 $24 \div 6 + 18 \times 9 - 2 = ?$

Ans ☒ 1. 122

☒ 2. 155

☒ 3. 144

☒ 4. 166

Question Type : MCQ

Question ID : 630680378703

Option 1 ID : 6306801475859

Option 2 ID : 6306801475861

Option 3 ID : 6306801475860

Option 4 ID : 6306801475862

Status : Answered

Chosen Option : 3

Section : General Awareness

Q.1 How many artists are selected for the one-time Sangeet Natak Akademi Amrit Award, 2022?

- Ans ☒ 1. 75
☒ 2. 60
☒ 3. 86
☒ 4. 100

Question Type : MCQ
Question ID : 630680511998
Option 1 ID : 6306802000963
Option 2 ID : 6306802000962
Option 3 ID : 6306802000964
Option 4 ID : 6306802000965
Status : Not Answered
Chosen Option : --

Q.2 Why will a person weigh more at the north or south pole?

- Ans ☒ 1. Due to variation in centripetal force of earth with altitude
☒ 2. Due to Earth's distance from the sun
☒ 3. Due to variation in centripetal force of earth with latitude
☒ 4. Due to variation in centrifugal force of earth with latitude

Question Type : MCQ
Question ID : 630680134647
Option 1 ID : 630680521407
Option 2 ID : 630680521408
Option 3 ID : 630680521406
Option 4 ID : 630680521409
Status : Answered
Chosen Option : 3

Q.3 Which festival is celebrated as the birth anniversary of Prophet Muhammad?

- Ans ☒ 1. Eid-ul-fitr
☒ 2. Milad-un-nabi
☒ 3. Id-ul-zuha
☒ 4. Shab-i-barat

Question Type : MCQ
Question ID : 630680449832
Option 1 ID : 6306801756497
Option 2 ID : 6306801756496
Option 3 ID : 6306801756498
Option 4 ID : 6306801756499
Status : Answered
Chosen Option : 1

Q.4 Which of the following statements is/are true about the Cholas?

- 1 The capital of the Chola kingdom was Tanjore.
- 2 Vikram Chola had in his veins the blood of the Cholas and Eastern Chalukyas.
- 3 Rajendra I Chola is known as Gangaikonda Chola.

Ans ☒ 1. Only 2 and 3
☒ 2. Only 1 and 3
☒ 3. Only 1 and 2
☒ 4. All 1, 2 and 3

Question Type : MCQ
Question ID : 630680183055
Option 1 ID : 630680709298
Option 2 ID : 630680709299
Option 3 ID : 630680709297
Option 4 ID : 630680709300
Status : Answered
Chosen Option : 1

Q.5 Which Indian state's cabinet approved the proposal for recommending the inclusion of the Kui language in the eighth schedule in July 2023?

Ans ☒ 1. Odisha
☒ 2. Tamil Nadu
☒ 3. Karnataka
☒ 4. West Bengal

Question Type : MCQ
Question ID : 630680798959
Option 1 ID : 6306803130634
Option 2 ID : 6306803130635
Option 3 ID : 6306803130636
Option 4 ID : 6306803130637
Status : Not Answered
Chosen Option : --

Q.6 In which of the following dance performance is the main percussion instrument Edakka used?

Ans ☒ 1. Mohiniattam
☒ 2. Bharatanatyam
☒ 3. Odissi
☒ 4. Kathak

Question Type : MCQ
Question ID : 630680545595
Option 1 ID : 6306802132973
Option 2 ID : 6306802132972
Option 3 ID : 6306802132974
Option 4 ID : 6306802132975
Status : Answered
Chosen Option : 1

Q.7 According to the census of India 2011, which union territory of India has the highest literacy rate?

- Ans** ☒ 1. Chandigarh
☒ 2. Delhi
☒ 3. Puducherry
☒ 4. Lakshadweep

Question Type : **MCQ**
Question ID : **630680718955**
Option 1 ID : **6306802817295**
Option 2 ID : **6306802817292**
Option 3 ID : **6306802817293**
Option 4 ID : **6306802817294**
Status : **Answered**
Chosen Option : **4**

Q.8 For most of the ecosystem, what is the primary source of energy?

- Ans** ☒ 1. Geothermal energy
☒ 2. Wind
☒ 3. Water
☒ 4. Sunlight

Question Type : **MCQ**
Question ID : **630680681859**
Option 1 ID : **6306802670615**
Option 2 ID : **6306802670614**
Option 3 ID : **6306802670613**
Option 4 ID : **6306802670612**
Status : **Answered**
Chosen Option : **1**

Q.9 Major Dhyan Chand Khel Ratna Award is given for the spectacular and most outstanding performance in the field of sports by a sportsperson over a period of the previous four years. In 2021, the awardee for para shooting was:

- Ans** ☒ 1. Avani Lekhara
☒ 2. Anju Bobby George
☒ 3. Neeraj Chopra
☒ 4. Chanu Saikhom Mirabai

Question Type : **MCQ**
Question ID : **630680184602**
Option 1 ID : **630680715468**
Option 2 ID : **630680715467**
Option 3 ID : **630680715466**
Option 4 ID : **630680715465**
Status : **Answered**
Chosen Option : **1**

Q.10 In which year did India host the FIFA U 17 Women's Football World Cup?

Ans ☒ 1. 2022

☐ 2. 2021

☐ 3. 2019

☐ 4. 2020

Question Type : MCQ

Question ID : 630680172194

Option 1 ID : 630680667215

Option 2 ID : 630680667214

Option 3 ID : 630680667212

Option 4 ID : 630680667213

Status : Not Answered

Chosen Option : --

Q.11 Which local storm is also known as 'Kalbaisakhi'?

Ans ☒ 1. Nor Westers

☐ 2. Loo

☐ 3. Mango Shower

☐ 4. Blossom Shower

Question Type : MCQ

Question ID : 630680476089

Option 1 ID : 6306801859634

Option 2 ID : 6306801859633

Option 3 ID : 6306801859632

Option 4 ID : 6306801859631

Status : Answered

Chosen Option : 3

Q.12 Which poet composed the Allahabad Prashasti of Samudragupta?

Ans ☒ 1. Harisena

☐ 2. Vatsbhathi

☐ 3. Banabhatta

☐ 4. Vasul

Question Type : MCQ

Question ID : 630680433794

Option 1 ID : 6306801693141

Option 2 ID : 6306801693140

Option 3 ID : 6306801693142

Option 4 ID : 6306801693139

Status : Answered

Chosen Option : 1

Q.13 Which of the following sessions of the Indian National Congress was headed by Sarojini Naidu?

- Ans ☐ 1. Karachi, 1931
☐ 2. Lahore, 1929
☐ 3. Madras, 1927
☒ 4. Kanpur, 1925

Question Type : MCQ

Question ID : 630680275703

Option 1 ID : 6306801071326

Option 2 ID : 6306801071325

Option 3 ID : 6306801071324

Option 4 ID : 6306801071323

Status : Not Answered

Chosen Option : --

Q.14 In which of the following types of regions, is the maximum temperature variation observed between a day and the same night?

- Ans ☐ 1. Peninsula
☒ 2. Desert
☐ 3. Coastal area
☐ 4. Island

Question Type : MCQ

Question ID : 630680629848

Option 1 ID : 6306802465293

Option 2 ID : 6306802465290

Option 3 ID : 6306802465292

Option 4 ID : 6306802465291

Status : Answered

Chosen Option : 2

Q.15 The Government of India in collaboration with _____ has launched the Skills on Wheels mission in Oct 2023 for equipping rural youth with employable skills.

- Ans ☐ 1. HDFC Bank
☐ 2. ICICI Bank
☐ 3. NABARD
☒ 4. IndusInd Bank

Question Type : MCQ

Question ID : 630680481529

Option 1 ID : 6306801880608

Option 2 ID : 6306801880611

Option 3 ID : 6306801880609

Option 4 ID : 6306801880610

Status : Not Answered

Chosen Option : --

Q.16 During the framing of the Indian Constitution, the Constituent Assembly held a total of eleven sessions, with sittings spread over for how many days?

- Ans ☐ 1. 180
☐ 2. 132
☒ 3. 165
☐ 4. 115

Question Type : MCQ
Question ID : 630680493458
Option 1 ID : 6306801927574
Option 2 ID : 6306801927572
Option 3 ID : 6306801927573
Option 4 ID : 6306801927571
Status : Answered
Chosen Option : 3

Q.17 What is the tenure of a Governor?

- Ans ☐ 1. 2 years
☐ 2. 6 years
☒ 3. 5 years
☐ 4. 10 Years

Question Type : MCQ
Question ID : 630680511445
Option 1 ID : 6306801998910
Option 2 ID : 6306801998912
Option 3 ID : 6306801998911
Option 4 ID : 6306801998913
Status : Answered
Chosen Option : 4

Q.18 Which of the following sectors engaged the largest percentage of women workers in the year 2019-2020?

- Ans ☐ 1. Service
☒ 2. Agriculture
☐ 3. Industry
☐ 4. Mining

Question Type : MCQ
Question ID : 630680510907
Option 1 ID : 6306801996761
Option 2 ID : 6306801996758
Option 3 ID : 6306801996759
Option 4 ID : 6306801996760
Status : Answered
Chosen Option : 2

Q.19 Which substance is commonly added to tap water to make it safe for drinking by killing harmful microorganisms?

- Ans ☐ 1. Fluoride
- ☐ 2. Calcium
- ☐ 3. Iron
- ☒ 4. Chlorine

Question Type : MCQ
Question ID : 630680540602
Option 1 ID : 6306802113485
Option 2 ID : 6306802113484
Option 3 ID : 6306802113486
Option 4 ID : 6306802113483
Status : Answered
Chosen Option : 4

Q.20 Who appointed the 'Hunter Commission' for Educational Reforms in 1882?

- Ans ☒ 1. Lord Ripon
- ☐ 2. John Lawrence
- ☐ 3. Lord Ellenborough
- ☐ 4. Robert Lytton

Question Type : MCQ
Question ID : 630680511602
Option 1 ID : 6306801999530
Option 2 ID : 6306801999532
Option 3 ID : 6306801999533
Option 4 ID : 6306801999531
Status : Not Answered
Chosen Option : --

Q.21 Which famous monument of Vijayapura has a Whispering Gallery, where subtle sounds can be heard clearly even from a distance of 37 metres?

- Ans ☐ 1. Gagan Mahal
- ☐ 2. Saath Kabar
- ☒ 3. Gol Gumbaz
- ☐ 4. Upli Buruj

Question Type : MCQ
Question ID : 630680546758
Option 1 ID : 6306802137602
Option 2 ID : 6306802137604
Option 3 ID : 6306802137603
Option 4 ID : 6306802137605
Status : Not Answered
Chosen Option : --

Q.22 The concept of the Self-Help Group Bank Linkage Program was introduced by:

Ans ☒ 1. NABARD

☒ 2. SBI

☒ 3. SIDBI

☒ 4. RBI

Question Type : MCQ

Question ID : 630680311983

Option 1 ID : 6306801213837

Option 2 ID : 6306801213838

Option 3 ID : 6306801213839

Option 4 ID : 6306801213840

Status : Answered

Chosen Option : 3

Q.23 The title of the autobiography of famous cricketer of Pakistan Imran Khan is:

Ans ☒ 1. All Round View

☒ 2. Goal

☒ 3. Game Changer

☒ 4. My Fight / Your Fight

Question Type : MCQ

Question ID : 630680409455

Option 1 ID : 6306801596649

Option 2 ID : 6306801596651

Option 3 ID : 6306801596652

Option 4 ID : 6306801596650

Status : Answered

Chosen Option : 1

Q.24 _____ was an Indian mandolinist who was a master composer of the Carnatic style of classical music.

Ans ☒ 1. Narasimhan Ravikiran

☒ 2. R Prasanna

☒ 3. Uppalapu Srinivas

☒ 4. Kunnakudi Vaidyanathan

Question Type : MCQ

Question ID : 630680481901

Option 1 ID : 6306801882091

Option 2 ID : 6306801882088

Option 3 ID : 6306801882089

Option 4 ID : 6306801882090

Status : Answered

Chosen Option : 3

Q.25 Which region in India has the highest concentration of Iron and Steel Industry?

- Ans ☒ 1. Deccan Plateau
☒ 2. Telangana Plateau
☒ 3. Chotanagpur plateau
☒ 4. Aravali region

Question Type : MCQ

Question ID : 630680511306

Option 1 ID : 6306801998356

Option 2 ID : 6306801998357

Option 3 ID : 6306801998355

Option 4 ID : 6306801998354

Status : Answered

Chosen Option : 3

Section : English Language and Comprehension

Q.1 In the following sentence the underlined part contains an error. Alternatives to the underlined part are given as options.

Select the correct alternative.

Poverty is the urgent concern in India today.

- Ans ☒ 1. more urgent
☒ 2. most urgent
☒ 3. urgenter
☒ 4. urgentest

Question Type : MCQ

Question ID : 630680514708

Option 1 ID : 6306802011460

Option 2 ID : 6306802011458

Option 3 ID : 6306802011459

Option 4 ID : 6306802011457

Status : Answered

Chosen Option : 2

Q.2 Select the INCORRECTLY spelt word..

- Ans ☒ 1. Persevrance
☒ 2. Exaggerate
☒ 3. Accommodate
☒ 4. Conscientiousness

Question Type : MCQ

Question ID : 630680587213

Option 1 ID : 6306802297387

Option 2 ID : 6306802297385

Option 3 ID : 6306802297384

Option 4 ID : 6306802297386

Status : Answered

Chosen Option : 1

Q.3 The following sentence has been divided into parts. One of them may contain an error.
Select the part that contains the error from the given options. If you don't find any error, mark 'No error' as your answer.

Manoj has a bigger / farmhouse of one hundred / hectares near the city.

- Ans**
- ☒ 1. No error
 - ☒ 2. hectares near the city.
 - ☒ 3. farmhouse of one hundred
 - ☒ 4. Manoj has a bigger

Question Type : **MCQ**
Question ID : **630680629323**
Option 1 ID : **6306802463377**
Option 2 ID : **6306802463376**
Option 3 ID : **6306802463375**
Option 4 ID : **6306802463374**
Status : **Answered**
Chosen Option : **2**

Q.4 Select the most appropriate synonym of the given word.
Destroy

- Ans**
- ☒ 1. Decline
 - ☒ 2. Delight
 - ☒ 3. Ruin
 - ☒ 4. Fabricate

Question Type : **MCQ**
Question ID : **630680726550**
Option 1 ID : **6306802847206**
Option 2 ID : **6306802847209**
Option 3 ID : **6306802847207**
Option 4 ID : **6306802847208**
Status : **Answered**
Chosen Option : **3**

Q.5 Select the most appropriate meaning of the given idiom.
My hands are full

- Ans**
- ☒ 1. To be very busy
 - ☒ 2. To go directly towards something
 - ☒ 3. To panic
 - ☒ 4. To dislike someone

Question Type : **MCQ**
Question ID : **630680517541**
Option 1 ID : **6306802022562**
Option 2 ID : **6306802022561**
Option 3 ID : **6306802022560**
Option 4 ID : **6306802022563**
Status : **Answered**
Chosen Option : **1**

Q.6 Select the INCORRECTLY spelt word.

- Ans ☒ 1. Hypocrisy
☒ 2. Cruelly
☒ 3. Luggage
☒ 4. Secresy

Question Type : MCQ

Question ID : 630680470367

Option 1 ID : 6306801837224

Option 2 ID : 6306801837225

Option 3 ID : 6306801837223

Option 4 ID : 6306801837226

Status : Answered

Chosen Option : 4

Q.7 Select the correctly spelt word to fill in the blank and make the sentence meaningful.

Before retiring, Kaul had been teaching physics at the university for three _____.

- Ans ☒ 1. decimals
☒ 2. decadents
☒ 3. edecamals
☒ 4. decades

Question Type : MCQ

Question ID : 6306801046667

Option 1 ID : 6306804108796

Option 2 ID : 6306804108794

Option 3 ID : 6306804108795

Option 4 ID : 6306804108793

Status : Answered

Chosen Option : 4

Q.8 Select the most appropriate word segment that can replace the underlined part in the sentence.

The two thieves divided the looted money with themselves.

- Ans ☒ 1. of themselves
☒ 2. between themselves
☒ 3. among themselves
☒ 4. off themselves

Question Type : MCQ

Question ID : 630680551435

Option 1 ID : 6306802155968

Option 2 ID : 6306802155965

Option 3 ID : 6306802155967

Option 4 ID : 6306802155966

Status : Answered

Chosen Option : 3

Q.9 Select the most appropriate option to fill in the blank and complete the given idiom.

That's great! You keep everything under your _____.

- Ans ☒ 1. eyes
☒ 2. hands
☒ 3. legs
☒ 4. thumb

Question Type : MCQ
Question ID : 630680805899
Option 1 ID : 6306803157259
Option 2 ID : 6306803157258
Option 3 ID : 6306803157256
Option 4 ID : 6306803157257
Status : Answered
Chosen Option : 1

Q.10 Select the most appropriate option that can substitute the underlined segment in the given sentence.

Autumn leaves shuffled beneath him as he wandered through the quiet forest.

- Ans ☒ 1. moved to another place
☒ 2. died over
☒ 3. crushed around
☒ 4. rustled underfoot

Question Type : MCQ
Question ID : 630680550353
Option 1 ID : 6306802151685
Option 2 ID : 6306802151686
Option 3 ID : 6306802151684
Option 4 ID : 6306802151683
Status : Answered
Chosen Option : 4

Q.11 The following sentence has been split into four segments. Identify the segment that contains a grammatical error.
They worked / very hardly / on their project / for several weeks.

- Ans ☒ 1. for several weeks
☒ 2. very hardly
☒ 3. on their project
☒ 4. They worked

Question Type : MCQ
Question ID : 630680726468
Option 1 ID : 6306802846881
Option 2 ID : 6306802846879
Option 3 ID : 6306802846880
Option 4 ID : 6306802846878
Status : Answered
Chosen Option : 2

Q.12 The following sentence has been split into four segments. Identify the segment that contains a grammatical error.

His artwork is / more intricate / than any artist / in the gallery.

Ans ☒ 1. than any artist

☐ 2. His artwork is

☐ 3. in the gallery

☐ 4. more intricate

Question Type : MCQ

Question ID : 630680726467

Option 1 ID : 6306802846876

Option 2 ID : 6306802846874

Option 3 ID : 6306802846877

Option 4 ID : 6306802846875

Status : Answered

Chosen Option : 1

Q.13 Select the option that can be used as a one-word substitute for the given group of words.

The land that is best suitable for growing crops

Ans ☐ 1. Rustic

☐ 2. Barren

☒ 3. Arable

☐ 4. Fruitful

Question Type : MCQ

Question ID : 630680435204

Option 1 ID : 6306801698741

Option 2 ID : 6306801698740

Option 3 ID : 6306801698738

Option 4 ID : 6306801698739

Status : Answered

Chosen Option : 3

Q.14 In the following sentence the underlined part contains as error. Alternatives to the underlined part are given as options. Select the correct alternative.

The water near the coast was shallower and clean.

Ans ☐ 1. more shallow

☐ 2. the shallowest

☒ 3. shallow

☐ 4. shallowest

Question Type : MCQ

Question ID : 630680514726

Option 1 ID : 6306802011530

Option 2 ID : 6306802011532

Option 3 ID : 6306802011531

Option 4 ID : 6306802011529

Status : Answered

Chosen Option : 3

Q.15 Select the most appropriate synonym of the given word.
Appease

- Ans** ☒ 1. Aggravate
☒ 2. Force
☒ 3. Appeal
☒ 4. Pacify

Question Type : **MCQ**
Question ID : **630680726519**
Option 1 ID : **6306802847084**
Option 2 ID : **6306802847083**
Option 3 ID : **6306802847082**
Option 4 ID : **6306802847085**
Status : **Answered**
Chosen Option : **4**

Q.16 Select the most appropriate synonym of the given word.
Whim

- Ans** ☒ 1. Factualness
☒ 2. Bloodiness
☒ 3. Fancy
☒ 4. Antiquity

Question Type : **MCQ**
Question ID : **630680430574**
Option 1 ID : **6306801680321**
Option 2 ID : **6306801680320**
Option 3 ID : **6306801680318**
Option 4 ID : **6306801680319**
Status : **Answered**
Chosen Option : **3**

Q.17 Select the most appropriate option to fill in the blank.

The _____ of the novel kept me hooked from the beginning to the end.

- Ans** ☒ 1. archaic
☒ 2. settlement
☒ 3. plot
☒ 4. orchestra

Question Type : **MCQ**
Question ID : **630680488658**
Option 1 ID : **6306801908649**
Option 2 ID : **6306801908648**
Option 3 ID : **6306801908650**
Option 4 ID : **6306801908647**
Status : **Answered**
Chosen Option : **3**

Q.18 Select the most appropriate option to fill in the blank.

I am not going to pay a _____ for this broken CD.

- Ans ☒ 1. cent
☐ 2. send
☐ 3. sent
☐ 4. scent

Question Type : MCQ
Question ID : 630680517512
Option 1 ID : 6306802022446
Option 2 ID : 6306802022447
Option 3 ID : 6306802022444
Option 4 ID : 6306802022445
Status : Answered
Chosen Option : 1

Q.19 Select the most appropriate ANTONYM of the given word.

Benevolent

- Ans ☐ 1. Eminent
☐ 2. Opulent
☒ 3. Malevolent
☐ 4. Violent

Question Type : MCQ
Question ID : 630680436159
Option 1 ID : 6306801702579
Option 2 ID : 6306801702580
Option 3 ID : 6306801702578
Option 4 ID : 6306801702577
Status : Answered
Chosen Option : 3

Q.20 The given sentence is divided into four segments. Select the option that has the segment with a grammatical error.
He has / no / influence about / me.

- Ans ☐ 1. no
☐ 2. me.
☒ 3. influence about
☐ 4. he has

Question Type : MCQ
Question ID : 630680192394
Option 1 ID : 630680746166
Option 2 ID : 630680746168
Option 3 ID : 630680746167
Option 4 ID : 630680746165
Status : Answered
Chosen Option : 3

Comprehension:

In the following passage, some words have been deleted. Read the passage carefully and select the most appropriate option to fill in each blank.

The eye of an ostrich is larger than its brain. Of all birds, ostriches have the 1. _____ eyes. Their eyes are the size of a pool ball, measuring around 2 inches in diameter. Their size is five times greater than that of human eyes. Ostriches have excellent vision, so their enormous eyes aren't just for show. Because of their height and keen 2. _____, the birds can see well over great distances, enabling them to identify potential 3. _____ before they approach.

In general, compared to mammals of comparable size, birds often have smaller brains. Ostrich brains are approximately 1.5 inches in width, the study found. Additionally, their average brain weight is almost 17 times lower than that of the three other 4. _____. When comparing the brain-to-body weight ratio of the other birds, the ostrich's brain was lighter than their body weight.

Some other facts concerning these birds are what set them apart. All other birds have three or four toes; this magnificent creature has only two. Ostriches bend their knees in a forward orientation; thus, they kick forward rather than backward. Furthermore, ostriches do not require water because they produce some of it internally and obtain the 5. _____ from the plants they consume.

SubQuestion No : 21

Q.21 Select the most appropriate option for blank 1.

- Ans ☒ 1. big
☒ 2. more big
☒ 3. bigger
☒ 4. biggest

Question Type : **MCQ**
Question ID : **630680551415**
Option 1 ID : **6306802155891**
Option 2 ID : **6306802155892**
Option 3 ID : **6306802155890**
Option 4 ID : **6306802155889**
Status : **Answered**
Chosen Option : **4**

Comprehension:

In the following passage, some words have been deleted. Read the passage carefully and select the most appropriate option to fill in each blank.

The eye of an ostrich is larger than its brain. Of all birds, ostriches have the 1. _____ eyes. Their eyes are the size of a pool ball, measuring around 2 inches in diameter. Their size is five times greater than that of human eyes. Ostriches have excellent vision, so their enormous eyes aren't just for show. Because of their height and keen 2. _____, the birds can see well over great distances, enabling them to identify potential 3. _____ before they approach.

In general, compared to mammals of comparable size, birds often have smaller brains. Ostrich brains are approximately 1.5 inches in width, the study found. Additionally, their average brain weight is almost 17 times lower than that of the three other 4. _____. When comparing the brain-to-body weight ratio of the other birds, the ostrich's brain was lighter than their body weight.

Some other facts concerning these birds are what set them apart. All other birds have three or four toes; this magnificent creature has only two. Ostriches bend their knees in a forward orientation; thus, they kick forward rather than backward. Furthermore, ostriches do not require water because they produce some of it internally and obtain the 5. _____ from the plants they consume.

SubQuestion No : 22

Q.22 Select the most appropriate option for blank 2.

- Ans  1. illusion
-  2. allusion
-  3. vision
-  4. delusion

Question Type : **MCQ**

Question ID : **630680551416**

Option 1 ID : **6306802155895**

Option 2 ID : **6306802155896**

Option 3 ID : **6306802155894**

Option 4 ID : **6306802155893**

Status : **Answered**

Chosen Option : **3**

Comprehension:

In the following passage, some words have been deleted. Read the passage carefully and select the most appropriate option to fill in each blank.

The eye of an ostrich is larger than its brain. Of all birds, ostriches have the 1. _____ eyes. Their eyes are the size of a pool ball, measuring around 2 inches in diameter. Their size is five times greater than that of human eyes. Ostriches have excellent vision, so their enormous eyes aren't just for show. Because of their height and keen 2. _____, the birds can see well over great distances, enabling them to identify potential 3. _____ before they approach.

In general, compared to mammals of comparable size, birds often have smaller brains. Ostrich brains are approximately 1.5 inches in width, the study found. Additionally, their average brain weight is almost 17 times lower than that of the three other 4. _____. When comparing the brain-to-body weight ratio of the other birds, the ostrich's brain was lighter than their body weight.

Some other facts concerning these birds are what set them apart. All other birds have three or four toes; this magnificent creature has only two. Ostriches bend their knees in a forward orientation; thus, they kick forward rather than backward. Furthermore, ostriches do not require water because they produce some of it internally and obtain the 5. _____ from the plants they consume.

SubQuestion No : 23

Q.23 Select the most appropriate option for blank 3.

- Ans ☒ 1. tours
☒ 2. victims
☒ 3. quarry
☒ 4. predators

Question Type : **MCQ**

Question ID : **630680551417**

Option 1 ID : **6306802155897**

Option 2 ID : **6306802155899**

Option 3 ID : **6306802155898**

Option 4 ID : **6306802155900**

Status : **Answered**

Chosen Option : **4**

Comprehension:

In the following passage, some words have been deleted. Read the passage carefully and select the most appropriate option to fill in each blank.

The eye of an ostrich is larger than its brain. Of all birds, ostriches have the 1. _____ eyes. Their eyes are the size of a pool ball, measuring around 2 inches in diameter. Their size is five times greater than that of human eyes. Ostriches have excellent vision, so their enormous eyes aren't just for show. Because of their height and keen 2. _____, the birds can see well over great distances, enabling them to identify potential 3. _____ before they approach.

In general, compared to mammals of comparable size, birds often have smaller brains. Ostrich brains are approximately 1.5 inches in width, the study found. Additionally, their average brain weight is almost 17 times lower than that of the three other 4. _____. When comparing the brain-to-body weight ratio of the other birds, the ostrich's brain was lighter than their body weight.

Some other facts concerning these birds are what set them apart. All other birds have three or four toes; this magnificent creature has only two. Ostriches bend their knees in a forward orientation; thus, they kick forward rather than backward. Furthermore, ostriches do not require water because they produce some of it internally and obtain the 5. _____ from the plants they consume.

SubQuestion No : 24

Q.24 Select the most appropriate option for blank 4.

- Ans ☒ 1. property
☒ 2. case
☒ 3. typical
☒ 4. species

Question Type : **MCQ**

Question ID : **630680551418**

Option 1 ID : **6306802155904**

Option 2 ID : **6306802155902**

Option 3 ID : **6306802155901**

Option 4 ID : **6306802155903**

Status : **Answered**

Chosen Option : **4**

Comprehension:

In the following passage, some words have been deleted. Read the passage carefully and select the most appropriate option to fill in each blank.

The eye of an ostrich is larger than its brain. Of all birds, ostriches have the 1. _____ eyes. Their eyes are the size of a pool ball, measuring around 2 inches in diameter. Their size is five times greater than that of human eyes. Ostriches have excellent vision, so their enormous eyes aren't just for show. Because of their height and keen 2. _____, the birds can see well over great distances, enabling them to identify potential 3. _____ before they approach.

In general, compared to mammals of comparable size, birds often have smaller brains. Ostrich brains are approximately 1.5 inches in width, the study found. Additionally, their average brain weight is almost 17 times lower than that of the three other 4. _____. When comparing the brain-to-body weight ratio of the other birds, the ostrich's brain was lighter than their body weight.

Some other facts concerning these birds are what set them apart. All other birds have three or four toes; this magnificent creature has only two. Ostriches bend their knees in a forward orientation; thus, they kick forward rather than backward. Furthermore, ostriches do not require water because they produce some of it internally and obtain the 5. _____ from the plants they consume.

SubQuestion No : 25

Q.25 Select the most appropriate option for blank 5.

Ans  1. remainder

 2. lesser

 3. each

 4. every

Question Type : **MCQ**

Question ID : **630680551419**

Option 1 ID : **6306802155905**

Option 2 ID : **6306802155908**

Option 3 ID : **6306802155906**

Option 4 ID : **6306802155907**

Status : **Answered**

Chosen Option : **1**