

Multi Tasking Non Technical Staff and Havaladar CBIC and CBN Examination 2024

Roll Number	
Candidate Name	
Venue Name	Pawan Ganga Educational Center 2
Exam Date	13/11/2024
Exam Time	9:00 AM - 11:00 AM
Subject	MTS Non Tech Havaladar CBIC and CBN Examination 2024

Section : Numerical and Mathematical Ability

Q.1 If the number of working staff in the company is increased by 20% and the salary per head is decreased by 20%, then the percentage of change in the total salary is:

- Ans ☒ 1. decrease of 20%
☒ 2. increase of 20%
☒ 3. decrease of 4%
☒ 4. increase of 4%

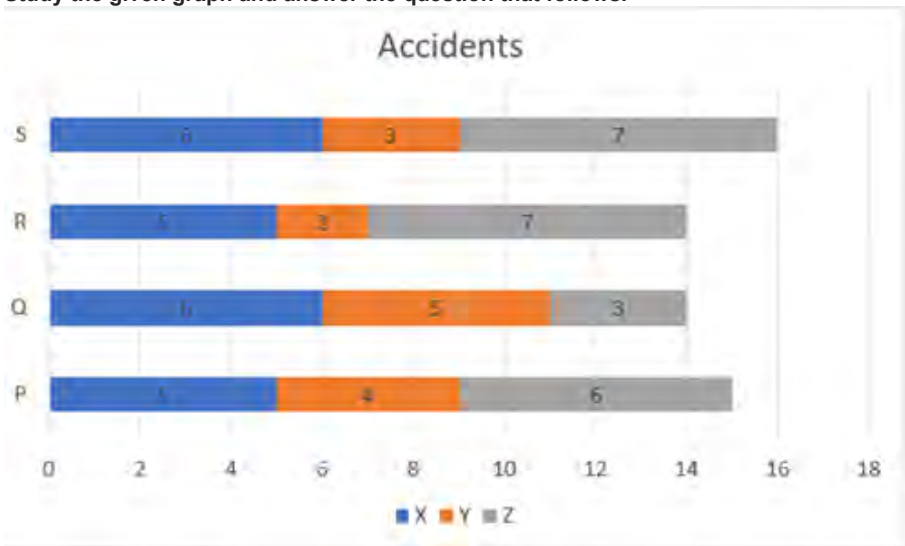
Question Type : MCQ
Question ID : 630680815845
Option 1 ID : 6306803196716
Option 2 ID : 6306803196715
Option 3 ID : 6306803196714
Option 4 ID : 6306803196713
Status : Answered
Chosen Option : 3

Q.2 Pankai bought a watch at a price range from ₹1,500 to ₹3,000 which are sold at prices ranging from ₹2,500 to ₹3,500. If Pankaj sells such 10 watches, then the greatest possible profit (in ₹) he made with the transaction is:

- Ans ☒ 1. 19,000
☒ 2. 23,854
☒ 3. 21,765
☒ 4. 20,000

Question Type : MCQ
Question ID : 630680456633
Option 1 ID : 6306801783497
Option 2 ID : 6306801783498
Option 3 ID : 6306801783495
Option 4 ID : 6306801783496
Status : Answered
Chosen Option : 4

Q.3 The graph shows the data of the number of accidents by three types of vehicles: X, Y and Z in four cities: P, Q, R and S. Study the given graph and answer the question that follows.



The correct increasing order of the cities as per the total number of accidents by all types of vehicles is:

- Ans
- ☐ 1. R, P, Q, S
 - ☐ 2. S, R, Q, P
 - ☒ 3. R, Q, P, S
 - ☐ 4. S, R, P, Q

Question Type : MCQ
Question ID : 630680523785
Option 1 ID : 6306802047292
Option 2 ID : 6306802047291
Option 3 ID : 6306802047293
Option 4 ID : 6306802047294
Status : Answered
Chosen Option : 3

Q.4 A 250-metre-long train running at a speed of 100 km/h crosses another train coming from the opposite direction at a speed of 62 km/h in 10 seconds. What is the length of the second train?

- Ans
- ☐ 1. 230 metres
 - ☒ 2. 200 metres
 - ☐ 3. 240 metres
 - ☐ 4. 270 metres

Question Type : MCQ
Question ID : 630680287424
Option 1 ID : 6306801117603
Option 2 ID : 6306801117604
Option 3 ID : 6306801117606
Option 4 ID : 6306801117605
Status : Answered
Chosen Option : 2

Q.5 A sum of ₹12,000 becomes double at simple interest in 7 years at a certain rate of simple interest. Find the time (in years) it takes for the amount to become ₹60,000 at the same rate of interest.

Ans ☒ 1. 28

☐ 2. 30

☐ 3. 20

☐ 4. 25

Question Type : MCQ

Question ID : 630680423973

Option 1 ID : 6306801654232

Option 2 ID : 6306801654231

Option 3 ID : 6306801654234

Option 4 ID : 6306801654233

Status : Answered

Chosen Option : 1

Q.6 A spherical metal ball is melted into a shape of cylinder mounted by a cone such that the base of cone exactly overlaps the top base of cylinder. The diameter of the cylinder and sphere is 4.2 m each. What is the height (in m) of the cone if the height of cylinder is 1.4 m?

Ans ☐ 1. 0.7

☐ 2. 1.4

☒ 3. 4.2

☐ 4. 2.1

Question Type : MCQ

Question ID : 630680382134

Option 1 ID : 6306801489454

Option 2 ID : 6306801489453

Option 3 ID : 6306801489451

Option 4 ID : 6306801489452

Status : Answered

Chosen Option : 1

Q.7 If $a = 2^2 \times 3^4 \times 5 \times 7^3$, $b = 2^3 \times 3^4 \times 5^2 \times 7^4$ and $c = 2^4 \times 3^2 \times 5^4 \times 7$, then the HCF of a, b and c is:

Ans ☒ 1. 1260

☐ 2. 1575

☐ 3. 630

☐ 4. 180

Question Type : MCQ

Question ID : 630680103699

Option 1 ID : 630680403029

Option 2 ID : 630680403030

Option 3 ID : 630680403028

Option 4 ID : 630680403027

Status : Answered

Chosen Option : 1

Q.8 The given table shows data for the month of May 2023.

Company	Total number of employees	Number of female employees
E	22,456	10,230
F	25,320	11,256
G	21,250	10,985
H	23,548	12,320

The total number of female employees in companies G and H together is what percentage of the total number of employees in company F? (Rounded off to 2 decimal places)

- Ans ☒ 1. 90.25%
☒ 2. 85.36%
☒ 3. 92.04%
☒ 4. 82.07%

Question Type : MCQ
Question ID : 630680523769
Option 1 ID : 6306802047228
Option 2 ID : 6306802047229
Option 3 ID : 6306802047227
Option 4 ID : 6306802047230
Status : Answered
Chosen Option : 1

Q.9 If a conical vessel is of height 12cm and radius 6cm, then the volume of the conical vessel is

- Ans ☒ 1. $254 \pi \text{ cm}^3$
☒ 2. $234 \pi \text{ cm}^3$
☒ 3. $144 \pi \text{ cm}^3$
☒ 4. $154 \pi \text{ cm}^3$

Question Type : MCQ
Question ID : 630680108620
Option 1 ID : 630680421427
Option 2 ID : 630680421426
Option 3 ID : 630680421424
Option 4 ID : 630680421425
Status : Answered
Chosen Option : 3

Q.10 Vasudha claimed to sell her items at 18% above the cost of production, but used a weight that had 1 kg written on it, though it actually weighed y grams. If the actual profit percentage earned by Vasudha was $33\frac{1}{3}\%$, what is the value of y?

Ans  1. 885

 2. 890

 3. 895

 4. 880

Question Type : **MCQ**

Question ID : **630680381272**

Option 1 ID : **6306801486042**

Option 2 ID : **6306801486041**

Option 3 ID : **6306801486039**

Option 4 ID : **6306801486040**

Status : **Answered**

Chosen Option : 1

Q.11 The average of 7 numbers is 55. If the first 4 numbers are 48, 62, 135 and 74, then what will be the average of the remaining numbers?

Ans  1. 22

 2. 31

 3. 25

 4. 19

Question Type : **MCQ**

Question ID : **630680460269**

Option 1 ID : **6306801797525**

Option 2 ID : **6306801797522**

Option 3 ID : **6306801797523**

Option 4 ID : **6306801797524**

Status : **Answered**

Chosen Option : 1

Q.12 A retailer announces a discount of 25% for selling a mobile phone marked at ₹48,000. The cost price of the mobile phone is 45% below the marked price. He offers a further discount of 7.5% if the buyer returns his old mobile phone. What is the ratio of the profit percentages of the retailer with the return of the old mobile phone scheme to that of without the return of the old mobile phone, respectively?

- Ans
- ☒ 1. 32:23
 - ☒ 2. 12: 11
 - ☒ 3. 11: 12
 - ☒ 4. 23:32

Question Type : MCQ

Question ID : 630680120549

Option 1 ID : 630680467226

Option 2 ID : 630680467229

Option 3 ID : 630680467228

Option 4 ID : 630680467227

Status : Answered

Chosen Option : 4

Q.13 Two trains of lengths 310 m and 340 m, respectively, are 285 m apart. They start moving towards each other on parallel tracks, at the speeds of 151 km/h and 155 km/h, respectively. In how much time will the trains cross each other completely?

- Ans
- ☒ 1. 13 s
 - ☒ 2. 10 s
 - ☒ 3. 11 s
 - ☒ 4. 12 s

Question Type : MCQ

Question ID : 630680135270

Option 1 ID : 630680523845

Option 2 ID : 630680523842

Option 3 ID : 630680523843

Option 4 ID : 630680523844

Status : Answered

Chosen Option : 3

Q.14 Find the number that must be added to the terms of the ratio 11 : 29 to make it equal to 11 : 20.

- Ans
- ☒ 1. 12
 - ☒ 2. 10
 - ☒ 3. 11
 - ☒ 4. 9

Question Type : MCQ

Question ID : 630680217293

Option 1 ID : 630680843110

Option 2 ID : 630680843108

Option 3 ID : 630680843109

Option 4 ID : 630680843107

Status : Answered

Chosen Option : 3

Q.15 A right circular solid metallic cone is 7.2 cm high and radius of its base 3.5 cm. It is melted and recast into two right circular solid metallic cones equal in all respects, each with base radius 2.1 cm and height 'h'. What is the value of 'h' (in cm)?

- Ans ☒ 1. 14
☒ 2. 10
☒ 3. 21
☒ 4. 12

Question Type : MCQ
Question ID : 630680526558
Option 1 ID : 6306802058298
Option 2 ID : 6306802058301
Option 3 ID : 6306802058300
Option 4 ID : 6306802058299
Status : Answered
Chosen Option : 2

Q.16 A shopkeeper of a subsidised canteen mixed three varieties of rice, X, Y and Z, in the ratio of 4 : 1 : 3 to make a packet of 4 kg of rice. The cost prices per kg of X, Y and Z varieties of rice are ₹2, ₹4 and ₹6, respectively. What is the cost price (in ₹) of the packet of rice?

- Ans ☒ 1. 10
☒ 2. 15
☒ 3. 30
☒ 4. 18

Question Type : MCQ
Question ID : 630680262319
Option 1 ID : 6306801018917
Option 2 ID : 6306801018915
Option 3 ID : 6306801018916
Option 4 ID : 6306801018918
Status : Answered
Chosen Option : 2

Q.17 Find the simple interest (in ₹) on ₹2500 as a sum borrowed at 7% per year rate of interest for 2 years.

- Ans ☒ 1. 390
☒ 2. 290
☒ 3. 310
☒ 4. 350

Question Type : MCQ
Question ID : 630680591908
Option 1 ID : 6306802316100
Option 2 ID : 6306802316101
Option 3 ID : 6306802316102
Option 4 ID : 6306802316099
Status : Answered
Chosen Option : 4

Q.18 The average weight of 6 children increases by 1.5 kg when a new child comes in place of one of them weighing 12 kg. The weight of the new child is:

- Ans ☒ 1. 21 kg
☐ 2. 14 kg
☐ 3. 22 kg
☐ 4. 14.5 kg

Question Type : MCQ
Question ID : 630680447478
Option 1 ID : 6306801747165
Option 2 ID : 6306801747167
Option 3 ID : 6306801747166
Option 4 ID : 6306801747168
Status : Answered
Chosen Option : 1

Q.19 The average height of a group of 10 students is 172 cm. Two more students of height 178 cm and 165 cm joined the group and 3 students of average height 160 cm leave the group. What is the new average height (in cm, rounded off to 1 decimal place) of the group after the changes?

- Ans ☐ 1. 174.6
☐ 2. 170.5
☒ 3. 175.9
☐ 4. 169.7

Question Type : MCQ
Question ID : 630680417435
Option 1 ID : 6306801628499
Option 2 ID : 6306801628501
Option 3 ID : 6306801628502
Option 4 ID : 6306801628500
Status : Answered
Chosen Option : 3

Q.20 Find the simple interest (in ₹) on ₹2500 as a sum borrowed at 7% per year rate of interest for 4 years.

- Ans ☐ 1. 640
☐ 2. 660
☒ 3. 700
☐ 4. 740

Question Type : MCQ
Question ID : 630680591910
Option 1 ID : 6306802316109
Option 2 ID : 6306802316110
Option 3 ID : 6306802316107
Option 4 ID : 6306802316108
Status : Answered
Chosen Option : 3

Section : Reasoning Ability and Problem Solving

Q.1 Which of the following equations is correct by interchanging the '+' and 'x' signs and the '4' and '5' numbers?

Ans  1. $20 + 5 \times 4 = 85$

 2. $5 + 15 \times 4 = 50$

 3. $5 \times 4 + 10 = 40$

 4. $10 \times 4 + 5 = 60$

Question Type : **MCQ**

Question ID : **630680379166**

Option 1 ID : **6306801477713**

Option 2 ID : **6306801477714**

Option 3 ID : **6306801477712**

Option 4 ID : **6306801477711**

Status : **Answered**

Chosen Option : **1**

Q.2 What will come in place of the question mark (?) in the following equation, if '+' and '-' are interchanged and 'x' and '÷' are interchanged?

$$392 \times 7 - 2 \div 12 + 80 = ?$$

Ans  1. 0

 2. 2

 3. 8

 4. 4

Question Type : **MCQ**

Question ID : **630680401368**

Option 1 ID : **6306801565260**

Option 2 ID : **6306801565261**

Option 3 ID : **6306801565258**

Option 4 ID : **6306801565259**

Status : **Answered**

Chosen Option : **1**

Q.3 In a certain code language, 'DAYS' is coded as '3917' and 'YOLK' is coded as '2496'. What is the code for 'Y' in that language?

Ans  1. 1

 2. 4

 3. 2

 4. 9

Question Type : **MCQ**

Question ID : **630680435788**

Option 1 ID : **6306801701066**

Option 2 ID : **6306801701068**

Option 3 ID : **6306801701067**

Option 4 ID : **6306801701065**

Status : **Answered**

Chosen Option : **4**

Q.4 Select the figure from among the given options that can replace the question mark (?) in the following series and complete the pattern.

K		↑	↑		△	I		K	K		D	
D	I	N	I	N	D	↑	△	6	△	6	↑	?
6		△	K		6	N		D	I		N	

Ans

✓ 1.

△		I
K	D	N
6		↑

✗ 2.

↑		I
K	D	N
6		△

✗ 3.

N		↑
I	K	D
△		6

✗ 4.

6		K
I	D	N
△		↑

Question Type : MCQ
Question ID : 630680441073
Option 1 ID : 6306801721948
Option 2 ID : 6306801721946
Option 3 ID : 6306801721947
Option 4 ID : 6306801721949
Status : Answered
Chosen Option : 1

Q.5 4 is related to 70 following a certain logic. Following the same logic, 8 is related to 518. To which of the following is 6 related, following the same logic? (NOTE: Operations should be performed on the whole numbers, without breaking down the numbers into its constituent digits. E.g. 13 – Operations on 13 such as adding /subtracting /multiplying etc. to 13 can be performed. Breaking down 13 into 1 and 3 and then performing mathematical operations on 1 and 3 is not allowed)

- Ans**
- ☒ 1. 226
 - ☒ 2. 219
 - ☒ 3. 222
 - ☒ 4. 216


Question Type : **MCQ**
Question ID : **630680446723**
Option 1 ID : **6306801744189**
Option 2 ID : **6306801744187**
Option 3 ID : **6306801744188**
Option 4 ID : **6306801744186**
Status : **Answered**
Chosen Option : **3**

Q.6 In a certain code language, 'YATCH' is coded as 'RTMVA' and 'CAT' is coded as 'VTM'. What is the code for 'ANAMOLIES' in the given code language?

- Ans**
- ☒ 1. TGTEHEBXL
 - ☒ 2. TGTFGE BXL
 - ☒ 3. TGTFHEBXL
 - ☒ 4. TGSFHEBXL


Question Type : **MCQ**
Question ID : **630680465160**
Option 1 ID : **6306801816676**
Option 2 ID : **6306801816677**
Option 3 ID : **6306801816678**
Option 4 ID : **6306801816675**
Status : **Answered**
Chosen Option : **3**

Q.7 Select the figure from the given options, which when put in place of the question mark (?) will logically complete the series.

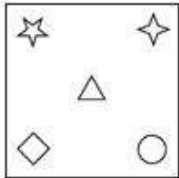


Ans


✗ 1.



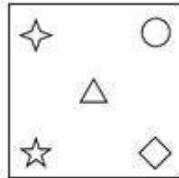
✗ 2.



✗ 3.



✓ 4.



Question Type : MCQ
Question ID : 630680278576
Option 1 ID : 6306801082589
Option 2 ID : 6306801082590
Option 3 ID : 6306801082591
Option 4 ID : 6306801082592
Status : Answered
Chosen Option : 4

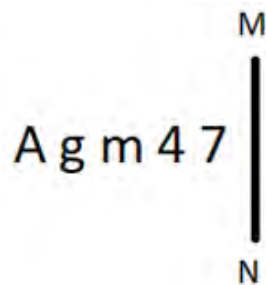
Q.8 What should come in place of the question mark (?) in the given series?

118 122 130 142 158 ?

- Ans ☒ 1. 178
☐ 2. 182
☐ 3. 186
☐ 4. 166

Question Type : MCQ
Question ID : 630680816804
Option 1 ID : 6306803206295
Option 2 ID : 6306803206296
Option 3 ID : 6306803206297
Option 4 ID : 6306803206294
Status : Answered
Chosen Option : 1

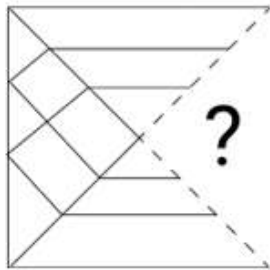
Q.9 Select the correct mirror image of the given figure when the mirror is placed at MN as shown below.



- Ans ☐ 1. 7 4 m g V
☒ 2. 7 4 m g A
☐ 3. 7 4 g m A
☐ 4. 7 4 w g A

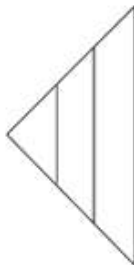
Question Type : MCQ
Question ID : 630680525264
Option 1 ID : 6306802053140
Option 2 ID : 6306802053142
Option 3 ID : 6306802053141
Option 4 ID : 6306802053143
Status : Answered
Chosen Option : 2

Q.10 Select the option figure that will replace the question mark (?) in the figure given below to complete the pattern.

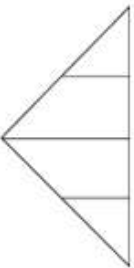


Ans

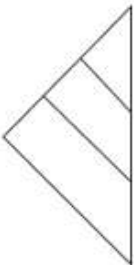
✗ 1.



✗ 2.



✗ 3.



✓ 4.



Question Type : **MCQ**
Question ID : **630680524707**
Option 1 ID : **6306802050927**
Option 2 ID : **6306802050930**
Option 3 ID : **6306802050929**
Option 4 ID : **6306802050928**
Status : **Answered**
Chosen Option : **4**

Q.11 LO15 is related to OR30 in a certain way. In the same way, SV25 is related to VY50. To which of the following is TW35 related, following the same logic?

Ans ☒ 1. WZ70

☐ 2. WA70

☐ 3. WZ17

☐ 4. AZ17

Question Type : MCQ

Question ID : 6306801108788

Option 1 ID : 6306804355698

Option 2 ID : 6306804355699

Option 3 ID : 6306804355701

Option 4 ID : 6306804355700

Status : Answered

Chosen Option : 1

Q.12 This question has two statements followed by two conclusions numbered I and II. You have to take the given statements to be true even if they seem to be at variance from commonly known facts. You have to decide which of the given conclusions logically follow(s) from the given statements.

Statements:

All arrows are swords.

Some swords are dragons.

Conclusions

(I) Some swords are arrows.

(II) Some dragons are not swords.

Ans ☐ 1. Neither conclusion (I) nor (II) follows

☐ 2. Both conclusions (I) and (II) follow

☐ 3. Only conclusion (II) follows

☒ 4. Only conclusion (I) follows

Question Type : MCQ

Question ID : 630680106424

Option 1 ID : 630680413484

Option 2 ID : 630680413485

Option 3 ID : 630680413483

Option 4 ID : 630680413482

Status : Answered

Chosen Option : 4

Q.13 Seven people A, B, C, D, E, F and G are sitting around a circular table, facing the centre (but not necessarily in the same order). Exactly three people are sitting between E and B when counted from the right of E. Both G and D are immediate neighbours of F. C is sitting to the immediate left of A. D and E are not sitting next to each other. The position of how many persons will remain unchanged, excluding A, if all the persons are arranged in the English alphabetical order, in clockwise direction, starting from A?

Ans  1. 1

 2. 2

 3. 4

 4. 3

Question Type : **MCQ**

Question ID : **630680387579**

Option 1 ID : **6306801510998**

Option 2 ID : **6306801510999**

Option 3 ID : **6306801511001**

Option 4 ID : **6306801511000**

Status : **Answered**

Chosen Option : 1

Q.14 Three statements are given, followed by two conclusions numbered 1, and 2. Assuming the statements to be true, even if they seem to be at variance with commonly known facts, decide which of the conclusions logically follow(s) from the statements.

Statements:

No Doctor is a Nurse

Some Nurses are Patients

Some Patients are Medicines

Conclusions:

1. Some Patients are not Doctors

2. Some Nurses are Medicines

Ans  1. Neither conclusion 1 nor 2 follows

 2. Only conclusion 1 follows

 3. Only conclusion 2 follows

 4. Both conclusions 1 and 2 follow

Question Type : **MCQ**

Question ID : **630680519824**

Option 1 ID : **6306802031723**

Option 2 ID : **6306802031722**

Option 3 ID : **6306802031721**

Option 4 ID : **6306802031720**

Status : **Answered**

Chosen Option : 2

Q.15 A, B, C, D, E, F and G are sitting around a circular table facing the centre (but not necessarily in the same order). G sits second to the left of F, who is third to the left of D. C sits third to the right of B, who is not an immediate neighbour of E. A sits second to the right of B.
Who is immediate right of E?

- Ans ☒ 1. A
☒ 2. D
☒ 3. G
☒ 4. B

Question Type : MCQ
Question ID : 630680382174
Option 1 ID : 6306801489613
Option 2 ID : 6306801489612
Option 3 ID : 6306801489611
Option 4 ID : 6306801489614
Status : Answered
Chosen Option : 3

Q.16 NLRP is related to USYW in a certain way based on the English alphabetical order. In the same way, KIOM is related to RPVT. To which of the following is GEKI related, following the same logic?

- Ans ☒ 1. NLPR
☒ 2. LNRP
☒ 3. NLRP
☒ 4. LNPR

Question Type : MCQ
Question ID : 630680435714
Option 1 ID : 6306801700778
Option 2 ID : 6306801700780
Option 3 ID : 6306801700777
Option 4 ID : 6306801700779
Status : Answered
Chosen Option : 3

Q.17 What should come in place of the question mark (?) in the given series based on the English alphabetical order?

RJK, PMI, NPG, LSE, ?

- Ans ☒ 1. KVD
☒ 2. KWC
☒ 3. JVC
☒ 4. KVC

Question Type : MCQ
Question ID : 630680459273
Option 1 ID : 6306801793948
Option 2 ID : 6306801793947
Option 3 ID : 6306801793946
Option 4 ID : 6306801793945
Status : Answered
Chosen Option : 3

Q.18 In a certain code language, 'MINT' is coded as '9735' and 'NEAR' is coded as '4568'.
What is the code for 'N' in the given code language?

- Ans ☒ 1. 3
☒ 2. 5
☒ 3. 6
☒ 4. 4

Question Type : MCQ
Question ID : 630680815668
Option 1 ID : 6306803195974
Option 2 ID : 6306803195973
Option 3 ID : 6306803195976
Option 4 ID : 6306803195975
Status : Answered
Chosen Option : 2

Q.19 In a certain code language, 'FISH' is coded as '6482' and 'SANE' is coded as '7691'.
What is the code for 'S' in the given code language?

- Ans ☒ 1. 8
☒ 2. 7
☒ 3. 6
☒ 4. 9

Question Type : MCQ
Question ID : 630680435785
Option 1 ID : 6306801701055
Option 2 ID : 6306801701054
Option 3 ID : 6306801701053
Option 4 ID : 6306801701056
Status : Answered
Chosen Option : 3

Q.20 19 is related to 39 following a certain logic. Following the same logic, 1 is related to 3.
To which of the following is 3 related following the same logic?(NOTE: Operations should be performed on the whole numbers, without breaking down the numbers into its constituent digits. E.g. 13 – Operations on 13 such as adding /subtracting /multiplying etc. to 13 can be performed. Breaking down 13 into 1 and 3 and then performing mathematical operations on 1 and 3 is not allowed)

- Ans ☒ 1. 7
☒ 2. 9
☒ 3. 11
☒ 4. 8

Question Type : MCQ
Question ID : 630680449992
Option 1 ID : 6306801757131
Option 2 ID : 6306801757132
Option 3 ID : 6306801757133
Option 4 ID : 6306801757130
Status : Answered
Chosen Option : 1

Section : General Awareness

Q.1 Which is the jet stream that brings Western disturbances in India?

- Ans ☒ 1. Easterly jet stream
☒ 2. Westerly jet stream
☐ 3. South polar jet stream
☐ 4. North polar jet stream

Question Type : MCQ
Question ID : 630680213973
Option 1 ID : 630680829939
Option 2 ID : 630680829940
Option 3 ID : 630680829942
Option 4 ID : 630680829941
Status : Answered
Chosen Option : 1

Q.2 Aparna Satheesan, a recipient of 2021 Abhinandan Saroja National award by National Institute of Classical Dance, is an exponent of _____ and Kuchipudi.

- Ans ☒ 1. Bharatanatyam
☐ 2. Kathak
☐ 3. Manipuri
☐ 4. Mohiniyattam

Question Type : MCQ
Question ID : 630680216041
Option 1 ID : 630680838140
Option 2 ID : 630680838141
Option 3 ID : 630680838139
Option 4 ID : 630680838142
Status : Answered
Chosen Option : 1

Q.3 According to Census of India 2011, which pair of states recorded the highest population density (persons/km²) in India?

- Ans ☐ 1. Bihar and Kerala
☐ 2. West Bengal and Uttar Pradesh
☒ 3. Bihar and West Bengal
☐ 4. Uttar Pradesh and Haryana

Question Type : MCQ
Question ID : 630680511238
Option 1 ID : 6306801998084
Option 2 ID : 6306801998083
Option 3 ID : 6306801998085
Option 4 ID : 6306801998082
Status : Answered
Chosen Option : 3

Q.4 Identify the place where the West Central Railway Zone headquarters is located.

- Ans ☒ 1. Jabalpur
☐ 2. Jodhpur
☐ 3. Bhopal
☐ 4. Jaipur

Question Type : MCQ
Question ID : 630680209266
Option 1 ID : 630680811282
Option 2 ID : 630680811279
Option 3 ID : 630680811281
Option 4 ID : 630680811280
Status : Answered
Chosen Option : 1

Q.5 Which of the following Rashtrakuta rulers performed the ceremony called 'Hiranya Garbha'?

- Ans ☐ 1. Krishna I
☒ 2. Dantidurga
☐ 3. Govind III
☐ 4. Dhruva I

Question Type : MCQ
Question ID : 630680322650
Option 1 ID : 6306801255242
Option 2 ID : 6306801255241
Option 3 ID : 6306801255244
Option 4 ID : 6306801255243
Status : Answered
Chosen Option : 2

Q.6 Who can exercise a casting vote in the case of an equality of votes in Lok Sabha?

- Ans ☒ 1. Speaker of Lok Sabha
☐ 2. President
☐ 3. Prime Minister
☐ 4. Vice President

Question Type : MCQ
Question ID : 630680511447
Option 1 ID : 6306801998919
Option 2 ID : 6306801998920
Option 3 ID : 6306801998918
Option 4 ID : 6306801998921
Status : Answered
Chosen Option : 1

Q.7 The autobiography of Sam Pitroda is called:

- Ans ☒ 1. In the afternoon of time
☒ 2. Dreaming Big: My Journey to Connect India
☐ 3. The Substance and The Shadow
☐ 4. Beyond the lines

Question Type : MCQ
Question ID : 630680409423
Option 1 ID : 6306801596523
Option 2 ID : 6306801596522
Option 3 ID : 6306801596521
Option 4 ID : 6306801596524
Status : Answered
Chosen Option : 3

Q.8 On which of the following dates did the British Empire transfer its powers to the Constituent Assembly in India?

- Ans ☐ 1. 2nd October
☒ 2. 15th August
☐ 3. 14th November
☐ 4. 26th January

Question Type : MCQ
Question ID : 630680403357
Option 1 ID : 6306801572940
Option 2 ID : 6306801572939
Option 3 ID : 6306801572941
Option 4 ID : 6306801572938
Status : Answered
Chosen Option : 2

Q.9 The Right to Freedom of Religion is covered under which Articles of the Constitution of India?

- Ans ☒ 1. Articles 25-28
☐ 2. Articles 21-24
☐ 3. Articles 29-32
☐ 4. Articles 24-27

Question Type : MCQ
Question ID : 630680218778
Option 1 ID : 630680849013
Option 2 ID : 630680849011
Option 3 ID : 630680849014
Option 4 ID : 630680849012
Status : Answered
Chosen Option : 1

Q.10 A little child is a very picky eater and hates drinking milk and milk products. When he lost his baby tooth, permanent teeth took a very long time to come up in its place. What could be the probable reason behind this?

- Ans ☐ 1. Vitamin Deficiency
☐ 2. Sugar Deficiency
☒ 3. Calcium Deficiency
☐ 4. Protein Deficiency

Question Type : MCQ
Question ID : 630680544252
Option 1 ID : 6306802127787
Option 2 ID : 6306802127788
Option 3 ID : 6306802127789
Option 4 ID : 6306802127786
Status : Answered
Chosen Option : 3

Q.11 The 'Quit India Movement' was launched under the leadership of

- Ans ☐ 1. Jawaharlal Nehru
☒ 2. Mahatma Gandhi
☐ 3. Subhash Chandra Bose
☐ 4. Muhammad Ali Jinnah

Question Type : MCQ
Question ID : 630680682880
Option 1 ID : 6306802674265
Option 2 ID : 6306802674263
Option 3 ID : 6306802674266
Option 4 ID : 6306802674264
Status : Answered
Chosen Option : 2

Q.12 On May 23, 2023, who assumed the position of Chairperson at the Competition Commission of India?

- Ans ☐ 1. Subhash Chandra Garg
☐ 2. Neha Bhatia
☐ 3. NK Singh
☒ 4. Ravneet Kaur

Question Type : MCQ
Question ID : 630680488488
Option 1 ID : 6306801907994
Option 2 ID : 6306801907993
Option 3 ID : 6306801907991
Option 4 ID : 6306801907992
Status : Answered
Chosen Option : 4

Q.13 Which of the following Indian philosophical systems and its widely acknowledged proponents is INCORRECTLY paired?

- Ans ☐ 1. Yoga - Patanjali
☐ 2. Purva Mimansa - Jaimini
☐ 3. Nyaya - Gotama
☒ 4. Vaisheshika - Vyasa

Question Type : MCQ
Question ID : 630680333506
Option 1 ID : 6306801297299
Option 2 ID : 6306801297300
Option 3 ID : 6306801297298
Option 4 ID : 6306801297297
Status : Answered
Chosen Option : 4

Q.14 Which of the following statements is/are true about public goods?

- I. Rivalrous in consumption
II. Non-excludability
III. Positive marginal cost

- Ans ☐ 1. Only I
☐ 2. Only II and III
☐ 3. Only I and III
☒ 4. Only II

Question Type : MCQ
Question ID : 630680512424
Option 1 ID : 6306802002666
Option 2 ID : 6306802002669
Option 3 ID : 6306802002668
Option 4 ID : 6306802002667
Status : Answered
Chosen Option : 3

Q.15 Which of the following folk dances of Jharkhand, Odisha and West Bengal region is on the Representative List of the Intangible Cultural Heritage of Humanity?

- Ans ☐ 1. Kummi
☒ 2. Chhau
☐ 3. Karma Naach
☐ 4. Dadra

Question Type : MCQ
Question ID : 630680309147
Option 1 ID : 6306801202767
Option 2 ID : 6306801202768
Option 3 ID : 6306801202765
Option 4 ID : 6306801202766
Status : Answered
Chosen Option : 2

Q.16 Where did the IBA Women's World Boxing Championships 2023 take place in India?

- Ans ☒ 1. Mumbai
☒ 2. New Delhi
☒ 3. Kolkata
☒ 4. Bengaluru

Question Type : MCQ

Question ID : 630680563508

Option 1 ID : 6306802202986

Option 2 ID : 6306802202988

Option 3 ID : 6306802202987

Option 4 ID : 6306802202985

Status : Answered

Chosen Option : 2

Q.17 The rifle (in the shooting sport) is single-loaded in _____-millimetre calibre (the inner diameter of a gun barrel), which is used across all events.

- Ans ☒ 1. 5.6
☒ 2. 4.8
☒ 3. 4.5
☒ 4. 5.1

Question Type : MCQ

Question ID : 630680459606

Option 1 ID : 6306801795270

Option 2 ID : 6306801795271

Option 3 ID : 6306801795269

Option 4 ID : 6306801795272

Status : Answered

Chosen Option : 1

Q.18 In Harappan civilisation, which material was NOT used in the construction of buildings?

- Ans ☒ 1. Wood
☒ 2. Burnt mud-bricks
☒ 3. Iron
☒ 4. Gypsum mortar

Question Type : MCQ

Question ID : 630680572221

Option 1 ID : 6306802237746

Option 2 ID : 6306802237745

Option 3 ID : 6306802237747

Option 4 ID : 6306802237744

Status : Answered

Chosen Option : 3

Q.19 The National Food Security Act (NFSA) was enacted in which year by the Government of India?

- Ans ☒ 1. 2001
☒ 2. 2013
☒ 3. 2008
☒ 4. 2005

Question Type : MCQ
Question ID : 630680477656
Option 1 ID : 6306801865775
Option 2 ID : 6306801865772
Option 3 ID : 6306801865773
Option 4 ID : 6306801865774
Status : Answered
Chosen Option : 2

Q.20 As of July 2023, how many products were notified under the 'One District, One Product' scheme as per the information provided by the Ministry of Food Processing Industries, Government of India?

- Ans ☒ 1. 132
☒ 2. 125
☒ 3. 135
☒ 4. 137

Question Type : MCQ
Question ID : 630680481205
Option 1 ID : 6306801879389
Option 2 ID : 6306801879388
Option 3 ID : 6306801879390
Option 4 ID : 6306801879391
Status : Answered
Chosen Option : 1

Q.21 Vibration or wave caused by the sudden movement of tectonic plates within the earth that can travel through and around the earth is called:

- Ans ☒ 1. Seismic Wave
☒ 2. Main Shock
☒ 3. Foreshock
☒ 4. Upheaval

Question Type : MCQ
Question ID : 630680403940
Option 1 ID : 6306801575246
Option 2 ID : 6306801575249
Option 3 ID : 6306801575247
Option 4 ID : 6306801575248
Status : Answered
Chosen Option : 1

Q.22 Which of the following agreements led Mahatma Gandhi to attend the Second Round Table Conference?

Ans ☒ 1. Gandhi Irwin Pact

☐ 2. Poona Pact

☐ 3. Lucknow Pact

☐ 4. Pact of Paris

Question Type : MCQ

Question ID : 630680198460

Option 1 ID : 630680769802

Option 2 ID : 630680769800

Option 3 ID : 630680769801

Option 4 ID : 630680769799

Status : Answered

Chosen Option : 1

Q.23 What is the primary source of energy for most ecosystems on Earth?

Ans ☐ 1. Geothermal heat

☐ 2. Tidal energy

☐ 3. Wind

☒ 4. Sunlight

Question Type : MCQ

Question ID : 630680540563

Option 1 ID : 6306802113328

Option 2 ID : 6306802113330

Option 3 ID : 6306802113327

Option 4 ID : 6306802113329

Status : Answered

Chosen Option : 4

Q.24 Who was the progenitor of the prolific Jaipur-Atrauli gharana?

Ans ☒ 1. Ustad Alladiya Khan

☐ 2. Ustad Vilayat Khan

☐ 3. Ustad Ali Akbar Khan

☐ 4. Ustad Mustaq Ali Khan

Question Type : MCQ

Question ID : 630680482014

Option 1 ID : 6306801882574

Option 2 ID : 6306801882571

Option 3 ID : 6306801882573

Option 4 ID : 6306801882572

Status : Answered

Chosen Option : 1

Q.25 0.25 g of an organic compound gave 0.20 g of CO₂ after complete combustion. The percentage composition of carbon is _____.

- Ans ☒ 1. 4.60%
☒ 2. 21.82%
☐ 3. 80.00%
☐ 4. 78.18%

Question Type : MCQ
Question ID : 630680472232
Option 1 ID : 6306801844657
Option 2 ID : 6306801844655
Option 3 ID : 6306801844658
Option 4 ID : 6306801844656
Status : Answered
Chosen Option : 2

Section : English Language and Comprehension

Q.1 Select the most appropriate option to fill in the blank.

The philanthropist's _____ donations significantly improved the quality of life in the community.

- Ans ☒ 1. substantial
☐ 2. meagre
☐ 3. parsimonious
☐ 4. redundant

Question Type : MCQ
Question ID : 630680598081
Option 1 ID : 6306802340135
Option 2 ID : 6306802340134
Option 3 ID : 6306802340137
Option 4 ID : 6306802340136
Status : Answered
Chosen Option : 1

Q.2 Select the INCORRECTLY spelt word..

- Ans ☐ 1. Peaceful
☐ 2. Lovable
☐ 3. Joyful
☒ 4. Faithfull

Question Type : MCQ
Question ID : 630680539878
Option 1 ID : 6306802110615
Option 2 ID : 6306802110614
Option 3 ID : 6306802110612
Option 4 ID : 6306802110613
Status : Answered
Chosen Option : 4

Q.3 Select the most appropriate option to fill in the blank.

She is _____ of spiders.

- Ans ☒ 1. interest
☒ 2. afraid
☒ 3. fear
☒ 4. frightening

Question Type : MCQ
Question ID : 630680490350
Option 1 ID : 6306801915317
Option 2 ID : 6306801915318
Option 3 ID : 6306801915315
Option 4 ID : 6306801915316
Status : Answered
Chosen Option : 2

Q.4 Select the most appropriate meaning of the given idiom.

Dig up dirt

- Ans ☒ 1. To uncover negative information about someone or something.
☒ 2. Find and disclose evidence
☒ 3. Enquire about a missing person
☒ 4. Hide and protect vital evidence

Question Type : MCQ
Question ID : 630680726504
Option 1 ID : 6306802847025
Option 2 ID : 6306802847023
Option 3 ID : 6306802847024
Option 4 ID : 6306802847022
Status : Answered
Chosen Option : 1

Q.5 Select the most appropriate option to fill in the blank.

Following weeks of intense training, the athlete _____ in the championship.

- Ans ☒ 1. were competing
☒ 2. have been competing
☒ 3. competed
☒ 4. have competed

Question Type : MCQ
Question ID : 630680597073
Option 1 ID : 6306802336335
Option 2 ID : 6306802336336
Option 3 ID : 6306802336334
Option 4 ID : 6306802336333
Status : Answered
Chosen Option : 1

Q.6 Select the INCORRECTLY spelt word.

- Ans ☒ 1. Obedence
☐ 2. Aggravate
☐ 3. Fabulous
☐ 4. Tremendous

Question Type : MCQ

Question ID : 630680455427

Option 1 ID : 6306801778622

Option 2 ID : 6306801778623

Option 3 ID : 6306801778625

Option 4 ID : 6306801778624

Status : Answered

Chosen Option : 1

Q.7 Select the grammatically correct sentence from the given options.

These are the works of a great poet Tagore.

- Ans ☐ 1. These are the works of that great poet Tagore.
☐ 2. These are the works of an great poet Tagore.
☐ 3. These are the works of this great poet Tagore.
☒ 4. These are the works of the great poet Tagore.

Question Type : MCQ

Question ID : 63068060267

Option 1 ID : 630680232624

Option 2 ID : 630680232622

Option 3 ID : 630680232623

Option 4 ID : 630680232625

Status : Answered

Chosen Option : 4

Q.8 Select the option that is OPPOSITE in meaning to the underlined word in the given sentence.

The state played only a modest part in the outstanding advancement of modern morality.

- Ans ☐ 1. Unimpressive
☒ 2. Boastful
☐ 3. Moderate
☐ 4. Humble

Question Type : MCQ

Question ID : 630680555194

Option 1 ID : 6306802170234

Option 2 ID : 6306802170232

Option 3 ID : 6306802170233

Option 4 ID : 6306802170235

Status : Answered

Chosen Option : 2

Q.9 Select the correct spelling of the incorrectly spelt word in the given sentence.

She is an independant writer.

- Ans ☒ 1. Independent
☐ 2. Indipendant
☐ 3. Indipendent
☐ 4. Independant

Question Type : MCQ
Question ID : 630680619763
Option 1 ID : 6306802425188
Option 2 ID : 6306802425186
Option 3 ID : 6306802425185
Option 4 ID : 6306802425187
Status : Answered
Chosen Option : 1

Q.10 Select the option that best expresses the meaning of the given idiom.

When pigs fly

- Ans ☐ 1. In unity
☐ 2. In due course of time
☒ 3. Just impossible
☐ 4. Correct approach

Question Type : MCQ
Question ID : 630680436116
Option 1 ID : 6306801702408
Option 2 ID : 6306801702407
Option 3 ID : 6306801702405
Option 4 ID : 6306801702406
Status : Answered
Chosen Option : 3

Q.11 Select the most appropriate homophone to fill in the blank. While learning to drive, Shivani met with an accident because she couldn't hit the _____.

- Ans ☐ 1. break
☒ 2. brake
☐ 3. brick
☐ 4. brack

Question Type : MCQ
Question ID : 630680508263
Option 1 ID : 6306801986350
Option 2 ID : 6306801986351
Option 3 ID : 6306801986349
Option 4 ID : 6306801986352
Status : Answered
Chosen Option : 2

Q.12 Select the option that can be used as a one-word substitute for the underlined word.
"He was notorious for his avaricious behaviour, always seeking ways to accumulate more wealth."

- Ans ☒ 1. notorious
☒ 2. greedy
☒ 3. sloth
☒ 4. generous

Question Type : MCQ
Question ID : 630680415848
Option 1 ID : 6306801622161
Option 2 ID : 6306801622159
Option 3 ID : 6306801622160
Option 4 ID : 6306801622162
Status : Answered
Chosen Option : 2

Q.13 The following sentence has been split into four segments. Identify the segment that contains a grammatical error.

The residents of Rameswaram / about the 1940s were quite / orthodox, but were also / tolerant of other communities.

- Ans ☒ 1. about the 1940s were quite
☒ 2. orthodox, but were also
☒ 3. The residents of Rameswaram
☒ 4. tolerant of other communities

Question Type : MCQ
Question ID : 630680514396
Option 1 ID : 6306802010210
Option 2 ID : 6306802010211
Option 3 ID : 6306802010209
Option 4 ID : 6306802010212
Status : Answered
Chosen Option : 1

Q.14 Select the most appropriate option to fill in the blank.
We are planning to see an _____ perform a symphony.

- Ans ☒ 1. opera
☒ 2. orchestra
☒ 3. actor
☒ 4. actress

Question Type : MCQ
Question ID : 630680515310
Option 1 ID : 6306802013692
Option 2 ID : 6306802013691
Option 3 ID : 6306802013689
Option 4 ID : 6306802013690
Status : Answered
Chosen Option : 2

Q.15 Select the most appropriate option to fill in the blank.

The cat likes to _____ in the sun during the afternoon.

- Ans ☒ 1. lye
☒ 2. lei
☒ 3. lie
☒ 4. lay

Question Type : MCQ
Question ID : 630680435716
Option 1 ID : 6306801700785
Option 2 ID : 6306801700788
Option 3 ID : 6306801700786
Option 4 ID : 6306801700787
Status : Answered
Chosen Option : 3

Q.16 Select the most appropriate option to fill in the blank.

The movie was so boring that I fell _____.

- Ans ☒ 1. slept
☒ 2. sleep
☒ 3. asleep
☒ 4. sleeping

Question Type : MCQ
Question ID : 630680490351
Option 1 ID : 6306801915320
Option 2 ID : 6306801915319
Option 3 ID : 6306801915322
Option 4 ID : 6306801915321
Status : Answered
Chosen Option : 3

Q.17 The following sentence has been divided into parts. One of them contains an error.
Select the part that contains the error from the given options.

After months of / meticulous planning and hard work, / a team successfully launched / their innovative product to the market.

- Ans ☒ 1. their innovative product to the market.
☒ 2. a team successfully launched
☒ 3. meticulous planning and hard work,
☒ 4. After months of

Question Type : MCQ
Question ID : 630680413384
Option 1 ID : 6306801612359
Option 2 ID : 6306801612358
Option 3 ID : 6306801612357
Option 4 ID : 6306801612356
Status : Answered
Chosen Option : 1

Q.18 Parts of the following sentence have been given as options. Select the option that contains an error.

Dr. Oppenheimer is the exceptional movie of all the movies in recent times.

- Ans ☒ 1. of all the movies
☒ 2. Dr. Oppenheimer is
☒ 3. in recent times
☒ 4. the exceptional movie

Question Type : **MCQ**
Question ID : **630680514369**
Option 1 ID : **6306802010103**
Option 2 ID : **6306802010101**
Option 3 ID : **6306802010104**
Option 4 ID : **6306802010102**
Status : **Answered**
Chosen Option : **1**

Q.19 Select the most appropriate **ANTONYM** of the given word.
Cacophony

- Ans ☒ 1. Discord
☒ 2. Noise
☒ 3. Dissonance
☒ 4. Harmony

Question Type : **MCQ**
Question ID : **630680545689**
Option 1 ID : **6306802133345**
Option 2 ID : **6306802133347**
Option 3 ID : **6306802133346**
Option 4 ID : **6306802133344**
Status : **Answered**
Chosen Option : **4**

Q.20 Select the grammatically correct sentence from the given options.

- Ans ☒ 1. A salesman insisted that the payment against an purchase should be done by using the bank card.
☒ 2. The salesman insisted that the payment against the purchase should be done by using a bank card.
☒ 3. The salesman insisted that a payment against the purchase should be done by using an bank card.
☒ 4. A salesman insisted that a payment against a purchase should be done by using a bank card.

Question Type : **MCQ**
Question ID : **63068060829**
Option 1 ID : **630680234768**
Option 2 ID : **630680234769**
Option 3 ID : **630680234767**
Option 4 ID : **630680234766**
Status : **Answered**
Chosen Option : **2**

Comprehension:

In the following passage, some words have been deleted. Read the passage carefully and select the most appropriate option to fill in each blank.

In terms of technical difficulty, Nanga Parbat, the world's ninth (1)_____ peak, competes with K2. The first (2)_____ to the summit follows a narrow ridge. The 15,000-foot Rupal Face, a single wall of rock and ice, is located on the mountain's southern side. Climbers have dubbed the Nanga Parbat, which (3)_____ as 'naked mountain', 'Killer Mountain'. This gives Annapurna a (4)_____ of 32%, making it the most statistically dangerous of the world's 8,000-metre peaks. It is an avalanche-prone area with some technical difficulty. Climbers' misery is (5)_____ by insufficient local support, in addition to unpredictable weather and inaccessibility.

SubQuestion No : 21

Q.21 Select the most appropriate option to fill in blank number 1.

- Ans ☒ 1. deepest
☒ 2. lengthiest
☒ 3. highest
☒ 4. fattest

Question Type : **MCQ**
Question ID : **630680130734**
Option 1 ID : **630680506228**
Option 2 ID : **630680506229**
Option 3 ID : **630680506226**
Option 4 ID : **630680506227**
Status : **Answered**
Chosen Option : **3**

Comprehension:

In the following passage, some words have been deleted. Read the passage carefully and select the most appropriate option to fill in each blank.

In terms of technical difficulty, Nanga Parbat, the world's ninth (1)_____ peak, competes with K2. The first (2)_____ to the summit follows a narrow ridge. The 15,000-foot Rupal Face, a single wall of rock and ice, is located on the mountain's southern side. Climbers have dubbed the Nanga Parbat, which (3)_____ as 'naked mountain', 'Killer Mountain'. This gives Annapurna a (4)_____ of 32%, making it the most statistically dangerous of the world's 8,000-metre peaks. It is an avalanche-prone area with some technical difficulty. Climbers' misery is (5)_____ by insufficient local support, in addition to unpredictable weather and inaccessibility.

SubQuestion No : 22

Q.22 Select the most appropriate option to fill in blank number 2.

- Ans ☒ 1. rise
☒ 2. ascent
☒ 3. lift
☒ 4. launch

Question Type : **MCQ**
Question ID : **630680130735**
Option 1 ID : **630680506232**
Option 2 ID : **630680506233**
Option 3 ID : **630680506230**
Option 4 ID : **630680506231**
Status : **Answered**
Chosen Option : **2**

Comprehension:

In the following passage, some words have been deleted. Read the passage carefully and select the most appropriate option to fill in each blank.

In terms of technical difficulty, Nanga Parbat, the world's ninth (1)_____ peak, competes with K2. The first (2)_____ to the summit follows a narrow ridge. The 15,000-foot Rupal Face, a single wall of rock and ice, is located on the mountain's southern side. Climbers have dubbed the Nanga Parbat, which (3)_____ as 'naked mountain', 'Killer Mountain'. This gives Annapurna a (4)_____ of 32%, making it the most statistically dangerous of the world's 8,000-metre peaks. It is an avalanche-prone area with some technical difficulty. Climbers' misery is (5)_____ by insufficient local support, in addition to unpredictable weather and inaccessibility.

SubQuestion No : 23

Q.23 Select the most appropriate option to fill in blank number 3.

- Ans ☒ 1. transliterates
☒ 2. transposed
☒ 3. translates
☒ 4. transcribes

Question Type : **MCQ**
Question ID : **630680130736**
Option 1 ID : **630680506237**
Option 2 ID : **630680506234**
Option 3 ID : **630680506236**
Option 4 ID : **630680506235**
Status : **Answered**
Chosen Option : **3**

Comprehension:

In the following passage, some words have been deleted. Read the passage carefully and select the most appropriate option to fill in each blank.

In terms of technical difficulty, Nanga Parbat, the world's ninth (1)_____ peak, competes with K2. The first (2)_____ to the summit follows a narrow ridge. The 15,000-foot Rupal Face, a single wall of rock and ice, is located on the mountain's southern side. Climbers have dubbed the Nanga Parbat, which (3)_____ as 'naked mountain', 'Killer Mountain'. This gives Annapurna a (4)_____ of 32%, making it the most statistically dangerous of the world's 8,000-metre peaks. It is an avalanche-prone area with some technical difficulty. Climbers' misery is (5)_____ by insufficient local support, in addition to unpredictable weather and inaccessibility.

SubQuestion No : 24

Q.24 Select the most appropriate option to fill in blank number 4.

- Ans ☒ 1. economic rate
☒ 2. frailty rate
☒ 3. fatality rate
☒ 4. mortal rate

Question Type : **MCQ**
Question ID : **630680130737**
Option 1 ID : **630680506240**
Option 2 ID : **630680506238**
Option 3 ID : **630680506239**
Option 4 ID : **630680506241**
Status : **Answered**
Chosen Option : **3**





Comprehension:

In the following passage, some words have been deleted. Read the passage carefully and select the most appropriate option to fill in each blank.

In terms of technical difficulty, Nanga Parbat, the world's ninth (1)_____ peak, competes with K2. The first (2)_____ to the summit follows a narrow ridge. The 15,000-foot Rupal Face, a single wall of rock and ice, is located on the mountain's southern side. Climbers have dubbed the Nanga Parbat, which (3)_____ as 'naked mountain', 'Killer Mountain'. This gives Annapurna a (4)_____ of 32%, making it the most statistically dangerous of the world's 8,000-metre peaks. It is an avalanche-prone area with some technical difficulty. Climbers' misery is (5)_____ by insufficient local support, in addition to unpredictable weather and inaccessibility.

SubQuestion No : 25

Q.25 Select the most appropriate option to fill in blank number 5.

- Ans  1. perfectly
 2. increasingly
 3. exacerbated
 4. worst

Question Type : **MCQ**

Question ID : **630680130738**

Option 1 ID : **630680506243**

Option 2 ID : **630680506242**

Option 3 ID : **630680506244**

Option 4 ID : **630680506245**

Status : **Answered**

Chosen Option : **3**