

Multi Tasking Non Technical Staff and Havaladar CBIC and CBN Examination 2024

Roll Number	
Candidate Name	
Venue Name	iON Digital Zone iDZ 2 Chinamushidiwada
Exam Date	12/11/2024
Exam Time	4:00 PM - 5:30 PM
Subject	MTS Non Tech Havaladar CBIC and CBN Examination 2024

Section : Numerical and Mathematical Ability

Q.1 The average score of 30 students (boys and girls only) in a class test was 16.2 and that of 18 boys in the same test was 16. The average score of girls in the same test was:

Ans 1. 16.7

2. 16.5

3. 16.3

4. 16.1

Question Type : MCQ

Question ID : 630680468477

Option 1 ID : 6306801829709

Option 2 ID : 6306801829708

Option 3 ID : 6306801829707

Option 4 ID : 6306801829706

Status : Answered

Chosen Option : 2

Q.2 Mihir buys a toy for ₹70 and sells it for ₹90. What is his gain percentage?

Ans 1. 35.62%

2. 28.57%

3. 25.25%

4. 20%

Question Type : MCQ

Question ID : 630680108767

Option 1 ID : 630680421983

Option 2 ID : 630680421982

Option 3 ID : 630680421981

Option 4 ID : 630680421980

Status : Answered

Chosen Option : 2



Download SSC CGL, CHSL E-BOOKS

[CLICK HERE](#)

SSC MTS (Non Technical) EXAM STUDY KIT



FREE SHIPPING 

- ▶ 100% SSC MTS Exam Syllabus Covered
- ▶ PRINTED Notes
- ▶ 8 Books, 700+ Pages
- ▶ 2500+ MCQs
- ▶ Practice Papers
- ▶ 1 Year Current Affairs

50% OFF

 SSCPOTAL.IN

SSC MTS PDF NOTES

100% Syllabus Covered



CLICK HERE

CLICK BELOW LINK TO DOWNLOAD PDF NOTES

<https://sscpportal.in/study-kit/mts>

<https://sscpportal.in/study-kit>

Q.3 The radius of the base of a right circular cone is 28 cm and its slant height is 13 cm. Find its lateral surface area.

(Use $\pi = \frac{22}{7}$.)

- Ans
- 1. 1044 cm²
 - 2. 1144 cm²
 - 3. 1122 cm²
 - 4. 1140 cm²

Question Type : **MCQ**
Question ID : **630680103193**
Option 1 ID : **630680401031**
Option 2 ID : **630680401033**
Option 3 ID : **630680401032**
Option 4 ID : **630680401034**
Status : **Answered**
Chosen Option : **2**

Q.4 Two trains start at the same time from two stations and proceed towards each other at speeds of 120 km/hr and 80 km/hr, respectively. When they meet, it is found that one train has travelled 60 km more than the other. What is the distance (in km) between the two stations?

- Ans
- 1. 268
 - 2. 387
 - 3. 300
 - 4. 452

Question Type : **MCQ**
Question ID : **630680568771**
Option 1 ID : **6306802223893**
Option 2 ID : **6306802223896**
Option 3 ID : **6306802223894**
Option 4 ID : **6306802223895**
Status : **Answered**
Chosen Option : **3**

Q.5 The average salary of all 50 employees including 5 officers of a company is ₹855. If the average salary of the officers is ₹2,550, find the average salary of the remaining staff of the company.
(Rounded to the nearest integer.)

- Ans
- 1. ₹657
 - 2. ₹677
 - 3. ₹667
 - 4. ₹637

Question Type : **MCQ**
Question ID : **630680410199**
Option 1 ID : **6306801599596**
Option 2 ID : **6306801599598**
Option 3 ID : **6306801599595**
Option 4 ID : **6306801599597**
Status : **Answered**
Chosen Option : **2**

Q.6 Using the factor method of HCF, which of the following is the HCF of 160 and 256?

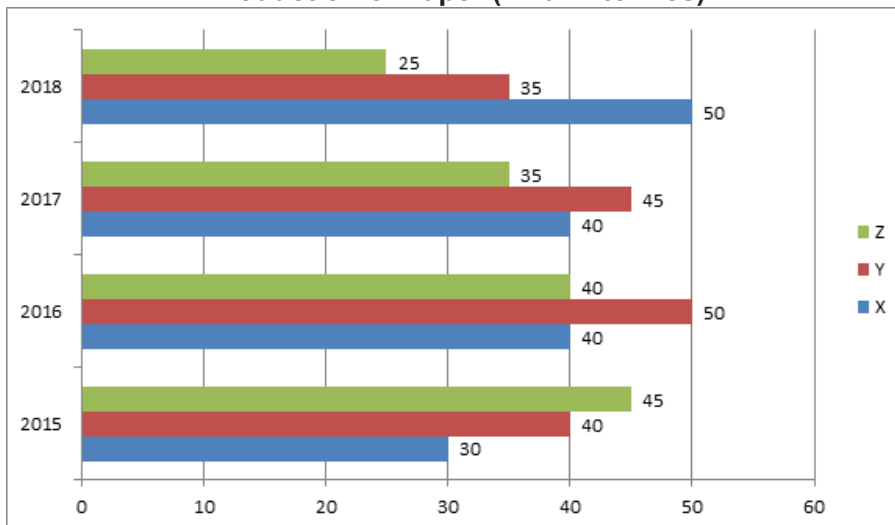
- Ans
- 1. 16
 - 2. 40
 - 3. 64
 - 4. 32

Question Type : MCQ
Question ID : 63068070722
Option 1 ID : 630680273511
Option 2 ID : 630680273512
Option 3 ID : 630680273510
Option 4 ID : 630680273513
Status : Answered
Chosen Option : 4

Q.7 Study the given bar graph carefully and answer the question that follows.

The bar graph given below gives the data of production of paper (in lakh tonnes) by 3 different companies X, Y and Z over the years 2015 to 2018.

Production of Paper (in lakh tonnes)



In which year was the percentage of production of company Y to the production of company Z the maximum?

- Ans
- 1. 2017
 - 2. 2016
 - 3. 2015
 - 4. 2018

Question Type : MCQ
Question ID : 630680633918
Option 1 ID : 6306802481564
Option 2 ID : 6306802481565
Option 3 ID : 6306802481566
Option 4 ID : 6306802481567
Status : Answered
Chosen Option : 3

Q.8 The marked price of a mobile phone at a showroom is ₹25,000 and is sold at successive discounts of 20%, 15% and 10%. Find its selling price.

- Ans 1. ₹15,000
 2. ₹15,300
 3. ₹14,000
 4. ₹14,960

Question Type : MCQ
Question ID : 630680615716
Option 1 ID : 6306802409536
Option 2 ID : 6306802409537
Option 3 ID : 6306802409534
Option 4 ID : 6306802409535
Status : Not Answered
Chosen Option : --

Q.9 Harsha obtained 72, 63 and 81 marks (out of 100) in Maths, Physics and Chemistry, respectively. What is the average of his marks?

- Ans 1. 63
 2. 81
 3. 72
 4. 84

Question Type : MCQ
Question ID : 630680163638
Option 1 ID : 630680633725
Option 2 ID : 630680633724
Option 3 ID : 630680633726
Option 4 ID : 630680633727
Status : Answered
Chosen Option : 3

Q.10 A sum of money at simple interest amounts to ₹2,500 in three years and ₹3,000 in five years. What is the rate of interest (correct up to two decimal places)?

- Ans 1. 15%
 2. 14.25%
 3. 14.29%
 4. 13.56%

Question Type : MCQ
Question ID : 630680405562
Option 1 ID : 6306801583298
Option 2 ID : 6306801583297
Option 3 ID : 6306801583296
Option 4 ID : 6306801583299
Status : Answered
Chosen Option : 3

Q.11 In an election there were only two candidates, Geeta and Shyama. Geeta received 15% of the total votes and Shyama received 8700 votes. 60% of the voters did not cast their vote to either of the two candidates. Find the total percentage of votes that Shyama received, assuming that all the votes cast were valid.

- Ans
- 1. 24%
 - 2. 23%
 - 3. 25%
 - 4. 22%

Question Type : MCQ
Question ID : 630680464481
Option 1 ID : 6306801813961
Option 2 ID : 6306801813960
Option 3 ID : 6306801813962
Option 4 ID : 6306801813959
Status : Answered
Chosen Option : 3

Q.12 The marked price of a speaker is ₹520 and the shopkeeper offers a discount of 10% and still he gains 17%. If no discount is allowed, then find the gain percentage.

- Ans
- 1. 27%
 - 2. 30%
 - 3. 20%
 - 4. 25%

Question Type : MCQ
Question ID : 630680119760
Option 1 ID : 630680464118
Option 2 ID : 630680464120
Option 3 ID : 630680464119
Option 4 ID : 630680464121
Status : Answered
Chosen Option : 1

Q.13 In a hospital, 60% of the patients are men, 25% of the patients are women, and 15% of the patients are children. If the average age of the men is 40 years, that of the women is 36 years, and that of the children is 8 years. What is the average age of all the patients?

- Ans
- 1. 34.2 years
 - 2. 32.4 years
 - 3. 23.4 years
 - 4. 24.3 years

Question Type : MCQ
Question ID : 630680457410
Option 1 ID : 6306801786553
Option 2 ID : 6306801786552
Option 3 ID : 6306801786555
Option 4 ID : 6306801786554
Status : Not Answered
Chosen Option : --

Q.14 A policeman travelling at a speed of 120 km/h chases a thief 5000 m away from him, and travelling at a speed of 100 km/h. What is the time taken by the policeman to catch the thief?

- Ans** 1. 13.5 min
 2. 10 min
 3. 15 min
 4. 20 min

Question Type : **MCQ**
 Question ID : **630680262496**
 Option 1 ID : **6306801019623**
 Option 2 ID : **6306801019625**
 Option 3 ID : **6306801019626**
 Option 4 ID : **6306801019624**
 Status : **Not Answered**
 Chosen Option : --

Q.15 The given table shows the number of pastries sold by four different bakeries in four different months.

Month \ Bakery	April	May	June	July
X	640	665	962	748
Y	584	782	456	698
Z	612	498	729	621
T	771	630	568	777

What is the difference between the total number of pastries sold by bakeries X and T together in June, and the total number of pastries sold by bakeries Y and Z together in April?

- Ans** 1. 334
 2. 314
 3. 354
 4. 374

Question Type : **MCQ**
 Question ID : **630680523779**
 Option 1 ID : **6306802047269**
 Option 2 ID : **6306802047270**
 Option 3 ID : **6306802047268**
 Option 4 ID : **6306802047267**
 Status : **Answered**
 Chosen Option : 1

Q.16 The height of a cylindrical pillar is 20 m. The diameter of its base is 350 cm. What will be the cost of painting the curved surface of the pillar at $40/\text{m}^2$? ($\pi = \frac{22}{7}$)

- Ans
- 1. ₹8,400
 - 2. ₹8,600
 - 3. ₹8,800
 - 4. ₹8,000

Question Type : MCQ
Question ID : 630680386875
Option 1 ID : 6306801508212
Option 2 ID : 6306801508213
Option 3 ID : 6306801508211
Option 4 ID : 6306801508210
Status : Answered
Chosen Option : 3

Q.17 Find the simple interest (in ₹) on ₹3500 as a sum borrowed at 6% per year rate of interest for 6 years.

- Ans
- 1. 1300
 - 2. 1220
 - 3. 1260
 - 4. 1200

Question Type : MCQ
Question ID : 630680591977
Option 1 ID : 6306802316376
Option 2 ID : 6306802316378
Option 3 ID : 6306802316375
Option 4 ID : 6306802316377
Status : Answered
Chosen Option : 3

Q.18 What is the mean proportional between $(6 - 2\sqrt{2})$ and $(9 + 3\sqrt{2})$?

- Ans
- 1. $\sqrt{42}$
 - 2. $\sqrt{52}$
 - 3. $\sqrt{54}$
 - 4. $\sqrt{66}$

Question Type : MCQ
Question ID : 630680103159
Option 1 ID : 630680400898
Option 2 ID : 630680400895
Option 3 ID : 630680400896
Option 4 ID : 630680400897
Status : Answered
Chosen Option : 1

Q.19 Find the simple interest (in ₹) on ₹2500 as a sum borrowed at 3% per year rate of interest for 3 years.

- Ans 1. 165
 2. 185
 3. 265
 4. 225

Question Type : MCQ
Question ID : 630680591889
Option 1 ID : 6306802316025
Option 2 ID : 6306802316026
Option 3 ID : 6306802316024
Option 4 ID : 6306802316023
Status : Answered
Chosen Option : 4

Q.20 The curved surface of a right circular cylinder is to be coloured at the rate of ₹1.50 per sq. cm. If the radius of the circular base is 21 cm and height is 10 cm, then what will be the cost (in ₹) of colouring? (Take $\pi = \frac{22}{7}$)

- Ans 1. 1980
 2. 2000
 3. 1940
 4. 1960

Question Type : MCQ
Question ID : 630680383466
Option 1 ID : 6306801494761
Option 2 ID : 6306801494762
Option 3 ID : 6306801494759
Option 4 ID : 6306801494760
Status : Not Answered
Chosen Option : --

Section : Reasoning Ability and Problem Solving

Q.1 TW21 is related to ZC66 in a certain way. In the same way, UX33 is related to AD78. To which of the following is MP45 related, following the same logic?

- Ans 1. VS80
 2. VS90
 3. SV80
 4. SV90

Question Type : MCQ
Question ID : 6306801108773
Option 1 ID : 6306804355641
Option 2 ID : 6306804355639
Option 3 ID : 6306804355640
Option 4 ID : 6306804355638
Status : Answered
Chosen Option : 4

Q.2 What should come in place of the question mark (?) in the given series based on the English alphabetical order?

TCU, UFP, VIK, WLF, ?

- Ans
- 1. XOB
 - 2. XPA
 - 3. XOC
 - 4. XOA

Question Type : MCQ

Question ID : 630680459268

Option 1 ID : 6306801793926

Option 2 ID : 6306801793928

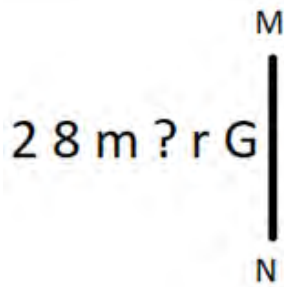
Option 3 ID : 6306801793925

Option 4 ID : 6306801793927

Status : Answered

Chosen Option : 4

Q.3 Select the correct mirror image of the given figure when the mirror is placed at MN as shown below.



- Ans
- 1. Ɔ ɹ ʎ m 8 2
 - 2. Ɔ r ɹ w 8 Ɔ
 - 3. Ɔ ɹ ʎ m 8 Ɔ
 - 4. Ɔ ɹ m ? 8 Ɔ

Question Type : MCQ

Question ID : 630680525265

Option 1 ID : 6306802053145

Option 2 ID : 6306802053147

Option 3 ID : 6306802053146

Option 4 ID : 6306802053144

Status : Answered

Chosen Option : 3

Q.4 11 is related to 78 following a certain logic. Following the same logic, 6 is related to 43.
To which of the following is 31 related, following the same logic?

(NOTE : Operations should be performed on the whole numbers, without breaking down the numbers into its constituent digits. E.g. 13 – Operations on 13 such as adding / subtracting / multiplying, etc., to 13 can be performed. Breaking down 13 into 1 and 3 and then performing mathematical operations on 1 and 3 is not allowed.)

- Ans
- 1. 159
 - 2. 249
 - 3. 145
 - 4. 218

Question Type : **MCQ**

Question ID : **630680441686**

Option 1 ID : **6306801724361**

Option 2 ID : **6306801724360**

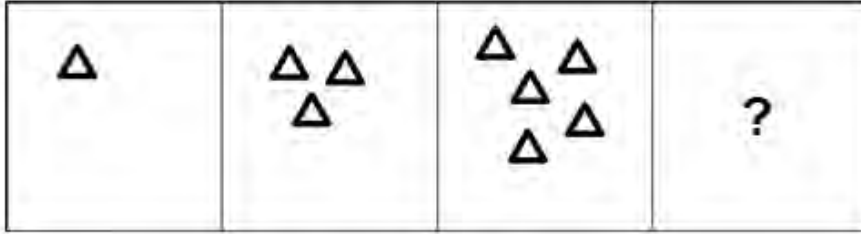
Option 3 ID : **6306801724358**

Option 4 ID : **6306801724359**

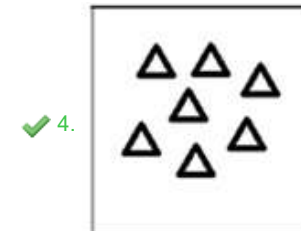
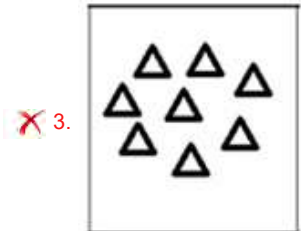
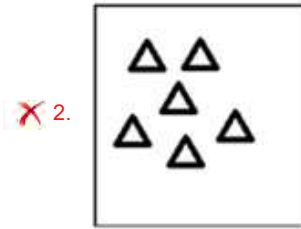
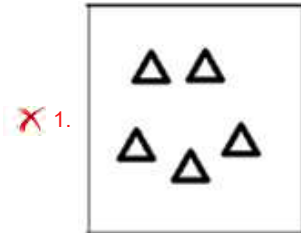
Status : **Answered**

Chosen Option : **4**

Q.5 Select the option that will replace the question mark (?) and complete the given figure series.



Ans



Question Type : MCQ
Question ID : 630680152703
Option 1 ID : 630680590806
Option 2 ID : 630680590807
Option 3 ID : 630680590805
Option 4 ID : 630680590804
Status : Answered
Chosen Option : 4

Q.6 In a code language, 'VGAL' is coded as 'BEGJ' and 'XQEB' is coded as 'DOKZ'. How will 'HTSO' be coded in that language?

- Ans
- 1. MRZL
 - 2. MSZK
 - 3. NQYL
 - 4. NRYM

Question Type : **MCQ**

Question ID : **630680465307**

Option 1 ID : **6306801817266**

Option 2 ID : **6306801817265**

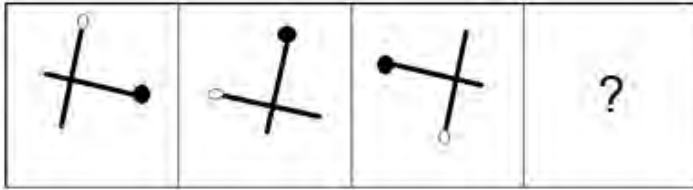
Option 3 ID : **6306801817264**

Option 4 ID : **6306801817263**

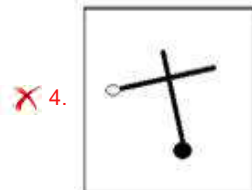
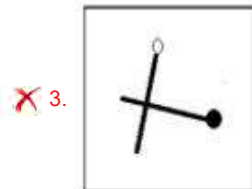
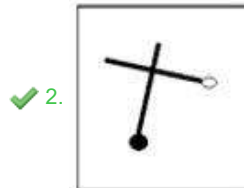
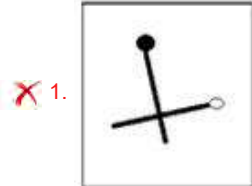
Status : **Answered**

Chosen Option : **4**

Q.7 Select the figure from among the given options that can replace the question mark (?) and complete the given series.



Ans



Question Type : MCQ

Question ID : 630680149869

Option 1 ID : 630680579645

Option 2 ID : 630680579647

Option 3 ID : 630680579646

Option 4 ID : 630680579644

Status : Answered

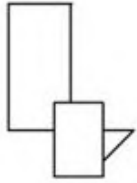
Chosen Option : 2



Download SSC CGL, CHSL E-BOOKS

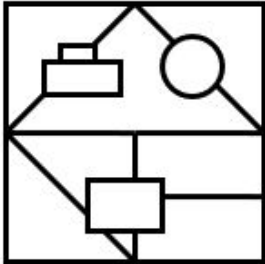
[CLICK HERE](#)

Q.8 Select the option in which the given figure is embedded (rotation is NOT allowed).

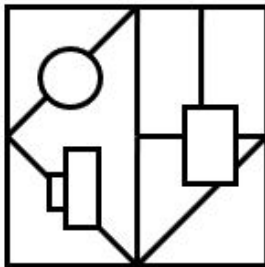


Ans

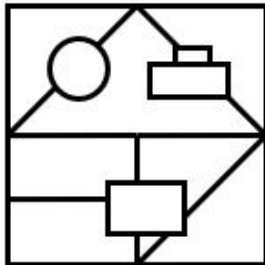
✗ 1.



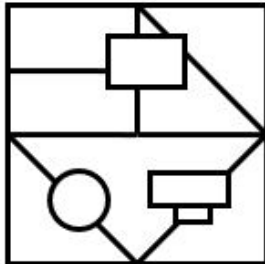
✓ 2.



✗ 3.



✗ 4.



Question Type : MCQ

Question ID : 630680524448

Option 1 ID : 6306802049891

Option 2 ID : 6306802049893

Option 3 ID : 6306802049894

Option 4 ID : 6306802049892

Status : Answered

Chosen Option : 2



Download SSC CGL, CHSL E-BOOKS

[CLICK HERE](#)

Q.9 Select the set in which the numbers are related in the same way as are the numbers of the following sets.

(NOTE : Operations should be performed on the whole numbers, without breaking down the numbers into its constituent digits. E.g. 13 – Operations on 13 such as adding /deleting /multiplying etc. to 13 can be performed. Breaking down 13 into 1 and 3 and then performing mathematical operations on 1 and 3 is not allowed)

(18, 108, 12)

(33, 198, 22)

- Ans 1. (40, 252, 28)
 2. (42, 252, 28)
 3. (42, 252, 26)
 4. (42, 254, 28)

Question Type : MCQ

Question ID : 630680381025

Option 1 ID : 6306801485075

Option 2 ID : 6306801485076

Option 3 ID : 6306801485078

Option 4 ID : 6306801485077

Status : Not Answered

Chosen Option : --

Q.10 BZ7 is related to GE15 in a certain way. In the same way, PN13 is related to US21. To which of the following is IG12 related following the same logic?

- Ans 1. NL21
 2. PN21
 3. PM20
 4. NL20

Question Type : MCQ

Question ID : 630680438837

Option 1 ID : 6306801713160

Option 2 ID : 6306801713163

Option 3 ID : 6306801713162

Option 4 ID : 6306801713161

Status : Answered

Chosen Option : 4

Q.11 What should come in place of the question mark (?) in the given series?

6 16 27 39 52 ?

- Ans 1. 66
 2. 67
 3. 65
 4. 64

Question Type : MCQ

Question ID : 630680819508

Option 1 ID : 6306803210229

Option 2 ID : 6306803210230

Option 3 ID : 6306803210228

Option 4 ID : 6306803210227

Status : Answered

Chosen Option : 1

Q.12 In a certain code language, 'let us go' is coded as 'ck ru tb' and 'please go away' is coded as 'tb mg du'. How is 'go' coded in that code language?

- Ans
- 1. mg
 - 2. tb
 - 3. ru
 - 4. du

Question Type : MCQ
Question ID : 630680382353
Option 1 ID : 6306801490328
Option 2 ID : 6306801490327
Option 3 ID : 6306801490329
Option 4 ID : 6306801490330
Status : Answered
Chosen Option : 2

Q.13 What will come in place of the question mark (?) in the following equation, if '-' and '+' are interchanged and '÷' and '×' are interchanged?
 $15 - 4 + 9 \times 3 \div 6 = ?$

- Ans
- 1. 12
 - 2. 10
 - 3. 18
 - 4. 1

Question Type : MCQ
Question ID : 630680392941
Option 1 ID : 6306801532104
Option 2 ID : 6306801532103
Option 3 ID : 6306801532105
Option 4 ID : 6306801532102
Status : Answered
Chosen Option : 4

Q.14 Seven executives of a law firm (P, Q, R, S, T, U and V) are sitting at a circular table for a meeting, everyone facing towards the center (but not necessarily in the same order)

- P is an immediate neighbor of both U and S
- Q is sitting to the immediate right of S, and is one of the immediate neighbors of T
- V is sitting second to the right of T.

Who is sitting second to the left of U?

- Ans
- 1. R
 - 2. V
 - 3. Q
 - 4. T

Question Type : MCQ
Question ID : 630680381029
Option 1 ID : 6306801485093
Option 2 ID : 6306801485091
Option 3 ID : 6306801485094
Option 4 ID : 6306801485092
Status : Answered
Chosen Option : 1

Q.15 In a certain code language, 'gre pul sep' means 'eat the sofa', 'pul pra sem' means 'clear my sofa' and 'gre boi nad' means 'the great river'. What is the code for 'the' in the same code language?

- Ans
- 1. nad
 - 2. sep
 - 3. gre
 - 4. pul

Question Type : **MCQ**
Question ID : **630680381553**
Option 1 ID : **6306801487146**
Option 2 ID : **6306801487143**
Option 3 ID : **6306801487145**
Option 4 ID : **6306801487144**
Status : **Answered**
Chosen Option : **3**

Q.16 Read the given statements and conclusions carefully. Assuming that the information given in the statements is true, even if it appears to be at variance with commonly known facts, decide which of the given conclusions logically follow(s) from the statements.

Statements:

No sunflower is a lily.
No lily is a rose.

Conclusions:

(I) No sunflower is a rose.
(II) No rose is a lily.

- Ans
- 1. Only conclusion II follows
 - 2. Neither conclusion I nor II follows
 - 3. Only conclusion I follows
 - 4. Both conclusion I and II follow

Question Type : **MCQ**
Question ID : **630680419666**
Option 1 ID : **6306801637158**
Option 2 ID : **6306801637160**
Option 3 ID : **6306801637157**
Option 4 ID : **6306801637159**
Status : **Answered**
Chosen Option : **1**

SSC MTS (Non Technical) EXAM STUDY KIT



FREE SHIPPING 

- ▶ 100% SSC MTS Exam Syllabus Covered
- ▶ PRINTED Notes
- ▶ 8 Books, 700+ Pages
- ▶ 2500+ MCQs
- ▶ Practice Papers
- ▶ 1 Year Current Affairs

50% OFF

 SSCPOTAL.IN

SSC MTS PDF NOTES

100% Syllabus Covered



CLICK HERE

CLICK BELOW LINK TO DOWNLOAD PDF NOTES

<https://sscpportal.in/study-kit/mts>

<https://sscpportal.in/study-kit>

Q.17 In a code language, 'KITE' is written as 'PRGV' and 'MARBLE' is written as 'NZIYOV'.
How will 'DOLPHIN' be written in the same language?

- Ans 1. WLOKSRM
 2. XLOKSRM
 3. WMOKSRM
 4. XMOKSRM

Question Type : MCQ
Question ID : 630680465220
Option 1 ID : 6306801816917
Option 2 ID : 6306801816915
Option 3 ID : 6306801816916
Option 4 ID : 6306801816918
Status : Answered
Chosen Option : 1

Q.18 E, F, G, H, P, S, and T are sitting around a circular table, facing the centre (but not necessarily in the same order). F sits second to the right of T. P sits to the immediate left of S. Only one person sits between P and G when counted from the left of P. H sits third to the right of E. How many people are sitting between H and P when counted from the right of H?

- Ans 1. Two
 2. One
 3. Three
 4. None

Question Type : MCQ
Question ID : 630680392963
Option 1 ID : 6306801532187
Option 2 ID : 6306801532186
Option 3 ID : 6306801532188
Option 4 ID : 6306801532189
Status : Answered
Chosen Option : 4

Q.19 What will come in place of the question mark (?) of the following equation, if '+' and '-' are interchanged and 'x' and '÷' are interchanged?

$$7 + 8 - 24 \times 6 \div 3 = ?$$

- Ans 1. 15
 2. 11
 3. 8
 4. 16

Question Type : MCQ
Question ID : 630680194965
Option 1 ID : 630680756351
Option 2 ID : 630680756352
Option 3 ID : 630680756350
Option 4 ID : 630680756349
Status : Answered
Chosen Option : 2

Q.20 Read the given statements and conclusions carefully. Assuming that the information given in the statements is true, even if it appears to be at variance with commonly known facts, decide which of the given conclusions logically follow(s) from the statements.

Statements:

All schools are colleges. No college is a university.

Conclusions:

(I): No school is a university.

(II): All colleges are schools.

- Ans**
- 1. Neither conclusion I nor II follows.
 - 2. Both conclusions I and II follow.
 - 3. Only conclusion I follows.
 - 4. Only conclusion II follows.

Question Type : **MCQ**

Question ID : **630680410634**

Option 1 ID : **6306801601295**

Option 2 ID : **6306801601294**

Option 3 ID : **6306801601292**

Option 4 ID : **6306801601293**

Status : **Answered**

Chosen Option : **3**

Section : **General Awareness**

Q.1 The rock-cut caves in Karnataka, mainly at Badami and Aihole, were built under the patronage of the _____.

- Ans**
- 1. Cholas
 - 2. Guptas
 - 3. Chalukyas
 - 4. Mauryas

Question Type : **MCQ**

Question ID : **630680585179**

Option 1 ID : **6306802289477**

Option 2 ID : **6306802289475**

Option 3 ID : **6306802289474**

Option 4 ID : **6306802289476**

Status : **Not Answered**

Chosen Option : **--**

Q.2 Bharatanatyam dancer _____ received the Natya Kala Sarathy award from Sri Parthasarathy Swami Sabha in 2023 at Chennai.

- Ans 1. Vidhya Subramanian
 2. Srekala Bharath
 3. Hema Rajagopalan
 4. Sreedevi Unni

Question Type : **MCQ**
Question ID : **630680512012**
Option 1 ID : **6306802001019**
Option 2 ID : **6306802001021**
Option 3 ID : **6306802001020**
Option 4 ID : **6306802001018**
Status : **Not Answered**
Chosen Option : --

Q.3 The Kakrapar Atomic Power Plant is located in which state?

- Ans 1. Tamil Nadu
 2. Rajasthan
 3. Maharashtra
 4. Gujarat

Question Type : **MCQ**
Question ID : **630680511133**
Option 1 ID : **6306801997664**
Option 2 ID : **6306801997663**
Option 3 ID : **6306801997665**
Option 4 ID : **6306801997662**
Status : **Answered**
Chosen Option : 2

Q.4 What is the term 'ace' commonly associated within sports?

- Ans 1. A perfect shot in golf
 2. A high jump technique in athletics
 3. A fast serve in tennis
 4. Scoring a goal in soccer

Question Type : **MCQ**
Question ID : **630680466225**
Option 1 ID : **6306801820924**
Option 2 ID : **6306801820925**
Option 3 ID : **6306801820922**
Option 4 ID : **6306801820923**
Status : **Answered**
Chosen Option : 1

Q.5 A factory set up in my area is causing huge deforestation. Which of the following can we expect to see in the near future?

- A) Lowering of ground water
- B) Lower temperatures
- C) Frequent rain
- D) Arrival of new animals

Ans 1. A

2. B

3. D

4. C

Question Type : MCQ

Question ID : 630680539314

Option 1 ID : 6306802108393

Option 2 ID : 6306802108394

Option 3 ID : 6306802108392

Option 4 ID : 6306802108395

Status : Answered

Chosen Option : 4

Q.6 Which of the following statements about the Ozone layer are true?

Statement A: It is found in the stratosphere.

Statement B: Chlorofluorocarbons (CFCs) are responsible for ozone hole.

Statement C: Ozone layer is found around 15–30 km above the earth's surface.

Statement D: Ozone layer is expected not to recover anymore now.

Ans 1. Only statements A and D

2. Only statements A, B and C

3. Only statements A and B

4. Only statement B, C and D

Question Type : MCQ

Question ID : 630680545125

Option 1 ID : 6306802131249

Option 2 ID : 6306802131248

Option 3 ID : 6306802131247

Option 4 ID : 6306802131250

Status : Answered

Chosen Option : 4

Q.7 Which of the following types of volcanic eruptions of Earth's volcanoes are most explosive?

Ans 1. Dykes

2. Caldera

3. Flood basalt provinces

4. Lapolith

Question Type : MCQ

Question ID : 630680517187

Option 1 ID : 6306802021146

Option 2 ID : 6306802021145

Option 3 ID : 6306802021144

Option 4 ID : 6306802021147

Status : Answered

Chosen Option : 1

Q.8 Which book has been authored by Shovana Narayan and Geetika Kalha?

- Ans 1. Indian Mythology through Classical Dance
 2. Cultural Rhythms in Emotions
 3. Dancing in the Family
 4. Dance Gestures: Mirror of Expressions

Question Type : MCQ
Question ID : 630680474210
Option 1 ID : 6306801852530
Option 2 ID : 6306801852531
Option 3 ID : 6306801852533
Option 4 ID : 6306801852532
Status : Not Answered
Chosen Option : --

Q.9 How many Pillar Edicts or Major Pillar Edicts (PEs) of Ashoka are found?

- Ans 1. Two
 2. Seven
 3. Fourteen
 4. Nine

Question Type : MCQ
Question ID : 630680113855
Option 1 ID : 630680440946
Option 2 ID : 630680440947
Option 3 ID : 630680440949
Option 4 ID : 630680440948
Status : Answered
Chosen Option : 1

Q.10 A famous organisation Self-Employed Women's Association (SEWA) is related with which of the following states?

- Ans 1. Gujarat
 2. Haryana
 3. Madhya Pradesh
 4. Uttar Pradesh

Question Type : MCQ
Question ID : 630680512422
Option 1 ID : 6306802002659
Option 2 ID : 6306802002660
Option 3 ID : 6306802002658
Option 4 ID : 6306802002661
Status : Answered
Chosen Option : 2

Q.11 At the _____, Neeraj Chopra became the first Indian to win a gold medal in javelin throw.

- Ans 1. Asian Games, 2022
 2. Asian Games, 2010
 3. Asian Games, 2018
 4. Asian Games, 2014

Question Type : MCQ
Question ID : 630680552141
Option 1 ID : 6306802158750
Option 2 ID : 6306802158752
Option 3 ID : 6306802158749
Option 4 ID : 6306802158751
Status : Answered
Chosen Option : 3

Q.12 Who among the following is the author of the book, 'A History of British India'?

- Ans 1. Bentham
 2. James Mill
 3. Renley
 4. Grenville Austin

Question Type : MCQ
Question ID : 630680652456
Option 1 ID : 6306802554308
Option 2 ID : 6306802554307
Option 3 ID : 6306802554309
Option 4 ID : 6306802554306
Status : Answered
Chosen Option : 2

Q.13 According to Article 280 of the Indian Constitution, the Finance Commission needs to be appointed for every _____.

- Ans 1. one year
 2. three years
 3. five years
 4. two years

Question Type : MCQ
Question ID : 630680799050
Option 1 ID : 6306803131002
Option 2 ID : 6306803131004
Option 3 ID : 6306803131005
Option 4 ID : 6306803131003
Status : Answered
Chosen Option : 4

Q.14 Lokrang, a five-day festival organised by the Madhya Pradesh Adivasi Lok Kala Academy, begins on _____ every year.

- Ans
- 1. 22nd March
 - 2. 26th January
 - 3. 24th July
 - 4. 26th September

Question Type : MCQ
Question ID : 630680798923
Option 1 ID : 6306803130500
Option 2 ID : 6306803130501
Option 3 ID : 6306803130499
Option 4 ID : 6306803130498
Status : Not Answered
Chosen Option : --

Q.15 A four-carbon chain with a triple bond is called _____.

- Ans
- 1. butyne
 - 2. butanal
 - 3. butanol
 - 4. butene

Question Type : MCQ
Question ID : 630680729122
Option 1 ID : 6306802857239
Option 2 ID : 6306802857241
Option 3 ID : 6306802857240
Option 4 ID : 6306802857238
Status : Answered
Chosen Option : 1

Q.16 In May 2023, who was sworn in as Central Vigilance Commissioner?

- Ans
- 1. Praveen Kumar Srivastava
 - 2. Samuel Joseph
 - 3. Ram Manohar Singh
 - 4. Dayal Yadav

Question Type : MCQ
Question ID : 630680798956
Option 1 ID : 6306803130622
Option 2 ID : 6306803130623
Option 3 ID : 6306803130624
Option 4 ID : 6306803130625
Status : Answered
Chosen Option : 1

Q.17 Oak and chestnut trees are found in which type of forest in India?

- Ans 1. Mangrove forests
 2. Thorn forests
 3. Montane forests
 4. Tropical deciduous forests

Question Type : MCQ
Question ID : 630680401729
Option 1 ID : 6306801566690
Option 2 ID : 6306801566692
Option 3 ID : 6306801566691
Option 4 ID : 6306801566693
Status : Answered
Chosen Option : 1

Q.18 In which of the following sessions of Congress did the Party issue a call to celebrate 26th January as 'Purna Swaraj Day'?

- Ans 1. Delhi 1923
 2. Karachi 1931
 3. Lahore 1929
 4. Madras 1927

Question Type : MCQ
Question ID : 630680275686
Option 1 ID : 6306801071255
Option 2 ID : 6306801071258
Option 3 ID : 6306801071257
Option 4 ID : 6306801071256
Status : Answered
Chosen Option : 3

Q.19 Vani Jairam, who won Padma Bhushan 2023, belongs to which state?

- Ans 1. Tamil Nadu
 2. Maharashtra
 3. Madhya Pradesh
 4. Gujarat

Question Type : MCQ
Question ID : 630680482206
Option 1 ID : 6306801883341
Option 2 ID : 6306801883339
Option 3 ID : 6306801883342
Option 4 ID : 6306801883340
Status : Not Answered
Chosen Option : --

Q.20 Which Article of the Constitution of India directs the State to provide public assistance to its citizens in case of unemployment, old age, sickness and disablement, within the limits of its economic capacity and development?

- Ans 1. Article 32
 2. Article 41
 3. Article 12
 4. Article 20

Question Type : MCQ
Question ID : 630680115728
Option 1 ID : 630680448252
Option 2 ID : 630680448253
Option 3 ID : 630680448250
Option 4 ID : 630680448251
Status : Answered
Chosen Option : 2

Q.21 At the time of its adoption, the Constitution contained 395 Articles and _____ Schedules.

- Ans 1. 8
 2. 7
 3. 9
 4. 11

Question Type : MCQ
Question ID : 630680547892
Option 1 ID : 6306802142116
Option 2 ID : 6306802142115
Option 3 ID : 6306802142117
Option 4 ID : 6306802142118
Status : Answered
Chosen Option : 1

Q.22 The last Mughal emperor of India was:

- Ans 1. Aurangzeb
 2. Shah Jahan
 3. Bahadur Shah II
 4. Akbar II

Question Type : MCQ
Question ID : 630680682790
Option 1 ID : 6306802673903
Option 2 ID : 6306802673905
Option 3 ID : 6306802673904
Option 4 ID : 6306802673906
Status : Answered
Chosen Option : 3

Q.23 In which year was the first Socio Economic and Caste Census (SECC) conducted in India?

- Ans 1. 1901
 2. 2011
 3. 2001
 4. 1911

Question Type : MCQ
Question ID : 630680283342
Option 1 ID : 6306801101493
Option 2 ID : 6306801101492
Option 3 ID : 6306801101491
Option 4 ID : 6306801101494
Status : Answered
Chosen Option : 3

Q.24 In 2023, Government of India has announced to set up a/an _____ DigiLocker for use by MSMEs, large businesses and charitable trusts to store and share documents online securely.

- Ans 1. Bond
 2. Company
 3. Entity
 4. Macro

Question Type : MCQ
Question ID : 630680467071
Option 1 ID : 6306801824239
Option 2 ID : 6306801824237
Option 3 ID : 6306801824238
Option 4 ID : 6306801824240
Status : Answered
Chosen Option : 4

Q.25 Padma Subrahmanyam is associated with which dance form?

- Ans 1. Bharatanatyam
 2. Manipuri
 3. Kathak
 4. Chhau

Question Type : MCQ
Question ID : 630680570928
Option 1 ID : 6306802232773
Option 2 ID : 6306802232774
Option 3 ID : 6306802232775
Option 4 ID : 6306802232776
Status : Answered
Chosen Option : 1

Section : English Language and Comprehension

Q.1 Choose the correctly spelt word to fill in the blank meaningfully.
The citizens of Iraq wanted _____ after years of war.

- Ans 1. pease
 2. piece
 3. peace
 4. peice

Question Type : MCQ
Question ID : 630680508260
Option 1 ID : 6306801986340
Option 2 ID : 6306801986337
Option 3 ID : 6306801986338
Option 4 ID : 6306801986339
Status : Answered
Chosen Option : 3

Q.2 Select the most appropriate meaning of the underlined word.
The Prime Minister will address the nation tomorrow.

- Ans 1. A postal code for sending letters
 2. To deliver a speech
 3. To greet people
 4. A landmark

Question Type : MCQ
Question ID : 630680517450
Option 1 ID : 6306802022196
Option 2 ID : 6306802022198
Option 3 ID : 6306802022199
Option 4 ID : 6306802022197
Status : Answered
Chosen Option : 2

Q.3 In the following sentence the underlined part contains an error. Alternatives to the underlined part are given as options. Select the correct alternative.
Their chance of winning is slimmest.

- Ans 1. slimly
 2. slimmer
 3. most slim
 4. slim

Question Type : MCQ
Question ID : 630680514723
Option 1 ID : 6306802011520
Option 2 ID : 6306802011517
Option 3 ID : 6306802011519
Option 4 ID : 6306802011518
Status : Answered
Chosen Option : 4

Q.4 Select the most appropriate option to fill in the blank.

The professor's _____ lecture was filled with complex concepts.

- Ans
- 1. lucyd
 - 2. lucide
 - 3. lucid
 - 4. lucied

Question Type : MCQ
Question ID : 630680473976
Option 1 ID : 6306801851596
Option 2 ID : 6306801851594
Option 3 ID : 6306801851595
Option 4 ID : 6306801851597
Status : Answered
Chosen Option : 3

Q.5 Select the most appropriate option to substitute the underlined segment in the given sentence.

Shirin came off with a brilliant idea to solve the problem.

- Ans
- 1. came off to a brilliant idea
 - 2. came up with a brilliant idea
 - 3. came up in a brilliant idea
 - 4. came off on a brilliant idea

Question Type : MCQ
Question ID : 630680549282
Option 1 ID : 6306802147589
Option 2 ID : 6306802147590
Option 3 ID : 6306802147591
Option 4 ID : 6306802147592
Status : Answered
Chosen Option : 2

Q.6 In the following passage, some words have been deleted. Read the passage carefully and select the most appropriate option to fill in the blanks.

Martin Luther King Jr. started a crusade for discrimination _____ African Americans. He relied on peaceful demonstrations and demonstrators. His most famous march was a powerful rally of about 250,000 people in Washington in 1963, where he _____ one of the most famous speeches in history.

- Ans
- 1. opposed; dropped
 - 2. versus; brought
 - 3. counter; dispatched
 - 4. against; delivered

Question Type : MCQ
Question ID : 630680515128
Option 1 ID : 6306802013027
Option 2 ID : 6306802013025
Option 3 ID : 6306802013026
Option 4 ID : 6306802013028
Status : Answered
Chosen Option : 4

Q.7 Select the most appropriate option to fill in the blanks.
The teacher asked the students to remain _____, but the noise continued to _____. She finally had to raise her voice to gain control.

- Ans 1. silent; ascend
 2. quit; rise
 3. still; elevate
 4. calm; escalate

Question Type : MCQ
Question ID : 6306801031664
Option 1 ID : 6306804049365
Option 2 ID : 6306804049368
Option 3 ID : 6306804049367
Option 4 ID : 6306804049366
Status : Answered
Chosen Option : 4

Q.8 Select the most appropriate meaning of the idiom from the options given below.
To accept the gauntlet

- Ans 1. To suffer a great insult
 2. To accept failure
 3. To suffer financial loss
 4. To accept a challenge

Question Type : MCQ
Question ID : 630680168553
Option 1 ID : 630680652826
Option 2 ID : 630680652824
Option 3 ID : 630680652825
Option 4 ID : 630680652827
Status : Answered
Chosen Option : 4

Q.9 In the following sentence the underlined part contains an error. Alternatives to the underlined part are given as options. Select the correct alternative.
Pankaj is a better cook.

- Ans 1. goodest
 2. best
 3. good
 4. more good

Question Type : MCQ
Question ID : 630680514713
Option 1 ID : 6306802011480
Option 2 ID : 6306802011477
Option 3 ID : 6306802011478
Option 4 ID : 6306802011479
Status : Answered
Chosen Option : 2

Q.10 Select the correct spelling of the underlined word in the given sentence.

Is he ready to risk his acredation for the greater good?

- Ans 1. ~~acredation~~
 2. accreditation
 3. ~~acreditation~~
 4. ~~accraditation~~

Question Type : MCQ
Question ID : 630680540465
Option 1 ID : 6306802112944
Option 2 ID : 6306802112943
Option 3 ID : 6306802112945
Option 4 ID : 6306802112946
Status : Answered
Chosen Option : 2

Q.11 The following sentence has been split into four segments. Identify the segment that contains a grammatical error.

I still / do not understand / why he did not / reply my email.

- Ans 1. ~~I still~~
 2. reply my email
 3. ~~why he did not~~
 4. ~~do not understand~~

Question Type : MCQ
Question ID : 63068068994
Option 1 ID : 630680266666
Option 2 ID : 630680266669
Option 3 ID : 630680266668
Option 4 ID : 630680266667
Status : Answered
Chosen Option : 2

Q.12 Select the most appropriate option to fill in the blank.
You need to rest the _____ before baking the bread.

- Ans 1. ~~paste~~
 2. dough
 3. ~~lard~~
 4. ~~doe~~

Question Type : MCQ
Question ID : 630680515268
Option 1 ID : 6306802013540
Option 2 ID : 6306802013538
Option 3 ID : 6306802013537
Option 4 ID : 6306802013539
Status : Answered
Chosen Option : 2

Q.13 Select the most appropriate option to fill in the blank.

The team captain inquired of his teammates _____ they preferred to choose batting as their initial option.

Ans 1. whether

2. whither

3. wither

4. weather

Question Type : MCQ

Question ID : 630680459194

Option 1 ID : 6306801793629

Option 2 ID : 6306801793631

Option 3 ID : 6306801793632

Option 4 ID : 6306801793630

Status : Answered

Chosen Option : 1

Q.14 Select the INCORRECTLY spelt word from the given sentence.

The teacher's encouragment motivated the students to excel in their studies.

Ans 1. Teacher's

2. Motivated

3. Excel

4. Encouragment

Question Type : MCQ

Question ID : 630680615860

Option 1 ID : 6306802410106

Option 2 ID : 6306802410108

Option 3 ID : 6306802410109

Option 4 ID : 6306802410107

Status : Answered

Chosen Option : 1

Q.15 Select the most appropriate ANTONYM of the given word.

Inferior

Ans 1. Beautiful

2. Substandard

3. Superior

4. Mediocre

Question Type : MCQ

Question ID : 630680554300

Option 1 ID : 6306802175774

Option 2 ID : 6306802167055

Option 3 ID : 6306802167053

Option 4 ID : 6306802167054

Status : Answered

Chosen Option : 3

Q.16 Read the following sentence and select its future tense form from the options given below:
Rachel and Rahul joined forces on a project and successfully completed it within a month.

- Ans** 1. Rachel and Rahul will join forces on a project and successfully complete it within a month.
 2. Rachel and Rahul have joined forces on a project and successfully completed it within a month.
 3. Rachel and Rahul should join forces on a project and successfully complete it within a month.
 4. Rachel and Rahul are joining forces on a project and successfully completing it within a month.

Question Type : **MCQ**
Question ID : **6306801106300**
Option 1 ID : **6306804345630**
Option 2 ID : **6306804345631**
Option 3 ID : **6306804345633**
Option 4 ID : **6306804345632**
Status : **Answered**
Chosen Option : **1**

Q.17 Select the most appropriate synonym of the given word.

Hire

- Ans** 1. Endure
 2. Engross
 3. Enhance
 4. Engage

Question Type : **MCQ**
Question ID : **630680410883**
Option 1 ID : **6306801602288**
Option 2 ID : **6306801602289**
Option 3 ID : **6306801602290**
Option 4 ID : **6306801602287**
Status : **Answered**
Chosen Option : **1**

Q.18 Select the most appropriate idiom that can substitute the highlighted text in the given sentence.

The minister was in partnership with the queen in poisoning the King.

- Ans 1. in cahoots
 2. run amok
 3. at one's beck and call
 4. in the blues

Question Type : MCQ
Question ID : 630680454123
Option 1 ID : 6306801773427
Option 2 ID : 6306801773430
Option 3 ID : 6306801773428
Option 4 ID : 6306801773429
Status : Not Answered
Chosen Option : --

Q.19 Select the grammatically correct sentence.

- Ans 1. A secondary section of the school is located at an end of the street.
 2. The secondary section of a school is located at the end of a street.
 3. The secondary section of a school is located at an end of the street.
 4. The secondary section of the school is located at the end of the street.

Question Type : MCQ
Question ID : 6306801106299
Option 1 ID : 6306804345626
Option 2 ID : 6306804345628
Option 3 ID : 6306804345627
Option 4 ID : 6306804345629
Status : Answered
Chosen Option : 4

Q.20 Select the grammatically correct sentence from the given options.

- Ans 1. She was not allowed to enter the hotel as her clothes were dirty.
 2. She was not allowed to enter the hotel as her clothes were dirtier.
 3. She was not allowed to enter the hotel as her clothes was dirtier.
 4. She was not allow to enter the hotel as her clothes were dirty.

Question Type : MCQ
Question ID : 630680514695
Option 1 ID : 6306802011407
Option 2 ID : 6306802011406
Option 3 ID : 6306802011405
Option 4 ID : 6306802011408
Status : Answered
Chosen Option : 1

Comprehension:

In the following passage, some words have been deleted. Read the passage carefully and select the most appropriate option to fill in each blank.

Employers, nowadays, are (1)_____ on team-building as it proves to be useful in being more productive. So, they create occasions for the employees to spend time together. Some employees are sick (2) _____ office festival parties with mandatory dress codes and fun competitions. Some others (3)_____ of having to forcibly bond with colleagues during after-work happy hours when they would rather be at home. A French court (4)_____ recently that one very much has the right to be boring at the workplace. Seven years after Mr. T was fired from his company for not participating in fun activities, which included going out for drinks after work once a week, the court said that Mr. T was merely exercising his 'freedom of expression'. It added that the company's culture of fun (5)_____ Mr. T 's fundamental right to 'dignity and respect of private life'. However, employers and HR personnel insist that team-bonding initiatives are crucial to the workplace and the employees too feel the same if they want promotions.

SubQuestion No : 21

Q.21 Select the most appropriate option to fill in blank number 1.

- Ans 1. focuses
 2. focus
 3. focusing
 4. has focused

Question Type : **MCQ**

Question ID : **630680206305**

Option 1 ID : **630680800003**

Option 2 ID : **630680800004**

Option 3 ID : **630680800006**

Option 4 ID : **630680800005**

Status : **Answered**

Chosen Option : **2**

Comprehension:

In the following passage, some words have been deleted. Read the passage carefully and select the most appropriate option to fill in each blank.

Employers, nowadays, are (1)_____ on team-building as it proves to be useful in being more productive. So, they create occasions for the employees to spend time together. Some employees are sick (2) _____ office festival parties with mandatory dress codes and fun competitions. Some others (3)_____ of having to forcibly bond with colleagues during after-work happy hours when they would rather be at home. A French court (4)_____ recently that one very much has the right to be boring at the workplace. Seven years after Mr. T was fired from his company for not participating in fun activities, which included going out for drinks after work once a week, the court said that Mr. T was merely exercising his 'freedom of expression'. It added that the company's culture of fun (5)_____ Mr. T's fundamental right to 'dignity and respect of private life'. However, employers and HR personnel insist that team-bonding initiatives are crucial to the workplace and the employees too feel the same if they want promotions.

SubQuestion No : 22

Q.22 Select the most appropriate option to fill in blank number 2.

Ans 1. of

2. with

3. for

4. from

Question Type : **MCQ**

Question ID : **630680206306**

Option 1 ID : **630680800007**

Option 2 ID : **630680800008**

Option 3 ID : **630680800009**

Option 4 ID : **630680800010**

Status : **Answered**

Chosen Option : **1**

Comprehension:

In the following passage, some words have been deleted. Read the passage carefully and select the most appropriate option to fill in each blank.

Employers, nowadays, are (1)_____ on team-building as it proves to be useful in being more productive. So, they create occasions for the employees to spend time together. Some employees are sick (2) _____ office festival parties with mandatory dress codes and fun competitions. Some others (3)_____ of having to forcibly bond with colleagues during after-work happy hours when they would rather be at home. A French court (4)_____ recently that one very much has the right to be boring at the workplace. Seven years after Mr. T was fired from his company for not participating in fun activities, which included going out for drinks after work once a week, the court said that Mr. T was merely exercising his 'freedom of expression'. It added that the company's culture of fun (5)_____ Mr. T 's fundamental right to 'dignity and respect of private life'. However, employers and HR personnel insist that team-bonding initiatives are crucial to the workplace and the employees too feel the same if they want promotions.

SubQuestion No : 23

Q.23 Select the most appropriate option to fill in blank number 3.

- Ans 1. tired
 2. has tired
 3. have tired
 4. are tired

Question Type : **MCQ**

Question ID : **630680206307**

Option 1 ID : **630680800011**

Option 2 ID : **630680800014**

Option 3 ID : **630680800013**

Option 4 ID : **630680800012**

Status : **Answered**

Chosen Option : **4**

SSC MTS (Non Technical) EXAM STUDY KIT



FREE SHIPPING 

- ▶ 100% SSC MTS Exam Syllabus Covered
- ▶ PRINTED Notes
- ▶ 8 Books, 700+ Pages
- ▶ 2500+ MCQs
- ▶ Practice Papers
- ▶ 1 Year Current Affairs

50% OFF

SSCPORTAL.IN

SSC MTS PDF NOTES

100% Syllabus Covered



CLICK HERE

CLICK BELOW LINK TO DOWNLOAD PDF NOTES

<https://sscpportal.in/study-kit/mts>

<https://sscpportal.in/study-kit>

Comprehension:

In the following passage, some words have been deleted. Read the passage carefully and select the most appropriate option to fill in each blank.

Employers, nowadays, are (1)_____ on team-building as it proves to be useful in being more productive. So, they create occasions for the employees to spend time together. Some employees are sick (2) _____ office festival parties with mandatory dress codes and fun competitions. Some others (3)_____ of having to forcibly bond with colleagues during after-work happy hours when they would rather be at home. A French court (4)_____ recently that one very much has the right to be boring at the workplace. Seven years after Mr. T was fired from his company for not participating in fun activities, which included going out for drinks after work once a week, the court said that Mr. T was merely exercising his 'freedom of expression'. It added that the company's culture of fun (5)_____ Mr. T 's fundamental right to 'dignity and respect of private life'. However, employers and HR personnel insist that team-bonding initiatives are crucial to the workplace and the employees too feel the same if they want promotions.

SubQuestion No : 24

Q.24 Select the most appropriate option to fill in blank number 4.

- Ans 1. was ruled
 2. have ruled
 3. has ruled
 4. is ruled

Question Type : **MCQ**

Question ID : **630680206308**

Option 1 ID : **630680800018**

Option 2 ID : **630680800015**

Option 3 ID : **630680800016**

Option 4 ID : **630680800017**

Status : **Answered**

Chosen Option : **4**

Comprehension:

In the following passage, some words have been deleted. Read the passage carefully and select the most appropriate option to fill in each blank.

Employers, nowadays, are (1)_____ on team-building as it proves to be useful in being more productive. So, they create occasions for the employees to spend time together. Some employees are sick (2) _____ office festival parties with mandatory dress codes and fun competitions. Some others (3)_____ of having to forcibly bond with colleagues during after-work happy hours when they would rather be at home. A French court (4)_____ recently that one very much has the right to be boring at the workplace. Seven years after Mr. T was fired from his company for not participating in fun activities, which included going out for drinks after work once a week, the court said that Mr. T was merely exercising his 'freedom of expression'. It added that the company's culture of fun (5)_____ Mr. T 's fundamental right to 'dignity and respect of private life'. However, employers and HR personnel insist that team-bonding initiatives are crucial to the workplace and the employees too feel the same if they want promotions.

SubQuestion No : 25

Q.25 Select the most appropriate option to fill in blank number 5.

- Ans 1. violate
 2. is violated
 3. will violate
 4. violated

Question Type : **MCQ**

Question ID : **630680206309**

Option 1 ID : **630680800019**

Option 2 ID : **630680800022**

Option 3 ID : **630680800021**

Option 4 ID : **630680800020**

Status : **Answered**

Chosen Option : **4**



Download SSC CGL, CHSL E-BOOKS

[CLICK HERE](#)