

Multi Tasking Non Technical Staff and Havaladar CBIC and CBN Examination 2024

Roll Number	
Candidate Name	
Venue Name	TCS Gito Bitan
Exam Date	08/10/2024
Exam Time	4:00 PM - 5:30 PM
Subject	MTS Non Tech Havaladar CBIC and CBN Examination 2024

Section : Numerical and Mathematical Ability

Q.1 The average weight of a family of five members (in kg) whose weights are 40 kg, 49 kg, 56 kg, 65 kg and 38 kg is:

- Ans
- ☒ 1. 50.6
 - ☒ 2. 48.6
 - ☒ 3. 51.6
 - ☒ 4. 49.6

Question Type : MCQ
Question ID : 630680551632
Option 1 ID : 6306802156754
Option 2 ID : 6306802156755
Option 3 ID : 6306802156756
Option 4 ID : 6306802156753
Status : Answered
Chosen Option : 4

Q.2 360 toffees are distributed among Pushkal, Quadir and Rustam in the ratio 2 : 3 : 4. After distribution, Quadir gives 20% of his toffees to Pushkal and Rustam gives 25% of his toffees to Pushkal. What is the new ratio of toffees with Pushkal, Quadir and Rustam?

- Ans
- ☒ 1. 6 : 4 : 5
 - ☒ 2. 3 : 5 : 7
 - ☒ 3. 5 : 4 : 6
 - ☒ 4. 7 : 3 : 5

Question Type : MCQ
Question ID : 630680477499
Option 1 ID : 6306801865155
Option 2 ID : 6306801865153
Option 3 ID : 6306801865154
Option 4 ID : 6306801865156
Status : Answered
Chosen Option : 1

Q.3 Reena sells an article at 12% below its cost price. Had she sold it for ₹540 more, she would have gained 15%. At what price should she sell the article to gain 20%?

- Ans
- ☒ 1. ₹2,004
 - ☒ 2. ₹4,200
 - ☒ 3. ₹2,400
 - ☒ 4. ₹2,040

Question Type : MCQ
Question ID : 630680460206
Option 1 ID : 6306801797271
Option 2 ID : 6306801797273
Option 3 ID : 6306801797272
Option 4 ID : 6306801797270
Status : Answered
Chosen Option : 3



Download SSC CGL, CHSL E-BOOKS

CLICK HERE

Q.4

A solid spherical item is melted into the shape of a cylinder mounted by a cone having same radius. The diameters of the cylinder and sphere are 21 cm each. What is the height (in cm) of the cone if the height of the cylinder is 7 cm?

Take $\pi = \frac{22}{7}$

Ans

1. 7

2. 10.5

3. 21

4. 14

Question Type : MCQ

Question ID : 630680392932

Option 1 ID : 6306801532069

Option 2 ID : 6306801532067

Option 3 ID : 6306801532068

Option 4 ID : 6306801532066

Status : Answered

Chosen Option : 3

Q.5

The table below shows the number of students enrolled in four colleges over the four years.

Colleges	P	Q	R	S
Year				
2019	520	578	298	416
2020	625	603	365	254
2021	715	476	548	325
2022	539	235	258	842

What is the average number of students studying per year in college Q over the given years?

Ans

1. 505

2. 473

3. 455

4. 548

Question Type : MCQ

Question ID : 630680523810

Option 1 ID : 6306802047393

Option 2 ID : 6306802047391

Option 3 ID : 6306802047392

Option 4 ID : 6306802047394

Status : Answered

Chosen Option : 2

Q.6

A fast train takes 1 hour less than a slow train for a journey of 96 km. If the speed of the slow train is 8 km/h less than that of the fast train, then find the speeds of the fast train and slow train respectively.

Ans

1. 12 km/h, 14 km/h

2. 32 km/h, 24 km/h

3. 26 km/h, 34 km/h

4. 34 km/h, 28 km/h

Question Type : MCQ

Question ID : 630680135114

Option 1 ID : 630680523245

Option 2 ID : 630680523244

Option 3 ID : 630680523242

Option 4 ID : 630680523243

Status : Answered

Chosen Option : 2

SSC MTS (Non Technical) EXAM STUDY KIT



FREE
SHIPPING 

- ▶ 100% SSC MTS Exam Syllabus Covered
- ▶ PRINTED Notes
- ▶ 8 Books, 700+ Pages
- ▶ 2500+ MCQs
- ▶ Practice Papers
- ▶ 1 Year Current Affairs

50%
OFF

 **SSCPORTAL.IN**

SSC MTS PDF NOTES

100% Syllabus Covered



CLICK HERE

CLICK BELOW LINK TO DOWNLOAD PDF NOTES

<https://sscpportal.in/study-kit/mts>

<https://sscpportal.in/study-kit>

Q.7 A car travels 80 km at the speed of 20 km/h and the next 30 km at the speed of 30 km/h. What is its average speed?

Ans ☒ 1. 40 km/h
☒ 2. 30 km/h
☒ 3. 20 km/h
☒ 4. 22 km/h

Question Type : MCQ
Question ID : 630680287413
Option 1 ID : 6306801117562
Option 2 ID : 6306801117559
Option 3 ID : 6306801117560
Option 4 ID : 6306801117561
Status : Answered
Chosen Option : 4

Q.8 There are 40 students in a class. Their average weight is 60 kg. Two students left the class. Then the average weight is reduced by 500 g. Find the weight of the two students who left the class (in kg).

Ans ☒ 1. 139
☒ 2. 129
☒ 3. 130
☒ 4. 140

Question Type : MCQ
Question ID : 630680419650
Option 1 ID : 6306801637098
Option 2 ID : 6306801637099
Option 3 ID : 6306801637097
Option 4 ID : 6306801637096
Status : Answered
Chosen Option : 1

Q.9 Etika invested some amount at a rate 9% per annum and earns a S.I. of ₹810 after 3 years. If the rate of interest had been 10% then how much more interest (in ₹) would have Etika earned on the same amount in the same time period?

Ans ☒ 1. 360
☒ 2. 540
☒ 3. 240
☒ 4. 405

Question Type : MCQ
Question ID : 630680397455
Option 1 ID : 630680154974
Option 2 ID : 630680154974
Option 3 ID : 630680154974
Option 4 ID : 630680154974
Status : Answered
Chosen Option : 1

Q.10 The average weight of a family of five members (in kg) whose weights are 40 kg, 49 kg, 56 kg, 66 kg and 38 kg is:

Ans ☒ 1. 50.8
☒ 2. 49.8
☒ 3. 51.8
☒ 4. 48.8

Question Type : MCQ
Question ID : 630680551637
Option 1 ID : 6306802156774
Option 2 ID : 6306802156773
Option 3 ID : 6306802156776
Option 4 ID : 6306802156775
Status : Answered
Chosen Option : 2

Q.11 Find the simple interest (in ₹) on ₹4000 as a sum borrowed at 3% per year rate of interest for 6 years.

- Ans
- ☐ 1. 660
 - ☒ 2. 720
 - ☐ 3. 680
 - ☐ 4. 760

Question Type : MCQ
Question ID : 630680591997
Option 1 ID : 6306802316457
Option 2 ID : 6306802316455
Option 3 ID : 6306802316458
Option 4 ID : 6306802316456
Status : Answered
Chosen Option : 2

Q.12 The centroid of a $\triangle XYZ$ is G. The area of $\triangle XYZ$ is 45 cm^2 . The area of $\triangle GYZ$ is:

- Ans
- ☒ 1. 15 cm^2
 - ☐ 2. 7.5 cm^2
 - ☐ 3. 30 cm^2
 - ☐ 4. 22.5 cm^2

Question Type : MCQ
Question ID : 630680103395
Option 1 ID : 630680401826
Option 2 ID : 630680401825
Option 3 ID : 630680401823
Option 4 ID : 630680401824
Status : Answered
Chosen Option : 1

Q.13 A person got an article at 22% discount, if he got no discount, then he had to pay ₹1,760 more. How much did he pay (in ₹) for the article?

- Ans
- ☐ 1. 5,120
 - ☐ 2. 6,360
 - ☒ 3. 6,240
 - ☐ 4. 5,640

Question Type : MCQ
Question ID : 630680397526
Option 1 ID : 6306801550022
Option 2 ID : 6306801550025
Option 3 ID : 6306801550024
Option 4 ID : 6306801550023
Status : Answered
Chosen Option : 3

Q.14 By selling 20 cakes, a shopkeeper earns selling price of 4 cakes. Determine the profit percentage.

- Ans
- ☐ 1. 10%
 - ☐ 2. 20%
 - ☒ 3. 25%
 - ☐ 4. 4%

Question Type : MCQ
Question ID : 630680103840
Option 1 ID : 630680403594
Option 2 ID : 630680403591
Option 3 ID : 630680403592
Option 4 ID : 630680403593
Status : Answered
Chosen Option : 3

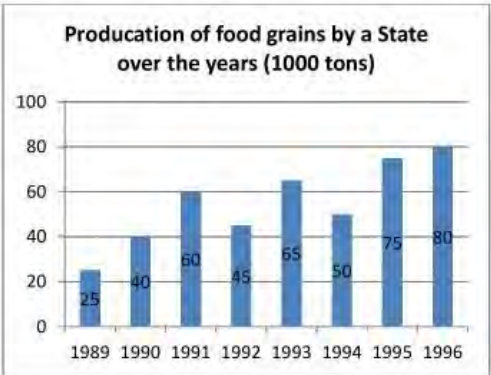
<p>Q.15 R earns ₹55,000 per month and his annual expenditure is ₹4,50,000. What is his percentage of savings per annum?</p> <p>Ans <input checked="" type="checkbox"/> 1. 36.21% <input checked="" type="checkbox"/> 2. 38.12% <input checked="" type="checkbox"/> 3. 31.82% <input checked="" type="checkbox"/> 4. 32.81%</p>	<div><p>Question Type : MCQ</p><p>Question ID : 630680464521</p><p>Option 1 ID : 6306801814119</p><p>Option 2 ID : 6306801814120</p><p>Option 3 ID : 6306801814122</p><p>Option 4 ID : 6306801814121</p><p>Status : Answered</p><p>Chosen Option : 3</p></div>
<p>Q.16 The mean of marks secured by 3 students in grade A of class XI is 83, that of 4 students of grade B is 76 and that of 5 students of grade C is 85. What will be the mean of marks of the students of three grades of Class XI?</p> <p>Ans <input checked="" type="checkbox"/> 1. 80.5 <input checked="" type="checkbox"/> 2. 81 <input checked="" type="checkbox"/> 3. 80 <input checked="" type="checkbox"/> 4. 81.5</p>	<div><p>Question Type : MCQ</p><p>Question ID : 630680484323</p><p>Option 1 ID : 6306801891640</p><p>Option 2 ID : 6306801891639</p><p>Option 3 ID : 6306801891641</p><p>Option 4 ID : 6306801891638</p><p>Status : Answered</p><p>Chosen Option : 4</p></div>
<p>Q.17 What sum (in ₹) will earn a simple interest of ₹240 in 2 years at 16% per year rate of interest?</p> <p>Ans <input checked="" type="checkbox"/> 1. 750 <input checked="" type="checkbox"/> 2. 375 <input checked="" type="checkbox"/> 3. 1000 <input checked="" type="checkbox"/> 4. 1500</p>	<div><p>Question Type : MCQ</p><p>Question ID : 630680612170</p><p>Option 1 ID : 6306802395412</p><p>Option 2 ID : 6306802395413</p><p>Option 3 ID : 6306802395415</p><p>Option 4 ID : 6306802395414</p><p>Status : Answered</p><p>Chosen Option : 1</p></div>
<p>Q.18 The HCF of 513,1134 and 1215 is:</p> <p>Ans <input checked="" type="checkbox"/> 1. 27 <input checked="" type="checkbox"/> 2. 43 <input checked="" type="checkbox"/> 3. 45 <input checked="" type="checkbox"/> 4. 19</p>	<div><p>Question Type : MCQ</p><p>Question ID : 63068079549</p><p>Option 1 ID : 630680308233</p><p>Option 2 ID : 630680308235</p><p>Option 3 ID : 630680308236</p><p>Option 4 ID : 630680308234</p><p>Status : Answered</p><p>Chosen Option : 1</p></div>

Q.19 A vessel is in the form of a hollow hemisphere mounted by a hollow cylinder. The diameter of the hemisphere is 28 cm. and the total height of the vessel is 20 cm. Find the inner surface area (in cm²) of the vessel.(Use $\pi = \frac{22}{7}$)

- Ans
- ☒ 1. 1740
 - ☒ 2. 1760
 - ☒ 3. 1720
 - ☒ 4. 1780

Question Type : MCQ
Question ID : 630680379656
Option 1 ID : 6306801479668
Option 2 ID : 6306801479669
Option 3 ID : 6306801479667
Option 4 ID : 6306801479670
Status : Answered
Chosen Option : 2

Q.20 Study the given bar graph carefully and answer the following question.



What was the difference in the production of food grains between 1991 and 1994?

- Ans
- ☒ 1. 15000 tons
 - ☒ 2. 5000 tons
 - ☒ 3. 10000 tons
 - ☒ 4. 500 tons

Question Type : MCQ
Question ID : 630680422443
Option 1 ID : 6306801648209
Option 2 ID : 6306801648211
Option 3 ID : 6306801648208
Option 4 ID : 6306801648210
Status : Answered
Chosen Option : 3

Section : Reasoning Ability and Problem Solving


Q.1 Read the given statements and conclusions carefully. Assuming that the information given in the statements is true, even if it appears to be at variance with commonly known facts, decide which of the given conclusions logically follow(s) from the statements.
Statements:
All pencils are remotes.
Some pencils are ACs.
Conclusions:
[1] Some ACs are remotes.
[2] All remotes are Acs.

- Ans
- ☒ 1. Both conclusions [1] and [2] follow
 - ☒ 2. Only conclusion [1] follows
 - ☒ 3. Only conclusion [2] follows
 - ☒ 4. Neither conclusion [1] nor [2] follows

Question Type : MCQ
Question ID : 630680398016
Option 1 ID : 6306801552081
Option 2 ID : 6306801552078
Option 3 ID : 6306801552079
Option 4 ID : 6306801552080
Status : Answered
Chosen Option : 2

Q.2 Which two signs should be interchanged to make the following equation mathematically correct?
 $15 \times 14 - 8 + 12 \div 4 = 5$

Ans

-  1. \times and $-$
-  2. \div and $-$
-  3. \times and $+$
-  4. \div and $+$

Question Type : MCQ

Question ID : 630680379167

Option 1 ID : 6306801477715

Option 2 ID : **6306801477717**

Option 3 ID : 6306801477718

Option 4 ID : 6306801477716

Status : **Answered**

Chosen Option : 3

Q.3 Select the correct mirror image of the given figure when the mirror is placed at MN as shown below.

95 \ ? 3 E $\begin{array}{c} \text{M} \\ | \\ \text{N} \end{array}$

Ans

☒ 1. 3 E 2 \ 5 6

☒ 2. 3 E 2 / 2 0

☒ 3. 3 2 3 / 2 0

☒ 4. 3 E 2 \ 5 9

Question Type : MCQ

Question ID : 630680525303

Option 1 ID : 6306802053297

Option 2 ID : 6306802053298

Option 3 ID : 6306802053296

Option 4 ID : 6306802053299

Status : **Answered**

Chosen Option : **2**

Q.4 In a certain code language, 'he may eat rice' is written as 'ki mi ji li' and 'she will like rice' is written as 'ni qi mi pi'. How is 'rice' written in the given language?

Ans ☒ 1. mi
☐ 2. qi
☐ 3. ni
☐ 4. ji

Question Type : MCQ

Question ID : 630680439029

Option 1 ID : 6306801713928

Option 2 ID : **6306801713930**

Option 3 ID : 6306801713929

Option 4 ID : 6306801713931

Status : **Answered**

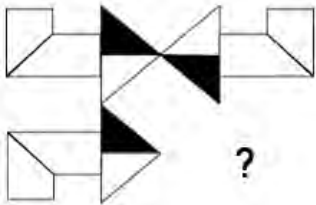
Chosen Option : 1

Q.5 Read the given statements and conclusions carefully. Assuming that the information given in the statements is true, even if it appears to be at variance with commonly known facts, decide which of the given conclusions logically follow(s) from the statements.
Statements:
All leaves are trees.
Some trees are plants.
Conclusions:
(I) Some leaves are plants.
(II) All leaves are trees.

- Ans
- ☒ 1. Only conclusion I follows
 - ☒ 2. Both conclusions I and II follow
 - ☒ 3. Only conclusion II follows
 - ☒ 4. Neither conclusion I nor II follows

Question Type : MCQ
Question ID : 630680387624
Option 1 ID : 6306801511162
Option 2 ID : 6306801511164
Option 3 ID : 6306801511163
Option 4 ID : 6306801511165
Status : Answered
Chosen Option : 3

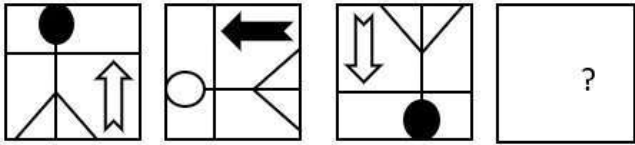
Q.6 Select the figure from the given options that will replace the question mark (?) in the figure given below to complete the pattern.



- Ans
- ☒ 1.
 - ☒ 2.
 - ☒ 3.
 - ☒ 4.

Question Type : MCQ
Question ID : 630680525744
Option 1 ID : 6306802055063
Option 2 ID : 6306802055060
Option 3 ID : 6306802055061
Option 4 ID : 6306802055062
Status : Answered
Chosen Option : 2

Q.7 Select the figure from the options that can replace the question mark (?) and logically complete the series.



Ans

- 1.
- 2.
- 3.
- 4.

Question Type : MCQ
Question ID : 630680279339
Option 1 ID : 6306801085624
Option 2 ID : 6306801085625
Option 3 ID : 6306801085623
Option 4 ID : 6306801085626
Status : Answered
Chosen Option : 4

Q.8 A, B, C, L, M, Y and X are sitting around a circular table facing the centre (but not necessarily in the same order). Only two people sit between B and L when counted from the right of L. X sits to the immediate left of Y. A sits to the immediate right of M. Y is an immediate neighbour of L. Who sits fourth to the right of C?

- Ans
- 1. A
 - 2. M
 - 3. L
 - 4. X

Question Type : MCQ
Question ID : 630680382200
Option 1 ID : 6306801489715
Option 2 ID : 6306801489718
Option 3 ID : 6306801489716
Option 4 ID : 6306801489717
Status : Answered
Chosen Option : 4

Q.9 What will come in the place of '?' in the following equation, if '+' and '÷' are interchanged and 'x' and '-' are interchanged?
 $48 \times 16 - 20 \div 21 + 7 = ?$

- Ans
- 1. 269
 - 2. -269
 - 3. -259
 - 4. 259

Question Type : MCQ
Question ID : 630680382170
Option 1 ID : 6306801489596
Option 2 ID : 6306801489595
Option 3 ID : 6306801489598
Option 4 ID : 6306801489597
Status : Answered
Chosen Option : 2

Q.10 In a certain code language, if HOUSE is coded as 67 and GROUND is coded as 83, then how will KITCHEN be coded?

Ans ☒ 1. 119

☒ 2. 130

☒ 3. 110

☒ 4. 122

Question Type : MCQ

Question ID : 630680465408

Option 1 ID : 6306801817668

Option 2 ID : 6306801817670

Option 3 ID : 6306801817667

Option 4 ID : 6306801817669

Status : Not Answered

Chosen Option : --

Q.11 'NQRP' is related to 'TWXV' in a certain way based on the English alphabetical order. In the same way, 'FHIG' is related to 'LNOM'. To which of the following is 'LOPN' related following the same logic?

Ans ☒ 1. QTUS

☒ 2. QSTR

☒ 3. RSQT

☒ 4. RUVT

Question Type : MCQ

Question ID : 630680392936

Option 1 ID : 6306801532083

Option 2 ID : 6306801532085

Option 3 ID : 6306801532084

Option 4 ID : 6306801532082

Status : Answered

Chosen Option : 4

Q.12 What should come in place of the question (?) in the following series?
4 ,-27, -58, -89 ,-120 ,?

Ans ☒ 1. -131

☒ 2. -151

☒ 3. 151

☒ 4. -141

Question Type : MCQ

Question ID : 630680799058

Option 1 ID : 6306803131034

Option 2 ID : 6306803131036

Option 3 ID : 6306803131037

Option 4 ID : 6306803131035

Status : Answered

Chosen Option : 2

Q.13 16 is related to 176 following a certain logic. Following the same logic, 21 is related to 231. To which of the following is 33 related, following the same logic?

(NOTE : Operations should be performed on the whole numbers, without breaking down the numbers into its constituent digits. E.g. 13 – Operations on 13 such as adding / subtracting / multiplying, etc., to 13 can be performed. Breaking down 13 into 1 and 3 and then performing mathematical operations on 1 and 3 is not allowed.)

Ans ☒ 1. 362

☒ 2. 364

☒ 3. 363

☒ 4. 361

Question Type : MCQ

Question ID : 630680441680

Option 1 ID : 6306801724335

Option 2 ID : 6306801724337

Option 3 ID : 6306801724336

Option 4 ID : 6306801724334

Status : Not Answered

Chosen Option : --

Q.14 L, M, N, O, P, Q and R are sitting around a circular table, facing the centre (but not necessarily in the same order). Only three people are sitting between R and O when counted from the left of R. Only M is sitting between L and N. N is an immediate neighbour of O. P is sitting third to the right of L.

Who is sitting second to the left of O?

Ans ☒ 1. P
☒ 2. L
☒ 3. Q
☒ 4. R

Question Type : MCQ
Question ID : 630680384370
Option 1 ID : 6306801498367
Option 2 ID : 6306801498366
Option 3 ID : 6306801498368
Option 4 ID : 6306801498369
Status : Answered
Chosen Option : 3

Q.15 Select the figure from among the given options that can replace the question mark (?) in the following series and complete the pattern.

B	T	O	8	O	6	O	8	<input type="checkbox"/>	T	<input type="checkbox"/>	B	
	V	6		T	V		6	B		8	6	?
8		<input type="checkbox"/>	<input type="checkbox"/>		B	T		V	V		O	

Ans ☒ 1.
☒ 2.
☒ 3.
☒ 4.

<input type="checkbox"/>	T	V
	B	O
8		6

O	6	V
	B	<input type="checkbox"/>
8		T

O	B	<input type="checkbox"/>
	T	V
6		8

O	6	V
	T	<input type="checkbox"/>
B		8

Question Type : MCQ
Question ID : 630680441089
Option 1 ID : 6306801722011
Option 2 ID : 6306801722013
Option 3 ID : 6306801722010
Option 4 ID : 6306801722012
Status : Not Answered
Chosen Option : --

Q.16 Select the option in which the numbers share the same relationship as that shared by the given pair of numbers.
48 : 42

Ans ☒ 1. 63 : 28
☒ 2. 48 : 24
☒ 3. 69 : 32
☒ 4. 65 : 28

Question Type : MCQ
Question ID : 630680402203
Option 1 ID : 6306801568446
Option 2 ID : 6306801568445
Option 3 ID : 6306801568444
Option 4 ID : 6306801568447
Status : Not Answered
Chosen Option : --

Q.17 What should come in place of the question mark (?) in the given series based on the English alphabetical order?
SXG, QVI, OTK, MRM ,?

Ans ☒ 1. KPP
☒ 2. KPO
☒ 3. LPP
☒ 4. LPO

Question Type : MCQ
Question ID : 630680459271
Option 1 ID : 6306801793937
Option 2 ID : 6306801793938
Option 3 ID : 6306801793939
Option 4 ID : 6306801793940
Status : Answered
Chosen Option : 2

Q.18 In a certain code language, 'COPY' is coded as '2846' and 'APES' is coded as '7321'. What is the code for 'P' in that language?

Ans ☒ 1. 3
☒ 2. 2
☒ 3. 1
☒ 4. 4

Question Type : MCQ
Question ID : 630680386585
Option 1 ID : 6306801507051
Option 2 ID : 6306801507053
Option 3 ID : 6306801507052
Option 4 ID : 6306801507050
Status : Answered
Chosen Option : 2

Q.19 MHPL is related to OJRN in a certain way based on the English alphabetical order. In the same way, PKSO is related to RMUQ. To which of the following is SNVR related following the same logic?

Ans ☒ 1. PUTX
☒ 2. UPXT
☒ 3. PUXT
☒ 4. UPTX

Question Type : MCQ
Question ID : 630680441615
Option 1 ID : 6306801724080
Option 2 ID : 6306801724078
Option 3 ID : 6306801724081
Option 4 ID : 6306801724079
Status : Answered
Chosen Option : 2

Q.20 In a certain code language, 'MASTER' is coded as '917032', and 'STREAK' is coded as '372159'. What is the code for 'K' in 'STREAK'?

Ans ☒ 1. 7
☒ 2. 3
☒ 3. 9
☒ 4. 5

Question Type : MCQ
Question ID : 630680876480
Option 1 ID : 6306803432683
Option 2 ID : 6306803432684
Option 3 ID : 6306803432686
Option 4 ID : 6306803432685
Status : Not Answered
Chosen Option : --

Section : General Awareness

Q.1 'Sange Meel Se Mulaqat' is the documentary of which famous musician?

Ans ☒ 1. Hari Prasad Chaurasia
☒ 2. Zakir Hussain
☒ 3. MS Gopalakrishnan
☒ 4. Bismillah Khan

Question Type : MCQ
Question ID : 630680482215
Option 1 ID : 6306801883374
Option 2 ID : 6306801883375
Option 3 ID : 6306801883376
Option 4 ID : 6306801883377
Status : Answered
Chosen Option : 4

Q.2 Kaal Baisakhi belongs to which state from the following?

Ans ☒ 1. Bihar
☒ 2. West Bengal
☒ 3. Rajasthan
☒ 4. Punjab

Question Type : MCQ
Question ID : 630680328138
Option 1 ID : 6306801276522
Option 2 ID : 6306801276524
Option 3 ID : 6306801276521
Option 4 ID : 6306801276523
Status : Answered
Chosen Option : 2

Q.3 Which of the following statements is NOT true about Plastids?

Ans ☒ 1. They have their own DNA.
☒ 2. Stroma is found in chloroplast.
☒ 3. They have their own ribosomes.
☒ 4. Starch, oils and protein granules are stored in chromoplasts.

Question Type : MCQ
Question ID : 630680422174
Option 1 ID : 6306801647132
Option 2 ID : 6306801647135
Option 3 ID : 6306801647133
Option 4 ID : 6306801647134
Status : Answered
Chosen Option : 4

<p>Q.4 Which of the following is NOT associated with the Iron Age in India?</p> <p>Ans <input checked="" type="checkbox"/> 1. Smelting</p> <p><input checked="" type="checkbox"/> 2. Mehrauli iron pillar</p> <p><input checked="" type="checkbox"/> 3. Northern black polished ware</p> <p><input checked="" type="checkbox"/> 4. Painted grey ware</p>	<p>Question Type : MCQ</p> <p>Question ID : 63068070538</p> <p>Option 1 ID : 630680272776</p> <p>Option 2 ID : 630680272777</p> <p>Option 3 ID : 630680272775</p> <p>Option 4 ID : 630680272774</p> <p>Status : Not Answered</p> <p>Chosen Option : --</p>
<p>Q.5 Which of the following types of emergencies is declared under Article 360 of the Indian Constitution?</p> <p>Ans <input checked="" type="checkbox"/> 1. Constitutional Emergency</p> <p><input checked="" type="checkbox"/> 2. National Emergency</p> <p><input checked="" type="checkbox"/> 3. Financial Emergency</p> <p><input checked="" type="checkbox"/> 4. State Emergency</p>	<p>Question Type : MCQ</p> <p>Question ID : 630680799044</p> <p>Option 1 ID : 6306803130981</p> <p>Option 2 ID : 6306803130978</p> <p>Option 3 ID : 6306803130980</p> <p>Option 4 ID : 6306803130979</p> <p>Status : Answered</p> <p>Chosen Option : 3</p>
<p>Q.6 Which of the following statements is/are correct about the Union Government budget in India?</p> <p>a. The Budget reflects the vision of the government in fulfilling the aspirations of people.</p> <p>b. The Budget is the summary report of the financial performance of the government in power.</p> <p>c. The Budget provides details of expenditures meted out by various Union Government ministries.</p> <p>Ans <input checked="" type="checkbox"/> 1. All a, b and c</p> <p><input checked="" type="checkbox"/> 2. Only a and b</p> <p><input checked="" type="checkbox"/> 3. Only c</p> <p><input checked="" type="checkbox"/> 4. Only a</p>	<p>Question Type : MCQ</p> <p>Question ID : 630680422556</p> <p>Option 1 ID : 6306801648661</p> <p>Option 2 ID : 6306801648660</p> <p>Option 3 ID : 6306801648662</p> <p>Option 4 ID : 6306801648659</p> <p>Status : Answered</p> <p>Chosen Option : 1</p>
<p>Q.7 Who among the following adopted the policy of consolidation in place of expansion by eliminating the rebels?</p> <p>Ans <input checked="" type="checkbox"/> 1. Raziya</p> <p><input checked="" type="checkbox"/> 2. Nasiruddin Mahmud</p> <p><input checked="" type="checkbox"/> 3. Ghiyasuddin Balban</p> <p><input checked="" type="checkbox"/> 4. Shamsuddin Iltutmish</p>	<p>Question Type : MCQ</p> <p>Question ID : 630680282896</p> <p>Option 1 ID : 6306801099715</p> <p>Option 2 ID : 6306801099718</p> <p>Option 3 ID : 6306801099716</p> <p>Option 4 ID : 6306801099717</p> <p>Status : Answered</p> <p>Chosen Option : 3</p>

SSC MTS (Non Technical) EXAM STUDY KIT



FREE
SHIPPING 

- ▶ 100% SSC MTS Exam Syllabus Covered
- ▶ PRINTED Notes
- ▶ 8 Books, 700+ Pages
- ▶ 2500+ MCQs
- ▶ Practice Papers
- ▶ 1 Year Current Affairs

50%
OFF

 **SSCPORTAL.IN**

SSC MTS PDF NOTES

100% Syllabus Covered



50%
OFF

CLICK HERE

CLICK BELOW LINK TO DOWNLOAD PDF NOTES

<https://sscpportal.in/study-kit/mts>

<https://sscpportal.in/study-kit>

Q.8 Which material was largely used to build the stupa at Piprahwa in Uttar Pradesh?

Ans ☒ 1. Granite Stone

☒ 2. Marble

☒ 3. Sandstone

☒ 4. Bricks

Question Type : MCQ

Question ID : 630680158674

Option 1 ID : 630680614191

Option 2 ID : 630680614189

Option 3 ID : 630680614190

Option 4 ID : 630680614188

Status : Answered

Chosen Option : 3

Q.9 Which of the following committees was set up to investigate into the infamous Jallianwala Bagh massacre?

Ans ☒ 1. Sadlar Committee

☒ 2. Hunter Committee

☒ 3. Butler Committee

☒ 4. Henry Fowler Committee

Question Type : MCQ

Question ID : 630680214230

Option 1 ID : 630680830967

Option 2 ID : 630680830969

Option 3 ID : 630680830968

Option 4 ID : 630680830970

Status : Answered

Chosen Option : 1

Q.10 In the animal kingdom, which of the following phyla includes animals with a segmented body?

Ans ☒ 1. Chordata

☒ 2. Arthropoda

☒ 3. Mollusca

☒ 4. Annelida

Question Type : MCQ

Question ID : 630680619081

Option 1 ID : 6306802422600

Option 2 ID : 6306802422601

Option 3 ID : 6306802422602

Option 4 ID : 6306802422603

Status : Answered

Chosen Option : 1

Q.11 Which edition of the Pro Kabaddi League was started in December 2023?

Ans ☒ 1. 10th

☒ 2. 11th

☒ 3. 12th

☒ 4. 8th

Question Type : MCQ

Question ID : 630680572130

Option 1 ID : 6306802237384

Option 2 ID : 6306802237386

Option 3 ID : 6306802237387

Option 4 ID : 6306802237385

Status : Answered

Chosen Option : 2

Q.12 Which of the following war dances is performed in Ngada festival and is a performed by the tribes of Nagaland?

Ans ☒ 1. Jawara
☒ 2. Rengma
☒ 3. Dalkhai
☒ 4. Garadi

Question Type : MCQ
Question ID : 630680309150
Option 1 ID : 6306801202779
Option 2 ID : 6306801202780
Option 3 ID : 6306801202777
Option 4 ID : 6306801202778
Status : Answered
Chosen Option : 2

Q.13 A _____ happens in chess when a player gives up material during the initiation to seek some kind of compensation.

Ans ☒ 1. Gambit
☒ 2. Blockade
☒ 3. Nick
☒ 4. Castling

Question Type : MCQ
Question ID : 630680553407
Option 1 ID : 6306802163523
Option 2 ID : 6306802163520
Option 3 ID : 6306802163522
Option 4 ID : 6306802163521
Status : Answered
Chosen Option : 1

Q.14 Two masses of 1 kg and 2 kg were dropped from a height of 3.2 metres. Their respective velocities just before touching the ground will be:
(Assume acceleration due to gravity $g = 10 \text{ m/s}^2$)

Ans ☒ 1. 8 m/s for both
☒ 2. 8 m/s and 4 m/s
☒ 3. 3.2 m/s for both
☒ 4. 4 m/s and 8 m/s

Question Type : MCQ
Question ID : 630680419685
Option 1 ID : 6306801637240
Option 2 ID : 6306801637238
Option 3 ID : 6306801637237
Option 4 ID : 6306801637239
Status : Answered
Chosen Option : 3

Q.15 _____ was launched by the Government of India in 2020 to make the country and its citizens independent and self-sufficient in all respects.

Ans ☒ 1. Smart Cities Mission
☒ 2. Swachh Bharat Mission
☒ 3. Digital India Mission
☒ 4. Atmanirbhar Bharat Abhiyan

Question Type : MCQ
Question ID : 63068087429
Option 1 ID : 630680339101
Option 2 ID : 630680339102
Option 3 ID : 630680339103
Option 4 ID : 630680339104
Status : Answered
Chosen Option : 4

<p>Q.16 'The Namesake', 'Unaccustomed Earth' and 'The Lowland' are novels written by who among the following authors?</p> <p>Ans <input checked="" type="checkbox"/> 1. Aravind Adiga <input checked="" type="checkbox"/> 2. Arundhati Roy <input checked="" type="checkbox"/> 3. Jhumpa Lahiri <input checked="" type="checkbox"/> 4. Shobha De</p>	<div><p>Question Type : MCQ</p><p>Question ID : 630680512095</p><p>Option 1 ID : 6306802001350</p><p>Option 2 ID : 6306802001352</p><p>Option 3 ID : 6306802001353</p><p>Option 4 ID : 6306802001351</p><p>Status : Answered</p><p>Chosen Option : 1</p></div>
<p>Q.17 In June 2023, which country conferred the 'Order of the Nile' award on Narendra Modi?</p> <p>Ans <input checked="" type="checkbox"/> 1. Singapore <input checked="" type="checkbox"/> 2. Lebanon <input checked="" type="checkbox"/> 3. Turkey <input checked="" type="checkbox"/> 4. Egypt</p>	<div><p>Question Type : MCQ</p><p>Question ID : 630680468927</p><p>Option 1 ID : 6306801831478</p><p>Option 2 ID : 6306801831476</p><p>Option 3 ID : 6306801831475</p><p>Option 4 ID : 6306801831477</p><p>Status : Answered</p><p>Chosen Option : 4</p></div>
<p>Q.18 How many components are there in the New India Literacy Program (NILP) scheme launched by the Union Ministry of Education in March 2023?</p> <p>Ans <input checked="" type="checkbox"/> 1. Nine <input checked="" type="checkbox"/> 2. Five <input checked="" type="checkbox"/> 3. Three <input checked="" type="checkbox"/> 4. Seven</p>	<div><p>Question Type : MCQ</p><p>Question ID : 630680465519</p><p>Option 1 ID : 6306801818114</p><p>Option 2 ID : 6306801818112</p><p>Option 3 ID : 6306801818111</p><p>Option 4 ID : 6306801818113</p><p>Status : Not Answered</p><p>Chosen Option : --</p></div>
<p>Q.19 From which of the following countries has the Indian Constitution borrowed the concept of the Concurrent List?</p> <p>Ans <input checked="" type="checkbox"/> 1. Ireland <input checked="" type="checkbox"/> 2. Australia <input checked="" type="checkbox"/> 3. Russia <input checked="" type="checkbox"/> 4. USA</p>	<div><p>Question Type : MCQ</p><p>Question ID : 630680547896</p><p>Option 1 ID : 6306802142134</p><p>Option 2 ID : 6306802142132</p><p>Option 3 ID : 6306802142133</p><p>Option 4 ID : 6306802142131</p><p>Status : Answered</p><p>Chosen Option : 2</p></div>

Q.20 Match the political parties of British India in column A with their respective founders in column B.

Column A (Political Parties)	Column B (Founders)
a. All India Forward Bloc	i. Dayananda Sarasvati
b. Arya Samaj	ii. Jai Prakash Narayan
c. The Congress Socialist Party	iii. Surendra Nath Banerjee
d. The Indian National Liberal Federation	iv. Subhash Chandra Bose

Ans

✔ 1. a-iv, b-i, c-ii, d-iii

✘ 2. a-ii, b-iii, c-iv, d-i

✘ 3. a-ii, b-i, c-iv, d-iii

✘ 4. a-iii, b-iv, c-i, d-ii

Question Type : MCQ

Question ID : 63068033537

Option 1 ID : 6306801297424

Option 2 ID : 6306801297423

Option 3 ID : 6306801297422

Option 4 ID : 6306801297421

Status : Answered

Chosen Option : 1

Q.21 According to National Multidimensional Poverty Index 2023 (A Progress Review), what was the proportion of population in multidimensional poverty (Headcount Ratio) in urban India in 2019-2021?

Ans

✘ 1. 6.96%

✘ 2. 2.12%

✘ 3. 11.32%

✔ 4. 5.27%

Question Type : MCQ

Question ID : 630680477667

Option 1 ID : 6306801865818

Option 2 ID : 6306801865816

Option 3 ID : 6306801865819

Option 4 ID : 6306801865817

Status : Not Answered

Chosen Option : --

Q.22 When is the National Unity Day celebrated in India?

Ans

✘ 1. 14 November

✘ 2. 2 October

✔ 3. 31 October

✘ 4. 26 January

Question Type : MCQ

Question ID : 630680157883

Option 1 ID : 630680611063

Option 2 ID : 630680611062

Option 3 ID : 630680611061

Option 4 ID : 630680611060

Status : Answered

Chosen Option : 4

Q.23 The igneous, sedimentary and metamorphic rocks are interconvertible through a continuous process called:

Ans

✘ 1. lithification

✔ 2. rock cycle

✘ 3. metamorphism

✘ 4. weathering and erosion

Question Type : MCQ

Question ID : 630680456079

Option 1 ID : 6306801781258

Option 2 ID : 6306801781255

Option 3 ID : 6306801781256

Option 4 ID : 6306801781257

Status : Answered

Chosen Option : 2

FREE!

Download SSC CGL, CHSL E-BOOKS

CLICK HERE

Q.24 Mallika Sarabhai was honoured with the Padma Bhushan in 2010 for her contribution to which of the following fields?

Ans ☒ 1. Literature
☒ 2. Dance
☒ 3. Singing
☒ 4. Painting

Question Type : MCQ
Question ID : 630680484039
Option 1 ID : 6306801890516
Option 2 ID : 6306801890514
Option 3 ID : 6306801890515
Option 4 ID : 6306801890517
Status : Answered
Chosen Option : 2

Q.25 In which of the followings years was the National Population Policy of India released?

Ans ☒ 1. 2000
☒ 2. 2015
☒ 3. 1952
☒ 4. 1995

Question Type : MCQ
Question ID : 630680696654
Option 1 ID : 6306802728777
Option 2 ID : 6306802728778
Option 3 ID : 6306802728775
Option 4 ID : 6306802728776
Status : Answered
Chosen Option : 1

Section : English Language and Comprehension

Q.1 Select the grammatically correct sentence.

Ans ☒ 1. A teacher from South explained the theory in the detailed manners.
☒ 2. The teacher from an South explained a theory in a detailed manner.
☒ 3. The teacher from the South explained the theory in a detailed manner.
☒ 4. The teacher from a South explained the theory in the detailed manner.

Question Type : MCQ
Question ID : 6306801106307
Option 1 ID : 6306804345660
Option 2 ID : 6306804345661
Option 3 ID : 6306804345658
Option 4 ID : 6306804345659
Status : Answered
Chosen Option : 3

Q.2 Select the most appropriate option to fill in the blank.
The CEO came up with a groundbreaking strategy to _____ new markets and capitalise on emerging trends.

Ans ☒ 1. break into
☒ 2. break down
☒ 3. break off
☒ 4. break out

Question Type : MCQ
Question ID : 630680597201
Option 1 ID : 6306802336848
Option 2 ID : 6306802336847
Option 3 ID : 6306802336846
Option 4 ID : 6306802336845
Status : Answered
Chosen Option : 1

Q.3 Select the most appropriate option that can substitute the underlined segment without changing its meaning in the given sentence.
Family planning programs play a crucial role in promoting reproductive health and empowering individuals to make informed choices, contributing to sustainable population growth and a healthier society.

Ans ☒ 1. promoting a viable population increase
☒ 2. supporting sustainable population explosion
☒ 3. fostering an unbalanced population growth
☒ 4. discouraging a sustainable population upswing

Question Type : **MCQ**
Question ID : **630680306518**
Option 1 ID : **6306801192404**
Option 2 ID : **6306801192403**
Option 3 ID : **6306801192402**
Option 4 ID : **6306801192401**
Status : **Answered**
Chosen Option : **1**

Q.4 Select the most appropriate adjective to fill in the blank.
They needed a _____ answer for every question.

Ans ☒ 1. most precise
☒ 2. preciser
☒ 3. precise
☒ 4. more precise

Question Type : **MCQ**
Question ID : **63068087136**
Option 1 ID : **630680337934**
Option 2 ID : **630680337936**
Option 3 ID : **630680337935**
Option 4 ID : **630680337933**
Status : **Answered**
Chosen Option : **3**

Q.5 Select the most appropriate **ANTONYM** of the given word.
Haste

Ans ☒ 1. Delay
☒ 2. Quick
☒ 3. Twist
☒ 4. Speed

Question Type : **MCQ**
Question ID : **630680594701**
Option 1 ID : **6306802326879**
Option 2 ID : **6306802326877**
Option 3 ID : **6306802326880**
Option 4 ID : **6306802326878**
Status : **Answered**
Chosen Option : **1**

Q.6 Select the most appropriate option that can substitute the underlined words in the given sentence.
The walls of the marriage hall were covered by beautiful purple curtains.

Ans ☒ 1. covered of
☒ 2. covered with
☒ 3. covered on
☒ 4. covered upon

Question Type : **MCQ**
Question ID : **630680551426**
Option 1 ID : **6306802155931**
Option 2 ID : **6306802155929**
Option 3 ID : **6306802155930**
Option 4 ID : **6306802155932**
Status : **Answered**
Chosen Option : **2**

<p>Q.7 Based on the situation in the given sentence, select the most appropriate idiom for the underlined segment. Having known to the facts, the manager <u>disregarded the arguments of</u> the customer.</p> <p>Ans <input checked="" type="checkbox"/> 1. Bite the Bullet <input checked="" type="checkbox"/> 2. Turned out <input checked="" type="checkbox"/> 3. Turned a deaf ear <input checked="" type="checkbox"/> 4. Turned against</p>	<p>Question Type : MCQ Question ID : 630680402715 Option 1 ID : 6306801570464 Option 2 ID : 6306801570463 Option 3 ID : 6306801570461 Option 4 ID : 6306801570462 Status : Answered Chosen Option : 3</p>
<p>Q.8 Select the most appropriate synonym of the word 'Pamper' from the given sentence. I always feel that nuclear families always mollycoddle their kids without directing them to the correct path or denying their unrealistic demands.</p> <p>Ans <input checked="" type="checkbox"/> 1. Demands <input checked="" type="checkbox"/> 2. Mollycoddle <input checked="" type="checkbox"/> 3. Nuclear <input checked="" type="checkbox"/> 4. Path</p>	<p>Question Type : MCQ Question ID : 630680426685 Option 1 ID : 6306801664823 Option 2 ID : 6306801664821 Option 3 ID : 6306801664822 Option 4 ID : 6306801664824 Status : Answered Chosen Option : 2</p>
<p>Q.9 Select the sentence that contains a spelling error.</p> <p>Ans <input checked="" type="checkbox"/> 1. He has made significant improvement in the last few weeks. <input checked="" type="checkbox"/> 2. Despite his formidable appearance, he possesses a kind heart. <input checked="" type="checkbox"/> 3. They had been disgrantled with the company due to various reasons. <input checked="" type="checkbox"/> 4. We saw a pride of lions nonchalantly roaming in the forest.</p>	<p>Question Type : MCQ Question ID : 630680555347 Option 1 ID : 6306802170844 Option 2 ID : 6306802170847 Option 3 ID : 6306802170846 Option 4 ID : 6306802170845 Status : Answered Chosen Option : 2</p>
<p>Q.10 Select the most appropriate synonym of the given word. Vigorous</p> <p>Ans <input checked="" type="checkbox"/> 1. Guarded <input checked="" type="checkbox"/> 2. Furious <input checked="" type="checkbox"/> 3. Energetic <input checked="" type="checkbox"/> 4. Academic</p>	<p>Question Type : MCQ Question ID : 630680397580 Option 1 ID : 6306801550241 Option 2 ID : 6306801550244 Option 3 ID : 6306801550242 Option 4 ID : 6306801550243 Status : Answered Chosen Option : 3</p>

Q.11 Select the correct spelling of the underlined word.

She has a magnificent personality.

Ans ☒ 1. Magnificient
☒ 2. Magnificent
☒ 3. Megnificient
☒ 4. Megnificent

Question Type : MCQ
Question ID : 6306801046661
Option 1 ID : 6306804108771
Option 2 ID : 6306804108770
Option 3 ID : 6306804108772
Option 4 ID : 6306804108769
Status : Answered
Chosen Option : 1

Q.12 Select the most appropriate ANTONYM of the word given in brackets to fill in the blank.

He was able to do _____(tedious) jobs and hence decided to be in the airline service, which demanded 12 long hours of service.

Ans ☒ 1. timid
☒ 2. riotous
☒ 3. irksome
☒ 4. delightful

Question Type : MCQ
Question ID : 630680411058
Option 1 ID : 6306801602986
Option 2 ID : 6306801602987
Option 3 ID : 6306801602985
Option 4 ID : 6306801602984
Status : Answered
Chosen Option : 4

Q.13 Change the following sentence into positive degree.

Yash is not better than Harsh.

Ans ☒ 1. Yash is as good as Harsh.
☒ 2. Yash is not good than Harsh.
☒ 3. Yash and Harsh both are good.
☒ 4. Yash is best than Harsh.

Question Type : MCQ
Question ID : 630680514640
Option 1 ID : 6306802011186
Option 2 ID : 6306802011187
Option 3 ID : 6306802011188
Option 4 ID : 6306802011185
Status : Answered
Chosen Option : 1

Q.14 Select the option that rectifies the spelling of the underlined word in the given sentence.

The children were excited to ride the carusel.

Ans ☒ 1. Carrousel
☒ 2. Karusel
☒ 3. Carousel
☒ 4. Carousell

Question Type : MCQ
Question ID : 630680556332
Option 1 ID : 6306802174654
Option 2 ID : 6306802174656
Option 3 ID : 6306802174655
Option 4 ID : 6306802174653
Status : Answered
Chosen Option : 3

Q.15 Select the most appropriate option to fill in the blanks.

If 2023 was ____ year consumers helped stave off a recession with an unexpected surge in spending, many economists _____ 2024 will be the time shoppers finally tighten their belts.

Ans ☒ 1. a, wanted
☒ 2. the, predict
☒ 3. a, see
☒ 4. an, thought

Question Type : MCQ
Question ID : 630680546887
Option 1 ID : 6306802138120
Option 2 ID : 6306802138118
Option 3 ID : 6306802138117
Option 4 ID : 6306802138119
Status : Answered
Chosen Option : 2

Q.16 In the following sentence the underlined part contains an error. Alternatives to the underlined part are given as options. Select the correct alternative. Playing 'hide-n-seek' is the one of the fond memories of my childhood.

Ans ☒ 1. fonder
☒ 2. fondest
☒ 3. most fondest
☒ 4. more fonder

Question Type : MCQ
Question ID : 630680514707
Option 1 ID : 6306802011453
Option 2 ID : 6306802011456
Option 3 ID : 6306802011454
Option 4 ID : 6306802011455
Status : Answered
Chosen Option : 2

Q.17 The given sentence is divided into four segments. Select the option that has the segment with a grammatical error.

I left my / coat in the / hospital when I / had visit Alex.

Ans ☒ 1. I left my
☒ 2. had visit Alex.
☒ 3. coat in the
☒ 4. hospital when I

Question Type : MCQ
Question ID : 630680310735
Option 1 ID : 6306801209069
Option 2 ID : 6306801209072
Option 3 ID : 6306801209070
Option 4 ID : 6306801209071
Status : Answered
Chosen Option : 2

Q.18 Select the most appropriate option to fill in the blank.

The old man shared his _____ wisdom with the young generation.

Ans ☒ 1. frivolous
☒ 2. ephemeral
☒ 3. trivial
☒ 4. sagacious

Question Type : MCQ
Question ID : 630680598831
Option 1 ID : 6306802343084
Option 2 ID : 6306802343085
Option 3 ID : 6306802343082
Option 4 ID : 6306802343083
Status : Answered
Chosen Option : 2

Comprehension:

In the following passage, some words have been deleted. Read the passage carefully and select the most appropriate option to fill in each blank.
We should remember that all religions (1)_____ good conduct in life, the foundation of which should rest on (2)_____. Without the basis of morality, philosophy would remain mere polemics, and religion would be (3)_____ and vain. Nobody can say that he is religious unless he is (4)_____ and unselfish. It is realised that by constant endeavour through thought, word and deed, one could (5)_____ absolute peace of mind.

SubQuestion No : 22

Q.22 Select the most appropriate option to fill in blank number 2.

- Ans ☒ 1. unconscientiousness
☒ 2. evil
☒ 3. ethics
☒ 4. boundaries

Question Type : MCQ
Question ID : 630680144538
Option 1 ID : 630680559213
Option 2 ID : 630680559211
Option 3 ID : 630680559212
Option 4 ID : 630680559210
Status : Answered
Chosen Option : 3

Comprehension:

In the following passage, some words have been deleted. Read the passage carefully and select the most appropriate option to fill in each blank.
We should remember that all religions (1)_____ good conduct in life, the foundation of which should rest on (2)_____. Without the basis of morality, philosophy would remain mere polemics, and religion would be (3)_____ and vain. Nobody can say that he is religious unless he is (4)_____ and unselfish. It is realised that by constant endeavour through thought, word and deed, one could (5)_____ absolute peace of mind.

SubQuestion No : 23

Q.23 Select the most appropriate option to fill in blank number 3.

- Ans ☒ 1. useful
☒ 2. popular
☒ 3. meaningless
☒ 4. rational

Question Type : MCQ
Question ID : 630680144539
Option 1 ID : 630680559214
Option 2 ID : 630680559215
Option 3 ID : 630680559216
Option 4 ID : 630680559217
Status : Answered
Chosen Option : 3

Comprehension:

In the following passage, some words have been deleted. Read the passage carefully and select the most appropriate option to fill in each blank.
We should remember that all religions (1)_____ good conduct in life, the foundation of which should rest on (2)_____. Without the basis of morality, philosophy would remain mere polemics, and religion would be (3)_____ and vain. Nobody can say that he is religious unless he is (4)_____ and unselfish. It is realised that by constant endeavour through thought, word and deed, one could (5)_____ absolute peace of mind.

SubQuestion No : 24

Q.24 Select the most appropriate option to fill in blank number 4.

- Ans ☒ 1. grotesque
☒ 2. truthful
☒ 3. lethargic
☒ 4. insensitive

Question Type : MCQ
Question ID : 630680144540
Option 1 ID : 630680559220
Option 2 ID : 630680559219
Option 3 ID : 630680559221
Option 4 ID : 630680559218
Status : Answered
Chosen Option : 2

SSC MTS (Non Technical) EXAM STUDY KIT



FREE
SHIPPING 

- ▶ 100% SSC MTS Exam Syllabus Covered
- ▶ PRINTED Notes
- ▶ 8 Books, 700+ Pages
- ▶ 2500+ MCQs
- ▶ Practice Papers
- ▶ 1 Year Current Affairs

50%
OFF

 SSCPOTAL.IN

SSC MTS PDF NOTES

100% Syllabus Covered



50%
OFF

CLICK HERE

CLICK BELOW LINK TO DOWNLOAD PDF NOTES

<https://sscpportal.in/study-kit/mts>

<https://sscpportal.in/study-kit>

Comprehension:

In the following passage, some words have been deleted. Read the passage carefully and select the most appropriate option to fill in each blank.
We should remember that all religions (1)_____ good conduct in life, the foundation of which should rest on (2)_____. Without the basis of morality, philosophy would remain mere polemics, and religion would be (3)_____ and vain. Nobody can say that he is religious unless he is (4)_____ and unselfish. It is realised that by constant endeavour through thought, word and deed, one could (5)_____ absolute peace of mind.

SubQuestion No : 25

Q.25 Select the most appropriate option to fill in blank number 5.

- Ans** ☒ 1. scatter
 ☒ 2. forfeit
 ☒ 3. divide
 ☒ 4. acquire

Question Type : **MCQ**
Question ID : **630680144541**
Option 1 ID : **630680559223**
Option 2 ID : **630680559225**
Option 3 ID : **630680559222**
Option 4 ID : **630680559224**
Status : **Answered**
Chosen Option : **4**