

Multi Tasking Non Technical Staff and Havaladar CBIC and CBN Examination 2024

Roll Number	
Candidate Name	
Venue Name	Sanaka Educational Trust Group of Institutions
Exam Date	08/10/2024
Exam Time	12:30 PM - 2:30 PM
Subject	MTS Non Tech Havaladar CBIC and CBN Examination 2024

Section : Numerical and Mathematical Ability

Q.1 The curved surface area of a cylindrical pillar is 176 m^2 and its volume is 352 m^3 . Find the ratio of its radius to its height. (Use $\pi = \frac{22}{7}$)

- Ans
- ☐ 1. 3 : 4
 - ☐ 2. 2 : 3
 - ☐ 3. 3 : 5
 - ☒ 4. 4 : 7

Question Type : MCQ
Question ID : 630680379657
Option 1 ID : 6306801479674
Option 2 ID : 6306801479673
Option 3 ID : 6306801479672
Option 4 ID : 6306801479671
Status : Answered
Chosen Option : 2

Q.2 In a mixture of 60 litres, milk and water are in the ratio 7 : 3. If 3 litres of water be added, find the ratio of milk and water in the new mixture.

- Ans
- ☐ 1. 3:2
 - ☐ 2. 1:2
 - ☒ 3. 2:1
 - ☐ 4. 2:3

Question Type : MCQ
Question ID : 630680107555
Option 1 ID : 630680417543
Option 2 ID : 630680417540
Option 3 ID : 630680417542
Option 4 ID : 630680417541
Status : Answered
Chosen Option : 3

Q.3 Find the simple interest (in ₹) on ₹3000 as a sum borrowed at 8% per year rate of interest for 5 years.

- Ans ☒ 1. 1240
☒ 2. 1200
☒ 3. 1160
☒ 4. 1140

Question Type : MCQ

Question ID : 630680591951

Option 1 ID : 6306802316272

Option 2 ID : 6306802316271

Option 3 ID : 6306802316274

Option 4 ID : 6306802316273

Status : Answered

Chosen Option : 2

Q.4 The simple interest on a certain sum of money at the rate of 5% per annum for 9 years is ₹1,260. At what rate of interest can the same amount of interest be received on the same sum after 6 years?

- Ans ☒ 1. 8.5%
☒ 2. 7.5%
☒ 3. 6.5%
☒ 4. 8.0%

Question Type : MCQ

Question ID : 630680400201

Option 1 ID : 6306801560673

Option 2 ID : 6306801560674

Option 3 ID : 6306801560675

Option 4 ID : 6306801560676

Status : Answered

Chosen Option : 2

Q.5 Three red lights on the same road start blinking at the same time and blink repeatedly after every 4, 6 and 8 minutes, respectively. How many times will they blink together in an interval of 3 hours, excluding blinking together at the starting moment?

- Ans ☒ 1. 5
☒ 2. 7
☒ 3. 4
☒ 4. 6

Question Type : MCQ

Question ID : 630680108950

Option 1 ID : 630680422695

Option 2 ID : 630680422693

Option 3 ID : 630680422692

Option 4 ID : 630680422694

Status : Answered

Chosen Option : 2

SSC MTS (Non Technical) EXAM STUDY KIT



FREE
SHIPPING 

- ▶ 100% SSC MTS Exam Syllabus Covered
- ▶ PRINTED Notes
- ▶ 8 Books, 700+ Pages
- ▶ 2500+ MCQs
- ▶ Practice Papers
- ▶ 1 Year Current Affairs

50%
OFF

 **SSCPORTAL.IN**

SSC MTS PDF NOTES

100% Syllabus Covered



CLICK HERE

CLICK BELOW LINK TO DOWNLOAD PDF NOTES

<https://sscpportal.in/study-kit/mts>

<https://sscpportal.in/study-kit>

Q.6 Find the simple interest (in ₹) on ₹2000 as a sum borrowed at 7% per year rate of interest for 4 years.

- Ans ☒ 1. 500
☒ 2. 560
☒ 3. 600
☒ 4. 520

Question Type : MCQ

Question ID : 630680591875

Option 1 ID : 6306802315969

Option 2 ID : 6306802315967

Option 3 ID : 6306802315968

Option 4 ID : 6306802315970

Status : Answered

Chosen Option : 2

Q.7 A man sold an article for ₹247.50, thereby gaining 12.5%. The cost of the article (in ₹) was:

- Ans ☒ 1. 210
☒ 2. 220
☒ 3. 224
☒ 4. 225

Question Type : MCQ

Question ID : 630680277304

Option 1 ID : 6306801077668

Option 2 ID : 6306801077667

Option 3 ID : 6306801077666

Option 4 ID : 6306801077665

Status : Answered

Chosen Option : 1

Q.8 The average weight of a family of five members (in kg) whose weights are 40 kg, 49 kg, 56 kg, 70 kg and 35 kg is:

- Ans ☒ 1. 51
☒ 2. 52
☒ 3. 49
☒ 4. 50

Question Type : MCQ

Question ID : 630680551654

Option 1 ID : 6306802156842

Option 2 ID : 6306802156844

Option 3 ID : 6306802156843

Option 4 ID : 6306802156841

Status : Answered

Chosen Option : 4

Q.9 A solid cone of base radius 7 cm and height 18 cm is melted and recast into a hollow metal hemisphere of internal and external radii 20 cm and R cm, respectively. What is the value of R (in cm)?

- Ans
- ☒ 1. $\sqrt[3]{8568}$
 - ☒ 2. $\sqrt[3]{8448}$
 - ☒ 3. $\sqrt[3]{8144}$
 - ☒ 4. $\sqrt[3]{8441}$

Question Type : MCQ

Question ID : 630680396451

Option 1 ID : 6306801545909

Option 2 ID : 6306801545910

Option 3 ID : 6306801545908

Option 4 ID : 6306801545907

Status : Answered

Chosen Option : 2

Q.10 By selling an article for ₹20, a dealer makes a profit of 10%. By how much should he increase his selling price (in ₹, rounded off to two decimal place) so as to make a profit of 40%?

- Ans
- ☒ 1. 5.45
 - ☒ 2. 6.45
 - ☒ 3. 8.45
 - ☒ 4. 7.45

Question Type : MCQ

Question ID : 630680632599

Option 1 ID : 6306802476294

Option 2 ID : 6306802476295

Option 3 ID : 6306802476297

Option 4 ID : 6306802476296

Status : Answered

Chosen Option : 2

Q.11 The average of the present ages of P and Q is 56 years and their ages are in the ratio 5:3. What will be the age of Q seven years hence?

- Ans
- ☒ 1. 52 years
 - ☒ 2. 42 years
 - ☒ 3. 54 years
 - ☒ 4. 49 years

Question Type : MCQ

Question ID : 630680106809

Option 1 ID : 630680414853

Option 2 ID : 630680414854

Option 3 ID : 630680414852

Option 4 ID : 630680414855

Status : Answered

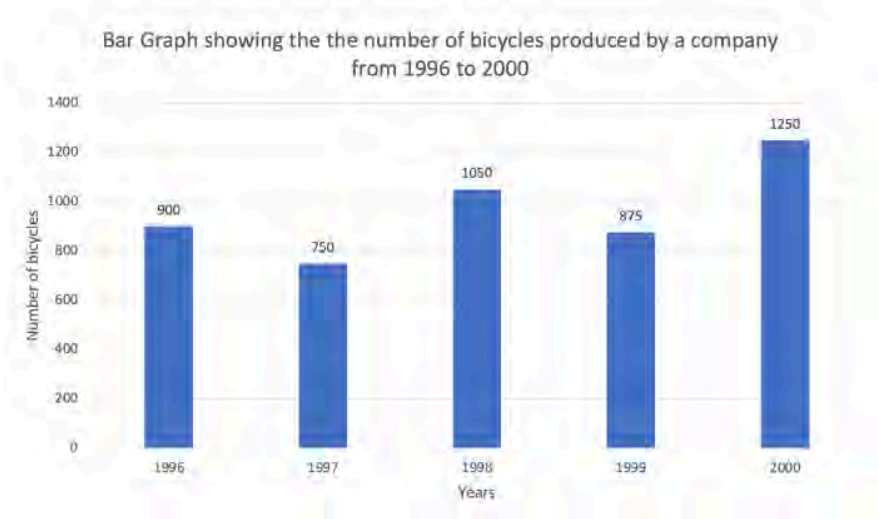
Chosen Option : 2

Q.12 The ratio of income to expenditure of a family is 18:15. Find the savings if the income of the family is ₹81,000.

- Ans ☒ 1. ₹15,000
☒ 2. ₹17,500
☒ 3. ₹12,750
☒ 4. ₹13,500

Question Type : MCQ
Question ID : 630680464538
Option 1 ID : 6306801814189
Option 2 ID : 6306801814190
Option 3 ID : 6306801814187
Option 4 ID : 6306801814188
Status : Answered
Chosen Option : 2

Q.13 The given bar graph shows the number of bicycles produced by a company from 1996 to 2000. Study the given bar graph and answer the question that follows.



The combined number of bicycles produced during 1996, 1997 and 2000 is what percentage (rounded off to 1 decimal place) of the combined bicycles produced from 1996 to 2000?

- Ans ☒ 1. 60.1%
☒ 2. 66.6%
☒ 3. 57.8%
☒ 4. 72.3%

Question Type : MCQ
Question ID : 630680421292
Option 1 ID : 6306801643646
Option 2 ID : 6306801643643
Option 3 ID : 6306801643645
Option 4 ID : 6306801643644
Status : Answered
Chosen Option : 2

Q.14 A car travels from Kanpur to Delhi at an average speed of 60 km/h and returns at an average speed of 90 km/h. Find the average speed of the car in the whole journey.

- Ans ☒ 1. 65 km/h
☒ 2. 72 km/h
☒ 3. 78 km/h
☒ 4. 60 km/h

Question Type : MCQ

Question ID : 630680570950

Option 1 ID : 6306802232862

Option 2 ID : 6306802232863

Option 3 ID : 6306802232864

Option 4 ID : 6306802232861

Status : Answered

Chosen Option : 2

Q.15 The average weight of three friends Ram, Ramesh and Shyam is 76 kg. Somesh joins them and the average weight of the four friends becomes 74 kg. If Mohan, whose weight is 2 kg more than that of Somesh replaces Ramesh, the average weight of Ram, Shyam, Somesh and Mohan becomes 68 kg. Find the weight of Ramesh.

- Ans ☒ 1. 84 kg
☒ 2. 89 kg
☒ 3. 94 kg
☒ 4. 75 kg

Question Type : MCQ

Question ID : 630680421231

Option 1 ID : 6306801643400

Option 2 ID : 6306801643401

Option 3 ID : 6306801643402

Option 4 ID : 6306801643399

Status : Answered

Chosen Option : 2

Q.16 A tunnel elevator can carry a maximum of 15 passengers with an average weight of 81 kg. However, four persons beyond the maximum capacity entered the elevator, resulting in an average weight of 82 kg and causing it to be overloaded. Find the average weight (in kg) of the additional four persons.

- Ans ☒ 1. 85.75
☒ 2. 90.41
☒ 3. 102.37
☒ 4. 100

Question Type : MCQ

Question ID : 630680456319

Option 1 ID : 6306801782250

Option 2 ID : 6306801782248

Option 3 ID : 6306801782249

Option 4 ID : 6306801782247

Status : Answered

Chosen Option : 1

Q.17 In a 5-km race, A beats B by 750 metres and C by 1260 metres. By how many metres does B beat C in the same race?

- Ans ☒ 1. 700 metres
☒ 2. 600 metres
☒ 3. 400 metres
☒ 4. 500 metres

Question Type : MCQ
Question ID : 630680135772
Option 1 ID : 630680525809
Option 2 ID : 630680525808
Option 3 ID : 630680525806
Option 4 ID : 630680525807
Status : Answered
Chosen Option : 2

Q.18 The given table shows the number of pages printed by four printers in three days.

Days	Printers			
	W	X	Y	Z
Monday	1450	1521	1612	1206
Tuesday	1270	1225	1605	1531
Wednesday	1385	1982	1589	1260

What is the difference between the total number of pages printed by printer X on Monday and Wednesday together, and the total number of pages printed by printer Z on Tuesday and Wednesday together?

- Ans ☒ 1. 956
☒ 2. 789
☒ 3. 826
☒ 4. 712

Question Type : MCQ
Question ID : 630680523773
Option 1 ID : 6306802047243
Option 2 ID : 6306802047245
Option 3 ID : 6306802047244
Option 4 ID : 6306802047246
Status : Answered
Chosen Option : 2

Q.19 A shopkeeper declares the following three schemes of discounts. Which scheme is most beneficial to a customer?

- A. Buy 25 items and get 30 of the same items
- B. Two successive discounts of 12% and 18%
- C. Two successive equal discounts of 15%

Ans ☒ 1. A
☒ 2. Only B
☒ 3. B and C
☒ 4. Only C

Question Type : MCQ
Question ID : 630680395412
Option 1 ID : 6306801541828
Option 2 ID : 6306801541830
Option 3 ID : 6306801541829
Option 4 ID : 6306801541831
Status : Answered
Chosen Option : 2

Q.20 The curved surface area of a cylinder is three-fifth of its total surface area. Find the ratio between the height and radius of the cylinder.

Ans ☒ 1. 8 : 3
☒ 2. 3 : 5
☒ 3. 2 : 5
☒ 4. 3 : 2

Question Type : MCQ
Question ID : 630680555713
Option 1 ID : 6306802172291
Option 2 ID : 6306802172289
Option 3 ID : 6306802172288
Option 4 ID : 6306802172290
Status : Answered
Chosen Option : 2

Section : Reasoning Ability and Problem Solving

Q.1 DFIE is related to CGHF in a certain way based on the English alphabetical order. In the same way, MOFC is related to LPED. To which of the following is GRRP related, following the same logic?

Ans ☒ 1. ERQQ
☒ 2. FSQQ
☒ 3. FSQR
☒ 4. DSPQ

Question Type : MCQ
Question ID : 630680911378
Option 1 ID : 6306803570434
Option 2 ID : 6306803570433
Option 3 ID : 6306803570436
Option 4 ID : 6306803570435
Status : Answered
Chosen Option : 2

Q.2 Read the given statement(s) and conclusions carefully. Assuming that the information given in the statements is true, even if it appears to be at variance with commonly known facts, decide which of the given conclusions logically follow(s) from the statement(s).

Statements:

No teacher is a male.

No male is an Engineer.

Conclusions:

I. No teacher is an Engineer.

II. Some male are teachers.

Ans ☒ 1. Only conclusion II follows.

☒ 2. Neither conclusion I nor II follows.

☒ 3. Only conclusion I follows.

☒ 4. Both conclusions I and II follow.

Question Type : MCQ

Question ID : 630680401279

Option 1 ID : 6306801564922

Option 2 ID : 6306801564923

Option 3 ID : 6306801564921

Option 4 ID : 6306801564924

Status : Marked For Review

Chosen Option : 2

Q.3 In a certain code language, 'CHOSEN' is coded as 'YTMIWN' and 'COMMON' is coded as 'YMOOMN'. How will 'CLIENT' be coded in the same language?

Ans ☒ 1. YPTXNG

☒ 2. YPSWNH

☒ 3. YPSXNG

☒ 4. YPSVNF

Question Type : MCQ

Question ID : 630680465301

Option 1 ID : 6306801817241

Option 2 ID : 6306801817240

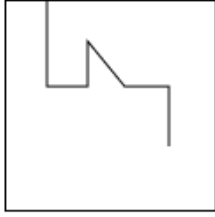
Option 3 ID : 6306801817239

Option 4 ID : 6306801817242

Status : Answered

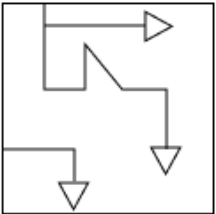
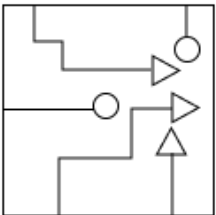
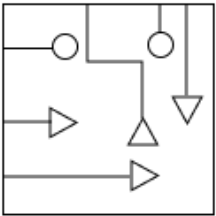
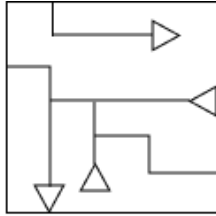
Chosen Option : 2

Q.4 Select the option figure in which the given figure (X) is embedded as its part (rotation is NOT allowed).



(X)

Ans



Question Type : **MCQ**

Question ID : 630680487597

Option 1 ID : 6306801904495

Option 2 ID : 6306801904496

Option 3 ID : 6306801904497

Option 4 ID : 6306801904494

Status : **Answered**

Chosen Option : 4

Q.5 8 is related to 93 following a certain logic. Following the same logic, 10 is related to 117. To which of the following is 14 related, following the same logic?
(NOTE: Operations should be performed on the whole numbers, without breaking down the numbers into its constituent digits. E.g. 13 – Operations on 13 such as adding/subtracting/multiplying etc. to 13 can be performed. Breaking down 13 into 1 and 3 and then performing mathematical operations on 1 and 3 is not allowed.)

Ans  1. 189

 2. 165

 3. 166

 4. 187

Question Type : MCQ

Question ID : 630680450180

Option 1 ID : 6306801757869

Option 2 ID : 6306801757868

Option 3 ID : 6306801757870

Option 4 ID : 6306801757867

Status : Answered

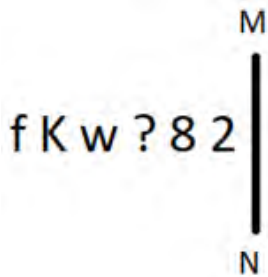
Chosen Option : 2



Download SSC CGL, CHSL E-BOOKS

[CLICK HERE](#)

Q.7 Select the correct mirror image of the given figure when the mirror is placed at MN as shown below.



- Ans
- ☒ 1.
 - ☐ 2.
 - ☐ 3.
 - ☐ 4.

Question Type : MCQ
Question ID : 630680525263
Option 1 ID : 6306802053136
Option 2 ID : 6306802053139
Option 3 ID : 6306802053137
Option 4 ID : 6306802053138
Status : Answered
Chosen Option : 1

Q.8 In a certain code language, 'did we know' is written as 'kp as th' and 'we solve this' is written as 'nk kp bo'. How is 'we' written in the given language?

- Ans
- ☐ 1. as
 - ☐ 2. bo
 - ☒ 3. kp
 - ☐ 4. nk

Question Type : MCQ
Question ID : 630680378078
Option 1 ID : 6306801473371
Option 2 ID : 6306801473374
Option 3 ID : 6306801473373
Option 4 ID : 6306801473372
Status : Answered
Chosen Option : 3

Q.9 What should come in place of the question mark (?) in the given series based on the English alphabetical order?

EBF, IGG, MLH, QQI, ?

Ans ☒ 1. TUJ

☒ 2. UVJ

☒ 3. SUI

☒ 4. SUJ

Question Type : MCQ

Question ID : 630680443470

Option 1 ID : 6306801731264

Option 2 ID : 6306801731265

Option 3 ID : 6306801731267

Option 4 ID : 6306801731266

Status : Answered

Chosen Option : 2

Q.10 In a certain code language, 'EACH' is coded as '6138' and 'CAME' is coded as '1396'. What is the code for 'M' in that language?

Ans ☒ 1. 1

☒ 2. 9

☒ 3. 3

☒ 4. 6

Question Type : MCQ

Question ID : 630680825488

Option 1 ID : 6306803233500

Option 2 ID : 6306803233498

Option 3 ID : 6306803233497

Option 4 ID : 6306803233499

Status : Answered

Chosen Option : 2

Q.11 The second number in the given number pairs is obtained by performing certain mathematical operation(s) on the first number. Select the pair in which the numbers are related in the same way as are the numbers of the given pairs.
(NOTE: Operations should be performed on the whole numbers, without breaking down the numbers into their constituent digits. E.g. 13 – Operations on 13 such as adding /deleting /multiplying to 13 can be performed. Breaking down 13 into 1 and 3 and then performing mathematical operations on 1 and 3 is not allowed.)

6, 42

9, 63

Ans ☒ 1. 13, 91

☒ 2. 11, 67

☒ 3. 17, 102

☒ 4. 19, 123

Question Type : MCQ

Question ID : 630680408398

Option 1 ID : 6306801592488

Option 2 ID : 6306801592487

Option 3 ID : 6306801592489

Option 4 ID : 6306801592490

Status : Answered

Chosen Option : 1

SSC MTS (Non Technical) EXAM STUDY KIT



FREE
SHIPPING 

- ▶ 100% SSC MTS Exam Syllabus Covered
- ▶ PRINTED Notes
- ▶ 8 Books, 700+ Pages
- ▶ 2500+ MCQs
- ▶ Practice Papers
- ▶ 1 Year Current Affairs

50%
OFF

 SSCPOTAL.IN

SSC MTS PDF NOTES

100% Syllabus Covered



CLICK HERE

CLICK BELOW LINK TO DOWNLOAD PDF NOTES

<https://sscpportal.in/study-kit/mts>

<https://sscpportal.in/study-kit>

Q.12 What should come in place of the question mark (?) in the given series?

39, 47, 55, 63, 71, ?

Ans  1. 80

 2. 78

 3. 79

 4. 77

Question Type : **MCQ**

Question ID : **630680546484**

Option 1 ID : **6306802136511**

Option 2 ID : **6306802136509**

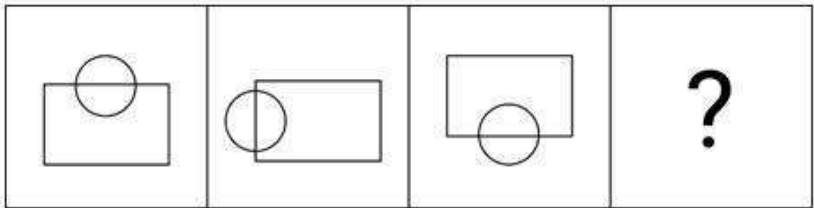
Option 3 ID : **6306802136508**

Option 4 ID : **6306802136510**

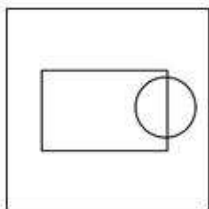
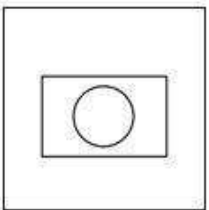
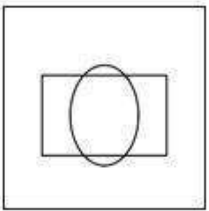
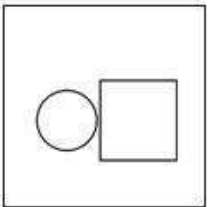
Status : **Answered**

Chosen Option : **3**

Q.13 Identify the figure given in the options which when put in place of (?) will logically complete the series.



Ans

- ✓ 1. 
- ✗ 2. 
- ✗ 3. 
- ✗ 4. 

Question Type : MCQ
Question ID : 630680273997
Option 1 ID : 6306801064510
Option 2 ID : 6306801064509
Option 3 ID : 6306801064507
Option 4 ID : 6306801064508
Status : Answered
Chosen Option : 1

Q.14 Seven people P, U, L, M, A, G and E are sitting around a circular table, facing the centre (but not necessarily in the same order). P is sitting third to the left of M. G is sitting second to the right of M. Only one person is sitting between M and A when counted from the left of M. L is sitting to the immediate right of G. Only one person is sitting between L and E . Who is sitting to the immediate left of U?

Ans ☒ 1. A

☒ 2. G

☒ 3. M

☒ 4. P

Question Type : MCQ

Question ID : 630680386541

Option 1 ID : 6306801506874

Option 2 ID : 6306801506875

Option 3 ID : 6306801506876

Option 4 ID : 6306801506877

Status : Answered

Chosen Option : 1

Q.15 In a certain code language, 'toy is new' is coded as 'bz tq gl' and 'give me toy' is coded as 'hx vm tq'. How is 'toy' coded in the given language?

Ans ☒ 1. hx

☒ 2. vm

☒ 3. bz

☒ 4. tq

Question Type : MCQ

Question ID : 630680436322

Option 1 ID : 6306801703231

Option 2 ID : 6306801703230

Option 3 ID : 6306801703229

Option 4 ID : 6306801703232

Status : Answered

Chosen Option : 4

Q.16 T, U, V, W, X, and Y are sitting around a circular table facing the centre (but not necessarily in the same order). U is sitting third to the right of V, who is sitting second to the left of W. Y is not an immediate neighbour of U. T is sitting to the immediate left of V. Who is sitting to the immediate left of T?

Ans ☒ 1. U

☒ 2. X

☒ 3. V

☒ 4. W

Question Type : MCQ

Question ID : 630680383020

Option 1 ID : 6306801492989

Option 2 ID : 6306801492987

Option 3 ID : 6306801492990

Option 4 ID : 6306801492988

Status : Answered

Chosen Option : 2

Q.17 CA 19 is related to ID 14 in a certain way. In the same way, ML 53 is related to SO 48. To which of the following is GD 8 related, following the same logic?

- Ans ☒ 1. NF -3
☒ 2. NH 3
☒ 3. MG 3
☒ 4. MH -3

Question Type : MCQ
Question ID : 630680423231
Option 1 ID : 6306801651286
Option 2 ID : 6306801651285
Option 3 ID : 6306801651283
Option 4 ID : 6306801651284
Status : Marked For Review
Chosen Option : 3

Q.18 Read the given statement(s) and conclusions carefully. Assuming that the information given in the statements is true, even if it appears to be at variance with commonly known facts, decide which of the given conclusions logically follow(s) from the statement(s).

Statements:
Some cups are glasses.
No cup is a plate.

Conclusions:
(I) No glass is a plate.
(II) Some glasses are not cups.

- Ans ☒ 1. Only conclusion I follows.
☒ 2. Neither conclusion I nor II follows.
☒ 3. Only conclusion II follows.
☒ 4. Both conclusions I and II follow.

Question Type : MCQ
Question ID : 630680419662
Option 1 ID : 6306801637141
Option 2 ID : 6306801637144
Option 3 ID : 6306801637142
Option 4 ID : 6306801637143
Status : Answered
Chosen Option : 3

Q.19 What will come in the place of '?' in the following equation, if '÷' and '-' are interchanged and 'x' and '+' are interchanged?
 $12 \times 96 - 24 + 8 \div 38 = ?$

- Ans ☒ 1. 6
☒ 2. 16
☒ 3. -14
☒ 4. -4

Question Type : MCQ
Question ID : 630680388341
Option 1 ID : 6306801513884
Option 2 ID : 6306801513885
Option 3 ID : 6306801513882
Option 4 ID : 6306801513883
Status : Answered
Chosen Option : 1

Q.20 What will come in the place of '?' in the following equation, if '+' and '-' are interchanged and 'x' and '÷' are interchanged?
 $56 - 33 \times 3 \div 4 + 36 = ?$

- Ans ☒ 1. 68
☒ 2. 64
☒ 3. 74
☒ 4. 66

Question Type : MCQ
Question ID : 630680383269
Option 1 ID : 6306801493977
Option 2 ID : 6306801493975
Option 3 ID : 6306801493978
Option 4 ID : 6306801493976
Status : Answered
Chosen Option : 2

Section : General Awareness

Q.1 The National Food Security Act (NFSA) was enacted in which year by the Government of India?

- Ans ☒ 1. 2008
☒ 2. 2005
☒ 3. 2013
☒ 4. 2001

Question Type : MCQ
Question ID : 630680477469
Option 1 ID : 6306801865034
Option 2 ID : 6306801865035
Option 3 ID : 6306801865033
Option 4 ID : 6306801865036
Status : Answered
Chosen Option : 4

Q.2 Prerana Shrimali received the Sangeet Natak Akademi Award in which of the following years for her contribution to the Kathak dance form?

- Ans ☒ 1. 2015
☒ 2. 2003
☒ 3. 2012
☒ 4. 2009

Question Type : MCQ
Question ID : 630680433367
Option 1 ID : 6306801691437
Option 2 ID : 6306801691438
Option 3 ID : 6306801691436
Option 4 ID : 6306801691435
Status : Answered
Chosen Option : 2

Q.3 According to the Ministry of Agriculture and Farmers Welfare 2022-23, which state of India is the largest producer of sugarcane?

- Ans ☒ 1. Andhra Pradesh
☒ 2. Karnataka
☒ 3. Bihar
☒ 4. Uttar Pradesh

Question Type : MCQ
Question ID : 630680653706
Option 1 ID : 6306802559241
Option 2 ID : 6306802559238
Option 3 ID : 6306802559240
Option 4 ID : 6306802559239
Status : Answered
Chosen Option : 4

Q.4 India won its first Olympic gold in hockey in which of the following years?

- Ans ☒ 1. 1936
☒ 2. 1928
☒ 3. 1932
☒ 4. 1940

Question Type : MCQ
Question ID : 630680799014
Option 1 ID : 6306803130860
Option 2 ID : 6306803130858
Option 3 ID : 6306803130859
Option 4 ID : 6306803130861
Status : Answered
Chosen Option : 2

Q.5 As per HDI 2021, which of the following neighbouring countries of India had the highest female life expectancy at birth?

- Ans ☒ 1. Maldives
☒ 2. Sri Lanka
☒ 3. Bangladesh
☒ 4. Bhutan

Question Type : MCQ
Question ID : 630680510906
Option 1 ID : 6306801996757
Option 2 ID : 6306801996754
Option 3 ID : 6306801996755
Option 4 ID : 6306801996756
Status : Answered
Chosen Option : 1

Q.6 From 13 September 2023, DMK MP Tiruchi Siva has been appointed the chairperson of the Committee on _____.

- Ans ☒ 1. Information Technology
- ☒ 2. Industry
- ☒ 3. Home
- ☒ 4. Transport

Question Type : MCQ
Question ID : 630680468934
Option 1 ID : 6306801831506
Option 2 ID : 6306801831503
Option 3 ID : 6306801831505
Option 4 ID : 6306801831504
Status : Answered
Chosen Option : 2

Q.7 Which of the following Rights is mentioned in Article 21 of the Indian Constitution?

- Ans ☒ 1. Right against Exploitation: Prohibition of trafficking in human beings and forced labour
- ☒ 2. Right to Freedom of Religion: Freedom to manage religious affairs
- ☒ 3. Right to Freedom: Protection of life and personal liberty
- ☒ 4. Right to Equality: Equality before law

Question Type : MCQ
Question ID : 630680406233
Option 1 ID : 6306801584017
Option 2 ID : 6306801584018
Option 3 ID : 6306801584016
Option 4 ID : 6306801584019
Status : Answered
Chosen Option : 3

Q.8 How much money was allotted by the Gujarat government in August 2023 for the One District, One Product (ODOP) Programme to promote its indigenous products at the international level?

- Ans ☒ 1. ₹58 crore
- ☒ 2. ₹10 crore
- ☒ 3. ₹100 crore
- ☒ 4. ₹25 crore

Question Type : MCQ
Question ID : 630680469518
Option 1 ID : 6306801833841
Option 2 ID : 6306801833839
Option 3 ID : 6306801833842
Option 4 ID : 6306801833840
Status : Answered
Chosen Option : 3

Q.9 The Sahitya Akademi award winning novel 'Zindaginama' was written by:

- Ans ☒ 1. Amrita Pritam
☒ 2. Krishna Sobti
☒ 3. Mahadevi Verma
☒ 4. Mannu Bhandari

Question Type : MCQ
Question ID : 630680512093
Option 1 ID : 6306802001343
Option 2 ID : 6306802001345
Option 3 ID : 6306802001344
Option 4 ID : 6306802001342
Status : Answered
Chosen Option : 1

Q.10 In which among the following years was Hindu widow remarriage declared legal in India?

- Ans ☒ 1. 1899
☒ 2. 1856
☒ 3. 1872
☒ 4. 1893

Question Type : MCQ
Question ID : 630680146034
Option 1 ID : 630680565034
Option 2 ID : 630680565035
Option 3 ID : 630680565037
Option 4 ID : 630680565036
Status : Answered
Chosen Option : 2

Q.11 Gabbro is an example of which type of rocks?

- Ans ☒ 1. Metamorphic rock
☒ 2. Organically formed sedimentary rock
☒ 3. Sedimentary rock
☒ 4. Igneous rock

Question Type : MCQ
Question ID : 630680456075
Option 1 ID : 6306801781241
Option 2 ID : 6306801781242
Option 3 ID : 6306801781240
Option 4 ID : 6306801781239
Status : Answered
Chosen Option : 2

Q.12 The remains of Great Bath have been found from the excavation at which of the following Harappan sites?

- Ans ☒ 1. Harappa
☒ 2. Mohenjodaro
☒ 3. Lothal
☒ 4. Kalibangan

Question Type : MCQ
Question ID : 630680616069
Option 1 ID : 6306802410978
Option 2 ID : 6306802410979
Option 3 ID : 6306802410981
Option 4 ID : 6306802410980
Status : Marked For Review
Chosen Option : 2

Q.13 Which of the following peaks is NOT located in the Himalayan mountains?

- Ans ☒ 1. Nanda Devi
☒ 2. Kalsubai
☒ 3. Annapurna
☒ 4. Kamet

Question Type : MCQ
Question ID : 630680484509
Option 1 ID : 6306801892350
Option 2 ID : 6306801892352
Option 3 ID : 6306801892353
Option 4 ID : 6306801892351
Status : Answered
Chosen Option : 2

Q.14 Annapurna Devi is associated with which of the following musical instruments?

- Ans ☒ 1. Flute
☒ 2. Mridangam
☒ 3. Surbahar
☒ 4. Sarangi

Question Type : MCQ
Question ID : 630680488690
Option 1 ID : 6306801908778
Option 2 ID : 6306801908775
Option 3 ID : 6306801908776
Option 4 ID : 6306801908777
Status : Answered
Chosen Option : 2

Q.15 What is the length of the men's kabaddi court?

- Ans ☒ 1. 13 m
- ☐ 2. 17 m
- ☐ 3. 11 m
- ☐ 4. 15 m

Question Type : MCQ
Question ID : 630680430551
Option 1 ID : 6306801680226
Option 2 ID : 6306801680228
Option 3 ID : 6306801680225
Option 4 ID : 6306801680227
Status : Answered
Chosen Option : 1

Q.16 In the context of microfinance in India, the concept of SHG-BLP is used. What does L stand for in SHG-BLP?

- Ans ☒ 1. Linkage
- ☐ 2. Lending
- ☐ 3. Lend
- ☐ 4. Link


Question Type : MCQ
Question ID : 630680302527
Option 1 ID : 6306801176779
Option 2 ID : 6306801176781
Option 3 ID : 6306801176780
Option 4 ID : 6306801176778
Status : Marked For Review
Chosen Option : 2


Q.17 Who regarded Vedas as the source of all knowledge and known for the slogan 'Go back to the Vedas'?


- Ans ☐ 1. Swami Vivekananda
- ☐ 2. Raja Rammohun Roy
- ☐ 3. Keshav Chandra sen
- ☒ 4. Swami Dayanada Saraswati


Question Type : MCQ
Question ID : 630680362755
Option 1 ID : 6306801412774
Option 2 ID : 6306801412775
Option 3 ID : 6306801412776
Option 4 ID : 6306801412773
Status : Answered
Chosen Option : 4

Q.18 What is the retirement age of Judges serving at the Supreme Court of India?

Ans  1. 65 years

 2. 62 years

 3. 60 years

 4. 68 years

Question Type : **MCQ**

Question ID : **630680305549**

Option 1 ID : **6306801188571**

Option 2 ID : **6306801188570**


Option 3 ID : **6306801188569**


Option 4 ID : **6306801188572**


Status : **Answered**


Chosen Option : **1**

Q.19 Rigveda is the earliest specimen of:

Ans  1. Indo European language

 2. Indo-African language

 3. Indian language

 4. Russian language

Question Type : **MCQ**

Question ID : **630680433808**

Option 1 ID : **6306801693198**

Option 2 ID : **6306801693197**


Option 3 ID : **6306801693195**


Option 4 ID : **6306801693196**


Status : **Answered**


Chosen Option : **3**

Q.20 The famous ‘Tripartite struggle’ for supremacy occurred between which of the following powers?

Ans  1. Gurjar-Pratihara, Rashtrakuta and Palas

 2. Chalukya, Sen and Pratihars

 3. Sen, Pala and Rashtrakuta

 4. Chouhan, Pala and Gurjar

Question Type : **MCQ**

Question ID : **630680322651**

Option 1 ID : **6306801255245**

Option 2 ID : **6306801255246**

Option 3 ID : **6306801255247**

Option 4 ID : **6306801255248**

Status : **Answered**

Chosen Option : **1**

Q.21 Who among the following is worshipped as Nataraja before many classical dance performances in India?

- Ans ☒ 1. Indra
☒ 2. Vishnu
☒ 3. Brahma
☒ 4. Shiva

Question Type : MCQ
Question ID : 630680465719
Option 1 ID : 6306801818913
Option 2 ID : 6306801818911
Option 3 ID : 6306801818914
Option 4 ID : 6306801818912
Status : Answered
Chosen Option : 4

Q.22 Chithirai festival of Tamil Nadu is dedicated to which of the following Goddesses?

- Ans ☒ 1. Mariamman
☒ 2. Pidari
☒ 3. Meenakshi
☒ 4. Muneeswaran

Question Type : MCQ
Question ID : 630680404785
Option 1 ID : 6306801578647
Option 2 ID : 6306801578649
Option 3 ID : 6306801578650
Option 4 ID : 6306801578648
Status : Not Attempted and Marked For Review
Chosen Option : --

Q.23 Which gas is released when you combine vinegar and baking soda in a balloon, causing it to inflate?

- Ans ☒ 1. Hydrogen
☒ 2. Oxygen
☒ 3. Carbon dioxide
☒ 4. Nitrogen

Question Type : MCQ
Question ID : 630680412074
Option 1 ID : 6306801607133
Option 2 ID : 6306801607132
Option 3 ID : 6306801607131
Option 4 ID : 6306801607134
Status : Answered
Chosen Option : 4

Q.24 Four resistors of equal resistance R each are connected in various possible ways both in series and/or parallel to get different combined resistances. Which of the following values of resistance cannot be achieved by using all the four resistors?

- Ans ☒ 1. $1.33 R$
☒ 2. $0.25 R$
☒ 3. $2 R$
☒ 4. $2.5 R$

Question Type : MCQ
Question ID : 630680419686
Option 1 ID : 6306801637243
Option 2 ID : 6306801637241
Option 3 ID : 6306801637242
Option 4 ID : 6306801637244
Status : Answered
Chosen Option : 1

Q.25 Which of the given options is rod-shaped, carries genetic information, is visible only at cell division and is present in the nucleus?

- Ans ☒ 1. Cytoplasm
☒ 2. Lysosomes
☒ 3. Chromosomes
☒ 4. Ribosomes

Question Type : MCQ
Question ID : 630680544246
Option 1 ID : 6306802127759
Option 2 ID : 6306802127760
Option 3 ID : 6306802127761
Option 4 ID : 6306802127758
Status : Answered
Chosen Option : 3

Section : English Language and Comprehension

Q.1 The following sentence has been split into four segments. Identify the segment that contains a grammatical error.
They were / interested / on / learning new languages.

- Ans ☒ 1. interested
☒ 2. learning new languages
☒ 3. on
☒ 4. They were

Question Type : MCQ
Question ID : 630680450014
Option 1 ID : 6306801757219
Option 2 ID : 6306801757221
Option 3 ID : 6306801757220
Option 4 ID : 6306801757218
Status : Answered
Chosen Option : 3

Q.2 Select the most appropriate option to substitute the underlined segment in the given sentence.

The project fell besides due to lack of funding and support.

Ans ☒ 1. fell through due to lack

☐ 2. fell until due to lack

☐ 3. fell about due to lack

☐ 4. fell along due to lack

Question Type : MCQ

Question ID : 630680549221

Option 1 ID : 6306802147355

Option 2 ID : 6306802147354

Option 3 ID : 6306802147353

Option 4 ID : 6306802147356

Status : Answered

Chosen Option : 1

Q.3 The following sentence has been split into four segments. Identify the segment that contains a grammatical error.

Sarah / will singing / at the concert / on Saturday.

Ans ☐ 1. at the concert

☐ 2. Sarah

☒ 3. will singing

☐ 4. on Saturday

Question Type : MCQ

Question ID : 630680413372

Option 1 ID : 6306801612310

Option 2 ID : 6306801612308

Option 3 ID : 6306801612309

Option 4 ID : 6306801612311

Status : Answered

Chosen Option : 3

Q.4 Select the most appropriate option that can substitute the underlined segment in the given sentence. If there is no need to substitute it, select 'No substitution required'.

The White man had to swallow his bombast and have completed the journey in mortified.

Ans ☐ 1. No substitution required

☒ 2. complete the journey in mortification

☐ 3. completes the journey mortifying

☐ 4. completing the mortifying journey

Question Type : MCQ

Question ID : 630680583974

Option 1 ID : 6306802284741

Option 2 ID : 6306802284738

Option 3 ID : 6306802284740

Option 4 ID : 6306802284739

Status : Marked For Review

Chosen Option : 2

Q.5 Select the most appropriate synonym of the following word.

Reluctant

- Ans ☒ 1. Unrelenting
☒ 2. Curious
☒ 3. Pleasant
☒ 4. Unwilling

Question Type : MCQ
Question ID : 630680396790
Option 1 ID : 6306801547247
Option 2 ID : 6306801547246
Option 3 ID : 6306801547245
Option 4 ID : 6306801547244
Status : Marked For Review
Chosen Option : 4

Q.6 Select the most appropriate synonym of the underlined word.
The management gave kudos to Jithin for his performance.

- Ans ☒ 1. punishment
☒ 2. admonishment
☒ 3. praise
☒ 4. criticism

Question Type : MCQ
Question ID : 630680517235
Option 1 ID : 6306802021336
Option 2 ID : 6306802021337
Option 3 ID : 6306802021339
Option 4 ID : 6306802021338
Status : Answered
Chosen Option : 3

Q.7 Select the INCORRECTLY spelt word.

- Ans ☒ 1. Extraneous
☒ 2. Quiescent
☒ 3. Posthumous
☒ 4. Colloquiel

Question Type : MCQ
Question ID : 630680616807
Option 1 ID : 6306802413473
Option 2 ID : 6306802413474
Option 3 ID : 6306802413472
Option 4 ID : 6306802413475
Status : Marked For Review
Chosen Option : 4

Q.8 Select the most appropriate option to fill in the blank.

The way she elaborated on every detail with precision impressed everyone ____ the meeting.

Ans ☒ 1. at

☐ 2. off

☐ 3. above

☐ 4. into

Question Type : MCQ

Question ID : 630680468917

Option 1 ID : 6306801831438

Option 2 ID : 6306801831436

Option 3 ID : 6306801831435

Option 4 ID : 6306801831437

Status : Answered

Chosen Option : 1

Q.9 The following sentence has been split into four segments. Identify the segment that contains a grammatical error.

I hope that / yesterday's lunch / at Rahul's place / was at your liking.

Ans ☒ 1. was at your liking.

☐ 2. at Rahul's place

☐ 3. I hope that

☐ 4. yesterday's lunch

Question Type : MCQ

Question ID : 630680627631

Option 1 ID : 6306802456626

Option 2 ID : 6306802456625

Option 3 ID : 6306802456623

Option 4 ID : 6306802456624

Status : Marked For Review

Chosen Option : 1

Q.10 Select the INCORRECTLY spelt word.

Ans ☐ 1. Addict

☐ 2. Eighty

☒ 3. Medicin

☐ 4. Crazy

Question Type : MCQ

Question ID : 6306801046649

Option 1 ID : 6306804108724

Option 2 ID : 6306804108721

Option 3 ID : 6306804108722

Option 4 ID : 6306804108723

Status : Answered

Chosen Option : 3

Q.11 Select the most appropriate option to fill in the blank.
The new intern was eager to learn the _____ of the corporate world.

- Ans ☒ 1. rides
☒ 2. flies
☒ 3. ropes
☒ 4. tides

Question Type : MCQ
Question ID : 630680530320
Option 1 ID : 6306802073183
Option 2 ID : 6306802073181
Option 3 ID : 6306802073182
Option 4 ID : 6306802073184
Status : Marked For Review
Chosen Option : 1

Q.12 The following sentence has been split into four segments. Identify the segment that contains a grammatical error.
While she / was watched / the movie, / her phone rang.

- Ans ☒ 1. her phone rang
☒ 2. While she
☒ 3. the movie,
☒ 4. was watched

Question Type : MCQ
Question ID : 630680444230
Option 1 ID : 6306801734206
Option 2 ID : 6306801734203
Option 3 ID : 6306801734205
Option 4 ID : 6306801734204
Status : Marked For Review
Chosen Option : 4

Q.13 Select the most appropriate synonym of the given word.
Hamper

- Ans ☒ 1. Hinder
☒ 2. Accuse
☒ 3. Urge
☒ 4. Absorb

Question Type : MCQ
Question ID : 630680726539
Option 1 ID : 6306802847164
Option 2 ID : 6306802847165
Option 3 ID : 6306802847162
Option 4 ID : 6306802847163
Status : Answered
Chosen Option : 1

Q.14 Select the most appropriate synonym of the given word.
Panacea

- Ans ☒ 1. Remedy
☐ 2. Pressure
☐ 3. Survey
☐ 4. Miracle

Question Type : MCQ
Question ID : 630680397583
Option 1 ID : 6306801550256
Option 2 ID : 6306801550255
Option 3 ID : 6306801550253
Option 4 ID : 6306801550254
Status : Marked For Review
Chosen Option : 1

Q.15 Select the appropriate option that can substitute the underlined idiom in the given sentence.

Everyone says that waking up early in the morning is beneficial for our health and overall well-being. But it is easier said than done.

- Ans ☐ 1. a step towards better health
☐ 2. a life filled with excitement
☐ 3. to start performing better than before
☒ 4. not as easy as it seems to be

Question Type : MCQ
Question ID : 630680134118
Option 1 ID : 630680519369
Option 2 ID : 630680519366
Option 3 ID : 630680519367
Option 4 ID : 630680519368
Status : Answered
Chosen Option : 4

Q.16 Select the most appropriate verb / verb phrase to fill in the blank.
In 2030, advancements in technology _____ the way we live, work and interact with each other.

- Ans ☐ 1. could be reshaped
☒ 2. will be reshaping
☐ 3. shall have been reshaped
☐ 4. have reshaped

Question Type : MCQ
Question ID : 630680514381
Option 1 ID : 6306802010152
Option 2 ID : 6306802010150
Option 3 ID : 6306802010149
Option 4 ID : 6306802010151
Status : Marked For Review
Chosen Option : 3

Q.17 Select the correct spelling of the underlined word in the given sentence.

The flight was about to take off when suddenly the authorities came to ensure the record of the maintanance department.

- Ans ☒ 1. maintainence
☒ 2. maintenance
☒ 3. maintnance
☒ 4. maintainance

Question Type : MCQ
Question ID : 630680487252
Option 1 ID : 6306801903152
Option 2 ID : 6306801903153
Option 3 ID : 6306801903150
Option 4 ID : 6306801903151
Status : Answered
Chosen Option : 4

Q.18 Select the most appropriate option to fill in the blank.
During the meeting, the employer's _____ was clear as he calmly addressed each team member's concerns and provided insightful solutions.

- Ans ☒ 1. composes
☒ 2. composed
☒ 3. composure
☒ 4. compose

Question Type : MCQ
Question ID : 6306801031663
Option 1 ID : 6306804049364
Option 2 ID : 6306804049363
Option 3 ID : 6306804049361
Option 4 ID : 6306804049362
Status : Answered
Chosen Option : 3

Q.19 Select the most appropriate synonym of the underlined word in the given sentence.
The lenient ways of the manager prompted substandard work from his subordinates.

- Ans ☒ 1. easygoing
☒ 2. insane
☒ 3. irritating
☒ 4. ignorant

Question Type : MCQ
Question ID : 630680395132
Option 1 ID : 6306801540796
Option 2 ID : 6306801540798
Option 3 ID : 6306801540799
Option 4 ID : 6306801540797
Status : Answered
Chosen Option : 1

Q.20 Parts of the following sentence have been given as options. Select the option that contains an error.
My sister-in-law is the most succeeded for all the industrialists in this country today.

Ans  1. succeeded for all

 2. My sister-in-law is the most

 3. in this country today

 4. the industrialists

Question Type : **MCQ**

Question ID : **630680154850**

Option 1 ID : **630680599197**

Option 2 ID : **630680599196**

Option 3 ID : **630680599199**

Option 4 ID : **630680599198**

Status : **Answered**

Chosen Option : **1**

Comprehension:

In the following passage, some words have been deleted. Read the passage carefully and select the most appropriate option to fill in each blank.

A phobia is an irrational fear of an object, situation or living thing. While fear is (1)_____ natural response to danger, phobias often occur (2)_____ response to something unlikely to cause real harm. In some cases, a person with a (3)_____ will meet the diagnostic criteria for a specific phobia, which is a type of anxiety disorder. Someone with a specific phobia will (4)_____ intense fear and anxiety when confronted with the source of the phobia, which could include blood, heights or specific animals like dogs. Phobias are (5)_____ by significant distress and often cause a person to avoid the source of their fear or suffer from extreme anxiety when faced with it. Someone experiencing a phobia that is interfering with everyday life should consider undergoing treatment for their phobia, as outcomes for professional care are typically favourable.

SubQuestion No : 21

Q.21 Select the most appropriate option to fill in blank number 1.

Ans  1. these

 2. those

 3. one

 4. a

Question Type : **MCQ**

Question ID : **630680744405**

Option 1 ID : **6306802917839**

Option 2 ID : **6306802917838**

Option 3 ID : **6306802917840**

Option 4 ID : **6306802917837**

Status : **Answered**

Chosen Option : **4**

SSC MTS (Non Technical) EXAM STUDY KIT



FREE
SHIPPING 

- ▶ 100% SSC MTS Exam Syllabus Covered
- ▶ PRINTED Notes
- ▶ 8 Books, 700+ Pages
- ▶ 2500+ MCQs
- ▶ Practice Papers
- ▶ 1 Year Current Affairs

50%
OFF

 SSCPOTAL.IN

SSC MTS PDF NOTES

100% Syllabus Covered



CLICK HERE

CLICK BELOW LINK TO DOWNLOAD PDF NOTES

<https://sscpportal.in/study-kit/mts>

<https://sscpportal.in/study-kit>

Comprehension:

In the following passage, some words have been deleted. Read the passage carefully and select the most appropriate option to fill in each blank.

A phobia is an irrational fear of an object, situation or living thing. While fear is (1)_____ natural response to danger, phobias often occur (2)_____ response to something unlikely to cause real harm. In some cases, a person with a (3)_____ will meet the diagnostic criteria for a specific phobia, which is a type of anxiety disorder. Someone with a specific phobia will (4)_____ intense fear and anxiety when confronted with the source of the phobia, which could include blood, heights or specific animals like dogs. Phobias are (5)_____ by significant distress and often cause a person to avoid the source of their fear or suffer from extreme anxiety when faced with it. Someone experiencing a phobia that is interfering with everyday life should consider undergoing treatment for their phobia, as outcomes for professional care are typically favourable.

SubQuestion No : 22

Q.22 Select the most appropriate option to fill in blank number 2.

- Ans ☒ 1. of
☒ 2. on
☒ 3. at
☒ 4. in

Question Type : MCQ
Question ID : 630680744406
Option 1 ID : 6306802917844
Option 2 ID : 6306802917841
Option 3 ID : 6306802917843
Option 4 ID : 6306802917842
Status : Marked For Review
Chosen Option : 4

Comprehension:

In the following passage, some words have been deleted. Read the passage carefully and select the most appropriate option to fill in each blank.

A phobia is an irrational fear of an object, situation or living thing. While fear is (1)_____ natural response to danger, phobias often occur (2)_____ response to something unlikely to cause real harm. In some cases, a person with a (3)_____ will meet the diagnostic criteria for a specific phobia, which is a type of anxiety disorder. Someone with a specific phobia will (4)_____ intense fear and anxiety when confronted with the source of the phobia, which could include blood, heights or specific animals like dogs. Phobias are (5)_____ by significant distress and often cause a person to avoid the source of their fear or suffer from extreme anxiety when faced with it. Someone experiencing a phobia that is interfering with everyday life should consider undergoing treatment for their phobia, as outcomes for professional care are typically favourable.

SubQuestion No : 23

Q.23 Select the most appropriate option to fill in blank number 3.

- Ans ☒ 1. trouble
☒ 2. danger
☒ 3. phobia
☒ 4. violence

Question Type : MCQ
Question ID : 630680744407
Option 1 ID : 6306802917848
Option 2 ID : 6306802917845
Option 3 ID : 6306802917847
Option 4 ID : 6306802917846
Status : Answered
Chosen Option : 3

Comprehension:

In the following passage, some words have been deleted. Read the passage carefully and select the most appropriate option to fill in each blank.

A phobia is an irrational fear of an object, situation or living thing. While fear is (1)_____ natural response to danger, phobias often occur (2)_____ response to something unlikely to cause real harm. In some cases, a person with a (3)_____ will meet the diagnostic criteria for a specific phobia, which is a type of anxiety disorder. Someone with a specific phobia will (4)_____ intense fear and anxiety when confronted with the source of the phobia, which could include blood, heights or specific animals like dogs. Phobias are (5)_____ by significant distress and often cause a person to avoid the source of their fear or suffer from extreme anxiety when faced with it. Someone experiencing a phobia that is interfering with everyday life should consider undergoing treatment for their phobia, as outcomes for professional care are typically favourable.

SubQuestion No : 24

Q.24 Select the most appropriate option to fill in blank number 4.

- Ans ☒ 1. dream
☒ 2. experience
☒ 3. aspire
☒ 4. horizon

Question Type : MCQ
Question ID : 630680744408
Option 1 ID : 6306802917849
Option 2 ID : 6306802917851
Option 3 ID : 6306802917850
Option 4 ID : 6306802917852
Status : Answered
Chosen Option : 2

Comprehension:

In the following passage, some words have been deleted. Read the passage carefully and select the most appropriate option to fill in each blank.

A phobia is an irrational fear of an object, situation or living thing. While fear is (1)_____ natural response to danger, phobias often occur (2)_____ response to something unlikely to cause real harm. In some cases, a person with a (3)_____ will meet the diagnostic criteria for a specific phobia, which is a type of anxiety disorder. Someone with a specific phobia will (4)_____ intense fear and anxiety when confronted with the source of the phobia, which could include blood, heights or specific animals like dogs. Phobias are (5)_____ by significant distress and often cause a person to avoid the source of their fear or suffer from extreme anxiety when faced with it. Someone experiencing a phobia that is interfering with everyday life should consider undergoing treatment for their phobia, as outcomes for professional care are typically favourable.

SubQuestion No : 25

Q.25 Select the most appropriate option to fill in blank number 5.

- Ans ☒ 1. qualified
☒ 2. classified
☒ 3. characterised
☒ 4. categorised

Question Type : MCQ
Question ID : 630680744409
Option 1 ID : 6306802917856
Option 2 ID : 6306802917854
Option 3 ID : 6306802917853
Option 4 ID : 6306802917855
Status : Marked For Review
Chosen Option : 3