

Multi Tasking Non Technical Staff and Havaladar CBIC and CBN Examination 2024

Roll Number	
Candidate Name	
Venue Name	iON Digital Zone iDZ Naino Ka Bas
Exam Date	07/10/2024
Exam Time	12:30 PM - 2:30 PM
Subject	MTS Non Tech Havaladar CBIC and CBN Examination 2024

Section : Numerical and Mathematical Ability

Q.1 The average weight of a family of five members (in kg) whose weights are 40 kg, 49 kg, 56 kg, 67 kg and 36 kg is:

- Ans ☒ 1. 51.6  
☒ 2. 48.6  
☒ 3. 49.6  
☒ 4. 50.6

Question Type : MCQ  
Question ID : 630680551640  
Option 1 ID : 6306802156788  
Option 2 ID : 6306802156787  
Option 3 ID : 6306802156785  
Option 4 ID : 6306802156786  
Status : Answered  
Chosen Option : 3

Q.2 At what rate percent per annum on simple interest will ₹760 amount to ₹912 in 5 years?

- Ans ☒ 1. 3%  
☒ 2. 6%  
☒ 3. 5%  
☒ 4. 4%

Question Type : MCQ  
Question ID : 630680410546  
Option 1 ID : 6306801600910  
Option 2 ID : 6306801600911  
Option 3 ID : 6306801600909  
Option 4 ID : 6306801600908  
Status : Answered  
Chosen Option : 4

# SSC MTS (Non Technical) EXAM STUDY KIT



FREE  
SHIPPING 

- ▶ 100% SSC MTS Exam Syllabus Covered
- ▶ PRINTED Notes
- ▶ 8 Books, 700+ Pages
- ▶ 2500+ MCQs
- ▶ Practice Papers
- ▶ 1 Year Current Affairs

**50%**  
OFF

 SSCPOTAL.IN

# SSC MTS PDF NOTES

100% Syllabus Covered



CLICK HERE

CLICK BELOW LINK TO DOWNLOAD PDF NOTES

<https://sscportal.in/study-kit/mts>

<https://sscportal.in/study-kit>

Q.3 The volume of the hemisphere is  $486\pi \text{ cm}^3$ . If the radius is tripled, then what will be its curved surface area (in  $\text{cm}^2$ )?

- Ans ☒ 1.  $1025\pi$   
☒ 2. 1458  
☒ 3. 1546  
☒ 4.  $1458\pi$

Question Type : MCQ  
Question ID : 630680386877  
Option 1 ID : 6306801508221  
Option 2 ID : 6306801508218  
Option 3 ID : 6306801508220  
Option 4 ID : 6306801508219  
Status : Answered  
Chosen Option : 4

Q.4 Trader A gives a single discount of 45% and Trader B gives two successive discounts of 35% and 10% on an identical item of the same marked price. If the discount given by A is ₹539 more than the discount given by Trader B, then what is the marked price (in ₹) of the item?

- Ans ☒ 1. 16,500  
☒ 2. 15,400  
☒ 3. 15,600  
☒ 4. 14,500

Question Type : MCQ  
Question ID : 630680631413  
Option 1 ID : 6306802471598  
Option 2 ID : 6306802471595  
Option 3 ID : 6306802471597  
Option 4 ID : 6306802471596  
Status : Answered  
Chosen Option : 2

Q.5 141 is divided into two parts in such a way that the one-eighth part of the first and one-ninth part of the second are in the ratio 5 : 6. Find the first part.

- Ans ☒ 1. 36  
☒ 2. 72  
☒ 3. 60  
☒ 4. 48

Question Type : MCQ  
Question ID : 630680493035  
Option 1 ID : 6306801925911  
Option 2 ID : 6306801925914  
Option 3 ID : 6306801925913  
Option 4 ID : 6306801925912  
Status : Answered  
Chosen Option : 3

Q.6 The average weight of a family of five members (in kg) whose weights are 40 kg, 49 kg, 56 kg, 66 kg and 35 kg is:

- Ans ☒ 1. 50.2  
☒ 2. 49.2  
☒ 3. 51.2  
☒ 4. 48.2

Question Type : MCQ  
Question ID : 630680551634  
Option 1 ID : 6306802156762  
Option 2 ID : 6306802156761  
Option 3 ID : 6306802156764  
Option 4 ID : 6306802156763  
Status : Answered  
Chosen Option : 2

Q.7 Anil sells sugar at cost price but uses false weights and thus makes 20% profit. How many grams of sugar does he give in 1 kilogram?

- Ans ☒ 1. 833.33  
☒ 2. 833.13  
☒ 3. 833.23  
☒ 4. 823.33

Question Type : MCQ  
Question ID : 630680115666  
Option 1 ID : 630680448017  
Option 2 ID : 630680448015  
Option 3 ID : 630680448016  
Option 4 ID : 630680448014  
Status : Answered  
Chosen Option : 1

Q.8 A car can cover 275 km in 5 hours. If its speed is reduced by 5 km/h, then how much time will the car take to cover a distance of 250 km?

- Ans ☒ 1. 5 hr  
☒ 2. 6 hr  
☒ 3. 4 hr 30 min  
☒ 4. 5 hr 30 min

Question Type : MCQ  
Question ID : 630680279367  
Option 1 ID : 6306801085736  
Option 2 ID : 6306801085738  
Option 3 ID : 6306801085735  
Option 4 ID : 6306801085737  
Status : Answered  
Chosen Option : 1

Q.9 The radius of a cylinder is doubled due to which the volume of the new cylinder also gets doubled. The height of the new cylinder is what percentage of the old cylinder?

- Ans ☒ 1. 25%  
☒ 2. 50%  
☒ 3. 200%  
☒ 4. 100%

Question Type : MCQ  
Question ID : 630680382130  
Option 1 ID : 6306801489438  
Option 2 ID : 6306801489436  
Option 3 ID : 6306801489435  
Option 4 ID : 6306801489437  
Status : Answered  
Chosen Option : 2

Q.10 Find the simple interest (in ₹) on ₹4000 as a sum borrowed at 4% per year rate of interest for 3 years.

- Ans ☒ 1. 480  
☒ 2. 440  
☒ 3. 420  
☒ 4. 520

Question Type : MCQ  
Question ID : 630680591999  
Option 1 ID : 6306802316463  
Option 2 ID : 6306802316466  
Option 3 ID : 6306802316465  
Option 4 ID : 6306802316464  
Status : Answered  
Chosen Option : 1

Q.11 By selling an article for ₹20, a dealer makes a profit of 10%. By how much should he increase his selling price (in ₹, rounded off to two decimal place) so as to make a profit of 50%?

- Ans ☒ 1. 8.27  
☒ 2. 9.27  
☒ 3. 7.27  
☒ 4. 10.27

Question Type : MCQ  
Question ID : 630680632601  
Option 1 ID : 6306802476303  
Option 2 ID : 6306802476304  
Option 3 ID : 6306802476302  
Option 4 ID : 6306802476305  
Status : Answered  
Chosen Option : 3

Q.12 The largest number that can divide 147,183 and 271 leaving remainders 11,13 and 16, respectively, is:

- Ans ☒ 1. 14  
☒ 2. 15  
☒ 3. 16  
☒ 4. 17

Question Type : MCQ  
Question ID : 630680104337  
Option 1 ID : 630680405566  
Option 2 ID : 630680405565  
Option 3 ID : 630680405564  
Option 4 ID : 630680405563  
Status : Answered  
Chosen Option : 4

Q.13 The given table represents the number of tablets sold by five dealers in the year 2022.

Dealers	Number of Tablets sold (in lakhs)
A	12
B	15
C	10
D	25
E	22

What is the difference of total number of tablets (in lakhs) sold by A, B and D, E?

- Ans ☒ 1. 18  
☒ 2. 22  
☒ 3. 25  
☒ 4. 20

Question Type : MCQ  
Question ID : 630680523786  
Option 1 ID : 6306802047297  
Option 2 ID : 6306802047296  
Option 3 ID : 6306802047298  
Option 4 ID : 6306802047295  
Status : Answered  
Chosen Option : 4

Q.14 A hemispherical bowl with diameter 14 cm has to be painted inside and outside. How much it will be charged at the rate of ₹20 per 40 cm<sup>2</sup>?

- Ans ☒ 1. ₹154  
☒ 2. ₹616  
☒ 3. ₹308  
☒ 4. ₹224

Question Type : MCQ  
Question ID : 63068076125  
Option 1 ID : 630680294605  
Option 2 ID : 630680294608  
Option 3 ID : 630680294607  
Option 4 ID : 630680294606  
Status : Answered  
Chosen Option : 1

Q.15 The salaries of A and B are in the ratio of 3 : 4. Their salaries are equal if A's salary increases by  $\frac{1}{3}$  of the salary. Then what percent of his salary does B receive?

- Ans ☒ 1. 66.67%  
☒ 2. 75%  
☒ 3. 50%  
☒ 4. 78.5%

Question Type : MCQ  
Question ID : 630680464519  
Option 1 ID : 6306801814111  
Option 2 ID : 6306801814113  
Option 3 ID : 6306801814112  
Option 4 ID : 6306801814114  
Status : Answered  
Chosen Option : 1

Q.16 The number of heads on the farm, as determined by the farmer, was 60. When he counted, he discovered there were 150 legs. If all that was present were pigeons or horses, and every horse on the property had four legs while every pigeon had two, how many horses were there on the property?

- Ans ☒ 1. 14  
☒ 2. 10  
☒ 3. 12  
☒ 4. 15

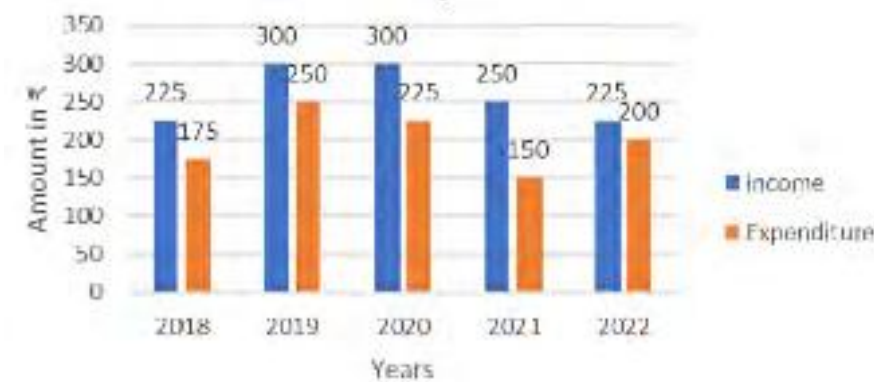
Question Type : MCQ  
Question ID : 630680455366  
Option 1 ID : 6306801778380  
Option 2 ID : 6306801778378  
Option 3 ID : 6306801778379  
Option 4 ID : 6306801778381  
Status : Answered  
Chosen Option : 4

Q.17 The average of seven consecutive numbers is 95. Find the middle number in the series of seven consecutive numbers.

- Ans ☒ 1. 98  
☒ 2. 95  
☒ 3. 92  
☒ 4. 96

Question Type : MCQ  
Question ID : 630680404559  
Option 1 ID : 6306801577737  
Option 2 ID : 6306801577735  
Option 3 ID : 6306801577736  
Option 4 ID : 6306801577738  
Status : Answered  
Chosen Option : 2

Q.18 Study the bar graph and answer the question that follows.  
The bar graph shows the income and expenditure (in ₹ crores) of a company in 5 years during 2018 to 2022.



In which year is the ratio of income to expenditure 2<sup>nd</sup> highest?

- Ans ☒ 1. 2022  
☒ 2. 2019  
☒ 3. 2020  
☒ 4. 2018

Question Type : MCQ  
Question ID : 630680399107  
Option 1 ID : 6306801556389  
Option 2 ID : 6306801556387  
Option 3 ID : 6306801556388  
Option 4 ID : 6306801556386  
Status : Answered  
Chosen Option : 4

Q.19 Find the simple interest (in ₹) on ₹3000 as a sum borrowed at 6% per year rate of interest for 5 years.

- Ans ☒ 1. 940  
☒ 2. 860  
☒ 3. 900  
☒ 4. 840

Question Type : MCQ  
Question ID : 630680591941  
Option 1 ID : 6306802316232  
Option 2 ID : 6306802316234  
Option 3 ID : 6306802316231  
Option 4 ID : 6306802316233  
Status : Answered  
Chosen Option : 3

Q.20 A 240 m long train crosses a man walking at a speed of 4.5 km/h in the opposite direction in 12 seconds. What is the speed (in km/h) of the train?

- Ans ☒ 1. 61.5  
☒ 2. 60.5  
☒ 3. 58.5  
☒ 4. 67.5

Question Type : MCQ  
Question ID : 630680233076  
Option 1 ID : 630680904427  
Option 2 ID : 630680904426  
Option 3 ID : 630680904425  
Option 4 ID : 630680904428  
Status : Answered  
Chosen Option : 4

Section : Reasoning Ability and Problem Solving

Q.1 What will come in the place of '?' in the following equation, if '+' and '-' are interchanged and 'x' and '÷' are interchanged?  
 $14 \div 7 - 27 \times 9 + 12 = ?$

- Ans ☒ 1. 79  
☒ 2. 89  
☒ 3. 71  
☒ 4. 81

Question Type : MCQ  
Question ID : 630680271476  
Option 1 ID : 6306801054978  
Option 2 ID : 6306801054976  
Option 3 ID : 6306801054979  
Option 4 ID : 6306801054977  
Status : Answered  
Chosen Option : 2

Q.2 14 is related to 93 following a certain logic. Following the same logic, 6 is related to 37. To which of the following is 11 related, following the same logic?  
(NOTE: Operations should be performed on the whole numbers, without breaking down the numbers into its constituent digits. E.g. 13 – Operations on 13 such as adding/subtracting/multiplying etc. to 13 can be performed. Breaking down 13 into 1 and 3 and then performing mathematical operations on 1 and 3 is not allowed.)

- Ans ☒ 1. 67  
☒ 2. 72  
☒ 3. 90  
☒ 4. 77

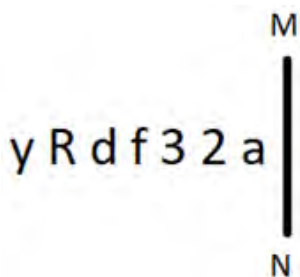
Question Type : MCQ  
Question ID : 630680450176  
Option 1 ID : 6306801757853  
Option 2 ID : 6306801757851  
Option 3 ID : 6306801757854  
Option 4 ID : 6306801757852  
Status : Answered  
Chosen Option : 1

Q.3 In a certain code language, 'like my pet' is written as 'nj kj lk' and 'pet is wet' is written as 'lk mk bt'. How is 'pet' written in the given language?

- Ans
- ☒ 1. mk
  - ☒ 2. nj
  - ☒ 3. lk
  - ☒ 4. kj

Question Type : MCQ  
Question ID : 630680419469  
Option 1 ID : 6306801636544  
Option 2 ID : 6306801636547  
Option 3 ID : 6306801636546  
Option 4 ID : 6306801636545  
Status : Answered  
Chosen Option : 3

Q.4 Select the correct mirror image of the given figure when the mirror is placed at MN as shown below.



- Ans
- ☒ 1. a 2 3 f d R y
  - ☒ 2. a 2 3 f b R y
  - ☒ 3. a 2 3 f b R y
  - ☒ 4. a 2 3 f b R y

Question Type : MCQ  
Question ID : 630680525250  
Option 1 ID : 6306802053085  
Option 2 ID : 6306802053084  
Option 3 ID : 6306802053086  
Option 4 ID : 6306802053087  
Status : Answered  
Chosen Option : 2

**Q.5** Read the given statements and conclusions carefully. Assuming that the information given in the statements is true, even if it appears to be at variance with commonly known facts, decide which of the given conclusions logically follow(s) from the statements.

**Statements:**

Some lights are fans.

Some fans are beds.

**Conclusions:**

(I) Some lights are beds.

(II) All beds are fans.

**Ans** ✔️ 1. Neither conclusion I nor II follows

❌ 2. Only conclusion I follows

❌ 3. Both conclusion I and II follow

❌ 4. Only conclusion II follows

Question Type : **MCQ**

Question ID : **630680411085**

Option 1 ID : **6306801603095**

Option 2 ID : **6306801603092**

Option 3 ID : **6306801603094**

Option 4 ID : **6306801603093**

Status : **Answered**

Chosen Option : 1

**Q.6** In the following number-pairs, the second number is obtained by applying certain mathematical operations to the first number. Select the set in which the numbers are related in the same way as are the numbers of the following sets.

(NOTE: Operations should be performed on the whole numbers, without breaking down the numbers into its constituent digits. E.g. 13 – Operations on 13 such as adding/subtracting/multiplying etc. to 13 can be performed. Breaking down 13 into 1 and 3 and then performing mathematical operations on 1 and 3 is not allowed.)

10 , 99

21, 440

**Ans** ❌ 1. 3, 23

❌ 2. 15, 285

✔️ 3. 30, 899

❌ 4. 26, 298

Question Type : **MCQ**

Question ID : **630680408011**

Option 1 ID : **6306801590963**

Option 2 ID : **6306801590964**

Option 3 ID : **6306801590966**

Option 4 ID : **6306801590965**

Status : **Answered**

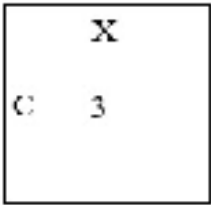
Chosen Option : 3

Q.7 Select the figure from among the given options that can replace the question mark (?) in the following series.

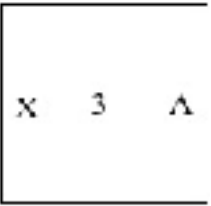
= C		A	
C	X	A C	X
X X		C	
		?	

Ans

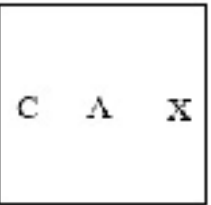
✓ 1.



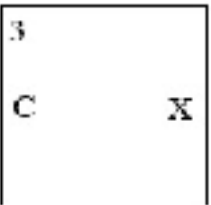
✗ 2.



✗ 3.



✗ 4.



Question Type : MCQ  
Question ID : 630680468003  
Option 1 ID : 6306801827915  
Option 2 ID : 6306801827917  
Option 3 ID : 6306801827916  
Option 4 ID : 6306801827914  
Status : Answered  
Chosen Option : 1

Q.8 In a certain code language, 'bring hot food' is coded as 'ud lp sj' and 'food is tasty' is coded as 'sj xk jt'. How is 'food' coded in the given language?

Ans

✗ 1. lp

✗ 2. ud

✗ 3. xk

✓ 4. sj

Question Type : MCQ  
Question ID : 630680426462  
Option 1 ID : 6306801663936  
Option 2 ID : 6306801663935  
Option 3 ID : 6306801663937  
Option 4 ID : 6306801663934  
Status : Answered  
Chosen Option : 4

Q.9 EX04 is related to ZS16 in a certain way. In the same way, UN06 is related to PI36. To which of the following is WP07 related, following the same logic?

- Ans ☒ 1. KR94  
☒ 2. KR49  
☒ 3. RK94  
☒ 4. RK49

Question Type : MCQ  
Question ID : 6306801108794  
Option 1 ID : 6306804355725  
Option 2 ID : 6306804355723  
Option 3 ID : 6306804355724  
Option 4 ID : 6306804355722  
Status : Answered  
Chosen Option : 4

Q.10 What should come in place of '?' in the given series?

16, 8.5, 9.5, 15.75, 33.5, ?

- Ans ☒ 1. 83.75  
☒ 2. 69  
☒ 3. 67  
☒ 4. 86.25

Question Type : MCQ  
Question ID : 630680531533  
Option 1 ID : 6306802077927  
Option 2 ID : 6306802077925  
Option 3 ID : 6306802077928  
Option 4 ID : 6306802077926  
Status : Not Answered  
Chosen Option : --

Q.11 Seven people A, B, C, D, E, F and G are sitting around a circular table, facing the center (but not necessarily in the same order). F is sitting fourth to the right of D. E is sitting second to the left of F. B is sitting to the immediate left of G. A is not an immediate neighbour of F.

How many people are sitting between C and D when counted from the right of D?

- Ans ☒ 1. Two  
☒ 2. Four  
☒ 3. One  
☒ 4. Three

Question Type : MCQ  
Question ID : 630680379514  
Option 1 ID : 6306801479102  
Option 2 ID : 6306801479099  
Option 3 ID : 6306801479101  
Option 4 ID : 6306801479100  
Status : Answered  
Chosen Option : 1

Q.12 A, B, P, Q, Y and Z are sitting around a circular table facing the centre (but not necessarily in the same order). Q sits to the immediate left of B. Y sits to the immediate right of B. A sits second to the right of B. P sits second to the right of A. Who sits third to the right of Z?

- Ans ☒ 1. P  
☒ 2. A  
☒ 3. Q  
☒ 4. B

Question Type : MCQ  
Question ID : 630680386837  
Option 1 ID : 6306801508061  
Option 2 ID : 6306801508059  
Option 3 ID : 6306801508060  
Option 4 ID : 6306801508058  
Status : Answered  
Chosen Option : 4

Q.13 In a certain code language, 'good bright boy' is coded as 'xd yf vj' and 'boy is lazy' is coded as 'sb xd ql'. How is 'boy' coded in the given language?

- Ans ☒ 1. xd  
☒ 2. vj  
☒ 3. yf  
☒ 4. ql

Question Type : MCQ  
Question ID : 630680436323  
Option 1 ID : 6306801703234  
Option 2 ID : 6306801703233  
Option 3 ID : 6306801703236  
Option 4 ID : 6306801703235  
Status : Answered  
Chosen Option : 1

Q.14 Read the given statements and conclusions carefully. Assuming that the information given in the statements is true, even if it appears to be at variance with commonly known facts, decide which of the given conclusions logically follow(s) from the statements.

Statements:

All roses are lilies.

Some lilies are sunflowers.

Conclusions:

(I): Some roses are sunflowers.

(II): All lilies are roses.

- Ans ☒ 1. Only conclusion II follows.  
☒ 2. Both conclusions I and II follow.  
☒ 3. Neither conclusion I nor II follows.  
☒ 4. Only conclusion I follows.

Question Type : MCQ  
Question ID : 630680410628  
Option 1 ID : 6306801601273  
Option 2 ID : 6306801601274  
Option 3 ID : 6306801601275  
Option 4 ID : 6306801601272  
Status : Answered  
Chosen Option : 3

Q.15 What should come in place of question mark (?) in the given series based on the English alphabetical order?  
XJP, VMN, TPL, RSJ, ?

- Ans ☒ 1. PUG  
☒ 2. PVG  
☒ 3. PVH  
☒ 4. QVG

Question Type : MCQ  
Question ID : 630680338841  
Option 1 ID : 6306801317956  
Option 2 ID : 6306801317953  
Option 3 ID : 6306801317955  
Option 4 ID : 6306801317954  
Status : Answered  
Chosen Option : 3

Q.16 Select the figure from among the given options that can replace the question mark (?) in the following series and complete the pattern.

8	3	V	8	=	V	8	=	
V	I	=	=	□	3	8	3	G
G	□		I	G	□	I	3	□
								?

Ans

- ☒ 1. 

=		G
8	V	□
	I	3
- ☒ 2. 

G		8
=	3	I
	□	V
- ☒ 3. 

=		G
8	3	I
	□	V
- ☒ 4. 

G		8
=	V	□
	I	3

Question Type : MCQ  
Question ID : 630680441080  
Option 1 ID : 6306801721976  
Option 2 ID : 6306801721977  
Option 3 ID : 6306801721975  
Option 4 ID : 6306801721974  
Status : Not Answered  
Chosen Option : --

Q.17 In a certain code language, 'BUY' is written as 'ACTVXZ' and 'CAP' is written as 'BDZBOQ'. How will 'BOX' be written in that language?

- Ans
- ☒ 1. ACMPUY
  - ☒ 2. ACMPWY
  - ☒ 3. CDPQYZ
  - ☒ 4. ACNPWY

Question Type : MCQ  
Question ID : 630680465238  
Option 1 ID : 6306801816990  
Option 2 ID : 6306801816989  
Option 3 ID : 6306801816987  
Option 4 ID : 6306801816988  
Status : Answered  
Chosen Option : 4

# SSC MTS (Non Technical) EXAM STUDY KIT



FREE  
SHIPPING 

- ▶ 100% SSC MTS Exam Syllabus Covered
- ▶ PRINTED Notes
- ▶ 8 Books, 700+ Pages
- ▶ 2500+ MCQs
- ▶ Practice Papers
- ▶ 1 Year Current Affairs

**50%**  
OFF

 SSCPOTAL.IN

# SSC MTS PDF NOTES

100% Syllabus Covered



**50%**  
OFF

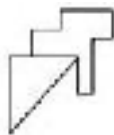
CLICK HERE

CLICK BELOW LINK TO DOWNLOAD PDF NOTES

<https://sscportal.in/study-kit/mts>

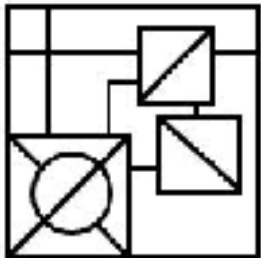
<https://sscportal.in/study-kit>

Q.18 Select the option in which the given figure is embedded (rotation is NOT allowed).

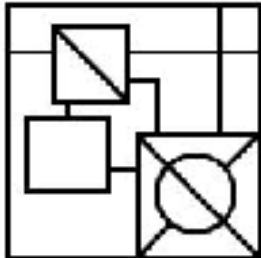


Ans

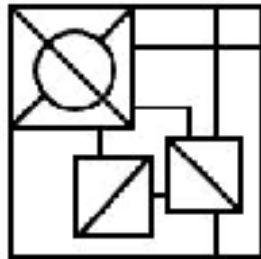
✗ 1.



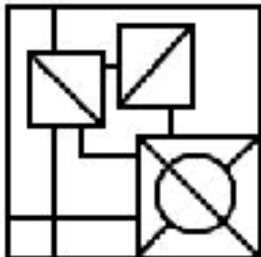
✗ 2.



✓ 3.



✗ 4.



Question Type : MCQ  
Question ID : 630680524451  
Option 1 ID : 6306802049903  
Option 2 ID : 6306802049906  
Option 3 ID : 6306802049905  
Option 4 ID : 6306802049904  
Status : Answered  
Chosen Option : 3

Q.19 GYEV is related to DBBY in a certain way based on the English alphabetical order. In the same way, XHVE is related to UKSH. To which of the following is LTJQ related, following the same logic?

- Ans ☒ 1. IGWT  
☒ 2. IGTR  
☒ 3. IWGT  
☒ 4. TYHU

Question Type : MCQ  
Question ID : 630680443988  
Option 1 ID : 6306801733288  
Option 2 ID : 6306801733290  
Option 3 ID : 6306801733287  
Option 4 ID : 6306801733289  
Status : Answered  
Chosen Option : 3

Q.20 What will come in the place of the question mark (?) in the following equation, if '+' and '-' are interchanged and 'x' and '÷' are interchanged?  
 $5 \div 4 - 3 \times 1 + 2 = ?$

- Ans ☒ 1. 16  
☒ 2. 21  
☒ 3. 19  
☒ 4. 20

Question Type : MCQ  
Question ID : 630680395500  
Option 1 ID : 6306801542168  
Option 2 ID : 6306801542171  
Option 3 ID : 6306801542169  
Option 4 ID : 6306801542170  
Status : Answered  
Chosen Option : 2

Section : General Awareness

Q.1 Which of the following is NOT an example of a 'Lagoon'?

- Ans ☒ 1. Nainital  
☒ 2. Chilika  
☒ 3. Pulicat  
☒ 4. Kolleru

Question Type : MCQ  
Question ID : 630680484496  
Option 1 ID : 6306801892300  
Option 2 ID : 6306801892298  
Option 3 ID : 6306801892299  
Option 4 ID : 6306801892301  
Status : Not Answered  
Chosen Option : --

Q.2 Sekrenyi festival of Nagaland is celebrated annually in the month of \_\_\_\_\_ as part of the Mini Hornbill Tribal Festival which is a celebration of purification accompanied with feasting and singing.

Ans  1. February

 2. August

 3. March

 4. July

Question Type : MCQ

Question ID : 630680403354

Option 1 ID : 6306801572929

Option 2 ID : 6306801572927

Option 3 ID : 6306801572926

Option 4 ID : 6306801572928

Status : Answered

Chosen Option : 2

Q.3 Which of the following social organisations was founded by Swami Dayananda Saraswati in 1875?

Ans  1. Prarthana Samaj

 2. Arya Samaj

 3. Brahmo Samaj

 4. Satyashodhak Samaj

Question Type : MCQ

Question ID : 630680214252

Option 1 ID : 630680831055

Option 2 ID : 630680831058

Option 3 ID : 630680831057


Option 4 ID : 630680831056

Status : Answered

Chosen Option : 2

Q.4 Purushottam Dadheech, a renowned Kathak dancer who had been honoured with Padma Shri award for 2020, is associated with which of the following places?

Ans  1. Madhya Pradesh

 2. Haryana

 3. Uttar Pradesh

 4. Bihar

Question Type : MCQ

Question ID : 630680216136

Option 1 ID : 630680838520

Option 2 ID : 630680838521

Option 3 ID : 630680838519

Option 4 ID : 630680838522

Status : Not Answered

Chosen Option : --

Q.5 What was the amount earned by BCCI from the sale of five teams in the inaugural Women's Indian Premier League (WPL) in January 2023?

- Ans ☒ 1. ₹4,669.99 crore
- ☐ 2. ₹1,289.50 crore
- ☐ 3. ₹7,245.89 crore
- ☐ 4. ₹951.25 crore

Question Type : MCQ  
Question ID : 630680306030  
Option 1 ID : 6306801190473  
Option 2 ID : 6306801190474  
Option 3 ID : 6306801190476  
Option 4 ID : 6306801190475  
Status : Not Answered  
Chosen Option : --

Q.6 As on February 2024, Yanthungo Patton is the Deputy Chief Minister of which of the following states?

- Ans ☐ 1. Assam
- ☐ 2. Sikkim
- ☐ 3. Meghalaya
- ☒ 4. Nagaland

Question Type : MCQ  
Question ID : 630680468929  
Option 1 ID : 6306801831483  
Option 2 ID : 6306801831486  
Option 3 ID : 6306801831484  
Option 4 ID : 6306801831485  
Status : Not Answered  
Chosen Option : --

Q.7 Which of the following is a mineral deficiency disease?

- Ans ☐ 1. Marasmus
- ☒ 2. Goitre
- ☐ 3. Scurvy
- ☐ 4. Rickets





Question Type : MCQ  
Question ID : 630680422204  
Option 1 ID : 6306801647252  
Option 2 ID : 6306801647253  
Option 3 ID : 6306801647254  
Option 4 ID : 6306801647255  
Status : Answered  
Chosen Option : 1

Q.8 What does WFI stand for in the context of sports?

- Ans  1. Wrestling Federation of India
-  2. Women Federation of India
-  3. Winter Games Federation of India
-  4. Women Sports Federation of India





Question Type : MCQ  
Question ID : 630680563620  
Option 1 ID : 6306802203434  
Option 2 ID : 6306802203433  
Option 3 ID : 6306802203435  
Option 4 ID : 6306802203436  
Status : Answered  
Chosen Option : 1

Q.9 Which of the following options has all vector quantities?

- Ans  1. Force, Velocity, Momentum, Weight and Acceleration
-  2. Force, Velocity, Momentum, Energy and Power
-  3. Power, Momentum, Energy, Speed and Work
-  4. Force, Velocity, Momentum, Energy and Acceleration

Question Type : MCQ  
Question ID : 630680726138  
Option 1 ID : 6306802845568  
Option 2 ID : 6306802845566  
Option 3 ID : 6306802845567  
Option 4 ID : 6306802845565  
Status : Not Answered  
Chosen Option : --

Q.10 According to Article \_\_\_\_\_, there shall be equality of opportunities for all citizens in matters relating to employment or appointment to any office under the State.

- Ans  1. 16
-  2. 19
-  3. 18
-  4. 17

Question Type : MCQ  
Question ID : 630680549013  
Option 1 ID : 6306802146536  
Option 2 ID : 6306802146539  
Option 3 ID : 6306802146538  
Option 4 ID : 6306802146537  
Status : Answered  
Chosen Option : 1

Q.11 The name of the autobiography of Saina Nehwal is called:

- Ans ☒ 1. Playing to win, my life on and off court
- ☐ 2. Straight from the heart
- ☐ 3. Playing it my way
- ☐ 4. Unbreakable

Question Type : MCQ  
Question ID : 630680409425  
Option 1 ID : 6306801596532  
Option 2 ID : 6306801596531  
Option 3 ID : 6306801596530  
Option 4 ID : 6306801596529  
Status : Answered  
Chosen Option : 1

Q.12 Which event brought about a profound change in Ashoka's administrative policy?

- Ans ☐ 1. His embracing of Buddhism
- ☐ 2. The third Buddhist Council
- ☒ 3. The Kalinga War
- ☐ 4. His sending missionary to Ceylon

Question Type : MCQ  
Question ID : 630680322640  
Option 1 ID : 6306801255203  
Option 2 ID : 6306801255201  
Option 3 ID : 6306801255202  
Option 4 ID : 6306801255204  
Status : Answered  
Chosen Option : 3

Q.13 While estimating Gross Domestic Product, the monetary value of only final goods are considered because \_\_\_\_\_.  
a. its immobility, the active economic flow is ended.  
b. of the issues of double counting  
c. the value added at each stage of the production process is included

- Ans ☐ 1. All a, b and c
- ☐ 2. Only a
- ☐ 3. Only b and c
- ☒ 4. Only b

Question Type : MCQ  
Question ID : 630680422499  
Option 1 ID : 6306801648435  
Option 2 ID : 6306801648432  
Option 3 ID : 6306801648434  
Option 4 ID : 6306801648433  
Status : Not Answered  
Chosen Option : --

Q.14 The model of 'Quasi Federal' form of government in Indian constitution is borrowed from which country?

- Ans ☒ 1. United Kingdom  
☒ 2. Germany  
☒ 3. Canada  
☒ 4. Australia

Question Type : MCQ  
Question ID : 630680799040  
Option 1 ID : 6306803130965  
Option 2 ID : 6306803130962  
Option 3 ID : 6306803130963  
Option 4 ID : 6306803130964  
Status : Answered  
Chosen Option : 3

Q.15 Dappu dance is a famous dance form of which of the following states?

- Ans ☒ 1. Punjab  
☒ 2. Andhra Pradesh  
☒ 3. Kerala  
☒ 4. Bihar

Question Type : MCQ  
Question ID : 630680465735  
Option 1 ID : 6306801818975  
Option 2 ID : 6306801818978  
Option 3 ID : 6306801818976  
Option 4 ID : 6306801818977  
Status : Not Answered  
Chosen Option : --

Q.16 With reference to 'slash and burn' agriculture, which of the following names is NOT related to Odisha?

- Ans ☒ 1. Bringa  
☒ 2. Pama Dabi  
☒ 3. Roca  
☒ 4. Koman

Question Type : MCQ  
Question ID : 630680484436  
Option 1 ID : 6306801892069  
Option 2 ID : 6306801892066  
Option 3 ID : 6306801892067  
Option 4 ID : 6306801892068  
Status : Not Answered  
Chosen Option : --

Q.17 Under which of the following Acts, was Warren Hastings appointed as the Governor-General of Bengal?

- Ans ☒ 1. The Government of India Act, 1858
- ☒ 2. The Regulating Act, 1773
- ☒ 3. The Government of India Act, 1935
- ☒ 4. The Government of India Act, 1909

Question Type : MCQ  
Question ID : 63068092837  
Option 1 ID : 630680360039  
Option 2 ID : 630680360042  
Option 3 ID : 630680360041  
Option 4 ID : 630680360040  
Status : Answered  
Chosen Option : 2

Q.18 The Shore Temple at Mahabalipuram was built during the reign of the \_\_\_\_\_ king Narasimhavarmam II.

- Ans ☒ 1. Chola
- ☒ 2. Pallava
- ☒ 3. Chalukya
- ☒ 4. Chera

Question Type : MCQ  
Question ID : 630680306327  
Option 1 ID : 6306801191664  
Option 2 ID : 6306801191662  
Option 3 ID : 6306801191663  
Option 4 ID : 6306801191661  
Status : Answered  
Chosen Option : 2

Q.19 Epilepsy is a disorder that affects which of the following parts of the human body?

- Ans ☒ 1. Brain cells
- ☒ 2. The muscles
- ☒ 3. The skin
- ☒ 4. The teeth and bones

Question Type : MCQ  
Question ID : 630680311116  
Option 1 ID : 6306801210577  
Option 2 ID : 6306801210579  
Option 3 ID : 6306801210580  
Option 4 ID : 6306801210578  
Status : Answered  
Chosen Option : 1

**Q.20** In the PM-SVANidhi Scheme (2020), the urban street vendors are eligible to avail a Working Capital Loan up to 10,000 with a tenure of:

**Ans** ☒ 1. 1 year

☒ 2. 3 years

☒ 3. 2 years

☒ 4. 5 years

Question Type : **MCQ**

Question ID : **630680511234**

Option 1 ID : **6306801998066**

Option 2 ID : **6306801998068**

Option 3 ID : **6306801998067**

Option 4 ID : **6306801998069**

Status : **Not Answered**

Chosen Option : --

**Q.21** Sahaswan gharana of Rampur was established by whom among the following personalities?

**Ans** ☒ 1. Abdul Karim Khan

☒ 2. Ustad Ghaghe Khuda Baksh

☒ 3. Ustad Inayat Hussain Khan

☒ 4. Amanat Ali Khan

Question Type : **MCQ**

Question ID : **630680487683**

Option 1 ID : **6306801904802**

Option 2 ID : **6306801904805**

Option 3 ID : **6306801904804**

Option 4 ID : **6306801904803**

Status : **Not Answered**

Chosen Option : --

**Q.22** Mica is which type of mineral?

**Ans** ☒ 1. Non-metallic

☒ 2. Ferrous metallic

☒ 3. Energy mineral

☒ 4. Non-ferrous metallic

Question Type : **MCQ**

Question ID : **630680456062**

Option 1 ID : **6306801781187**

Option 2 ID : **6306801781188**

Option 3 ID : **6306801781190**

Option 4 ID : **6306801781189**

Status : **Not Answered**

Chosen Option : --

**Q.23** In its 279<sup>th</sup> report released in April 2023, the Law Commission of India has recommended the provision of which law to be retained?

- Ans** ☒ 1. Labour Law  
☒ 2. Sedition Law  
☒ 3. Revenue Law  
☒ 4. Contract Law

Question Type : **MCQ**  
Question ID : **630680465514**  
Option 1 ID : **6306801818092**  
Option 2 ID : **6306801818091**  
Option 3 ID : **6306801818094**  
Option 4 ID : **6306801818093**  
Status : **Not Answered**  
Chosen Option : --

**Q.24** National Rural Employment Guarantee Act was passed in which of the following years?

- Ans** ☒ 1. 2006  
☒ 2. 2005  
☒ 3. 2009  
☒ 4. 2004

Question Type : **MCQ**  
Question ID : **630680404739**  
Option 1 ID : **6306801578431**  
Option 2 ID : **6306801578432**  
Option 3 ID : **6306801578434**  
Option 4 ID : **6306801578433**  
Status : **Answered**  
Chosen Option : 2

**Q.25** The architectural marvels, temples of Gangaikonda-Cholapuram, were built by which of the following king?

- Ans** ☒ 1. King Akabar  
☒ 2. King Vijayalaya  
☒ 3. King mahendravarman  
☒ 4. King Rajendra

Question Type : **MCQ**  
Question ID : **630680535091**  
Option 1 ID : **6306802091747**  
Option 2 ID : **6306802091746**  
Option 3 ID : **6306802091745**  
Option 4 ID : **6306802091744**  
Status : **Answered**  
Chosen Option : 2

Section : English Language and Comprehension

Q.1 Select the INCORRECTLY spelt word.

Ans  1. Explanation

 2. Accolades

 3. Proposal

 4. Myriad

Question Type : MCQ

Question ID : 630680553966

Option 1 ID : 6306802165720

Option 2 ID : 6306802165719

Option 3 ID : 6306802165721

Option 4 ID : 6306802165718

Status : Answered

Chosen Option : 1

Q.2 Select the most appropriate meaning of the underlined phrase.

This sentence can have multiple meanings. Could you please specify what it means?

Ans  1. Ambiguous

 2. Homogeneous

 3. Amorphous

 4. Heterogeneous

Question Type : MCQ

Question ID : 630680540236

Option 1 ID : 6306802112048

Option 2 ID : 6306802112050

Option 3 ID : 6306802112051

Option 4 ID : 6306802112049

Status : Answered

Chosen Option : 1

Q.3 Select the most appropriate option that can substitute the underlined words in the given sentence.

My mother asked me who did accompany me to the airport.

Ans  1. who must accompanied me

 2. who accompanied me

 3. whom I was accompanied

 4. who accompany me

Question Type : MCQ

Question ID : 630680566015

Option 1 ID : 6306802213051

Option 2 ID : 6306802213048

Option 3 ID : 6306802213049

Option 4 ID : 6306802213050

Status : Answered

Chosen Option : 2

Q.4 Select the most appropriate synonym of the given word.  
Restraint

- Ans ☒ 1. Self-acceptance  
☒ 2. Self-appraisal  
☒ 3. Self-esteem  
☒ 4. Self-control

Question Type : MCQ  
Question ID : 630680422523  
Option 1 ID : 6306801648530  
Option 2 ID : 6306801648528  
Option 3 ID : 6306801648529  
Option 4 ID : 6306801648531  
Status : Answered  
Chosen Option : 4

Q.5 Select the most appropriate synonym for the given word.  
Fusion

- Ans ☒ 1. Grind  
☒ 2. Glide  
☒ 3. Blend  
☒ 4. Ingredient

Question Type : MCQ  
Question ID : 630680381373  
Option 1 ID : 6306801486445  
Option 2 ID : 6306801486443  
Option 3 ID : 6306801486444  
Option 4 ID : 6306801486446  
Status : Answered  
Chosen Option : 3

Q.6 Select the most appropriate ANTONYM of the highlighted word.

The new syllabus of Final Semester of MBA is very difficult.

- Ans ☒ 1. problematical  
☒ 2. rigid  
☒ 3. perplexing  
☒ 4. easy

Question Type : MCQ  
Question ID : 630680499646  
Option 1 ID : 6306801952202  
Option 2 ID : 6306801952201  
Option 3 ID : 6306801952203  
Option 4 ID : 6306801952204  
Status : Answered  
Chosen Option : 4

**Q.7** The given sentence is divided into four parts. One of them contains a grammatical error. Select the part that contains the error from the given options.  
He was acquitted to / a cyber crime / on the basis of evidence / given to the court.

- Ans** ☒ 1. on the basis of evidence  
☒ 2. He was acquitted to  
☒ 3. a cyber crime  
☒ 4. given to the court

Question Type : **MCQ**  
Question ID : **630680157290**  
Option 1 ID : **630680608694**  
Option 2 ID : **630680608692**  
Option 3 ID : **630680608693**  
Option 4 ID : **630680608695**  
Status : **Answered**  
Chosen Option : **3**

**Q.8** Select the most appropriate meaning of the underlined idiom.  
The situation was out of hand. So, the manager called the police station for help.

- Ans** ☒ 1. To be abrupt  
☒ 2. To be serious  
☒ 3. To be uncontrollable  
☒ 4. In an undecided state

Question Type : **MCQ**  
Question ID : **630680414144**  
Option 1 ID : **6306801615432**  
Option 2 ID : **6306801615433**  
Option 3 ID : **6306801615431**  
Option 4 ID : **6306801615434**  
Status : **Answered**  
Chosen Option : **3**

**Q.9** Select the most appropriate ANTONYM of the given word.  
Foremost

- Ans** ☒ 1. Forecast  
☒ 2. Premature  
☒ 3. Disposed  
☒ 4. Unimportant

Question Type : **MCQ**  
Question ID : **630680557186**  
Option 1 ID : **6306802177722**  
Option 2 ID : **6306802177721**  
Option 3 ID : **6306802177719**  
Option 4 ID : **6306802177720**  
Status : **Answered**  
Chosen Option : **4**

Q.10 Select the most appropriate option that can substitute the underlined segment in the given sentence.

One of the most horrified serials of the Indian television industry was broadcast twenty years ago.

- Ans ☒ 1. horrified serials  
☒ 2. more horrify serials  
☒ 3. most horrifying serials  
☒ 4. most horror serials

Question Type : MCQ  
Question ID : 630680551429  
Option 1 ID : 6306802155942  
Option 2 ID : 6306802155943  
Option 3 ID : 6306802155941  
Option 4 ID : 6306802155944  
Status : Answered  
Chosen Option : 3

Q.11 Select the most appropriate idiom that can substitute the underlined segment in the given sentence.

This is going to be overwhelming for you as you have taken on work beyond your capabilities.

- Ans ☒ 1. at the eleventh hour  
☒ 2. called it a day  
☒ 3. bitten off more than you can chew  
☒ 4. put something on ice

Question Type : MCQ  
Question ID : 630680790166  
Option 1 ID : 6306803096447  
Option 2 ID : 6306803096446  
Option 3 ID : 6306803096444  
Option 4 ID : 6306803096445  
Status : Answered  
Chosen Option : 3

Q.12 Select the INCORRECTLY spelt word.

- Ans ☒ 1. Crowded  
☒ 2. Efficient  
☒ 3. Elegant  
☒ 4. Defecteev

Question Type : MCQ  
Question ID : 630680467619  
Option 1 ID : 6306801826409  
Option 2 ID : 6306801826407  
Option 3 ID : 6306801826406  
Option 4 ID : 6306801826408  
Status : Answered  
Chosen Option : 4

Q.13 Select the most appropriate synonym of the underlined word in the given sentence.

His decision to quit his stable job and travel the world was driven by a sudden caprice.

- Ans ☒ 1. Sorrow  
☒ 2. Impulse  
☒ 3. Determination  
☒ 4. Delight

Question Type : MCQ  
Question ID : 630680396967  
Option 1 ID : 6306801547932  
Option 2 ID : 6306801547934  
Option 3 ID : 6306801547935  
Option 4 ID : 6306801547933  
Status : Answered  
Chosen Option : 2

Q.14 Select the option that has an error in the use of phrasal verb.

- Ans ☒ 1. Pushpa came across an old photo in the album and asked me to recognise the face in it.  
☒ 2. Please suggest me some tips to get out nervousness.  
☒ 3. Back up your essential files. Technology is only sometimes reliable.  
☒ 4. Please turn up the heater. The weather is too cold today .

Question Type : MCQ  
Question ID : 630680542587  
Option 1 ID : 6306802121277  
Option 2 ID : 6306802121279  
Option 3 ID : 6306802121278  
Option 4 ID : 6306802121280  
Status : Answered  
Chosen Option : 2

Q.15 The following sentence has been split into four segments. Identify the segment that contains a grammatical error.  
The gold watch / look really expensive / and is not affordable / for common people.

- Ans ☒ 1. for common people  
☒ 2. The gold watch  
☒ 3. and is not affordable  
☒ 4. look really expensive

Question Type : MCQ  
Question ID : 630680205219  
Option 1 ID : 630680795738  
Option 2 ID : 630680795735  
Option 3 ID : 630680795737  
Option 4 ID : 630680795736  
Status : Answered  
Chosen Option : 4

**Q.16** The following sentence has been split into four segments. Identify the segment that contains a grammatical error.  
She is studying / the medicine / at university / to become a doctor.

- Ans ☒ 1. to become a doctor.  
☒ 2. She is studying  
☒ 3. the medicine  
☒ 4. at university

Question Type : **MCQ**  
Question ID : **630680451083**  
Option 1 ID : **6306801761433**  
Option 2 ID : **6306801761430**  
Option 3 ID : **6306801761431**  
Option 4 ID : **6306801761432**  
Status : **Answered**  
Chosen Option : **4**

**Q.17** Rectify the following sentence by selecting the correct spelling of the underlined word from the options.

Life is a collection of ephmeral moments.

- Ans ☒ 1. Ephemerl  
☒ 2. Epmeral  
☒ 3. Ephemeral  
☒ 4. Ephameral

Question Type : **MCQ**  
Question ID : **630680799103**  
Option 1 ID : **6306803131210**  
Option 2 ID : **6306803131213**  
Option 3 ID : **6306803131211**  
Option 4 ID : **6306803131212**  
Status : **Answered**  
Chosen Option : **3**

**Q.18** The following sentence has been split into four segments. Identify the segment that contains a grammatical error.  
It has been / noticed that / across all his faults, / he is admired.

- Ans ☒ 1. It has been  
☒ 2. he is admired  
☒ 3. noticed that  
☒ 4. across all his faults

Question Type : **MCQ**  
Question ID : **630680129506**  
Option 1 ID : **630680501642**  
Option 2 ID : **630680501645**  
Option 3 ID : **630680501643**  
Option 4 ID : **630680501644**  
Status : **Answered**  
Chosen Option : **4**

Q.19 Select the most appropriate form of comparative degree that can substitute the underlined segment in the given sentence.

Bilingual children are so intelligent than those who speak just one language.

- Ans ☒ 1. the most intelligent to  
☒ 2. more intelligent than  
☒ 3. so intelligent to  
☒ 4. better intelligent than

Question Type : MCQ  
Question ID : 630680514700  
Option 1 ID : 6306802011426  
Option 2 ID : 6306802011428  
Option 3 ID : 6306802011427  
Option 4 ID : 6306802011425  
Status : Answered  
Chosen Option : 2

Q.20 In the following passage, some words have been deleted. Read the passage carefully and select the most appropriate option to fill in the blanks.

Leif Erikson is a Viking \_\_\_\_\_ believed to have sailed from the Green Lands to Vinland. Vinland is now thought to be the northern tip of Canada's Newfoundland island where \_\_\_\_\_ found evidence of Erikson's \_\_\_\_\_ in 1960s.

- Ans ☒ 1. calligrapher; historians; community  
☒ 2. astronomer; sculptors; colony  
☒ 3. explorer; archaeologists; settlement  
☒ 4. sailor; excavators; packed

Question Type : MCQ  
Question ID : 630680515129  
Option 1 ID : 6306802013031  
Option 2 ID : 6306802013029  
Option 3 ID : 6306802013030  
Option 4 ID : 6306802013032  
Status : Answered  
Chosen Option : 4

**Comprehension:**

In the following passage, some words have been deleted. Read the passage carefully and select the most appropriate option to fill in each blank.  
The newspaper is one of the significant signs of (1) \_\_\_\_\_ civilisation. It is the most popular form of reading in the (2) \_\_\_\_\_ times because it interests all sorts of people. It is full of political news, sports and commercial news, as well as articles by well-known writers. A newspaper keeps us (3) \_\_\_\_\_ entertained and informed.  
In these days of democracy, public opinion rules everywhere. (4) \_\_\_\_\_ government can long withstand the pressure of a strong public opinion. It is, therefore, quite clear that the press controls public opinion, and public opinion, in turn, controls the government. Ultimately, the press controls the government. It acts as an interpreter between the government and the people and brings the rulers and the ruled (5) \_\_\_\_\_.

**SubQuestion No : 21**

**Q.21** Select the most appropriate option to fill in blank number 1.

- Ans** ☒ 1. prehistoric  
☒ 2. monolithic  
☒ 3. ancient  
☒ 4. modern

Question Type : **MCQ**  
Question ID : **630680183552**  
Option 1 ID : **630680711219**  
Option 2 ID : **630680711220**  
Option 3 ID : **630680711217**  
Option 4 ID : **630680711218**  
Status : **Answered**  
Chosen Option : **4**

**Comprehension:**

In the following passage, some words have been deleted. Read the passage carefully and select the most appropriate option to fill in each blank.  
The newspaper is one of the significant signs of (1) \_\_\_\_\_ civilisation. It is the most popular form of reading in the (2) \_\_\_\_\_ times because it interests all sorts of people. It is full of political news, sports and commercial news, as well as articles by well-known writers. A newspaper keeps us (3) \_\_\_\_\_ entertained and informed.  
In these days of democracy, public opinion rules everywhere. (4) \_\_\_\_\_ government can long withstand the pressure of a strong public opinion. It is, therefore, quite clear that the press controls public opinion, and public opinion, in turn, controls the government. Ultimately, the press controls the government. It acts as an interpreter between the government and the people and brings the rulers and the ruled (5) \_\_\_\_\_.

**SubQuestion No : 22**

**Q.22** Select the most appropriate option to fill in blank number 2.

- Ans** ☒ 1. present  
☒ 2. dark  
☒ 3. past  
☒ 4. future

Question Type : **MCQ**  
Question ID : **630680183553**  
Option 1 ID : **630680711224**  
Option 2 ID : **630680711223**  
Option 3 ID : **630680711222**  
Option 4 ID : **630680711221**  
Status : **Answered**  
Chosen Option : **1**

**Comprehension:**

In the following passage, some words have been deleted. Read the passage carefully and select the most appropriate option to fill in each blank.  
The newspaper is one of the significant signs of (1) \_\_\_\_\_ civilisation. It is the most popular form of reading in the (2) \_\_\_\_\_ times because it interests all sorts of people. It is full of political news, sports and commercial news, as well as articles by well-known writers. A newspaper keeps us (3) \_\_\_\_\_ entertained and informed.  
In these days of democracy, public opinion rules everywhere. (4) \_\_\_\_\_ government can long withstand the pressure of a strong public opinion. It is, therefore, quite clear that the press controls public opinion, and public opinion, in turn, controls the government. Ultimately, the press controls the government. It acts as an interpreter between the government and the people and brings the rulers and the ruled (5) \_\_\_\_\_.

**SubQuestion No : 23**

**Q.23** Select the most appropriate option to fill in blank number 3.

- Ans ☒ 1. or  
☒ 2. nor  
☒ 3. either  
☒ 4. both

Question Type : **MCQ**  
Question ID : **630680183554**  
Option 1 ID : **630680711227**  
Option 2 ID : **630680711228**  
Option 3 ID : **630680711226**  
Option 4 ID : **630680711225**  
Status : **Answered**  
Chosen Option : **4**

**Comprehension:**

In the following passage, some words have been deleted. Read the passage carefully and select the most appropriate option to fill in each blank.  
The newspaper is one of the significant signs of (1) \_\_\_\_\_ civilisation. It is the most popular form of reading in the (2) \_\_\_\_\_ times because it interests all sorts of people. It is full of political news, sports and commercial news, as well as articles by well-known writers. A newspaper keeps us (3) \_\_\_\_\_ entertained and informed.  
In these days of democracy, public opinion rules everywhere. (4) \_\_\_\_\_ government can long withstand the pressure of a strong public opinion. It is, therefore, quite clear that the press controls public opinion, and public opinion, in turn, controls the government. Ultimately, the press controls the government. It acts as an interpreter between the government and the people and brings the rulers and the ruled (5) \_\_\_\_\_.

**SubQuestion No : 24**

**Q.24** Select the most appropriate option to fill in blank number 4.

- Ans ☒ 1. No  
☒ 2. Both  
☒ 3. Some  
☒ 4. All

Question Type : **MCQ**  
Question ID : **630680183555**  
Option 1 ID : **630680711232**  
Option 2 ID : **630680711230**  
Option 3 ID : **630680711229**  
Option 4 ID : **630680711231**  
Status : **Answered**  
Chosen Option : **1**

# SSC MTS (Non Technical) EXAM STUDY KIT



FREE  
SHIPPING 

- ▶ 100% SSC MTS Exam Syllabus Covered
- ▶ PRINTED Notes
- ▶ 8 Books, 700+ Pages
- ▶ 2500+ MCQs
- ▶ Practice Papers
- ▶ 1 Year Current Affairs

**50%**  
OFF

 SSCPOTAL.IN

# SSC MTS PDF NOTES

100% Syllabus Covered



**50%**  
OFF

CLICK HERE

CLICK BELOW LINK TO DOWNLOAD PDF NOTES

<https://sscportal.in/study-kit/mts>

<https://sscportal.in/study-kit>

**Comprehension:**

In the following passage, some words have been deleted. Read the passage carefully and select the most appropriate option to fill in each blank.

The newspaper is one of the significant signs of (1) \_\_\_\_\_ civilisation. It is the most popular form of reading in the (2) \_\_\_\_\_ times because it interests all sorts of people. It is full of political news, sports and commercial news, as well as articles by well-known writers. A newspaper keeps us (3) \_\_\_\_\_ entertained and informed.

In these days of democracy, public opinion rules everywhere. (4) \_\_\_\_\_ government can long withstand the pressure of a strong public opinion. It is, therefore, quite clear that the press controls public opinion, and public opinion, in turn, controls the government. Ultimately, the press controls the government. It acts as an interpreter between the government and the people and brings the rulers and the ruled (5) \_\_\_\_\_.

**SubQuestion No : 25**

**Q.25** Select the most appropriate option to fill in blank number 5.

- Ans** ☒ 1. overall  
☒ 2. together  
☒ 3. apart  
☒ 4. jointed

Question Type : **MCQ**  
Question ID : **630680183556**  
Option 1 ID : **630680711236**  
Option 2 ID : **630680711233**  
Option 3 ID : **630680711234**  
Option 4 ID : **630680711235**  
Status : **Answered**  
Chosen Option : **2**