

Multi Tasking Non Technical Staff and Havaladar CBIC and CBN Examination 2024

Roll Number	
Candidate Name	
Venue Name	iON Digital Zone iDZ 2 Sector 62
Exam Date	07/10/2024
Exam Time	9:00 AM - 11:00 AM
Subject	MTS Non Tech Havaldar CBIC and CBN Examination 2024

Section : Numerical and Mathematical Ability

Q.1 Find the simple interest (in ₹) on ₹2500 as a sum borrowed at 9% per year rate of interest for 6 years.

- Ans ☒ 1. 1290
- ☒ 2. 1350
- ☒ 3. 1310
- ☒ 4. 1390

Question Type : MCQ
Question ID : 630680591922
Option 1 ID : 6306802316157
Option 2 ID : 6306802316155
Option 3 ID : 6306802316158
Option 4 ID : 6306802316156
Status : Answered
Chosen Option : 2

Q.2 Raju sold 4 laptops at a rate of ₹1,54,005 all together and incurred a loss of 25%. At what rate should he sell the laptops to gain a profit of 25%?

- Ans ☒ 1. ₹2,31,007.5
- ☒ 2. ₹2,05,340
- ☒ 3. ₹2,56,675
- ☒ 4. ₹2,25,820

Question Type : MCQ
Question ID : 630680404999
Option 1 ID : 6306801579461
Option 2 ID : 6306801579460
Option 3 ID : 6306801579459
Option 4 ID : 6306801579462
Status : Answered
Chosen Option : 3

SSC MTS (Non Technical) EXAM STUDY KIT



FREE
SHIPPING 

- ▶ 100% SSC MTS Exam Syllabus Covered
- ▶ PRINTED Notes
- ▶ 8 Books, 700+ Pages
- ▶ 2500+ MCQs
- ▶ Practice Papers
- ▶ 1 Year Current Affairs

50%
OFF

 **SSCPORTAL.IN**

SSC MTS PDF NOTES

100% Syllabus Covered



50%
OFF

CLICK HERE

CLICK BELOW LINK TO DOWNLOAD PDF NOTES

<https://sscportal.in/study-kit/mts>

<https://sscportal.in/study-kit>

Q.3 The following table shows the number of mobile phones (in thousands) manufactured by three companies A, B and C from the year 2007 to 2011.

Year/Company Name	A	B	C
2007	450	650	540
2008	310	820	950
2009	1090	1080	1150
2010	1675	1700	1500
2011	2532	2120	2420

Which company manufactured the maximum number of mobile phones as compared to all other companies, and in which year?

- Ans ☒ 1. Company A, in 2010
☒ 2. Company B, in 2009
☒ 3. Company A, in 2011
☒ 4. Company C, in 2011

Question Type : MCQ
Question ID : 630680523738
Option 1 ID : 6306802047104
Option 2 ID : 6306802047105
Option 3 ID : 6306802047106
Option 4 ID : 6306802047103
Status : Answered
Chosen Option : 3

Q.4 A vendor wants to gain 25% by adding water to milk and selling the mixture at the cost price. Find the ratio of water and milk in the mixture.

- Ans ☒ 1. 1 : 5
☒ 2. 2 : 7
☒ 3. 1 : 4
☒ 4. 2 : 5

Question Type : MCQ
Question ID : 630680419653
Option 1 ID : 6306801637107
Option 2 ID : 6306801637108
Option 3 ID : 6306801637105
Option 4 ID : 6306801637106
Status : Answered
Chosen Option : 3

Q.5 A sum of ₹2,380 is lent out into two parts, one at 25% p.a. and another at 20% p.a. . If the total annual income is ₹500, find the money (in ₹) lent at 25% rate.

- Ans ☒ 1. 320
☒ 2. 560
☒ 3. 480
☒ 4. 240

Question Type : MCQ
Question ID : 630680402915
Option 1 ID : 6306801571250
Option 2 ID : 6306801571252
Option 3 ID : 6306801571251
Option 4 ID : 6306801571249
Status : Answered
Chosen Option : 3

Q.6 The highest common factor of 84 and 108 is:

- Ans ☒ 1. 6
☒ 2. 12
☒ 3. 8
☒ 4. 16

Question Type : MCQ
Question ID : 63068085705
Option 1 ID : 630680332280
Option 2 ID : 630680332282
Option 3 ID : 630680332281
Option 4 ID : 630680332283
Status : Answered
Chosen Option : 2

Q.7 What is the area of the remaining portion of a circle of radius 14 cm when a square with maximum possible area inscribed in it is removed from it? (Use $\pi = 22/7$)

- Ans ☒ 1. 518 cm²
☒ 2. 520 cm²
☒ 3. 616 cm²
☒ 4. 224 cm²

Question Type : MCQ
Question ID : 630680103875
Option 1 ID : 630680403716
Option 2 ID : 630680403717
Option 3 ID : 630680403718
Option 4 ID : 630680403715
Status : Answered
Chosen Option : 4

Q.8 The speed of a boat in still water is 15 km/h and the speed of the current is 3 km/h. How much distance (in km) can be covered going downstream in 12 minutes?

- Ans ☒ 1. 3.6
- ☐ 2. 3.7
- ☐ 3. 3.5
- ☐ 4. 3.4

Question Type : MCQ
Question ID : 630680120234
Option 1 ID : 630680465972
Option 2 ID : 630680465973
Option 3 ID : 630680465971
Option 4 ID : 630680465970
Status : Answered
Chosen Option : 1

Q.9 A person travels equal distances with speeds of 3 km/hr, 4 km/hr and 8 km/hr, respectively, and takes a total of 425 minutes. What is the total distance (in km) travelled?

- Ans ☒ 1. 30
- ☐ 2. 27
- ☐ 3. 28
- ☐ 4. 32

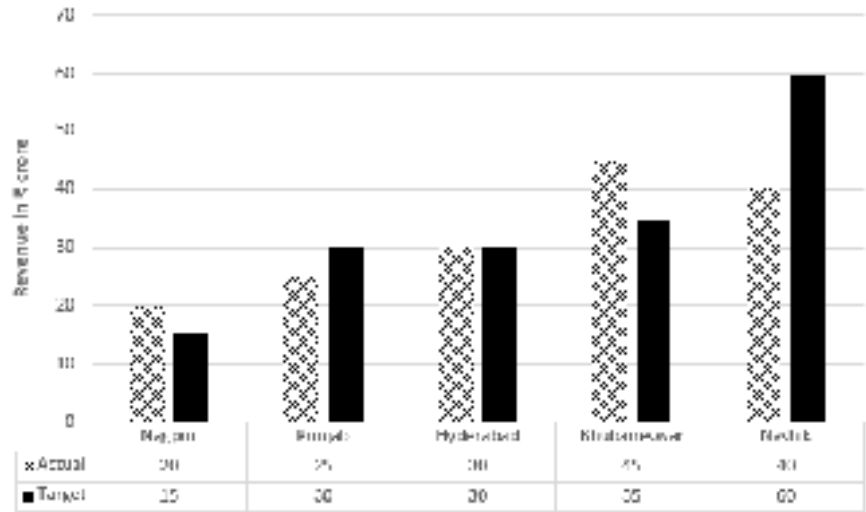
Question Type : MCQ
Question ID : 630680630909
Option 1 ID : 6306802469591
Option 2 ID : 6306802469588
Option 3 ID : 6306802469590
Option 4 ID : 6306802469589
Status : Answered
Chosen Option : 1

Q.10 The marked price of a folding bed is ₹18,000. Aman bought it after two successive discount of 15% and 10%. He spent ₹830 on transportation and sold it for ₹18,440. Find his profit.

- Ans ☐ 1. ₹3,539
- ☐ 2. ₹2,869
- ☐ 3. ₹3,148
- ☒ 4. ₹3,840

Question Type : MCQ
Question ID : 630680615722
Option 1 ID : 6306802409560
Option 2 ID : 6306802409558
Option 3 ID : 6306802409559
Option 4 ID : 6306802409561
Status : Answered
Chosen Option : 4

Q.11 The following graph shows the actual and target revenue (in crores) of an industry in five different branches. Study the graph and answer the question:



The ratio of total actual revenue to the total target revenue over all the branches is:

- Ans ☒ 1. 17 : 16
☒ 2. 13 : 14
☒ 3. 16 : 17
☒ 4. 14 : 13

Question Type : MCQ
Question ID : 630680397706
Option 1 ID : 6306801550781
Option 2 ID : 6306801550783
Option 3 ID : 6306801550782
Option 4 ID : 6306801550784
Status : Answered
Chosen Option : 3

Q.12 A hemispherical bowl is 264 cm round at the brim. Suppose that the bowl is half-full of beverage. If the beverage is served in hemispherical glasses 6 cm in the diameter at the top, how many people would be served?

- Ans ☒ 1. 1470
☒ 2. 1170
☒ 3. 1372
☒ 4. 1270

Question Type : MCQ
Question ID : 630680386656
Option 1 ID : 6306801507336
Option 2 ID : 6306801507334
Option 3 ID : 6306801507335
Option 4 ID : 6306801507337
Status : Answered
Chosen Option : 3

Q.13 Surendra bought an old bicycle for ₹2,500 and spent ₹300 on its repair. He sold it for ₹3,000. Find his profit percentage.

- Ans
- ☒ 1. $7\frac{5}{9}\%$
 - ☒ 2. $11\frac{2}{3}\%$
 - ☒ 3. $7\frac{1}{7}\%$
 - ☒ 4. $13\frac{4}{11}\%$

Question Type : MCQ

Question ID : 630680476109

Option 1 ID : 6306801859697

Option 2 ID : 6306801859696

Option 3 ID : 6306801859695

Option 4 ID : 6306801859698

Status : Answered

Chosen Option : 3

Q.14 If the volume and surface area of a sphere are numerically the same, then find the volume (in cm^3) of its semi - sphere. (correct to two places of decimals, use $\pi = 3.14$)

- Ans
- ☒ 1. 56.25
 - ☒ 2. 65.52
 - ☒ 3. 56.52
 - ☒ 4. 65.25

Question Type : MCQ

Question ID : 630680526607

Option 1 ID : 6306802058495

Option 2 ID : 6306802058496

Option 3 ID : 6306802058497

Option 4 ID : 6306802058494

Status : Answered

Chosen Option : 3

Q.15 The average age of 12 men is increased by 6 years when three of them, whose ages are 36, 40 and 44 years, are replaced by 3 persons. What is the average age of the 3 persons?

- Ans
- ☒ 1. 64 years
 - ☒ 2. 50 years
 - ☒ 3. 58 years
 - ☒ 4. 67 years

Question Type : MCQ

Question ID : 630680468853

Option 1 ID : 6306801831189

Option 2 ID : 6306801831187

Option 3 ID : 6306801831188

Option 4 ID : 6306801831190

Status : Not Answered

Chosen Option : --

Q.16 If the cash difference between the selling price of an item at a gain of 3% and 6% is ₹9, which of the following options is the correct ratio between the selling prices?

- Ans ☒ 1. 103 : 106
☐ 2. 101 : 105
☐ 3. 101 : 103
☐ 4. 103 : 100

Question Type : MCQ
Question ID : 630680110319
Option 1 ID : 630680427632
Option 2 ID : 630680427631
Option 3 ID : 630680427634
Option 4 ID : 630680427633
Status : Answered
Chosen Option : 1

Q.17 The average age of a group of 32 women is 60 years and that of another group of 40 men is 33 years. The average age of the two groups mixed together is:

- Ans ☐ 1. 46.5 years
☐ 2. 48 years
☒ 3. 45 years
☐ 4. 42 years

Question Type : MCQ
Question ID : 630680447472
Option 1 ID : 6306801747143
Option 2 ID : 6306801747141
Option 3 ID : 6306801747142
Option 4 ID : 6306801747144
Status : Answered
Chosen Option : 3

Q.18 In a student council election, there were three contestants. All the voters participated in the voting and 10% of votes were declared invalid. The contestants got the votes in the ratio 8 : 7 : 5. If the second candidate in the list got 4725 votes, the total number of valid votes is:

- Ans ☐ 1. 11,500
☐ 2. 10,000
☒ 3. 13,500
☐ 4. 9,000

Question Type : MCQ
Question ID : 630680464533
Option 1 ID : 6306801814170
Option 2 ID : 6306801814168
Option 3 ID : 6306801814169
Option 4 ID : 6306801814167
Status : Answered
Chosen Option : 3

Q.19 Find the simple interest (in ₹) on ₹3000 as a sum borrowed at 6% per year rate of interest for 4 years.

- Ans ☒ 1. 680
☒ 2. 660
☒ 3. 720
☒ 4. 760

Question Type : MCQ
Question ID : 630680591940
Option 1 ID : 6306802316230
Option 2 ID : 6306802316229
Option 3 ID : 6306802316227
Option 4 ID : 6306802316228
Status : Answered
Chosen Option : 3

Q.20 Two vessels, A and B, contain spirit and water in the ratio 3 : 4 and 5 : 3, respectively. Find the ratio in which these two mixtures be mixed to obtain a new mixture in vessel C containing spirit and water in the ratio 4 : 3.

- Ans ☒ 1. 5 : 8
☒ 2. 3 : 7
☒ 3. 3 : 8
☒ 4. 4 : 7

Question Type : MCQ
Question ID : 630680449422
Option 1 ID : 6306801754815
Option 2 ID : 6306801754813
Option 3 ID : 6306801754816
Option 4 ID : 6306801754814
Status : Not Answered
Chosen Option : --

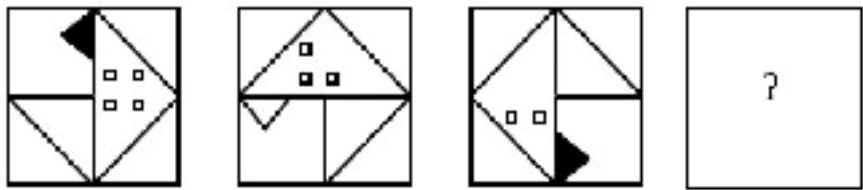
Section : Reasoning Ability and Problem Solving

Q.1 In a certain code language, 'MOVE' is coded as '3917' and 'EAST' is coded as '4692'. What is the code for 'E' in the given code language?

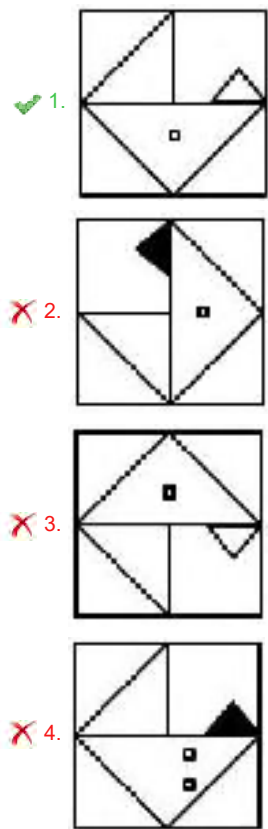
- Ans ☒ 1. 7
☒ 2. 2
☒ 3. 9
☒ 4. 4

Question Type : MCQ
Question ID : 630680387974
Option 1 ID : 6306801512512
Option 2 ID : 6306801512513
Option 3 ID : 6306801512510
Option 4 ID : 6306801512511
Status : Answered
Chosen Option : 3

Q.2 Identify the figure given in the options that when put in place of the question mark (?) will logically complete the series.



Ans



Question Type : MCQ
Question ID : 630680276829
Option 1 ID : 6306801075812
Option 2 ID : 6306801075814
Option 3 ID : 6306801075813
Option 4 ID : 6306801075811
Status : Answered
Chosen Option : 1

Q.3 Read the given statements and conclusions carefully. Assuming that the information given in the statements is true, even if it appears to be at variance with commonly known facts, decide which of the given conclusions logically follow(s) from the statements.

Statements:
All planets are rocks.
All rocks are lakes.

Conclusions:
(I) All planets are lakes.
(II) All rocks are planets.

- Ans ☒ 1. Neither conclusion I nor II follows.
☒ 2. Only conclusion I follows.
☒ 3. Only conclusion II follows.
☒ 4. Both conclusions I and II follow.

Question Type : MCQ
Question ID : 630680413281
Option 1 ID : 6306801611942
Option 2 ID : 6306801611939
Option 3 ID : 6306801611940
Option 4 ID : 6306801611941
Status : Answered
Chosen Option : 2

Q.4 Seven friends, Kamala, Raveena, Amruta, Nisha, Gautami, Bhavana and Triveni, are sitting in a circular dining table facing the centre (but not necessarily in the same order). Raveena is sitting second to the right of Nisha. Gautami has Kamala and Triveni as immediate neighbours. Triveni is sitting third to the left of Nisha. Amruta is not an immediate neighbour of Nisha. Who is seated fourth to the left of Bhavana?

- Ans ☒ 1. Nisha
☒ 2. Triveni
☒ 3. Raveena
☒ 4. Kamala

Question Type : MCQ
Question ID : 630680386914
Option 1 ID : 6306801508367
Option 2 ID : 6306801508368
Option 3 ID : 6306801508366
Option 4 ID : 6306801508369
Status : Answered
Chosen Option : 2

Q.5 In a certain code language, 'father makes tea' is coded as 'ib fx ey' and 'tea and coffee' is coded as 'kr ey wn'. How is 'tea' coded in the given language?

- Ans ☒ 1. kr
☒ 2. fx
☒ 3. ey
☒ 4. wn

Question Type : MCQ
Question ID : 630680436321
Option 1 ID : 6306801703228
Option 2 ID : 6306801703225
Option 3 ID : 6306801703226
Option 4 ID : 6306801703227
Status : Answered
Chosen Option : 3

Q.6 What will come in the place of '?' in the following equation, if '+' and '-' are interchanged and 'x' and '÷' are interchanged?
 $8 + 2 - 1 \times 1 \div 1 = ?$

- Ans ☒ 1. 5
☒ 2. 3
☒ 3. 7
☒ 4. 10

Question Type : MCQ
Question ID : 630680395195
Option 1 ID : 6306801541013
Option 2 ID : 6306801541012
Option 3 ID : 6306801541014
Option 4 ID : 6306801541015
Status : Answered
Chosen Option : 3

Q.7 M, N, O, P, Q and R are sitting around a circular table facing the centre (but not necessarily in the same order). N sits to the immediate right of R. M sits second to the right of N. P sits second to the right of M. O sits third to the right of P. Who sits to the immediate right of Q?

- Ans ☒ 1. O
☒ 2. P
☒ 3. R
☒ 4. M

Question Type : MCQ
Question ID : 630680386836
Option 1 ID : 6306801508054
Option 2 ID : 6306801508055
Option 3 ID : 6306801508057
Option 4 ID : 6306801508056
Status : Answered
Chosen Option : 2

Q.8 Read the given statement(s) and conclusions carefully. Assuming that the information given in the statements is true, even if it appears to be at variance with commonly known facts, decide which of the given conclusions logically follow(s) from the statement(s).

Statements:
Some kites are rocks.
All rocks are stones.

Conclusions:
(I) Atleast some kites are stones.
(II) All stones are rocks.

- Ans ☒ 1. Neither conclusion (I) nor (II) follows.
☒ 2. Only conclusion (I) follows.
☒ 3. Only conclusion (II) follows.
☒ 4. Both conclusions (I) and (II) follow.

Question Type : MCQ
Question ID : 630680410611
Option 1 ID : 6306801601202
Option 2 ID : 6306801601201
Option 3 ID : 6306801601200
Option 4 ID : 6306801601203
Status : Answered
Chosen Option : 2

Q.9 PLRN is related to QMSO in a certain way based on the English alphabetical order. In the same way, LHNJ is related to MIOK. To which of the following is HDJF related, following the same logic?

- Ans ☒ 1. EIKG
☒ 2. EIGK
☒ 3. IEKG
☒ 4. IEGK

Question Type : MCQ
Question ID : 630680435884
Option 1 ID : 6306801701487
Option 2 ID : 6306801701488
Option 3 ID : 6306801701485
Option 4 ID : 6306801701486
Status : Answered
Chosen Option : 3

Q.10 What will come in the place of the question mark (?) in the following equation, if '+' and 'x' are interchanged and '-' and '÷' are interchanged?
 $15 \div 5 + 8 - 4 \times 7 = ?$

- Ans ☒ 1. 22
☒ 2. 12
☒ 3. 18
☒ 4. 25

Question Type : MCQ
Question ID : 630680388205
Option 1 ID : 6306801513384
Option 2 ID : 6306801513382
Option 3 ID : 6306801513383
Option 4 ID : 6306801513385
Status : Answered
Chosen Option : 2

Q.11 In the following number-pairs, the second number is obtained by applying certain mathematical operations to the first number. Select the set in which the numbers are related in the same way as are the numbers of the following sets.

(NOTE: Operations should be performed on the whole numbers, without breaking down the numbers into their constituent digits. E.g. 13 – Operations on 13 such as adding/subtracting/multiplying to 13 can be performed. Breaking down 13 into 1 and 3 and then performing mathematical operations on 1 and 3 is not allowed.)

24, 73
27, 82

- Ans ☒ 1. 33, 101
☒ 2. 33, 100
☒ 3. 32, 100
☒ 4. 32, 101

Question Type : MCQ
Question ID : 6306801027594
Option 1 ID : 6306804033066
Option 2 ID : 6306804033065
Option 3 ID : 6306804033067
Option 4 ID : 6306804033068
Status : Answered
Chosen Option : 2

Q.12 519 is related to 781 following a certain logic. Following the same logic, 642 is related to 904. To which of the following is 485 related, following the same logic?
(NOTE: Operations should be performed on the whole numbers, without breaking down the numbers into its constituent digits. E.g. 13 – Operations on 13 such as adding / subtracting / multiplying etc., to 13 can be performed. Breaking down 13 into 1 and 3 and then performing mathematical operations on 1 and 3 is not allowed.)

- Ans ☒ 1. 756
☒ 2. 721
☒ 3. 794
☒ 4. 747

Question Type : MCQ
Question ID : 630680449089
Option 1 ID : 6306801753515
Option 2 ID : 6306801753514
Option 3 ID : 6306801753517
Option 4 ID : 6306801753516
Status : Answered
Chosen Option : 4

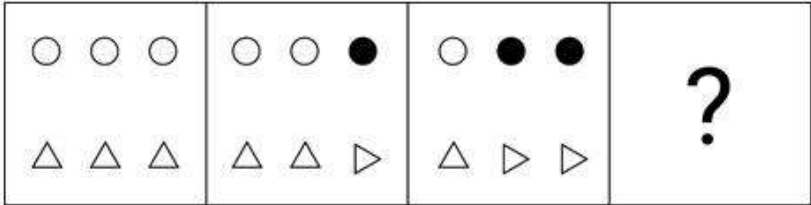
Q.13 What should come in place of the question mark (?) in the given series based on the English alphabetical order?

GGB, HHD, IKH, JPN, ?

- Ans ☒ 1. PUV
☒ 2. OUV
☒ 3. OWV
☒ 4. KWV

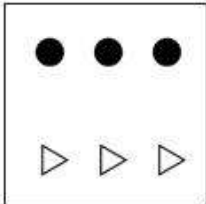
Question Type : MCQ
Question ID : 630680443473
Option 1 ID : 6306801731271
Option 2 ID : 6306801731269
Option 3 ID : 6306801731268
Option 4 ID : 6306801731270
Status : Answered
Chosen Option : 4

Q.14 Identify the figure given in the options which when put in place of (?) will logically complete the series.

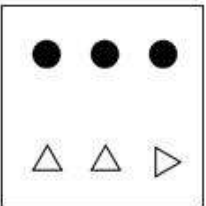


Ans

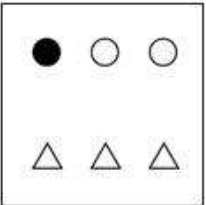
✓ 1.



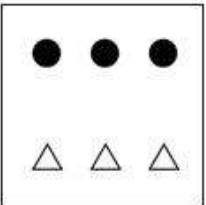
✗ 2.



✗ 3.

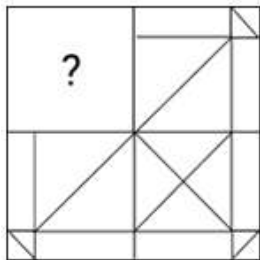


✗ 4.



Question Type : MCQ
Question ID : 630680274002
Option 1 ID : 6306801064528
Option 2 ID : 6306801064529
Option 3 ID : 6306801064530
Option 4 ID : 6306801064527
Status : Answered
Chosen Option : 1

Q.15 Select the option figure that will replace the question mark (?) in the figure given below to complete the pattern.



Ans

- ✗ 1.
- ✗ 2.
- ✗ 3.
- ✓ 4.

Question Type : MCQ
Question ID : 630680525778
Option 1 ID : 6306802055197
Option 2 ID : 6306802055196
Option 3 ID : 6306802055199
Option 4 ID : 6306802055198
Status : Answered
Chosen Option : 4

Q.16 FI29 is related to TW49 in a certain way. In the same way, LO38 is related to ZC58. To which of the following is RU65 related, following the same logic?

- ✓ 1. FI85
- ✗ 2. FE85
- ✗ 3. EF58
- ✗ 4. IF58

Question Type : MCQ
Question ID : 6306801108791
Option 1 ID : 6306804355713
Option 2 ID : 6306804355710
Option 3 ID : 6306804355712
Option 4 ID : 6306804355711
Status : Answered
Chosen Option : 1

Q.17 Select the correct mirror image of the given figure when the mirror is placed at MN as shown below.



- Ans ☒ 1. Q ɛ m m b ɔ
- ☐ 2. Q ɛ w w b ɔ
- ☐ 3. Q ɛ m m 6 d
- ☐ 4. ɔ e w w e q

Question Type : MCQ
Question ID : 630680525306
Option 1 ID : 6306802053309
Option 2 ID : 6306802053308
Option 3 ID : 6306802053310
Option 4 ID : 6306802053311
Status : Answered
Chosen Option : 1

Q.18 What should come in place of the question mark (?) in the following series?

1,17, 33, 49, 65 ,?

- Ans ☐ 1. 80
- ☐ 2. 79
- ☒ 3. 81
- ☐ 4. 77

Question Type : MCQ
Question ID : 630680396939
Option 1 ID : 6306801547821
Option 2 ID : 6306801547823
Option 3 ID : 6306801547820
Option 4 ID : 6306801547822
Status : Answered
Chosen Option : 3

Q.19 In a certain code language, 'GIFT' is coded as '5197' and 'FIST' is coded as '4157'. What is the code for 'S' in that language?

- Ans ☒ 1. 4
- ☐ 2. 9
- ☐ 3. 1
- ☐ 4. 5

Question Type : MCQ
Question ID : 630680465156
Option 1 ID : 6306801816661
Option 2 ID : 6306801816662
Option 3 ID : 6306801816659
Option 4 ID : 6306801816660
Status : Answered
Chosen Option : 1

SSC MTS (Non Technical) EXAM STUDY KIT



FREE
SHIPPING 

- ▶ 100% SSC MTS Exam Syllabus Covered
- ▶ PRINTED Notes
- ▶ 8 Books, 700+ Pages
- ▶ 2500+ MCQs
- ▶ Practice Papers
- ▶ 1 Year Current Affairs

50%
OFF

 SSCPOTAL.IN

SSC MTS PDF NOTES

100% Syllabus Covered



50%
OFF

CLICK HERE

CLICK BELOW LINK TO DOWNLOAD PDF NOTES

<https://sscportal.in/study-kit/mts>

<https://sscportal.in/study-kit>

Q.20 In a certain code language, 'FLOAT' is coded as '14238' and 'BLOAT' is coded as '23849'. What is the code for 'F' in the given code language?

- Ans ☒ 1. 2
☒ 2. 9
☒ 3. 4
☒ 4. 1

Question Type : MCQ
Question ID : 630680377757
Option 1 ID : 6306801472089
Option 2 ID : 6306801472088
Option 3 ID : 6306801472090
Option 4 ID : 6306801472087
Status : Answered
Chosen Option : 4

Section : General Awareness

Q.1 The sister of Harshavardhana Rajyashri was married to _____, the king of Maukhari dynasty of Kanyakubja.

- Ans ☒ 1. Sasanka
☒ 2. Devagupta
☒ 3. Grahavarman
☒ 4. Isanavarman

Question Type : MCQ
Question ID : 63068069633
Option 1 ID : 630680269201
Option 2 ID : 630680269199
Option 3 ID : 630680269200
Option 4 ID : 630680269198
Status : Answered
Chosen Option : 3

Q.2 Sarhul is an agricultural festival of tribals, which is primarily celebrated in the Indian state of _____.

- Ans ☒ 1. Gujarat
☒ 2. Uttarakhand
☒ 3. Sikkim
☒ 4. Jharkhand

Question Type : MCQ
Question ID : 630680410373
Option 1 ID : 6306801600225
Option 2 ID : 6306801600223
Option 3 ID : 6306801600224
Option 4 ID : 6306801600226
Status : Answered
Chosen Option : 4

Q.3 Which of the following states had benefitted by the Indira Gandhi Canal?

- Ans ☒ 1. Uttar Pradesh
☒ 2. Gujarat
☒ 3. Rajasthan
☒ 4. Madhya Pradesh

Question Type : MCQ
Question ID : 630680484450
Option 1 ID : 6306801892124
Option 2 ID : 6306801892123
Option 3 ID : 6306801892125
Option 4 ID : 6306801892122
Status : Answered
Chosen Option : 3

Q.4 What is Cash Reserve Ratio?

- Ans ☒ 1. Percentage of deposits that a bank must keep as cash reserves with the central bank
☒ 2. Percentage of deposits that a bank must keep as cash reserves with any bank
☒ 3. Percentage of deposits that a central bank must keep as cash reserves with the government
☒ 4. Percentage of deposits that a central bank must keep as cash reserves with the bank

Question Type : MCQ
Question ID : 63068087934
Option 1 ID : 630680341122
Option 2 ID : 630680341124
Option 3 ID : 630680341123
Option 4 ID : 630680341121
Status : Answered
Chosen Option : 1

Q.5 Which of the following mountain peaks is a part of the Himalayas?

- Ans ☒ 1. Kamet
☒ 2. Taramati
☒ 3. Kalsubai
☒ 4. Dhupgarh

Question Type : MCQ
Question ID : 630680510969
Option 1 ID : 6306801997007
Option 2 ID : 6306801997009
Option 3 ID : 6306801997008
Option 4 ID : 6306801997006
Status : Answered
Chosen Option : 1

Q.6 What is the primary gas responsible for the leavening effect in bread when yeast ferments sugars?

Ans ☒ 1. Carbon dioxide

☐ 2. Helium

☐ 3. Nitrogen

☐ 4. Oxygen

Question Type : MCQ

Question ID : 630680412072

Option 1 ID : 6306801607125

Option 2 ID : 6306801607126

Option 3 ID : 6306801607124

Option 4 ID : 6306801607123

Status : Answered

Chosen Option : 1

Q.7 Which of the following is NOT related to goals of Fundamental Duties of Indian Citizens?

Ans ☐ 1. Respect

☐ 2. Cherish

☒ 3. Courage

☐ 4. Preserve

Question Type : MCQ

Question ID : 630680270101

Option 1 ID : 6306801049655

Option 2 ID : 6306801049656

Option 3 ID : 6306801049658

Option 4 ID : 6306801049657

Status : Answered

Chosen Option : 3

Q.8 Who among the following signed a pact with Lord Irwin on March 5, 1931?

Ans ☐ 1. Subhas Chandra Bose

☒ 2. Mahatma Gandhi

☐ 3. B R Ambedkar

☐ 4. Jawaharlal Nehru

Question Type : MCQ

Question ID : 630680282906

Option 1 ID : 6306801099757

Option 2 ID : 6306801099756

Option 3 ID : 6306801099758

Option 4 ID : 6306801099755

Status : Answered

Chosen Option : 2

Q.9 The digestive enzymes inside lysosomes are made by:

- Ans ☒ 1. mitochondria
☒ 2. plastids themselves
☒ 3. Golgi apparatus
☒ 4. rough endoplasmic reticulum

Question Type : MCQ
Question ID : 630680422170
Option 1 ID : 6306801647119
Option 2 ID : 6306801647117
Option 3 ID : 6306801647118
Option 4 ID : 6306801647116
Status : Answered
Chosen Option : 3

Q.10 _____ was well known for creating fusion art by adapting European theatrical techniques to Indian classical dance combined with Indian folk and tribal dance.

- Ans ☒ 1. Guru Bipin Singh
☒ 2. Kelucharan Mohapatra
☒ 3. Birju Maharaj
☒ 4. Uday Shankar

Question Type : MCQ
Question ID : 630680433363
Option 1 ID : 6306801691421
Option 2 ID : 6306801691420
Option 3 ID : 6306801691419
Option 4 ID : 6306801691422
Status : Answered
Chosen Option : 4

Q.11 Which of the following is the style of temple architecture that is widely favoured in northern India?

- Ans ☒ 1. Vihar
☒ 2. Nagar
☒ 3. Madapa
☒ 4. Dravid

Question Type : MCQ
Question ID : 630680555036
Option 1 ID : 6306802169721
Option 2 ID : 6306802169722
Option 3 ID : 6306802169720
Option 4 ID : 6306802169723
Status : Answered
Chosen Option : 2

Q.12 In the inaugural year of the Nehru Cup event for football in 1982, which team emerged as the winner of the first edition?

- Ans ☒ 1. Australia
☒ 2. Poland
☒ 3. Ghana
☒ 4. Uruguay

Question Type : MCQ
Question ID : 630680547949
Option 1 ID : 6306802142344
Option 2 ID : 6306802142345
Option 3 ID : 6306802142346
Option 4 ID : 6306802142343
Status : Answered
Chosen Option : 4

Q.13 S Abdul Nazeer was appointed as the Governor of _____ in February 2023.

- Ans ☒ 1. Kerala
☒ 2. Maharashtra
☒ 3. Goa
☒ 4. Andhra Pradesh

Question Type : MCQ
Question ID : 630680465478
Option 1 ID : 6306801817947
Option 2 ID : 6306801817950
Option 3 ID : 6306801817949
Option 4 ID : 6306801817948
Status : Not Answered
Chosen Option : --

Q.14 Who was the Registrar General and Census Commissioner of India for the 2011 Indian Census?

- Ans ☒ 1. Devender Kumar Sikri
☒ 2. Jayant Kumar Banthia
☒ 3. Vivek Joshi
☒ 4. Dr. C Chandramouli

Question Type : MCQ
Question ID : 630680120201
Option 1 ID : 630680465840
Option 2 ID : 630680465839
Option 3 ID : 630680465838
Option 4 ID : 630680465841
Status : Answered
Chosen Option : 4

Q.15 Which team won the Women's Asian Hockey Champions Trophy in 2023?

- Ans ☒ 1. South Korea
☒ 2. Japan
☒ 3. India
☒ 4. Malaysia

Question Type : MCQ
Question ID : 630680571115
Option 1 ID : 6306802233512
Option 2 ID : 6306802233514
Option 3 ID : 6306802233513
Option 4 ID : 6306802233515
Status : Answered
Chosen Option : 2

Q.16 According to Census 2011, what is the sex ratio of India?

- Ans ☒ 1. 950
☒ 2. 943
☒ 3. 933
☒ 4. 998

Question Type : MCQ
Question ID : 630680302676
Option 1 ID : 6306801177373
Option 2 ID : 6306801177372
Option 3 ID : 6306801177370
Option 4 ID : 6306801177371
Status : Answered
Chosen Option : 2

Q.17 'My Country My Life' is the autobiography of:

- Ans ☒ 1. Manmohan Singh
☒ 2. Lal Krishna Advani
☒ 3. Natwar Singh
☒ 4. Khushwant Singh

Question Type : MCQ
Question ID : 630680450245
Option 1 ID : 6306801758125
Option 2 ID : 6306801758126
Option 3 ID : 6306801758123
Option 4 ID : 6306801758124
Status : Answered
Chosen Option : 2

Q.18 In which of the following systems was the charge of collecting the revenue and paying it to the Company given to the village headman, rather than the zamindar?

- Ans ☒ 1. Ryotwari
☒ 2. Mahalwari
☒ 3. Zamindari
☒ 4. Iqtadari

Question Type : MCQ
Question ID : 630680198476
Option 1 ID : 630680769863
Option 2 ID : 630680769864
Option 3 ID : 630680769865
Option 4 ID : 630680769866
Status : Answered
Chosen Option : 1

Q.19 Helium gas can be converted to the liquid form by the _____.

- Ans ☒ 1. London forces of attraction
☒ 2. dipole-dipole forces of attraction
☒ 3. hydrogen bonding interaction
☒ 4. dipole-induced dipole forces of attraction

Question Type : MCQ
Question ID : 630680471266
Option 1 ID : 6306801840802
Option 2 ID : 6306801840803
Option 3 ID : 6306801840805
Option 4 ID : 6306801840804
Status : Answered
Chosen Option : 1

Q.20 Which Tamil superstar founded the Tamilaga Vettri Kazhagam (TVK) political party in Tamil Nadu and Puducherry on 2 February 2024 with the slogan 'Pirappokkum Ellaa Uyirkkum' (All are equal by birth)?

- Ans ☒ 1. Vijay
☒ 2. Kamal Haasan
☒ 3. Dhanush
☒ 4. Rajinikanth

Question Type : MCQ
Question ID : 630680595841
Option 1 ID : 6306802331554
Option 2 ID : 6306802331553
Option 3 ID : 6306802331555
Option 4 ID : 6306802331552
Status : Answered
Chosen Option : 1

Q.21 A river is capable of forming which of the following landscapes when the river is in its middle course?

- Ans ☒ 1. V shaped valley
☒ 2. A delta
☒ 3. Waterfalls
☒ 4. A meander

Question Type : **MCQ**
Question ID : **630680404249**
Option 1 ID : **6306801576499**
Option 2 ID : **6306801576501**
Option 3 ID : **6306801576500**
Option 4 ID : **6306801576498**
Status : **Answered**
Chosen Option : **4**

Q.22 Kalamandalam Krishnan Nair was a notable figure in which of the following classical dance forms of India?

- Ans ☒ 1. Bharatnatyam
☒ 2. Kuchipudi
☒ 3. Mohiniyattam
☒ 4. Kathakali

Question Type : **MCQ**
Question ID : **630680546517**
Option 1 ID : **6306802136640**
Option 2 ID : **6306802136643**
Option 3 ID : **6306802136641**
Option 4 ID : **6306802136642**
Status : **Answered**
Chosen Option : **3**

Q.23 Pandit Arvind Thatte belongs to which of the following gharanas?

- Ans ☒ 1. Benaras gharana
☒ 2. Mewati gharana
☒ 3. Agra gharana
☒ 4. Indore gharana

Question Type : **MCQ**
Question ID : **630680488134**
Option 1 ID : **6306801906597**
Option 2 ID : **6306801906598**
Option 3 ID : **6306801906595**
Option 4 ID : **6306801906596**
Status : **Not Answered**
Chosen Option : **--**

Q.24 Who was the famous Venetian traveller of the 13th century who visited Kerala?

- Ans ☒ 1. Barthema
☒ 2. Abdur Razzaq
☒ 3. Nicolo Conti
☒ 4. Marco Polo

Question Type : MCQ
Question ID : 630680309307
Option 1 ID : 6306801203388
Option 2 ID : 6306801203386
Option 3 ID : 6306801203385
Option 4 ID : 6306801203387
Status : Answered
Chosen Option : 3

Q.25 Who among the following is the ex-officio Chairperson of the Rajya Sabha as on 10 October 2023?

- Ans ☒ 1. Jagdeep Dhankar
☒ 2. Prakash Javdekar
☒ 3. Virendra Kumar
☒ 4. Piyush Goyal

Question Type : MCQ
Question ID : 630680407961
Option 1 ID : 6306801590704
Option 2 ID : 6306801590703
Option 3 ID : 6306801590705
Option 4 ID : 6306801590702
Status : Answered
Chosen Option : 1

Section : English Language and Comprehension


Q.1 Select the most appropriate option to fill in the blank
School classrooms have _____ very little over the last century.

- Ans ☒ 1. changed
☒ 2. freed
☒ 3. startled
☒ 4. unconcerned

Question Type : MCQ
Question ID : 630680515233
Option 1 ID : 6306802013399
Option 2 ID : 6306802013400
Option 3 ID : 6306802013398
Option 4 ID : 6306802013397
Status : Answered
Chosen Option : 1

Q.2 The following sentence has been split into four segments. Identify the segment that contains a grammatical error.
He is waiting / at airport to receive / Mr. Smith, who is / coming from South Africa.

Ans  1. at airport to receive

 2. He is waiting

 3. coming from South Africa.

 4. Mr. Smith, who is

Question Type : **MCQ**

Question ID : **630680429367**

Option 1 ID : **6306801675513**

Option 2 ID : **6306801675512**

Option 3 ID : **6306801675515**

Option 4 ID : **6306801675514**

Status : **Answered**

Chosen Option : **1**

Q.3 The following sentence has been split into four segments. Identify the segment that contains a grammatical error.
He cheated in the [A] / examination, making his [B] / already-falling academic [C] / credentials worst. [D]

Ans  1. D

 2. B

 3. A

 4. C

Question Type : **MCQ**

Question ID : **630680399074**

Option 1 ID : **6306801556292**

Option 2 ID : **6306801556293**

Option 3 ID : **6306801556290**

Option 4 ID : **6306801556291**

Status : **Answered**

Chosen Option : **2**

Q.4 Select the most appropriate ANTONYM of the given word.

Entice

Ans  1. Allure

 2. Invite

 3. Repulse

 4. Tangle

Question Type : **MCQ**

Question ID : **630680468751**

Option 1 ID : **6306801830797**

Option 2 ID : **6306801830798**

Option 3 ID : **6306801830796**

Option 4 ID : **6306801830795**

Status : **Answered**

Chosen Option : **3**

Q.5 Select the most appropriate meaning of the underlined idiom.

He gnashed his teeth at his son's actions.

- Ans ☒ 1. expressed sadness
☒ 2. expressed joy
☒ 3. expressed disappointment
☒ 4. expressed rage

Question Type : MCQ
Question ID : 630680441757
Option 1 ID : 6306801724634
Option 2 ID : 6306801724636
Option 3 ID : 6306801724637
Option 4 ID : 6306801724635
Status : Answered
Chosen Option : 4

Q.6 In the following sentence the underlined part contains an error. Alternatives to the underlined part are given as options. Select the correct alternative.
The new almirah is big than this one.

- Ans ☒ 1. bigger
☒ 2. biggest
☒ 3. more big
☒ 4. more bigger

Question Type : MCQ
Question ID : 630680514731
Option 1 ID : 6306802011552
Option 2 ID : 6306802011551
Option 3 ID : 6306802011550
Option 4 ID : 6306802011549
Status : Answered
Chosen Option : 1

Q.7 Select the correctly spelt word to fill in the blank.
We are entering a point where technology will change at _____ speeds.

- Ans ☒ 1. extreme
☒ 2. inferier
☒ 3. modarate
☒ 4. supprime

Question Type : MCQ
Question ID : 630680319163
Option 1 ID : 6306801241558
Option 2 ID : 6306801241559
Option 3 ID : 6306801241557
Option 4 ID : 6306801241560
Status : Answered
Chosen Option : 1

Q.8 Select the most appropriate meaning of the given idiom.

Run errands

- Ans ☒ 1. To go out to buy or do something
- ☐ 2. To participate in a race through unfair means
- ☐ 3. To finish running before the end point
- ☐ 4. To do something incorrectly or erroneous in haste

Question Type : MCQ
Question ID : 630680799127
Option 1 ID : 6306803131309
Option 2 ID : 6306803131307
Option 3 ID : 6306803131308
Option 4 ID : 6306803131306
Status : Answered
Chosen Option : 4

Q.9 Identify the ODD word from the given options.

- Ans ☐ 1. Carom
- ☐ 2. Table tennis
- ☐ 3. Billiards
- ☒ 4. Golf

Question Type : MCQ
Question ID : 6306801032649
Option 1 ID : 6306804053424
Option 2 ID : 6306804053423
Option 3 ID : 6306804053422
Option 4 ID : 6306804053425
Status : Answered
Chosen Option : 4

Q.10 Select the most appropriate option to fill in the blank.
Leisure activities can improve an individual's physical and mental health by _____ stress, and offering a pleasurable experience.

- Ans ☐ 1. reconstructing
- ☐ 2. irritating
- ☐ 3. upsetting
- ☒ 4. relieving

Question Type : MCQ
Question ID : 630680515251
Option 1 ID : 6306802013471
Option 2 ID : 6306802013472
Option 3 ID : 6306802013469
Option 4 ID : 6306802013470
Status : Answered
Chosen Option : 4

Q.11 The following sentence has been divided into parts. One of them may contain an error. Select the part that contains the error from the given options. If you don't find any error, mark 'No error' as your answer.

My friend, / Priya looks more cheerful today / as she celebrates her birthday.

Ans ☒ 1. No error

☒ 2. as she celebrates her birthday

☒ 3. Priya looks more cheerful today

☒ 4. My friend,

Question Type : MCQ

Question ID : 630680629329

Option 1 ID : 6306802463401

Option 2 ID : 6306802463400

Option 3 ID : 6306802463399

Option 4 ID : 6306802463398

Status : Answered

Chosen Option : 1

Q.12 Select the most appropriate ANTONYM of the given word.

Conscious

Ans ☒ 1. Sentimental

☒ 2. Sensible

☒ 3. Unaware

☒ 4. Secure

Question Type : MCQ

Question ID : 630680531650

Option 1 ID : 6306802078396

Option 2 ID : 6306802078395

Option 3 ID : 6306802078394

Option 4 ID : 6306802078393

Status : Answered

Chosen Option : 3

Q.13 The following sentence has been split into four segments. Identify the segment that contains an error in phrasal verb.

Tina dropped behind of / college and / went straight / into a good job.

Ans ☒ 1. into a good job

☒ 2. Tina dropped behind of

☒ 3. college and

☒ 4. went straight

Question Type : MCQ

Question ID : 630680540762

Option 1 ID : 6306802114089

Option 2 ID : 6306802114086

Option 3 ID : 6306802114087

Option 4 ID : 6306802114088

Status : Answered

Chosen Option : 2

Q.14 Select the most appropriate synonym of the word given in brackets to fill in the blank.

The rivals in the institution ____ (fabricated) evidence and manipulated the whole dataset.

- Ans ☒ 1. fluctuated
☒ 2. wrecked
☒ 3. destroyed
☒ 4. forged

Question Type : MCQ
Question ID : 630680522082
Option 1 ID : 6306802040657
Option 2 ID : 6306802040659
Option 3 ID : 6306802040658
Option 4 ID : 6306802040656
Status : Answered
Chosen Option : 4

Q.15 Select the option that rectifies the spelling of the underlined word in the given sentence.

The concert was canceeled due to rain.

- Ans ☒ 1. Cancealed
☒ 2. Cancelled
☒ 3. Cencelled
☒ 4. Cancaeled

Question Type : MCQ
Question ID : 630680556246
Option 1 ID : 6306802174361
Option 2 ID : 6306802174362
Option 3 ID : 6306802174360
Option 4 ID : 6306802174363
Status : Answered
Chosen Option : 2

Q.16 Select the INCORRECTLY spelt word.

- Ans ☒ 1. Intransigence
☒ 2. Spouse
☒ 3. Endengered
☒ 4. Unambiguous

Question Type : MCQ
Question ID : 630680446815
Option 1 ID : 6306801744543
Option 2 ID : 6306801744542
Option 3 ID : 6306801744541
Option 4 ID : 6306801744544
Status : Answered
Chosen Option : 3

Q.17 Select the most appropriate degree of comparison to fill in the blank.

Many ornithologists believe that the northern mocking birds are _____ wild birds in the jungle.

- Ans ☒ 1. noisy
☒ 2. the noisiest
☒ 3. the noisy
☒ 4. noisier

Question Type : MCQ
Question ID : 630680514587
Option 1 ID : 6306802010975
Option 2 ID : 6306802010973
Option 3 ID : 6306802010974
Option 4 ID : 6306802010976
Status : Answered
Chosen Option : 2

Q.18 Select the most appropriate option to fill in the blanks.

Our _____ conducted a _____ to get everyone's opinion.

- Ans ☒ 1. principal; poll
☒ 2. principal; pole
☒ 3. principle; poll
☒ 4. principle; pole

Question Type : MCQ
Question ID : 630680522067
Option 1 ID : 6306802040596
Option 2 ID : 6306802040598
Option 3 ID : 6306802040599
Option 4 ID : 6306802040597
Status : Answered
Chosen Option : 1

Q.19 Select the option that will improve the underlined part of the given sentence.

Arun asks Smita to copy the contents of the document word by word.

- Ans ☒ 1. word with word
☒ 2. word par word
☒ 3. word for word
☒ 4. word to word

Question Type : MCQ
Question ID : 630680533777
Option 1 ID : 6306802086588
Option 2 ID : 6306802086590
Option 3 ID : 6306802086589
Option 4 ID : 6306802086587
Status : Answered
Chosen Option : 4

Q.20 Select the most appropriate **ANTONYM** to substitute the underlined word in the given sentence.

In what ways do you find technological advancements beneficial to your daily life?

- Ans**
- ☒ 1. unfathomable
 - ☒ 2. unwarranted
 - ☒ 3. unfavourable
 - ☒ 4. unapproachable

Question Type : **MCQ**
Question ID : **630680528725**
Option 1 ID : **6306802066908**
Option 2 ID : **6306802066909**
Option 3 ID : **6306802066910**
Option 4 ID : **6306802066911**
Status : **Answered**
Chosen Option : **3**

Comprehension:

In the following passage, some words have been deleted. Read the passage carefully and select the most appropriate option to fill in each blank.

Dolphins 1 _____ regarded as the friendliest creatures in the sea, and stories of them helping drowning sailors have been common since Roman times. The more we 2 _____ about dolphins, the more we realise that their society is more complex 3 _____ people previously imagined. They look 4 _____ other dolphins when they are ill, care for pregnant 5 _____ and protect the weakest in the community, as we do.

SubQuestion No : 21

Q.21 Select the most appropriate option to fill in blank number 1.

- Ans**
- ☒ 1. has
 - ☒ 2. was
 - ☒ 3. is
 - ☒ 4. are

Question Type : **MCQ**
Question ID : **630680521901**
Option 1 ID : **6306802039935**
Option 2 ID : **6306802039934**
Option 3 ID : **6306802039932**
Option 4 ID : **6306802039933**
Status : **Answered**
Chosen Option : **1**

Comprehension:

In the following passage, some words have been deleted. Read the passage carefully and select the most appropriate option to fill in each blank.

Dolphins 1 _____ regarded as the friendliest creatures in the sea, and stories of them helping drowning sailors have been common since Roman times. The more we 2 _____ about dolphins, the more we realise that their society is more complex 3 _____ people previously imagined. They look 4 _____ other dolphins when they are ill, care for pregnant 5 _____ and protect the weakest in the community, as we do.

SubQuestion No : 22

Q.22 Select the most appropriate option to fill in blank number 2.

- Ans ☒ 1. learn
☐ 2. learned
☐ 3. learning
☐ 4. learns

Question Type : MCQ
Question ID : 630680521902
Option 1 ID : 6306802039936
Option 2 ID : 6306802039939
Option 3 ID : 6306802039937
Option 4 ID : 6306802039938
Status : Answered
Chosen Option : 1

Comprehension:

In the following passage, some words have been deleted. Read the passage carefully and select the most appropriate option to fill in each blank.

Dolphins 1 _____ regarded as the friendliest creatures in the sea, and stories of them helping drowning sailors have been common since Roman times. The more we 2 _____ about dolphins, the more we realise that their society is more complex 3 _____ people previously imagined. They look 4 _____ other dolphins when they are ill, care for pregnant 5 _____ and protect the weakest in the community, as we do.

SubQuestion No : 23

Q.23 Select the most appropriate option to fill in blank number 3.

- Ans ☐ 1. to
☐ 2. the
☐ 3. for
☒ 4. than

Question Type : MCQ
Question ID : 630680521903
Option 1 ID : 6306802039942
Option 2 ID : 6306802039940
Option 3 ID : 6306802039943
Option 4 ID : 6306802039941
Status : Answered
Chosen Option : 1

SSC MTS (Non Technical) EXAM STUDY KIT



FREE
SHIPPING 

- ▶ 100% SSC MTS Exam Syllabus Covered
- ▶ PRINTED Notes
- ▶ 8 Books, 700+ Pages
- ▶ 2500+ MCQs
- ▶ Practice Papers
- ▶ 1 Year Current Affairs

50%
OFF

 **SSCPORTAL.IN**

SSC MTS PDF NOTES

100% Syllabus Covered



CLICK HERE

CLICK BELOW LINK TO DOWNLOAD PDF NOTES

<https://sscportal.in/study-kit/mts>

<https://sscportal.in/study-kit>

Comprehension:

In the following passage, some words have been deleted. Read the passage carefully and select the most appropriate option to fill in each blank.

Dolphins 1 _____ regarded as the friendliest creatures in the sea, and stories of them helping drowning sailors have been common since Roman times. The more we 2 _____ about dolphins, the more we realise that their society is more complex 3 _____ people previously imagined. They look 4 _____ other dolphins when they are ill, care for pregnant 5 _____ and protect the weakest in the community, as we do.

SubQuestion No : 24

Q.24 Select the most appropriate option to fill in blank number 4.

- Ans ☒ 1. on
☒ 2. into
☒ 3. after
☒ 4. up

Question Type : **MCQ**
Question ID : **630680521904**
Option 1 ID : **6306802039947**
Option 2 ID : **6306802039945**
Option 3 ID : **6306802039946**
Option 4 ID : **6306802039944**
Status : **Answered**
Chosen Option : **3**

Comprehension:

In the following passage, some words have been deleted. Read the passage carefully and select the most appropriate option to fill in each blank.

Dolphins 1 _____ regarded as the friendliest creatures in the sea, and stories of them helping drowning sailors have been common since Roman times. The more we 2 _____ about dolphins, the more we realise that their society is more complex 3 _____ people previously imagined. They look 4 _____ other dolphins when they are ill, care for pregnant 5 _____ and protect the weakest in the community, as we do.

SubQuestion No : 25

Q.25 Select the most appropriate option to fill in blank number 5.

- Ans ☒ 1. brothers
☒ 2. mothers
☒ 3. fathers
☒ 4. uncles

Question Type : **MCQ**
Question ID : **630680521905**
Option 1 ID : **6306802039950**
Option 2 ID : **6306802039948**
Option 3 ID : **6306802039949**
Option 4 ID : **6306802039951**
Status : **Answered**
Chosen Option : **2**