

SSC MTS 2023 Tier 1 Sept 6 Shift 1 Question Paper with Answers

Roll Number	
Candidate Name	
Exam Date	06/09/2023
Exam Time	9:00 AM - 11:00 AM
Subject	MTS Non Tech Havaladar CBIC and CBN Examination 2023

Section : Numerical and Mathematical Ability

Q.1 A certain sum is to be divided between A, B, and C in the ratio 2 : 5 : 7. But by mistake, it was divided in the ratio 5 : 2 : 7. Thus B loses by ₹150. Find the sum.

- Ans**
- ✓ 1. ₹700
 - ✗ 2. ₹850
 - ✗ 3. ₹900
 - ✗ 4. ₹625

Question ID : 264330156342

Option 1 ID : 264330612768

Option 2 ID : 264330612769

Option 3 ID : 264330612770

Option 4 ID : 264330612767

Status : Answered

Chosen Option : 1

Q.2 Four books and eight pens were bought for ₹260. If the average price of a book is ₹35, then the average price of a pen would be:

- Ans**
- ✗ 1. ₹31
 - ✗ 2. ₹5
 - ✓ 3. ₹15
 - ✗ 4. ₹10

Question ID : 264330153868

Option 1 ID : 264330602936

Option 2 ID : 264330602935

Option 3 ID : 264330602937

Option 4 ID : 264330602938

Status : Answered

Chosen Option : 3



Download SSC CGL, CHSL E-BOOKS

[CLICK HERE](#)

Q.3 The fourth proportional to 1.5, 4.8 and 8 is:

- Ans 1. 25.6
 2. 26.5
 3. 22.6
 4. 24.5

Question ID : 264330153770
Option 1 ID : 264330602543
Option 2 ID : 264330602545
Option 3 ID : 264330602546
Option 4 ID : 264330602544
Status : Answered
Chosen Option : 1

Q.4 X can type 8 pages in 3 minutes. Y can type 3 pages in 5 minutes. Working together, how many pages can they type in 15 minutes?

- Ans 1. 42
 2. 40
 3. 46
 4. 49

Question ID : 264330156239
Option 1 ID : 264330612356
Option 2 ID : 264330612355
Option 3 ID : 264330612357
Option 4 ID : 264330612358
Status : Answered
Chosen Option : 4

Q.5 The average weight of 20 students of a class was 30.5 kg. After 6 new students joined the class, its average weight increased by 2 kg. Find the average weight of the 6 new students who joined the class (rounded off to one decimal place).

- Ans 1. 30.5 kg
 2. 32.5 kg
 3. 39.2 kg
 4. 38.5 kg

Question ID : 264330157323
Option 1 ID : 264330616657
Option 2 ID : 264330616656
Option 3 ID : 264330616658
Option 4 ID : 264330616655
Status : Answered
Chosen Option : 3

Q.6 A batsman makes 96 runs in the 13th innings and thus his average increases by 3. Find his average after 13 innings.

- Ans**
- 1. 65
 - 2. 50
 - 3. 70
 - 4. 60

Question ID : 264330155987
Option 1 ID : 264330611349
Option 2 ID : 264330611347
Option 3 ID : 264330611350
Option 4 ID : 264330611348
Status : Answered
Chosen Option : 4

Q.7 Surjeet alone can finish an assignment in 8 days and Manjeet alone can finish the same assignment in 6 days. Surjeet and Manjeet decided to do this assignment by working on alternate days, starting with Surjeet. In how many days will the assignment be finished?

- Ans**
- 1. 7 days
 - 2. 8.5 days
 - 3. 8 days
 - 4. 7.5 days

Question ID : 264330154134
Option 1 ID : 264330603999
Option 2 ID : 264330604002
Option 3 ID : 264330604001
Option 4 ID : 264330604000
Status : Answered
Chosen Option : 1

Q.8 Two numbers are in the ratio of 2 : 5. Their LCM is 80. Find the numbers.

- Ans**
- 1. 18 , 38
 - 2. 14 , 36
 - 3. 16 , 40
 - 4. 16 , 38

Question ID : 264330156206
Option 1 ID : 264330612226
Option 2 ID : 264330612225
Option 3 ID : 264330612224
Option 4 ID : 264330612223
Status : Answered
Chosen Option : 3

Q.9 Two trains of equal length are running on parallel lines in the same direction at 36 km/h and 54 km/h. The faster train passes the slower train in 48 seconds. The length of each train (in m) is:

- Ans**
- 1. 80
 - 2. 160
 - 3. 240
 - 4. 120

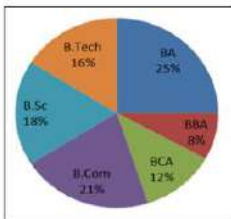
Question ID : 264330156490
 Option 1 ID : 264330613349
 Option 2 ID : 264330613350
 Option 3 ID : 264330613347
 Option 4 ID : 264330613348
 Status : Answered
 Chosen Option : 3

Q.10 If the sides of a triangle are in the ratio 3 : 4 : 5 and its perimeter is 24 m, then find the area of the triangle.

- Ans**
- 1. 32 m²
 - 2. 37 m²
 - 3. 16 m²
 - 4. 24 m²

Question ID : 264330156065
 Option 1 ID : 264330611661
 Option 2 ID : 264330611662
 Option 3 ID : 264330611659
 Option 4 ID : 264330611660
 Status : Not Answered
 Chosen Option : --

Q.11 The pie chart shows the percentage of students studying different courses in a college.
 The ratio between the number of students studying in BCA and B.sc, if the total number of students is 1200, is:



- Ans**
- 1. 14 : 27
 - 2. 32 : 63
 - 3. 7 : 9
 - 4. 2 : 3

Question ID : 264330154067
 Option 1 ID : 264330603731
 Option 2 ID : 264330603733
 Option 3 ID : 264330603734
 Option 4 ID : 264330603732
 Status : Answered
 Chosen Option : 4

Q.12 Simplify the following expression.

$$45 - 22 \div 2 + 12 + 70 \div 35 + 0.4 \div 0.8 + 1.5 \div 3 + 1$$

- Ans
- 1. 50
 - 2. 50.5
 - 3. 48.5
 - 4. 54.5

Question ID : 264330153830
Option 1 ID : 264330602785
Option 2 ID : 264330602783
Option 3 ID : 264330602786
Option 4 ID : 264330602784
Status : Answered
Chosen Option : 1

Q.13 Find the simple interest (in ₹) on ₹5,400 for 7 years at 4% per annum.

- Ans
- 1. 1,512
 - 2. 1,230
 - 3. 1,380
 - 4. 1,172

Question ID : 264330155744
Option 1 ID : 264330610379
Option 2 ID : 264330610381
Option 3 ID : 264330610380
Option 4 ID : 264330610382
Status : Answered
Chosen Option : 1

Q.14 What is the length of the longest pole that can be placed in an indoor stadium 24 m long, 18 m wide and 16 m high?

- Ans
- 1. 38 m
 - 2. 34 m
 - 3. 42 m
 - 4. 36 m

Question ID : 264330154108
Option 1 ID : 264330603896
Option 2 ID : 264330603898
Option 3 ID : 264330603895
Option 4 ID : 264330603897
Status : Not Answered
Chosen Option : --

SSC MTS (Non Technical) EXAM STUDY KIT



FREE SHIPPING 

- ▶ 100% SSC MTS Exam Syllabus Covered
- ▶ PRINTED Notes
- ▶ 8 Books, 700+ Pages
- ▶ 2500+ MCQs
- ▶ Practice Papers
- ▶ 1 Year Current Affairs

50% OFF

 **SSCPORTAL.IN**
India's largest online community for SSC, CDS, Railways

SSC MTS PDF NOTES

100% Syllabus Covered



CLICK HERE

<https://sscpportal.in/study-kit/mts>

Q.15 Study the given table and answer the question that follows.

The table shows the centre and post-wise number of candidates.

Centre	Officer	Clerk	Supervisor	Field Officer
Mumbai	12000	18000	8000	200
Chennai	8000	10000	6000	100
Hyderabad	10000	12000	7000	150
Bengaluru	9000	6000	5000	80
Kolkata	14000	18000	6500	120

Which centre has the highest number of candidates?

- Ans**
- 1. Mumbai
 - 2. Kolkata
 - 3. Chennai
 - 4. Hyderabad

Question ID : **264330155978**
Option 1 ID : **264330611313**
Option 2 ID : **264330611312**
Option 3 ID : **264330611314**
Option 4 ID : **264330611311**
Status : **Answered**
Chosen Option : **2**

Q.16 A thief is spotted by a policeman from a distance of 108 m. The thief starts running and the policeman chases him. If the speed of the thief and policeman are 21 km/h and 23 km/h, respectively, then how far will the thief have to run (in m) before he is overtaken by the policeman?

- Ans**
- 1. 2534
 - 2. 3121
 - 3. 1216
 - 4. 1134

Question ID : **264330154092**
Option 1 ID : **264330603832**
Option 2 ID : **264330603834**
Option 3 ID : **264330603831**
Option 4 ID : **264330603833**
Status : **Not Answered**
Chosen Option : **--**

Q.17 What is the difference between the compound interest, interest compounded half yearly on ₹72,000 for 1.5 years at 10% per annum and its simple interest for 3 years at 5% per annum?

- Ans
- 1. ₹559
 - 2. ₹549
 - 3. ₹540
 - 4. ₹449

Question ID : 264330154133
Option 1 ID : 264330603996
Option 2 ID : 264330603998
Option 3 ID : 264330603997
Option 4 ID : 264330603995
Status : Not Answered
Chosen Option : --

Q.18 The profit obtained by a vendor on selling goods at ₹3,200 is equal to 7/5th of the profit obtained by selling the same goods at ₹3,000. What is the cost price (in ₹) of the goods?

- Ans
- 1. 2,500
 - 2. 2,700
 - 3. 2,400
 - 4. 2,900

Question ID : 264330156104
Option 1 ID : 264330611817
Option 2 ID : 264330611816
Option 3 ID : 264330611818
Option 4 ID : 264330611815
Status : Not Answered
Chosen Option : --

Q.19 A spends 20% of the daily income. If the expenditure is ₹250, then the daily income is:

- Ans
- 1. ₹800
 - 2. ₹1,250
 - 3. ₹2,500
 - 4. ₹1,500

Question ID : 264330154045
Option 1 ID : 264330603646
Option 2 ID : 264330603644
Option 3 ID : 264330603645
Option 4 ID : 264330603643
Status : Answered
Chosen Option : 2

Q.20 By selling a book at some price, Ankita gains 10%. If the book is sold at twice the price, then what will be the gain percentage for Ankita?

- Ans**
- 1. 140%
 - 2. 100%
 - 3. 120%
 - 4. 125%

Question ID : 264330155708

Option 1 ID : 264330610238

Option 2 ID : 264330610235

Option 3 ID : 264330610236

Option 4 ID : 264330610237

Status : Answered

Chosen Option : 2

Section : Reasoning Ability and Problem Solving

Q.1 LCNT is related to NEPV in a certain way based on the English alphabetical order. In the same way, HBER is related to JDGT. To which of the following is OSCF related to, following the same logic?

- Ans**
- 1. PUDJ
 - 2. RVEH
 - 3. QVEI
 - 4. QUEH

Question ID : 264330151682

Option 1 ID : 264330594357

Option 2 ID : 264330594355

Option 3 ID : 264330594356

Option 4 ID : 264330594358

Status : Answered

Chosen Option : 4

Q.2 What will come in the place of '?' in the following equation, if '+' and '-' are interchanged and '×' and '÷' are interchanged?

$$111 \times 3 - 13 + 3 + 26 = ?$$

- Ans**
- 1. 50
 - 2. 70
 - 3. 40
 - 4. 60

Question ID : 264330155674

Option 1 ID : 264330610101

Option 2 ID : 264330610102

Option 3 ID : 264330610100

Option 4 ID : 264330610099

Status : Answered

Chosen Option : 1

Q.3 What should come in place of '?' in the given series?

24 103 498 2473 12348 ?

- Ans
- 1. 60983
 - 2. 63487
 - 3. 62457
 - 4. 61723

Question ID : 264330151455
Option 1 ID : 264330593447
Option 2 ID : 264330593450
Option 3 ID : 264330593449
Option 4 ID : 264330593448
Status : Not Answered
Chosen Option : --

Q.4 Select the set in which the numbers are related in the same way as are the numbers of the following sets.

(NOTE : Operations should be performed on the whole numbers, without breaking down the numbers into its constituent digits. E.g. 13 – Operations on 13 such as adding / subtracting /multiplying etc. to 13 can be performed. Breaking down 13 into 1 and 3 and then performing mathematical operations on 1 and 3 is not allowed)
(8, 720, 9)
(16, 800, 5)

- Ans
- 1. 7, 125, 8
 - 2. 13, 169, 5
 - 3. 14, 238, 5
 - 4. 18, 1260, 7

Question ID : 264330151611
Option 1 ID : 264330594071
Option 2 ID : 264330594072
Option 3 ID : 264330594074
Option 4 ID : 264330594073
Status : Answered
Chosen Option : 4

Q.5 What should come in place of ? in the given series based on the English alphabetical order?

LPA, PSY, TVW, XYU, ?

- Ans
- 1. CBR
 - 2. BBS
 - 3. CDS
 - 4. DCR

Question ID : 264330155801
Option 1 ID : 264330610608
Option 2 ID : 264330610607
Option 3 ID : 264330610609
Option 4 ID : 264330610610
Status : Answered
Chosen Option : 2

Q.6 Read the given statement(s) and conclusions carefully. Assuming that the information given in the statements is true, even if it appears to be at variance with commonly known facts, decide which of the given conclusions logically follow(s) from the statement(s).

Statements: All buildings are chalks. No chalk is a toffee.

Conclusions:

(I) No building is a toffee.

(II) All chalks are buildings.

- Ans**
- 1. Both conclusions (I) and (II) are follows.
 - 2. Only conclusion (I) is follows.
 - 3. Neither conclusion (I) nor (II) is follows.
 - 4. Only conclusion (II) is follows.

Question ID : 264330154432
Option 1 ID : 264330605194
Option 2 ID : 264330605191
Option 3 ID : 264330605193
Option 4 ID : 264330605192
Status : Answered
Chosen Option : 2

Q.7 In a certain code language, 'NAME' is coded as '2473' and 'MEND' is coded as '7642'. What is the code for 'D' in the given code language?

- Ans**
- 1. 4
 - 2. 6
 - 3. 7
 - 4. 2

Question ID : 264330151707
Option 1 ID : 264330594458
Option 2 ID : 264330594457
Option 3 ID : 264330594456
Option 4 ID : 264330594455
Status : Answered
Chosen Option : 2

Q.8 If 4 November 2021 is a Thursday, then what will be the day of the week on 13 May 2023?

- Ans**
- 1. Monday
 - 2. Sunday
 - 3. Friday
 - 4. Saturday

Question ID : 264330154358
Option 1 ID : 264330604897
Option 2 ID : 264330604898
Option 3 ID : 264330604896
Option 4 ID : 264330604895
Status : Answered
Chosen Option : 4

Q.9 8 is related to 40 following a certain logic. Following the same logic, 3 is related to 15. To which of the following is 52 related to, following the same logic?

- Ans**
- 1. 261
 - 2. 262
 - 3. 260
 - 4. 263

Question ID : 264330151587
Option 1 ID : 264330593976
Option 2 ID : 264330593977
Option 3 ID : 264330593975
Option 4 ID : 264330593978
Status : Answered
Chosen Option : 3

Q.10 In a certain code language, 'CHORAL' is coded as 'OHCLAR' and 'FOREGO' is coded as 'ROFOGE'. What is the code for 'GALLEY' in the given code language?

- Ans**
- 1. GYALLE
 - 2. ELLAGY
 - 3. LAGYEL
 - 4. YELLAG

Question ID : 264330155809
Option 1 ID : 264330610641
Option 2 ID : 264330610642
Option 3 ID : 264330610639
Option 4 ID : 264330610640
Status : Answered
Chosen Option : 3

Q.11 What should come in place of ? in the given series?

64 61 55 46 34 ?

- Ans**
- 1. 19
 - 2. 24
 - 3. 15
 - 4. 21

Question ID : 264330151722
Option 1 ID : 264330594517
Option 2 ID : 264330594516
Option 3 ID : 264330594518
Option 4 ID : 264330594515
Status : Answered
Chosen Option : 1

Q.12 If 'I' stands for '+', 'J' stands for '×', 'K' stands for '-' and 'L' stands for '÷', what will come in place of the question mark (?) in the following equation?
 $105 \text{ L } (72 \text{ K } 9) \text{ I } 43 \text{ L } (9 \text{ J } 4) = ?$

- Ans**
- 1. 104
 - 2. 114
 - 3. 106
 - 4. 126

Question ID : 264330151798
Option 1 ID : 264330594822
Option 2 ID : 264330594820
Option 3 ID : 264330594819
Option 4 ID : 264330594821
Status : Answered
Chosen Option : 1

Q.13 E, F, G, H, I and J are sitting around a circular table facing the center. J sits immediate left of I. G sits second to the right of I. E sits second to the right of G. H sits second to the left of F. Who sits third to the right of E?

- Ans**
- 1. F
 - 2. H
 - 3. I
 - 4. J

Question ID : 264330154472
Option 1 ID : 264330605354
Option 2 ID : 264330605351
Option 3 ID : 264330605353
Option 4 ID : 264330605352
Status : Not Answered
Chosen Option : --

Q.14 What should come in place of '?' in the given series?

77 754 ? 75224 752224 7522224 75222224

- Ans**
- 1. 7544
 - 2. 7254
 - 3. 7425
 - 4. 7524

Question ID : 264330151443
Option 1 ID : 264330593400
Option 2 ID : 264330593401
Option 3 ID : 264330593402
Option 4 ID : 264330593399
Status : Not Answered
Chosen Option : --

Q.15 Read the given statements and conclusions carefully. You have to take the given statements to be true even if they seem to be at variance from commonly known facts. You have to decide which conclusion/s logically follow/s from the given statements.

Statements: All cakes are biscuits. Some biscuits are tarts. All tarts are puddings.

Conclusion I: Some biscuits are cakes.

Conclusion II: Some puddings are biscuits.

- Ans**
- 1. Neither conclusion (I) nor (II) is follow.
 - 2. Both conclusions (I) and (II) are follow.
 - 3. Only conclusion (I) is follow.
 - 4. Only conclusion (II) is follow.

Question ID : 264330155937

Option 1 ID : 264330611153

Option 2 ID : 264330611154

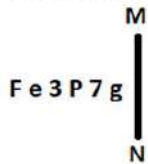
Option 3 ID : 264330611151

Option 4 ID : 264330611152

Status : Answered

Chosen Option : 2

Q.16 Select the correct mirror image of the given figure when the mirror is placed at MN as shown below.



- Ans**
- 1. g 7 P 3 e F
 - 2. g 7 P 3 F
 - 3. g 7 P 3 e F
 - 4. F e 3 P 7 g

Question ID : 264330151525

Option 1 ID : 264330593728

Option 2 ID : 264330593730

Option 3 ID : 264330593729

Option 4 ID : 264330593727

Status : Answered

Chosen Option : 3

Q.17 Which figure should replace the question mark (?) if the following figure series were to be continued?

6	☆	☆	B	U	H	H	B	
U	B	H	□	6	U	☆	B	Z
Z	□	H	Z	6	□	Z	6	?

Ans

✗ 1.

6		Z
☆	H	□
B		U

✓ 2.

☆		Z
H	B	6
U		□

✗ 3.

6		☆
B	H	Z
□		U

✗ 4.

6		Z
☆	B	□
U		H

Question ID : 264330154740

Option 1 ID : 264330606425

Option 2 ID : 264330606424

Option 3 ID : 264330606423

Option 4 ID : 264330606426

Status : Not Answered

Chosen Option : --

Q.18 What should come in place of ? in the given series based on the English alphabetical order?

UDM, XGP, AJS, DMV, ?

Ans ✓ 1. GPY

✗ 2. FPX

✗ 3. EOX

✗ 4. FOY

Question ID : 264330155764

Option 1 ID : 264330610460

Option 2 ID : 264330610461

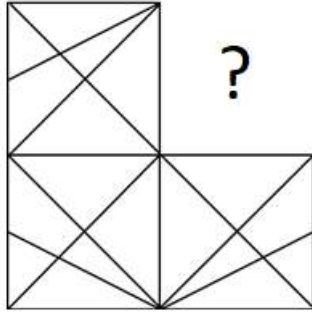
Option 3 ID : 264330610462

Option 4 ID : 264330610459

Status : Answered

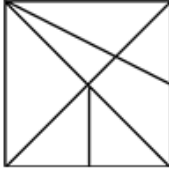
Chosen Option : 1

Q.19 Identify the figure that completes the pattern (rotation is NOT allowed).

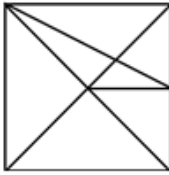


Ans

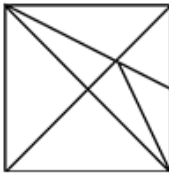
✗ 1.



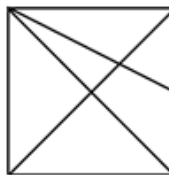
✗ 2.



✗ 3.



✓ 4.



Question ID : 264330154517

Option 1 ID : 264330605532

Option 2 ID : 264330605533

Option 3 ID : 264330605534

Option 4 ID : 264330605531

Status : Answered

Chosen Option : 4

Q.20 What should come in place of ? in the given series based on the English alphabetical order?

TOY, UQB, VSE, WUH, ?

Ans ✗ 1. YVJ

✗ 2. ZWI

✗ 3. YUI

✓ 4. XWK

Question ID : 264330155774

Option 1 ID : 264330610499

Option 2 ID : 264330610502

Option 3 ID : 264330610501

Option 4 ID : 264330610500

Status : Answered

Chosen Option : 4

SSC MTS (Non Technical) EXAM STUDY KIT



FREE SHIPPING 

- ▶ 100% SSC MTS Exam Syllabus Covered
- ▶ PRINTED Notes
- ▶ 8 Books, 700+ Pages
- ▶ 2500+ MCQs
- ▶ Practice Papers
- ▶ 1 Year Current Affairs

50% OFF

 **SSCPORTAL.IN**
India's largest online community for SSC, CDS, Railways

SSC MTS PDF NOTES

100% Syllabus Covered



**50%
OFF**

CLICK HERE

<https://sscpportal.in/study-kit/mts>

Section : General Awareness

Q.1 The Guide is a 1958 novel written in English by the Indian author _____.

- Ans
- 1. Mulk Raj Anand
 - 2. Khushwant Singh
 - 3. RK Narayan
 - 4. Nirad Chaudhuri

Question ID : 264330155452
Option 1 ID : 264330609211
Option 2 ID : 264330609212
Option 3 ID : 264330609213
Option 4 ID : 264330609214
Status : Answered
Chosen Option : 1

Q.2 The stretch between Mumbai to Goa of western coast of India is known as _____.

- Ans
- 1. Coromandel coast
 - 2. Konkan coast
 - 3. Malabar Coast
 - 4. Kannada Plain

Question ID : 264330161495
Option 1 ID : 264330633310
Option 2 ID : 264330633309
Option 3 ID : 264330633308
Option 4 ID : 264330633307
Status : Answered
Chosen Option : 2

Q.3 Which of the following autobiographies is NOT correctly matched with the concerned cricketer?

- Ans
- 1. Playing it My Way – VVS Laxman
 - 2. The Test of My Life: From Cricket to Cancer and Back – Yuvraj Singh
 - 3. Straight from the Heart – Kapil Dev
 - 4. Cricket Delightful – Mushtaq Ali

Question ID : 264330161753
Option 1 ID : 264330634341
Option 2 ID : 264330634342
Option 3 ID : 264330634339
Option 4 ID : 264330634340
Status : Answered
Chosen Option : 1

Q.4 What does El Niño refer to?

- Ans** 1. Hot water current
 2. Pressure water current
 3. High air pressure
 4. Low air pressure

Question ID : 264330161310
Option 1 ID : 264330632567
Option 2 ID : 264330632568
Option 3 ID : 264330632570
Option 4 ID : 264330632569
Status : Answered
Chosen Option : 1

Q.5 Where was the 13th Hockey India senior women's national hockey championship held?

- Ans** 1. Andhra Pradesh
 2. New Delhi
 3. Punjab
 4. Karnataka

Question ID : 264330161155
Option 1 ID : 264330631951
Option 2 ID : 264330631953
Option 3 ID : 264330631952
Option 4 ID : 264330631954
Status : Not Answered
Chosen Option : --

Q.6 Which Article of the Constitution of India provides for a Council of Ministers with the Prime Minister at the head to aid and advice the President in the exercise of the President's functions?

- Ans** 1. Article 77
 2. Article 74
 3. Article 71
 4. Article 72

Question ID : 264330161288
Option 1 ID : 264330632482
Option 2 ID : 264330632481
Option 3 ID : 264330632479
Option 4 ID : 264330632480
Status : Answered
Chosen Option : 2

Q.7 Which of the following is a key objective of Micro Finance Institutions in India?

- Ans** 1. Providing loans exclusively to women entrepreneurs
 2. Encouraging large-scale industrialisation
 3. Maximising profits for shareholders
 4. Promoting financial inclusion and poverty alleviation

Question ID : 264330157288
Option 1 ID : 264330616517
Option 2 ID : 264330616518
Option 3 ID : 264330616515
Option 4 ID : 264330616516
Status : Answered

Q.8 _____ is one of the most important festivals of Kamakhya temple of Guwahati. It is held every year during the monsoon (mid-June) season, when the temple is closed for three days for tantric rites.

- Ans
- 1. Ambubachi
 - 2. Bihu
 - 3. Baishagu
 - 4. Me-Dum-Me-Phi

Question ID : 264330160821
Option 1 ID : 264330630617
Option 2 ID : 264330630615
Option 3 ID : 264330630616
Option 4 ID : 264330630618
Status : Answered
Chosen Option : 1

Q.9 In which city is the Kamakhya temple situated?

- Ans
- 1. Dehradun
 - 2. Bhopal
 - 3. Guwahati
 - 4. Indore

Question ID : 264330160779
Option 1 ID : 264330630450
Option 2 ID : 264330630447
Option 3 ID : 264330630448
Option 4 ID : 264330630449
Status : Answered
Chosen Option : 3

Q.10 Which of the following statements best defines a Micro Finance Institution (MFI)?

- Ans
- 1. MFIs are investment firms that cater exclusively to high-net-worth individuals.
 - 2. MFIs are non-profit organisations that provide financial services to low-income individuals and small businesses.
 - 3. MFIs are banks that provide loans only to large corporations.
 - 4. MFIs are government agencies that regulate the microfinance sector.

Question ID : 264330157284
Option 1 ID : 264330616502
Option 2 ID : 264330616500
Option 3 ID : 264330616499
Option 4 ID : 264330616501
Status : Answered
Chosen Option : 4

Q.11 Mumbai Indians defeated which team to win Women's Premier League in March, 2023?

- Ans
- 1. UP Warriors
 - 2. Royal Challengers
 - 3. Delhi Capitals
 - 4. Gujarat Giants

Question ID : 264330158352
Option 1 ID : 264330620770
Option 2 ID : 264330620768
Option 3 ID : 264330620769
Option 4 ID : 264330620767
Status : Answered
Chosen Option : 3

Q.12 The Songi Mukhawate dance of _____ celebrates the victory of truth over falsehood. The name of the dance is derived from the two lion masks worn by two dancers who represent Narasimha, an aspect of Lord Vishnu.

- Ans
- 1. Madhya Pradesh
 - 2. Jharkhand
 - 3. Maharashtra
 - 4. Gujarat

Question ID : 264330160802
Option 1 ID : 264330630541
Option 2 ID : 264330630542
Option 3 ID : 264330630539
Option 4 ID : 264330630540
Status : Not Answered
Chosen Option : --

Q.13 Who among the following is best known for creating a fusion style of dance by adapting European theatrical techniques to Indian classical dance?

- Ans
- 1. Yamini Krishnamurthy
 - 2. Uday Shankar
 - 3. Gopi Krishna
 - 4. Sonal Mansingh

Question ID : 264330155522
Option 1 ID : 264330609494
Option 2 ID : 264330609492
Option 3 ID : 264330609491
Option 4 ID : 264330609493
Status : Not Answered
Chosen Option : --

Q.14 Where was the Hindustan Socialist Republican Association founded in 1928?

- Ans
- 1. Kanpur
 - 2. Amritsar
 - 3. Lucknow
 - 4. Delhi

Question ID : 264330162324
Option 1 ID : 264330636625
Option 2 ID : 264330636624
Option 3 ID : 264330636623
Option 4 ID : 264330636626
Status : Answered
Chosen Option : 4

Q.15 Which process is sometimes called "reduction division" because it reduces the number of chromosomes to half the normal number to form sperm and eggs?

- Ans
- 1. Amitosis
 - 2. Meiosis
 - 3. Cytokinesis
 - 4. Karyokinesis

Question ID : 264330161089
Option 1 ID : 264330631689
Option 2 ID : 264330631690
Option 3 ID : 264330631687
Option 4 ID : 264330631688
Status : Answered
Chosen Option : 2

Q.16 Which chemical element with atomic number 35 has a dark reddish-brown liquid with a burning pungent odour?

- Ans
- 1. Tennessine
 - 2. Chlorine
 - 3. Astatine
 - 4. Bromine

Question ID : 264330161061
Option 1 ID : 264330631578
Option 2 ID : 264330631575
Option 3 ID : 264330631577
Option 4 ID : 264330631576
Status : Answered
Chosen Option : 2

Q.17 In which year did Pakistan win the Kabaddi (Circle style) World Cup?

- Ans
- 1. 2016
 - 2. 2014
 - 3. 2020
 - 4. 2013

Question ID : 264330158235
Option 1 ID : 264330620301
Option 2 ID : 264330620300
Option 3 ID : 264330620302
Option 4 ID : 264330620299
Status : Not Answered
Chosen Option : --

Q.18 The North-South corridor, which is a part of the Golden Quadrilateral super highways, links which two cities of India from the following?

- Ans
- 1. Delhi and Chennai
 - 2. Leh and Chennai
 - 3. Jammu and Kanyakumari
 - 4. Srinagar and Kanyakumari

Question ID : 264330161489
Option 1 ID : 264330633284
Option 2 ID : 264330633283
Option 3 ID : 264330633286
Option 4 ID : 264330633285
Status : Answered

Q.19 For which community was a journal Rast Goftar started for the purpose of social-religious reforms?

- Ans
- 1. Sikhs
 - 2. Muslim
 - 3. Parsis
 - 4. Hindu

Question ID : 264330160892
Option 1 ID : 264330630900
Option 2 ID : 264330630901
Option 3 ID : 264330630899
Option 4 ID : 264330630902
Status : Answered
Chosen Option : 3

Q.20 26 January was selected as the date of the inauguration of the Constitution because on the same date in 1930, the Indian National Congress had revealed

- Ans
- 1. Quit India Movement
 - 2. Purna Swaraj Movement
 - 3. Namak Satyagraha
 - 4. Khilafat Movement

Question ID : 264330161346
Option 1 ID : 264330632712
Option 2 ID : 264330632711
Option 3 ID : 264330632713
Option 4 ID : 264330632714
Status : Answered
Chosen Option : 2

Q.21 What is the name of the scheme launched by Uttar Pradesh government to boost milk production?

- Ans
- 1. Nand Baba Milk Mission
 - 2. Gokul Milk Mission
 - 3. Krishna Balram Milk Mission
 - 4. Gua Ras Mission

Question ID : 264330158329
Option 1 ID : 264330620677
Option 2 ID : 264330620678
Option 3 ID : 264330620675
Option 4 ID : 264330620676
Status : Answered
Chosen Option : 2

Q.22 What is the source of Directive Principles of State Policy?

- Ans 1. The instrument of instructions from GOI Act 1919
 2. The instrument of instructions from GOI Act 1935
 3. The instrument of instructions from GOI Act 1909
 4. The instrument of instructions from GOI Act 1947

Question ID : 264330161397
Option 1 ID : 264330632916
Option 2 ID : 264330632917
Option 3 ID : 264330632915
Option 4 ID : 264330632918
Status : Answered
Chosen Option : 2

Q.23 How many classical dance forms does the Sangeet Natak Akademi in India officially recognise, as of August 2021?

- Ans 1. 9
 2. 6
 3. 7
 4. 8

Question ID : 264330160786
Option 1 ID : 264330630478
Option 2 ID : 264330630475
Option 3 ID : 264330630476
Option 4 ID : 264330630477
Status : Answered
Chosen Option : 4

Q.24 According to the Human Development Report 2021-22, what is the rank of India among 191 countries?

- Ans 1. 117
 2. 180
 3. 148
 4. 132

Question ID : 264330160167
Option 1 ID : 264330628010
Option 2 ID : 264330628007
Option 3 ID : 264330628008
Option 4 ID : 264330628009
Status : Answered
Chosen Option : 4

Q.25 Which Indian musical legend is credited with composing Talas such as Trimukhi, Panchamukhi, Saptamukhi and Navamukhi?

- Ans 1. M Balamuralikrishna
 2. Bade Ghulam Ali Khan
 3. KJ Yesudas
 4. Pandit Jasraj

Question ID : 264330155464
Option 1 ID : 264330609260
Option 2 ID : 264330609261
Option 3 ID : 264330609262
Option 4 ID : 264330609259
Status : Not Answered
Chosen Option : --

Section : English Language and Comprehension

Q.1 Select the most appropriate meaning of the underlined idiom.

The Indian team had its back against the wall, but managed to fight back.

- Ans 1. In extreme joy or exhilaration
 2. Stuck in a difficult circumstance with no escape
 3. Forced to indulge in propaganda
 4. Throwing the opposition off guard

Question ID : 264330153142
Option 1 ID : 264330600127
Option 2 ID : 264330600129
Option 3 ID : 264330600128
Option 4 ID : 264330600130
Status : Answered
Chosen Option : 2

Q.2 The following sentence has been split into four segments. Identify the segment that contains a grammatical error.

This is the first time / I ate such / a tasty cake.

- Ans 1. I ate such
 2. This is the first time
 3. No error
 4. a tasty cake

Question ID : 264330153616
Option 1 ID : 264330601948
Option 2 ID : 264330601947
Option 3 ID : 264330601950
Option 4 ID : 264330601949
Status : Answered
Chosen Option : 3

Q.3 Select the option that can be used as a one-word substitute for the given group of words.

A lover of books

- Ans
- 1. Philosopher
 - 2. Librarian
 - 3. Teacher
 - 4. Bibliophile

Question ID : 264330152737

Option 1 ID : 264330598549

Option 2 ID : 264330598548

Option 3 ID : 264330598547

Option 4 ID : 264330598550

Status : Answered

Chosen Option : 4

Q.4 Select the most appropriate option to fill in the blank.

Tom waited until _____ to start working on his term paper but managed to finish it just in time.

- Ans
- 1. the twelfth hour
 - 2. the thirteenth hour
 - 3. the tenth hour
 - 4. the eleventh hour

Question ID : 264330151885

Option 1 ID : 264330595161

Option 2 ID : 264330595162

Option 3 ID : 264330595160

Option 4 ID : 264330595159

Status : Answered

Chosen Option : 4

Q.5 Select the most appropriate synonym of the given word.

Cordial

- Ans
- 1. Unfriendly
 - 2. Friendly
 - 3. Brave
 - 4. Aromatic

Question ID : 264330151918

Option 1 ID : 264330595287

Option 2 ID : 264330595288

Option 3 ID : 264330595290

Option 4 ID : 264330595289

Status : Answered

Chosen Option : 2

Q.6 Select the most appropriate meaning of the given idiom.

Bigger fish to fry

- Ans 1. To barely get something done
 2. Having something more important to take care of
 3. Having work more than one's capacity
 4. To be similar to one's parents in some way

Question ID : 264330153013
Option 1 ID : 264330599626
Option 2 ID : 264330599624
Option 3 ID : 264330599623
Option 4 ID : 264330599625
Status : Answered
Chosen Option : 2

Q.7 There is a spelling error in the given sentence. Select the option that contains the INCORRECTLY spelt word.
The hungry goblin scratched the grammar book with a feathery.

- Ans 1. hungry
 2. scratched
 3. feather
 4. grammar

Question ID : 264330152836
Option 1 ID : 264330598935
Option 2 ID : 264330598936
Option 3 ID : 264330598938
Option 4 ID : 264330598937
Status : Answered
Chosen Option : 1

Q.8 Select the most appropriate option to fill in the blank.
The rusty door made a _____ screeching noise.

- Ans 1. low
 2. soft
 3. harsh
 4. smooth

Question ID : 264330152638
Option 1 ID : 264330598157
Option 2 ID : 264330598158
Option 3 ID : 264330598156
Option 4 ID : 264330598155
Status : Answered
Chosen Option : 3

Q.9 Select the most appropriate option to fill in the blank.

The tone of his voice seemed to _____ that he knew more than he was letting on.

- Ans
- 1. incise
 - 2. intent
 - 3. inculcate
 - 4. imply

Question ID : 264330151864
Option 1 ID : 264330595077
Option 2 ID : 264330595078
Option 3 ID : 264330595075
Option 4 ID : 264330595076
Status : Not Answered
Chosen Option : --

Q.10 Select the most appropriate ANTONYM of the given word.
Enormous

- Ans
- 1. Tiny
 - 2. Inapposite
 - 3. Irrelevant
 - 4. Gigantic

Question ID : 264330151876
Option 1 ID : 264330595124
Option 2 ID : 264330595126
Option 3 ID : 264330595125
Option 4 ID : 264330595123
Status : Answered
Chosen Option : 4

Q.11 There is a spelling error in the given sentence. Select the option that contains the INCORRECTLY spelt word.
The questionnaire appeared to be miserably designed.

- Ans
- 1. designed
 - 2. questionnaire
 - 3. miserably
 - 4. appeared

Question ID : 264330152839
Option 1 ID : 264330598950
Option 2 ID : 264330598947
Option 3 ID : 264330598949
Option 4 ID : 264330598948
Status : Answered
Chosen Option : 3

Q.12 Select the most appropriate option to fill in the blank.
COVID-19 _____ structural weaknesses in health systems worldwide and negatively impacted individuals, societies, and economies.

- Ans
- 1. concealed
 - 2. laid
 - 3. hit
 - 4. revealed

Question ID : 264330151903
Option 1 ID : 264330595227
Option 2 ID : 264330595228
Option 3 ID : 264330595229
Option 4 ID : 264330595230
Status : Answered
Chosen Option : 4

Q.13 Select the most appropriate option that can substitute the underlined segment in the given sentence.

She will handling the baby as tenderly as possible.

- Ans
- 1. wills handle
 - 2. shall handles
 - 3. will handle
 - 4. will handled

Question ID : 264330153483
Option 1 ID : 264330601450
Option 2 ID : 264330601447
Option 3 ID : 264330601449
Option 4 ID : 264330601448
Status : Answered
Chosen Option : 3

Q.14 Parts of the following sentence have been given as options. Select the option that contains an error.

A old woman suddenly laughed, sounding just like an amused hen.

- Ans
- 1. like an amused hen
 - 2. sounding just
 - 3. A old woman
 - 4. suddenly laughed

Question ID : 264330153606
Option 1 ID : 264330601910
Option 2 ID : 264330601909
Option 3 ID : 264330601907
Option 4 ID : 264330601908
Status : Answered
Chosen Option : 1

Q.15 Select the most appropriate ANTONYM of the given word.
Annoy

- Ans 1. Gratify
 2. Vex
 3. Irritate
 4. Thrill

Question ID : 264330152593
Option 1 ID : 264330597977
Option 2 ID : 264330597976
Option 3 ID : 264330597975
Option 4 ID : 264330597978
Status : Answered
Chosen Option : 4

Q.16 Four words of the following sentence have been underlined and given as options.
Select the option that contains a spelling error.
All life depends on a healthy planet, but the interwoven systems of atmosphere, oceans, watercourses, land, ice cover and biosphere, which form the natural environment, are threatned by human activities.

- Ans 1. interwoven
 2. threatned
 3. biosphere
 4. watercourses

Question ID : 264330151928
Option 1 ID : 264330595327
Option 2 ID : 264330595330
Option 3 ID : 264330595329
Option 4 ID : 264330595328
Status : Answered
Chosen Option : 1

Q.17 Select the most appropriate meaning of the given idiom.
A storm in a teacup

- Ans 1. Much excitement over something trivial
 2. A signal for upcoming storm
 3. Easy money
 4. Suffering in silence

Question ID : 264330156386
Option 1 ID : 264330612945
Option 2 ID : 264330612943
Option 3 ID : 264330612946
Option 4 ID : 264330612944
Status : Answered
Chosen Option : 1

Q.18 Select the most appropriate option to fill in the blank.
Varun has to _____ his studies for the sake of his ill father.

- Ans 1. sacrifice
 2. imitate
 3. reverse
 4. applaud

Question ID : 264330153551
Option 1 ID : 264330601703
Option 2 ID : 264330601705
Option 3 ID : 264330601704
Option 4 ID : 264330601706
Status : Answered
Chosen Option : 1

Q.19 Parts of the following sentence have been given as options. Select the option that contains an error.
Vikram is very stronger than I am.

- Ans 1. very stronger
 2. I am
 3. Vikram is
 4. than

Question ID : 264330152798
Option 1 ID : 264330598784
Option 2 ID : 264330598786
Option 3 ID : 264330598783
Option 4 ID : 264330598785
Status : Answered
Chosen Option : 2

Q.20 Select the most appropriate option that can substitute the underlined segment in the given sentence.

You are always try with jump over the wall.

- Ans 1. trying in jumping
 2. try to jump
 3. trying to jump
 4. tried with jump

Question ID : 264330153475
Option 1 ID : 264330601415
Option 2 ID : 264330601416
Option 3 ID : 264330601418
Option 4 ID : 264330601417
Status : Answered
Chosen Option : 3

Comprehension:

In the following passage, some words have been deleted. Read the passage carefully and select the most appropriate option to fill in the blanks.

Kasturi went to the garden looking for her mother. Her dog Rex was waiting (1)____ her. Kasturi picked up a stick and threw it. Rex (2)_____ the stick and brought it back. Kasturi ran (3)___ the house. Rex chased her. Kasturi ran through the garden and Rex (4)____ her. Mother yelled at both of them. She told them to stay (5)_____ of the garden and play somewhere else. Kasturi apologised to her mother. She went for a bike ride while Rex ran next to the bike.

SubQuestion No : 21

Q.21 Select the most appropriate option to fill in blank number 1.

- Ans
- 1. with
 - 2. by
 - 3. to
 - 4. for

Question ID : 264330152950

Option 1 ID : 264330599375

Option 2 ID : 264330599378

Option 3 ID : 264330599377

Option 4 ID : 264330599376

Status : Answered

Chosen Option : 2

Comprehension:

In the following passage, some words have been deleted. Read the passage carefully and select the most appropriate option to fill in the blanks.

Kasturi went to the garden looking for her mother. Her dog Rex was waiting (1)____ her. Kasturi picked up a stick and threw it. Rex (2)_____ the stick and brought it back. Kasturi ran (3)___ the house. Rex chased her. Kasturi ran through the garden and Rex (4)____ her. Mother yelled at both of them. She told them to stay (5)_____ of the garden and play somewhere else. Kasturi apologised to her mother. She went for a bike ride while Rex ran next to the bike.

SubQuestion No : 22

Q.22 Select the most appropriate option to fill in blank number 2.

- Ans
- 1. chases
 - 2. throws
 - 3. threw
 - 4. chased

Question ID : 264330152951

Option 1 ID : 264330599380

Option 2 ID : 264330599382

Option 3 ID : 264330599379

Option 4 ID : 264330599381

Status : Answered

Chosen Option : 1

Comprehension:

In the following passage, some words have been deleted. Read the passage carefully and select the most appropriate option to fill in the blanks.

Kasturi went to the garden looking for her mother. Her dog Rex was waiting (1)____ her. Kasturi picked up a stick and threw it. Rex (2)_____ the stick and brought it back. Kasturi ran (3)___ the house. Rex chased her. Kasturi ran through the garden and Rex (4)____ her. Mother yelled at both of them. She told them to stay (5)_____ of the garden and play somewhere else. Kasturi apologised to her mother. She went for a bike ride while Rex ran next to the bike.

SubQuestion No : 23

Q.23 Select the most appropriate option to fill in blank number 3.

- Ans 1. in
 2. around
 3. round
 4. about

Question ID : 264330152952

Option 1 ID : 264330599386

Option 2 ID : 264330599384

Option 3 ID : 264330599383

Option 4 ID : 264330599385

Status : Answered

Chosen Option : 2

Comprehension:

In the following passage, some words have been deleted. Read the passage carefully and select the most appropriate option to fill in the blanks.

Kasturi went to the garden looking for her mother. Her dog Rex was waiting (1)____ her. Kasturi picked up a stick and threw it. Rex (2)_____ the stick and brought it back. Kasturi ran (3)___ the house. Rex chased her. Kasturi ran through the garden and Rex (4)____ her. Mother yelled at both of them. She told them to stay (5)_____ of the garden and play somewhere else. Kasturi apologised to her mother. She went for a bike ride while Rex ran next to the bike.

SubQuestion No : 24

Q.24 Select the most appropriate option to fill in blank number 4.

- Ans 1. obey
 2. listen
 3. followed
 4. came

Question ID : 264330152953

Option 1 ID : 264330599390

Option 2 ID : 264330599387

Option 3 ID : 264330599388

Option 4 ID : 264330599389

Status : Answered

Chosen Option : 3

SSC MTS (Non Technical) EXAM STUDY KIT



FREE SHIPPING 

- ▶ 100% SSC MTS Exam Syllabus Covered
- ▶ PRINTED Notes
- ▶ 8 Books, 700+ Pages
- ▶ 2500+ MCQs
- ▶ Practice Papers
- ▶ 1 Year Current Affairs

50% OFF

 **SSCPORTAL.IN**
India's largest online community for SSC, CDS, Railways

SSC MTS PDF NOTES

100% Syllabus Covered



CLICK HERE

<https://sscpportal.in/study-kit/mts>

Comprehension:

In the following passage, some words have been deleted. Read the passage carefully and select the most appropriate option to fill in the blanks.

Kasturi went to the garden looking for her mother. Her dog Rex was waiting (1)____ her. Kasturi picked up a stick and threw it. Rex (2)_____ the stick and brought it back. Kasturi ran (3)___ the house. Rex chased her. Kasturi ran through the garden and Rex (4)____ her. Mother yelled at both of them. She told them to stay (5)_____ of the garden and play somewhere else. Kasturi apologised to her mother. She went for a bike ride while Rex ran next to the bike.

SubQuestion No : 25

Q.25 Select the most appropriate option to fill in blank number 5.

- Ans 1. of
 2. in
 3. from
 4. out

Question ID : 264330152954

Option 1 ID : 264330599394

Option 2 ID : 264330599392

Option 3 ID : 264330599393

Option 4 ID : 264330599391

Status : Answered

Chosen Option : 4