

## SSC MTS 2023 Tier 1 Sept 1 Shift 1 Question Paper with Answers

Roll Number	
Candidate Name	
Venue Name	iON Digital Zone iDZ Thondamuthur
Exam Date	01/09/2023
Exam Time	9:00 AM - 11:00 AM
Subject	MTS Non Tech Havaladar CBIC and CBN Examination 2023

### Section : Numerical and Mathematical Ability

**Q.1** If the first number is 20% less than the third number and the ratio of the second to the third number is 7 : 10, then the average of the first and the third number is how much per cent more than the second number?

- Ans**
- 1.  $26\frac{4}{7}$
  - 2.  $28\frac{2}{7}$
  - 3.  $28\frac{4}{7}$
  - 4.  $24\frac{2}{7}$

Question ID : 264330155958  
Option 1 ID : 264330611234  
Option 2 ID : 264330611232  
Option 3 ID : 264330611231  
Option 4 ID : 264330611233

Status : Answered

Chosen Option : 3

**Q.2** Geeta deposited a certain sum of money in her bank account which amounted to ₹27,783 in 3 years at 5% per annum, the interest being compounded annually. What amount did she deposit?

- Ans**
- 1. ₹25,500
  - 2. ₹25,000
  - 3. ₹26,000
  - 4. ₹24,000

Question ID : 264330154129  
Option 1 ID : 264330603980  
Option 2 ID : 264330603981  
Option 3 ID : 264330603979  
Option 4 ID : 264330603982

Status : Answered

Chosen Option : 4

**Q.3** A truck driver drove 60 km/h for three hours. Then he stopped for one hour and did not go anywhere. Then, he drove four more hours at 60 km/h. What was the driver's average speed (in km/h)?

- Ans**
- ✓ 1. 52.5
  - ✗ 2. 62.4
  - ✗ 3. 50.5
  - ✗ 4. 42.8

Question ID : 264330156099

Option 1 ID : 264330611796

Option 2 ID : 264330611798

Option 3 ID : 264330611795

Option 4 ID : 264330611797

Status : Answered

Chosen Option : 1

**Q.4** The following table indicates the number of candidates who appeared in an entrance examination from four different cities A, B, C, D and the ratio of passing and failing. Study the table carefully and answer the question.

City	No. of candidates appeared	Ratio of passing and failing
A	660	5 : 6
B	650	2 : 3
C	500	3 : 2
D	630	4 : 5

Which city has the highest number of candidates who failed in the entrance examination and find its rate of per cent in that city, respectively?

- Ans**
- ✗ 1. A, 50%
  - ✓ 2. B, 60%
  - ✗ 3. D, 60%
  - ✗ 4. C, 50%

Question ID : 264330156014

Option 1 ID : 264330611456

Option 2 ID : 264330611457

Option 3 ID : 264330611455

Option 4 ID : 264330611458

Status : Answered

Chosen Option : 2

**Q.5** Disha invested an amount of ₹20,000 for 9 years at a simple interest per annum and obtain the total amount of ₹33,500. What is the rate of interest?

- Ans**
- ✗ 1. 8%
  - ✗ 2. 8.5%
  - ✓ 3. 7.5%
  - ✗ 4. 9%

Question ID : 264330156188

Option 1 ID : 264330612154

Option 2 ID : 264330612153

Option 3 ID : 264330612152

Option 4 ID : 264330612151

Status : Answered

Chosen Option : 3

Q.6 Simplify:

$$(13 \div 13 \text{ of } 13 + 13) / (13 \div 13 \times 13 + 13)$$

- Ans
- 1.  $\frac{1}{26}$
  - 2.  $\frac{15}{26}$
  - 3.  $\frac{13}{96}$
  - 4.  $\frac{85}{169}$

Question ID : 264330156088  
Option 1 ID : 264330611751  
Option 2 ID : 264330611752  
Option 3 ID : 264330611754  
Option 4 ID : 264330611753  
Status : Answered  
Chosen Option : 4

Q.7 The cost price of an item is ₹4,350. What is the profit percentage (rounded off to 1 decimal place) if it is sold at ₹5,680?

- Ans
- 1. 28.5%
  - 2. 40.7%
  - 3. 36.8%
  - 4. 30.6%

Question ID : 264330156475  
Option 1 ID : 264330613290  
Option 2 ID : 264330613287  
Option 3 ID : 264330613288  
Option 4 ID : 264330613289  
Status : Answered  
Chosen Option : 4

Q.8 In a class of 37 students, there are 22 girls. The average weight of these girls is 46 kg and the average weight of the whole class is 50 kg. What is the average weight (in kg) of the boys in that class? (Rounded off to 2 decimal places)

- Ans
- 1. 60.74
  - 2. 55.87
  - 3. 61.35
  - 4. 58.25

Question ID : 264330155728  
Option 1 ID : 264330610317  
Option 2 ID : 264330610315  
Option 3 ID : 264330610318  
Option 4 ID : 264330610316  
Status : Answered  
Chosen Option : 2

**Q.9** A boat takes 20 hours for travelling downstream from point A to point B and comes back to a midpoint C between A and B. The speed of the stream is 5 km/h and the speed of the boat in still water is 10 km/h. Find the distance between A and B (in km).

- Ans
- 1. 100
  - 2. 120
  - 3. 150
  - 4. 75

Question ID : 264330153854  
Option 1 ID : 264330602880  
Option 2 ID : 264330602879  
Option 3 ID : 264330602881  
Option 4 ID : 264330602882  
Status : Answered  
Chosen Option : 2

**Q.10** Raju sold an article to Ravi at 10% gain. Ravi sold the article to Ramu at a loss of 10%. If Ramu paid ₹1,485 to Ravi, find the selling price of Raju to Ravi.

- Ans
- 1. ₹1,200
  - 2. ₹1,500
  - 3. ₹1,650
  - 4. ₹1,600

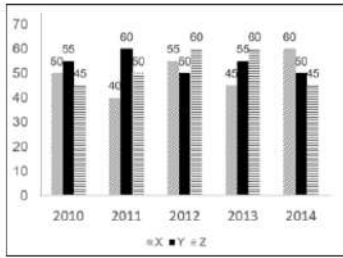
Question ID : 264330153840  
Option 1 ID : 264330602825  
Option 2 ID : 264330602823  
Option 3 ID : 264330602826  
Option 4 ID : 264330602824  
Status : Answered  
Chosen Option : 3

**Q.11** A and B can do a piece of work in 4 days, B and C can do the same work in 5 days, A and C can do it in 10 days. If A, B, C work together, in how many days can they complete the work?

- Ans
- 1.  $3\frac{11}{7}$
  - 2.  $11\frac{3}{7}$
  - 3.  $3\frac{7}{11}$
  - 4.  $11\frac{7}{3}$

Question ID : 264330156009  
Option 1 ID : 264330611437  
Option 2 ID : 264330611436  
Option 3 ID : 264330611438  
Option 4 ID : 264330611435  
Status : Answered  
Chosen Option : 3

**Q.12** The graph shows the production of tyres (in Lakhs) by three different companies X, Y, and Z over the years.  
Directions: Study the following graph carefully to answer the question given below it.



What is the difference between the average production per year of the company with the highest average production and that of the company with the lowest average production in Lakhs?

- Ans**
- 1. 2
  - 2. 6
  - 3. 8
  - 4. 4

Question ID : 264330153891  
 Option 1 ID : 264330603027  
 Option 2 ID : 264330603029  
 Option 3 ID : 264330603030  
 Option 4 ID : 264330603028  
 Status : Answered  
 Chosen Option : 4

**Q.13** What is the mean proportional of 9.61 and 3.61?

- Ans**
- 1. 3.17
  - 2. 5.89
  - 3. 4.87
  - 4. 6.78

Question ID : 264330154085  
 Option 1 ID : 264330603803  
 Option 2 ID : 264330603805  
 Option 3 ID : 264330603804  
 Option 4 ID : 264330603806  
 Status : Answered  
 Chosen Option : 2

**Q.14** Two numbers A and B are such that the sum of 6% of A and 4% of B is two-fifth of the sum of 7% of A and 11% of B, then the ratio A : B is:

- Ans**
- 1. 3 : 7
  - 2. 5 : 8
  - 3. 1 : 8
  - 4. 1 : 7

Question ID : 264330154088  
 Option 1 ID : 264330603816  
 Option 2 ID : 264330603818  
 Option 3 ID : 264330603817  
 Option 4 ID : 264330603815  
 Status : Answered  
 Chosen Option : 3

**Q.15** Two trains of length 110 m and 85 m are moving in the same direction at 12 m/s and 7 m/s, respectively. Find the time (in seconds) taken by the faster train to cross the slower train.

- Ans**  1. 39  
 2. 35  
 3. 19  
 4. 29

Question ID : 264330155753  
Option 1 ID : 264330610418  
Option 2 ID : 264330610417  
Option 3 ID : 264330610415  
Option 4 ID : 264330610416  
Status : Answered  
Chosen Option : 1

**Q.16** In what ratio must a grocer mix two varieties of rice costing ₹128 and ₹143 per kg, respectively, to get a mixture of rice worth ₹137.75 per kg?

- Ans**  1. 12:5  
 2. 7:13  
 3. 5:4  
 4. 6:7

Question ID : 264330153759  
Option 1 ID : 264330602499  
Option 2 ID : 264330602500  
Option 3 ID : 264330602501  
Option 4 ID : 264330602502  
Status : Answered  
Chosen Option : 2

**Q.17** Two persons take steps of 77 cm and 88 cm, respectively. If they start in step, then what is the minimum distance (in cm) they should cover so that both of them can cover the distance in complete steps?

- Ans**  1. 968  
 2. 828  
 3. 616  
 4. 560

Question ID : 264330156295  
Option 1 ID : 264330612581  
Option 2 ID : 264330612580  
Option 3 ID : 264330612582  
Option 4 ID : 264330612579  
Status : Answered  
Chosen Option : 3

Q.18 The surface area of a sphere is  $616 \text{ cm}^2$ , find its diameter.

Take  $\pi = \frac{22}{7}$

- Ans  1. 14 cm  
 2. 2 cm  
 3. 4 cm  
 4. 3 cm

Question ID : 264330156369  
Option 1 ID : 264330612875  
Option 2 ID : 264330612876  
Option 3 ID : 264330612878  
Option 4 ID : 264330612877  
Status : Answered  
Chosen Option : 1

Q.19 The diameter of a metallic sphere is 6 cm. It is melted and drawn into a wire having a diameter of the cross section as 0.4 cm. Find the length of the wire (in metres).

- Ans  1. 18  
 2. 9  
 3. 12  
 4. 10

Question ID : 264330153866  
Option 1 ID : 264330602930  
Option 2 ID : 264330602929  
Option 3 ID : 264330602928  
Option 4 ID : 264330602927  
Status : Answered  
Chosen Option : 2

Q.20 A, B and C can do a piece of work in 10, 15, 12 days, respectively. A and B worked alternately for 5 days each and left. Then C joined and completed the work. In how many days did C complete the remaining work?

- Ans  1. 3  
 2. 1  
 3. 4  
 4. 2

Question ID : 264330153856  
Option 1 ID : 264330602888  
Option 2 ID : 264330602890  
Option 3 ID : 264330602887  
Option 4 ID : 264330602889  
Status : Answered  
Chosen Option : 4

Section : Reasoning Ability and Problem Solving

**Q.1** 287 is related to 398 following a certain logic. Following the same logic, 378 is related to 489. To which of the following is 852 related to, following the same logic?

- Ans**
- 1. 643
  - 2. 963
  - 3. 346
  - 4. 543

Question ID : 264330151602  
Option 1 ID : 264330594036  
Option 2 ID : 264330594035  
Option 3 ID : 264330594038  
Option 4 ID : 264330594037  
Status : Answered  
Chosen Option : 2

**Q.2** If 'A' stands for '+', 'B' stands for '×', 'C' stands for '÷' and 'D' stands for '-', what will come in place of the question mark (?) in the following equation?  
(87 A 29) B 14 D 24 C 14 C 6 B 5 = ?

- Ans**
- 1. 68
  - 2. 74
  - 3. 62
  - 4. 56

Question ID : 264330151805  
Option 1 ID : 264330594848  
Option 2 ID : 264330594850  
Option 3 ID : 264330594849  
Option 4 ID : 264330594847  
Status : Answered  
Chosen Option : 3

**Q.3** What should come in place of '?' in the given series?

9 15 33 87 ? 735 2193

- Ans**
- 1. 241
  - 2. 249
  - 3. 237
  - 4. 225

Question ID : 264330151483  
Option 1 ID : 264330593561  
Option 2 ID : 264330593562  
Option 3 ID : 264330593560  
Option 4 ID : 264330593559  
Status : Answered  
Chosen Option : 2



Q.4 What should come in place of ? in the given series based on the English alphabetical order?

CNT, FQU, ITV, LWW, ?

- Ans
- 1. OZX
  - 2. NYY
  - 3. MXZ
  - 4. LYX

Question ID : 264330155786  
Option 1 ID : 264330610550  
Option 2 ID : 264330610549  
Option 3 ID : 264330610548  
Option 4 ID : 264330610547  
Status : Answered  
Chosen Option : 1

Q.5 38 is related to 49 following a certain logic. Following the same logic, 64 is related to 75. To which of the following is 83 related to, following the same logic?

- Ans
- 1. 93
  - 2. 95
  - 3. 92
  - 4. 94

Question ID : 264330151593  
Option 1 ID : 264330594000  
Option 2 ID : 264330594002  
Option 3 ID : 264330593999  
Option 4 ID : 264330594001  
Status : Answered  
Chosen Option : 4

Q.6 What should come in place of '?' in the given series?

3 9 45 261 1557 ?

- Ans
- 1. 9555
  - 2. 8572
  - 3. 9433
  - 4. 9333

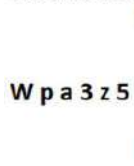
Question ID : 264330151451  
Option 1 ID : 264330593434  
Option 2 ID : 264330593431  
Option 3 ID : 264330593433  
Option 4 ID : 264330593432  
Status : Answered  
Chosen Option : 4

Q.7 What will come in the place of '?' in the following equation, if '+' and '-' are interchanged and 'x' and '/' are interchanged?  
 $32 - 512 \times 64 + 8 + 64 = ?$

- Ans
- 1. 42
  - 2. 22
  - 3. 32
  - 4. 52

Question ID : 264330155677  
 Option 1 ID : 264330610113  
 Option 2 ID : 264330610111  
 Option 3 ID : 264330610112  
 Option 4 ID : 264330610114  
 Status : Answered  
 Chosen Option : 3

Q.8 Select the correct mirror image of the given figure when the mirror is placed at MN as shown below.



- Ans
- 1. 5z3 ap W
  - 2. z5ε ap M
  - 3. 2zz eb M
  - 4. 2zε ap W

Question ID : 264330151510  
 Option 1 ID : 264330593667  
 Option 2 ID : 264330593670  
 Option 3 ID : 264330593668  
 Option 4 ID : 264330593669  
 Status : Answered  
 Chosen Option : 4

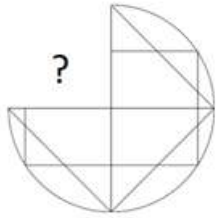
Q.9 What should come in place of '?' in the given series?

16 65 261 1045 4181 ?

- Ans
- 1. 16945
  - 2. 16273
  - 3. 16725
  - 4. 16892

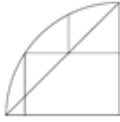
Question ID : 264330151475  
 Option 1 ID : 264330593530  
 Option 2 ID : 264330593527  
 Option 3 ID : 264330593528  
 Option 4 ID : 264330593529  
 Status : Answered  
 Chosen Option : 3

Q.10 Identify the figure that completes the pattern (rotation is NOT allowed).



Ans

✗ 1.



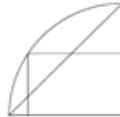
✗ 2.



✗ 3.



✓ 4.



Question ID : 264330154514

Option 1 ID : 264330605521

Option 2 ID : 264330605520

Option 3 ID : 264330605519

Option 4 ID : 264330605522

Status : Answered

Chosen Option : 4

Q.11 Select the word-pair that best represents a similar relationship to the one expressed in the pair of words given below.

(The words must be considered as meaningful English words and must not be related to each other based on the number of letters/number of consonants/vowels in the word)

Reflection : Light

Ans

✗ 1. Sentiment : Feeling

✓ 2. Echo : Sound

✗ 3. Iris : Sight

✗ 4. Movie : Scene

Question ID : 264330154638

Option 1 ID : 264330606017

Option 2 ID : 264330606016

Option 3 ID : 264330606018

Option 4 ID : 264330606015

Status : Answered

Chosen Option : 2

**Q.12** Read the given statements and conclusions carefully. You have to take the given statements to be true even if they seem to be at variance from commonly known facts. You have to decide which conclusion/s logically follow/s from the given statements.

Statements: All rags are carpets. Some carpets are steel. Some steel are bottles.

Conclusion I: All carpets are rags.

Conclusion II: Some carpets are bottles.

- Ans**
- 1. Only conclusion (I) is follow.
  - 2. Both conclusions (I) and (II) are follow.
  - 3. Only conclusion (II) is follow.
  - 4. Neither conclusion (I) nor (II) is follow.

Question ID : 264330155925  
Option 1 ID : 264330611103  
Option 2 ID : 264330611106  
Option 3 ID : 264330611104  
Option 4 ID : 264330611105  
Status : Answered  
Chosen Option : 4

**Q.13** Find out the correct alternative that when filled in the blanks in the same sequence will make the series logically complete.

X \_AL ZH \_L \_KAL DNA\_ \_QAL

- Ans**
- 1. FBPSB
  - 2. FABLE
  - 3. EABLF
  - 4. EBFLA

Question ID : 264330154726  
Option 1 ID : 264330606370  
Option 2 ID : 264330606368  
Option 3 ID : 264330606369  
Option 4 ID : 264330606367  
Status : Answered  
Chosen Option : 3

**Q.14** The position of how many letters will remain unchanged if each of the letter in the word 'FINGER' is arranged in alphabetical order?

- Ans**
- 1. Two
  - 2. One
  - 3. Three
  - 4. Four

Question ID : 264330154326  
Option 1 ID : 264330604769  
Option 2 ID : 264330604770  
Option 3 ID : 264330604768  
Option 4 ID : 264330604767  
Status : Answered  
Chosen Option : 2

**Q.15** In a certain code language, 'BLUE' is coded as '1542' and 'ABLE' is coded as '1745'. What is the code for 'A' in the given code language?

- Ans**
- 1. 7
  - 2. 1
  - 3. 4
  - 4. 5

Question ID : 264330151690

Option 1 ID : 264330594390

Option 2 ID : 264330594387

Option 3 ID : 264330594389

Option 4 ID : 264330594388

Status : Answered

Chosen Option : 1

**Q.16** Read the given statement(s) and conclusions carefully. Assuming that the information given in the statements is true, even if it appears to be at variance with commonly known facts, decide which of the given conclusions logically follow(s) from the statement(s).

Statements: All chocolates are sweets. Some sweets are harmful.

Conclusions:

- (I) All Chocolates are harmful.
- (II) Some harmful are chocolates.

- Ans**
- 1. Neither conclusion (I) nor (II) is follows.
  - 2. Both conclusions (I) and (II) are follows.
  - 3. Only conclusion (II) is follows.
  - 4. Only conclusion (I) is follows.

Question ID : 264330154433

Option 1 ID : 264330605197

Option 2 ID : 264330605198

Option 3 ID : 264330605196

Option 4 ID : 264330605195

Status : Answered

Chosen Option : 1



**Q.19** Six people, P, Q, R, S, T and U are sitting in a straight line, facing north. U sits fourth to the right of R. R is not sitting at the extreme end of the line. T is the immediate neighbour of U and S. Q sits third to the left of S.

Who is sitting immediately to the right of R?

- Ans**
- 1. S
  - 2. T
  - 3. Q
  - 4. P

Question ID : 264330155549  
Option 1 ID : 264330609601  
Option 2 ID : 264330609602  
Option 3 ID : 264330609599  
Option 4 ID : 264330609600  
Status : Answered  
Chosen Option : 4

**Q.20** Select the combination of letters that when sequentially placed in the blanks of the given series, will complete the series.

P \_ \_ P O \_ P \_ P \_ O P

- Ans**
- 1. POPPO
  - 2. POOOP
  - 3. OOOPP
  - 4. OPPOP

Question ID : 264330151650  
Option 1 ID : 264330594227  
Option 2 ID : 264330594229  
Option 3 ID : 264330594230  
Option 4 ID : 264330594228  
Status : Answered  
Chosen Option : 4

Section : General Awareness

**Q.1** FIFA U-17 Women's World Cup 2022 matches were NOT held in which state?

- Ans**
- 1. Maharashtra
  - 2. Odisha
  - 3. Goa
  - 4. Gujarat

Question ID : 264330158223  
Option 1 ID : 264330620251  
Option 2 ID : 264330620254  
Option 3 ID : 264330620252  
Option 4 ID : 264330620253  
Status : Not Answered  
Chosen Option : --

Q.2 Who among the following is one of the co-authors of the book, 'Cracking The Code:My Journey in Bollywood'?

- Ans
- 1. Harshvardhan Kapoor
  - 2. Nawazuddin Siddique
  - 3. Ayushmann Khurrana
  - 4. Rajkumar Rao

Question ID : 264330161906  
Option 1 ID : 264330634954  
Option 2 ID : 264330634951  
Option 3 ID : 264330634953  
Option 4 ID : 264330634952  
Status : Not Answered  
Chosen Option : --

Q.3 In 1873, who published the first photograph of nerve tissue stained with the black reaction technique, describing a whole nerve cell?

- Ans
- 1. Gunter Blobel
  - 2. Camillo Golgi
  - 3. William Harvey
  - 4. Paul Ehrlich

Question ID : 264330161088  
Option 1 ID : 264330631686  
Option 2 ID : 264330631685  
Option 3 ID : 264330631683  
Option 4 ID : 264330631684  
Status : Not Answered  
Chosen Option : --

Q.4 In October 2022, Virat Kohli became the first Indian to complete how many runs in T20 cricket history?

- Ans
- 1. 11000
  - 2. 9000
  - 3. 5000
  - 4. 15000

Question ID : 264330158362  
Option 1 ID : 264330620809  
Option 2 ID : 264330620808  
Option 3 ID : 264330620807  
Option 4 ID : 264330620810  
Status : Not Answered  
Chosen Option : --



Q.5 According to Sikh literature, the birth anniversary of Guru Nanak Dev is celebrated on the full moon day of the Indian lunar month \_\_\_\_\_.

- Ans
- 1. Magh
  - 2. Paush
  - 3. Ashada
  - 4. Kartik

Question ID : 264330160833  
Option 1 ID : 264330630666  
Option 2 ID : 264330630664  
Option 3 ID : 264330630663  
Option 4 ID : 264330630665  
Status : Not Answered  
Chosen Option : --

Q.6 Yakshagana is a folk dance that belongs to the state of \_\_\_\_\_.

- Ans
- 1. Kerala
  - 2. Karnataka
  - 3. Haryana
  - 4. Rajasthan

Question ID : 264330159057  
Option 1 ID : 264330623587  
Option 2 ID : 264330623588  
Option 3 ID : 264330623589  
Option 4 ID : 264330623590  
Status : Answered  
Chosen Option : 2

Q.7 The brick temple of Bhitargaon is situated in which state?

- Ans
- 1. Odisha
  - 2. Jharkhand
  - 3. Uttar Pradesh
  - 4. Madhya Pradesh

Question ID : 264330160781  
Option 1 ID : 264330630456  
Option 2 ID : 264330630455  
Option 3 ID : 264330630458  
Option 4 ID : 264330630457  
Status : Not Answered  
Chosen Option : --

Q.8 Which of the following movements was founded in Bengal?

- Ans
- 1. Ramakrishna Mission
  - 2. Arya Samaj
  - 3. Satyashodhak Samaj
  - 4. Prarthana Samaj

Question ID : 264330160891  
Option 1 ID : 264330630896  
Option 2 ID : 264330630895  
Option 3 ID : 264330630898  
Option 4 ID : 264330630897  
Status : Answered  
Chosen Option : 1

Q.9 On 15 August 1947, the first prime minister of India, Jawaharlal Nehru, raised the Indian National Flag above the \_\_\_\_\_ of Red Fort in Delhi.

- Ans
- 1. Delhi Gate
  - 2. Kashmiri Gate
  - 3. Ajmeri Gate
  - 4. Lahori Gate

Question ID : 264330161347  
Option 1 ID : 264330632717  
Option 2 ID : 264330632715  
Option 3 ID : 264330632718  
Option 4 ID : 264330632716  
Status : Answered  
Chosen Option : 1

Q.10 'Mandarin' is the official language of which neighbouring country of India?

- Ans
- 1. Afghanistan
  - 2. Bhutan
  - 3. Sri Lanka
  - 4. China

Question ID : 264330161563  
Option 1 ID : 264330633579  
Option 2 ID : 264330633581  
Option 3 ID : 264330633580  
Option 4 ID : 264330633582  
Status : Answered  
Chosen Option : 4

Q.11 Which of the following is used to measure the total output of goods and services in an economy including depreciation during a specific period within country?

- Ans
- 1. Net Domestic Product (NDP)
  - 2. Gross National Product (GNP)
  - 3. Net National Product (NNP)
  - 4. Gross Domestic Product (GDP)

Question ID : 264330157311  
Option 1 ID : 264330616610  
Option 2 ID : 264330616608  
Option 3 ID : 264330616609  
Option 4 ID : 264330616607  
Status : Answered  
Chosen Option : 1

Q.12 Which of the following is NOT related to the sport of swimming?

- Ans
- 1. Breaststroke
  - 2. Back stroke
  - 3. Freestyle
  - 4. Penalty Corner

Question ID : 264330158244  
Option 1 ID : 264330620337  
Option 2 ID : 264330620336  
Option 3 ID : 264330620335  
Option 4 ID : 264330620338  
Status : Answered  
Chosen Option : 4

Q.13 The East-West corridor, which is a part of the Golden Quadrilateral super highways, links which two cities of India from the following?

- Ans
- 1. Ahmadnagar and Imphal
  - 2. Silchar and Porbander
  - 3. Jaipur and Gangtok
  - 4. Gandhi Nagar and Silchar

Question ID : 264330161490  
Option 1 ID : 264330633290  
Option 2 ID : 264330633289  
Option 3 ID : 264330633288  
Option 4 ID : 264330633287  
Status : Answered  
Chosen Option : 2

Q.14 What is the name of the seventh most abundant metal in the earth's crust, which is derived from the medieval Latin word 'Kalium'?

- Ans
- 1. Aluminium
  - 2. Magnesium
  - 3. Calcium
  - 4. Potassium

Question ID : 264330161060  
Option 1 ID : 264330631574  
Option 2 ID : 264330631571  
Option 3 ID : 264330631573  
Option 4 ID : 264330631572  
Status : Answered  
Chosen Option : 4

Q.15 What is the aim of Article 44 of the Indian Constitution?

- Ans
- 1. To protect every monument or place of artistic or historic interest
  - 2. To separate judiciary from the executive in the public services of the State
  - 3. To protect and improve the environment and safeguard the forests and wildlife of the country
  - 4. To secure for the citizen, a uniform civil code through the territory of India

Question ID : 264330162253  
Option 1 ID : 264330636341  
Option 2 ID : 264330636342  
Option 3 ID : 264330636340  
Option 4 ID : 264330636339  
Status : Answered  
Chosen Option : 4

Q.16 Which of the following novels of Kamleshwar was awarded the Sahitya Akademi Award in 2003?

- Ans
- 1. Jalti Hui Nadi
  - 2. Kaali Aandhi
  - 3. Kitne Pakistan
  - 4. Ek Sadak Sattavan Galiyan

Question ID : 264330161762  
Option 1 ID : 264330634377  
Option 2 ID : 264330634378  
Option 3 ID : 264330634376  
Option 4 ID : 264330634375  
Status : Not Answered  
Chosen Option : --

Q.17 Which of the following institutes was founded by MG Ranade and GV Joshi?

- Ans
- 1. Abhinav Bharat
  - 2. The Indian National Congress
  - 3. The Bombay Presidency Association
  - 4. Poona Sarvajanik Sabha

Question ID : 264330160883  
Option 1 ID : 264330630866  
Option 2 ID : 264330630865  
Option 3 ID : 264330630863  
Option 4 ID : 264330630864  
Status : Answered  
Chosen Option : 1

Q.18 Roshan Kumari, Shovana Narayan, Maya Rao and Kumudini Lakhia are eminent \_\_\_\_\_ artists.

- Ans
- 1. Odissi
  - 2. Kuchipudi
  - 3. Kathak
  - 4. Manipuri

Question ID : 264330160812  
Option 1 ID : 264330630580  
Option 2 ID : 264330630581  
Option 3 ID : 264330630579  
Option 4 ID : 264330630582  
Status : Answered  
Chosen Option : 3

Q.19 Rani Machaiah is a \_\_\_\_\_ folk dancer who was awarded Padma Shri in 2023.

- Ans
- 1. Ummathat
  - 2. Lambadi
  - 3. Gussadi
  - 4. Dhimsa

Question ID : 264330155487  
Option 1 ID : 264330609352  
Option 2 ID : 264330609354  
Option 3 ID : 264330609351  
Option 4 ID : 264330609353  
Status : Not Answered

**Q.20** What is the difference between a debit card and a credit card?

- Ans**  1. Debit cards are used for online transactions, while credit cards are used for in-person purchases.
2. Credit cards require a PIN, while debit cards require a signature.
3. Debit cards withdraw money directly from a bank account, while credit cards allow borrowing up to a certain limit.
4. Debit cards have higher interest rates than credit cards.

Question ID : 264330157309  
Option 1 ID : 264330616599  
Option 2 ID : 264330616602  
Option 3 ID : 264330616600  
Option 4 ID : 264330616601  
Status : Answered  
Chosen Option : 3

**Q.21** The Constitution (Scheduled Tribes) Order (Second Amendment) Bill, 2022 has included Narikoravan and Kurivikkaran communities in the list of Scheduled Tribes of which state?

- Ans**  1. Bihar
2. Tamil Nadu
3. Chhattisgarh
4. Odisha

Question ID : 264330158333  
Option 1 ID : 264330620691  
Option 2 ID : 264330620694  
Option 3 ID : 264330620693  
Option 4 ID : 264330620692  
Status : Answered  
Chosen Option : 2

**Q.22** Which group of musicians were awarded by 'Bharat Ratna' from the following? (As of May 2023.)

- Ans**  1. Anu Malik and Udit Narayan
2. Pandit Ravi Shankar and Pandit Bhimsen Joshi
3. Asha Bhosle and Kishore Kumar
4. AR Rahman and Hariprasad Chaurasia

Question ID : 264330155511  
Option 1 ID : 264330609449  
Option 2 ID : 264330609447  
Option 3 ID : 264330609450  
Option 4 ID : 264330609448  
Status : Answered  
Chosen Option : 2

Q.23 Which river is also known as Tsangpo?

- Ans
- 1. Ganga river
  - 2. Gandak river
  - 3. Kaveri river
  - 4. Brahmaputra river

Question ID : 264330160151  
Option 1 ID : 264330627943  
Option 2 ID : 264330627946  
Option 3 ID : 264330627945  
Option 4 ID : 264330627944  
Status : Answered  
Chosen Option : 4

Q.24 What is the destination of the water drained off by the Nile river?

- Ans
- 1. Lake Victoria
  - 2. Indian Ocean
  - 3. Mediterranean Sea
  - 4. Lake Tanganyika

Question ID : 264330161329  
Option 1 ID : 264330632646  
Option 2 ID : 264330632643  
Option 3 ID : 264330632644  
Option 4 ID : 264330632645  
Status : Answered  
Chosen Option : 3

Q.25 Article 149 of the Constitution deals with \_\_\_\_\_.

- Ans
- 1. the qualifications required for the appointment of the Comptroller and Auditor-General of India
  - 2. the duties and powers of the Comptroller and Auditor-General of India
  - 3. the term of office of the Comptroller and Auditor-General of India
  - 4. the appointment of the Comptroller and Auditor-General of India

Question ID : 264330161287  
Option 1 ID : 264330632477  
Option 2 ID : 264330632475  
Option 3 ID : 264330632478  
Option 4 ID : 264330632476  
Status : Answered  
Chosen Option : 4

Section : English Language and Comprehension

Q.1 Select the most appropriate ANTONYM of the given word.  
Feud

- Ans  1. Gross  
 2. Peril  
 3. Harmony  
 4. Vigour

Question ID : 264330152677  
Option 1 ID : 264330598312  
Option 2 ID : 264330598314  
Option 3 ID : 264330598313  
Option 4 ID : 264330598311  
Status : Answered  
Chosen Option : 4

Q.2 Parts of the following sentence have been given as options. Select the option that contains an error.

All these things happen/ because she do not / pay heed to my words.

- Ans  1. pay heed to my words  
 2. All these things happen  
 3. No error  
 4. because she do not

Question ID : 264330155379  
Option 1 ID : 264330608933  
Option 2 ID : 264330608931  
Option 3 ID : 264330608934  
Option 4 ID : 264330608932  
Status : Not Answered  
Chosen Option : --

Q.3 Select the most appropriate option that can substitute the underlined segment in the given sentence.

Professor said that I will be late for the lecture.

- Ans  1. he shall be late for the lecture  
 2. he is late for the lecture  
 3. he would be late for the lecture  
 4. he may be late for the lecture

Question ID : 264330152712  
Option 1 ID : 264330598448  
Option 2 ID : 264330598449  
Option 3 ID : 264330598447  
Option 4 ID : 264330598450  
Status : Answered  
Chosen Option : 3

Q.4 Select the INCORRECTLY spelt word.

- Ans  1. Separate  
 2. Accommodate  
 3. Definitely  
 4. Embarass

Question ID : 264330152644  
Option 1 ID : 264330598182  
Option 2 ID : 264330598179  
Option 3 ID : 264330598180  
Option 4 ID : 264330598181  
Status : Answered  
Chosen Option : 1

Q.5 Select the most appropriate meaning of the given idiom.  
Sell like hot cakes

- Ans  1. Quick sell out  
 2. Selling cakes  
 3. Being ignored  
 4. Eating hot cake

Question ID : 264330152725  
Option 1 ID : 264330598500  
Option 2 ID : 264330598501  
Option 3 ID : 264330598499  
Option 4 ID : 264330598502  
Status : Answered  
Chosen Option : 1

Q.6 Select the most appropriate option that can substitute the underlined segment in the given sentence.

Andrew will playing basketball at the college tournament.

- Ans  1. are play the  
 2. are play  
 3. is playing  
 4. is played

Question ID : 264330153473  
Option 1 ID : 264330601408  
Option 2 ID : 264330601407  
Option 3 ID : 264330601409  
Option 4 ID : 264330601410  
Status : Answered  
Chosen Option : 3



**Q.7** Select the most appropriate word to fill in the blank.  
Hardik Pandya hit four \_\_\_\_\_ fours and scored 72 runs in the match.

- Ans  1. continuous  
 2. consecutive  
 3. ongoing  
 4. constant

Question ID : 264330153507  
Option 1 ID : 264330601540  
Option 2 ID : 264330601539  
Option 3 ID : 264330601542  
Option 4 ID : 264330601541  
Status : Answered  
Chosen Option : 2

**Q.8** Select the sentence that has NO spelling errors.

- Ans  1. The doctor presribed some medicine to alleviate my parsistent cough, which has been boathering me for days.  
 2. The doctor precribed some medicine to aleviate my persistent cough, which has been bothering me for days.  
 3. The doctor prescribed some medicine to aleviate my parsistent cough, which has been boathering me for days.  
 4. The doctor prescribed some medicine to alleviate my persistent cough, which has been bothering me for days.

Question ID : 264330152649  
Option 1 ID : 264330598201  
Option 2 ID : 264330598200  
Option 3 ID : 264330598202  
Option 4 ID : 264330598199  
Status : Answered  
Chosen Option : 4

**Q.9** Select the most appropriate synonym of the bracketed word in the following sentence to fill in the blank.  
The athlete's perseverance and mental toughness \_\_\_\_\_ (facilitate) her to overcome adversity and achieve her goals.

- Ans  1. restricted  
 2. enabled  
 3. limited  
 4. hindered

Question ID : 264330152653  
Option 1 ID : 264330598216  
Option 2 ID : 264330598218  
Option 3 ID : 264330598215  
Option 4 ID : 264330598217  
Status : Answered  
Chosen Option : 2

Q.10 The following sentence has been split into four segments. Identify the segment that contains a grammatical error.

Throughout my career as a journalist, / I covered many important stories and / interviewed numerous individuals, which allow me / to share important information and insights with my readers.

- Ans
- 1. to share important information and insights with my readers
  - 2. I covered many important stories and
  - 3. Throughout my career as a journalist,
  - 4. interviewed numerous individuals, which allow me

Question ID : 264330144182

Option 1 ID : 264330564994

Option 2 ID : 264330564992

Option 3 ID : 264330564991

Option 4 ID : 264330564993

Status : Answered

Chosen Option : 4

Q.11 The following sentence has been split into four segments. Identify the segment that contains a grammatical error.

Harish says / that his sister / loves to play / harmonium.

- Ans
- 1. harmonium
  - 2. loves to play
  - 3. Harish says
  - 4. that his sister

Question ID : 264330153165

Option 1 ID : 264330600222

Option 2 ID : 264330600221

Option 3 ID : 264330600219

Option 4 ID : 264330600220

Status : Answered

Chosen Option : 1

Q.12 Select the most appropriate option that can substitute the underlined segment in the following sentence.

Selling, purchasing, and using an illegally copied product is a criminal offence.

- Ans
- 1. an obsolete
  - 2. a pirated
  - 3. an outlawed
  - 4. a crooked

Question ID : 264330152633

Option 1 ID : 264330598135

Option 2 ID : 264330598136

Option 3 ID : 264330598137

Option 4 ID : 264330598138

Status : Answered

Chosen Option : 2

**Q.13** Select the most appropriate option to fill in the blank.  
The hiring manager has already offered you the job; now, \_\_\_\_\_ to accept or decline the offer.

- Ans
- 1. a penny for your thoughts
  - 2. the ball is in your court
  - 3. pull your leg
  - 4. get your act together

Question ID : 264330151891  
Option 1 ID : 264330595184  
Option 2 ID : 264330595183  
Option 3 ID : 264330595185  
Option 4 ID : 264330595186  
Status : Answered  
Chosen Option : 2

**Q.14** Select the most appropriate option to fill in the blank.  
Oberon doesn't like the way Demetrius \_\_\_\_\_ to Helena. (Credit: A Midsummer Night's Dream)

- Ans
- 1. talked
  - 2. talks
  - 3. talking
  - 4. to talk

Question ID : 264330153511  
Option 1 ID : 264330601555  
Option 2 ID : 264330601556  
Option 3 ID : 264330601557  
Option 4 ID : 264330601558  
Status : Answered  
Chosen Option : 2

**Q.15** Select the most appropriate meaning of the given idiom.  
Let sleeping dogs lie

- Ans
- 1. To let somebody sleep
  - 2. To fall sick intentionally
  - 3. Leave an existing situation as it is
  - 4. To care for the pet

Question ID : 264330156172  
Option 1 ID : 264330612088  
Option 2 ID : 264330612089  
Option 3 ID : 264330612090  
Option 4 ID : 264330612087  
Status : Answered  
Chosen Option : 3

Q.16 Select the option that can be used as a one-word substitute for the given group of words.

A cage made for birds.

OR

A place for keeping the birds in a confined space.

- Ans
- 1. Aquarium
  - 2. Apiary
  - 3. Aviary
  - 4. Arena

Question ID : 264330153553

Option 1 ID : 264330601713

Option 2 ID : 264330601711

Option 3 ID : 264330601714

Option 4 ID : 264330601712

Status : Answered

Chosen Option : 3

Q.17 Select the most appropriate synonym of the given word.

Repulsive

- Ans
- 1. Attractive
  - 2. Reliable
  - 3. Disgusting
  - 4. Uniform

Question ID : 264330151922

Option 1 ID : 264330595303

Option 2 ID : 264330595305

Option 3 ID : 264330595304

Option 4 ID : 264330595306

Status : Answered

Chosen Option : 3

Q.18 Select the option that rectifies the spelling of the underlined word in the given sentence.

The sergent brought in a lot of changes as soon as he was given charge.

- Ans
- 1. seargeant
  - 2. sergeannt
  - 3. sergant
  - 4. sergeant

Question ID : 264330153156

Option 1 ID : 264330600185

Option 2 ID : 264330600184

Option 3 ID : 264330600183

Option 4 ID : 264330600186

Status : Answered

Chosen Option : 3

**Q.19** The given sentence contains an error. Select the option that correctly rectifies the error.

The boy told his mother that he saw the most tall giraffe at the zoo.

- Ans
- 1. The boy told his mother that he saw the tallest giraffe at the zoo.
  - 2. The boy told his mother that he saw the most taller giraffe at the zoo.
  - 3. The boy told his mother that he saw the most tallest giraffe at the zoo.
  - 4. The boy told his mother that he saw the more taller giraffe at the zoo.

Question ID : 264330152606  
Option 1 ID : 264330598030  
Option 2 ID : 264330598028  
Option 3 ID : 264330598029  
Option 4 ID : 264330598027  
Status : Answered  
Chosen Option : 1

**Q.20** Select the most appropriate meaning of the given idiom.

Call the shots

- Ans
- 1. To be a follower that makes less important decision
  - 2. To be in a position to make decisions that influences a situation
  - 3. To be in a powerless position that follows orders
  - 4. To be in a neutral position

Question ID : 264330153073  
Option 1 ID : 264330599857  
Option 2 ID : 264330599856  
Option 3 ID : 264330599858  
Option 4 ID : 264330599855  
Status : Answered  
Chosen Option : 2

**Comprehension:**

In the following passage, some words have been deleted. Fill in the blanks with the help of the alternatives given. Select the most appropriate option for each blank.  
That evening we sat in the courtyard of the hotel once more, (1) \_\_\_\_\_ the sun sink below the western isles. I told Alexi what had happened that day. I (2) \_\_\_\_\_ I could glimpse the grey stone wall of Lismore House (3) \_\_\_\_\_ its island hilltop, the red light of the setting sun glinting from the windows, and from there the wasted frame of Jonathan Blake gazing out across the sea, on nothing, his boy waiting for him to die. But it was my (4) \_\_\_\_\_, simply the image on my mind, like the image burned on to your eyes when you have (5) \_\_\_\_\_ too long at the sun, the passing footprint of a creature long gone.

**SubQuestion No : 21**

**Q.21** Select the most appropriate option to fill in blank no. 1.

- Ans
- 1. watching
  - 2. wallowing
  - 3. risking
  - 4. practising

Question ID : 264330153445  
Option 1 ID : 264330601299  
Option 2 ID : 264330601302  
Option 3 ID : 264330601301  
Option 4 ID : 264330601300  
Status : Answered  
Chosen Option : 1

**Comprehension:**

In the following passage, some words have been deleted. Fill in the blanks with the help of the alternatives given. Select the most appropriate option for each blank.  
That evening we sat in the courtyard of the hotel once more, (1) \_\_\_\_\_ the sun sink below the western isles. I told Alexi what had happened that day. I (2) \_\_\_\_\_ I could glimpse the grey stone wall of Lismore House (3) \_\_\_\_\_ its island hilltop, the red light of the setting sun glinting from the windows, and from there the wasted frame of Jonathan Blake gazing out across the sea, on nothing, his boy waiting for him to die. But it was my (4) \_\_\_\_\_, simply the image on my mind, like the image burned on to your eyes when you have (5) \_\_\_\_\_ too long at the sun, the passing footprint of a creature long gone.

**SubQuestion No : 22**

**Q.22** Select the most appropriate option to fill in blank no. 2.

- Ans  1. fancied  
 2. groped  
 3. imbibed  
 4. translated

Question ID : 264330153446

Option 1 ID : 264330601305

Option 2 ID : 264330601306

Option 3 ID : 264330601303

Option 4 ID : 264330601304

Status : Answered

Chosen Option : 1

**Comprehension:**

In the following passage, some words have been deleted. Fill in the blanks with the help of the alternatives given. Select the most appropriate option for each blank.  
That evening we sat in the courtyard of the hotel once more, (1) \_\_\_\_\_ the sun sink below the western isles. I told Alexi what had happened that day. I (2) \_\_\_\_\_ I could glimpse the grey stone wall of Lismore House (3) \_\_\_\_\_ its island hilltop, the red light of the setting sun glinting from the windows, and from there the wasted frame of Jonathan Blake gazing out across the sea, on nothing, his boy waiting for him to die. But it was my (4) \_\_\_\_\_, simply the image on my mind, like the image burned on to your eyes when you have (5) \_\_\_\_\_ too long at the sun, the passing footprint of a creature long gone.

**SubQuestion No : 23**

**Q.23** Select the most appropriate option to fill in blank no. 3.

- Ans  1. off  
 2. on  
 3. aside  
 4. for

Question ID : 264330153447

Option 1 ID : 264330601307

Option 2 ID : 264330601308

Option 3 ID : 264330601309

Option 4 ID : 264330601310

Status : Answered

Chosen Option : 2

**Comprehension:**

In the following passage, some words have been deleted. Fill in the blanks with the help of the alternatives given. Select the most appropriate option for each blank.  
That evening we sat in the courtyard of the hotel once more, (1) \_\_\_\_\_ the sun sink below the western isles. I told Alexi what had happened that day. I (2) \_\_\_\_\_ I could glimpse the grey stone wall of Lismore House (3) \_\_\_\_\_ its island hilltop, the red light of the setting sun glinting from the windows, and from there the wasted frame of Jonathan Blake gazing out across the sea, on nothing, his boy waiting for him to die. But it was my (4) \_\_\_\_\_, simply the image on my mind, like the image burned on to your eyes when you have (5) \_\_\_\_\_ too long at the sun, the passing footprint of a creature long gone.

**SubQuestion No : 24**

**Q.24** Select the most appropriate option to fill in blank no. 4.

- Ans
- 1. dribble
  - 2. straw
  - 3. fantasy
  - 4. habitat

Question ID : 264330153448

Option 1 ID : 264330601312

Option 2 ID : 264330601311

Option 3 ID : 264330601313

Option 4 ID : 264330601314

Status : Answered

Chosen Option : 3

**Comprehension:**

In the following passage, some words have been deleted. Fill in the blanks with the help of the alternatives given. Select the most appropriate option for each blank.  
That evening we sat in the courtyard of the hotel once more, (1) \_\_\_\_\_ the sun sink below the western isles. I told Alexi what had happened that day. I (2) \_\_\_\_\_ I could glimpse the grey stone wall of Lismore House (3) \_\_\_\_\_ its island hilltop, the red light of the setting sun glinting from the windows, and from there the wasted frame of Jonathan Blake gazing out across the sea, on nothing, his boy waiting for him to die. But it was my (4) \_\_\_\_\_, simply the image on my mind, like the image burned on to your eyes when you have (5) \_\_\_\_\_ too long at the sun, the passing footprint of a creature long gone.

**SubQuestion No : 25**

**Q.25** Select the most appropriate option to fill in blank no. 5.

- Ans
- 1. resumed
  - 2. rusted
  - 3. blocked
  - 4. stared

Question ID : 264330153449

Option 1 ID : 264330601317

Option 2 ID : 264330601315

Option 3 ID : 264330601316

Option 4 ID : 264330601318

Status : Answered

Chosen Option : 4