

## Multi Tasking Non Technical Staff Havaladar CBIC and CBN Examination 2021

Roll Number	
Candidate Name	
Venue Name	
Exam Date	21/07/2022
Exam Time	9:00 AM - 10:30 AM
Subject	MTS Non technical and Havaladar Examination 2021

Section : General English

**Q.1** Select the option that will improve the underlined part of the given sentence. In case no improvement is needed, select 'No improvement required'.

Travelling is the best method to utilise time.

Ans  1. No improvement required

2. is much best

3. is an best

4. are the best

Question ID : 26433050691

Status : Answered

Chosen Option : 1

**Q.2** Select the most appropriate synonym of the given word.

Interfere

Ans  1. Activate

2. Masquerade

3. Hasten

4. Restrict

Question ID : 26433051434

Status : Answered

Chosen Option : 3

**Q.3** Select the most appropriate option to fill in the blank.

I was not even \_\_\_\_\_ that my friend was ill.

Ans  1. alert

2. brave

3. aware

4. cruel

Question ID : 26433051397

Status : Answered

Chosen Option : 3

Q.4 The following sentence has been split into four segments. Identify the segment that contains a grammatical error.

We've got to have / beefed-up intelligence, / including much strong / human intelligence than before.

- Ans
- 1. We've got to have
  - 2. human intelligence
  - 3. including much strong
  - 4. beefed-up intelligence

Question ID : 26433051566  
Status : Answered  
Chosen Option : 1

Q.5 Select the option that will improve the underlined part of the given sentence. In case no improvement is needed, select 'No improvement required'.

The small farmers often need at borrow money to meet high expenses.

- Ans
- 1. No improvement required
  - 2. needs to
  - 3. need to
  - 4. needing to

Question ID : 26433051446  
Status : Answered  
Chosen Option : 3

Q.6 Select the most appropriate option to fill in the blank.

The blue team \_\_\_\_\_ the red team to play the game.

- Ans
- 1. surrendered
  - 2. compromised
  - 3. challenged
  - 4. heated

Question ID : 26433050627  
Status : Answered  
Chosen Option : 3

Q.7 Select the option that corrects the misspelt words in the given sentence.

We will always rember your contribusion.

- Ans
- 1. We will always remembar your contributoin.
  - 2. We will always remember your contribution.
  - 3. We will always remmember your contrabution.
  - 4. We will always remembber your contribution.

Question ID : 26433050790  
Status : Answered  
Chosen Option : 2

Q.8 Select the most appropriate ANTONYM of the given word.

Blissful

- Ans  1. Idealised  
 2. Malicious  
 3. Miserable  
 4. Heavenly

Question ID : 26433051332  
Status : Not Answered  
Chosen Option : --

Q.9 Select the most appropriate option to fill in the blank.

He was a \_\_\_\_\_ man and had no wish to be rich.

- Ans  1. poverty  
 2. poorly  
 3. poor  
 4. poorer

Question ID : 26433051004  
Status : Answered  
Chosen Option : 3

Q.10 The following sentence has been divided into parts. One of them may contain an error. Select the part that contains the error from the given options. If you don't find any error, mark 'No error' as your answer.

An opportunity arise, and / he decided to take the / job in Brussels.

- Ans  1. No error  
 2. An opportunity arise, and  
 3. he decided to take the  
 4. job in Brussels

Question ID : 26433051417  
Status : Answered  
Chosen Option : 1

Q.11 Select the most appropriate ANTONYM of the underlined word.

Suggesting that Irish inflation may have a knock-on effect on the euro zone is fatuous and absurd.

- Ans  1. Relevant  
 2. Serious  
 3. Meek  
 4. Sensible

Question ID : 26433051714  
Status : Not Answered  
Chosen Option : --

Q.12 Select the most appropriate meaning of the given idiom.

All eyes and ears

- Ans  1. To be attentive  
 2. To threaten someone  
 3. To believe everyone  
 4. Full of bluster

Question ID : 26433051019  
Status : Answered  
Chosen Option : 1

Q.13 Select the option that will improve the underlined part of the given sentence. In case no improvement is needed, select 'No improvement required'.

Either you and my sister is involved in this crime.

- Ans  1. you or mine  
 2. you nor my  
 3. you or my  
 4. No improvement required

Question ID : 26433050883  
Status : Answered  
Chosen Option : 3

Q.14 Select the option that can be used as a one-word substitute for the given group of words.

Government by king or queen

- Ans  1. Monarchy  
 2. Capitalism  
 3. Plutocracy  
 4. Oligarchy

Question ID : 26433050649  
Status : Answered  
Chosen Option : 1

Q.15 Select the most appropriate meaning of the given idiom.

Beyond the shadow of a doubt

- Ans  1. located in a remote area  
 2. live in fear and uncertainty  
 3. With certainty; for sure  
 4. Forget all past problems

Question ID : 26433051663  
Status : Answered  
Chosen Option : 3

Q.16 Select the correctly spelt word.

- Ans
- 1. Buraeucrat
  - 2. Buruaecrat
  - 3. Bureuacrat
  - 4. Bureaucrat

Question ID : 26433051335  
Status : Answered  
Chosen Option : 4

Q.17 Parts of the given sentence have been given as options. One of them may contain an error. Select the part that contains the error from the given options. If you don't find any error, mark 'No error' as your answer.

Germes will always find a way to exploit our human environment.

- Ans
- 1. No error
  - 2. a way to exploit
  - 3. Germes will always find
  - 4. our human environment

Question ID : 26433050768  
Status : Answered  
Chosen Option : 1

Q.18 Select the most appropriate synonym of the underlined word.

This style is ideal for men of all ages who wish to convey a dapper look.

- Ans
- 1. Messy
  - 2. Filthy
  - 3. Stylish
  - 4. Healthy

Question ID : 26433051018  
Status : Answered  
Chosen Option : 3

Q.19 Select the option that can be used as a one-word substitute for the given group of words.

Violation or misuse of what is regarded as sacred

- Ans
- 1. Remedy
  - 2. Benediction
  - 3. Sacrilege
  - 4. Devotion

Question ID : 26433051735  
Status : Answered  
Chosen Option : 3

# SSC MTS (Non Technical) EXAM STUDY KIT



FREE SHIPPING 

- ▶ 100% SSC MTS Exam Syllabus Covered
- ▶ PRINTED Notes
- ▶ 8 Books, 700+ Pages
- ▶ 2500+ MCQs
- ▶ Practice Papers
- ▶ 1 Year Current Affairs

**50% OFF**

 **SSCPORTAL.IN**  
India's largest online community for SSC, CDS, Railways

# SSC MTS PDF NOTES

100% Syllabus Covered



**CLICK HERE**

<https://sscpportal.in/study-kit/mts>

**Q.20** Select the most appropriate option to substitute the underlined segment in the given sentence. If there is no need to substitute it, select 'No substitution required'.

Rioting broke out after the government raised the fuel prices again.

- Ans
- 1. raising
  - 2. raise
  - 3. No substitution required
  - 4. is raising

Question ID : 26433051187  
Status : Answered  
Chosen Option : 2

**Comprehension:**

In the following passage, some words have been deleted. Read the passage carefully and select the most appropriate option to fill in each blank.

When it (1)\_\_\_\_\_ to witnessing wars, famines or disease outbreaks on the news, guilt may (2)\_\_\_\_\_ us to volunteer or donate money. Watching the generosity of other people (3)\_\_\_\_\_ play an active role in helping others is also guilt-provoking, which can (4)\_\_\_\_\_ turn activate us to take similar (5)\_\_\_\_\_ thus paying forward.

**SubQuestion No : 21**

**Q.21** Select the most appropriate option to fill in blank number 1.

- Ans
- 1. come
  - 2. coming
  - 3. comes
  - 4. came

Question ID : 26433051007  
Status : Answered  
Chosen Option : 3

**Comprehension:**

In the following passage, some words have been deleted. Read the passage carefully and select the most appropriate option to fill in each blank.

When it (1)\_\_\_\_\_ to witnessing wars, famines or disease outbreaks on the news, guilt may (2)\_\_\_\_\_ us to volunteer or donate money. Watching the generosity of other people (3)\_\_\_\_\_ play an active role in helping others is also guilt-provoking, which can (4)\_\_\_\_\_ turn activate us to take similar (5)\_\_\_\_\_ thus paying forward.

**SubQuestion No : 22**

**Q.22** Select the most appropriate option to fill in blank number 2.

- Ans
- 1. desire
  - 2. inspire
  - 3. conspire
  - 4. expire

Question ID : 26433051008  
Status : Answered  
Chosen Option : 2

**Comprehension:**

In the following passage, some words have been deleted. Read the passage carefully and select the most appropriate option to fill in each blank.

When it (1)\_\_\_\_\_ to witnessing wars, famines or disease outbreaks on the news, guilt may (2)\_\_\_\_\_ us to volunteer or donate money. Watching the generosity of other people (3)\_\_\_\_\_ play an active role in helping others is also guilt-provoking, which can (4)\_\_\_\_\_ turn activate us to take similar (5)\_\_\_\_\_ thus paying forward.

**SubQuestion No : 23**

**Q.23** Select the most appropriate option to fill in blank number 3.

- Ans  1. who  
 2. whose  
 3. whom  
 4. which

Question ID : 26433051009  
Status : Answered  
Chosen Option : 1

**Comprehension:**

In the following passage, some words have been deleted. Read the passage carefully and select the most appropriate option to fill in each blank.

When it (1)\_\_\_\_\_ to witnessing wars, famines or disease outbreaks on the news, guilt may (2)\_\_\_\_\_ us to volunteer or donate money. Watching the generosity of other people (3)\_\_\_\_\_ play an active role in helping others is also guilt-provoking, which can (4)\_\_\_\_\_ turn activate us to take similar (5)\_\_\_\_\_ thus paying forward.

**SubQuestion No : 24**

**Q.24** Select the most appropriate option to fill in blank number 4.

- Ans  1. with  
 2. for  
 3. in  
 4. off

Question ID : 26433051010  
Status : Answered  
Chosen Option : 3



**Comprehension:**

In the following passage, some words have been deleted. Read the passage carefully and select the most appropriate option to fill in each blank.

When it (1)\_\_\_\_\_ to witnessing wars, famines or disease outbreaks on the news, guilt may (2)\_\_\_\_\_ us to volunteer or donate money. Watching the generosity of other people (3)\_\_\_\_\_ play an active role in helping others is also guilt-provoking, which can (4)\_\_\_\_\_ turn activate us to take similar (5)\_\_\_\_\_ thus paying forward.

**SubQuestion No : 25**

**Q.25** Select the most appropriate option to fill in blank number 5.

- Ans  1. animation  
 2. action  
 3. apathy  
 4. commotion

Question ID : 26433051011  
Status : Answered  
Chosen Option : 2

Section : General Intelligence and Reasoning

**Q.1** In a certain code language, 'RA + FE' is coded as '246', and 'AB + JC' is coded as '115'. How will 'AC + BD' be coded in that language?

- Ans  1. 39  
 2. 23  
 3. 27  
 4. 37

Question ID : 26433048648  
Status : Not Answered  
Chosen Option : --

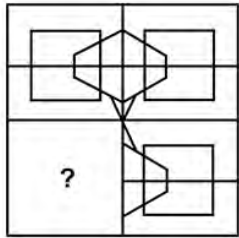
**Q.2** After interchanging which two signs will the value of the given expression be '37'?

$$27 + 3 \div 81 \times 93 - 57$$

- Ans  1. + and ÷  
 2. - and +  
 3. × and +  
 4. ÷ and -

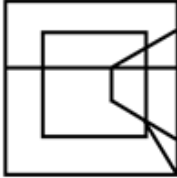
Question ID : 26433048790  
Status : Answered  
Chosen Option : 3

Q.3 Select the figure from the options that can replace the question mark (?) and complete the pattern.

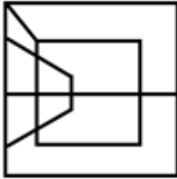


Ans

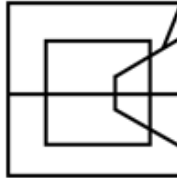
1.



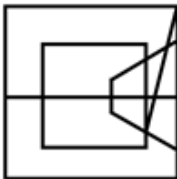
2.



3.



4.



Question ID : 26433047967

Status : Answered

Chosen Option : 3

**Q.4** Read the given statements and conclusions carefully. Assuming that the information given in the statements is true, even if it appears to be at variance with commonly known facts, decide which of the given conclusions logically follow(s) from the statements.

**Statements:**

Some apples are oranges.  
No orange is a grape.

**Conclusions:**

I. Some grapes are apples.  
II. Some oranges are apples.

**Ans**  1. Only conclusion II follows

2. Both conclusions I and II follow

3. Neither conclusion I nor II follows

4. Only conclusion I follows

Question ID : 26433048400

Status : Answered

Chosen Option : 1

**Q.5** Eight friends, Jay, King, Lisa, Mon, Nia, Ori, Piu, and Ria are sitting around a circular table facing the centre. Jay is sitting second to the right of Piu who is sitting third to the right of King. Mon is sitting second to the left of Ori, who sits between Piu and Jay. Lisa is not a neighbour of King or Nia. Who is sitting to the immediate right of King?

**Ans**  1. Piu

2. Mon

3. Ori

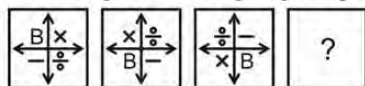
4. Nia

Question ID : 26433048151

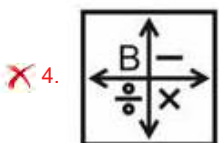
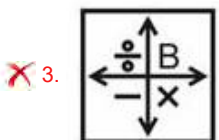
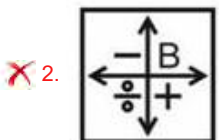
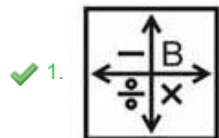
Status : Answered

Chosen Option : 4

Q.6 Select the figure from among the given options that can replace the question mark (?) in the following series.



Ans



Question ID : 26433048708

Status : Answered

Chosen Option : 1

Q.7 In a certain code language, 'HINTS' is coded as '5', and 'GRAD' is coded as '4'. How will 'POL' be coded in that language?

Ans ✗ 1. 5

✓ 2. 3

✗ 3. 2

✗ 4. 4

Question ID : 26433048770

Status : Answered

Chosen Option : 2

Q.8 In a certain code language, 'ACTION' is written as '36' and 'PIZZA' is written as '25'. How will 'GALLERY' be written in that language?

Ans ✗ 1. 59

✗ 2. 39

✗ 3. 64

✓ 4. 49

Question ID : 26433048322

Status : Answered

Chosen Option : 4

Q.9 Select the option that is related to the fifth number in the same way as the second number is related to the first number and the fourth number is related to the third number.

(NOTE: Operations should be performed on the whole numbers, without breaking down the numbers into its constituent digits. E.g. 13 – Operations on 13 such as adding /deleting /multiplying etc. to 13 can be performed. Breaking down 13 into 1 and 3 and then performing mathematical operations on 1 and 3 is not allowed)  
12 : 225 :: 10 : 169 :: 14 : ?

Ans  1. 289

2. 441

3. 361

4. 529

Question ID : 26433048691

Status : Answered

Chosen Option : 1

Q.10 Select the option that is related to the fifth letter-cluster in the same way as the second letter-cluster is related to the first letter-cluster and the fourth letter-cluster is related to the third letter-cluster.

DAT: GFA:: BNT: ESA:: PUN: ?

Ans  1. SZU

2. SZT

3. SYU

4. SZV

Question ID : 26433048319

Status : Answered

Chosen Option : 3

Q.11 Select the option that is related to the third letter-cluster in the same way as the second letter-cluster is related to the first letter-cluster.

SB : VY :: GN : ?

Ans  1. JL

2. DR

3. JK

4. DQ

Question ID : 26433048774

Status : Answered

Chosen Option : 3

Q.12 Select the option in which the pair of letter-clusters share the same relationship as that shared by the given pair of letter-clusters.

ROCK : JDNS

Ans  1. WART : SSZX

2. PICK : LDHQ

3. GOLLA : YMPH

4. DRUM : LVQC

Question ID : 26433048701

Status : Answered

Chosen Option : 1

Q.13 Select the option that is related to the fifth number in the same way as the second number is related to the first number and the fourth number is related to the third number.

12 : 33 :: 31 : 71 :: 79 : ?

Ans  1. 167

2. 179

3. 138

4. 182

Question ID : 26433048157

Status : Answered

Chosen Option : 1

Q.14 6 boys B1, B2, B3, B4, B5 and B6 are sitting around a rectangular table facing towards the centre (not necessarily in the same order). Two boys are sitting on each longer side and one boy is sitting on each shorter side of the table. B1 sits second to the left of B6. B4 sits second to the left of B5. B5 is the immediate neighbour of B6 and B2. B5 is not sitting opposite to B4. B1 is not sitting on a shorter side.

Which pair of boys is sitting on a shorter side of the rectangular table?

Ans  1. B1 and B4

2. B4 and B2

3. B2 and B3

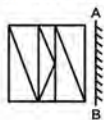
4. B6 and B3

Question ID : 26433048906

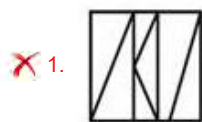
Status : Not Answered

Chosen Option : --

Q.15 Select the correct mirror image of the given figure when the mirror is placed at the right side.



Ans



Question ID : 26433048661

Status : Answered

Chosen Option : 2

Q.16 In a certain code language, 'That was his sister' is coded as 'Bo Uv Zs Mn', 'This was his cat' is coded as 'Zs Pt Uv Ga' and 'That was my father' is coded as 'Bo Uv Ex Yz'. What is the code for 'sister' in this code language?

Ans  1. Bo

2. Mn

3. Zs

4. Uv

Question ID : 26433048273

Status : Answered

Chosen Option : 2

Q.17 Select the option in which the numbers are related in the same way as are the numbers of the following sets.

(NOTE: Operations should be performed on the whole numbers, without breaking down the numbers into its constituent digits. E.g. 13 – Operations on 13 such as adding /deleting /multiplying etc. to 13 can be performed. Breaking down 13 into 1 and 3 and then performing mathematical operations on 1 and 3 is not allowed)

(24, 8, 96)  
(36, 4, 72)

Ans  1. (12, 6, 36)

2. (30, 4, 40)

3. (28, 8, 104)

4. (16, 2, 18)

Question ID : 26433048405

Status : Answered

Chosen Option : 1

Q.18 What will be the value of the given expression if 'A' means '+', 'B' means '-', 'C' means 'x', and 'D' means '÷'?

40 A 30 B 15 C 20 D 5 = ?

Ans  1. 5

2. 10

3. 15

4. 20

Question ID : 26433048889

Status : Answered

Chosen Option : 2



# SSC MTS (Non Technical) EXAM STUDY KIT



FREE SHIPPING 

- ▶ 100% SSC MTS Exam Syllabus Covered
- ▶ PRINTED Notes
- ▶ 8 Books, 700+ Pages
- ▶ 2500+ MCQs
- ▶ Practice Papers
- ▶ 1 Year Current Affairs

**50%** OFF

 **SSCPORTAL.IN**  
India's largest online community for SSC, CDS, Railways

# SSC MTS PDF NOTES

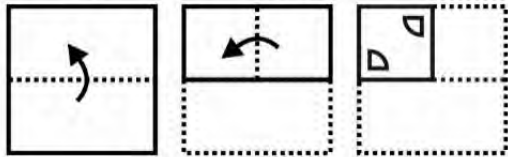
100% Syllabus Covered



**CLICK HERE**

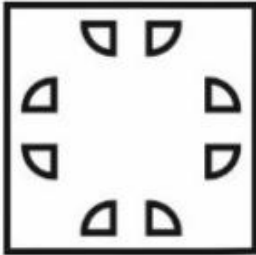
<https://sscpportal.in/study-kit/mts>

**Q.19** The sequence of folding a piece of paper and the manner in which the folded paper has been cut is shown in the following figures. How would this paper look when unfolded?

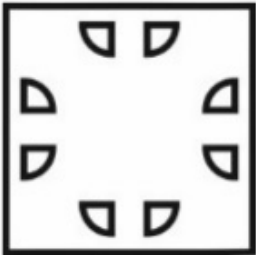


Ans

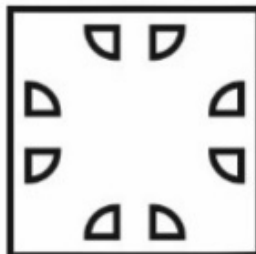
1.



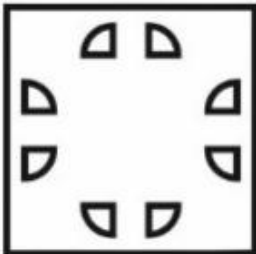
2.



3.



4.

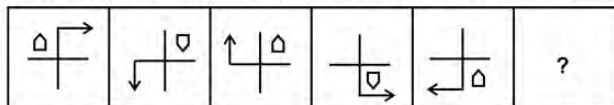


Question ID : 26433049037

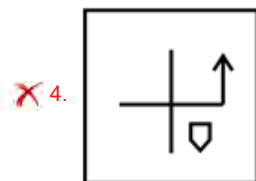
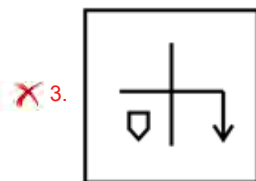
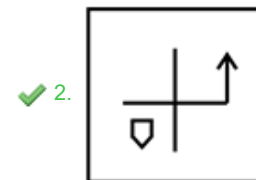
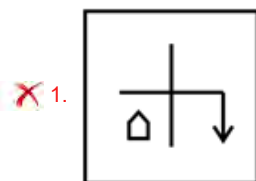
Status : Answered

Chosen Option : 3

**Q.20** Select the figure from among the given options that can replace the question mark (?) in the following series.



Ans



Question ID : 26433048163

Status : Answered

Chosen Option : 1

**Q.21** Read the given statements and conclusions carefully. Assuming that the information given in the statements is true, even if it appears to be at variance with commonly known facts, decide which of the given conclusions logically follow(s) from the statements.

Statements:

- I. All W are B.
- II. All M are B.

Conclusions:

- I. Some B are M.
- II. All W are M.
- III. All B are W.

Ans  1. Only conclusion II follows

2. Only conclusion I follows

3. Only conclusions I and III follow

4. None of the conclusions follow

Question ID : 26433048704

Status : Answered

Chosen Option : 2

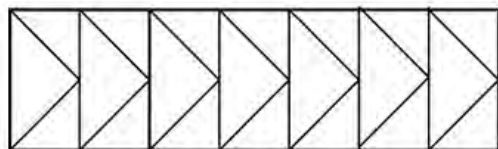
Q.22 The ages of seven girls G1, G2, G3, G4, G5, G6 and G7 are compared. No two girls have the same age. The age of G3 is less than only two girls. The age of G1 is greater than G4 and G7. The age of G6 is the lowest. The age of G5 is not the highest and it is greater than G1.

The age of how many girls is greater than G5?

- Ans  1. 1  
 2. 4  
 3. 2  
 4. 3

Question ID : 26433048907  
 Status : Answered  
 Chosen Option : 4

Q.23 Select the option that is embedded in the given figure (rotation is NOT allowed).



- Ans  1.   
 2.   
 3.   
 4.

Question ID : 26433048410  
 Status : Answered  
 Chosen Option : 2

Q.24 Identify the number that does NOT belong to the following series.

1.5, 2, 3, 6, 18, 108, 1964

- Ans  1. 108  
 2. 6  
 3. 18  
 4. 1964

Question ID : 26433048894  
 Status : Answered  
 Chosen Option : 4

Q.25 Select the letter-clusters that can replace the question mark (?) in the following series.

FAN, JDP, NGR, ?, VMV

- Ans
- 1. RJA
  - 2. RJV
  - 3. RJT
  - 4. RTJ

Question ID : 26433048802  
 Status : Answered  
 Chosen Option : 3

Section : Numerical Aptitude

Q.1 Study the given table and answer the question that follows.

The table shows the marked prices (in ₹) and percentages of discount offered for five different products.

Product	Marked Price	Discount %
P	750	12
Q	900	15
R	1,020	30
S	1,200	25
T	590	10

If product Q is sold at 53% profit and product S is sold at 80% profit, then what will be the sum of the cost prices of Q and S?

- Ans
- 1. ₹1,100
  - 2. ₹800
  - 3. ₹1,000
  - 4. ₹1,200

Question ID : 26433050237  
 Status : Answered  
 Chosen Option : 2

Q.2 What is the value of 15% of 30% of 700?

- Ans
- 1. 29.5
  - 2. 31.5
  - 3. 32.5
  - 4. 28.5

Question ID : 26433049725  
 Status : Answered  
 Chosen Option : 2

**Q.3** The average age of 29 students in a class is 26 years. If the age of the teacher is also included, the average age of the class becomes 26.4 years. Find the age of the teacher?

- Ans
- 1. 36 years
  - 2. 38 years
  - 3. 42 years
  - 4. 32 years

Question ID : 26433050346  
Status : Answered  
Chosen Option : 2

**Q.4** What is the value of  $\frac{0.1 \div 0.2 \times 0.3 + 0.4 \times 0.5 \div 0.1}{0.1 \times 0.2 - 0.01}$  ?

- Ans
- 1. 220
  - 2. 210
  - 3. 216
  - 4. 215

Question ID : 26433050038  
Status : Answered  
Chosen Option : 4

**Q.5** The perimeter of a square is 90 cm more than the length of each of its side. What is the length of each side of the square?

- Ans
- 1. 25 cm
  - 2. 30 cm
  - 3. 60 cm
  - 4. 45 cm

Question ID : 26433050034  
Status : Answered  
Chosen Option : 2

**Q.6** What is the smallest three-digit number which, when divided by 8 or 6, leaves a remainder of 1 in each case?

- Ans
- 1. 121
  - 2. 119
  - 3. 123
  - 4. 125

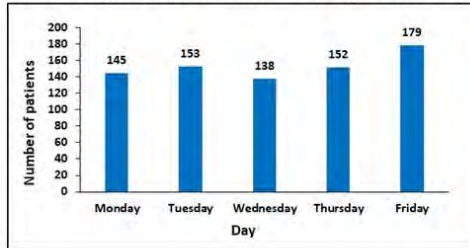
Question ID : 26433049737  
Status : Answered  
Chosen Option : 1

**Q.7** A girl, walking at  $\frac{5}{6}$  of her usual speed, misses the bus by 7 minutes. How long does she usually take to reach the bus stop?

- Ans**
- 1. 24 minutes
  - 2. 35 minutes
  - 3. 30 minutes
  - 4. 60 minutes

Question ID : 26433049508  
 Status : Answered  
 Chosen Option : 2

**Q.8** The following bar graph shows the number of patients visiting a hospital on different days of a certain week.



Calculate the ratio of the total number of patients visiting the hospital on Monday or Wednesday to the number of patients visiting the hospital on Friday. [Note: None of the patients visited the hospital on more than one day during the given week.]

- Ans**
- 1. 283 : 179
  - 2. 179 : 283
  - 3. 282 : 179
  - 4. 197 : 282

Question ID : 26433049513  
 Status : Answered  
 Chosen Option : 1

**Q.9** ₹2,400 is divided among three kids in the ratio of 2 : 3 : 3. Find the lowest share.

- Ans**
- 1. ₹500
  - 2. ₹600
  - 3. ₹700
  - 4. ₹400

Question ID : 26433049505  
 Status : Answered  
 Chosen Option : 2

**Q.10** An inkjet printer can print 8 lines/second and can print a document in 6 minutes. How much time would an LED printer take to print the same document if it can print 7 lines/second more than the inkjet printer?

- Ans**
- 1. 2 min 54 sec
  - 2. 2 min 50 sec
  - 3. 3 min 12 sec
  - 4. 3 min 4 sec

Question ID : 26433050260  
Status : Answered  
Chosen Option : 3

**Q.11** A 30-litre mixture of milk and water contains 15% water. How much water must be added to it to increase the percentage of water in the solution to 37.5%?

- Ans**
- 1. 6.0 liters
  - 2. 10.8 liters
  - 3. 7.2 liters
  - 4. 8.4 liters

Question ID : 26433050122  
Status : Answered  
Chosen Option : 3

**Q.12** The value of  $0.1 \times 99\%$  of  $1000 + 1.5 \div 0.3 \times 1.1$  is:

- Ans**
- 1. 105.6
  - 2. 101.0
  - 3. 104.5
  - 4. 106.5

Question ID : 26433049493  
Status : Answered  
Chosen Option : 3

**Q.13** 4 years ago, the age of Garvit was three times that of Yuvansh, but one year ago the age of Garvit was two times that of Yuvansh. What is the difference between the ages of Garvit and Yuvansh?

- Ans**
- 1. 13 years
  - 2. 11 years
  - 3. 7 years
  - 4. 6 years

Question ID : 26433050230  
Status : Answered  
Chosen Option : 4



**Q.14** The Iceland team, while rowing, covered a distance of 20 km downstream in 2 hours and the same distance upstream in 5 hours. Find the speed of the stream.

- Ans**
- 1. 3 km/h
  - 2. 8 km/h
  - 3. 7 km/h
  - 4. 4 km/h

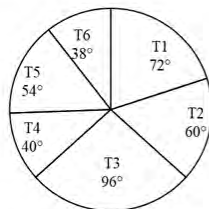
Question ID : 26433050234  
 Status : Answered  
 Chosen Option : 1

**Q.15** The ratio of the selling price to the cost price of a computer is 7 : 5. What is the profit percentage?

- Ans**
- 1. 60%
  - 2. 10%
  - 3. 40%
  - 4. 20%

Question ID : 26433049722  
 Status : Answered  
 Chosen Option : 3

**Q.16** The pie chart given below gives the measures of the central angles of the sectors that reflect the number of flats in 6 different towers in a housing society with respect to the total flats in these 6 towers taken together.



If the difference between the number of flats in T2 and in T6 is 66, then what is the total number of flats in the 6 towers taken together?

- Ans**
- 1. 1140
  - 2. 960
  - 3. 1220
  - 4. 1080

Question ID : 26433050042  
 Status : Answered  
 Chosen Option : 4

**Q.17** The height of a trapezium is 68 cm, and the sum of its parallel sides is 75 cm. If the area of the trapezium is  $\frac{6}{17}$  times of the area of a square, then the length of the diagonal of the square is: (Take  $\sqrt{2} = 1.41$ )

- Ans**
- 1. 127.39 cm
  - 2. 183.49 cm
  - 3. 119.85 cm
  - 4. 102.39 cm

Question ID : 26433050366  
Status : Not Answered  
Chosen Option : --

**Q.18** At present, the number of trees in a village is 52,020. It increases annually at the rate of 2%. What was the number of trees in the village two years ago?

- Ans**
- 1. 45,000
  - 2. 51,250
  - 3. 50,000
  - 4. 48,000

Question ID : 26433050131  
Status : Answered  
Chosen Option : 3

**Q.19** A solid metallic sphere of radius 9 cm is melted and recast into a wire of radius 2 cm. What is the length of the wire?

- Ans**
- 1. 343 cm
  - 2. 152 cm
  - 3. 243 cm
  - 4. 184 cm

Question ID : 26433049367  
Status : Answered  
Chosen Option : 3

**Q.20** A shopkeeper offers two successive discounts of 15% and 20% on an article and is still able to earn a 70% profit. If he offers a single discount of 30%, what will his profit percentage be?

- Ans**
- 1. 70%
  - 2. 75%
  - 3. 65%
  - 4. 50%

Question ID : 26433050128  
Status : Answered  
Chosen Option : 2

**Q.21** A can do a piece of work alone in 15 days, while B complete the same piece of work alone in 12 days. If they work on it together for 5 days, then the fraction of the work that will be left is:

- Ans
- 1.  $\frac{3}{4}$
  - 2.  $\frac{5}{8}$
  - 3.  $\frac{1}{4}$
  - 4.  $\frac{5}{7}$

Question ID : 26433049485  
Status : Answered  
Chosen Option : 3

**Q.22** What is the average of 12.5, 18.4, 15.5, 16.6, and 20.4?

- Ans
- 1. 15.58
  - 2. 17.50
  - 3. 16.68
  - 4. 18.48

Question ID : 26433049347  
Status : Answered  
Chosen Option : 3

**Q.23** A sum invested at a certain rate of interest per annum, compounded annually, amounts to ₹14,400 in 2 years and to ₹25,920 in 4 years. What is the sum invested?

- Ans
- 1. ₹8,200
  - 2. ₹7,500
  - 3. ₹8,500
  - 4. ₹8,000

Question ID : 26433049733  
Status : Not Answered  
Chosen Option : --

**Q.24** A mobile phone is sold at a profit of 80%. The nominal profit is approximately what percentage of the selling price of the mobile phone?

- Ans
- 1. 33.33%
  - 2. 28.56%
  - 3. 44.44%
  - 4. 36.66%

Question ID : 26433050023  
Status : Answered  
Chosen Option : 3

**Q.25** Manoj decided to give 25% of his income to his son A and a certain amount to his son B. If he gave ₹2,208 to B which is 92% of the decided amount and is ₹1,542 less than the amount given to A, then what percent of his total income did Manoj decide to give his son B?

- Ans**
- 1. 16%
  - 2. 12%
  - 3. 15%
  - 4. 20%

Question ID : 26433050299  
Status : Answered  
Chosen Option : 2

Section : General Awareness

**Q.1** Which freedom fighter is also known as the 'Grand Old Man of India'?

- Ans**
- 1. Chakravarti Rajagopalachari
  - 2. Dr. Zakir Hussain
  - 3. Dadabhai Naoroji
  - 4. Mahatma Gandhi

Question ID : 26433046909  
Status : Answered  
Chosen Option : 4

**Q.2** Which organisation of the government of India reports the GDP of the country?

- Ans**
- 1. Securities and Exchange Board of India
  - 2. Central Statistics Office
  - 3. NITI Aayog
  - 4. Reserve Bank of India

Question ID : 26433047542  
Status : Answered  
Chosen Option : 3

**Q.3** Which of the following fundamental rights deals with 'Prohibition of Discrimination'?

- Ans**
- 1. Right to Equality
  - 2. Right Against Exploitation
  - 3. Right to Freedom of Religion
  - 4. Right to Freedom

Question ID : 26433047138  
Status : Answered  
Chosen Option : 1

Q.4 Uttar Pradesh won the 11th Junior National Men's Hockey Championship following a 3-1 victory over Chandigarh. Where was the event held?

- Ans
- 1. Bihar
  - 2. Tamil Nadu
  - 3. Delhi
  - 4. Chandigarh

Question ID : 26433047140  
Status : Answered  
Chosen Option : 2

Q.5 'Cracking the Code: My Journey to Bollywood' is the autobiography of \_\_\_\_\_.

- Ans
- 1. Rajkumar Rao
  - 2. Amit Sadh
  - 3. Sushant Singh Rajput
  - 4. Ayushmann Khurrana

Question ID : 26433047535  
Status : Not Answered  
Chosen Option : --

Q.6 At the age of \_\_\_\_\_, Mahavira left home and went to live in a forest.

- Ans
- 1. 35
  - 2. 27
  - 3. 33
  - 4. 30

Question ID : 26433047531  
Status : Not Answered  
Chosen Option : --

Q.7 Which of the following factors increases the rate of evaporation?

- I. An increase in surface area
- II. A decrease in humidity

- Ans
- 1. Both I and II
  - 2. Only II
  - 3. Neither I nor II
  - 4. Only I

Question ID : 26433047623  
Status : Answered  
Chosen Option : 4

Q.8 Mahogany tree is found in which of the following types of vegetation?

- Ans  1. Mangrove forests  
 2. Tropical evergreen forests  
 3. Tropical thorn forests  
 4. Montane forests

Question ID : 26433047428  
Status : Answered  
Chosen Option : 2

Q.9 How many Grammy nominations have been received by Zubin Mehta as of March 2022?

- Ans  1. 10  
 2. 12  
 3. 18  
 4. 24

Question ID : 26433047536  
Status : Not Answered  
Chosen Option : --

Q.10 In which district of Rajasthan is the Elephant festival celebrated every year?

- Ans  1. Alwar  
 2. Kota  
 3. Jaipur  
 4. Ajmer

Question ID : 26433047621  
Status : Not Answered  
Chosen Option : --

Q.11 Who among the following won the Filmfare Award for Best Choreography for the title song of Sushant Singh Rajput's film Dil Bechara?

- Ans  1. Remo D'Souza  
 2. Ganesh Acharya  
 3. Farah Khan  
 4. Bosco - Caesar

Question ID : 26433047437  
Status : Not Answered  
Chosen Option : --

Q.12 Which is the longest national highway in India?

- Ans  1. NH-102  
 2. NH-44  
 3. NH-22  
 4. NH-7

Question ID : 26433047127  
Status : Answered  
Chosen Option : 2

Q.13 Which of the following Indian cities will co-host the FIH Men's Hockey World Cup 2023?

- Ans  1. Bhubaneswar  
 2. Delhi  
 3. Bangalore  
 4. Patiala

Question ID : 26433047715  
Status : Not Answered  
Chosen Option : --

Q.14 Quit India movement was started in \_\_\_\_\_.

- Ans  1. 1936  
 2. 1944  
 3. 1938  
 4. 1942

Question ID : 26433047433  
Status : Answered  
Chosen Option : 4

Q.15 Name the only Female Muslim ruler of India.

- Ans  1. Khawla bint al-Azwar  
 2. Khadija  
 3. Razia Sultana  
 4. Nusaybah bint Ka'ab

Question ID : 26433047132  
Status : Answered  
Chosen Option : 3

Q.16 If unemployment continues to be a long-term feature of a country, then it is called \_\_\_\_\_ unemployment.

- Ans
- 1. structural
  - 2. casual
  - 3. frictional
  - 4. chronic

Question ID : 26433046755  
Status : Answered  
Chosen Option : 4

Q.17 Who was appointed as the head coach of the Indian men's cricket team by the BCCI in November 2021?

- Ans
- 1. Vinod Kambli
  - 2. Kapil Dev
  - 3. Sunil Gavaskar
  - 4. Rahul Dravid

Question ID : 26433047519  
Status : Answered  
Chosen Option : 4

Q.18 Which of the following statements regarding seasonal unemployment is CORRECT?

- Ans
- 1. It happens when people are not able to find jobs during some months of the year.
  - 2. It happens mainly in urban areas.
  - 3. If a field requires 4 people, and 7 are employed, then 3 people are seasonally unemployed.
  - 4. People who do not depend upon agriculture usually face such kind of unemployment.

Question ID : 26433047754  
Status : Not Answered  
Chosen Option : --

Q.19 Nita is telling her friend about the smallest planet of our solar system. Which of the following planets is she talking about?

- Ans
- 1. Earth
  - 2. Mars
  - 3. Mercury
  - 4. Venus

Question ID : 26433047126  
Status : Not Answered  
Chosen Option : --



Q.20 Which of the following is a dance form of Maharashtra?

- Ans  1. Bhangra  
 2. Jhumar  
 3. Kathak  
 4. Lavani

Question ID : 26433046895  
Status : Answered  
Chosen Option : 4

Q.21 In a freestanding temple, the mountain-like spire, which can take the shape of a pyramidal tower is called \_\_\_\_\_.

- Ans  1. vimana  
 2. garbhagriha  
 3. mandapa  
 4. vahan

Question ID : 26433047122  
Status : Not Answered  
Chosen Option : --

Q.22 Which of the following cell organelles are NOT present in animal cell?

- Ans  1. Ribosomes  
 2. Plastids  
 3. Lysosomes  
 4. Mitochondria

Question ID : 26433047424  
Status : Answered  
Chosen Option : 2

Q.23 Definition of 'Money Bills' is given in which of the following Articles of the Indian Constitution?

- Ans  1. Article 128  
 2. Article 110  
 3. Article 139  
 4. Article 115

Question ID : 26433047439  
Status : Not Answered  
Chosen Option : --

# SSC MTS (Non Technical) EXAM STUDY KIT



FREE SHIPPING 

- ▶ 100% SSC MTS Exam Syllabus Covered
- ▶ PRINTED Notes
- ▶ 8 Books, 700+ Pages
- ▶ 2500+ MCQs
- ▶ Practice Papers
- ▶ 1 Year Current Affairs

**50% OFF**

 **SSCPORTAL.IN**  
India's largest online community for SSC, CDS, Railways

# SSC MTS PDF NOTES

100% Syllabus Covered



**CLICK HERE**

<https://sscpportal.in/study-kit/mts>

**Q.24** In October 2021, the Ministry of Civil Aviation launched a scheme which will integrate cargo-related infrastructure in airports of hilly, tribal, and north-east regions. Name the scheme launched by the Ministry of Civil Aviation.

- Ans**
- 1. Krishi Udan 1.0
  - 2. Regional Connectivity Scheme
  - 3. Krishi Udan 2.0
  - 4. SAMBHAV

Question ID : **26433047118**  
Status : **Not Answered**  
Chosen Option : --

**Q.25** Which of the following diseases is caused by the deficiency of Vitamin A?

- Ans**
- 1. Night blindness
  - 2. Scurvy
  - 3. Marasmus
  - 4. Kwashiorkor

Question ID : **26433046899**  
Status : **Answered**  
Chosen Option : 1