

Multi Tasking Non Technical Staff Havaladar CBIC and CBN Examination 2021

Roll Number	
Candidate Name	
Venue Name	
Exam Date	18/07/2022
Exam Time	1:00 PM - 2:30 PM
Subject	MTS Non technical and Havaladar Examination 2021

Section : General English

Q.1 Select the option that can be used as a one-word substitute for the given group of words.

One who runs away from justice or a dangerous situation

- Ans ☒ 1. Sadist
☒ 2. Altruist
☒ 3. Insolvent
☒ 4. Fugitive

Question ID : 26433050918

Status : Answered

Chosen Option : 4

Q.2 Select the most appropriate meaning of the given idiom.

Once in a blue moon

- Ans ☒ 1. Occasionally
☒ 2. Very rarely
☒ 3. Frequently
☒ 4. Incessantly

Question ID : 26433051793

Status : Answered

Chosen Option : 2

Q.3 Select the option that can be used as a one-word substitute for the given group of words.

Having or forming a hard outer layer

- Ans ☒ 1. Crunched
☒ 2. Crushed
☒ 3. Crusted
☒ 4. Cursed

Question ID : 26433051657

Status : Answered

Chosen Option : 3



Download SSC CGL, CHSL E-BOOKS

CLICK HERE

Q.4 Select the correctly spelt word.

- Ans ☒ 1. Adamant
☐ 2. Amorphuous
☐ 3. Despottic
☐ 4. Contentous

Question ID : 26433051310
Status : Answered
Chosen Option : 1

Q.5 Select the option that will improve the underlined part of the given sentence. In case no improvement is needed, select 'No improvement required'.

I am not gone to harm this dog.

- Ans ☐ 1. are not going
☐ 2. No improvement required
☒ 3. am not going
☐ 4. is not gone

Question ID : 26433050483
Status : Answered
Chosen Option : 3

Q.6 Select the most appropriate option to fill in the blank.

Ritu had gone out to drink water _____ her examination started.

- Ans ☐ 1. even
☐ 2. whether
☒ 3. before
☐ 4. now

Question ID : 26433051449
Status : Answered
Chosen Option : 3

Q.7 Select the most appropriate option to fill in the blank.

I feel so lazy and _____ after doing any strenuous work.

- Ans ☐ 1. lively
☒ 2. sluggish
☐ 3. fortunate
☐ 4. bouncing

Question ID : 26433050896
Status : Answered
Chosen Option : 2

Q.8 Select the most appropriate ANTONYM of the given word.

Ambitious

- Ans ☒ 1. Vigorous
☒ 2. Lazy
☒ 3. Dynamic
☒ 4. Lively

Question ID : 26433050486
Status : Answered
Chosen Option : 3

Q.9 Select the option that can be used as a one-word substitute for the given group of words.

The study of the heart and its action and disease

- Ans ☒ 1. Pharmacology
☒ 2. Anthropology
☒ 3. Cardiology
☒ 4. Microbiology

Question ID : 26433050623
Status : Answered
Chosen Option : 3

Q.10 Select the most appropriate option to fill in the blank.

My mother is a _____ and forgiving person.

- Ans ☒ 1. respective
☒ 2. vital
☒ 3. difficult
☒ 4. compassionate

Question ID : 26433051805
Status : Answered
Chosen Option : 4

Q.11 The following sentence has been divided into parts. One of them may contain an error. Select the part that contains the error from the given options. If you don't find any error, mark 'No error' as your answer.

San Francisco is more bigger / than Boston in terms of / population density.

- Ans ☒ 1. population density
☒ 2. No error
☒ 3. than Boston in terms of
☒ 4. San Francisco is more bigger

Question ID : 26433051721
Status : Answered
Chosen Option : 4

Q.12 Select the option that will improve the underlined part of the given sentence. In case no improvement is needed, select 'No improvement required'.

We have the responsibility of finding our daughter.

Ans ☒ 1. No improvement required

☐ 2. of finding us

☐ 3. to finding our

☐ 4. finding of our

Question ID : 26433051013

Status : Answered

Chosen Option : 1

Q.13 Select the most appropriate meaning of the given idiom.

Hit the nail on the head

Ans ☐ 1. To be extremely cautious

☒ 2. To be exactly right about something

☐ 3. To injure someone fatally

☐ 4. To be extremely hard working

Question ID : 26433051125

Status : Answered

Chosen Option : 2

Q.14 Select the most appropriate ANTONYM of the given word.

Fleeting

Ans ☐ 1. Passing

☐ 2. Feeble

☐ 3. Brief

☒ 4. Lasting

Question ID : 26433051817

Status : Answered

Chosen Option : 4

Q.15 Select the most appropriate synonym of the given word.

Propitious

Ans ☐ 1. Conciliatory

☐ 2. Cogent

☐ 3. Inimical

☒ 4. Auspicious

Question ID : 26433051738

Status : Answered

Chosen Option : 4



Download SSC CGL, CHSL E-BOOKS

[CLICK HERE](#)

Q.16 The following sentence has been split into four segments. Identify the segment that contains a grammatical error.

In the primitive / oceans, / life begins / nearly 3.5 billion years ago.

Ans ☒ 1. nearly 3.5 billion years ago

☒ 2. life begins

☒ 3. oceans

☒ 4. In the primitive

Question ID : 26433051289

Status : Answered

Chosen Option : 2

Q.17 Select the most appropriate synonym of the underlined word in the given sentence.

Try to sound more innocent than sarcastic.

Ans ☒ 1. playful

☒ 2. mild

☒ 3. caustic

☒ 4. rational

Question ID : 26433050940

Status : Not Answered

Chosen Option : --

Q.18 Select the correctly spelt word.

Ans ☒ 1. Tolreite

☒ 2. Toilerate

☒ 3. Tolerate

☒ 4. Tolrate

Question ID : 26433050494

Status : Answered

Chosen Option : 3

Q.19 Select the most appropriate option to fill in the blank.

I am _____ willing to sign this contract with your company.

Ans ☒ 1. nor

☒ 2. none

☒ 3. not

☒ 4. no

Question ID : 26433050926

Status : Answered

Chosen Option : 3



Download SSC CGL, CHSL E-BOOKS

CLICK HERE

SSC MTS (Non Technical) EXAM STUDY KIT



FREE
SHIPPING 

- ▶ 100% SSC MTS Exam Syllabus Covered
- ▶ PRINTED Notes
- ▶ 8 Books, 700+ Pages
- ▶ 2500+ MCQs
- ▶ Practice Papers
- ▶ 1 Year Current Affairs

50%
OFF

 **SSCPORTAL.IN**
India's Largest Online Community For SSC CGL, SSC MTS, SSC CHSL

SSC MTS PDF NOTES

100% Syllabus Covered



50%
OFF

CLICK HERE

<https://sscpportal.in/study-kit/mts>

Q.20 The following sentence has been split into four segments. Identify the segment that contains a grammatical error.

Continuous heavy / rainfall may / further worse / the flood situation.

- Ans**
- ☒ 1. rainfall may
 - ☒ 2. Continuous heavy
 - ☒ 3. the flood situation
 - ☒ 4. further worse

Question ID : 26433051774

Status : Answered

Chosen Option : 4

Comprehension:

In the following passage, some words have been deleted. Read the passage carefully and select the most appropriate option to fill in each blank.

Speech pathologists are (1) _____ in communication disabilities. They work within multidisciplinary health-care teams (2) _____ a variety of hospital and community-based sites. This (3) _____ working with medical, nursing, and allied health professionals such (4) _____ psychologists, occupational therapists, social (5) _____ and physiotherapists.

SubQuestion No : 21

Q.21 Select the most appropriate option to fill in blank number 1.

- Ans**
- ☒ 1. quacks
 - ☒ 2. teachers
 - ☒ 3. experts
 - ☒ 4. relatives

Question ID : 26433050929

Status : Answered

Chosen Option : 3

Comprehension:

In the following passage, some words have been deleted. Read the passage carefully and select the most appropriate option to fill in each blank.

Speech pathologists are (1) _____ in communication disabilities. They work within multidisciplinary health-care teams (2) _____ a variety of hospital and community-based sites. This (3) _____ working with medical, nursing, and allied health professionals such (4) _____ psychologists, occupational therapists, social (5) _____ and physiotherapists.

SubQuestion No : 22

Q.22 Select the most appropriate option to fill in blank number 2.

- Ans**
- ☒ 1. across
 - ☒ 2. after
 - ☒ 3. by
 - ☒ 4. about

Question ID : 26433050930

Status : Answered

Chosen Option : 1



Download SSC CGL, CHSL E-BOOKS

[CLICK HERE](#)

Comprehension:

In the following passage, some words have been deleted. Read the passage carefully and select the most appropriate option to fill in each blank.

Speech pathologists are (1) _____ in communication disabilities. They work within multidisciplinary health-care teams (2) _____ a variety of hospital and community-based sites. This (3) _____ working with medical, nursing, and allied health professionals such (4) _____ psychologists, occupational therapists, social (5) _____ and physiotherapists.

SubQuestion No : 23

Q.23 Select the most appropriate option to fill in blank number 3.

Ans ☒ 1. includes

☐ 2. included

☐ 3. include

☐ 4. including

Question ID : 26433050931

Status : Answered

Chosen Option : 1

Comprehension:

In the following passage, some words have been deleted. Read the passage carefully and select the most appropriate option to fill in each blank.

Speech pathologists are (1) _____ in communication disabilities. They work within multidisciplinary health-care teams (2) _____ a variety of hospital and community-based sites. This (3) _____ working with medical, nursing, and allied health professionals such (4) _____ psychologists, occupational therapists, social (5) _____ and physiotherapists.

SubQuestion No : 24

Q.24 Select the most appropriate option to fill in blank number 4.

Ans ☐ 1. than

☐ 2. so

☐ 3. like

☒ 4. as

Question ID : 26433050932

Status : Answered

Chosen Option : 4



Download SSC CGL, CHSL E-BOOKS

[CLICK HERE](#)

Comprehension:

In the following passage, some words have been deleted. Read the passage carefully and select the most appropriate option to fill in each blank.

Speech pathologists are (1) _____ in communication disabilities. They work within multidisciplinary health-care teams (2) _____ a variety of hospital and community-based sites. This (3) _____ working with medical, nursing, and allied health professionals such (4) _____ psychologists, occupational therapists, social (5) _____ and physiotherapists.

SubQuestion No : 25

Q.25 Select the most appropriate option to fill in blank number 5.

- Ans ☒ 1. migrants
☒ 2. workers
☒ 3. amateurs
☒ 4. manuals

Question ID : 26433050933

Status : Answered

Chosen Option : 2

Section : General Intelligence and Reasoning

Q.1 Select the option that is related to the fifth term in the same way as the second term is related to the first term and the fourth term is related to the third term.

ACADEMY : ZXZWWNB :: FINANCE : URMZMXV :: PACKAGE : ?

- Ans ☒ 1. KZXPZUV
☒ 2. KZXPZTU
☒ 3. KZXQZTV
☒ 4. KZXPZTV

Question ID : 26433047870

Status : Answered

Chosen Option : 4



Download SSC CGL, CHSL E-BOOKS

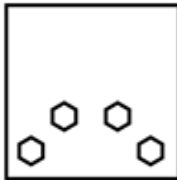
[CLICK HERE](#)

Q.2 The sequence of folding a piece of paper and the manner in which the folded paper has been cut is shown in the following figures. How would this paper look when unfolded?

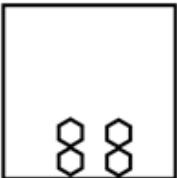


Ans

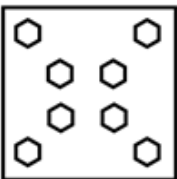
✓ 1.



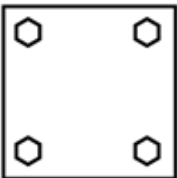
✗ 2.



✗ 3.



✗ 4.



Question ID : 26433048141

Status : Answered

Chosen Option : 1

Q.3 Select the letter-cluster that can replace the question mark (?) in the following series.

TOC, SLX, RIS, QFN, ?

Ans ✗ 1. PEI

✗ 2. PCJ

✓ 3. PCI

✗ 4. PDI

Question ID : 26433049052

Status : Answered

Chosen Option : 3



Download SSC CGL, CHSL E-BOOKS

[CLICK HERE](#)

Q.4 If '-' stands for 'x', 'x' stands for '+', '+' stands for '÷' and '÷' stands for '-', then what will be the value of $516 - 2558 + 172 \times 12 \div 7086$?

- Ans
- ☒ 1. 500
 - ☒ 2. 400
 - ☒ 3. 600
 - ☒ 4. 700

Question ID : 26433049107
Status : Answered
Chosen Option : 3

Q.5 Select the option that is related to the third letter-cluster in the same way as the second letter-cluster is related to the first letter-cluster.

POK : HLM :: ORT : ?

- Ans
- ☒ 1. QPL
 - ☒ 2. QOM
 - ☒ 3. QPM
 - ☒ 4. QOL

Question ID : 26433048725
Status : Answered
Chosen Option : 4

Q.6 In a certain code language, '251' means 'Water is Black', '509' means 'Black Her Eyes' and '981' means 'Eyes Like Water'. Find the code for 'is'.

- Ans
- ☒ 1. 2
 - ☒ 2. 5
 - ☒ 3. 9
 - ☒ 4. 1

Question ID : 26433047873
Status : Answered
Chosen Option : 1

Q.7 Select the option that is related to the third letter-cluster in the same way as the second letter-cluster is related to the first letter-cluster.

LON : RRN :: MAD : ?

- Ans
- ☒ 1. IDO
 - ☒ 2. HDO
 - ☒ 3. IEO
 - ☒ 4. HEO

Question ID : 26433048465
Status : Answered
Chosen Option : 2

Q.8 Read the given statements and conclusions carefully. Assuming that the information given in the statements is true, even if it appears to be at variance with commonly known facts, decide which of the given conclusions logically follow(s) from the statements.

Statements:

No apples are trees.

Some trees are dense.

Conclusions:

I. Some apples are dense.

II. No tree is an apple.

- Ans** ☒ 1. Both conclusions I and II follow.
- ☒ 2. Only conclusion I follows.
- ☒ 3. Neither conclusion I nor II follows.
- ☒ 4. Only conclusion II follows.

Question ID : 26433048304

Status : Answered

Chosen Option : 4

Q.9 Select the number from among the given options that can replace the question mark (?) in the following series.

8, 18, 57, 232, ?, 6996

- Ans** ☒ 1. 888
- ☒ 2. 1165
- ☒ 3. 924
- ☒ 4. 828

Question ID : 26433049102

Status : Answered

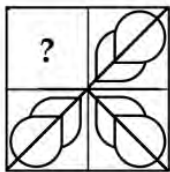
Chosen Option : 2



Download SSC CGL, CHSL E-BOOKS

[CLICK HERE](#)

Q.10 Select the figure from the options that can replace the question mark (?) and complete the given pattern.



Ans

☒ 1.



☒ 2.



☒ 3.



☒ 4.



Question ID : 26433049113

Status : Answered

Chosen Option : 4

Q.11 Select the number from among the given options that can replace the question mark (?) in the following series.

53, 55, 58, 63, ?, 81

Ans ☒ 1. 68

☒ 2. 71

☒ 3. 70

☒ 4. 69

Question ID : 26433048668

Status : Answered

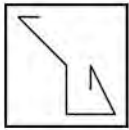
Chosen Option : 3



Download SSC CGL, CHSL E-BOOKS

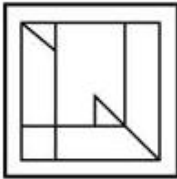
[CLICK HERE](#)

Q.12 Select the option in which the given figure is embedded as its part (rotation is NOT allowed).

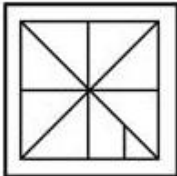


Ans

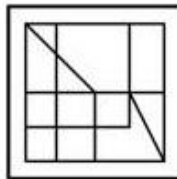
☒ 1.



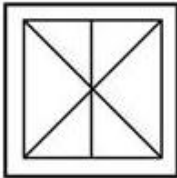
☒ 2.



☒ 3.



☒ 4.



Question ID : 26433048314

Status : Answered

Chosen Option : 3

Q.13 By interchanging the given two signs and two numbers (not digits), which of the following equations will be correct?

÷ and ×, 25 and 12

I. $105 \div 10 \times 75 + 25 - 12 = 3$

II. $75 \times 12 \div 25 + 14 - 10 = 40$

Ans ☒ 1. Only II is correct.

☒ 2. Both I and II are correct.

☒ 3. Only I is correct.

☒ 4. Neither I nor II is correct.

Question ID : 26433049040

Status : Answered

Chosen Option : 1



Download SSC CGL, CHSL E-BOOKS

[CLICK HERE](#)

Q.14 Select the figure from the options that can replace the question mark (?) and complete the pattern (Rotation is not allowed).



Ans

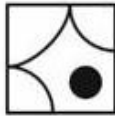
☒ 1.



☒ 2.



☒ 3.



☒ 4.



Question ID : 26433048684

Status : Answered

Chosen Option : 1

Q.15 In a certain code language, 'TRAIND' is written as 'FPKBSU', and 'POKRSB' is written as 'DUTLPQ'. How will 'ANLCGH' be written in that language?

Ans

☒ 1. JIENOB

☒ 2. JIEMOB

☒ 3. JIFMOB

☒ 4. JHEMOB

Question ID : 26433048898

Status : Answered

Chosen Option : 2

Q.16 In a certain code language, 'Grains contain wheat rice' is coded as '8 6 # %', and 'Rice are hard grains' is coded as '# pr % lm'. What is the code for 'grains rice' in that code language?

Ans

☒ 1. # %

☒ 2. % 6

☒ 3. lm 6

☒ 4. # pr

Question ID : 26433048721

Status : Answered

Chosen Option : 1



Download SSC CGL, CHSL E-BOOKS

[CLICK HERE](#)

Q.17 Three males K, J and M are sitting in a row facing towards the south (not necessarily in the same order). Three females R, F and T are sitting in a row facing towards the face of these males (not necessarily in the same order). R is the immediate neighbour of F and T. K is second to the right of M. R is to the immediate left of F. If we arrange the females in the alphabetical order of their names from the left end to the right end, then how many females will face the same male who they faced before this new arrangement?

Ans ☒ 1. One

☐ 2. Two

☐ 3. Three

☐ 4. Zero

Question ID : 26433048680

Status : Answered

Chosen Option : 1

Q.18 Select the option that is related to the fifth number in the same way as the second number is related to the first number and the fourth number is related to the third number.

225 : 36 :: 257 : 56 :: 358 : ?

Ans ☒ 1. 64

☐ 2. 44

☐ 3. 54

☐ 4. 60

Question ID : 26433047883

Status : Answered

Chosen Option : 1



Download SSC CGL, CHSL E-BOOKS

[CLICK HERE](#)

SSC MTS (Non Technical) EXAM STUDY KIT



FREE
SHIPPING 

- ▶ 100% SSC MTS Exam Syllabus Covered
- ▶ PRINTED Notes
- ▶ 8 Books, 700+ Pages
- ▶ 2500+ MCQs
- ▶ Practice Papers
- ▶ 1 Year Current Affairs

50%
OFF

 **SSCPORTAL.IN**
India's Largest Online Community For SSC CGL, MTS, CHSL

SSC MTS PDF NOTES

100% Syllabus Covered

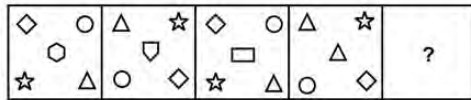


50%
OFF

CLICK HERE

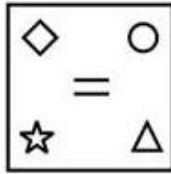
<https://sscpportal.in/study-kit/mts>

Q.19 Select the figure from among the given options that can replace the question mark (?) in the following series.

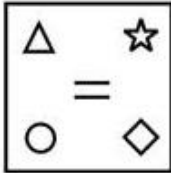


Ans


✓ 1.



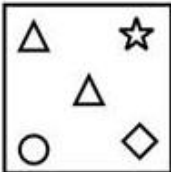
✗ 2.



✗ 3.



✗ 4.



Question ID : 26433047887

Status : Answered

Chosen Option : 1

Q.20 Six persons - Arun, Brij, Chaman, Danish, Evan and Farukh - sit around a circular table facing the centre. Farukh is second to the right of Arun. Danish is second to the left of Chaman. Brij is to the immediate right of Farukh. Who sits third to the left of Ehsan?

Ans

✗ 1. Farukh

✗ 2. Arun

✗ 3. Danish

✓ 4. Chaman

Question ID : 26433049098

Status : Answered

Chosen Option : 4



Download SSC CGL, CHSL E-BOOKS

[CLICK HERE](#)

Q.21 Read the given statements and conclusions carefully. Assuming that the information given in the statements is true, even if it appears to be at variance with commonly known facts, decide which of the given conclusions logically follow(s) from the statements.

Statements:

All radios are electronic items.

Some speakers are electronic items.

Conclusions:

I. No radio is a speaker.

II. Some radios are speakers.

- Ans**
- ☒ 1. Only conclusion I follows.
 - ☒ 2. Only conclusion II follows.
 - ☒ 3. Both conclusions I and II follow.
 - ☒ 4. Either conclusion I or II follows.

Question ID : 26433047880

Status : Answered

Chosen Option : 4

Q.22 Select the set in which the numbers are related in the same way as are the numbers of the following sets.

(NOTE : Operations should be performed on the whole numbers, without breaking down the numbers into its constituent digits. E.g. 13 – Operations on 13 such as adding /deleting /multiplying etc. to 13 can be performed. Breaking down 13 into 1 and 3 and then performing mathematical operations on 1 and 3 is not allowed)

(4, 5, 81) (2, 5, 49)

- Ans**
- ☒ 1. (4, 6, 90)
 - ☒ 2. (4, 7, 111)
 - ☒ 3. (3, 5, 64)
 - ☒ 4. (3, 5, 74)

Question ID : 26433048309

Status : Answered

Chosen Option : 3

Q.23 Six people, F, G, H, I, J and K, got different marks in their examination. G got more marks than F and K. F got more marks than I, but not the highest marks. G scored more marks than H. K got more marks than J, but fewer marks than H. I got the third-lowest marks. F got more marks than K but less than H. F got 59 marks and K got 46 marks. Who among the following got the highest marks?

- Ans**
- ☒ 1. G
 - ☒ 2. J
 - ☒ 3. H
 - ☒ 4. K

Question ID : 26433049099

Status : Answered

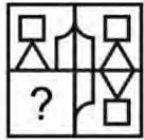
Chosen Option : 1



Download SSC CGL, CHSL E-BOOKS

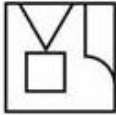
[CLICK HERE](#)

Q.24 Select the figure from the options that can replace the question mark (?) and complete the pattern (Rotation is not allowed).



Ans

✓ 1.



✗ 2.



✗ 3.



✗ 4.



Question ID : 26433048713

Status : Answered

Chosen Option : 1

Q.25 In a certain code language, 'SWISS' is written as 'HDRHH', and 'TABOO' is written as 'GZYL'. How will 'REHAB' be written in that language?

Ans ✗ 1. HHGAK

✗ 2. IGASH

✓ 3. IVSZY

✗ 4. BAHRE

Question ID : 26433048468

Status : Answered

Chosen Option : 3

Section : Numerical Aptitude

Q.1 P can do a piece of work alone in 16 days, Q can do the same work alone in 24 days, while R can do it alone in 48 days. They work together and complete the work, and receive a total of ₹744 as payment for doing the work. What is the share of the person who received the smallest amount?

Ans ✗ 1. ₹118

✓ 2. ₹124

✗ 3. ₹132

✗ 4. ₹112

Question ID : 26433049843

Status : Answered

Chosen Option : 2



Download SSC CGL, CHSL E-BOOKS

[CLICK HERE](#)

Q.2 The marked price of an article is ₹20,000, and while selling, the shopkeeper offers two successive discounts of 12% and d%. If the selling price of the article is ₹16,720, then what is the value of d?

- Ans**
- ☒ 1. 5
 - ☐ 2. 10
 - ☐ 3. 4
 - ☐ 4. 8

Question ID : **26433050378**
 Status : **Answered**
 Chosen Option : 1

Q.3 What is the value of $\frac{\frac{5}{11} \div \frac{7}{25} \times \frac{33}{28} + \frac{5}{12} \times \frac{2}{3} \div \frac{25}{27}}{\frac{6}{11} \times \frac{5}{12} \div \frac{15}{44}}$?

- Ans**
- ☐ 1. $\frac{9670}{1866}$
 - ☐ 2. $\frac{8408}{1955}$
 - ☒ 3. $\frac{6507}{1960}$
 - ☐ 4. $\frac{9567}{1860}$

Question ID : **26433050014**
 Status : **Answered**
 Chosen Option : 3

Q.4 A bag contains coins of ₹1, ₹2 and ₹5 in the ratio 5 : 10 : 6 respectively. The total amount in the bag is ₹275. How many ₹5 coins are in the bag?

- Ans**
- ☒ 1. 30
 - ☐ 2. 35
 - ☐ 3. 20
 - ☐ 4. 25

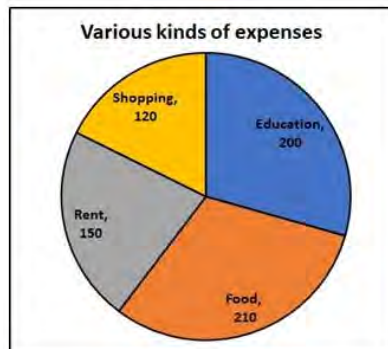
Question ID : **26433050429**
 Status : **Answered**
 Chosen Option : 1

Q.5 The ratio of A and B in an alloy is 2 : 5. If the alloy is made of only A and B, how much amount of B will be there in 210 kg of that alloy?

- Ans**
- ✓ 1. 150 kg
 - ✗ 2. 135 kg
 - ✗ 3. 60 kg
 - ✗ 4. 180 kg

Question ID : 26433050005
Status : Answered
Chosen Option : 1

Q.6 The following pie chart gives the ratio of various kinds of expenses of a particular family for a week.



If the amount spent on shopping for the week is ₹1,000, what is the total amount spent on food?

- Ans**
- ✗ 1. ₹1,450
 - ✓ 2. ₹1,750
 - ✗ 3. ₹1,650
 - ✗ 4. ₹1,550

Question ID : 26433049239
Status : Answered
Chosen Option : 2



Download SSC CGL, CHSL E-BOOKS

[CLICK HERE](#)

Q.7 The following table shows the demand and the production of the items made by four different companies.

Company Name	Demand (no. of items)	Production (no. of items)
Company A	3500	1500
Company B	500	2000
Company C	2500	1000
Company D	1000	3500

How many extra number of items did company B produce over and above the number of items demanded from it?

- Ans**
- ☐ 1. 2500
 - ☐ 2. 2000
 - ☒ 3. 1500
 - ☐ 4. 500

Question ID : **26433050437**
Status : **Answered**
Chosen Option : **3**

Q.8 There are 45 students in a class. 80% of the students passed the exam. How many students failed in the exam?

- Ans**
- ☐ 1. 8
 - ☒ 2. 9
 - ☐ 3. 5
 - ☐ 4. 11

Question ID : **26433050424**
Status : **Answered**
Chosen Option : **2**

Q.9 In a classroom consisting of boys and girls, the average marks obtained by the boys is 90. If the average of the whole class is 92, and the ratio of the number of boys to that of girls is 3 : 2, what is the average marks scored by the girls?

- Ans**
- ☐ 1. 97
 - ☐ 2. 94
 - ☐ 3. 96
 - ☒ 4. 95

Question ID : **26433050372**
Status : **Answered**
Chosen Option : **4**

Q.10 There are two numbers such that the first number is twice the second number. If their average is 30, then what is the positive difference between the two numbers?

- Ans**
- ☒ 1. 20
 - ☐ 2. 10
 - ☐ 3. 15
 - ☐ 4. 25

Question ID : **26433049603**
Status : **Answered**

Q.11 The following bar chart shows the number of pens (in '000s) sold by 6 different shops during a given year.



If the cost of each pen is ₹4.50, then what is the average revenue earned per shop?

- Ans**
- ☒ 1. ₹92,000
 - ☒ 2. ₹96,000
 - ☒ 3. ₹84,000
 - ☒ 4. ₹90,000

Question ID : 26433050016

Status : Answered

Chosen Option : 4

Q.12 The simple interest on a sum deposited at 10% p.a. for 4 years is ₹20,000. What will be the compound interest on the same sum at half of the above rate of interest for 2 years, interest compounded yearly?

- Ans**
- ☒ 1. ₹5,010
 - ☒ 2. ₹5,125
 - ☒ 3. ₹5,020
 - ☒ 4. ₹5,015

Question ID : 26433050381

Status : Answered

Chosen Option : 2

Q.13 In an examination, 85% of the students passed. If 75 students failed, then how many students appeared for the examination?

- Ans**
- ☒ 1. 540
 - ☒ 2. 500
 - ☒ 3. 520
 - ☒ 4. 480

Question ID : 26433049825

Status : Answered

Chosen Option : 2



Download SSC CGL, CHSL E-BOOKS

[CLICK HERE](#)

Q.14 Simplify the following expression.

$$15 - \{4 - (4 - 1)\} + 27$$

- Ans
- ☒ 1. 38
 - ☒ 2. 41
 - ☐ 3. 40
 - ☐ 4. 42

Question ID : 26433049219
Status : Answered
Chosen Option : 2

Q.15 The area of a trapezium shaped field is 1785 square feet. The distance between the two parallel sides is 35 feet and one of the parallel sides is 42 feet long. What is the length of the other parallel side?

- Ans
- ☒ 1. 60 feet
 - ☐ 2. 35 feet
 - ☐ 3. 65 feet
 - ☐ 4. 40 feet

Question ID : 26433050466
Status : Answered
Chosen Option : 1

Q.16 The product of two numbers is 1296. If the highest common factor of the two numbers is 12, then what is the least common multiple of the two numbers?

- Ans
- ☒ 1. 108
 - ☐ 2. 60
 - ☐ 3. 84
 - ☐ 4. 120

Question ID : 26433049662
Status : Answered
Chosen Option : 1

Q.17 The average of 5 terms is 15. If the first 4 terms are 12, 17, 23 and 8, what will be the fifth term?

- Ans
- ☐ 1. 30
 - ☒ 2. 15
 - ☐ 3. 22
 - ☐ 4. 20

Question ID : 26433050446
Status : Answered
Chosen Option : 2

Q.18 A 600-metre-long train is running at the speed of 45 km/h. How much time will the train take to completely cross a stationary pole?

- Ans**
- ☒ 1. 60 s
 - ☒ 2. 48 s
 - ☐ 3. 54 s
 - ☐ 4. 42 s

Question ID : 26433049995
Status : Answered
Chosen Option : 2

Q.19 Two cubes, each having a total surface area of 150 cm^2 , are joined together to form a cuboid. Find the total surface area of the resulting cuboid.

- Ans**
- ☐ 1. 225 cm^2
 - ☒ 2. 250 cm^2
 - ☐ 3. 275 cm^2
 - ☐ 4. 300 cm^2

Question ID : 26433049240
Status : Answered
Chosen Option : 2

Q.20 Samira can do a piece of work in 9 days. Sujata can do $\frac{1}{3}$ of the same work in 3 days. If Samira worked alone for 2 days and left, then, in how many days can Sujata alone complete the remaining work?

- Ans**
- ☒ 1. 7 days
 - ☐ 2. 8 days
 - ☐ 3. 9 days
 - ☐ 4. 12 days

Question ID : 26433049436
Status : Answered
Chosen Option : 1

Q.21 If a person purchases an item at ₹3,000 and he sells it at 10% profit, then find the selling price of the item.

- Ans**
- ☐ 1. ₹3,200
 - ☐ 2. ₹3,100
 - ☒ 3. ₹3,300
 - ☐ 4. ₹3,400

Question ID : 26433049227
Status : Answered
Chosen Option : 3



Download SSC CGL, CHSL E-BOOKS

[CLICK HERE](#)

Q.22 Walking towards a bus stop at $\frac{5}{7}$ of his usual speed, Rakesh missed the bus by 10 minutes. What is the usual time that Rakesh takes to reach the bus stop just in time for the bus?

- Ans
- ☐ 1. 30 minutes
 - ☐ 2. 20 minutes
 - ☐ 3. 15 minutes
 - ☒ 4. 25 minutes

Question ID : 26433050434
Status : Answered
Chosen Option : 4

Q.23 Vijay sold a watch at a loss of 50%. If the loss is ₹2,400, then what is the selling price of the watch?

- Ans
- ☐ 1. ₹1,200
 - ☒ 2. ₹2,400
 - ☐ 3. ₹4,800
 - ☐ 4. ₹3,600

Question ID : 26433049647
Status : Answered
Chosen Option : 2

Q.24 The length of a rectangle is 4 times of its breadth. If the area of the rectangle is 576 cm^2 , then what is the perimeter of this rectangle?

- Ans
- ☐ 1. 112 cm
 - ☐ 2. 60 cm
 - ☐ 3. 56 cm
 - ☒ 4. 120 cm

Question ID : 26433049611
Status : Answered
Chosen Option : 4

Q.25 What will be the amount payable on maturity on a principal of ₹12,000, invested for 3 years, at the rate of 10% per annum, compounded annually?

- Ans
- ☐ 1. ₹14,928
 - ☒ 2. ₹15,972
 - ☐ 3. ₹16,826
 - ☐ 4. ₹18,922

Question ID : 26433049658
Status : Answered
Chosen Option : 2

Section : General Awareness

Q.1 Who among the following freedom fighters of India was assassinated?

- Ans ☐ 1. Jawaharlal Nehru
☒ 2. Mahatma Gandhi
☐ 3. Nana Sahib
☐ 4. Bal Gangadhar Tilak

Question ID : **26433046633**
Status : **Answered**
Chosen Option : **2**

Q.2 _____ was a Sarod player.

- Ans ☒ 1. Buddhaddev Das Gupta
☐ 2. Bhajan Sopori
☐ 3. Annapurna Devi
☐ 4. Pt. Shiv Kumar Sharma

Question ID : **26433047786**
Status : **Not Answered**
Chosen Option : **--**

Q.3 Which of the following is NOT an example of an abiotic component of the ecosystem?

- Ans ☐ 1. Soil
☐ 2. Wind
☐ 3. Rainfall
☒ 4. Animal

Question ID : **26433047400**
Status : **Answered**
Chosen Option : **4**

Q.4 Manu writes about a sea which is so salty that it is very difficult to drown in it. Which sea is it?

- Ans ☐ 1. Arabian Sea
☒ 2. Dead Sea
☐ 3. Green Sea
☐ 4. Red Sea

Question ID : **26433047051**
Status : **Answered**
Chosen Option : **1**

Q.5 Which of the following is the only active volcanic island in India?

- Ans ☐ 1. Amindivi Island
☐ 2. Laccadive Island
☐ 3. Minicoy Island
☒ 4. Barren Island

Question ID : **26433046628**
Status : **Answered**

Q.6 Which of the following compounds are also known as aliphatic compounds?

- Ans ☒ 1. Aromatic compounds
☒ 2. Acyclic compounds
☒ 3. Cyclic compounds
☒ 4. Benzenoid compounds

Question ID : **26433047823**
Status : **Not Answered**
Chosen Option : --

Q.7 The Parliament of India is divided into _____ houses.

- Ans ☒ 1. Five
☒ 2. Three
☒ 3. Four
☒ 4. Two

Question ID : **26433046639**
Status : **Answered**
Chosen Option : 4

Q.8 What does the R stand for in MICR?

- Ans ☒ 1. Recognition
☒ 2. Reader
☒ 3. Route
☒ 4. Request

Question ID : **26433047792**
Status : **Answered**
Chosen Option : 1

Q.9 Megasthenes was an ambassador who was sent to the court of _____ by the _____ ruler.

- Ans ☒ 1. Chandragupta Maurya, Greek
☒ 2. Babur, Greek
☒ 3. Shah Jahan, Chinese
☒ 4. Sikandar Lodhi, Chinese

Question ID : **26433047781**
Status : **Answered**
Chosen Option : 1



Download SSC CGL, CHSL E-BOOKS

[CLICK HERE](#)

Q.10 A person is said to be in marginal employment if s/he has worked for fewer than _____ months in the year preceding the Census.

Ans ☒ 1. 12

☒ 2. 6

☒ 3. 3

☒ 4. 9

Question ID : 26433047854

Status : Not Answered

Chosen Option : --

Q.11 Which of the following Articles of the Indian Constitution provides protection of life and personal liberty ?

Ans ☒ 1. Article 21

☒ 2. Article 370

☒ 3. Article 57

☒ 4. Article 250

Question ID : 26433047063

Status : Answered

Chosen Option : 1

Q.12 What is the length of the side-line in field-hockey?

Ans ☒ 1. 91.4 m

☒ 2. 72.3 m

☒ 3. 110.0 m

☒ 4. 102.1 m

Question ID : 26433047840

Status : Not Answered

Chosen Option : --

Q.13 Which of the following novels is authored by EM Forster?

Ans ☒ 1. Invisible Man

☒ 2. Don Quixote

☒ 3. A passage to India

☒ 4. Beloved

Question ID : 26433047785

Status : Not Answered

Chosen Option : --



Download SSC CGL, CHSL E-BOOKS

[CLICK HERE](#)

Q.14 To which of the following classes do parrots belong?

- Ans
- ☒ 1. Mammalia
 - ☒ 2. Reptilia
 - ☒ 3. Aves
 - ☒ 4. Amphibia

Question ID : 26433046625
Status : Answered
Chosen Option : 3

Q.15 Which of the following is a traditional masked dance of West Bengal?

- Ans
- ☒ 1. Kavadi
 - ☒ 2. Gidda
 - ☒ 3. Gambhira
 - ☒ 4. Jawara

Question ID : 26433047395
Status : Not Answered
Chosen Option : --

Q.16 The Lai Haraoba Festival is celebrated by the _____.

- Ans
- ☒ 1. Khasis
 - ☒ 2. Sumis
 - ☒ 3. Meiteis
 - ☒ 4. Deoris

Question ID : 26433047821
Status : Not Answered
Chosen Option : --

Q.17 Who among the following was the first transgender Bharatanatyam dancer to receive Padma Shri in 2019?

- Ans
- ☒ 1. Naaz Joshi
 - ☒ 2. Laxmi Narayan Tripathi
 - ☒ 3. Manjamma Jogati
 - ☒ 4. Narthaki Nataraj

Question ID : 26433046637
Status : Not Answered
Chosen Option : --

Q.18 Which of the following is NOT a cause of unemployment in India?

- Ans
- ☒ 1. Slow economic growth
 - ☒ 2. Increase in labour force
 - ☒ 3. Lack of infrastructure development
 - ☒ 4. Lack of housing facilities

Question ID : 26433047005
Status : Answered



Download SSC CGL, CHSL E-BOOKS

CLICK HERE

Q.19 Who among the following was NOT one of Akbar's 'Navratna' (nine gems)?

- Ans ☒ 1. Raja Man Singh
☒ 2. Abul Fazal
☒ 3. Raja Todarmal
☒ 4. Rana Amar Singh

Question ID : 26433047057
Status : Answered
Chosen Option : 4

Q.20 Which Mughal monument was built by the Mughal emperor Aurangzeb in the memory of his wife, Dilras Banu Begum?

- Ans ☒ 1. Taj Mahal
☒ 2. Bibi Tomb
☒ 3. Rani Ki Vav
☒ 4. Bibi Ka Maqbara

Question ID : 26433047047
Status : Not Answered
Chosen Option : --

Q.21 As on February 2022, who among the following was recently appointed as the UGC Chairman?

- Ans ☒ 1. M Jagadesh Kumar
☒ 2. Rajiv Saran
☒ 3. Jagjeevan Desai
☒ 4. Ravindra Katoti

Question ID : 26433047769
Status : Answered
Chosen Option : 3

Q.22 Which of the following statements is correct regarding Simon commission?
I. In 1927, the British government in England decided to send a commission headed by Lord Simon to decide India's Political future.
II. The commission had no Indian representative.

- Ans ☒ 1. Only I
☒ 2. Only II
☒ 3. Both I and II
☒ 4. Neither I nor II

Question ID : 26433047409
Status : Not Answered
Chosen Option : --



Download SSC CGL, CHSL E-BOOKS

CLICK HERE

SSC MTS (Non Technical) EXAM STUDY KIT



FREE
SHIPPING 

- ▶ 100% SSC MTS Exam Syllabus Covered
- ▶ PRINTED Notes
- ▶ 8 Books, 700+ Pages
- ▶ 2500+ MCQs
- ▶ Practice Papers
- ▶ 1 Year Current Affairs

50%
OFF

 **SSCPORTAL.IN**
India's Largest Online Community For SSC CGL, SSC CHSL, SSC MTS, SSC JE, SSC JPO, SSC Stenographer, SSC Tax Assistant, SSC Data Entry Operator, SSC Multi-Tasking Non-Graduate, SSC Junior Engineer, SSC Junior Architect, SSC Junior Engineer (Mechanical), SSC Junior Engineer (Electrical), SSC Junior Engineer (Civil), SSC Junior Engineer (Mechanical), SSC Junior Engineer (Electrical), SSC Junior Engineer (Civil), SSC Junior Engineer (Mechanical), SSC Junior Engineer (Electrical), SSC Junior Engineer (Civil)

SSC MTS PDF NOTES

100% Syllabus Covered



50%
OFF

CLICK HERE

<https://sscpportal.in/study-kit/mts>

Q.23 Which team did Australia defeat in the final of ICC Men's T20 World Cup final played in November 2021?

Ans ☒ 1. New Zealand

☐ 2. England

☐ 3. India

☐ 4. Pakistan

Question ID : 26433047240

Status : Answered

Chosen Option : 1

Q.24 The HVJ pipeline does NOT run through the state of _____.

Ans ☐ 1. Rajasthan

☐ 2. Gujarat

☐ 3. Madhya Pradesh

☒ 4. Karnataka

Question ID : 26433047052

Status : Not Answered

Chosen Option : --

Q.25 In March 2022, the _____ campaign was launched by Gajendra Singh Shekhawat, the Union Minister of Jal Shakti, for greywater management.

Ans ☐ 1. Donate-a-Pension

☒ 2. Sujalam 2.0

☐ 3. SAMARTH

☐ 4. Stand Up India

Question ID : 26433047043

Status : Answered

Chosen Option : 3



Download SSC CGL, CHSL E-BOOKS

[CLICK HERE](#)