

## Multi Tasking Non Technical Staff Havaladar CBIC and CBN Examination 2021

Roll Number	
Candidate Name	
Venue Name	
Exam Date	15/07/2022
Exam Time	1:00 PM - 2:30 PM
Subject	MTS Non technical and Havaladar Examination 2021

Section : General English

**Q.1** Select the most appropriate option to fill in the blank.

My son turned a year older on his birthday recently \_\_\_\_\_ March 14.

- Ans
- 1. at
  - 2. over
  - 3. in
  - 4. on

Question ID : 26433050797  
Status : Answered  
Chosen Option : 3

**Q.2** Parts of the following sentence have been given as options. One of them may contain an error. Select the part that contains the error from the given options. If you don't find any error, mark 'No error' as your answer.

If you want to help bees, make sure your family don't use pesticides in your yard.

- Ans
- 1. use pesticides in your yard
  - 2. If you want to help bees,
  - 3. make sure your family don't
  - 4. No error

Question ID : 26433050656  
Status : Answered  
Chosen Option : 3

**Q.3** Select the most appropriate option to fill in the blank.

He didn't tell me anything \_\_\_\_\_ that he needed some money.

- Ans
- 1. despite
  - 2. except
  - 3. in spite
  - 4. though

Question ID : 26433051501  
Status : Answered  
Chosen Option : 2

Q.4 Select the option that can be used as a one-word substitute for the given group of words.

The study of human mind and behaviour

- Ans  1. Paediatrics  
 2. Botany  
 3. Physiology  
 4. Psychology

Question ID : 26433050944  
Status : Answered  
Chosen Option : 4

Q.5 Select the correctly spelt word.

- Ans  1. Librery  
 2. Library  
 3. Libraery  
 4. Libarary

Question ID : 26433050572  
Status : Answered  
Chosen Option : 2

Q.6 Select the option that will improve the underlined part of the given sentence. In case no improvement is needed, select 'No improvement required'.

Water and minerals presented to the soil are absorbed by the roots..

- Ans  1. No improvement required  
 2. presented at the soil  
 3. present in the soil  
 4. present for the soil

Question ID : 26433051395  
Status : Answered  
Chosen Option : 3

Q.7 Select the option that can be used as a one-word substitute for the given group of words.

One who studies insect life

- Ans  1. Activist  
 2. Cardiologist  
 3. Entomologist  
 4. Naturalist

Question ID : 26433051172  
Status : Answered  
Chosen Option : 3

Q.8 Select the most appropriate option to fill in the blank.

Give yourself a \_\_\_\_\_ and get some rest.

- Ans  1. Brake  
 2. Break  
 3. Blank  
 4. Brick

Question ID : 26433050496  
Status : Answered  
Chosen Option : 2

Q.9 Select the most appropriate meaning of the underlined idiom in the given sentence.

Keep an eye on your sister as she might run away.

- Ans  1. To help someone  
 2. To stop caring  
 3. To act superior to someone  
 4. To watch over attentively

Question ID : 26433050569  
Status : Answered  
Chosen Option : 4

Q.10 Select the most appropriate synonym of the given word.

Definite

- Ans  1. precise  
 2. Ample  
 3. Inclusive  
 4. General

Question ID : 26433050644  
Status : Answered  
Chosen Option : 2

Q.11 Select the most appropriate option to fill in the blank.

The commander abjured his \_\_\_\_\_ to the king.

- Ans  1. regulation  
 2. reliance  
 3. sequence  
 4. allegiance

Question ID : 26433051234  
Status : Answered  
Chosen Option : 4

Q.12 Select the option that corrects the misspelt words in the given sentence.

There is a feling of hopelesness among the youth.

- Ans
- 1. There is a feeling of hoplesnes among the youth
  - 2. There is a fealing of hopelesnes among the youth.
  - 3. There is a feling of hopelesness among the youth.
  - 4. There is a feeling of hopelessness among the youth.

Question ID : 26433050651  
Status : Answered  
Chosen Option : 4

Q.13 Select the most appropriate ANTONYM of the underlined word in the given sentence.

All these rules seem to be irrelevant.

- Ans
- 1. Reluctant
  - 2. Meaningful
  - 3. Meagre
  - 4. Incidental

Question ID : 26433050565  
Status : Answered  
Chosen Option : 1

Q.14 Select the most appropriate option to fill in the blank.

Mr. Pearson interrupted their harmless \_\_\_\_\_ and reminded them of the seriousness of the situation.

- Ans
- 1. field
  - 2. trouble
  - 3. guile
  - 4. chatter

Question ID : 26433051441  
Status : Answered  
Chosen Option : 4

Q.15 Select the most appropriate ANTONYM of the given word.

Impressive

- Ans
- 1. Dramatic
  - 2. Significant
  - 3. Ordinary
  - 4. Industrious

Question ID : 26433050564  
Status : Answered  
Chosen Option : 3

Q.16 Select the most appropriate meaning of the given idiom.

No spring chicken

- Ans
- 1. A person who is courageous
  - 2. A person who steals
  - 3. A person who is no longer young
  - 4. A person who lies

Question ID : 26433051229  
Status : Answered  
Chosen Option : 3

Q.17 Parts of the following sentence have been given as options. One of them may contain an error. Select the part that contains the error from the given options. If you don't find any error, mark 'No error' as your answer.

The last time this competition was held at 2017.

- Ans
- 1. No error
  - 2. this competition was
  - 3. held at 2017
  - 4. The last time

Question ID : 26433050628  
Status : Answered  
Chosen Option : 4

Q.18 Select the most appropriate synonym of the given word.

Proficient

- Ans
- 1. Dominant
  - 2. Accomplished
  - 3. Modest
  - 4. Predictable

Question ID : 26433051433  
Status : Answered  
Chosen Option : 4

Q.19 Select the option that will improve the bracketed part of the sentence. In case no improvement is needed, select 'No improvement required'.

In the past, (he spent many an hours playing the harp across the) 5th Ave.

- Ans
- 1. he spent many an hour playing the harp across the
  - 2. he spent much hours playing the harp across the
  - 3. No improvement required
  - 4. he had spent many an hours playing the harp across the

Question ID : 26433050856  
Status : Answered  
Chosen Option : 1

# SSC MTS (Non Technical) EXAM STUDY KIT



FREE SHIPPING 

- ▶ 100% SSC MTS Exam Syllabus Covered
- ▶ PRINTED Notes
- ▶ 8 Books, 700+ Pages
- ▶ 2500+ MCQs
- ▶ Practice Papers
- ▶ 1 Year Current Affairs

**50% OFF**

 **SSCPORTAL.IN**  
India's largest online community for SSC, CDS, Railways

# SSC MTS PDF NOTES

100% Syllabus Covered



**CLICK HERE**

<https://sscpportal.in/study-kit/mts>

**Q.20** Parts of the following sentence have been given as options. One of them may contain an error. Select the part that contains the error from the given options. If you don't find any error, mark 'No error' as your answer.

A part of me don't wanted you to go to the party.

- Ans
- 1. No error
  - 2. A part of me
  - 3. don't wanted you
  - 4. to go to the party

Question ID : 26433050629

Status : Answered

Chosen Option : 3

**Comprehension:**

In the following passage, some words have been deleted. Read the passage carefully and select the most appropriate option to fill in each blank.

Starting and (1) \_\_\_\_\_ a positive daily morning routine is an investment and a way to do your best work every day. It also gives you structure, building forward-moving habits and creating momentum for the rest of the day. It helps you to (2) \_\_\_\_\_ priorities, limit procrastination, keep track of your goals. Your brain is at its (3) \_\_\_\_\_ in the morning. And you can get your best work and tasks done without struggle. But distractions can get the best of us. You get distracted and procrastinate. You make plans the previous day to get your most (4) \_\_\_\_\_ task done first thing in the morning, but you don't follow through on them. You are able to get things (5) \_\_\_\_\_ but not the right things.

**SubQuestion No : 21**

**Q.21** Select the most appropriate option to fill in blank number 1.

- Ans
- 1. maintainable
  - 2. maintaining
  - 3. maintain
  - 4. maintenance

Question ID : 26433051426

Status : Answered

Chosen Option : 2

**Comprehension:**

In the following passage, some words have been deleted. Read the passage carefully and select the most appropriate option to fill in each blank.

Starting and (1) \_\_\_\_\_ a positive daily morning routine is an investment and a way to do your best work every day. It also gives you structure, building forward-moving habits and creating momentum for the rest of the day. It helps you to (2) \_\_\_\_\_ priorities, limit procrastination, keep track of your goals. Your brain is at its (3) \_\_\_\_\_ in the morning. And you can get your best work and tasks done without struggle. But distractions can get the best of us. You get distracted and procrastinate. You make plans the previous day to get your most (4) \_\_\_\_\_ task done first thing in the morning, but you don't follow through on them. You are able to get things (5) \_\_\_\_\_ but not the right things.

**SubQuestion No : 22**

**Q.22** Select the most appropriate option to fill in blank number 2.

- Ans  1. established  
 2. establishing  
 3. establishment  
 4. establish

Question ID : 26433051427

Status : Answered

Chosen Option : 4

**Comprehension:**

In the following passage, some words have been deleted. Read the passage carefully and select the most appropriate option to fill in each blank.

Starting and (1) \_\_\_\_\_ a positive daily morning routine is an investment and a way to do your best work every day. It also gives you structure, building forward-moving habits and creating momentum for the rest of the day. It helps you to (2) \_\_\_\_\_ priorities, limit procrastination, keep track of your goals. Your brain is at its (3) \_\_\_\_\_ in the morning. And you can get your best work and tasks done without struggle. But distractions can get the best of us. You get distracted and procrastinate. You make plans the previous day to get your most (4) \_\_\_\_\_ task done first thing in the morning, but you don't follow through on them. You are able to get things (5) \_\_\_\_\_ but not the right things.

**SubQuestion No : 23**

**Q.23** Select the most appropriate option to fill in blank number 3.

- Ans  1. pick  
 2. peak  
 3. pique  
 4. peek

Question ID : 26433051428

Status : Answered

Chosen Option : 2





**Comprehension:**

In the following passage, some words have been deleted. Read the passage carefully and select the most appropriate option to fill in each blank.

Starting and (1) \_\_\_\_\_ a positive daily morning routine is an investment and a way to do your best work every day. It also gives you structure, building forward-moving habits and creating momentum for the rest of the day. It helps you to (2) \_\_\_\_\_ priorities, limit procrastination, keep track of your goals. Your brain is at its (3) \_\_\_\_\_ in the morning. And you can get your best work and tasks done without struggle. But distractions can get the best of us. You get distracted and procrastinate. You make plans the previous day to get your most (4) \_\_\_\_\_ task done first thing in the morning, but you don't follow through on them. You are able to get things (5) \_\_\_\_\_ but not the right things.

**SubQuestion No : 24**

**Q.24** Select the most appropriate option to fill in blank number 4.

- Ans
- 1. importantly
  - 2. importance
  - 3. important
  - 4. Import

Question ID : 26433051429

Status : Answered

Chosen Option : 3

**Comprehension:**

In the following passage, some words have been deleted. Read the passage carefully and select the most appropriate option to fill in each blank.

Starting and (1) \_\_\_\_\_ a positive daily morning routine is an investment and a way to do your best work every day. It also gives you structure, building forward-moving habits and creating momentum for the rest of the day. It helps you to (2) \_\_\_\_\_ priorities, limit procrastination, keep track of your goals. Your brain is at its (3) \_\_\_\_\_ in the morning. And you can get your best work and tasks done without struggle. But distractions can get the best of us. You get distracted and procrastinate. You make plans the previous day to get your most (4) \_\_\_\_\_ task done first thing in the morning, but you don't follow through on them. You are able to get things (5) \_\_\_\_\_ but not the right things.

**SubQuestion No : 25**

**Q.25** Select the most appropriate option to fill in blank number 5.

- Ans
- 1. doable
  - 2. do
  - 3. did
  - 4. done

Question ID : 26433051430

Status : Answered

Chosen Option : 4

Section : General Intelligence and Reasoning

Q.1 Marks obtained by the seven students of a tuition class, P, Q, R, S, T, U and V, are mentioned. P scored second highest marks in the class. Marks scored by V were more than only one of the persons. S's score was more than T but less than P. Three people got higher than T and three got lesser than T. Neither R nor Q received the lowest marks. Given that no two students have the same marks, whose marks were the lowest?

- Ans  1. S  
 2. U  
 3. T  
 4. V

Question ID : 26433048053  
Status : Answered  
Chosen Option : 3

Q.2 Read the given statements and conclusions carefully. Assuming that the information given in the statements is true, even if it appears to be at variance with commonly known facts, decide which of the given conclusions logically follow(s) from the statements.

Statements:

- I. All X are A.  
II. Some R are X.

Conclusions:

- I. Some A are R.  
II. All R are A.

- Ans  1. None of the conclusions follow  
 2. Both conclusions I and II follow  
 3. Only conclusion II follows  
 4. Only conclusion I follows

Question ID : 26433048803  
Status : Answered  
Chosen Option : 4

Q.3 Read the given statements and conclusions carefully. Assuming that the information given in the statements is true, even if it appears to be at variance with commonly known facts, decide which of the given conclusions logically follow(s) from the statements.

Statements:

- Some pillows are covers.  
All bedsheets are covers.

Conclusions:

- I. All covers are bedsheets.  
II. Some pillows are bedsheets.

- Ans  1. Only conclusion II follows.  
 2. Only conclusion I follows.  
 3. Neither conclusion I nor II follow.  
 4. Both conclusions I and II follow.

Question ID : 26433047955  
Status : Answered  
Chosen Option : 3

Q.4 Select the option that is related to the fifth term in the same way as the second term is related to the first term and the fourth term is related to the third term.

CAT : FFA :: ANT : DSA :: SUN : ?

- Ans
- 1. VYU
  - 2. VZT
  - 3. VZU
  - 4. VZV

Question ID : 26433047944  
Status : Answered  
Chosen Option : 3

Q.5 Select the option that is related to the third letter-cluster in the same way as the second letter-cluster is related to the first letter-cluster.

PRM : INL :: AJK : ?

- Ans
- 1. GFW
  - 2. GEX
  - 3. GFX
  - 4. GEW

Question ID : 26433048974  
Status : Answered  
Chosen Option : 1

Q.6 In a certain code language, 'TALENT' is written as 'VXNB PQ', and 'HORDIN' is written as 'JLTAKK'. How will 'AKRPQB' be written in that language?

- Ans
- 1. CTHMSY
  - 2. CHTNTY
  - 3. CHTMSY
  - 4. CITMSY

Question ID : 26433048597  
Status : Answered  
Chosen Option : 3

Q.7 Select the option that is related to the fifth term in the same way as the second term is related to the first term and the fourth term is related to the third term.

ABROAD : RBADAO :: DEMAND : MEDDNA :: HONEST : ?

- Ans
- 1. NOHTSE
  - 2. NHOTES
  - 3. TESNOH
  - 4. NOHTES

Question ID : 26433047945  
Status : Answered  
Chosen Option : 1

Q.8 Select the option that is related to the fifth number in the same way as the second number is related to the first number and the fourth number is related to the third number.

121 : 145 :: 169 : 197 :: 256 : ?

- Ans  1. 325  
 2. 280  
 3. 290  
 4. 288

Question ID : 26433047958  
Status : Answered  
Chosen Option : 3

Q.9 Which two numbers should be interchanged to make the given equation correct?

$10 + 2 \times 12 \div 6 - 4 = 16$

- Ans  1. 6 and 12  
 2. 2 and 10  
 3. 10 and 4  
 4. 2 and 4

Question ID : 26433048060  
Status : Answered  
Chosen Option : 4

Q.10 Select the number from among the given options that can replace the question mark (?) in the following series.

503, 509, 521, 539, ?

- Ans  1. 576  
 2. 545  
 3. 563  
 4. 535

Question ID : 26433048056  
Status : Answered  
Chosen Option : 3

Q.11 Select the option that is related to the fifth number in the same way as the second number is related to the first number and the fourth number is related to the third number.

75 : 63 :: 189 : 171 :: 55 : ?

- Ans  1. 45  
 2. 43  
 3. 37  
 4. 54

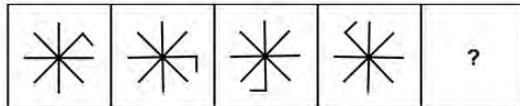
Question ID : 26433048032  
Status : Answered  
Chosen Option : 1

**Q.12** Select the option in which the two numbers are related in the same way as are the numbers in the given number pair.  
135 : 27

- Ans
- 1. 705 : 143
  - 2. 595 : 117
  - 3. 625 : 125
  - 4. 865 : 215

Question ID : 26433048792  
Status : Answered  
Chosen Option : 3

**Q.13** Select the figure from among the given options that can replace the question mark (?) in the following series.



Ans

- 1.
- 2.
- 3.
- 4.

Question ID : 26433048038  
Status : Answered  
Chosen Option : 2

**Q.14** In a certain code language, 'They play Football' is written as 'po la ta', 'They like playing' is written as 'la to zu', 'Football is best game' is written as 'xu po ba cu'. How will 'Football' be written in that language?

- Ans
- 1. po
  - 2. xu
  - 3. zu
  - 4. la

Question ID : 26433047899

Status : Answered

Chosen Option : 1

**Q.15** A, B, C, D, E, F, G and H are sitting around a square table facing the centre of the table. Some of them are sitting at the corners while some are sitting at the exact centre of the sides. F sits third to the left of H. F sits at one of the corners. C sits second to the right of G. G does not sit at any of the corners. G is not an immediate neighbour of F. A is an immediate neighbour of B. A does not sit in any of the middles of the sides. Only three people sit between A and D. Who sits second to the left of D?

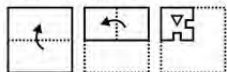
- Ans
- 1. G
  - 2. F
  - 3. E
  - 4. A

Question ID : 26433048026

Status : Answered

Chosen Option : 3

**Q.16** The sequence of folding a piece of paper and the manner in which the folded paper has been cut is shown in the following figures. How would this paper look when unfolded?



Ans

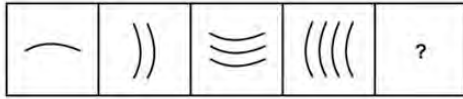
- 1.
- 2.
- 3.
- 4.

Question ID : 26433048787

Status : Answered

Chosen Option : 2

Q.17 Select the figure from among the given options that can replace the question mark (?) in the following series.

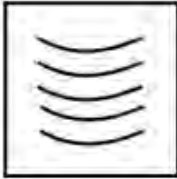


Ans

✗ 1.



✗ 2.



✓ 3.



✗ 4.



Question ID : 26433047962

Status : Answered

Chosen Option : 3

Q.18 Select the correct mirror image of the given figure when the mirror is placed at MN as shown below.



Ans

✓ 1.



✗ 2.



✗ 3.



✗ 4.



Question ID : 26433048365

Status : Answered

Chosen Option : 1

Q.19 In a certain code language, 'ENJOY' is coded as '25' and 'DOCTOR' is coded as '36'.  
How will 'MILLION' be coded in that language?

- Ans
- 1. 39
  - 2. 49
  - 3. 51
  - 4. 64

Question ID : 26433047947  
Status : Answered  
Chosen Option : 2

Q.20 What will come in the place of '?' in the following equation, if 'x' and '-' are interchanged and also '+' and '÷' are interchanged?

$$10 \times 4 + 2 - 5 \div 4 = ?$$

- Ans
- 1. 6
  - 2. 8
  - 3. 4
  - 4. 2

Question ID : 26433048036  
Status : Answered  
Chosen Option : 3

Q.21 Select the option figure in which the given figure is embedded.



Ans

- 1.
- 2.
- 3.
- 4.

Question ID : 26433048810  
Status : Answered  
Chosen Option : 4



# SSC MTS (Non Technical) EXAM STUDY KIT



FREE SHIPPING 

- ▶ 100% SSC MTS Exam Syllabus Covered
- ▶ PRINTED Notes
- ▶ 8 Books, 700+ Pages
- ▶ 2500+ MCQs
- ▶ Practice Papers
- ▶ 1 Year Current Affairs

**50% OFF**

 **SSCPORTAL.IN**  
India's largest online community for SSC, CDS, Railways

# SSC MTS PDF NOTES

100% Syllabus Covered



**CLICK HERE**

<https://sscpportal.in/study-kit/mts>

Q.22 Five people A, B, C, D and E are sitting in a straight row facing North. E is sitting immediately next to D, C is sitting immediately next to B, and B is not sitting with A who is on the left end of the bench. C is in the second position from the right. E is to the right of D and A. E and C are sitting together. What is the position of E?

- Ans
- 1. Immediate neighbour of both A and B
  - 2. Immediate neighbour of both C and A
  - 3. Immediate neighbour of both D and B
  - 4. Immediate neighbour of both D and C

Question ID : 26433048052

Status : Answered

Chosen Option : 4

Q.23 In a certain code language, 'GROW' is written as 'RGWO', 'PINK' is written as 'IPKN'. How will 'HALD' be written in that code language?

- Ans
- 1. DLAH
  - 2. AHDL
  - 3. HADL
  - 4. AHLD

Question ID : 26433048970

Status : Answered

Chosen Option : 2

Q.24 Select the letter-cluster from among the given options that can replace the question mark (?) in the following series. BY, ?, DW, EV, FU

- Ans
- 1. CE
  - 2. AX
  - 3. AU
  - 4. CX

Question ID : 26433048018

Status : Answered

Chosen Option : 4

Q.25 Select the correct mirror image of the given combination when the mirror is placed at MN as shown below.

REFERENCE

- Ans
- 1.
  - 2.
  - 3.
  - 4.

Question ID : 26433047940

Status : Answered

Chosen Option : 3

Section : Numerical Aptitude

Q.1 What is the simple interest on ₹4,840 at 6% per annum for 10 years?

- Ans
- 1. ₹6,840
  - 2. ₹8,462
  - 3. ₹2,904
  - 4. ₹3,540

Question ID : 26433049381

Status : Answered

Chosen Option : 3

Q.2 What is the ratio of 84 pens to 108 pens?

- Ans
- 1. 6 : 11
  - 2. 7 : 12
  - 3. 5 : 7
  - 4. 7 : 9

Question ID : 26433049380

Status : Answered

Chosen Option : 4

**Q.3** In the first 20 overs of a cricket game, the run rate was only 2.4 per over. What should the run rate in the remaining 30 overs be to reach a target of 308 runs? [Give your answer correct to one decimal place.]

- Ans**
- 1. 5.8
  - 2. 7.2
  - 3. 6.4
  - 4. 8.7

Question ID : 26433049373  
Status : Answered  
Chosen Option : 4

**Q.4** Find the average of 12, 25, 15, 25 and 45.

- Ans**
- 1. 12.4
  - 2. 22.4
  - 3. 25.4
  - 4. 24.4

Question ID : 26433049296  
Status : Answered  
Chosen Option : 4

**Q.5** On selling 15 balls for ₹450, there is a loss equal to the cost price of 5 balls. The cost price of a ball is:

- Ans**
- 1. ₹23
  - 2. ₹54
  - 3. ₹45
  - 4. ₹32

Question ID : 26433049302  
Status : Answered  
Chosen Option : 3

**Q.6** The curved surface area of a right circular cone is  $44 \text{ cm}^2$ . If the slant height of the cone is 7 cm, then find the radius of its base. [Use  $\pi = \frac{22}{7}$ ]

- Ans**
- 1. 2 cm
  - 2. 4 cm
  - 3. 3 cm
  - 4. 5 cm

Question ID : 26433049315  
Status : Answered  
Chosen Option : 1

**Q.7** The average of nine numbers is 20. If two of these numbers are removed, then the average becomes 18. What is the sum of the two numbers that are removed?

- Ans**
- 1. 56
  - 2. 58
  - 3. 54
  - 4. 52

Question ID : 26433049928  
Status : Answered  
Chosen Option : 3

**Q.8** The surface area of a sphere is  $2464 \text{ cm}^2$ . Find the radius of the sphere. [Use  $\pi = \frac{22}{7}$ ]

- Ans**
- 1. 14 cm
  - 2. 28 cm
  - 3. 42 cm
  - 4. 40 cm

Question ID : 26433049316  
Status : Answered  
Chosen Option : 1

**Q.9** There is 10% water in a 40-litre solution of milk and water. If 10 litres of water are added to this solution, then what percentage of the new solution will be water?

- Ans**
- 1. 25%
  - 2. 20%
  - 3. 35%
  - 4. 28%

Question ID : 26433049925  
Status : Answered  
Chosen Option : 4

**Q.10** If  $p : q$  is  $5 : 6$  and  $q : r$  is  $2 : 5$ , then what is  $p : q : r$ ?

- Ans**
- 1. 15 : 6 : 5
  - 2. 5 : 6 : 5
  - 3. 5 : 6 : 15
  - 4. 5 : 2 : 6

Question ID : 26433049404  
Status : Answered  
Chosen Option : 3

**Q.11** A 200 m long train is running at a speed of 100 km/h. In how much time will it pass a man standing near the railway line?

- Ans**
- 1. 10.4 sec
  - 2. 9.2 sec
  - 3. 7.2 sec
  - 4. 6.4 sec

Question ID : 26433049409  
Status : Answered  
Chosen Option : 3

**Q.12** Find the second smallest number which, when divided by 81 or 63, leaves a remainder of 7 in each case.

- Ans**
- 1. 1246
  - 2. 1141
  - 3. 1362
  - 4. 1137

Question ID : 26433050120  
Status : Answered  
Chosen Option : 2

**Q.13** The ratio of the cost price and the selling price is 5 : 3. What is the loss percentage?

- Ans**
- 1. 35%
  - 2. 40%
  - 3. 25%
  - 4. 30%

Question ID : 26433049378  
Status : Answered  
Chosen Option : 2

**Q.14** When we subtract a number from 11, we get 10% of that number. Find the number.

- Ans**
- 1. 3.5
  - 2. 10
  - 3. 4.5
  - 4. 5.4

Question ID : 26433049300  
Status : Answered  
Chosen Option : 2

**Q.15** The length of each side of a cube is 24 cm. The volume of the cube is equal to the volume of a cuboid. If the breadth and the height of the cuboid are 32 cm and 12 cm, respectively, then what will be the length of the cuboid?

- Ans**
- 1. 36 cm
  - 2. 56 cm
  - 3. 48 cm
  - 4. 42 cm

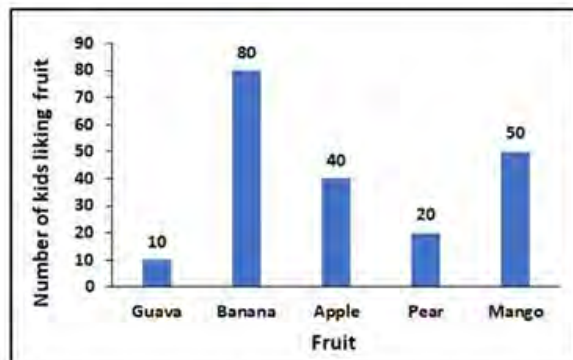
Question ID : 26433049936  
Status : Answered  
Chosen Option : 1

**Q.16** Nalini purchased 20 dozen of apples at ₹48 per dozen. She sold 8 dozen of them at 10% profit and the remaining 12 dozen at 20% profit. What is the overall profit percentage gained in this transaction?

- Ans**
- 1. 10%
  - 2. 45%
  - 3. 16%
  - 4. 22%

Question ID : 26433050126  
Status : Answered  
Chosen Option : 3

**Q.17** The following bar graph shows the number of kids who like different fruits.



What percentage of kids like bananas or apples?

- Ans**
- 1. 40%
  - 2. 50%
  - 3. 30%
  - 4. 60%

Question ID : 26433049388  
Status : Answered  
Chosen Option : 4



Q.18 What is the value of  $(1 \div 4) + (1 \div 6) - \{(1 \div 8) \div (1 \div 4)\}$ ?

- Ans
- 1.  $-(11 \div 12)$
  - 2.  $-(5 \div 12)$
  - 3.  $-(7 \div 12)$
  - 4.  $-(1 \div 12)$

Question ID : 26433049368  
Status : Answered  
Chosen Option : 4

Q.19  $P_1$  and  $P_2$  can do a piece of work together in 14 days,  $P_2$  and  $P_3$  can do the same work together in 21 days, while  $P_3$  and  $P_1$  can do it together in 42 days. How much work can all the 3 together do in 12 days?

- Ans
- 1.  $\frac{5}{6}$
  - 2.  $\frac{5}{7}$
  - 3.  $\frac{6}{7}$
  - 4.  $\frac{3}{7}$

Question ID : 26433049869  
Status : Answered  
Chosen Option : 3

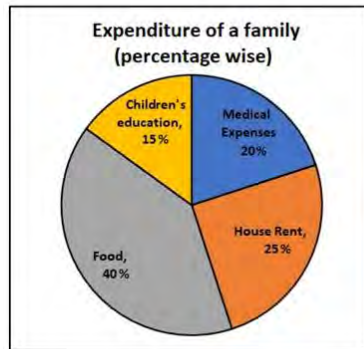
Q.20  $N_1$  alone can do 20% of a piece of work in 6 days,  $N_2$  alone can do 20% of the same work in 4 days, and  $N_3$  alone can do 50% of the same work in 12 days. In how many days can they complete the work, if all of them work together?

- Ans
- 1. 10 days
  - 2.  $\frac{120}{13}$  days
  - 3. 8 days
  - 4.  $\frac{120}{17}$  days

Question ID : 26433049668  
Status : Answered  
Chosen Option : 3



**Q.21** The following pie chart shows the various expenses of a family, as percentages of total expenditure of the family during a period.



If the total expenditure of the family during that period was ₹2,00,000, then find the amount spent on medical expenses.

- Ans**
- 1. ₹5,000
  - 2. ₹20,000
  - 3. ₹10,000
  - 4. ₹40,000

Question ID : 26433049314  
 Status : Answered  
 Chosen Option : 4

**Q.22** The following table shows the monthly expenses (in ₹) of three persons.

Expenses (in ₹)	Person A	Person B	Person C
Housing or Rent	15,000	10,000	12,000
Travel	2,000	2,500	3,000
Food	5,000	4,500	6,000
Bills	5,000	4,000	4,500
Entertainment	3,000	4,000	4,000
Savings	10,000	15,000	10,500

What is the total expenses of all three persons on Food?

- Ans**
- 1. ₹15,000
  - 2. ₹14,500
  - 3. ₹20,500
  - 4. ₹15,500

Question ID : 26433049412  
 Status : Answered  
 Chosen Option : 4

**Q.23** What sum of money should be invested to earn a simple interest of ₹5,040 in 3 years and 6 months at 12% rate of interest per annum?

- Ans
- 1. ₹9,000
  - 2. ₹11,000
  - 3. ₹15,000
  - 4. ₹12,000

Question ID : 26433050132  
Status : Answered  
Chosen Option : 4

**Q.24** What is the value of  $1.5 - 0.5 + \{(9 + 2) - 5\}$ ?

- Ans
- 1. 7
  - 2. 11
  - 3. 9
  - 4. 5

Question ID : 26433049294  
Status : Answered  
Chosen Option : 1

**Q.25** If a taxi travels 600 m in 12 min, then how fast is it going?

- Ans
- 1. 45 m/min
  - 2. 90 m/min
  - 3. 50 m/min
  - 4. 70 m/min

Question ID : 26433049383  
Status : Answered  
Chosen Option : 3

Section : General Awareness

**Q.1** The breaking up of the rocks on the earth's surface is called \_\_\_\_\_.

- Ans
- 1. conurbation
  - 2. weathering
  - 3. desertification
  - 4. flacking

Question ID : 26433047526  
Status : Answered  
Chosen Option : 2

Q.2 The foundation stone of 'Banar Dairy Sankul' scheme in Uttar Pradesh was laid by

- Ans
- 1. Narendra Singh Tomar
  - 2. Amit Shah
  - 3. Smriti Irani
  - 4. Narendra Modi

Question ID : 26433047518  
Status : Answered  
Chosen Option : 1

Q.3 Which of the following statements is INCORRECT?

- Ans
- 1. Fiat money is issued without any backing of an equivalent amount of gold or silver.
  - 2. Money Multiplier is the ratio of money supply to the reserve money.
  - 3. In Time Deposits, money can be withdrawn only after maturity or with a penalty before maturity.
  - 4. Vault cash is also a part of the money supply.

Question ID : 26433046792  
Status : Answered  
Chosen Option : 1

Q.4 Which of the following statements is INCORRECT?

- Ans
- 1. Metals react with oxygen to form basic oxides.
  - 2. Non-metals are malleable.
  - 3. Non-metals do not produce any sound.
  - 4. Metals have low ionisation enthalpy.

Question ID : 26433046798  
Status : Answered  
Chosen Option : 2

Q.5 Which of the following dance forms is performed by devotees during the ceremonial worship of Murugan, the Tamil God of War?

- Ans
- 1. Mayilattom
  - 2. Therukoothu
  - 3. Kavadi Aattam
  - 4. Kummi

Question ID : 26433046770  
Status : Answered  
Chosen Option : 3

**Q.6 Who among the following administers the union territories of India?**

- Ans  1. Chief Minister  
 2. President  
 3. Prime Minister  
 4. Member of Legislative Assembly

Question ID : 26433046714  
Status : Answered  
Chosen Option : 2

**Q.7 Who among the following formed the Tattvabodhini Sabha in 1839?**

- Ans  1. Ramakrishna Paramahansa  
 2. Debendranath Tagore  
 3. Swami Dayanand Saraswati  
 4. Keshab Chandra Sen

Question ID : 26433046784  
Status : Answered  
Chosen Option : 3

**Q.8 Who among the following was given the title of 'Uttarapatha Swamin'?**

- Ans  1. Mahipala  
 2. Devapala  
 3. Dharmapala  
 4. Gopala

Question ID : 26433046781  
Status : Answered  
Chosen Option : 3

**Q.9 Pandit Ravi Shankar is famous for playing which of the following instruments?**

- Ans  1. Santoor  
 2. Sarod  
 3. Veena  
 4. Sitar

Question ID : 26433046786  
Status : Answered  
Chosen Option : 2

**Q.10 Who among the following dancers was the first Odissi dancer of foreign origin to be conferred the Padma Shri in 2006?**

- Ans  1. Eri Nakamura  
 2. Ileana Citaristi  
 3. Mrinalini Sarabhai  
 4. Sofia Boutella

Question ID : 26433046712  
Status : Answered

Q.11 Ocean acidification is the ongoing decrease in the pH of the Earth's oceans, caused by the uptake of \_\_\_\_\_ from the atmosphere.

- Ans
- 1. methane
  - 2. carbon dioxide
  - 3. nitrogen
  - 4. argon

Question ID : 26433046774  
Status : Answered  
Chosen Option : 3

Q.12 Which Act was passed in 1929 prohibiting marriage of girls below 14 and boys below 18 years of age?

- Ans
- 1. Pitt's India Act
  - 2. Sharda Act
  - 3. Vernacular Press Act
  - 4. Rowlett Act

Question ID : 26433046708  
Status : Answered  
Chosen Option : 1

Q.13 Vinegar used in cooking contains which of the following compounds?

- Ans
- 1. Methanol
  - 2. Sodium sulphate
  - 3. Ammonia
  - 4. Acetic acid

Question ID : 26433046700  
Status : Answered  
Chosen Option : 4

Q.14 With respect to communication, 'Doordarshan' in India is a \_\_\_\_\_.

- Ans
- 1. national web browser
  - 2. national radio channel
  - 3. national television channel
  - 4. national newspaper

Question ID : 26433047527  
Status : Answered  
Chosen Option : 3

Q.15 How many medals in total did India win at the Summer Olympics 2020 (played in 2021)?

- Ans  1. 3  
 2. 6  
 3. 7  
 4. 5

Question ID : 26433047340  
Status : Answered  
Chosen Option : 2

Q.16 The construction of Taj Mahal in Agra was completed in \_\_\_\_\_.

- Ans  1. 1653  
 2. 1632  
 3. 1648  
 4. 1634

Question ID : 26433047522  
Status : Answered  
Chosen Option : 3

Q.17 Article 23 and Article 24 of the Indian Constitution deal with which of the following Fundamental Right?

- Ans  1. Right against Exploitation  
 2. Right to Freedom  
 3. Right to Equality  
 4. Right to Freedom of Religion

Question ID : 26433047538  
Status : Answered  
Chosen Option : 1

Q.18 Who among the following authors wrote 'Train to Pakistan'?

- Ans  1. Kiran Desai  
 2. RK Narayan  
 3. Arundhati Roy  
 4. Khushwant Singh

Question ID : 26433046785  
Status : Answered  
Chosen Option : 2

Q.19 Kumarakom boat race is the most admired boat race to take place on the Vembanad Lake in September during the \_\_\_\_\_ festival.

- Ans
- 1. Lohri
  - 2. Deepavali
  - 3. Nowruz
  - 4. Onam

Question ID : 26433046796  
Status : Answered  
Chosen Option : 4

Q.20 Where does the Alaknanda river join the Bhagirathi river in India?

- Ans
- 1. Devprayag
  - 2. Dehradun
  - 3. Prayagraj
  - 4. Champawat

Question ID : 26433046703  
Status : Answered  
Chosen Option : 2

Q.21 Ain-i-Akbari which is the third volume of the book 'Akbar Nama' deals with \_\_\_\_\_.

- Ans
- 1. Akbar's ancestors
  - 2. Akbar's events of Akbar's reign
  - 3. Akbar's religion
  - 4. Akbar's administration

Question ID : 26433047532  
Status : Answered  
Chosen Option : 2

Q.22 The Indian cricket team won the final match of the 2011 ICC ODI Cricket World Cup Championship by defeating the team from which country?

- Ans
- 1. Australia
  - 2. Pakistan
  - 3. Sri Lanka
  - 4. New Zealand

Question ID : 26433046716  
Status : Answered  
Chosen Option : 3

# SSC MTS (Non Technical) EXAM STUDY KIT



FREE SHIPPING 

- ▶ 100% SSC MTS Exam Syllabus Covered
- ▶ PRINTED Notes
- ▶ 8 Books, 700+ Pages
- ▶ 2500+ MCQs
- ▶ Practice Papers
- ▶ 1 Year Current Affairs

**50%** OFF

 **SSCPORTAL.IN**

# SSC MTS PDF NOTES

100% Syllabus Covered



**50%  
OFF**

**CLICK HERE**

<https://sscpportal.in/study-kit/mts>



Q.23 Sanjiv Kapoor has been appointed as the new Chief Executive Officer of \_\_\_\_\_ . His appointment will be effective from 4 April 2022.

Ans  1. Jet Airways

2. AirAsia

3. GoAir

4. SpiceJet

Question ID : 26433046769

Status : Answered

Chosen Option : 4

Q.24 India shares its land boundary with \_\_\_\_\_ in the north-west.

Ans  1. Myanmar

2. Bhutan

3. Bangladesh

4. Afghanistan

Question ID : 26433047330

Status : Answered

Chosen Option : 4

Q.25 As per Census 2011, which of the following was the most literate state of India?

Ans  1. Chhattisgarh

2. Bihar

3. Kerala

4. Punjab

Question ID : 26433046704

Status : Answered

Chosen Option : 3

