

Multi Tasking Non Technical Staff Havaladar CBIC and CBN Examination 2021

Roll Number	
Candidate Name	
Venue Name	
Exam Date	13/07/2022
Exam Time	1:00 PM - 2:30 PM
Subject	MTS Non technical and Havaladar Examination 2021

Section : General English

Q.1 Select the option that will improve the underlined part of the given sentence. In case no improvement is needed, select 'No improvement required'.

One of the baby elephants broke off from the herd and lost its way.

Ans 1. No improvement required

2. in

3. down

4. away

Question ID : 26433051396

Status : Answered

Chosen Option : 1

Q.2 Select the most appropriate ANTONYM of the given word.

Sturdy

Ans 1. Delicate

2. Dragging

3. Tiny

4. Drab

Question ID : 26433051176

Status : Answered

Chosen Option : 1

Q.3 Select the most appropriate option to fill in the blank.

_____ is going to take the responsibility for this failure?

Ans 1. Whom

2. Who

3. Which

4. Whose

Question ID : 26433051082

Status : Answered

Chosen Option : 2



Download SSC CGL, CHSL E-BOOKS

[CLICK HERE](#)

Q.4 Select the most appropriate synonym of the given word.

Pleasant

- Ans 1. Awful
 2. Delightful
 3. Faithful
 4. Sorrowful

Question ID : 26433050488
Status : Answered
Chosen Option : 2

Q.5 Select the option that can be used as a one-word substitute for the given group of words.

One who believes in fate

- Ans 1. Fatalist
 2. Optimist
 3. Mercenary
 4. Ascetic

Question ID : 26433050648
Status : Answered
Chosen Option : 1

Q.6 Select the most appropriate meaning of the given idiom.

To take with a grain of salt

- Ans 1. To take seriously
 2. To have total disbelief
 3. To believe with some scepticism
 4. To accept wholeheartedly

Question ID : 26433051151
Status : Answered
Chosen Option : 4

Q.7 Parts of the following sentence have been given as options. One of them may contain an error. Select the part that contains the error from the given options. If you don't find any error, mark 'No error' as your answer.

We usually sleep in bedrooms with the door firmly shuted behind us.

- Ans 1. We usually sleep in
 2. bedrooms with the door
 3. No error
 4. firmly shuted

Question ID : 26433050655
Status : Answered
Chosen Option : 2

Q.8 The following sentence has been divided into parts. One of them may contain an error. Select the part that contains the error from the given options. If you don't find any error, mark 'No error' as your answer.

You have to constant consider how your personal behaviour is going to impact everyone around you.

- Ans 1. You have to constant consider
 2. No error
 3. to impact everyone around you
 4. how your personal behaviour is going

Question ID : 26433050743
Status : Answered
Chosen Option : 2

Q.9 Select the option that will improve the bracketed part of the sentence. In case no improvement is needed, select 'No improvement required'.(Neither of the leading political parties have had much) success in the southern region.

- Ans 1. No improvement required
 2. Neither of the leading political parties has had much
 3. Neither of the leading political party has had much
 4. Neither of the leading political parties have had any

Question ID : 26433050857
Status : Answered
Chosen Option : 2

Q.10 Select the option that can be used as a one-word substitute for the given group of words.

The collection and study of postage stamps

- Ans 1. Philately
 2. Ornithology
 3. Philosophy
 4. Philanthropy

Question ID : 26433051457
Status : Answered
Chosen Option : 3

Q.11 Select the INCORRECTLY spelt word.

- Ans 1. Barricade
 2. Prosperity
 3. Bouket
 4. Dissatisfied

Question ID : 26433051179
Status : Answered
Chosen Option : 3

Q.12 Select the option that corrects the misspelt words in the given sentence.

He maintins the unity and fredom of the suol.

- Ans 1. He maintains the unity and freedom of the soul.
 2. He maintains the unity and freedomm of the soul.
 3. He maintins the unitty and freedom of the soul.
 4. He maintins the unity and fredom of the soul.

Question ID : 26433050677
Status : Answered
Chosen Option : 1

Q.13 Select the most appropriate meaning of the given idiom.

Make a living

- Ans 1. To abuse someone
 2. To make excuses for everything
 3. To earn enough money for things you need
 4. To rely on corrupt money

Question ID : 26433050620
Status : Answered
Chosen Option : 3

Q.14 Select the option that can be used as a one-word substitute for the given group of words.

A person who sells flowers

- Ans 1. Florist
 2. horticulturist
 3. Chauffeur
 4. Invigilator

Question ID : 26433050675
Status : Answered
Chosen Option : 1

Q.15 Select the most appropriate ANTONYM of the given word.

Miniature

- Ans 1. Teeny
 2. Mammoth
 3. Average
 4. Miniscule

Question ID : 26433051279
Status : Answered
Chosen Option : 2

Q.16 Select the most appropriate option to fill in the blank.

Most employers _____ the use of mobile phones during office hours.

- Ans 1. prohibit
 2. submerge
 3. cultivate
 4. spirit

Question ID : 26433050575
Status : Answered
Chosen Option : 1

Q.17 Select the option that can be used as a one-word substitute for the given group of words.

A disturbed state of mind caused by an illness.

- Ans 1. Delirium
 2. Discrepancy
 3. Dilemma
 4. Depreciation

Question ID : 26433051197
Status : Answered
Chosen Option : 3

Q.18 Parts of the following sentence have been given as options. One of them may contain an error. Select the part that contains the error from the given options. If you don't find any error, mark 'No error' as your answer.

Your infidelity have given me too much pain in life.

- Ans 1. given me too
 2. much pain in life
 3. No error
 4. Your infidelity have

Question ID : 26433050472
Status : Answered
Chosen Option : 4

Q.19 Select the most appropriate option to substitute the underlined segment in the given sentence. If there is no need to substitute it, select 'No substitution required'.

His wise choice of men like Wolfe in Canada and Clive in India, and his vigorous measures in managing foreign affairs, made England respected in every part of the world.

- Ans 1. wisely chosen
 2. wisely choice
 3. No substitution required
 4. wise choose

Question ID : 26433051135
Status : Answered
Chosen Option : 2

SSC MTS (Non Technical) EXAM STUDY KIT



FREE SHIPPING 

- ▶ 100% SSC MTS Exam Syllabus Covered
- ▶ PRINTED Notes
- ▶ 8 Books, 700+ Pages
- ▶ 2500+ MCQs
- ▶ Practice Papers
- ▶ 1 Year Current Affairs

50% OFF

 **SSCPORTAL.IN**
India's largest online community for SSC, CDS, Railways

SSC MTS PDF NOTES

100% Syllabus Covered



CLICK HERE

<https://sscpportal.in/study-kit/mts>

Q.20 Select the most appropriate synonym of the underlined word in the given sentence.

These colours add a vivacious and fairy-like effect to my dress.

- Ans
- 1. repressed
 - 2. impassive
 - 3. sparky
 - 4. gloomy

Question ID : 26433051096
Status : Answered
Chosen Option : 3

Comprehension:

In the following passage, some words have been deleted. Read the passage carefully and select the most appropriate option to fill in each blank.

In Andhra Pradesh, low rainfall and increased (1) _____ on borewells have led to soil aridity, while (2) _____ snow and more rainfall has (3) _____ the desertification crisis in Himachal Pradesh. On the other (4) _____, in Rajasthan, canals, tube-well irrigation and shelterbelts have (5) _____ to an increase in the green cover.

SubQuestion No : 21

Q.21 Select the most appropriate option to fill in blank number 1.

- Ans
- 1. growth
 - 2. support
 - 3. addiction
 - 4. dependence

Question ID : 26433051085
Status : Answered
Chosen Option : 4

Comprehension:

In the following passage, some words have been deleted. Read the passage carefully and select the most appropriate option to fill in each blank.

In Andhra Pradesh, low rainfall and increased (1) _____ on borewells have led to soil aridity, while (2) _____ snow and more rainfall has (3) _____ the desertification crisis in Himachal Pradesh. On the other (4) _____, in Rajasthan, canals, tube-well irrigation and shelterbelts have (5) _____ to an increase in the green cover.

SubQuestion No : 22

Q.22 Select the most appropriate option to fill in blank number 2.

- Ans
- 1. few
 - 2. least
 - 3. less
 - 4. fewer

Question ID : 26433051086
Status : Answered
Chosen Option : 3

Comprehension:

In the following passage, some words have been deleted. Read the passage carefully and select the most appropriate option to fill in each blank.

In Andhra Pradesh, low rainfall and increased (1) _____ on borewells have led to soil aridity, while (2) _____ snow and more rainfall has (3) _____ the desertification crisis in Himachal Pradesh. On the other (4) _____, in Rajasthan, canals, tube-well irrigation and shelterbelts have (5) _____ to an increase in the green cover.

SubQuestion No : 23

Q.23 Select the most appropriate option to fill in blank number 3.

- Ans 1. deepen
 2. deepened
 3. deeper
 4. deep

Question ID : 26433051087

Status : Answered

Chosen Option : 2

Comprehension:

In the following passage, some words have been deleted. Read the passage carefully and select the most appropriate option to fill in each blank.

In Andhra Pradesh, low rainfall and increased (1) _____ on borewells have led to soil aridity, while (2) _____ snow and more rainfall has (3) _____ the desertification crisis in Himachal Pradesh. On the other (4) _____, in Rajasthan, canals, tube-well irrigation and shelterbelts have (5) _____ to an increase in the green cover.

SubQuestion No : 24

Q.24 Select the most appropriate option to fill in blank number 4.

- Ans 1. half
 2. hand
 3. sides
 4. case

Question ID : 26433051088

Status : Answered

Chosen Option : 2

Comprehension:

In the following passage, some words have been deleted. Read the passage carefully and select the most appropriate option to fill in each blank.

In Andhra Pradesh, low rainfall and increased (1) _____ on borewells have led to soil aridity, while (2) _____ snow and more rainfall has (3) _____ the desertification crisis in Himachal Pradesh. On the other (4) _____, in Rajasthan, canals, tube-well irrigation and shelterbelts have (5) _____ to an increase in the green cover.

SubQuestion No : 25

Q.25 Select the most appropriate option to fill in blank number 5.

- Ans 1. lead
 2. led
 3. leading
 4. leads

Question ID : 26433051089
Status : Answered
Chosen Option : 2

Section : **General Intelligence and Reasoning**

Q.1 Select the option that is related to the third number in the same way as the second number is related to the first number and the sixth number is related to the fifth number.

3856 : 8563 :: 4893 : ? :: 2873 : 8732

- Ans 1. 8934
 2. 3948
 3. 3984
 4. 8943

Question ID : 26433048541
Status : Answered
Chosen Option : 1

Q.2 Six people Ali, Parth, Roy, Minal, Sudhir and Zeeshan are sitting in a straight row facing North. Sudhir and Zeeshan are in the centre. Ali and Parth are at the corners. Roy is sitting to the immediate left of Ali. Who is sitting to the immediate right of Parth ?

- Ans 1. Sudhir
 2. Zeeshan
 3. Roy
 4. Minal

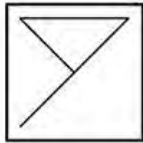
Question ID : 26433048051
Status : Answered
Chosen Option : 4

Q.3 In a certain code language, 'Flames are bright' is written as '@ # %' and 'Bright is sun flames' is written as '* # 7 @'. Which one of the following is the possible code for 'is' in that code language?

- Ans
- 1. %
 - 2. @
 - 3. #
 - 4. *

Question ID : 26433048796
Status : Answered
Chosen Option : 4

Q.4 Select the option in which the given figure is embedded (rotation is NOT allowed).



Ans

- 1.
- 2.
- 3.
- 4.

Question ID : 26433048485
Status : Answered
Chosen Option : 4

Q.5 Read the given statements and conclusions carefully. Assuming that the information given in the statements is true, even if it appears to be at variance with commonly known facts, decide which of the given conclusions logically follow(s) from the statements.

Statements:

I. Some A are B.

II. All C are B.

Conclusions:

I. Some B are A's is a possibility.

II. No C is A.

III. All A are C.

Ans 1. None of the conclusions follow

2. Only conclusion I follows

3. All the conclusions follow

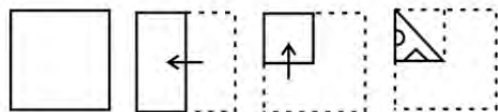
4. Only conclusion III follows

Question ID : 26433048554

Status : Answered

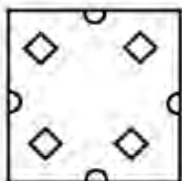
Chosen Option : 1

Q.6 The sequence of folding a piece of paper and the manner in which the folded paper has been cut is shown in the following figures. How would this paper look when unfolded?

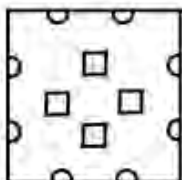


Ans

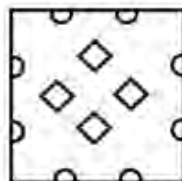
1.



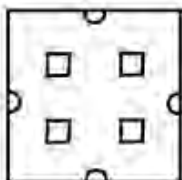
2.



3.



4.



Question ID : 26433047941

Status : Answered

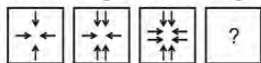
Chosen Option : 3



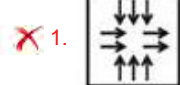
Download SSC CGL, CHSL E-BOOKS

[CLICK HERE](#)

Q.7 Select the figure from among the given options that can replace the question mark (?) in the following series.



Ans



Question ID : 26433048558

Status : Answered

Chosen Option : 3

Q.8 In a certain code language, 'ri ti gi' is written as 'Usha playing cards', 'si ni gi' is written as 'Asha playing tennis' and 'ri si wi' is written as 'cards and tennis'. What is the code for the word 'tennis' in that language?

Ans ✗ 1. ni

✗ 2. ri

✗ 3. wi

✓ 4. si

Question ID : 26433048198

Status : Answered

Chosen Option : 4

Q.9 In a certain code language, 'PIZZA' is written as 'QJAAB' and 'BLACK' is written as 'CMBDL'. How will 'BUZZY' be written in that language?

Ans ✗ 1. CVAZZ

✓ 2. CVAAZ

✗ 3. CVABZ

✗ 4. CTA AZ

Question ID : 26433047872

Status : Answered

Chosen Option : 2

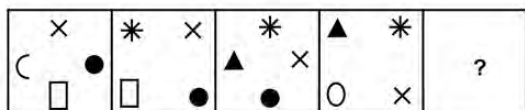
Q.10 Which two signs need to be interchanged to make the following equation correct?

$$352 \times 8 - 330 + 125 \div 4 = 214$$

- Ans
- 1. + and ×
 - 2. - and ÷
 - 3. + and ÷
 - 4. × and ÷

Question ID : 26433047886
 Status : Answered
 Chosen Option : 4

Q.11 Select the figure from among the given options that can replace the question mark (?) in the following series.



Ans

- 1.

◐	▲
*	○
- 2.

*	○
▲	◐
- 3.

○	*
▲	◐
- 4.

◐	○
*	▲

Question ID : 26433048063
 Status : Answered
 Chosen Option : 3

Q.12 A, B, C, D, E, F and G give a test. A scores more than B, C and D. G scores more than E and F. F scores more than A. Who scores the highest in the test?

- Ans
- 1. F
 - 2. A
 - 3. E
 - 4. G

Question ID : 26433048128
Status : Answered
Chosen Option : 4

Q.13 Select the option that is related to the third letter-cluster in the same way as the second letter-cluster is related to the first letter-cluster.

DGP : WTK :: MOS : ?

- Ans
- 1. NEH
 - 2. MLH
 - 3. NLT
 - 4. NLH

Question ID : 26433048800
Status : Answered
Chosen Option : 4

Q.14 Select the option in which the numbers are related in the same way as are the numbers of the following sets.

(2, 4, 36)
(4, 6, 100)

- Ans
- 1. (8, 4, 1020)
 - 2. (12, 4, 230)
 - 3. (4, 4, 64)
 - 4. (14, 2, 75)

Question ID : 26433048480
Status : Answered
Chosen Option : 3

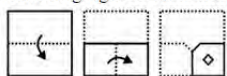
Q.15 Select the option that is related to the sixth number in the same way as the first number is related to the second number and the third number is related to the fourth number.

1503 : 3004 :: 871 : 1740 :: ? : 142

- Ans
- 1. 98
 - 2. 110
 - 3. 72
 - 4. 65

Question ID : 26433048057
Status : Answered
Chosen Option : 3

Q.16 The sequence of folding a piece of paper and the manner in which the folded paper has been cut is shown in the following figures. How would this paper look when unfolded?



Ans

✓ 1.



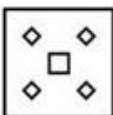
✗ 2.



✗ 3.



✗ 4.



Question ID : 26433048737

Status : Answered

Chosen Option : 1

Q.17 Nine people Asha, Bishal, Carol, Dinky, Emily, Farah, Golu, Harsh, and Itika are watching a movie in a theatre sitting in a straight row facing North. Bishal is at one end of the row. Harsh is seated adjacent to both Farah and Golu. Carol is to the immediate right of Dinky and in the third place to the right of Emily. Asha is on the immediate left of Farah. Farah is in the third place to the left of Bishal. Who are at the ends of the row?

Ans ✗ 1. Bishal and Dinky

✗ 2. Harsh and Itika

✗ 3. Carol and Emily

✓ 4. Emily and Bishal

Question ID : 26433048127

Status : Answered

Chosen Option : 4

Q.18 Select the option that is related to the fifth term in the same way as the second term is related to the first term and the fourth term is related to the third term.

A 1 : E 3 :: M 7 : Q 9 :: S 5 : ?

Ans ✓ 1. W 7

✗ 2. U 7

✗ 3. W 5

✗ 4. V 7

Question ID : 26433047869

Status : Answered

Chosen Option : 1

Q.19 Select the number from among the given options that can replace the question mark (?) in the following series.

6, 9, 7, 10, 8, 11, ?

- Ans
- 1. 12
 - 2. 9
 - 3. 11
 - 4. 10

Question ID : 26433048131
Status : Answered
Chosen Option : 2

Q.20 Read the given statements and conclusions carefully. Assuming that the information given in the statements is true, even if it appears to be at variance with commonly known facts, decide which of the given conclusions logically follow(s) from the statements.

Statements:

No atom is a molecule.
No molecule is an element.

Conclusions:

I. It is possible for some atoms to be elements.
II. Some elements are molecules.

- Ans
- 1. Only conclusion I follows
 - 2. Both conclusions I and II follow
 - 3. Only conclusion II follows
 - 4. Neither conclusion I nor II follows

Question ID : 26433048475
Status : Answered
Chosen Option : 1

Q.21 What will come in the place of '?' in the following equation, if '+' and '-' are interchanged and also '×' and '÷' are interchanged?

$40 \times 10 - 20 + 10 \div 2 = ?$

- Ans
- 1. 4
 - 2. 8
 - 3. 6
 - 4. 2

Question ID : 26433048135
Status : Answered
Chosen Option : 1

SSC MTS (Non Technical) EXAM STUDY KIT



FREE SHIPPING 

- ▶ 100% SSC MTS Exam Syllabus Covered
- ▶ PRINTED Notes
- ▶ 8 Books, 700+ Pages
- ▶ 2500+ MCQs
- ▶ Practice Papers
- ▶ 1 Year Current Affairs

50% OFF

 **SSCPORTAL.IN**
India's largest online community for SSC, UPSC, State Exams

SSC MTS PDF NOTES

100% Syllabus Covered



CLICK HERE

<https://sscpportal.in/study-kit/mts>

Q.22 Select the option that is related to the third letter-cluster in the same way as the second letter-cluster is related to the first letter-cluster.

ROM : SRT :: PNA : ?

Ans 1. QQH

2. QQI

3. RQI

4. QRH

Question ID : 26433048551

Status : Answered

Chosen Option : 1

Q.23 Select the letter-cluster from among the given options that can replace the question mark (?) in the following series.

TX, ZD, FJ, LP, ?

Ans 1. RU

2. SV

3. SU

4. RV

Question ID : 26433047868

Status : Answered

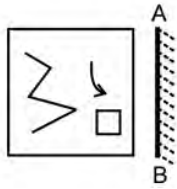
Chosen Option : 4



Download SSC CGL, CHSL E-BOOKS

[CLICK HERE](#)

Q.24 Select the correct mirror image of the given figure when the mirror is placed at line AB as shown.

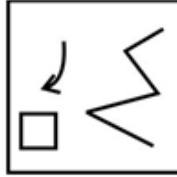


Ans

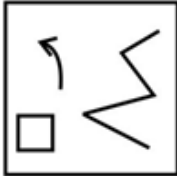
✗ 1.



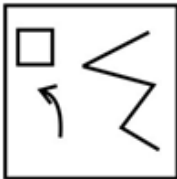
✓ 2.



✗ 3.



✗ 4.



Question ID : 26433048411

Status : Answered

Chosen Option : 2

Q.25 In a certain code language, 'POINT' is coded as '11', and 'GRANDST' is coded as '11'. How will 'HEMANT' be coded in that language?

Ans ✗ 1. 8

✗ 2. 4

✗ 3. 9

✓ 4. 7

Question ID : 26433048598

Status : Answered

Chosen Option : 4

Section : Numerical Aptitude

Q.1 An article is sold for ₹4,800 at a profit of 20%. If the selling price is increased by ₹600, then what will be the profit percentage?

- Ans**
- 1. 40%
 - 2. 25%
 - 3. 30%
 - 4. 35%

Question ID : 26433049873
Status : Answered
Chosen Option : 4

Q.2 What is the difference between the compound interest and the simple interest on ₹2,000 at 10% interest per annum for 2 years, if, for compound interest, interest is compounded annually?

- Ans**
- 1. ₹20
 - 2. ₹40
 - 3. ₹80
 - 4. ₹60

Question ID : 26433049231
Status : Answered
Chosen Option : 1

Q.3 Find the single discount equivalent to two successive discounts of 10% and 5%.

- Ans**
- 1. 85.5%
 - 2. 90%
 - 3. 75.5%
 - 4. 14.5%

Question ID : 26433049228
Status : Answered
Chosen Option : 4

Q.4 A is 40% less than 60% of 1500. What is the value of A?

- Ans**
- 1. 500
 - 2. 480
 - 3. 540
 - 4. 360

Question ID : 26433049850
Status : Answered
Chosen Option : 3

Q.5 $P = 18 \times 9 + 6 + 5 \times 15 + 25$ and $Q = 15 + 5 \times 5 - 25 + 5$, what is the value of $(P+Q)$?

- Ans
- 1. 2.5
 - 2. 2
 - 3. 3
 - 4. 1.5

Question ID : 26433049888
Status : Answered
Chosen Option : 3

Q.6 If A, B and C are three distinct prime numbers, then what is the highest common factor of A, B and C?

- Ans
- 1. 7
 - 2. 0
 - 3. 5
 - 4. 1

Question ID : 26433049812
Status : Answered
Chosen Option : 4

Q.7 What is the value of p in the following equation?

$$64 - [16 + \{23 - (12 + 10)\}] = p$$

- Ans
- 1. 47
 - 2. 49
 - 3. 81
 - 4. 3

Question ID : 26433049393
Status : Answered
Chosen Option : 1

Q.8 If the mean of two numbers is 12, and the difference between the two numbers is 6, find the two numbers.

- Ans
- 1. 2 and 22
 - 2. 14 and 10
 - 3. 15 and 9
 - 4. 3 and 24

Question ID : 26433049223
Status : Answered
Chosen Option : 3

Q.9 The average of T_1 and T_2 is 15. The average of T_3 and T_4 is 35. What is the average of T_1, T_2, T_3 and T_4 ?

- Ans**
- 1. 24
 - 2. 30
 - 3. 28
 - 4. 25

Question ID : 26433049977
Status : Answered
Chosen Option : 4

Q.10 Tap A can fill an empty tank in 8 hours if no other tap is open, and tap B can empty the same tank, when filled, in 12 hours, when no other tap is open. Find the time taken to fill the same tank, when empty, if both the taps are opened together.

- Ans**
- 1. 12 hours
 - 2. 16 hours
 - 3. 24 hours
 - 4. 36 hours

Question ID : 26433049511
Status : Answered
Chosen Option : 3

Q.11 ₹2,300 is to be divided among P, Q, R and S in such a way that the ratio of P : Q : R : S is 2 : 6 : 9 : 6, respectively. What is the sum of the shares of P and S?

- Ans**
- 1. ₹1,100
 - 2. ₹1,200
 - 3. ₹800
 - 4. ₹230

Question ID : 26433049405
Status : Answered
Chosen Option : 3

Q.12 Pia and Ria can complete a project together in 26 days. Pia alone can complete the project in 78 days. They start working together but Pia leaves after 12 days. In how many days can Ria complete the remaining work of the project?

- Ans**
- 1. 21 days
 - 2. 24 days
 - 3. 25 days
 - 4. 13 days

Question ID : 26433050185
Status : Answered
Chosen Option : 1

Q.13 The compound interest received on ₹18,000 for 2 years is ₹7,920, when the interest is compounded annually. What is the rate of interest per annum?

- Ans**
- 1. 15%
 - 2. 12.5%
 - 3. 20%
 - 4. 25%

Question ID : 26433049808
Status : Answered
Chosen Option : 3

Q.14 A room is in the shape of a cuboid of dimensions 4 m, 2 m and 8 m. If a bag of grain occupies a space of 0.50 m^3 , then how many such bags can be stored in the room?

- Ans**
- 1. 128 bags
 - 2. 144 bags
 - 3. 108 bags
 - 4. 118 bags

Question ID : 26433049317
Status : Answered
Chosen Option : 1

Q.15 A train completely crosses a bridge of length 80 m in 15 s. Find the length of the train if its speed is 72 km/h.

- Ans**
- 1. 300 m
 - 2. 220 m
 - 3. 150 m
 - 4. 270 m

Question ID : 26433049484
Status : Answered
Chosen Option : 2

Q.16 The selling price and the cost price of a cup are ₹576 and ₹800 respectively. What is the loss percentage?

- Ans**
- 1. 22%
 - 2. 28%
 - 3. 24%
 - 4. 32%

Question ID : 26433049797
Status : Answered
Chosen Option : 2

Q.17 How many identical solid cubes, each having sides that are 3 cm long, can be formed by melting a solid cuboid, whose length, breadth and height are 9 cm, 12 cm and 15 cm, respectively?

- Ans
- 1. 50
 - 2. 120
 - 3. 60
 - 4. 90

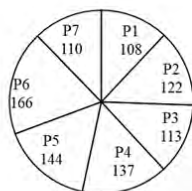
Question ID : 26433049985
 Status : Answered
 Chosen Option : 3

Q.18 If $8 : x :: x : 32$, find the positive value of x .

- Ans
- 1. 20
 - 2. 16
 - 3. 4
 - 4. 12

Question ID : 26433049479
 Status : Answered
 Chosen Option : 2

Q.19 The following pie chart shows the actual number of photographs shared by a person on each of 7 different social media platforms.



What is the difference between the central angles made by sector P5 and sector P1?

- Ans
- 1. 18°
 - 2. 10.8°
 - 3. 14.4°
 - 4. 21.6°

Question ID : 26433049892
 Status : Answered
 Chosen Option : 3

Q.20 The length of each side of a square is 16 cm. What is the area of the square?

- Ans
- 1. 112 cm²
 - 2. 176 cm²
 - 3. 128 cm²
 - 4. 256 cm²

Question ID : 26433049884
Status : Answered
Chosen Option : 4

Q.21 A truck is running at a speed of 75 km/h. In 4 hours, how much distance will it cover?

- Ans
- 1. 280 km
 - 2. 300 km
 - 3. 240 km
 - 4. 320 km

Question ID : 26433049408
Status : Answered
Chosen Option : 2

Q.22 The following table shows the total sale of cars of four companies from 2015 to 2018.

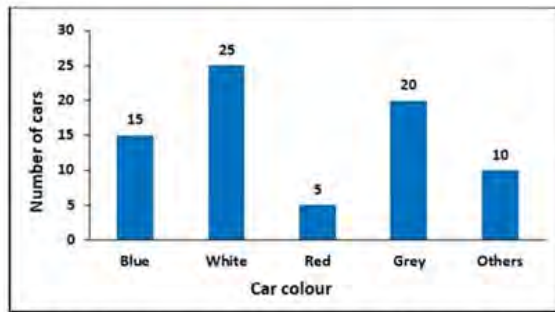
YEAR/CAR	TATA	HYUNDAI	MAHINDRA	TOYOTA
2015	465	472	486	482
2016	375	427	379	419
2017	246	357	236	523
2018	456	357	484	475

In which year was the total number of cars sold by these four companies taken together the maximum?

- Ans
- 1. 2015
 - 2. 2018
 - 3. 2017
 - 4. 2016

Question ID : 26433049487
Status : Answered
Chosen Option : 1

Q.23 The following graph shows the number of cars of different colours in a society.



What is the approximate percentage of white colour cars out of all cars in the society?

- Ans
- 1. 66.67%
 - 2. 33.33%
 - 3. 15%
 - 4. 25%

Question ID : 26433049413
Status : Answered
Chosen Option : 2

Q.24 An alloy contains 30 per cent aluminium. What quantity of alloy will have 300 gm of aluminium?

- Ans
- 1. 0.8 kg
 - 2. 1 kg
 - 3. 1.2 kg
 - 4. 0.6 kg

Question ID : 26433049349
Status : Answered
Chosen Option : 2

Q.25 The mean of five numbers is 45. If a sixth number is also included, the mean becomes 48. Find the sixth number.

- Ans
- 1. 73
 - 2. 63
 - 3. 43
 - 4. 53

Question ID : 26433049297
Status : Answered
Chosen Option : 2

Section : General Awareness

Q.1 In which state of India is the Irvatanesvara temple situated?

- Ans 1. Tamil Nadu
 2. West Bengal
 3. Rajasthan
 4. Telangana

Question ID : 26433047197
Status : Answered
Chosen Option : 1

Q.2 Which of the following cities existed in the Indus Valley Civilization?

- Ans 1. Harappa
 2. Sanchi
 3. Muziris
 4. Ayodhya

Question ID : 26433046631
Status : Answered
Chosen Option : 1

Q.3 What is the atomic number of Carbon as per Mendeleev's Periodic Table?

- Ans 1. 3
 2. 6
 3. 1
 4. 10

Question ID : 26433046873
Status : Answered
Chosen Option : 2

Q.4 The study of human populations including their size, composition and distribution across space and the process through which populations change is called _____.

- Ans 1. ethnography
 2. demography
 3. topography
 4. stenography

Question ID : 26433047379
Status : Answered
Chosen Option : 2

Q.5 Which of the following pairs of folk dance and the state associated with is **INCORRECT**?

- Ans 1. Giddha - Punjab
 2. Wancho - Arunachal Pradesh
 3. Ghumar - Bihar
 4. Nongkrem - Meghalaya

Question ID : 26433046795
Status : Answered
Chosen Option : 3

Q.6 Which of the following rivers rises in the Nepal Himalayas?

- Ans 1. Betwa
 2. Chenab
 3. Chambal
 4. Ghaghara

Question ID : 26433047278
Status : Answered
Chosen Option : 4

Q.7 How many different levels of courts are there in India?

- Ans 1. Two
 2. Four
 3. Five
 4. Three

Question ID : 26433047289
Status : Answered
Chosen Option : 2

Q.8 Aves are warm-blooded animals and have a _____ heart.

- Ans 1. four-chambered
 2. two-chambered
 3. five-chambered
 4. three-chambered

Question ID : 26433047274
Status : Not Answered
Chosen Option : --

Q.9 Ustad Zakir Hussain is a famous Indian _____ player.

- Ans 1. Violin
 2. Guitar
 3. Sitar
 4. Table

Question ID : 26433046636
Status : Answered

Q.10 Joint sector industry is one of the classifications of industries on the basis of _____.

- Ans
- 1. source of raw material
 - 2. capital investment
 - 3. bulk and weight of raw material
 - 4. Ownership

Question ID : 26433047202
Status : Answered
Chosen Option : 2

Q.11 As per Census 2011, which of the following metro cities was the most populated in India?

- Ans
- 1. Kolkata
 - 2. Chennai
 - 3. Delhi
 - 4. Mumbai

Question ID : 26433046705
Status : Answered
Chosen Option : 1

Q.12 Which Indian state government launched Project Sadbhavana in February 2022?

- Ans
- 1. Maharashtra
 - 2. Assam
 - 3. Tamil Nadu
 - 4. Gujarat

Question ID : 26433047193
Status : Answered
Chosen Option : 4

Q.13 In which year did Tipu Sultan die defending his capital Seringapatam?

- Ans
- 1. 1799
 - 2. 1802
 - 3. 1792
 - 4. 1794

Question ID : 26433047283
Status : Not Answered
Chosen Option : --

Q.14 In the Union Budget of India 2022, what percentage of tax has been levied on transfer of digital assets (cryptocurrency)?

- Ans 1. 20 percentage
 2. 5 percentage
 3. 30 percentage
 4. 10 percentage

Question ID : 26433046642
Status : Answered
Chosen Option : 3

Q.15 Ajit Kumar Doval is the fifth and current _____ to the Prime Minister of India.

- Ans 1. Private Secretary
 2. Principal Secretary
 3. National Security Advisor
 4. Additional Secretary

Question ID : 26433046619
Status : Answered
Chosen Option : 3

Q.16 Which of the following teams won the ICC Women's World Cup 2021/22?

- Ans 1. Australia
 2. South Africa
 3. England
 4. India

Question ID : 26433047265
Status : Answered
Chosen Option : 1

Q.17 Padma Subrahmanyam is known for which classical dance form?

- Ans 1. Bharatanatyam
 2. Kathak
 3. Kuchipudi
 4. Mohiniyattam

Question ID : 26433047287
Status : Answered
Chosen Option : 2



Q.18 Which of the following does NOT fall under Non-Chordates?

- Ans
- 1. Annelida
 - 2. Porifera
 - 3. Vertebrata
 - 4. Mollusca

Question ID : 26433046799
Status : Not Answered
Chosen Option : --

Q.19 Which of the following is one of the key features of the Indian Constitution?

- Ans
- 1. Autocratic government
 - 2. Dependent Judiciary
 - 3. Non-secular
 - 4. Federalism

Question ID : 26433047213
Status : Answered
Chosen Option : 4

Q.20 _____ was founded by the Dadoba Pandurang and his brother Atmaram Pandurang in 1863 when Keshub Chandra Sen visited Maharashtra, with an aim to make people believe in one God and worship only one God.

- Ans
- 1. Prarthana Samaj
 - 2. Satyashodhak Samaj
 - 3. Arya Samaj
 - 4. Brahma Samaj

Question ID : 26433046809
Status : Answered
Chosen Option : 2

Q.21 Which planet in the solar system is considered as Earth's twin?

- Ans
- 1. Mercury
 - 2. Saturn
 - 3. Neptune
 - 4. Venus

Question ID : 26433047201
Status : Answered
Chosen Option : 4

SSC MTS (Non Technical) EXAM STUDY KIT



FREE SHIPPING 

- ▶ 100% SSC MTS Exam Syllabus Covered
- ▶ PRINTED Notes
- ▶ 8 Books, 700+ Pages
- ▶ 2500+ MCQs
- ▶ Practice Papers
- ▶ 1 Year Current Affairs

50% OFF

 **SSCPORTAL.IN**
India's largest online community for SSC, CDS, Railways

SSC MTS PDF NOTES

100% Syllabus Covered



CLICK HERE

<https://sscpportal.in/study-kit/mts>

Q.22 Who among the following Chola rulers built Nishumbhasudini Goddess temple in Thanjavur?

- Ans 1. Aditya I
 2. Vijayalaya
 3. Rajaraja I
 4. Arinjaya

Question ID : 26433047207
Status : Not Answered
Chosen Option : --

Q.23 What is the name of Mahatma Gandhi's autobiography ?

- Ans 1. Justice for the Judge
 2. The Story of My Experiments with Truth
 3. The Bandit Queen of India
 4. My Music, My Life

Question ID : 26433046635
Status : Answered
Chosen Option : 2

Q.24 Who among the following is the first Indian Grandmaster to become Women's Chess World Rapid Champion?

- Ans 1. Tania Sachdev
 2. Koneru Humpy
 3. Harika Dronavalli
 4. Bhakti Kulkarni

Question ID : 26433046765
Status : Answered
Chosen Option : 2

Q.25 The International Sand Art festival is usually held in _____.

- Ans 1. Kerala
 2. Maharashtra
 3. Tamil Nadu
 4. Odisha

Question ID : 26433046871
Status : Not Answered
Chosen Option : --