

Section : General Intelligence and Reasoning

Q.1 Which two numbers should be interchanged to make the given equation correct?

$$42 \div 7 \times 5 + 35 - 49 = 18$$

- Ans
- 1. 42 and 49
 - 2. 35 and 49
 - 3. 5 and 35
 - 4. 42 and 35

Question ID : 65497815629
Chosen Option : 4

Q.2 In a certain code language, 'HOUSE' is written as '81261922' and 'INK' is written as '181411'. How will 'MISTAKE' be written in that language?

- Ans
- 1. 14901920261222
 - 2. 13181920261122
 - 3. 13181819261105
 - 4. 13091920011122

Question ID : 65497815637
Chosen Option : 2

Q.3 Which of the following numbers will replace the question mark (?) in the given series?

11, 22, 25, ?, 105, 630

- Ans
- 1. 29
 - 2. 55
 - 3. 75
 - 4. 100

Question ID : 65497815632
Chosen Option : 4

Q.4 Select the option that will replace the question mark (?) in the figure given below to complete the pattern.



Ans



Question ID : 65497815648
Chosen Option : 2

Q.5 Two statements are given followed by two conclusions numbered I and II. Assuming the statements to be true, even if they seem to be at variance with commonly known facts, decide which of the conclusions logically follow(s) from the statements.

Statements:
No bowler is a batsman.
Some bowlers are fielders.

Conclusions:
I. No fielder is a batsman.
II. No batsman is a bowler.

- Ans
- ✗ 1. Both conclusions I and II follow.
 - ✗ 2. Only conclusion I follows.
 - ✓ 3. Only conclusion II follows.
 - ✗ 4. Neither conclusion I nor II follows.

Question ID : 65497815642
Chosen Option : 3

Q.6 Study the given pattern carefully and select the number that can replace the question mark (?) in it.

25 24 122
31 27 143
35 29 ?

- Ans
- ✗ 1. 197
 - ✓ 2. 157
 - ✗ 3. 114
 - ✗ 4. 222

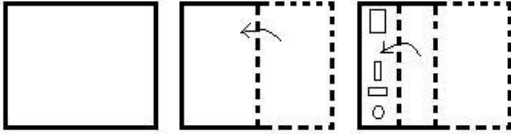
Question ID : 65497815631
Chosen Option : 2



Download SSC CGL, CHSL E-BOOKS

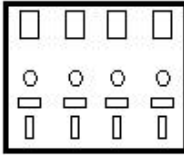
[CLICK HERE](#)

Q.7 A paper is folded and cut as shown below. How will it appear when unfolded?

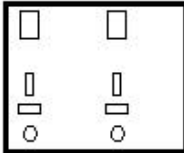


Ans

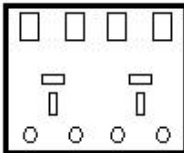
✗ 1.



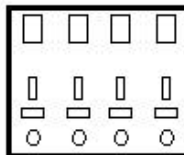
✗ 2.



✗ 3.



✓ 4.



Question ID : 65497815651
Chosen Option : 4

Q.8 If $T > H > K > L$ and $V < K > Z = B$, then which of the following conclusions is NOT correct?

Ans ✗ 1. $T > L$

✗ 2. $V < T$

✓ 3. $K = B$

✗ 4. $H > Z$

Question ID : 65497815646
Chosen Option : 3

Q.9 Select the option that is related to the third letter-cluster in the same way as the second letter-cluster is related to the first letter-cluster.

CANVAS : DCQZFY :: LOANER : ?

Ans ✗ 1. MQDSKX

✗ 2. MRDRJY

✓ 3. MQDRJX

✗ 4. MQERJY

Question ID : 65497815638
Chosen Option : 3



Download SSC CGL, CHSL E-BOOKS

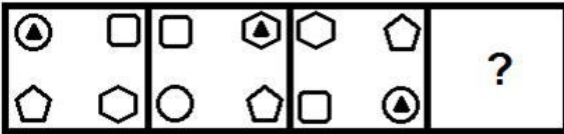
CLICK HERE

Q.10 Five salesmen A, B, C, D and E are sitting in a meeting around a circular table. A is to the immediate left of E. C is to the immediate left of B. D is sitting between B and A. Who is sitting at the second place to the right of E?

- Ans
- ✓ 1. B
 - ✗ 2. C
 - ✗ 3. D
 - ✗ 4. A

Question ID : 65497815644
Chosen Option : 1

Q.11 Select the figure that will replace the question mark (?) in the following figure series.



Ans

- ✗ 1.
- ✗ 2.
- ✓ 3.
- ✗ 4.

Question ID : 65497815647
Chosen Option : 3

Q.12 Select the option that is related to the third number in the same way as the second number is related to the first number.

6 : 85 :: 12 : ?

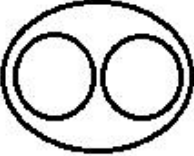
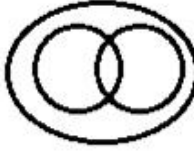

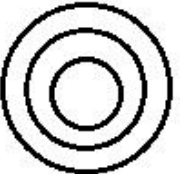
- Ans
- 1. 301
 - 2. 210
 - 3. 313
 - 4. 346

Question ID : 65497815630
Chosen Option : 3

Q.13 Select the Venn diagram that best illustrates the relationship between the following classes.

Females, Mothers, Sisters

Ans

- 1. 
- 2. 
- 3. 
- 4. 

Question ID : 65497815652
Chosen Option : 2

Q.14 In a certain code language, 'FOSTER' is written as '36' and 'DANCE' is written as '25'. How will 'ORCHARD' be written in that language?

- Ans
- 1. 64
 - 2. 36
 - 3. 49
 - 4. 45

Question ID : 65497815636
Chosen Option : 3

Q.15 Select the option that is related to the third word in the same way as the second word is related to the first word.

Rupee : Currency :: Summer : ?

- Ans 1. Heat
 2. Season
 3. Humidity
 4. Temperature

Question ID : 65497815639
Chosen Option : 2

Q.16 Which of the following letter-clusters will replace the question mark (?) in the given series?

FUV, IXW, LAX, ?, RGZ

- Ans 1. PCY
 2. PCX
 3. ODY
 4. OCW

Question ID : 65497815641
Chosen Option : 3

Q.17 Two statements are given followed by three conclusions numbered I, II and III. Assuming the statements to be true, even if they seem to be at variance with commonly known facts, decide which of the conclusions logically follow(s) from the statements.

Statements:

Some beauticians are architects.
All architects are cashiers.

Conclusions:

I. Some architects are beauticians.
II. Some cashiers are architects.
III. Some cashiers are beauticians.

- Ans 1. Only conclusions I and III follow.
 2. Only conclusions II and III follow.
 3. All of the conclusions follow.
 4. Only conclusions I and II follow.

Question ID : 65497815643
Chosen Option : 3

Q.18 In a certain code language, 'ROMAN' is written as 'YVTHU'. How will 'THING' be written in that language?

- Ans 1. AORSN
 2. BCPUN
 3. APQUM
 4. AOPUN

Question ID : 65497815634
Chosen Option : 4



Q.19 उस विकल्प का चयन करें, जो तीसरे शब्द से ठीक उसी प्रकार संबंधित है, जिस प्रकार दूसरा शब्द पहले शब्द से संबंधित है।

आनंददायक : सुखद :: उत्कृष्ट : ?

- Ans
- 1. संपन्न
 - 2. हास्यपूर्ण
 - 3. उत्तम
 - 4. प्रसन्न

Question ID : 65497815640
Chosen Option : 3

Q.20 In a certain code language, 'CLASS' is written as 'TTBMD'. How will 'DINOSOUR' be written in that language?

- Ans
- 1. SVPTPOJE
 - 2. SVPRPJKF
 - 3. SWPUPOJE
 - 4. SXOSPOJE

Question ID : 65497815635
Chosen Option : 1

Q.21 Which of the following numbers will replace the question mark (?) in the given series?

50, 86, ?, 127, 136, 140, 141

- Ans
- 1. 123
 - 2. 99
 - 3. 111
 - 4. 103

Question ID : 65497815633
Chosen Option : 3



Download SSC CGL, CHSL E-BOOKS

[CLICK HERE](#)

Q.22 Select the correct mirror image of the given figure when the mirror is placed at MN as shown below.



Ans

✓ 1.



✗ 2.



✗ 3.



✗ 4.



Question ID : 65497815650
Chosen Option : 1

Q.23 If A denotes 'addition', B denotes 'multiplication', C denotes 'subtraction', and D denotes 'division', then what will be the value of the following expression?

$$5 B 5 B 3 A 14 C (28 D 7) A 5 B (13 C 9)$$

Ans ✓ 1. 105

✗ 2. 112

✗ 3. 95

✗ 4. 45

Question ID : 65497815628
Chosen Option : 1

Q.24 Eight friends P, Q, R, S, T, U, V and W are sitting in two lines, with four friends sitting in each line. Both the lines are facing north. The four persons in the back line are exactly behind the four persons in the front line. P is between T and W. Q is just behind T. Q, who is to the immediate left of S, is also at one of the corners in the back line. R is between S and U. Who is sitting between P and V?

Ans ✗ 1. S

✓ 2. W

✗ 3. T

✗ 4. U

Question ID : 65497815645
Chosen Option : 2



Download SSC CGL, CHSL E-BOOKS

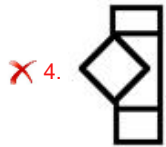
[CLICK HERE](#)

Q.25 Select the option figure that is embedded in the given figure (X) as its part (rotation is NOT allowed).



(X)

Ans



Question ID : 65497815649
Chosen Option : 2



Download SSC CGL, CHSL E-BOOKS

[CLICK HERE](#)