

Sub Inspector in Delhi Police and Central Armed Police Forces Examination 2024 Paper I Exam

Roll Number	
Candidate Name	
Venue Name	
Exam Date	29/06/2024
Exam Time	9:00 AM - 11:00 AM
Subject	SICPO Paper I 2024

Section : **General Intelligence and Reasoning**

Q.1 If + means -, - means ×, × means ÷, ÷ means +, what will come in place of the question mark (?) in the given equation?

$$1200 \times 3 - 1 \div 100 + 499 = ?$$

Ans 1.5

2.3

3.2

4.1

Question ID : **630680154562**

Option 1 ID : **630680598053**

Option 2 ID : **630680598054**

Option 3 ID : **630680598055**

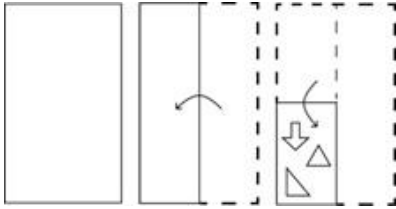
Option 4 ID : **630680598052**

Status : **Answered**

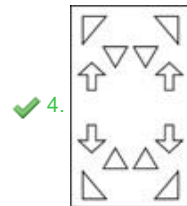
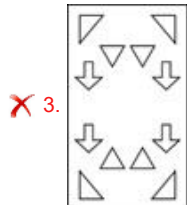
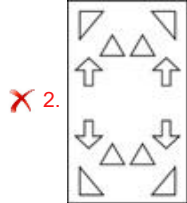
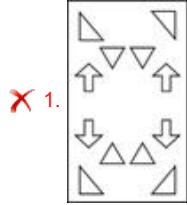
Chosen Option : **4**



Q.2 The sequence of folding a paper and the manner in which the folded paper is cut is shown in the following figures. How would this paper look when unfolded?



Ans



Question ID : 630680344224

Option 1 ID : 6306801339209

Option 2 ID : 6306801339210

Option 3 ID : 6306801339212

Option 4 ID : 6306801339211

Status : Answered

Chosen Option : 2



Q.3 Select the option figure in which the given figure is embedded as its part (rotation is NOT allowed).

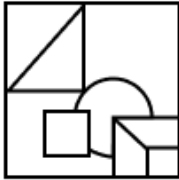


Ans

✓ 1.



✗ 2.



✗ 3.



✗ 4.



Question ID : 630680867779

Option 1 ID : 6306803398763

Option 2 ID : 6306803398761

Option 3 ID : 6306803398760

Option 4 ID : 6306803398762

Status : Answered

Chosen Option : 1

Q.4 Two statements are given, followed by two conclusions numbered I and II. Assuming the statements to be true, even if they seem to be at variance with commonly known facts, decide which of the conclusions logically follow(s) from the statements.

Statements:

All papers are trees.

Some papers are leaves.

Conclusions:

I. Some trees are leaves.

II. Some trees are papers.

Ans ✗ 1. Only conclusion I follows

✓ 2. Both conclusions I and II follow

✗ 3. Neither conclusion I nor II follows

✗ 4. Only conclusion II follows

Question ID : 630680417362

Option 1 ID : 6306801628211

Option 2 ID : 6306801628213

Option 3 ID : 6306801628214

Option 4 ID : 6306801628212

Status : Answered

Chosen Option : 2



Q.5 Six students are sitting around a circular table facing the centre. Van is sitting second to the left of Luke. Luke is an immediate neighbour of both Ruth and Max. Jude is sitting second to the left of Van. Ruth is an immediate neighbour of both Luke and Van. Who is the immediate neighbour of Jude and Luke?

- Ans
- 1. Ruth
 - 2. Tess
 - 3. Max
 - 4. Van

Question ID : 630680417150
Option 1 ID : 6306801627366
Option 2 ID : 6306801627365
Option 3 ID : 6306801627363
Option 4 ID : 6306801627364
Status : Answered
Chosen Option : 2

Q.6 Select the set in which the numbers are related in the same way as are the numbers of the following sets.

(NOTE: Operations should be performed on the whole numbers, without breaking down the numbers into its constituent digits. E.g. 13 – Operations on 13 such as adding /deleting /multiplying etc. to 13 can be performed. Breaking down 13 into 1 and 3 and then performing mathematical operations on 1 and 3 is not allowed)

(104, 26, 13)
(168, 42, 21)

- Ans
- 1. (216, 54, 27)
 - 2. (216, 52, 27)
 - 3. (210, 54, 27)
 - 4. (216, 54, 29)

Question ID : 630680344675
Option 1 ID : 6306801341011
Option 2 ID : 6306801341009
Option 3 ID : 6306801341010
Option 4 ID : 6306801341012
Status : Answered
Chosen Option : 1

Q.7 Select the set in which the numbers are related in the same way as are the numbers of the following sets.

(NOTE : Operations should be performed on the whole numbers, without breaking down the numbers into its constituent digits. E.g. 13 – Operations on 13 such as adding /deleting /multiplying etc. to 13 can be performed. Breaking down 13 into 1 and 3 and then performing mathematical operations on 1 and 3 is not allowed.)

(145, 76)
(182, 113)

- Ans
- 1. (163, 94)
 - 2. (153, 74)
 - 3. (149, 72)
 - 4. (174, 112)

Question ID : 630680340899
Option 1 ID : 6306801326040
Option 2 ID : 6306801326039
Option 3 ID : 6306801326037
Option 4 ID : 6306801326038
Status : Answered
Chosen Option : 1



Q.8 Harini starts from a cafe and walks 4 km towards the south. She then turns right and walks 2 km, again turns right and walks 4 km, and then turns left and walks 4 km. How many kilometres will Harini need to walk to reach the café straight from this point?

- Ans 1. 8 km
 2. 6 km
 3. 4 km
 4. 2 km

Question ID : 630680147601
 Option 1 ID : 630680571145
 Option 2 ID : 630680571143
 Option 3 ID : 630680571142
 Option 4 ID : 630680571144
 Status : Answered
 Chosen Option : 2

Q.9 Select the set in which the numbers are related in the same way as are the numbers of the following sets.

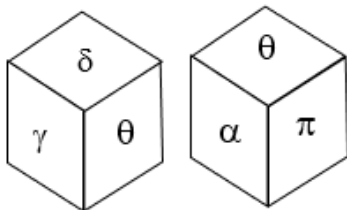
(NOTE: Operations should be performed on the whole numbers, without breaking down the numbers into its constituent digits. E.g. 13 – Operations on 13 such as adding /deleting /multiplying etc. to 13 can be performed. Breaking down 13 into 1 and 3 and then performing mathematical operations on 1 and 3 is not allowed)

(15, 60, 10)
 (21, 84, 14)

- Ans 1. (31, 132, 22)
 2. (33, 132, 24)
 3. (33, 134, 22)
 4. (33, 132, 22)

Question ID : 630680344671
 Option 1 ID : 6306801340995
 Option 2 ID : 6306801340993
 Option 3 ID : 6306801340994
 Option 4 ID : 6306801340996
 Status : Answered
 Chosen Option : 4

Q.10 A dice has its faces marked by symbols α , β , θ , γ , π and δ . Two positions of the same dice are given below. Which face is opposite to face β ?



- Ans 1. α
 2. δ
 3. θ
 4. γ

Question ID : 630680867784
 Option 1 ID : 6306803398781
 Option 2 ID : 6306803398783
 Option 3 ID : 6306803398780
 Option 4 ID : 6306803398782
 Status : Answered
 Chosen Option : 3



CPO Sub-Inspectors

(Delhi Police & CAPFs, CISF Exam)



100%
SAFE

- ▶ 100% Written Exam Syllabus
- ▶ Paper-1 & Paper-2
- ▶ 1000+ Pages, 3000+ MCQ
- ▶ Solved Papers & Practice Papers
- ▶ 1 Year Current Affairs

50%
OFF

Pay online




SSC CPO

PDF NOTES

50%
OFF

CLICK HERE



CLICK BELOW LINK TO DOWNLOAD PDF NOTES

<https://sscportal.in/study-kit/capfs>

<https://sscportal.in/study-kit>

Q.11 If '+' means '-', '-' means 'x', 'x' means '÷' and '÷' means '+', what will come in place of '?' in the following equation?
 $59 \div 6 - 28 \times 7 + 30 = ?$

- Ans
- 1. 49
 - 2. 53
 - 3. 67
 - 4. 58

Question ID : 630680411990
Option 1 ID : 6306801606796
Option 2 ID : 6306801606798
Option 3 ID : 6306801606797
Option 4 ID : 6306801606795
Status : Answered
Chosen Option : 2

Q.12 If 'A' stands for '+', 'B' stands for '-', 'C' stands for 'x' and 'D' stands for '÷', what will come in place of the question mark (?) in the following equation?
 $69 D 3 A 4 C 7 B 10 = ?$

- Ans
- 1. 39
 - 2. 41
 - 3. 37
 - 4. 35

Question ID : 630680411667
Option 1 ID : 6306801605505
Option 2 ID : 6306801605506
Option 3 ID : 6306801605503
Option 4 ID : 6306801605504
Status : Answered
Chosen Option : 2

Q.13 Select the option that is related to the third word in the same way as the second word is related to the first word.
(The words must be considered as meaningful English words and must not be related to each other based on the number of letters/number of consonants/ vowels in the word.)
Ounce : Kilogram :: Quart : ?

- Ans
- 1. Ounces
 - 2. Liquid
 - 3. Stone
 - 4. Litres

Question ID : 630680416417
Option 1 ID : 6306801624432
Option 2 ID : 6306801624431
Option 3 ID : 6306801624434
Option 4 ID : 6306801624433
Status : Answered
Chosen Option : 4



Q.14 In a certain code language, 'BELT' is written as '78', and 'CASH' is written as '62'. How will 'DISC' be written in that language?

- Ans
- 1. 86
 - 2. 82
 - 3. 70
 - 4. 92

Question ID : 630680416612
Option 1 ID : 6306801625213
Option 2 ID : 6306801625212
Option 3 ID : 6306801625211
Option 4 ID : 6306801625214
Status : Answered
Chosen Option : 3

Q.15 Which letter cluster will replace the question mark (?) to complete the given series?
PFBR, MKUA, ?, GUGS, DZZB

- Ans
- 1. HKPE
 - 2. JPNJ
 - 3. JLEJ
 - 4. QYGC

Question ID : 630680417192
Option 1 ID : 6306801627534
Option 2 ID : 6306801627532
Option 3 ID : 6306801627531
Option 4 ID : 6306801627533
Status : Answered
Chosen Option : 2

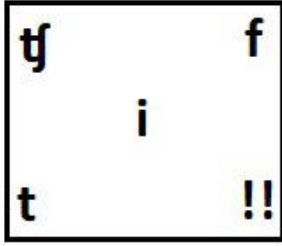


Q.16 Select the figure from among the given options that can logically replace the question mark (?) in the following series.

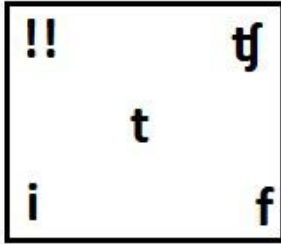


Ans


✗ 1.



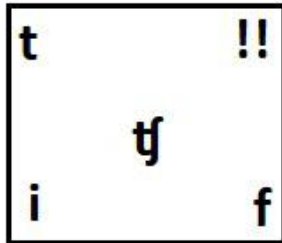
✗ 2.



✓ 3.



✗ 4.



Question ID : 630680867762

Option 1 ID : 6306803398694

Option 2 ID : 6306803398692

Option 3 ID : 6306803398695

Option 4 ID : 6306803398693

Status : Answered

Chosen Option : 3



Q.17 Identify the figure given in the options which when put in place of (?) will logically complete the series.

P	A	T	P	S	T	O	S	
	S		O		A		P	?
T		O	S	A	O	P	A	T

Ans

✓ 1.

A		O
	T	
P		S

✗ 2.

P		A
	S	
T		O

✗ 3.

A		O
	T	
S		P

✗ 4.

A		T
	S	
O		P

Question ID : 630680867768

Option 1 ID : 6306803398717

Option 2 ID : 6306803398718

Option 3 ID : 6306803398716

Option 4 ID : 6306803398719

Status : Answered

Chosen Option : 1

Q.18 Which of the following terms will replace the question mark (?) in the given series?
MLV, NMW, ONX, ?

Ans ✗ 1. FJM

✗ 2. EFG

✓ 3. POY

✗ 4. GNM

Question ID : 630680417063

Option 1 ID : 6306801627017

Option 2 ID : 6306801627015

Option 3 ID : 6306801627016

Option 4 ID : 6306801627018

Status : Answered

Chosen Option : 3



Q.19 Two statements are given followed by two conclusions numbered I and II. Assuming the statements to be true, even if they seem to be at variance with commonly known facts, decide which of the conclusions logically follow(s) from the statements.

Statements:

- 1) All networks are fibers.
- 2) Some fibers are wires.

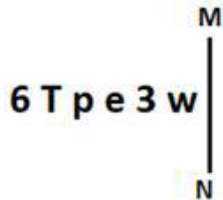
Conclusions:

- I. All networks can never be wires.
- II. Some networks are wires.

- Ans
- 1. Neither Conclusion I nor II follows.
 - 2. Both Conclusions I and II follow.
 - 3. Only Conclusion I follows.
 - 4. Only Conclusion II follows.

Question ID : 630680416928
 Option 1 ID : 6306801626477
 Option 2 ID : 6306801626478
 Option 3 ID : 6306801626475
 Option 4 ID : 6306801626476
 Status : Answered
 Chosen Option : 1

Q.20 Select the correct mirror image of the given figure when the mirror is placed at MN as shown below.



- Ans
- 1. w e 3 q T @
 - 2. M E e q T @
 - 3. w E e d 1 9
 - 4. w E @ q T @

Question ID : 630680356645
 Option 1 ID : 6306801388584
 Option 2 ID : 6306801388582
 Option 3 ID : 6306801388581
 Option 4 ID : 6306801388583
 Status : Answered
 Chosen Option : 4

Q.21 If 'A' stands for '+', 'B' stands for 'x', 'C' stands for '+' and 'D' stands for '-', what will come in place of the question mark (?) in the following equation?
 228 B 5 C 89 D 328 A 4 = ?

- Ans
- 1. 1774
 - 2. 1174
 - 3. 1147
 - 4. 1474

Question ID : 630680411709
 Option 1 ID : 6306801605673
 Option 2 ID : 6306801605672
 Option 3 ID : 6306801605671
 Option 4 ID : 6306801605674
 Status : Answered
 Chosen Option : 3



Q.22 Select the option that is related to the third word in the same way as the second word is related to the first word. (The words must be considered as meaningful English words and must not be related to each other based on the number of letters/number of consonants/vowels in the word.)

Swan : Cygnet :: Dog : ?

- Ans 1. Puppy
 2. Calf
 3. Pet
 4. Omnivores

Question ID : 630680416727
Option 1 ID : 6306801625672
Option 2 ID : 6306801625674
Option 3 ID : 6306801625673
Option 4 ID : 6306801625671
Status : Answered
Chosen Option : 1

Q.23 If '+' means '-', '-' means 'x', 'x' means '+', '+' means '+', what will come in place of the question mark (?) in the following equation?

$$42 \times 3 - 16 \div 9 + 11 = ?$$

- Ans 1. 232
 2. 227
 3. 222
 4. 240

Question ID : 630680158166
Option 1 ID : 630680612193
Option 2 ID : 630680612192
Option 3 ID : 630680612195
Option 4 ID : 630680612194
Status : Answered
Chosen Option : 3

Q.24 Select the option that represents the correct order of the given words as they would appear in an English dictionary.

1. Winterish
2. Wingspread
3. Windblast
4. Wintertide
5. Windscreen
6. Winkling

- Ans 1. 3, 5, 2, 6, 1, 4
 2. 3, 5, 4, 2, 6, 1
 3. 3, 5, 2, 4, 6, 1
 4. 3, 5, 2, 4, 1, 6

Question ID : 630680417408
Option 1 ID : 6306801628397
Option 2 ID : 6306801628395
Option 3 ID : 6306801628396
Option 4 ID : 6306801628398
Status : Answered
Chosen Option : 1



Q.25 In a code language, 'ROCK' is written as 'PKAG', and 'CLUB' is written as 'AHSX'. How will 'SHOP' be written in that language?

- Ans
- 1. MQDL
 - 2. QMLD
 - 3. QDML
 - 4. QMDL

Question ID : 630680416685
Option 1 ID : 6306801625505
Option 2 ID : 6306801625503
Option 3 ID : 6306801625504
Option 4 ID : 6306801625506
Status : Answered
Chosen Option : 3

Q.26 In a certain code language, 'COOL' is written as '45' and 'TREE' is written as '48'. How will 'WELL' be written in that language?

- Ans
- 1. 46
 - 2. 52
 - 3. 36
 - 4. 51

Question ID : 630680416593
Option 1 ID : 6306801625137
Option 2 ID : 6306801625135
Option 3 ID : 6306801625136
Option 4 ID : 6306801625138
Status : Answered
Chosen Option : 2

Q.27 Select the option that indicates the correct arrangement of the given words in the order in which they appear in an English dictionary.

- 1- Circle
- 2- Cinema
- 3- Circus
- 4- Circumference
- 5- Cipher

- Ans
- 1. 2, 5, 1, 4, 3
 - 2. 2, 1, 5, 4, 3
 - 3. 5, 2, 4, 1, 3
 - 4. 5, 4, 3, 1, 2

Question ID : 630680417216
Option 1 ID : 6306801627628
Option 2 ID : 6306801627630
Option 3 ID : 6306801627627
Option 4 ID : 6306801627629
Status : Answered
Chosen Option : 1



Q.28 Rajesh starts from Point A and drives 17 km towards West. He then takes a left turn, drives 10 km, turns left and drives 40 km. He then takes a left turn and drives 30 km. He takes a final left turn, drives 23 km and stops at Point Q. How far (shortest distance) and towards which direction should he now drive to reach Point A again? (All turns are 90° turns only.)

- Ans** 1. 20 km towards South
 2. 20 km towards North
 3. 15 km towards North
 4. 15 km towards South

Question ID : 630680416080
Option 1 ID : 6306801623084
Option 2 ID : 6306801623083
Option 3 ID : 6306801623085
Option 4 ID : 6306801623086
Status : Answered
Chosen Option : 2

Q.29 Two statements are given, followed by two conclusions numbered I and II. Assuming the statements to be true, even if they seem to be at variance with commonly known facts, decide which of the conclusions logically follow(s) from the statements.

Statements:

Some clothes are sarees.

All sarees are silks.

Conclusions:

I. Some clothes are silks.

II. Some silks are sarees.

- Ans** 1. Only conclusion II follows
 2. Only conclusion I follows
 3. Neither conclusion I nor II follows
 4. Both conclusions I and II follow

Question ID : 630680417364
Option 1 ID : 6306801628220
Option 2 ID : 6306801628219
Option 3 ID : 6306801628222
Option 4 ID : 6306801628221
Status : Answered
Chosen Option : 4

Q.30 254 is related to 524 following a certain logic. Following the same logic, 912 is related to 642. Which of the following numbers is related to 188 using the same logic?

- Ans** 1. 900
 2. 845
 3. 825
 4. 840

Question ID : 63068063341
Option 1 ID : 630680244530
Option 2 ID : 630680244532
Option 3 ID : 630680244533
Option 4 ID : 630680244531
Status : Answered
Chosen Option : 2



Q.31 In a certain code language,
'A @ B' means 'A is the daughter of B',
'A # B' means 'A is the brother of B',
'A + B' means 'A is the wife of B',
'A % B' means 'A is the father of B'.
How is M related to T if 'M # N @ P + S % T'?

- Ans 1. Brother
 2. Husband
 3. Mother's brother
 4. Father

Question ID : 630680869740
Option 1 ID : 6306803406327
Option 2 ID : 6306803406328
Option 3 ID : 6306803406329
Option 4 ID : 6306803406326
Status : Answered
Chosen Option : 1

Q.32 Select the pair which is related to each other in the same way as the following –
72:25

- Ans 1. 68:8
 2. 54:30
 3. 28:36
 4. 46:14

Question ID : 630680110733
Option 1 ID : 630680429009
Option 2 ID : 630680429012
Option 3 ID : 630680429010
Option 4 ID : 630680429011
Status : Answered
Chosen Option : 3

Q.33 In a certain code language,
'A + B' means 'A is the mother of B';
'A - B' means 'A is the husband of B';
'A × B' means 'B is the sister of A' and
'A ÷ B' means 'A is the father of B'.
Based on the above information, how is R related to T if 'R ÷ S - V + Q × T'?

- Ans 1. Father
 2. Father's father
 3. Brother
 4. Son

Question ID : 630680287540
Option 1 ID : 6306801118067
Option 2 ID : 6306801118070
Option 3 ID : 6306801118068
Option 4 ID : 6306801118069
Status : Answered
Chosen Option : 2



Q.34 Which of the following numbers will replace the question mark (?) in the given series?
67, 78, 103, 118, ?

- Ans
- 1. 171
 - 2. 184
 - 3. 147
 - 4. 241

Question ID : 630680412017
Option 1 ID : 6306801606904
Option 2 ID : 6306801606903
Option 3 ID : 6306801606906
Option 4 ID : 6306801606905
Status : Answered
Chosen Option : 3

Q.35 Find the two signs to be interchanged for making the following equation correct.
 $9 + 8 \times 4 - 8 \div 2 = 11$

- Ans
- 1. + and +
 - 2. + and ×
 - 3. - and +
 - 4. + and -

Question ID : 630680411795
Option 1 ID : 6306801606017
Option 2 ID : 6306801606018
Option 3 ID : 6306801606016
Option 4 ID : 6306801606015
Status : Answered
Chosen Option : 4

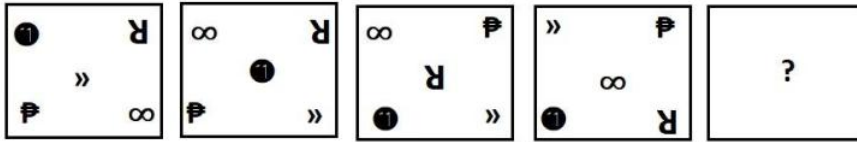
Q.36 Which letter cluster can replace the question mark (?) to complete the given series?
TCVH, RETJ, ?, NIPN, LKNP

- Ans
- 1. MGSK
 - 2. MFSK
 - 3. PGRL
 - 4. PFRL

Question ID : 630680416306
Option 1 ID : 6306801623989
Option 2 ID : 6306801623987
Option 3 ID : 6306801623990
Option 4 ID : 6306801623988
Status : Answered
Chosen Option : 3

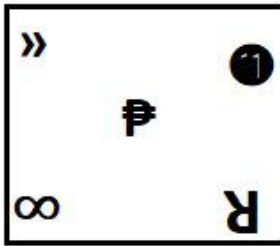


Q.37 Select the figure from among the given options that can logically replace the question mark (?) in the following series.

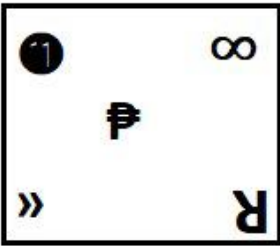


Ans

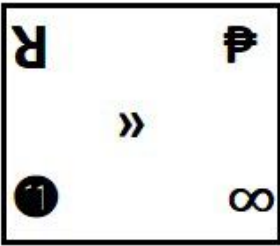
✓ 1.



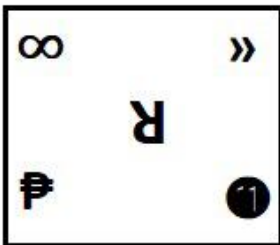
✗ 2.



✗ 3.



✗ 4.



Question ID : 630680867752

Option 1 ID : 6306803398655

Option 2 ID : 6306803398654

Option 3 ID : 6306803398652

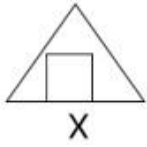
Option 4 ID : 6306803398653

Status : Answered

Chosen Option : 1

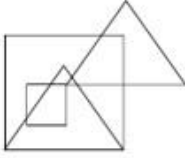


Q.38 Select the option in which the given figure (X) is embedded as its part. (Rotation is NOT allowed.)

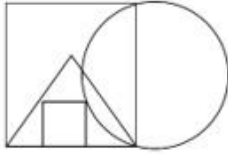


Ans

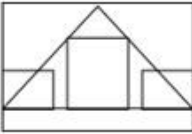
✗ 1.



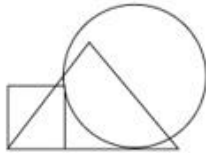
✓ 2.



✗ 3.



✗ 4.



Question ID : 630680305494

Option 1 ID : 6306801188355

Option 2 ID : 6306801188354

Option 3 ID : 6306801188356

Option 4 ID : 6306801188353

Status : Answered

Chosen Option : 2

Q.39 Which of the following numbers will replace the question mark (?) in the given series?
43, 48, 46, ?, 49, 54, 52

Ans ✗ 1. 52

✓ 2. 51

✗ 3. 50

✗ 4. 47

Question ID : 630680411952

Option 1 ID : 6306801606645

Option 2 ID : 6306801606643

Option 3 ID : 6306801606646

Option 4 ID : 6306801606644

Status : Answered

Chosen Option : 2



Q.40 In a code language, 'DILIP' is coded as 46-36-30-36-22 and 'PRINCE' is coded as 22-18-36-26-48-44. How will 'FIROZ' be coded in the same language?

- Ans 1. 42-36-18-24-2
 2. 2-36-18-42-52
 3. 56-36-18-32-52
 4. 48-36-18-38-6

Question ID : 630680416663
Option 1 ID : 6306801625415
Option 2 ID : 6306801625417
Option 3 ID : 6306801625416
Option 4 ID : 6306801625418
Status : Answered
Chosen Option : 1

Q.41 If + means \times , \times means \div , \div means $+$, what will come in place of the question mark (?) in the given equation.

$$300 - 12 \times 120 \div 9 + 32 = ?$$

- Ans 1. 7
 2. 5
 3. 12
 4. 10

Question ID : 630680155122
Option 1 ID : 630680600241
Option 2 ID : 630680600240
Option 3 ID : 630680600243
Option 4 ID : 630680600242
Status : Answered
Chosen Option : 1

Q.42 Which of the following numbers will replace the question marks (?) in the given series?

2, 6, 12, 20, ?, ?, 56, 72

- Ans 1. 36, 40
 2. 30, 38
 3. 30, 42
 4. 32, 44

Question ID : 630680411875
Option 1 ID : 6306801606338
Option 2 ID : 6306801606337
Option 3 ID : 6306801606335
Option 4 ID : 6306801606336
Status : Answered
Chosen Option : 3

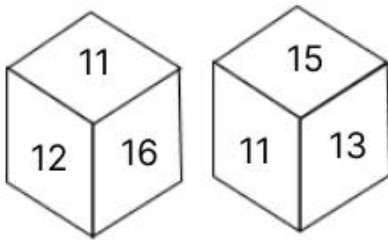


Q.43 Select the number from among the given options that can replace the question mark (?) in the following series.
1024, 899, 835, 808, 800, ?

- Ans
- 1. 795
 - 2. 798
 - 3. 797
 - 4. 799

Question ID : 630680411929
Option 1 ID : 6306801606553
Option 2 ID : 6306801606552
Option 3 ID : 6306801606551
Option 4 ID : 6306801606554
Status : Answered
Chosen Option : 4

Q.44 A dice has its faces marked by numbers 11, 12, 13, 14, 15 and 16. Two positions of the same dice are given below. Which face is opposite to face 14?



- Ans
- 1. 12
 - 2. 15
 - 3. 16
 - 4. 11

Question ID : 630680867787
Option 1 ID : 6306803398793
Option 2 ID : 6306803398794
Option 3 ID : 6306803398795
Option 4 ID : 6306803398792
Status : Answered
Chosen Option : 4

Q.45 Two statements are given, followed by two conclusions numbered I and II. Assuming the statements to be true, even if they seem to be at variance with commonly known facts, decide which of the conclusions logically follow(s) from the statements.

Statements:

All notebooks are erasers.

All erasers are pens.

Conclusions:

I.All notebooks are pens.

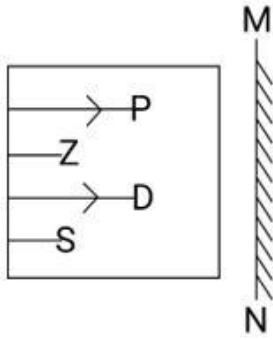
II.Some pens are notebooks.

- Ans
- 1. Neither conclusion I nor II follows
 - 2. Only conclusion I follows
 - 3. Only conclusion II follows
 - 4. Both conclusions I and II follow

Question ID : 630680417007
Option 1 ID : 6306801626794
Option 2 ID : 6306801626791
Option 3 ID : 6306801626792
Option 4 ID : 6306801626793
Status : Answered
Chosen Option : 4

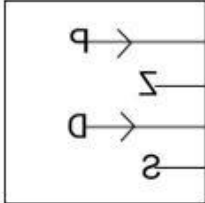


Q.46 Select the correct mirror image of the given figure when the mirror is placed at MN as shown below.

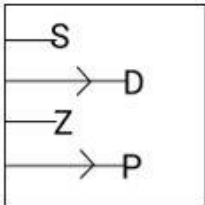


Ans

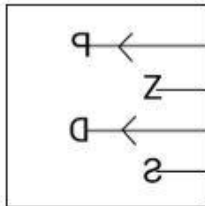
X 1.



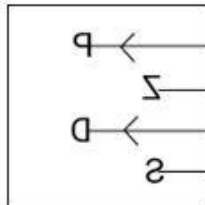
X 2.



X 3.



✓ 4.



Question ID : 630680318348

Option 1 ID : 6306801238471

Option 2 ID : 6306801238469

Option 3 ID : 6306801238472

Option 4 ID : 6306801238470

Status : Answered

Chosen Option : 4



Q.47 In a certain code language, 'revise the lesson' is written as 'rx cd st' and 'the lesson plan' is written as 'cd nq rx'. How is 'revise' written in the given language?

- Ans 1. st
 2. cd
 3. rx
 4. nq

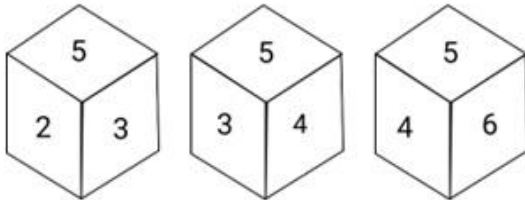
Question ID : 630680305479
Option 1 ID : 6306801188294
Option 2 ID : 6306801188296
Option 3 ID : 6306801188293
Option 4 ID : 6306801188295
Status : Answered
Chosen Option : 1

Q.48 In a certain code language, 'print the cards' is written as 'cd fm px' and 'cards for sale' is written as 'nt px ym'. How is 'cards' written in the given language?

- Ans 1. px
 2. cd
 3. nt
 4. fm

Question ID : 630680305478
Option 1 ID : 6306801188289
Option 2 ID : 6306801188292
Option 3 ID : 6306801188291
Option 4 ID : 6306801188290
Status : Answered
Chosen Option : 1

Q.49 Three different positions of the same die are shown below. What is the number on the face opposite to the one having 6?



- Ans 1. 1
 2. 4
 3. 3
 4. 5

Question ID : 630680312619
Option 1 ID : 6306801216360
Option 2 ID : 6306801216358
Option 3 ID : 6306801216357
Option 4 ID : 6306801216359
Status : Answered
Chosen Option : 3



Q.50 Based on the English alphabetical order, three of the following four letter-clusters are alike in a certain way and thus form a group. Which letter-cluster does not belong to that group?
(Note: The odd letter-cluster is not based on the number of consonants/vowels or their position in the letter-cluster.)

- Ans
- 1. PUR
 - 2. RWT
 - 3. NSP
 - 4. TYU

Question ID : 630680416092
Option 1 ID : 6306801623132
Option 2 ID : 6306801623133
Option 3 ID : 6306801623131
Option 4 ID : 6306801623134
Status : Answered
Chosen Option : 4

Section : General Knowledge and General Awareness

Q.1 Identify the reason for formation of dental plaque.

- Ans
- 1. When acids stick to the teeth
 - 2. Masses of bacterial cells together with food particles stick to the teeth
 - 3. Saliva sticks to the pulp
 - 4. When bacteria acting on sugars produce acids

Question ID : 630680407490
Option 1 ID : 6306801588898
Option 2 ID : 6306801588900
Option 3 ID : 6306801588901
Option 4 ID : 6306801588899
Status : Answered
Chosen Option : 4

Q.2 Which of the following books is written by Rabindranath Tagore?

- Ans
- 1. The Essential Writings
 - 2. The Way to God
 - 3. Nationalism
 - 4. Non-Violent Resistance

Question ID : 630680701385
Option 1 ID : 6306802747480
Option 2 ID : 6306802747479
Option 3 ID : 6306802747478
Option 4 ID : 6306802747477
Status : Not Answered
Chosen Option : --



Q.3 Indian musician, composer and singer Shubha Mudgal was awarded with the _____ in 2000.

- Ans
- 1. Padma Bhushan
 - 2. Padma Vibhushan
 - 3. Sangeet Natak Akademi
 - 4. Padma Shri

Question ID : 630680415810
Option 1 ID : 6306801622008
Option 2 ID : 6306801622007
Option 3 ID : 6306801622010
Option 4 ID : 6306801622009
Status : Not Answered
Chosen Option : --

Q.4 Which of the following statements about privatisation is FALSE?

- Ans
- 1. Improved performance is one of the advantages of privatisation.
 - 2. There is no possibility of exploitation of monopoly power by private companies after privatisation.
 - 3. There was an increase in the cases of disinvestment after the economic reforms of 1991 as compared to the pre-1991 period.
 - 4. Maruti Udyog Limited was a public sector enterprise before the 1991 economic reforms.

Question ID : 630680407174
Option 1 ID : 6306801587639
Option 2 ID : 6306801587638
Option 3 ID : 6306801587640
Option 4 ID : 6306801587641
Status : Answered
Chosen Option : 2

Q.5 As of 2022, according to the Ministry of Petroleum and Natural Gas of the Government of India, how many oil refineries are there in India in total?

- Ans
- 1. 35
 - 2. 23
 - 3. 21
 - 4. 15

Question ID : 630680409690
Option 1 ID : 6306801597590
Option 2 ID : 6306801597592
Option 3 ID : 6306801597589
Option 4 ID : 6306801597591
Status : Not Answered
Chosen Option : --





SSC CGL PDF NOTES

**50%
OFF**

CLICK HERE



CLICK BELOW LINK TO DOWNLOAD PDF NOTES

<https://sscportal.in/study-kit/cgl>

<https://sscportal.in/study-kit>

Q.6 Which of the following physiographic divisions of India has extensive alluvial soil ?

- Ans 1. The Himalayan Range
 2. The North Indian Plain
 3. The Island Group
 4. The Great Indian Desert

Question ID : 630680701448
Option 1 ID : 6306802747727
Option 2 ID : 6306802747726
Option 3 ID : 6306802747728
Option 4 ID : 6306802747725
Status : Answered
Chosen Option : 2

Q.7 What is the shape of the eyeball?

- Ans 1. Spherical
 2. Oval
 3. Cylindrical
 4. Circular

Question ID : 63068074762
Option 1 ID : 630680289205
Option 2 ID : 630680289206
Option 3 ID : 630680289204
Option 4 ID : 630680289203
Status : Answered
Chosen Option : 2

Q.8 Pipelines as a means of transport are looked after by the _____ of the Government of India.

- Ans 1. Ministry of Petroleum and Natural Gas
 2. Ministry of Home Affairs
 3. Ministry of Railways
 4. Ministry of Road Transport and Highways

Question ID : 630680409694
Option 1 ID : 6306801597607
Option 2 ID : 6306801597608
Option 3 ID : 6306801597606
Option 4 ID : 6306801597605
Status : Answered
Chosen Option : 1

Q.9 Which of the following teams won the 12th edition of the Ice Hockey Association of India's (IHAI) National Ice Hockey Championship for Men in 2023?

- Ans 1. Jammu and Kashmir Blue Team
 2. Ladakh Scouts
 3. Indo-Tibetan Border Police (ITBP)
 4. Rimo Club Leh

Question ID : 630680303658
Option 1 ID : 6306801181204
Option 2 ID : 6306801181202
Option 3 ID : 6306801181201
Option 4 ID : 6306801181203
Status : Not Answered
Chosen Option : --



Q.10 The Swaran Singh committee had formulated _____-point code of fundamental duties.

- Ans 1. 11
 2. 7
 3. 9
 4. 8

Question ID : 630680282972
 Option 1 ID : 6306801100022
 Option 2 ID : 6306801100019
 Option 3 ID : 6306801100020
 Option 4 ID : 6306801100021
 Status : Answered
 Chosen Option : 4

Q.11 The author of Tarikh-i-Mubarak Shahi, Yahya Sirhindi claims that the founder of _____ dynasty of Delhi sultanate was a descendant of Prophet Muhammad.

- Ans 1. Sayyid
 2. Mamluk
 3. Lodhi
 4. Khalji

Question ID : 630680412509
 Option 1 ID : 6306801608861
 Option 2 ID : 6306801608860
 Option 3 ID : 6306801608862
 Option 4 ID : 6306801608859
 Status : Answered
 Chosen Option : 1

Q.12 Match Column-A with Column-B.

Column-A	Column-B
a. Alkanes	i. Ethane
b. Alkenes	ii. Butyne
c. Alkynes	iii. Propene
d. Aldehyde	iv. Methanal

- Ans 1. a-i, b-iii, c-ii, d-iv
 2. a-i, b-iii, c-iv, d-ii
 3. a-iv, b-iii, c-ii, d-i
 4. a-iii, b-iv, c-ii, d-i

Question ID : 630680134693
 Option 1 ID : 630680521592
 Option 2 ID : 630680521590
 Option 3 ID : 630680521591
 Option 4 ID : 630680521593
 Status : Answered
 Chosen Option : 1



Q.13 Prof M Yunus won the Nobel peace prize in which year?

- Ans 1. 2002
 2. 2006
 3. 2004
 4. 2001

Question ID : 630680407153
Option 1 ID : 6306801587555
Option 2 ID : 6306801587557
Option 3 ID : 6306801587556
Option 4 ID : 6306801587554
Status : Answered
Chosen Option : 4

Q.14 In which year will India organise the ICC Men's One-Day International World Cup Cricket?

- Ans 1. 2031
 2. 2027
 3. 2025
 4. 2030

Question ID : 630680177014
Option 1 ID : 630680686263
Option 2 ID : 630680686261
Option 3 ID : 630680686260
Option 4 ID : 630680686262
Status : Answered
Chosen Option : 1

Q.15 According to Mendeleev's Periodic Table, which element's properties matched up remarkably well with eka-aluminium?

- Ans 1. Titanium
 2. Germanium
 3. Gallium
 4. Scandium

Question ID : 63068051549
Option 1 ID : 630680198433
Option 2 ID : 630680198430
Option 3 ID : 630680198431
Option 4 ID : 630680198432
Status : Answered
Chosen Option : 2

Q.16 The adoption of the industrial policy of 1956 coincided with which Five-Year Plan?

- Ans 1. 3rd Five-Year Plan
 2. 1st Five-Year Plan
 3. 2nd Five-Year Plan
 4. 4th Five-Year Plan

Question ID : 630680407185
Option 1 ID : 6306801587684
Option 2 ID : 6306801587682
Option 3 ID : 6306801587683
Option 4 ID : 6306801587685
Status : Answered
Chosen Option : 3



Q.17 Which of the following classical dance forms is usually concluded with Tarangam?

- Ans 1. Kuchipudi
 2. Sattriya
 3. Kathakali
 4. Odissi

Question ID : 630680309144
Option 1 ID : 6306801202755
Option 2 ID : 6306801202756
Option 3 ID : 6306801202754
Option 4 ID : 6306801202753
Status : Answered
Chosen Option : 4

Q.18 For which of the following sources of financial resources may financial intermediation NOT be required?

- Ans 1. Raising equity via public offering
 2. Family funds
 3. Borrowing from banks
 4. Borrowing from All India Development Financial Institutions

Question ID : 630680407192
Option 1 ID : 6306801587712
Option 2 ID : 6306801587710
Option 3 ID : 6306801587713
Option 4 ID : 6306801587711
Status : Answered
Chosen Option : 1

Q.19 Which festival is popularly known as the festival of colours?

- Ans 1. Janmashtami
 2. Holi
 3. Diwali
 4. Maha Shivratri

Question ID : 630680409211
Option 1 ID : 6306801595673
Option 2 ID : 6306801595676
Option 3 ID : 6306801595675
Option 4 ID : 6306801595674
Status : Answered
Chosen Option : 2

Q.20 Who among the following Indian Classical dancers received the National Nritya Shiromani Award 2022?

- Ans 1. Aditi Mangaldas
 2. Shovana Narayan
 3. Aparna Satheesan
 4. Sangeeta Majumdar

Question ID : 630680409346
Option 1 ID : 6306801596215
Option 2 ID : 6306801596214
Option 3 ID : 6306801596213
Option 4 ID : 6306801596216
Status : Not Answered
Chosen Option : --



Q.21 Generally, Directive Principles are _____.

- Ans
- 1. negative directions
 - 2. arbitrary actions
 - 3. positive directions
 - 4. prohibitive in nature

Question ID : 630680296975
Option 1 ID : 6306801155466
Option 2 ID : 6306801155465
Option 3 ID : 6306801155464
Option 4 ID : 6306801155463
Status : Answered
Chosen Option : 3

Q.22 Which is an advanced weather satellite of India configured with improved imaging system and atmospheric sounder?

- Ans
- 1. RS-D1
 - 2. GSAT-7A
 - 3. INSAT -3D
 - 4. SROSS-2

Question ID : 630680407454
Option 1 ID : 6306801588755
Option 2 ID : 6306801588756
Option 3 ID : 6306801588757
Option 4 ID : 6306801588754
Status : Not Answered
Chosen Option : --

Q.23 Which of the following statements is NOT correct about River Ganga?

- Ans
- 1. The water level of River Ganga never depends on monsoon and climatic condition of the Himalaya.
 - 2. River Ganga and its river basin support lots of wonderful wildlife, particularly river dolphins, otters, freshwater turtles, and gharials.
 - 3. River Ganga flows from the Himalayas all the way to the Bay of Bengal.
 - 4. River Ganga in India is more than 2500 km long and is the most populated river basin in the world.

Question ID : 630680305594
Option 1 ID : 6306801188752
Option 2 ID : 6306801188751
Option 3 ID : 6306801188750
Option 4 ID : 6306801188749
Status : Answered
Chosen Option : 4

Q.24 In India, the International Day of Non-Violence is also celebrated as _____.

- Ans
- 1. Swami Vivekanand Jayanti
 - 2. Gandhi Jayanti
 - 3. Guru Ravidas Jayanti
 - 4. Mahavir Jayanti

Question ID : 630680410354
Option 1 ID : 6306801600148
Option 2 ID : 6306801600147
Option 3 ID : 6306801600149
Option 4 ID : 6306801600150
Status : Answered
Chosen Option : 2



Q.25 Which of the following cities of Delhi was founded by Ghiyasuddin Tughlaq?

- Ans
- 1. Qila-i-Rai Pithora
 - 2. Siri
 - 3. Tughluqabad
 - 4. Jahanpanah

Question ID : 630680412541
Option 1 ID : 6306801608989
Option 2 ID : 6306801608988
Option 3 ID : 6306801608987
Option 4 ID : 6306801608990
Status : Answered
Chosen Option : 3

Q.26 The number of players in baseball is:

- Ans
- 1. 7
 - 2. 8
 - 3. 9
 - 4. 6

Question ID : 630680115888
Option 1 ID : 630680448883
Option 2 ID : 630680448884
Option 3 ID : 630680448885
Option 4 ID : 630680448882
Status : Answered
Chosen Option : 3

Q.27 Who was executed as an accomplice to the murder of AMT Jackson?

- Ans
- 1. Matangini Hazra
 - 2. Khudiram Bose
 - 3. Hemu Kalani
 - 4. Krishnaji Gopal Karve

Question ID : 630680127478
Option 1 ID : 630680494173
Option 2 ID : 630680494174
Option 3 ID : 630680494175
Option 4 ID : 630680494172
Status : Not Answered
Chosen Option : --



Q.28 Which of the following are salt-water lakes?

- a. Sambhar lake
- b. Dal lake
- c. Wular lake
- d. Chilika lake

Ans 1. a and d

2. c and d

3. a and b

4. a and c

Question ID : 630680407376

Option 1 ID : 6306801588445

Option 2 ID : 6306801588443

Option 3 ID : 6306801588442

Option 4 ID : 6306801588444

Status : Answered

Chosen Option : 1

Q.29 The Indian National Congress formally took up the Swadeshi call in its Benaras session of 1905 under the presidentship of _____.

Ans 1. Gopal Krishna Gokhale

2. Jawahar Lal Nehru

3. Rajendra Prasad

4. Motilal Nehru

Question ID : 630680412420

Option 1 ID : 6306801608506

Option 2 ID : 6306801608504

Option 3 ID : 6306801608505

Option 4 ID : 6306801608503

Status : Answered

Chosen Option : 2

Q.30 Which of the following Ashokan rock edicts declares prohibition of animal sacrifice?

Ans 1. Major Rock Edict - II

2. Major Rock Edict - I

3. Major Rock Edict - IV

4. Major Rock Edict - III

Question ID : 630680412351

Option 1 ID : 6306801608228

Option 2 ID : 6306801608227

Option 3 ID : 6306801608230

Option 4 ID : 6306801608229

Status : Answered

Chosen Option : 4



Q.31 In which of the following is nicotine present in high quantity?

- Ans
- 1. Lime soda
 - 2. Tea
 - 3. Tobacco
 - 4. Butter milk

Question ID : 630680407529
Option 1 ID : 6306801589056
Option 2 ID : 6306801589054
Option 3 ID : 6306801589055
Option 4 ID : 6306801589057
Status : Answered
Chosen Option : 3

Q.32 According to the Global Hunger Index 2022, which neighbouring country is only behind India with a rank of 109 out of 121 countries?

- Ans
- 1. Afghanistan
 - 2. Nepal
 - 3. Pakistan
 - 4. Bangladesh

Question ID : 630680409719
Option 1 ID : 6306801597708
Option 2 ID : 6306801597706
Option 3 ID : 6306801597707
Option 4 ID : 6306801597705
Status : Answered
Chosen Option : 1

Q.33 Which of following gases are found in coal mines and marshy places?

- Ans
- 1. Nitrogen dioxide
 - 2. Ozone
 - 3. Methane
 - 4. Steam

Question ID : 63068074769
Option 1 ID : 630680289234
Option 2 ID : 630680289231
Option 3 ID : 630680289233
Option 4 ID : 630680289232
Status : Answered
Chosen Option : 3

Q.34 Radheshyam Barle, a recipient of Padma Shri in 2021, is an exponent of which of the following dance forms?

- Ans
- 1. Pali
 - 2. Karma
 - 3. Diwari
 - 4. Panthi

Question ID : 630680216040
Option 1 ID : 630680838138
Option 2 ID : 630680838137
Option 3 ID : 630680838136
Option 4 ID : 630680838135
Status : Not Answered
Chosen Option : --



Q.35 Which of the following events happened in 1950?

- Ans
- 1. First Five-Year Plan was started
 - 2. First National Agricultural Policy was adopted
 - 3. Industrial Policy Resolution was adopted
 - 4. The Planning Commission was set up

Question ID : 630680407122
Option 1 ID : 6306801587432
Option 2 ID : 6306801587430
Option 3 ID : 6306801587431
Option 4 ID : 6306801587433
Status : Answered
Chosen Option : 4

Q.36 Identify the largest phylum in the animal kingdom.

- Ans
- 1. Annelida
 - 2. Mollusca
 - 3. Platyhelmenthis
 - 4. Arthropoda

Question ID : 630680407498
Option 1 ID : 6306801588933
Option 2 ID : 6306801588931
Option 3 ID : 6306801588930
Option 4 ID : 6306801588932
Status : Answered
Chosen Option : 4

Q.37 Which Article of the Indian Constitution mentions that 'All the executive action of the Government of a state shall be expressed to be taken in the name of the Governor'?

- Ans
- 1. Article 166(1)
 - 2. Article 163(1)
 - 3. Article 164(1)
 - 4. Article 165(1)

Question ID : 630680408220
Option 1 ID : 6306801591775
Option 2 ID : 6306801591778
Option 3 ID : 6306801591777
Option 4 ID : 6306801591776
Status : Answered
Chosen Option : 4

Q.38 Satyashodhak Samaj (truth seeker society) was established by which of the following social reformers?

- Ans
- 1. Bhimrao Ramji Ambedkar
 - 2. Jyotiba Phule
 - 3. Mahatma Gandhi
 - 4. Mahadev Govind Ranade

Question ID : 630680306339
Option 1 ID : 6306801191710
Option 2 ID : 6306801191709
Option 3 ID : 6306801191712
Option 4 ID : 6306801191711
Status : Answered
Chosen Option : 2



Q.39 The body of the phylum _____ is unsegmented and dorsoventrally flattened.

- Ans
- 1. Coelenterata
 - 2. Mollusca
 - 3. Arthropoda
 - 4. Platyhelminthes

Question ID : 63068094203
Option 1 ID : 630680365508
Option 2 ID : 630680365510
Option 3 ID : 630680365509
Option 4 ID : 630680365507
Status : Answered
Chosen Option : 4

Q.40 Who among the following is known as Tuti-e-Hind?

- Ans
- 1. Tansen
 - 2. Naubat Khan
 - 3. Surdas
 - 4. Amir Khusro

Question ID : 630680409338
Option 1 ID : 6306801596182
Option 2 ID : 6306801596184
Option 3 ID : 6306801596183
Option 4 ID : 6306801596181
Status : Answered
Chosen Option : 4

Q.41 Which of the following is a joint sector industry in India?

- Ans
- 1. Dabur
 - 2. NALCO
 - 3. Oil India Limited
 - 4. TISCO

Question ID : 630680701464
Option 1 ID : 6306802747791
Option 2 ID : 6306802747790
Option 3 ID : 6306802747792
Option 4 ID : 6306802747789
Status : Answered
Chosen Option : 3

Q.42 Which Article of the Indian Constitution states that "There shall be a High Court for each state"?

- Ans
- 1. Article 214
 - 2. Article 125
 - 3. Article 245
 - 4. Article 275

Question ID : 630680408324
Option 1 ID : 6306801592192
Option 2 ID : 6306801592191
Option 3 ID : 6306801592193
Option 4 ID : 6306801592194
Status : Answered
Chosen Option : 3



Q.43 How much will be 59°F in Celsius?

- Ans 1. 45°C
 2. 59°C
 3. 15°C
 4. 30°C

Question ID : 630680199613
Option 1 ID : 630680774062
Option 2 ID : 630680774061
Option 3 ID : 630680774059
Option 4 ID : 630680774060
Status : Answered
Chosen Option : 3

Q.44 As per the National Multidimensional Poverty Index Report 2023, which of the following UTs has the lowest poverty rate?

- Ans 1. Lakshadweep
 2. Ladakh
 3. Jammu and Kashmir
 4. Puducherry

Question ID : 630680869485
Option 1 ID : 6306803405375
Option 2 ID : 6306803405374
Option 3 ID : 6306803405373
Option 4 ID : 6306803405376
Status : Answered
Chosen Option : 4

Q.45 Who is the Chief Executive Head of the State?

- Ans 1. PM
 2. Governor
 3. President
 4. CM

Question ID : 630680408187
Option 1 ID : 6306801591644
Option 2 ID : 6306801591646
Option 3 ID : 6306801591643
Option 4 ID : 6306801591645
Status : Answered
Chosen Option : 1

Q.46 In which year, for the first time, was a resolution on the National Sports Policy laid in both Houses of Parliament?

- Ans 1. 1948
 2. 2000
 3. 1984
 4. 2014

Question ID : 63068055052
Option 1 ID : 630680212238
Option 2 ID : 630680212240
Option 3 ID : 630680212239
Option 4 ID : 630680212241
Status : Answered
Chosen Option : 3



Q.47 Which of the following committees recommended the fundamental duties?

- Ans
- 1. Ashok Mehta Committee
 - 2. Nehru Committee
 - 3. Balwinder Singh Committee
 - 4. Swaran Singh Committee

Question ID : 630680408293
Option 1 ID : 6306801592067
Option 2 ID : 6306801592070
Option 3 ID : 6306801592069
Option 4 ID : 6306801592068
Status : Answered
Chosen Option : 4

Q.48 Which of the following dance forms is represented by Kelucharan Mohapatra?

- Ans
- 1. Bharatnatyam
 - 2. Manipuri
 - 3. Odissi
 - 4. Kathak

Question ID : 630680216135
Option 1 ID : 630680838516
Option 2 ID : 630680838518
Option 3 ID : 630680838517
Option 4 ID : 630680838515
Status : Answered
Chosen Option : 3

Q.49 _____ wins the Best Male Playback Singer at the 67th National Film Awards.

- Ans
- 1. B Praak
 - 2. Sonu Nigam
 - 3. Shaan
 - 4. Arijit Singh

Question ID : 630680409225
Option 1 ID : 6306801595730
Option 2 ID : 6306801595732
Option 3 ID : 6306801595731
Option 4 ID : 6306801595729
Status : Answered
Chosen Option : 3

Q.50 Who among the following is the author of the book 'Those Pricey Thakur Girls'?

- Ans
- 1. Anuja Chauhan
 - 2. Anita Nair
 - 3. Pratibha Ray
 - 4. Preeti Shenoy

Question ID : 630680409372
Option 1 ID : 6306801596319
Option 2 ID : 6306801596318
Option 3 ID : 6306801596320
Option 4 ID : 6306801596317
Status : Not Answered
Chosen Option : --

Q.1 Simplify the following.
 $72 \div 8 \times 4 + 40 - 35 \div 5 + 15$

- Ans 1. 24
 2. 84
 3. 9
 4. 48

Question ID : 630680869676
Option 1 ID : 6306803406071
Option 2 ID : 6306803406073
Option 3 ID : 6306803406070
Option 4 ID : 6306803406072
Status : Answered
Chosen Option : 2

Q.2 Solve the following:

$$(\tan\theta + \sec\theta + 1)(\cot\theta - \operatorname{cosec}\theta + 1) = ?$$

- Ans 1. 0
 2. 2
 3. -1
 4. 1

Question ID : 630680195561
Option 1 ID : 630680758715
Option 2 ID : 630680758713
Option 3 ID : 630680758716
Option 4 ID : 630680758714
Status : Answered
Chosen Option : 2

Q.3 The value of $(\operatorname{cosec}\theta - \sin\theta)(\sec\theta - \cos\theta)(\tan\theta + \cot\theta)$ is:

- Ans 1. 1
 2. $\sec\theta \operatorname{cosec}\theta$
 3. 3
 4. -3

Question ID : 630680869584
Option 1 ID : 6306803405720
Option 2 ID : 6306803405721
Option 3 ID : 6306803405718
Option 4 ID : 6306803405719
Status : Answered
Chosen Option : 1



Q.4 The breadth of a room is twice its height and half its length. The volume of the room is 1728 m^3 . The length of the room is:

- Ans
- 1. 28 m
 - 2. 20 m
 - 3. 34 m
 - 4. 24 m

Question ID : 630680421608
Option 1 ID : 6306801644898
Option 2 ID : 6306801644895
Option 3 ID : 6306801644896
Option 4 ID : 6306801644897
Status : Answered
Chosen Option : 4

Q.5 In triangle ABC, $AB = AC$ and $\angle A = 70^\circ$. Find the value of $\angle C$.

- Ans
- 1. 75°
 - 2. 65°
 - 3. 45°
 - 4. 55°

Question ID : 630680421456
Option 1 ID : 6306801644290
Option 2 ID : 6306801644289
Option 3 ID : 6306801644287
Option 4 ID : 6306801644288
Status : Answered
Chosen Option : 4

Q.6 Two successive price increases of 25% and 25% of an article are equivalent to a single price increase of:

- Ans
- 1. 52.25%
 - 2. 50.25%
 - 3. 48.50%
 - 4. 56.25%

Question ID : 630680429149
Option 1 ID : 6306801674643
Option 2 ID : 6306801674640
Option 3 ID : 6306801674641
Option 4 ID : 6306801674642
Status : Answered
Chosen Option : 4



Q.7 Find the curved surface area (in cm^2) of a cone of radius 3 cm and height 4 cm.

- Ans
- 1. 12π
 - 2. 14π
 - 3. 15π
 - 4. 7π

Question ID : 630680421629
 Option 1 ID : 6306801644981
 Option 2 ID : 6306801644979
 Option 3 ID : 6306801644982
 Option 4 ID : 6306801644980
 Status : Answered
 Chosen Option : 3

Q.8 A part of ₹48,500 is invested at a simple interest of 15% per annum. The rest of the money is invested at the rate of 10% simple interest per annum after 2 years of the first investment. The ratio of interest after 5 years from the time when the first amount was invested is 5 : 3. How much is the second part that was invested (in ₹) at the rate of 10% simple interest?

- Ans
- 1. 29,100
 - 2. 20,940
 - 3. 19,400
 - 4. 24,900

Question ID : 630680428010
 Option 1 ID : 6306801670085
 Option 2 ID : 6306801670087
 Option 3 ID : 6306801670084
 Option 4 ID : 6306801670086
 Status : Answered
 Chosen Option : 4

Q.9 The value of $\left(2\frac{1}{2} + 1\frac{3}{4} - \frac{1}{6}\right) \times 16 \div 49$ is:

- Ans
- 1. $\frac{4}{7}$
 - 2. $\frac{3}{9}$
 - 3. $1\frac{1}{3}$
 - 4. $2\frac{3}{4}$

Question ID : 630680428084
 Option 1 ID : 6306801670381
 Option 2 ID : 6306801670380
 Option 3 ID : 6306801670382
 Option 4 ID : 6306801670383
 Status : Answered
 Chosen Option : 3



Q.10 Sita takes a loan of Rs.35,000 at an interest rate of 10% compound interest, compounded annually. She agrees to pay two equal instalments in 2 years, one instalment at the end of each year. Find the value of each instalment.(Round off to the nearest integer)

- Ans 1. ₹10,167
 2. ₹30,167
 3. ₹20,167
 4. ₹40,167

Question ID : 630680107411
 Option 1 ID : 630680417011
 Option 2 ID : 630680417009
 Option 3 ID : 630680417010
 Option 4 ID : 630680417008
 Status : Answered
 Chosen Option : 3

Q.11 The following table shows the marks of a student in 5 tests in the subjects Maths, Physics, and Chemistry (out of 100 for each subject). Study the table and answer the question that follows.

Tests	Maths	Physics	Chemistry
1	80	69	91
2	94	79	85
3	88	81	95
4	92	76	90
5	96	90	84

The ratio of the average marks obtained by the student in test 2 to the average marks he got in Maths in all tests, is:

- Ans 1. 21:25
 2. 4:7
 3. 4:3
 4. 43:45

Question ID : 630680392971
 Option 1 ID : 6306801532218
 Option 2 ID : 6306801532220
 Option 3 ID : 6306801532219
 Option 4 ID : 6306801532221
 Status : Answered
 Chosen Option : 4



Q.12 Simplify the given expression.

$$\frac{\left(2\frac{1}{7} + 6\frac{1}{7}\right) \div \frac{9}{7}}{1\frac{1}{9} \div \left\{\frac{7}{9} + \left(\frac{4}{9} \div \frac{4}{3}\right)\right\}}$$

Ans

✗ 1. $\frac{56}{9}$

✗ 2. $\frac{55}{9}$

✓ 3. $\frac{58}{9}$

✗ 4. $\frac{53}{9}$

Question ID : 630680427976
 Option 1 ID : 6306801669949
 Option 2 ID : 6306801669950
 Option 3 ID : 6306801669948
 Option 4 ID : 6306801669951
 Status : Answered
 Chosen Option : 3

Q.13 The following table shows the yearly production of bags (in thousands) by different companies.

Company	2012	2013	2014	2015
A	29	37	38	42
B	30	38	40	39
C	35	30	45	43
D	37	35	42	45

The total production of company A over the given years is what percentage of the total production of company D over the given years?

Ans ✓ 1. 91.82%

✗ 2. 98.21%

✗ 3. 82.91%

✗ 4. 89.21%

Question ID : 630680428288
 Option 1 ID : 6306801671198
 Option 2 ID : 6306801671197
 Option 3 ID : 6306801671196
 Option 4 ID : 6306801671199
 Status : Answered
 Chosen Option : 1



Q.14 In a school, the total number of boys is 20% more than the total number of girls. What is the ratio of the number of boys to that of girls in the school?

- Ans 1. 6 : 5
 2. 4 : 5
 3. 5 : 3
 4. 5 : 6

Question ID : 630680428968
Option 1 ID : 6306801673918
Option 2 ID : 6306801673917
Option 3 ID : 6306801673916
Option 4 ID : 6306801673919
Status : Answered
Chosen Option : 1

Q.15 If one angle of triangle PQR is greater than the sum of the other two, the triangle PQR will be:

- Ans 1. equilateral
 2. acute angle
 3. obtuse angle
 4. right angle

Question ID : 630680421467
Option 1 ID : 6306801644331
Option 2 ID : 6306801644332
Option 3 ID : 6306801644333
Option 4 ID : 6306801644334
Status : Answered
Chosen Option : 3

Q.16 If two kinds of rice which cost ₹25 a kg and ₹40 a kg are mixed in the ratio of 3 : 2, then find the cost of the mixture per kg.

- Ans 1. ₹31
 2. ₹30
 3. ₹32
 4. ₹33

Question ID : 630680869685
Option 1 ID : 6306803406107
Option 2 ID : 6306803406106
Option 3 ID : 6306803406108
Option 4 ID : 6306803406109
Status : Answered
Chosen Option : 1



Q.17 In the following table, the achievement of 10 boys and 10 girls in Math has been given. Study the table and select the correct statement.

Boys	Girls
56	35
75	88
34	95
49	99
89	67
99	82
94	97
59	63
82	79
79	81

- Ans**
- 1. The average achievement of the boys and girls is same.
 - 2. The given data is insufficient to draw any meaningful conclusion.
 - 3. The average achievement of the girls is more than that of the boys.
 - 4. The average achievement of the boys is more than that of the girls.

Question ID : 630680429203
 Option 1 ID : 6306801674856
 Option 2 ID : 6306801674859
 Option 3 ID : 6306801674858
 Option 4 ID : 6306801674857
 Status : Answered
 Chosen Option : 1

Q.18 A shopkeeper wanted to sell ₹2,000 worth of products. But he had two options, giving three successive discounts of 10% each or giving a single discount of 28%. What was the difference between the two options of discounts (in rupees)?

- Ans**
- 1. 16
 - 2. 28
 - 3. 18
 - 4. 22

Question ID : 630680428640
 Option 1 ID : 6306801672606
 Option 2 ID : 6306801672604
 Option 3 ID : 6306801672605
 Option 4 ID : 6306801672607
 Status : Answered
 Chosen Option : 3

Q.19 Amita can build a room in the same amount of time that Bina and Sita working together can build. If Amita and Bina together could do it in 25 days and Sita alone in 35 days, then how many days are required for Bina alone to do the same work?

- Ans**
- 1. 180 Days
 - 2. 165 Days
 - 3. 152 Days
 - 4. 175 Days

Question ID : 630680869699
 Option 1 ID : 6306803406165
 Option 2 ID : 6306803406162
 Option 3 ID : 6306803406163
 Option 4 ID : 6306803406164
 Status : Answered
 Chosen Option : 4

Q.20 The cost price of two articles is equal. One article is sold at a profit of 12% and the other article for ₹3,600 more than the first. If the net profit is $15\frac{27}{51}\%$, then what is the cost price of each article?

- Ans
- 1. ₹50,990
 - 2. ₹50,000
 - 3. ₹51,000
 - 4. ₹52,150

Question ID : 630680215283
 Option 1 ID : 630680835131
 Option 2 ID : 630680835134
 Option 3 ID : 630680835133
 Option 4 ID : 630680835132
 Status : Answered
 Chosen Option : 2

Q.21 Simplify:

$$\left[\left(7\frac{1}{4}\right)^2 - \left(5\frac{4}{5}\right)^2 \right] \div 5\frac{4}{5} \times \frac{16}{9}$$

- Ans
- 1. 9.3
 - 2. 7.4
 - 3. 5.8
 - 4. 3.1

Question ID : 630680427988
 Option 1 ID : 6306801669996
 Option 2 ID : 6306801669997
 Option 3 ID : 6306801669998
 Option 4 ID : 6306801669999
 Status : Answered
 Chosen Option : 3

Q.22 $\tan^4 A + \tan^2 A$ is equal to:

- Ans
- 1. $\sec^4 A - \sec^2 A$
 - 2. $\sec^2 A - \sec^4 A$
 - 3. $\sec^4 A + \sec^2 A$
 - 4. $-(\sec^2 A + \sec^4 A)$

Question ID : 630680869595
 Option 1 ID : 6306803405762
 Option 2 ID : 6306803405764
 Option 3 ID : 6306803405763
 Option 4 ID : 6306803405765
 Status : Answered
 Chosen Option : 1



Q.23 A boat can travel 16.9 km downstream in 52 min. If the speed of the current is 3 km/h, then how much time (in hours) will the boat take to travel 84 km upstream?

- Ans 1. 6.22
 2. 6
 3. 13.5
 4. 7.5

Question ID : 630680428846
Option 1 ID : 6306801673430
Option 2 ID : 6306801673428
Option 3 ID : 6306801673431
Option 4 ID : 6306801673429
Status : Answered
Chosen Option : 1

Q.24 In a 100-km journey, the average speed of S is 40 km/h. He covers the first 60 km in 40 minutes and the next 20 km in 50 minutes. What is his speed in the last 20 km (in km/h)?

- Ans 1. 30
 2. 40
 3. 25
 4. 20

Question ID : 630680428718
Option 1 ID : 6306801672918
Option 2 ID : 6306801672919
Option 3 ID : 6306801672917
Option 4 ID : 6306801672916
Status : Answered
Chosen Option : 4

Q.25 If $m \times 7 + 4 - 6 \div 3 - 7 + 45 \div 5 \times 4 + 49 = 87$, then the value of m is:

- Ans 1. 0
 2. 14
 3. 1
 4. 7

Question ID : 630680428263
Option 1 ID : 6306801671096
Option 2 ID : 6306801671099
Option 3 ID : 6306801671097
Option 4 ID : 6306801671098
Status : Answered
Chosen Option : 3



Q.26 The following table shows the marks obtained out of 100, by four students in four different subjects.

Students	Hindi	Maths	Science	Social
Arnav	83	87	90	92
Ronak	75	89	79	82
Shivam	88	95	90	87
Sonu	92	85	90	88

The total marks scored by Ronak in all the subjects is what percentage of the total marks scored by Shivam, Sonu, Arnav together in all the subjects?

- Ans
- 1. 44.46%
 - 2. 34.63%
 - 3. 40.63%
 - 4. 30.46%

Question ID : 630680428287
 Option 1 ID : 6306801671195
 Option 2 ID : 6306801671192
 Option 3 ID : 6306801671194
 Option 4 ID : 6306801671193
 Status : Answered
 Chosen Option : 2

Q.27 Akash and Vikash can complete a work in 40 days and 60 days, respectively. In how many days will the entire work be completed if they work on alternate days, starting with Akash?

- Ans
- 1. 52
 - 2. 50
 - 3. 48
 - 4. 42

Question ID : 630680428410
 Option 1 ID : 6306801671687
 Option 2 ID : 6306801671686
 Option 3 ID : 6306801671685
 Option 4 ID : 6306801671684
 Status : Answered
 Chosen Option : 3

Q.28 Find the value of the following expression.

$$2 \times 8 \div 4 - 5 \text{ of } 3 + 6 \div 3 \times 2 - 6 \text{ of } 3 + 5$$

- Ans
- 1. -20
 - 2. 20
 - 3. -15
 - 4. 15

Question ID : 630680428228
 Option 1 ID : 6306801670958
 Option 2 ID : 6306801670959
 Option 3 ID : 6306801670956
 Option 4 ID : 6306801670957
 Status : Answered
 Chosen Option : 1

Q.29 Determine the value of the product $(4a + 3b)(16a^2 - 12ab + 9b^2)$ for $a = 2$ and $b = 3$.

- Ans
- 1. 1141
 - 2. 1231
 - 3. 1241
 - 4. 1131

Question ID : 630680413558
Option 1 ID : 6306801613057
Option 2 ID : 6306801613059
Option 3 ID : 6306801613058
Option 4 ID : 6306801613056
Status : Answered
Chosen Option : 3

Q.30 A school has two rectangular playgrounds, which are similar in shape. If the length and the breadth of the first playground are given as 224 m and 160 m, respectively, then which of the following options CANNOT be the dimensions of the second playground?

- Ans
- 1. Length = 168 m; Breadth = 120 m
 - 2. Length = 343 m; Breadth = 255 m
 - 3. Length = 273 m; Breadth = 195 m
 - 4. Length = 210 m; Breadth = 150 m

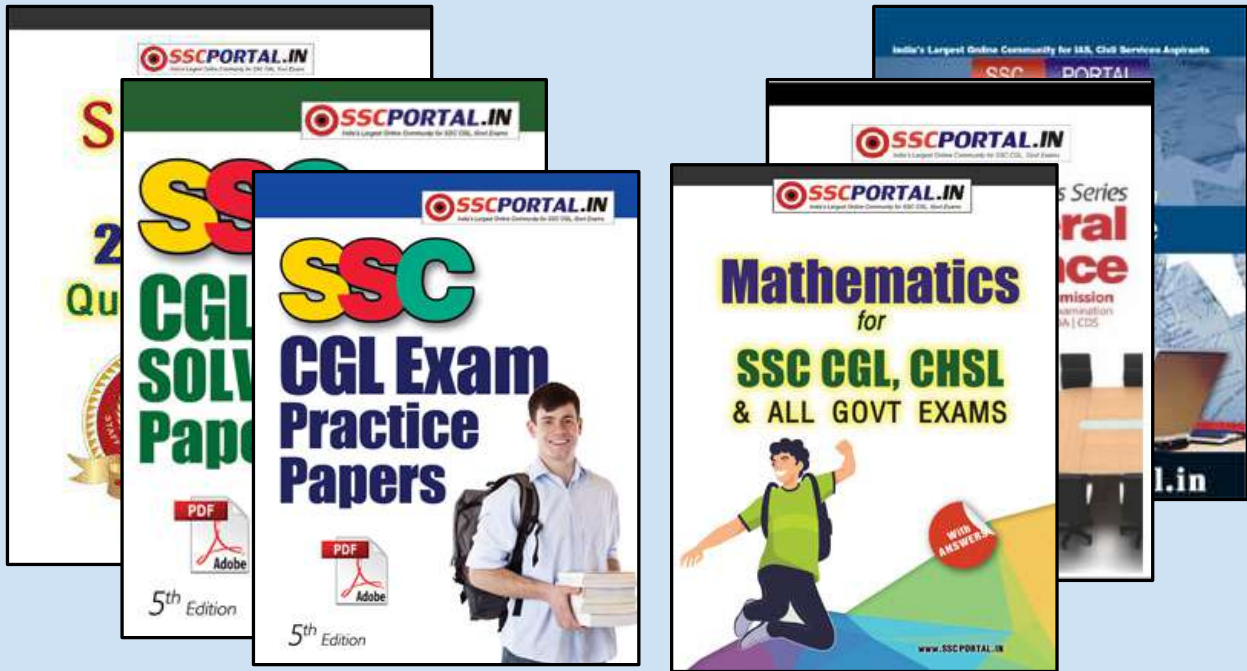
Question ID : 630680428447
Option 1 ID : 6306801671832
Option 2 ID : 6306801671833
Option 3 ID : 6306801671835
Option 4 ID : 6306801671834
Status : Answered
Chosen Option : 2

Q.31 42% of Ranita's weekly income is equal to 56% of Bhaskar's weekly income. If Bhaskar's weekly income was raised by ₹ 200, while Ranita's weekly income did not change, the ratio of the weekly incomes of Ranita and Bhaskar, respectively, would have been 5 : 4. What is Ranita's weekly income (in ₹)?

- Ans
- 1. 3000
 - 2. 4000
 - 3. 3600
 - 4. 4200

Question ID : 630680428913
Option 1 ID : 6306801673696
Option 2 ID : 6306801673698
Option 3 ID : 6306801673697
Option 4 ID : 6306801673699
Status : Answered
Chosen Option : 2





SSC CGL PAPERS EBOOK DOWNLOAD ALL

CLICK HERE

<<< CLICK BELOW LINK >>>

<https://sscportal.in/ebook/ssc-cgl>

<https://sscportal.in/ebook>

Q.32 A trader sells an article at 16% below its cost price. Had he sold it for ₹192.20 more, he would have gained 15%. The new selling price (in ₹) of the article is:

- Ans
- 1. 724
 - 2. 742
 - 3. 731
 - 4. 713

Question ID : 630680429087
 Option 1 ID : 6306801674393
 Option 2 ID : 6306801674395
 Option 3 ID : 6306801674392
 Option 4 ID : 6306801674394
 Status : Answered
 Chosen Option : 4

Q.33 Simplify the given expression.

$$4 \times 5 \div 4 \text{ of } 5 \times 4 \div (6 + 6 \times 6 \div 6 \text{ of } 6 - 6 \div 6 \times 6)$$

- Ans
- 1. 12
 - 2. 4
 - 3. 2
 - 4. 20

Question ID : 630680428054
 Option 1 ID : 6306801670261
 Option 2 ID : 6306801670262
 Option 3 ID : 6306801670263
 Option 4 ID : 6306801670260
 Status : Answered
 Chosen Option : 2

Q.34 If $\sin^4\theta + \cos^4\theta = 2\sin^2\theta\cos^2\theta$, $0^\circ < \theta < 90^\circ$, then find the value of $\cot\theta$.

- Ans
- 1. $\frac{1}{\sqrt{2}}$
 - 2. $\frac{1}{3}$
 - 3. 1
 - 4. $\frac{1}{2}$

Question ID : 630680398780
 Option 1 ID : 6306801555125
 Option 2 ID : 6306801555122
 Option 3 ID : 6306801555124
 Option 4 ID : 6306801555123
 Status : Answered
 Chosen Option : 3

Q.35 A woman working in a company was supplied a rectangular solid (cuboid shape) of wax with dimensions 70 cm , 44 cm and 20 cm to prepare cylindrical candles, each 14 cm in diameter and 20 cm of height. Find the number of candles.

- Ans 1. 20
 2. 15
 3. 10
 4. 30

Question ID : 63068076069
Option 1 ID : 630680294381
Option 2 ID : 630680294383
Option 3 ID : 630680294384
Option 4 ID : 630680294382
Status : Answered
Chosen Option : 1

Q.36 Two trains, 140 m and 120 m in length, are running in the same direction at the speed of 60 km/h and 78 km/h, respectively. In how much time will they completely cross each other?

- Ans 1. 58 seconds
 2. 65 seconds
 3. 48 seconds
 4. 52 seconds

Question ID : 630680869705
Option 1 ID : 6306803406187
Option 2 ID : 6306803406186
Option 3 ID : 6306803406189
Option 4 ID : 6306803406188
Status : Answered
Chosen Option : 4

Q.37 The difference between the two perpendicular sides of a right-angled triangle is 2 cm and its area is 24 cm². What is the perimeter (in cm) of the triangle?

- Ans 1. 18
 2. 16
 3. 14
 4. 24

Question ID : 630680421365
Option 1 ID : 6306801643925
Option 2 ID : 6306801643924
Option 3 ID : 6306801643926
Option 4 ID : 6306801643923
Status : Answered
Chosen Option : 4



Q.38 A 320 m long train completely crosses a 240 m long train, coming from the opposite direction, in y seconds. If the first train is travelling at the speed of 44 km/h and the second train is travelling at 56.8 km/h, then what is the value of y ?

- Ans
- 1. 18
 - 2. 22
 - 3. 21
 - 4. 20

Question ID : 630680428437
 Option 1 ID : 6306801671793
 Option 2 ID : 6306801671792
 Option 3 ID : 6306801671794
 Option 4 ID : 6306801671795
 Status : Answered
 Chosen Option : 4

Q.39 Study the given table and answer the question that follows.

Percentage of marks obtained by 5 students in different subjects

Subjects →	History	Maths	Economics	Hindi	English
Students↓	250	200	250	150	150
Vikas	60	80	90	60	95
Shyam	90	70	80	70	40
Sohan	70	90	95	80	75
Mohan	80	60	70	95	80
Mohit	90	50	85	85	80

The marks obtained by Sohan in maths are _____ than that obtained by Shyam in maths.

- Ans
- 1. 40 more
 - 2. 30 less
 - 3. 40 less
 - 4. 30 more

Question ID : 630680386149
 Option 1 ID : 6306801505309
 Option 2 ID : 6306801505307
 Option 3 ID : 6306801505306
 Option 4 ID : 6306801505308
 Status : Answered
 Chosen Option : 1

Q.40 Study the given table and answer the question that follows.
The table shows the number of students studying in 6 different classes of 6 different schools.

School	V	VI	VII	VIII	IX	X
P	152	160	145	156	147	144
Q	148	166	150	155	157	143
R	161	152	140	145	143	165
S	159	142	149	140	142	168
T	147	144	158	163	154	150
U	150	160	162	160	161	140
Total	917	924	904	919	904	910

The number of students studying in class VII from school U forms approximately what percentage of the total number of students from all the classes together from that school?

- Ans
- 1. 19%
 - 2. 15%
 - 3. 21%
 - 4. 17%

Question ID : 630680428324
 Option 1 ID : 6306801671342
 Option 2 ID : 6306801671340
 Option 3 ID : 6306801671343
 Option 4 ID : 6306801671341
 Status : Answered
 Chosen Option : 3

Q.41 Simplify the given expression.

$$\left(7.2 \times 4.1 \div 12.3 + 22.5 \text{ of } \frac{1}{25} - \frac{1}{10}\right)$$

- Ans
- 1. 4.9
 - 2. 9.6
 - 3. 7.4
 - 4. 3.2

Question ID : 630680428045
 Option 1 ID : 6306801670226
 Option 2 ID : 6306801670224
 Option 3 ID : 6306801670225
 Option 4 ID : 6306801670227
 Status : Answered
 Chosen Option : 4

Q.42 If $a + b + c = 15$ and $ab + bc + ca = 35$, then find the value of $a^3 + b^3 + c^3 - 3abc$.

- Ans
- 1. 1200
 - 2. 2100
 - 3. 1800
 - 4. 1500

Question ID : 630680413573
 Option 1 ID : 6306801613116
 Option 2 ID : 6306801613119
 Option 3 ID : 6306801613118
 Option 4 ID : 6306801613117
 Status : Answered
 Chosen Option : 3

Q.43 Simplify

$$\left(\frac{3}{4} + \frac{5}{4}\right) \times \left(\frac{9}{5} - \frac{4}{5}\right) \div \left(\frac{3}{2} + \frac{1}{2}\right).$$

- Ans 1. 1
 2. -1
 3. 2
 4. -2

Question ID : 630680428124
 Option 1 ID : 6306801670540
 Option 2 ID : 6306801670541
 Option 3 ID : 6306801670542
 Option 4 ID : 6306801670543
 Status : Answered
 Chosen Option : 1

Q.44 A shopkeeper offers a discount of 24 % on the marked price. On a special sale day, he offers an extra 30% off coupon after the first discount. If the article was sold for ₹ 7 comma 700.70 comma what is the marked price left parenthesis in ₹ right parenthesis of the article ?

- Ans 1. 17475
 2. 14745
 3. 14475
 4. 17745

Question ID : 630680869691
 Option 1 ID : 6306803406131
 Option 2 ID : 6306803406133
 Option 3 ID : 6306803406130
 Option 4 ID : 6306803406132
 Status : Not Answered
 Chosen Option : --

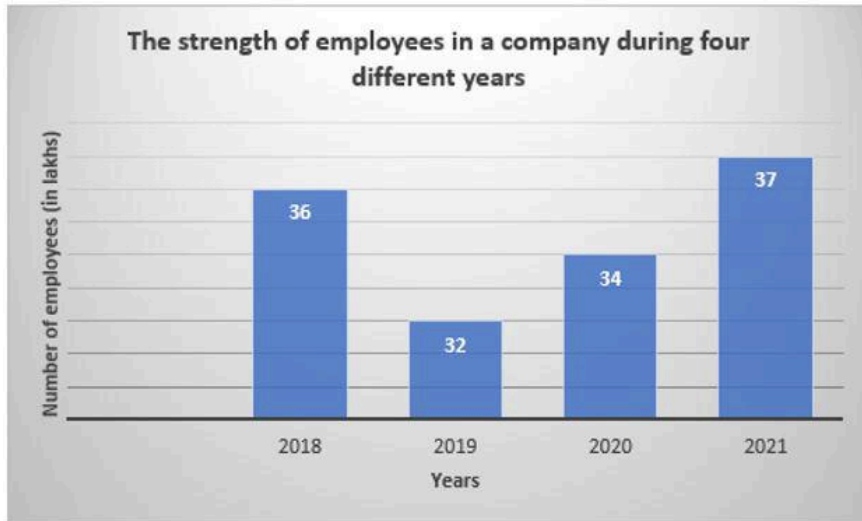
Q.45 The distance between the centres of the two circles, with radii 3 cm and 2 cm, respectively, is 13 cm. The length (in cm) of a transverse common tangent is:

- Ans 1. 18 cm
 2. 9 cm
 3. 16 cm
 4. 12 cm

Question ID : 630680421436
 Option 1 ID : 6306801644210
 Option 2 ID : 6306801644207
 Option 3 ID : 6306801644209
 Option 4 ID : 6306801644208
 Status : Answered
 Chosen Option : 4



Q.46 The given bar graph shows the strength of employees (in lakhs) of a company during four different years.



What was the percentage increase in employees in 2020 over 2019?

- Ans
- ✓ 1. $6\frac{1}{4}\%$
 - ✗ 2. $6\frac{3}{4}\%$
 - ✗ 3. $5\frac{1}{4}\%$
 - ✗ 4. $4\frac{3}{4}\%$

Question ID : 630680360372

Option 1 ID : 6306801403393

Option 2 ID : 6306801403394

Option 3 ID : 6306801403395

Option 4 ID : 6306801403396

Status : Answered

Chosen Option : 1

Q.47 What must be added to $(x^3 - 3x^2 + 4x - 75)$ to obtain a polynomial that is exactly divisible by $(x - 5)$?

- Ans
- ✗ 1. 4
 - ✗ 2. 6
 - ✗ 3. 2
 - ✓ 4. 5

Question ID : 630680413587

Option 1 ID : 6306801613172

Option 2 ID : 6306801613174

Option 3 ID : 6306801613175

Option 4 ID : 6306801613173

Status : Answered

Chosen Option : 4



Q.48 A is 25% more than B and B is 30% less than C. If C is 20% more than D, then by what percentage is A more than D?

- Ans 1. 5%
 2. 3%
 3. 6%
 4. 2%

Question ID : 630680428142
Option 1 ID : 6306801670614
Option 2 ID : 6306801670612
Option 3 ID : 6306801670615
Option 4 ID : 6306801670613
Status : Answered
Chosen Option : 1

Q.49 The height and radius of a cone-shaped storage tank are 9 ft. and 7 ft., respectively. Find the volume of water the tank can hold? (Use $\pi = \frac{22}{7}$)

- Ans 1. 1423 cubic ft.
 2. 462 cubic ft.
 3. 1386 cubic ft.
 4. 527 cubic ft.

Question ID : 630680421562
Option 1 ID : 6306801644713
Option 2 ID : 6306801644712
Option 3 ID : 6306801644711
Option 4 ID : 6306801644714
Status : Answered
Chosen Option : 2

Q.50 A cone of slant height 4.2 units has a lateral surface area 13.2 units². The radius of the base is:

- Ans 1. 2 units
 2. 1.5 units
 3. 2.5 units
 4. 1 unit

Question ID : 630680421558
Option 1 ID : 6306801644697
Option 2 ID : 6306801644696
Option 3 ID : 6306801644698
Option 4 ID : 6306801644695
Status : Answered
Chosen Option : 4

Section : English Comprehension



Download SSC CGL, CHSL E-BOOKS

[CLICK HERE](#)

Q.1 The following sentence has been divided into parts. One of them may contain an error. Select the part that contains the error from the given options. If you don't find any error, mark 'No error' as your answer.
When Ramu was working / as a clerk, / he asked me money.

- Ans
- 1. When Ramu was working
 - 2. as a clerk
 - 3. No error
 - 4. he asked me money

Question ID : 630680145313
Option 1 ID : 630680562226
Option 2 ID : 630680562228
Option 3 ID : 630680562229
Option 4 ID : 630680562227
Status : Answered
Chosen Option : 4

Q.2 Select the option that can be used as a one-word substitute for the given group of words.
During vacations, Geeta saw a saltwater lake separated from the sea by rocks and sand where she did kayak for the first time.

- Ans
- 1. lagoon
 - 2. river
 - 3. ditch
 - 4. sea

Question ID : 630680414728
Option 1 ID : 6306801617655
Option 2 ID : 6306801617656
Option 3 ID : 6306801617658
Option 4 ID : 6306801617657
Status : Answered
Chosen Option : 3

Q.3 Select the INCORRECTLY spelt word.

- Ans
- 1. Rhinoceros
 - 2. Bueraucracy
 - 3. Acquaintance
 - 4. Miscellaneous

Question ID : 630680409888
Option 1 ID : 6306801598382
Option 2 ID : 6306801598383
Option 3 ID : 6306801598381
Option 4 ID : 6306801598384
Status : Answered
Chosen Option : 1



Q.4 Select the most appropriate article to fill in the blank (ø-no article).
_____ SDO is the head of the sub-division of ___ government organisation.

- Ans
- 1. a; a
 - 2. ø; a
 - 3. an; ø
 - 4. an; a

Question ID : 630680415352
Option 1 ID : 6306801620158
Option 2 ID : 6306801620156
Option 3 ID : 6306801620155
Option 4 ID : 6306801620157
Status : Answered
Chosen Option : 2

Q.5 Select the option that is similar in meaning to the underlined word in the following sentence.

Looking after small children is a real conundrum for working parents.

- Ans
- 1. peace
 - 2. plan
 - 3. problem
 - 4. pacification

Question ID : 630680213114
Option 1 ID : 630680826506
Option 2 ID : 630680826504
Option 3 ID : 630680826505
Option 4 ID : 630680826503
Status : Answered
Chosen Option : 3

Q.6 Select the INCORRECTLY spelt word.

- Ans
- 1. Notation
 - 2. Witharing
 - 3. Gallantry
 - 4. Vagabond

Question ID : 630680409899
Option 1 ID : 6306801598425
Option 2 ID : 6306801598428
Option 3 ID : 6306801598427
Option 4 ID : 6306801598426
Status : Answered
Chosen Option : 2



Q.7 The following sentence has been divided into parts. One of them contains an error.
Select the part that contains the error from the given options.
Mrs. Rani / works for / a international / school.

- Ans
- 1. works for
 - 2. school
 - 3. a international
 - 4. Mrs. Rani

Question ID : 630680184894
Option 1 ID : 630680716538
Option 2 ID : 630680716540
Option 3 ID : 630680716539
Option 4 ID : 630680716537
Status : Answered
Chosen Option : 3

Q.8 Select the most appropriate option that can substitute the highlighted words in the given sentence.

His interpretation of the facts was impressive.

- Ans
- 1. understands of realities
 - 2. understand of realities
 - 3. understood of realities
 - 4. understanding of realities

Question ID : 630680701382
Option 1 ID : 6306802747464
Option 2 ID : 6306802747461
Option 3 ID : 6306802747463
Option 4 ID : 6306802747462
Status : Answered
Chosen Option : 4

Q.9 Select the most appropriate meaning of the given idiom.
Nip in the bud

- Ans
- 1. To publicise a long-kept secret
 - 2. To stop something from growing beyond limit
 - 3. To complete a prolonged or unfinished work
 - 4. To suppress something at an early stage

Question ID : 630680206943
Option 1 ID : 630680802374
Option 2 ID : 630680802371
Option 3 ID : 630680802373
Option 4 ID : 630680802372
Status : Answered
Chosen Option : 4



Q.10 Select the sentence that has a grammatical error.

- Ans 1. I will be drive into town later on.
 2. I will be driving into town later on.
 3. I might drive into town later on.
 4. I could be driving into town later on.

Question ID : 630680181922
Option 1 ID : 630680704924
Option 2 ID : 630680704922
Option 3 ID : 630680704925
Option 4 ID : 630680704923
Status : Answered
Chosen Option : 2

Q.11 Select the option that can be used as a one-word substitute for the given group of words.

A soldier who fights for the sake of money

- Ans 1. Marine
 2. Veteran
 3. Mercenary
 4. Admiral

Question ID : 630680176598
Option 1 ID : 630680684614
Option 2 ID : 630680684615
Option 3 ID : 630680684612
Option 4 ID : 630680684613
Status : Answered
Chosen Option : 3

Q.12 Select the option that correctly rectifies the spelling error in the given sentence.
The movie is just beggining.

- Ans 1. Biginning
 2. Beginning
 3. Beginnig
 4. Begining

Question ID : 630680701371
Option 1 ID : 6306802747420
Option 2 ID : 6306802747418
Option 3 ID : 6306802747419
Option 4 ID : 6306802747417
Status : Answered
Chosen Option : 2



Q.13 Select the most appropriate synonym of the given word.
Habitual

- Ans 1. Considerate
 2. Continuous
 3. Diverse
 4. Pertinent

Question ID : 630680204300
Option 1 ID : 630680792285
Option 2 ID : 630680792283
Option 3 ID : 630680792286
Option 4 ID : 630680792284
Status : Answered
Chosen Option : 2

Q.14 Select the option that can be used as a one-word substitute for the underlined group of words.
The liberal leadership simply joined the ranks of the existing government by the few.

- Ans 1. Plutocracy
 2. Democracy
 3. Autocracy
 4. Oligarchy

Question ID : 630680414690
Option 1 ID : 6306801617505
Option 2 ID : 6306801617503
Option 3 ID : 6306801617506
Option 4 ID : 6306801617504
Status : Answered
Chosen Option : 4

Q.15 Select the most appropriate ANTONYM of the underlined word in the given sentence.
Recession fettered the company from any further investments.

- Ans 1. Concealed
 2. Valuable
 3. Depended
 4. Liberated

Question ID : 630680295944
Option 1 ID : 6306801151490
Option 2 ID : 6306801151488
Option 3 ID : 6306801151491
Option 4 ID : 6306801151489
Status : Answered
Chosen Option : 4



Q.16 Select the most appropriate option that can substitute the underlined segment in the given sentence. If there is no need to substitute it, select 'No substitution'.
If his father will give money, he will buy a sports bike.

- Ans
- 1. No substitution
 - 2. If his father give money
 - 3. If his father gave money
 - 4. If his father gives money

Question ID : 630680414535
Option 1 ID : 6306801616902
Option 2 ID : 6306801616901
Option 3 ID : 6306801616899
Option 4 ID : 6306801616900
Status : Answered
Chosen Option : 4

Q.17 Select the most appropriate synonym of the given word.
Insipid

- Ans
- 1. Dismal
 - 2. Tasteless
 - 3. Obscure
 - 4. Idle

Question ID : 630680383228
Option 1 ID : 6306801493819
Option 2 ID : 6306801493822
Option 3 ID : 6306801493821
Option 4 ID : 6306801493820
Status : Answered
Chosen Option : 2

Q.18 Identify the proper explanation of the error in the given sentence.

Mohan insisted to go there.

- Ans
- 1. Error is with the tense. The correct sentence should read like this: Mohan insisting to go there.
 - 2. Error is in the sentence formation. Preposition and gerund are required. The correct sentence should read like this: Mohan insisted on going there.
 - 3. Error is with the verb. The correct sentence should read like this: Mohan insist to going there.
 - 4. Error is with the preposition. The correct sentence should read like this: Mohan insisted go there.

Question ID : 630680409892
Option 1 ID : 6306801598399
Option 2 ID : 6306801598397
Option 3 ID : 6306801598400
Option 4 ID : 6306801598398
Status : Answered
Chosen Option : 2



Q.19 Select the most appropriate meaning of the given idiom.

Spill the beans

- Ans 1. Reveal a secret
 2. Accomplish a lot
 3. Cornered by someone
 4. Tremble at possibilities

Question ID : 630680517286
Option 1 ID : 6306802021540
Option 2 ID : 6306802021541
Option 3 ID : 6306802021543
Option 4 ID : 6306802021542
Status : Answered
Chosen Option : 1

Q.20 The following sentence has been split into four segments. Identify the segment that contains a grammatical error.
Most of the committee / are here to / decide the fate of / this ancient building.

- Ans 1. are here to
 2. Most of the committee
 3. decide the fate of
 4. this ancient building.

Question ID : 630680295882
Option 1 ID : 6306801151241
Option 2 ID : 6306801151240
Option 3 ID : 6306801151242
Option 4 ID : 6306801151243
Status : Answered
Chosen Option : 1

Q.21 Select the most appropriate synonym of the given word.
Indigent

- Ans 1. Bust
 2. Low
 3. Impoverished
 4. Affluent

Question ID : 630680377986
Option 1 ID : 6306801473003
Option 2 ID : 6306801473005
Option 3 ID : 6306801473004
Option 4 ID : 6306801473006
Status : Answered
Chosen Option : 3



Q.22 Select the option that can be used as a one-word substitute for the given group of words.

A person who is filled with excessive enthusiasm

- Ans
- 1. Horticulturist
 - 2. Introvert
 - 3. Narcissist
 - 4. Extrovert

Question ID : 630680414801
Option 1 ID : 6306801617950
Option 2 ID : 6306801617948
Option 3 ID : 6306801617949
Option 4 ID : 6306801617947
Status : Answered
Chosen Option : 4

Q.23 Select the option that rectifies the spelling error in the given sentence.
They brought their dog to the park for a walk.

- Ans
- 1. brought
 - 2. brahgt
 - 3. bruaght
 - 4. braoght

Question ID : 630680517474
Option 1 ID : 6306802022294
Option 2 ID : 6306802022293
Option 3 ID : 6306802022295
Option 4 ID : 6306802022292
Status : Answered
Chosen Option : 1

Q.24 Select the most appropriate ANTONYM of the underlined word.
Her behaviour was consistent even in challenging situations.

- Ans
- 1. Appreciative
 - 2. Standard
 - 3. Enthusiastic
 - 4. Unpredictable

Question ID : 630680401252
Option 1 ID : 6306801564831
Option 2 ID : 6306801564832
Option 3 ID : 6306801564829
Option 4 ID : 6306801564830
Status : Answered
Chosen Option : 4



Q.25 Select the most appropriate idiom to fill in the blank.
She now has more than a year as minister_____.

- Ans
- 1. under her belt
 - 2. on her thin ice
 - 3. in the fast lane
 - 4. down for the count

Question ID : 630680517370
Option 1 ID : 6306802021879
Option 2 ID : 6306802021876
Option 3 ID : 6306802021877
Option 4 ID : 6306802021878
Status : Answered
Chosen Option : 4

Q.26 Select the most appropriate meaning of the given idiom.

From cradle to grave

- Ans
- 1. Buying something very cheap or very expensive
 - 2. During the whole span of one's life
 - 3. Giving directions and telling someone to follow
 - 4. To achieve something you needed

Question ID : 630680517590
Option 1 ID : 6306802022759
Option 2 ID : 6306802022757
Option 3 ID : 6306802022758
Option 4 ID : 6306802022756
Status : Answered
Chosen Option : 2

Q.27 Select the most appropriate option that can substitute the underlined segment in the given sentence.

He wanted to visiting the Golden Temple in Amritsar.

- Ans
- 1. wanted to be visit
 - 2. wanted to visited
 - 3. wanted to visitor
 - 4. wanted to visit

Question ID : 630680414584
Option 1 ID : 6306801617090
Option 2 ID : 6306801617089
Option 3 ID : 6306801617087
Option 4 ID : 6306801617088
Status : Answered
Chosen Option : 4



Q.28 Select the option that can be used as a one-word substitute for the underlined words.
I do not like him because he always disapproves the things or opinions of others.

- Ans
- 1. is insensitive of others feelings
 - 2. is a hate monger
 - 3. is critical of others
 - 4. is jealous of other people

Question ID : 630680414579
Option 1 ID : 6306801617068
Option 2 ID : 6306801617070
Option 3 ID : 6306801617069
Option 4 ID : 6306801617067
Status : Answered
Chosen Option : 3

Q.29 Select the most appropriate option that can substitute the underlined segment in the given idiom.

A piece of biscuit

- Ans
- 1. pastry
 - 2. cake
 - 3. tart
 - 4. Toast

Question ID : 630680517314
Option 1 ID : 6306802021653
Option 2 ID : 6306802021652
Option 3 ID : 6306802021654
Option 4 ID : 6306802021655
Status : Answered
Chosen Option : 2

Q.30 Select the most appropriate meaning of the given idiom.

See eye to eye

- Ans
- 1. To agree with someone
 - 2. To ignore someone
 - 3. To get upset with something
 - 4. To do something pointless

Question ID : 630680517409
Option 1 ID : 6306802022032
Option 2 ID : 6306802022033
Option 3 ID : 6306802022034
Option 4 ID : 6306802022035
Status : Answered
Chosen Option : 1



Q.31 Select the most appropriate option that can substitute the underlined segment in the given sentence.

What exactly have the teachers being doing wrong?

- Ans
- 1. teachers been doing
 - 2. teachers being done
 - 3. teachers are doing
 - 4. teachers have been doing

Question ID : 630680414923
Option 1 ID : 6306801618435
Option 2 ID : 6306801618437
Option 3 ID : 6306801618438
Option 4 ID : 6306801618436
Status : Answered
Chosen Option : 1

Q.32 Select the most appropriate meaning of the given idiom.

Chip on the shoulder

- Ans
- 1. Happy
 - 2. Offended
 - 3. Emotional
 - 4. Elated

Question ID : 630680310087
Option 1 ID : 6306801206489
Option 2 ID : 6306801206490
Option 3 ID : 6306801206492
Option 4 ID : 6306801206491
Status : Answered
Chosen Option : 2

Q.33 Select the most appropriate ANTONYM of the underlined word.

The reports of the medical tests done are now accessible on phone.

- Ans
- 1. Useless
 - 2. Free
 - 3. Restricted
 - 4. Invisible

Question ID : 630680517244
Option 1 ID : 6306802021372
Option 2 ID : 6306802021375
Option 3 ID : 6306802021373
Option 4 ID : 6306802021374
Status : Answered
Chosen Option : 3



Q.34 The meaning of which of the following options is 'Good luck'?

- Ans
- 1. Second banana
 - 2. All wet
 - 3. Hang in there
 - 4. Break a leg

Question ID : 630680517482
Option 1 ID : 6306802022326
Option 2 ID : 6306802022325
Option 3 ID : 6306802022324
Option 4 ID : 6306802022327
Status : Answered
Chosen Option : 4

Q.35 Select the most appropriate synonym of the given word.
Unhappiness

- Ans
- 1. Woe
 - 2. Wilful
 - 3. Willing
 - 4. Wicked

Question ID : 630680295217
Option 1 ID : 6306801148593
Option 2 ID : 6306801148594
Option 3 ID : 6306801148595
Option 4 ID : 6306801148592
Status : Answered
Chosen Option : 1

Q.36 In the following question a statement has been given with highlighted text. You are required to replace the text with correct phrase given in the options.

His intriguing mastery of the English language allowed him to write eloquently.

- Ans
- 1. wellness known skill
 - 2. least known talent
 - 3. captivating expertise
 - 4. master

Question ID : 630680701376
Option 1 ID : 6306802747438
Option 2 ID : 6306802747439
Option 3 ID : 6306802747440
Option 4 ID : 6306802747437
Status : Answered
Chosen Option : 3



Q.37 Select the most appropriate option that can substitute the underlined segment in the given sentence.

Had I known that you were planning to visit me, I should have done all the necessary arrangements.

Ans 1. I would have made

2. I should have made

3. I would have do

4. I must have made

Question ID : 630680414516

Option 1 ID : 6306801616826

Option 2 ID : 6306801616823

Option 3 ID : 6306801616825

Option 4 ID : 6306801616824

Status : Answered

Chosen Option : 1

Q.38 Select the INCORRECTLY spelt word.

Ans 1. Ambiguous

2. Luminous

3. Gregarious

4. Nostalgia

Question ID : 630680410010

Option 1 ID : 6306801598870

Option 2 ID : 6306801598869

Option 3 ID : 6306801598872

Option 4 ID : 6306801598871

Status : Answered

Chosen Option : 1

Q.39 Select the most appropriate meaning of the underlined segment in the given sentence.

I sent the agreement over for them to sign so the ball is now in their court.

Ans 1. An approach that uses traditional ideas that have previously worked

2. Better to be satisfied with what you have than risk losing it by trying to get something better

3. A time when after which programmes for older audiences may be aired on TV

4. It is time for someone to deal with a problem or make a decision, because other people have already done as much as they can

Question ID : 630680192454

Option 1 ID : 630680746406

Option 2 ID : 630680746408

Option 3 ID : 630680746405

Option 4 ID : 630680746407

Status : Answered

Chosen Option : 4



Q.40 Select the most appropriate ANTONYM of the given word.
Cowardice

- Ans 1. Boldness
 2. Abundance
 3. Hazard
 4. Vigour

Question ID : 630680517311

Option 1 ID : 6306802021641

Option 2 ID : 6306802021640

Option 3 ID : 6306802021643

Option 4 ID : 6306802021642

Status : Answered

Chosen Option : 1

Comprehension:

In the following passage, some words have been deleted. Read the passage carefully and select the most appropriate option to fill in each blank.

It was an unusual dark night. In the (1)_____ of an enjoyable dream, Jim thought he heard his dog (2)_____ loudly. He groaned and glanced (3)_____ his clock sleepily. Twelve o'clock the green fluorescent (4)_____ of his clock read. Suddenly, Jim (5)_____ hushed voices outside his house. He immediately became alert and jumped out of bed. As his parents had gone on a holiday, Jim was alone at home. He decided to look who was outside.

SubQuestion No : 41

Q.41 Select the correct option to fill blank 1.

- Ans 1. middle
 2. side
 3. between
 4. end

Question ID : 630680515000

Option 1 ID : 6306802012571

Option 2 ID : 6306802012572

Option 3 ID : 6306802012570

Option 4 ID : 6306802012569

Status : Answered

Chosen Option : 1



Comprehension:

In the following passage, some words have been deleted. Read the passage carefully and select the most appropriate option to fill in each blank.

It was an unusual dark night. In the (1)_____ of an enjoyable dream, Jim thought he heard his dog (2)_____ loudly. He groaned and glanced (3)_____ his clock sleepily. Twelve o'clock the green fluorescent (4)_____ of his clock read. Suddenly, Jim (5)_____ hushed voices outside his house. He immediately became alert and jumped out of bed. As his parents had gone on a holiday, Jim was alone at home. He decided to look who was outside.

SubQuestion No : 42

Q.42 Select the correct option to fill blank 2.

- Ans 1. jumping
 2. shouting
 3. barking
 4. dancing

Question ID : 630680515001

Option 1 ID : 6306802012575

Option 2 ID : 6306802012576

Option 3 ID : 6306802012574

Option 4 ID : 6306802012573

Status : Answered

Chosen Option : 3

Comprehension:

In the following passage, some words have been deleted. Read the passage carefully and select the most appropriate option to fill in each blank.

It was an unusual dark night. In the (1)_____ of an enjoyable dream, Jim thought he heard his dog (2)_____ loudly. He groaned and glanced (3)_____ his clock sleepily. Twelve o'clock the green fluorescent (4)_____ of his clock read. Suddenly, Jim (5)_____ hushed voices outside his house. He immediately became alert and jumped out of bed. As his parents had gone on a holiday, Jim was alone at home. He decided to look who was outside.

SubQuestion No : 43

Q.43 Select the correct option to fill blank 3.

- Ans 1. in
 2. on
 3. at
 4. upon

Question ID : 630680515002

Option 1 ID : 6306802012580

Option 2 ID : 6306802012579

Option 3 ID : 6306802012577

Option 4 ID : 6306802012578

Status : Answered

Chosen Option : 3



Comprehension:

In the following passage, some words have been deleted. Read the passage carefully and select the most appropriate option to fill in each blank.

It was an unusual dark night. In the (1)_____ of an enjoyable dream, Jim thought he heard his dog (2)_____ loudly. He groaned and glanced (3)_____ his clock sleepily. Twelve o'clock the green fluorescent (4)_____ of his clock read. Suddenly, Jim (5)_____ hushed voices outside his house. He immediately became alert and jumped out of bed. As his parents had gone on a holiday, Jim was alone at home. He decided to look who was outside.

SubQuestion No : 44

Q.44 Select the correct option to fill blank 4.

- Ans 1. hands
 2. points
 3. dial
 4. light

Question ID : 630680515003

Option 1 ID : 6306802012583

Option 2 ID : 6306802012582

Option 3 ID : 6306802012584

Option 4 ID : 6306802012581

Status : Answered

Chosen Option : 4

Comprehension:

In the following passage, some words have been deleted. Read the passage carefully and select the most appropriate option to fill in each blank.

It was an unusual dark night. In the (1)_____ of an enjoyable dream, Jim thought he heard his dog (2)_____ loudly. He groaned and glanced (3)_____ his clock sleepily. Twelve o'clock the green fluorescent (4)_____ of his clock read. Suddenly, Jim (5)_____ hushed voices outside his house. He immediately became alert and jumped out of bed. As his parents had gone on a holiday, Jim was alone at home. He decided to look who was outside.

SubQuestion No : 45

Q.45 Select the correct option to fill blank 5.

- Ans 1. thought
 2. heard
 3. listened
 4. saw

Question ID : 630680515004

Option 1 ID : 6306802012586

Option 2 ID : 6306802012587

Option 3 ID : 6306802012588

Option 4 ID : 6306802012585

Status : Answered

Chosen Option : 2



Comprehension:

Read the given passage and answer the questions that follow.

The story of Joanne Kathleen Rowling's near magical rise to fame is almost as well known as the characters she creates.

Rowling was constantly writing and telling stories to her younger sister Dianne. "The first story I ever wrote down was about a rabbit called Rabbit." Rowling said in an interview. "He got the measles and was visited by his friends including a giant bee called Miss Bee. And ever since Rabbit and Miss Bee, I have always wanted to be a writer, though I rarely told anyone so. However, my parents, both of whom come from impoverished backgrounds and neither of whom had been to college, took the view that my overactive imagination was an amusing personal quirk that would never pay a mortgage or secure a pension.

A writer from the age of six, with two unpublished novels in the drawer, she was stuck on a train when Harry walked into her mind fully formed. She spent the next five years constructing the plots of seven books, one for every year of his secondary school life.

Rowling says she started writing the first book, Harry Potter and the Sorcerer's Stone, in Portugal, where she was teaching English.

At first nobody wanted to publish Harry Potter. She was told that the plot was too complex. Refusing to compromise, she found a publisher.

In 1997, Rowling received her first royalty cheque. By book three, she had skyrocketed to the top of the publishing world. A row of zeros appeared on the author's bank balance and her life was turned upside down. Day and night she had journalists knocking on the unanswered door of her flat.

Rowling's quality control has become legendary, as is her obsession with accuracy. She's thrilled with Stephen Fry's taped version of the books and outraged that an Italian dust jacket showed Harry minus his glasses. "Don't they understand that the glasses are the clue to his vulnerability?"

SubQuestion No : 46

Q.46 What quality do we get to know about JK Rowling that helps her become a successful writer?

Ans 1. Humility

2. Perseverance

3. Flexibility

4. Focus

Question ID : 630680406913

Option 1 ID : 6306801586692

Option 2 ID : 6306801586693

Option 3 ID : 6306801586691

Option 4 ID : 6306801586690

Status : Answered

Chosen Option : 2



Comprehension:

Read the given passage and answer the questions that follow.

The story of Joanne Kathleen Rowling's near magical rise to fame is almost as well known as the characters she creates.

Rowling was constantly writing and telling stories to her younger sister Dianne. "The first story I ever wrote down was about a rabbit called Rabbit." Rowling said in an interview. "He got the measles and was visited by his friends including a giant bee called Miss Bee. And ever since Rabbit and Miss Bee, I have always wanted to be a writer, though I rarely told anyone so. However, my parents, both of whom come from impoverished backgrounds and neither of whom had been to college, took the view that my overactive imagination was an amusing personal quirk that would never pay a mortgage or secure a pension.

A writer from the age of six, with two unpublished novels in the drawer, she was stuck on a train when Harry walked into her mind fully formed. She spent the next five years constructing the plots of seven books, one for every year of his secondary school life.

Rowling says she started writing the first book, Harry Potter and the Sorcerer's Stone, in Portugal, where she was teaching English.

At first nobody wanted to publish Harry Potter. She was told that the plot was too complex. Refusing to compromise, she found a publisher.

In 1997, Rowling received her first royalty cheque. By book three, she had skyrocketed to the top of the publishing world. A row of zeros appeared on the author's bank balance and her life was turned upside down. Day and night she had journalists knocking on the unanswered door of her flat.

Rowling's quality control has become legendary, as is her obsession with accuracy. She's thrilled with Stephen Fry's taped version of the books and outraged that an Italian dust jacket showed Harry minus his glasses. "Don't they understand that the glasses are the clue to his vulnerability?"

SubQuestion No : 47

Q.47 Select an appropriate title for the passage.

- Ans**
- 1. The Craft of Writing
 - 2. The Publishing Journey
 - 3. Rowling's Life
 - 4. Rowling's mystery

Question ID : 630680406909

Option 1 ID : 6306801586677

Option 2 ID : 6306801586676

Option 3 ID : 6306801586675

Option 4 ID : 6306801586674

Status : Answered

Chosen Option : 3



Comprehension:

Read the given passage and answer the questions that follow.

The story of Joanne Kathleen Rowling's near magical rise to fame is almost as well known as the characters she creates.

Rowling was constantly writing and telling stories to her younger sister Dianne. "The first story I ever wrote down was about a rabbit called Rabbit." Rowling said in an interview. "He got the measles and was visited by his friends including a giant bee called Miss Bee. And ever since Rabbit and Miss Bee, I have always wanted to be a writer, though I rarely told anyone so. However, my parents, both of whom come from impoverished backgrounds and neither of whom had been to college, took the view that my overactive imagination was an amusing personal quirk that would never pay a mortgage or secure a pension.

A writer from the age of six, with two unpublished novels in the drawer, she was stuck on a train when Harry walked into her mind fully formed. She spent the next five years constructing the plots of seven books, one for every year of his secondary school life.

Rowling says she started writing the first book, Harry Potter and the Sorcerer's Stone, in Portugal, where she was teaching English.

At first nobody wanted to publish Harry Potter. She was told that the plot was too complex. Refusing to compromise, she found a publisher.

In 1997, Rowling received her first royalty cheque. By book three, she had skyrocketed to the top of the publishing world. A row of zeros appeared on the author's bank balance and her life was turned upside down. Day and night she had journalists knocking on the unanswered door of her flat.

Rowling's quality control has become legendary, as is her obsession with accuracy. She's thrilled with Stephen Fry's taped version of the books and outraged that an Italian dust jacket showed Harry minus his glasses. "Don't they understand that the glasses are the clue to his vulnerability?"

SubQuestion No : 48

Q.48 What was Rowling doing when she started writing Harry Potter and the Sorcerer's Stone?

- Ans**
- 1. Designing
 - 2. Writing full-time
 - 3. Teaching
 - 4. Accounting

Question ID : **630680406910**

Option 1 ID : **6306801586681**

Option 2 ID : **6306801586678**

Option 3 ID : **6306801586679**

Option 4 ID : **6306801586680**

Status : **Answered**

Chosen Option : **3**



Comprehension:

Read the given passage and answer the questions that follow.

The story of Joanne Kathleen Rowling's near magical rise to fame is almost as well known as the characters she creates.

Rowling was constantly writing and telling stories to her younger sister Dianne. "The first story I ever wrote down was about a rabbit called Rabbit." Rowling said in an interview. "He got the measles and was visited by his friends including a giant bee called Miss Bee. And ever since Rabbit and Miss Bee, I have always wanted to be a writer, though I rarely told anyone so. However, my parents, both of whom come from impoverished backgrounds and neither of whom had been to college, took the view that my overactive imagination was an amusing personal quirk that would never pay a mortgage or secure a pension.

A writer from the age of six, with two unpublished novels in the drawer, she was stuck on a train when Harry walked into her mind fully formed. She spent the next five years constructing the plots of seven books, one for every year of his secondary school life.

Rowling says she started writing the first book, Harry Potter and the Sorcerer's Stone, in Portugal, where she was teaching English.

At first nobody wanted to publish Harry Potter. She was told that the plot was too complex. Refusing to compromise, she found a publisher.

In 1997, Rowling received her first royalty cheque. By book three, she had skyrocketed to the top of the publishing world. A row of zeros appeared on the author's bank balance and her life was turned upside down. Day and night she had journalists knocking on the unanswered door of her flat.

Rowling's quality control has become legendary, as is her obsession with accuracy. She's thrilled with Stephen Fry's taped version of the books and outraged that an Italian dust jacket showed Harry minus his glasses. "Don't they understand that the glasses are the clue to his vulnerability?"

SubQuestion No : 49

Q.49 Select the word from the passage that is the **ANTONYM** for 'conformity'.

- Ans 1. Constantly
 2. Secure
 3. Amusing
 4. Quirky

Question ID : 630680406912

Option 1 ID : 6306801586686

Option 2 ID : 6306801586688

Option 3 ID : 6306801586687

Option 4 ID : 6306801586689

Status : Answered

Chosen Option : 4



CPO Sub-Inspectors

(Delhi Police & CAPFs, CISF Exam)



100%
SAFE

- ▶ 100% Written Exam Syllabus
- ▶ Paper-1 & Paper-2
- ▶ 1000+ Pages, 3000+ MCQ
- ▶ Solved Papers & Practice Papers
- ▶ 1 Year Current Affairs

50%
OFF

Pay online



SSC CPO

PDF NOTES

50%
OFF

CLICK HERE



CLICK BELOW LINK TO DOWNLOAD PDF NOTES

<https://sscportal.in/study-kit/capfs>

<https://sscportal.in/study-kit>

Comprehension:

Read the given passage and answer the questions that follow.

The story of Joanne Kathleen Rowling's near magical rise to fame is almost as well known as the characters she creates.

Rowling was constantly writing and telling stories to her younger sister Dianne. "The first story I ever wrote down was about a rabbit called Rabbit." Rowling said in an interview. "He got the measles and was visited by his friends including a giant bee called Miss Bee. And ever since Rabbit and Miss Bee, I have always wanted to be a writer, though I rarely told anyone so.

However, my parents, both of whom come from impoverished backgrounds and neither of whom had been to college, took the view that my overactive imagination was an amusing personal quirk that would never pay a mortgage or secure a pension.

A writer from the age of six, with two unpublished novels in the drawer, she was stuck on a train when Harry walked into her mind fully formed. She spent the next five years constructing the plots of seven books, one for every year of his secondary school life.

Rowling says she started writing the first book, Harry Potter and the Sorcerer's Stone, in Portugal, where she was teaching English.

At first nobody wanted to publish Harry Potter. She was told that the plot was too complex. Refusing to compromise, she found a publisher.

In 1997, Rowling received her first royalty cheque. By book three, she had skyrocketed to the top of the publishing world. A row of zeros appeared on the author's bank balance and her life was turned upside down. Day and night she had journalists knocking on the unanswered door of her flat.

Rowling's quality control has become legendary, as is her obsession with accuracy. She's thrilled with Stephen Fry's taped version of the books and outraged that an Italian dust jacket showed Harry minus his glasses. "Don't they understand that the glasses are the clue to his vulnerability?"

SubQuestion No : 50

Q.50 What is the tone of the passage?

- Ans 1. Anxious
 2. Gloomy
 3. Informative
 4. Mystical

Question ID : 630680406911

Option 1 ID : 6306801586685

Option 2 ID : 6306801586684

Option 3 ID : 6306801586682

Option 4 ID : 6306801586683

Status : Answered

Chosen Option : 3

