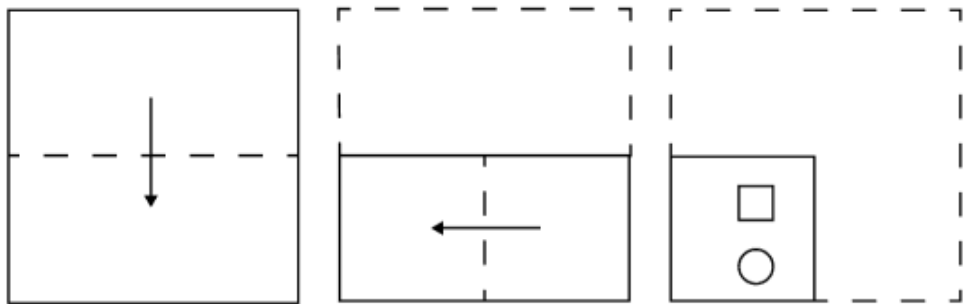


Constable GD in CAPFs and SSF Rifleman GD in AR and Sepoy in NCB Examination 2025

Exam Date	07/02/2025
Exam Time	12:00 PM - 1:00 PM
Subject	Constable GD Examination 2025

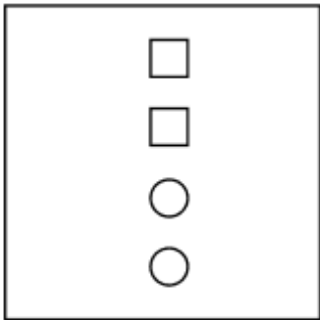
Section : Part-A-General Intelligence and Reasoning

Q.1 A paper is folded and cut as shown below. How will it appear when unfolded?

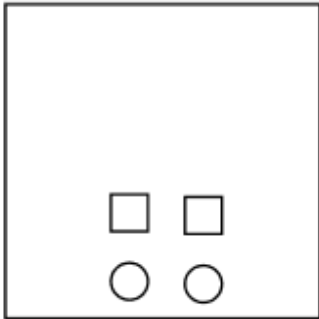


Ans

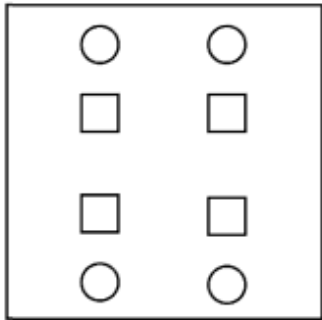
✗ 1.



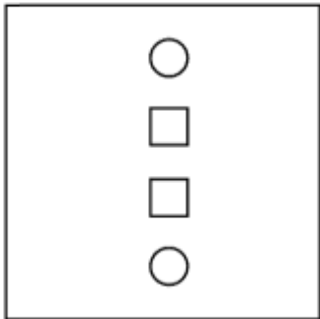
✗ 2.



✓ 3.



✗ 4.



Q.2 What should come in place of the question mark (?) in the given series based on the English alphabetical order?

KRB MTD OVF QXH ?

- Ans**
- ☒ 1. TZJ
 - ☒ 2. SZK
 - ☒ 3. SZJ
 - ☒ 4. RZJ

Q.3 The position(s) of how many letters will remain unchanged if each of the letters in the word ROTCHES is arranged in the English alphabetical order?

- Ans**
- ☒ 1. Three
 - ☒ 2. Zero
 - ☒ 3. One
 - ☒ 4. Two

Q.4 What will come in the place of the question mark (?) in the following equation, if ‘+’ and ‘-’ are interchanged and ‘x’ and ‘÷’ are interchanged?

$48 \times 3 - 16 + 6 \div 3 = ?$

- Ans**
- ☒ 1. 5
 - ☒ 2. 14
 - ☒ 3. 11
 - ☒ 4. 8

Q.5 Select the correct alternative that when filled in the blanks in the same sequence will make the series logically complete.

_KHLJ_IMKM_NLNK_MOL_

- Ans**
- ☒ 1. FKGQT
 - ☒ 2. FLGOT
 - ☒ 3. ILJOP
 - ☒ 4. IKJQP

Q.6 Select the figure from among the given options that can replace the question mark (?) in the following series.

			π	?
π	π ★	π ★ ●	★ ● H	

Ans

✗ 1.

π

★ ● f

✗ 2.

π

★ f ●

✓ 3.

π

★

● H f

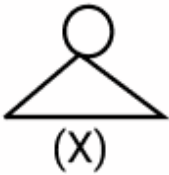
✗ 4.

π

●

★ f H

Q.7 Select the option in which the given figure (X) is embedded (rotation is NOT allowed).



Ans

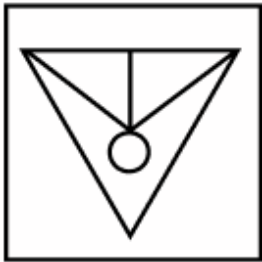
✗ 1.



✓ 2.



✗ 3.



✗ 4.



Q.8 What should come in place of the question mark (?) in the given series?

18 55 89 120 148 ?

Ans

✗ 1. 192

✗ 2. 185

✓ 3. 173

✗ 4. 168

Q.9 Eight people are sitting in two parallel rows containing 4 people each in such a way that there is equal distance between adjacent persons.
In row 1, G, L, O and F are seated and all of them are facing south.
In row 2, B, E, S and T are seated and all of them are facing north.
Thus, each person faces another person from the other row.
No one sits to the left of S. No one sits to the left of L. Only one person sits between T and S. The one facing E sits second to the right of L. O sits second to the right of G.
Which of the following represents both people sitting at extreme ends of the rows?

Ans

✗ 1. G and S

✓ 2. O and B

✗ 3. O and T

✗ 4. L and E

Q.10 In a coded language 'TRIP' is coded as '#@&\$' and "PART" is coded as '&^@#'. What is the code for A in the same code language?

- Ans**
- ☐ 1. @
 - ☐ 2. \$
 - ☒ 3. ^
 - ☐ 4. #

Q.11 In a certain code language,
'A + B' means 'A is the daughter of B',
'A - B' means 'A is the brother of B',
'A x B' means 'A is the sister of B' and
'A ÷ B' means 'A is the son of B'.

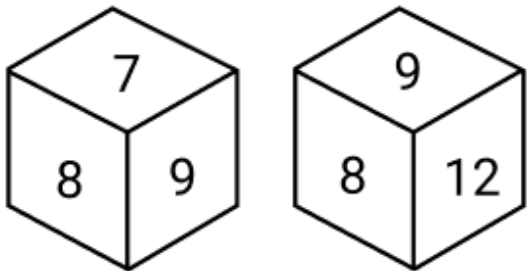
How is G related to E if 'E + F x G - H ÷ I'?

- Ans**
- ☐ 1. Mother's sister
 - ☐ 2. Sister's daughter
 - ☐ 3. Brother's daughter
 - ☒ 4. Mother's brother

Q.12 Seven people, E, F, G, H, K, L and M are sitting in a row, facing north (but not necessarily in the same order) .Only three people sit between E and L. F sits to the immediate left of L. No one sits to the right of M. Only two people sit between M and F. H sits to the immediate right of G. How many people sit between K and H?

- Ans**
- ☐ 1. Four
 - ☐ 2. One
 - ☒ 3. Two
 - ☐ 4. Three

Q.13 Two different positions of the same dice are given below. Which is the number on the face opposite to the face containing 12?



- Ans**
- ☐ 1. 10
 - ☐ 2. 11
 - ☒ 3. 7
 - ☐ 4. 9

Q.14 DGHK is related to ADEH in a certain way based on the English alphabetical order. In the same way, MQTU is related to JNQR. To which of the following is HLQR related, following the same logic?

- Ans**
- ☐ 1. FJOP
 - ☐ 2. KOTU
 - ☒ 3. EINO
 - ☐ 4. LHQR

Q.15 Based on the English alphabetical order, three of the following four letter-clusters are alike in a certain way and thus form a group. Which letter-cluster DOES NOT belong to that group?

(Note: The odd man out is not based on the number of consonants/vowels or their position in the letter-cluster.)

- Ans**
- ☒ 1. BDG
 - ☒ 2. MOQ
 - ☒ 3. EGJ
 - ☒ 4. QSV

Q.16 What should come in place of the question mark (?) in the given series?

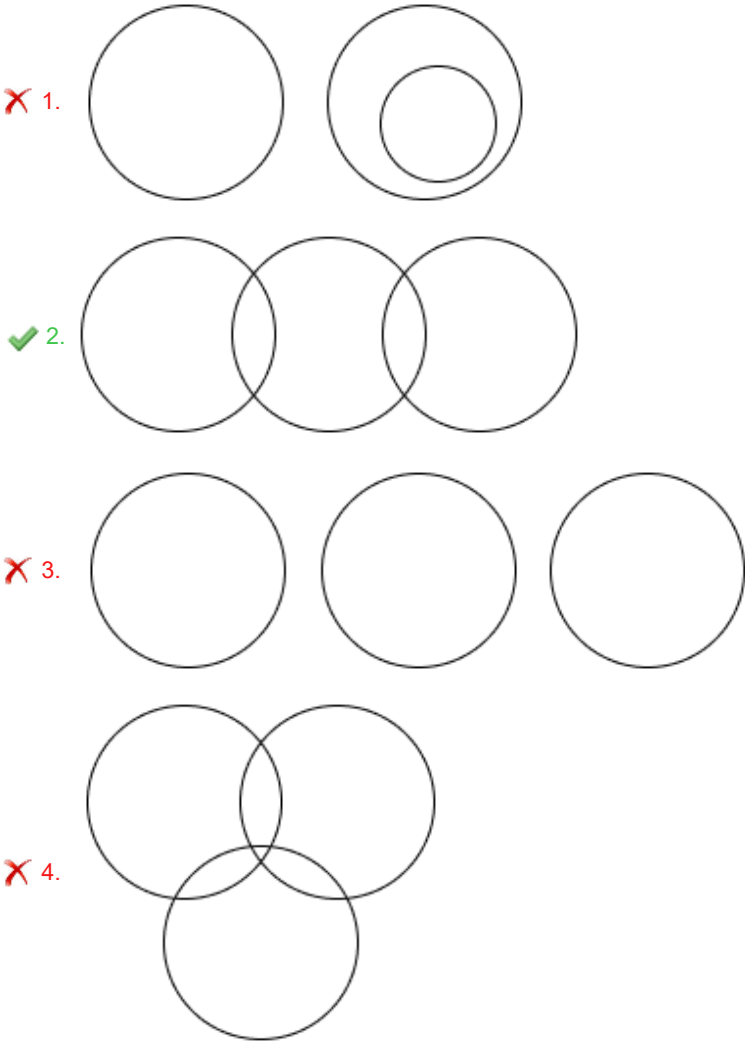
650 660 669 677 684 ?

- Ans**
- ☒ 1. 686
 - ☒ 2. 688
 - ☒ 3. 692
 - ☒ 4. 690

Q.17 Select the Venn diagram that best illustrate the relationship between the following classes.

Petrol, Car, Electric.

Ans



Q.18 Read the given statements and conclusions carefully. Assuming that the information given in the statements is true, even if it appears to be at variance with commonly known facts, decide which of the given conclusions logically follow(s) from the statements.
Statements:
Some balls are toys.
All toys are plastic.
No plastic is water.
Conclusions:
(I): Some balls are plastic.
(II): No toy is water.

- Ans**
- ☒ 1. Both conclusions (I) and (II) follow.
 - ☐ 2. Neither conclusion (I) nor (II) follows.
 - ☐ 3. Only conclusion (II) follows.
 - ☐ 4. Only conclusion (I) follows.

Q.19 In a certain code language 'NBSF' is coded as '82' and 'IMSR' is coded as '118'. What is the code for 'AYLC' in the given code language?

- Ans**
- ☐ 1. 94
 - ☐ 2. 99
 - ☐ 3. 86
 - ☒ 4. 82

Q.20 GFBE is related to FEAD in a certain way based on the English alphabetical order. In the same way, AZVY is related to ZYUX. To which of the given options is CBXA related, following the same logic?

- Ans**
- ☐ 1. BAVZ
 - ☐ 2. BBVD
 - ☐ 3. BZVZ
 - ☒ 4. BAWZ

Section : **Part-B-General Knowledge and General awareness**

Q.1 Kalamandalam Kshemavathy Pavithran, recipient of Padma Shri and a performer of mohiniyattam, belongs to which of the following states of India?

- Ans**
- ☐ 1. Telangana
 - ☐ 2. Karnataka
 - ☒ 3. Kerala
 - ☐ 4. Tamil Nadu

Q.2 According to the Indian Constitution, which of the following Schedule deals with the separation of powers of the government?

- Ans**
- ☐ 1. Sixth Schedule
 - ☐ 2. Fifth Schedule
 - ☐ 3. Eighth Schedule
 - ☒ 4. Seventh Schedule

Q.3 Which dance of Eastern India was recognized in the Representative List of Intangible Cultural Heritage of Humanity in 2010?

- Ans**
- ☐ 1. Bihu
 - ☐ 2. Lavani
 - ☒ 3. Chhau
 - ☐ 4. Garba

Q.4	While learning to cook, Rajesh noticed that when he crushed a dozen of groundnuts in a grinder, it gets lined with oil. Whereas no oil is released when he grinds a bowl of cumin. What could be the reason behind this difference?
Ans	<div><div><div>✗</div><div>1. Cumin was of bad quality.</div></div><div><div>✗</div><div>2. The protein in groundnut releases oil.</div></div><div><div>✗</div><div>3. The groundnut was not dried.</div></div><div><div>✓</div><div>4. The fat in groundnut releases oil.</div></div></div>
Q.5	The 'August Offer' of 1940 was made by which British government official?
Ans	<div><div><div>✗</div><div>1. Winston Churchill</div></div><div><div>✗</div><div>2. Neville Chamberlain</div></div><div><div>✓</div><div>3. Lord Linlithgow</div></div><div><div>✗</div><div>4. Clement Attlee</div></div></div>
Q.6	When was the 3 rd edition of the Khelo India Winter Games held in India?
Ans	<div><div><div>✗</div><div>1. January 2024</div></div><div><div>✗</div><div>2. February 2022</div></div><div><div>✗</div><div>3. January 2023</div></div><div><div>✓</div><div>4. February 2023</div></div></div>
Q.7	After how many years did India win the gold medal in the men's hockey tournament in the Asian Games in 2014?
Ans	<div><div><div>✓</div><div>1. 16 years</div></div><div><div>✗</div><div>2. 20 years</div></div><div><div>✗</div><div>3. 11 years</div></div><div><div>✗</div><div>4. 14 years</div></div></div>
Q.8	In which type of climate are deciduous forests and tree-shredded grasslands found?
Ans	<div><div><div>✗</div><div>1. Humid subtropical climate</div></div><div><div>✗</div><div>2. Subtropical steppe climate</div></div><div><div>✓</div><div>3. Tropical wet and dry climate</div></div><div><div>✗</div><div>4. Warm temperate (mid-latitude) climate</div></div></div>
Q.9	What role do MNCs play in the globalisation process?
Ans	<div><div><div>✗</div><div>1. They regulate national policies on trade.</div></div><div><div>✗</div><div>2. They promote local businesses only.</div></div><div><div>✗</div><div>3. They discourage international trade.</div></div><div><div>✓</div><div>4. They integrate production and markets across different countries.</div></div></div>
Q.10	As per Sample Registration System (SRS) 2020, which of the following Indian states had the highest natural growth rate in population?
Ans	<div><div><div>✗</div><div>1. Rajasthan</div></div><div><div>✗</div><div>2. Madhya Pradesh</div></div><div><div>✓</div><div>3. Bihar</div></div><div><div>✗</div><div>4. Uttar Pradesh</div></div></div>
Q.11	Who among the following was appointed as the Union Minister of Culture in June 2024?
Ans	<div><div><div>✗</div><div>1. Giriraj Singh</div></div><div><div>✗</div><div>2. Kinjarapu Rammohan Naidu</div></div><div><div>✓</div><div>3. Gajendra Singh Shekhawat</div></div><div><div>✗</div><div>4. Jual Oram</div></div></div>

Q.12 Vacation, resignation and removal from the offices of Speaker and Deputy Speaker are addressed in which Article of the Constitution of India?

- Ans**
- ☐ 1. Article 84
 - ☒ 2. Article 94
 - ☐ 3. Article 70
 - ☐ 4. Article 101

Q.13 Which of the following sectors includes all the business entities, corporations and partnerships?

- Ans**
- ☐ 1. Government sector
 - ☐ 2. Household sector
 - ☐ 3. Foreign sector
 - ☒ 4. Firms sector

Q.14 The focus areas of the first and second five-year plans were:

- Ans**
- ☐ 1. Agriculture and Service Sectors
 - ☐ 2. Industry and Service Sectors
 - ☒ 3. Agriculture and Industry sectors
 - ☐ 4. Agriculture and Foreign Sectors

Q.15 According to the Census of India, 2011, which of the following northeastern states has the highest population?

- Ans**
- ☐ 1. Arunachal Pradesh
 - ☐ 2. Manipur
 - ☐ 3. Mizoram
 - ☒ 4. Assam

Q.16 Sukta was known as hymns of which of the following Vedic books?

- Ans**
- ☐ 1. Samaveda
 - ☐ 2. Atharvaveda
 - ☐ 3. Yajurveda
 - ☒ 4. Rigveda

Q.17 Georg Simon Ohm was famous for publishing a formula in 1827. What does it describe?

- Ans**
- ☐ 1. The sum of all currents entering a junction must equal the sum of all currents leaving the junction.
 - ☐ 2. The total electric flux through a closed surface is proportional to the charge enclosed.
 - ☒ 3. The current flow is proportional to potential difference and inversely proportional to resistance.
 - ☐ 4. The magnitude of EMF induced in the coil is directly proportional to the rate of change of magnetic flux associated with that coil.

Q.18 Which of the following is the festival that celebrates Marathi New Year?

- Ans**
- ☐ 1. Pongal
 - ☒ 2. Gudi Padwa
 - ☐ 3. Ugadi
 - ☐ 4. Makar Sankranti

Q.19 Which benefit is NOT included in 'PM – Surya Ghar: Muft Bijli Yojana'?

- Ans**
- ☐ 1. Increased use of renewable energy
 - ☐ 2. Free electricity for households
 - ☐ 3. Reduced electricity costs for the government
 - ☒ 4. Reduced electricity costs for the private sector

Q.20 Sikkil Mala Chandrasekhar is associated with which of the following musical instruments?

- Ans**
- ☐ 1. Pakhawaj
 - ☐ 2. Rudra veena
 - ☐ 3. Tabla
 - ☒ 4. Flute

Section : **Part-C-Elementary Mathematics**

Q.1 A salesman offers a discount scheme of 'Buy 25 and get 5 free' on the purchase of notebooks in his shop. He professes that a notebook costs him ₹10, but in reality, it costs him ₹5. Find the difference between his profit percentage and scheme discount.

- Ans**
- ☐ 1. 42%
 - ☐ 2. 48%
 - ☒ 3. 50%
 - ☐ 4. 56%

Q.2 If the mean proportional of 18 and 98 is $2A + 6$, the value of A is:

- Ans**
- ☐ 1. 16
 - ☐ 2. 19
 - ☒ 3. 18
 - ☐ 4. 17

Q.3 The third proportional of $\frac{x^{2.5}}{y^{1.5}} \times z^{3.5}$ and $x^{0.25} \times \frac{y^{0.25}}{z^{-0.25}}$ is _____.

- Ans**
- ☐ 1. $\frac{y^3}{x^3z^3}$
 - ☒ 2. $\frac{y^2}{x^2z^3}$
 - ☐ 3. $\frac{y^2}{x^2z^2}$
 - ☐ 4. $\frac{y^2}{x^3z^2}$

Q.4 The distance from Chandigarh to Amritsar is covered in 4.5 hours at a speed of 50 km/hr. By how much should the speed (in km/hr) be increased to save 30 minutes of travel time?

- Ans**
- ☐ 1. 6.75
 - ☐ 2. 6
 - ☐ 3. 6.5
 - ☒ 4. 6.25

Q.5 The price (per litre) of petrol increases by 40%. By what percent should its consumption be reduced such that the expenditure on it increases by 19% only?

- Ans**
- ☒ 1. 15%
 - ☐ 2. 85%
 - ☐ 3. 84%
 - ☐ 4. 18%

Q.6 Evaluate: $(-9) - (-60) \div (-15) + (-3) \times 6$

- Ans
- ✓ 1. -31
 - ✗ 2. -34
 - ✗ 3. -30
 - ✗ 4. -33

Q.7 The average age of 40 students of a class is 12 years. If the age of the teacher is also included, the average age of the whole group becomes 13 years. The age (in years) of the teacher is:

- Ans
- ✗ 1. 50
 - ✗ 2. 51
 - ✓ 3. 53
 - ✗ 4. 56

Q.8 The average age of 35 students in a group is 15 years. When the teacher's age is included, the average age of the group increases by 1.25 years. What is the teacher's age (in years)?

- Ans
- ✗ 1. 45
 - ✓ 2. 60
 - ✗ 3. 55
 - ✗ 4. 50

Q.9 The simple interest on a principal amount (in ₹) is ₹524 for a period of 2 years at the rate of 5% per annum. The principal amount (in ₹) is:

- Ans
- ✓ 1. 5240
 - ✗ 2. 5239
 - ✗ 3. 5249
 - ✗ 4. 5234

Q.10 The diagonals of a rhombus are 4 m and 6 m, respectively. Find its area (in m²).

- Ans
- ✗ 1. 9
 - ✓ 2. 12
 - ✗ 3. 18
 - ✗ 4. 24

Q.11 Ajay invested some money in HDFC at 4% per annum rate of interest. What would be the corresponding simple interest (in ₹) if after 2 years, Ajay got ₹204 as compound interest, considering annual compounding?

- Ans
- ✗ 1. 215
 - ✓ 2. 200
 - ✗ 3. 210
 - ✗ 4. 195

Q.12 If the income of Ravi is 24% more than that of Ram, then by what percentage is the income of Ram less than that of Ravi?

- Ans
- ✗ 1. $\frac{700}{31}\%$
 - ✓ 2. $\frac{600}{31}\%$
 - ✗ 3. $\frac{400}{31}\%$
 - ✗ 4. $\frac{500}{31}\%$

Q.13 The greatest number, which divides 1477 and 671 to leave 0 and 6 respectively as remainders, is:

- Ans**
- ☐ 1. 17
 - ☐ 2. 16
 - ☐ 3. 20
 - ☒ 4. 7

Q.14 Pramod sold 154 chairs and had a gain equal to the selling price of 54 chairs. What is his profit percentage?

- Ans**
- ☐ 1. 64%
 - ☐ 2. 59%
 - ☐ 3. 49%
 - ☒ 4. 54%

Q.15 A shopkeeper bought an article for ₹520. At what price (in ₹) should he sell the article to make 20% profit?

- Ans**
- ☐ 1. 612
 - ☐ 2. 636
 - ☒ 3. 624
 - ☐ 4. 416

Q.16 Two trains having lengths of 340 m and 360 m are running at speeds of 80 km/h and 90 km/h, respectively, in the same direction. The time taken (in minutes) by the faster train, coming from behind, to completely cross the other train is:

- Ans**
- ☐ 1. 7
 - ☒ 2. 4.2
 - ☐ 3. 3.7
 - ☐ 4. 6

Q.17 Krish has ₹1224 with him. He divided it amongst his sons Veer and Nitin and asked them to invest it at 4% rate of interest compounded annually. It was seen that Veer and Nitin got same amount after 12 and 13 years respectively. How much (in ₹) did Krish give to Nitin?

- Ans**
- ☐ 1. 624
 - ☒ 2. 600
 - ☐ 3. 450
 - ☐ 4. 724

Q.18 Evaluate: $32 \div 8 \times 4 - 3 \times 3$

- Ans**
- ☐ 1. 9
 - ☐ 2. 6
 - ☒ 3. 7
 - ☐ 4. 10

Q.19 The greatest number, which divides 943 and 1957 to leave 7 and 1 respectively as remainders, is:

- Ans**
- ☒ 1. 12
 - ☐ 2. 28
 - ☐ 3. 10
 - ☐ 4. 13

Q.20 A and B can do a work in 30 days and 10 days, respectively. If they work on alternate days starting with A, then in how many days will the work be completed?

- Ans**
- ☒ 1. $12\frac{1}{3}$ days
 - ☒ 2. $16\frac{1}{3}$ days
 - ☒ 3. $15\frac{1}{3}$ days
 - ☒ 4. $14\frac{1}{3}$ days

Section : **Part-D-English**

Q.1 Select the most appropriate ANTONYM of the given word.

Authenticate

- Ans**
- ☒ 1. Discredit
 - ☒ 2. Scatter
 - ☒ 3. Amalgamate
 - ☒ 4. Entitle

Q.2 Select the most appropriate option to fill in the blank.

She felt a _____ of relief after the exam was over.

- Ans**
- ☒ 1. responsibility
 - ☒ 2. sense
 - ☒ 3. touch
 - ☒ 4. danger

Q.3 Identify the INCORRECTLY spelt word in the following sentence.

Clear communicetion is essential for effective collaboration and successful completion of complex projects at work.

- Ans**
- ☒ 1. collaboration
 - ☒ 2. communicetion
 - ☒ 3. effective
 - ☒ 4. completion

Q.4 Select the most appropriate option to substitute the underlined segment in the given sentence.

Learning a new language can be all challenging and rewarding.

- Ans**
- ☒ 1. both challenging and rewarding
 - ☒ 2. neither challenging and rewarding
 - ☒ 3. whether both challenging and rewarding
 - ☒ 4. all both challenging or rewarding

Q.5 The given sentence is divided into four segments. Select the option that has the segment with an adverbial usage error.

Patricia and / her associate / softly examined / the ancient artefact.

- Ans**
- ☒ 1. the ancient artefact
 - ☒ 2. Patricia and
 - ☒ 3. softly examined
 - ☒ 4. her associate

Q.6 Select the most appropriate option to fill in the blank.
Tamanna is as _____ with all her projects.

- Ans**
- ☒ 1. beat around the bush
 - ☒ 2. busy as a tiger
 - ☒ 3. busy as a bee
 - ☒ 4. busy as a sparrow

Q.7 Select the most appropriate option that can substitute the underlined words in the given sentence.

The rural life can be contrasted to that of urban life.

- Ans**
- ☒ 1. contrasted in
 - ☒ 2. contrasted off
 - ☒ 3. contrasted with
 - ☒ 4. contrasted at

Q.8 The following sentence has been divided into parts. One of them may contain an error. Select the part that contains the error from the given options. If you don't find any error, mark 'No error' as your answer.

The hotel/ is not big enormous/ to accommodate some more guests.

- Ans**
- ☒ 1. to accommodate some more guests.
 - ☒ 2. The hotel
 - ☒ 3. No error.
 - ☒ 4. is not big enormous

Q.9 Select the most appropriate synonym of the given word.

Annihilate

- Ans**
- ☒ 1. Confirm
 - ☒ 2. Increase
 - ☒ 3. Lengthen
 - ☒ 4. Destroy

Q.10 Select the INCORRECTLY spelt word.

- Ans**
- ☒ 1. Renewel
 - ☒ 2. Horizon
 - ☒ 3. Composer
 - ☒ 4. Algebra

Q.11 Select the most appropriate synonym of the highlighted word.

The policies of the school proscribe accessing social media websites on school computers.

- Ans**
- ☒ 1. surround
 - ☒ 2. reveal
 - ☒ 3. prohibit
 - ☒ 4. vary

Q.12 Select the most appropriate option to fill in blank.

Neither John _____ his friends were able to attend the party.

Ans ☒ 1. or

☒ 2. nor

☒ 3. and

☒ 4. but

Q.13 Select the most appropriate ANTONYM of the given word.

Confess

Ans ☒ 1. Witness

☒ 2. Disavow

☒ 3. Scare

☒ 4. Preface

Q.14 Select the most appropriate synonym of the underlined word.

The teacher explained the concept in a concise way, making it easy to understand.

Ans ☒ 1. Detailed

☒ 2. Brief

☒ 3. Interesting

☒ 4. Confusing

Q.15 Select the most appropriate option to substitute the underlined segment in the given sentence.

Elastocaloric cooling is a promising, eco-friendly technology for refrigeration that has the potential to be used by a broad range of applications and at different temperature ranges.

Ans ☒ 1. potential to use in

☒ 2. potential to be used in

☒ 3. potential to be using in

☒ 4. potential to be used as

Comprehension:

In the following passage, some words have been deleted. Read the passage carefully and select the most appropriate option to fill in each blank.

Apart from the fact that he was at this moment, disguised as a spiritual leader ____1____ the Christian Church, there was nothing sinister about Mr. Cyril Boggis. He was ____2____ trade a dealer in antique furniture, with his own shop and showroom in the King's Road, Chelsea. His premises ____3____ not large, and generally he did not do a great deal of business, but because he always bought very, very cheap and sold very, very ____4____ he managed to make quite a tidy little income every year. He was a talented salesman, and when buying or selling a ____5____ he could slide smoothly into whichever mood suited the client best. He was well aware of his gift using it shamelessly on every possible occasion.

SubQuestion No : 16

Q.16 Select the most appropriate option to fill in blank number 1.

Ans ☒ 1. of

☒ 2. on

☒ 3. oft

☒ 4. off

Comprehension:

In the following passage, some words have been deleted. Read the passage carefully and select the most appropriate option to fill in each blank.

Apart from the fact that he was at this moment, disguised as a spiritual leader ___1___ the Christian Church, there was nothing sinister about Mr. Cyril Boggis. He was ___2___ trade a dealer in antique furniture, with his own shop and showroom in the King's Road, Chelsea. His premises ___3___ not large, and generally he did not do a great deal of business, but because he always bought very, very cheap and sold very, very ___4___ he managed to make quite a tidy little income every year. He was a talented salesman, and when buying or selling a ___5___ he could slide smoothly into whichever mood suited the client best. He was well aware of his gift using it shamelessly on every possible occasion.

SubQuestion No : 17

Q.17 Select the most appropriate option the fill in blank number 2.

- Ans**
- ☒ 1. at
 - ☒ 2. in
 - ☒ 3. from
 - ☒ 4. by

Comprehension:

In the following passage, some words have been deleted. Read the passage carefully and select the most appropriate option to fill in each blank.

Apart from the fact that he was at this moment, disguised as a spiritual leader ___1___ the Christian Church, there was nothing sinister about Mr. Cyril Boggis. He was ___2___ trade a dealer in antique furniture, with his own shop and showroom in the King's Road, Chelsea. His premises ___3___ not large, and generally he did not do a great deal of business, but because he always bought very, very cheap and sold very, very ___4___ he managed to make quite a tidy little income every year. He was a talented salesman, and when buying or selling a ___5___ he could slide smoothly into whichever mood suited the client best. He was well aware of his gift using it shamelessly on every possible occasion.

SubQuestion No : 18

Q.18 Select the most appropriate option the fill in blank number 3.

- Ans**
- ☒ 1. was
 - ☒ 2. are
 - ☒ 3. were
 - ☒ 4. is

Comprehension:

In the following passage, some words have been deleted. Read the passage carefully and select the most appropriate option to fill in each blank.

Apart from the fact that he was at this moment, disguised as a spiritual leader ___1___ the Christian Church, there was nothing sinister about Mr. Cyril Boggis. He was ___2___ trade a dealer in antique furniture, with his own shop and showroom in the King's Road, Chelsea. His premises ___3___ not large, and generally he did not do a great deal of business, but because he always bought very, very cheap and sold very, very ___4___ he managed to make quite a tidy little income every year. He was a talented salesman, and when buying or selling a ___5___ he could slide smoothly into whichever mood suited the client best. He was well aware of his gift using it shamelessly on every possible occasion.

SubQuestion No : 19

Q.19 Select the most appropriate option the fill in blank number 4.

- Ans**
- ☒ 1. dare
 - ☒ 2. door
 - ☒ 3. deer
 - ☒ 4. dear

Comprehension:

In the following passage, some words have been deleted. Read the passage carefully and select the most appropriate option to fill in each blank.

Apart from the fact that he was at this moment, disguised as a spiritual leader ___1___ the Christian Church, there was nothing sinister about Mr. Cyril Boggis. He was ___2___ trade a dealer in antique furniture, with his own shop and showroom in the King's Road, Chelsea. His premises ___3___ not large, and generally he did not do a great deal of business, but because he always bought very, very cheap and sold very, very ___4___ he managed to make quite a tidy little income every year. He was a talented salesman, and when buying or selling a ___5___ he could slide smoothly into whichever mood suited the client best. He was well aware of his gift using it shamelessly on every possible occasion.

SubQuestion No : 20

Q.20 Select the most appropriate option the fill in blank number 5.

- Ans
- ☒ 1. pace
 - ☒ 2. peace
 - ☒ 3. pose
 - ☒ 4. piece

Section : Part-D-Hindi

Q.1 'बहुत परिश्रम करना' के लिए निम्नलिखित में से उपयुक्त मुहावरा है।

- Ans
- ☒ 1. अत्यधिक जुगाड़ लगाना
 - ☒ 2. आकाश-पाताल एक करना
 - ☒ 3. दिन-रात न होना
 - ☒ 4. आग में घी डालना

Q.2 निम्नलिखित वाक्यांश के लिए सार्थक शब्द चुनिए -
आकाश में विचरण करने वाला

- Ans
- ☒ 1. नभचर
 - ☒ 2. भूमिचर
 - ☒ 3. निशाचर
 - ☒ 4. जलचर

Q.3 'अभ्यागत' का पर्याय है-

- Ans
- ☒ 1. अतीत
 - ☒ 2. अतिरिक्त
 - ☒ 3. मेहमान
 - ☒ 4. आगत

Q.4 निम्नलिखित मुहावरे के उचित अर्थ का चयन करें-
'आँखों के आगे नाचना'

- Ans
- ☒ 1. हर समय याद रहना
 - ☒ 2. प्रतीक्षा करना
 - ☒ 3. देखने को जी चाहना
 - ☒ 4. क्रोध करना

Q.5 'निंदा' का विलोम शब्द है-

- Ans
- ☒ 1. बुराई
 - ☒ 2. स्तुति
 - ☒ 3. प्रलाप
 - ☒ 4. स्फूर्ति

Q.6	'तालाब का किनारा अत्यंत सुन्दर दिख रहा है।' इस वाक्य में प्रयुक्त 'किनारा' शब्द का अनेकार्थी शब्द निम्न में से कौनसा है?
Ans	<div><div><div>✓</div><div>1. हाशिया</div></div><div><div>✗</div><div>2. अंदाज</div></div><div><div>✗</div><div>3. सलीका</div></div><div><div>✗</div><div>4. माध्यम</div></div></div>
Q.7	<p>‘चिंता यह है की देश का पुनुरुथान कैसे होगा?’</p> <p>उपरोक्त वाक्य में वर्तनी सम्बन्धी अशुद्धियाँ है। अशुद्धि रहित वाक्य का चयन करें-</p>
Ans	<div><div><div>✗</div><div>1. चिंता यह है कि देश का पुनुरुथान कैसे होगा ।</div></div><div><div>✓</div><div>2. चिंता यह है कि देश का पुनुरुत्थान कैसे होगा ।</div></div><div><div>✗</div><div>3. चिंता यह है कि देश का पुनरुथान कैसे होगा ।</div></div><div><div>✗</div><div>4. चिंता यह है की देश का पुनरुत्थान कैसे होगा ।</div></div></div>
Q.8	<p>‘उत्तर प्रदेश की जनसंख्या लगभग तेईस _____ है।’</p> <p>रिक्त स्थान की पूर्ति के लिए उपयुक्त तत्सम है-</p>
Ans	<div><div><div>✗</div><div>1. कज्जल</div></div><div><div>✓</div><div>2. कोटि</div></div><div><div>✗</div><div>3. कुकुर</div></div><div><div>✗</div><div>4. करोड़</div></div></div>
Q.9	<p>‘स्वामी’ के लिए विलोम शब्द होगा-</p>
Ans	<div><div><div>✗</div><div>1. श्रद्धा</div></div><div><div>✗</div><div>2. श्रीमान</div></div><div><div>✓</div><div>3. दास</div></div><div><div>✗</div><div>4. दाता</div></div></div>
Q.10	<p>‘जो शिव की उपासना करता हो’ वाक्यांश के लिए सार्थक शब्द इनमें से कौन-सा है?</p>
Ans	<div><div><div>✓</div><div>1. शैव</div></div><div><div>✗</div><div>2. वैष्णव</div></div><div><div>✗</div><div>3. शाक्त</div></div><div><div>✗</div><div>4. भक्त</div></div></div>
Q.11	<p>निम्नलिखित वाक्य में रेखांकित खंड के स्थान पर प्रयुक्त होने वाले सबसे उपयुक्त विकल्प का चयन कीजिए-</p> <p>सीमा की <u>लिखावट हिंदी की</u> बहुत सुंदर है।</p>
Ans	<div><div><div>✓</div><div>1. हिंदी की लिखावट</div></div><div><div>✗</div><div>2. हिंदी की</div></div><div><div>✗</div><div>3. हिंदी लिखावट की</div></div><div><div>✗</div><div>4. लिखावट की हिंदी</div></div></div>
Q.12	<p>निम्नलिखित में से कौन-सा शब्द पुल्लिंग नहीं है-</p>
Ans	<div><div><div>✗</div><div>1. कार्य</div></div><div><div>✓</div><div>2. जड़ता</div></div><div><div>✗</div><div>3. पोषण</div></div><div><div>✗</div><div>4. शोषण</div></div></div>

Q.13 'हमारे संविधान में स्त्री के अधिकारों के सम्बन्ध में क्या प्रविधान है?'
उपरोक्त वाक्य के किस शब्द की वर्तनी अशुद्ध है?

- Ans
- ✓ 1. प्रविधान
 - ✗ 2. सम्बन्ध
 - ✗ 3. अधिकारों
 - ✗ 4. संविधान

Q.14 'आपके यहाँ मेरे लिए कुछ _____ हो तो बताइये, मैं इस समय बेकार हूँ।'
उचित सार्थक और निरर्थक शब्द-युग्म वाले विकल्प का चयन करके उपरोक्त वाक्य पूर्ण करें-

- Ans
- ✗ 1. राशन-पानी
 - ✗ 2. मीठा-शीठा
 - ✗ 3. कपड़ा-लत्ता
 - ✓ 4. काम-वाम

Q.15 दिए गए वाक्यों के रेखांकित शब्दों के आधार पर संज्ञा की दृष्टि से अशुद्ध वाक्य की पहचान करें-

- Ans
- ✗ 1. ज़िया ने चतुराई से दुश्मन को परास्त कर दिया।
 - ✗ 2. गोपाल और रहीम की मित्रता बहुत पुरानी है।
 - ✓ 3. कोई अपना ही कई बार आपका सबसे बड़ा नुकसान कर देता है।
 - ✗ 4. अच्छा मित्र मिल जाना किस्मत की बात है।

Comprehension:

निम्नलिखित गद्यांश में से कुछ शब्द हटा दिए गए हैं। दिए गए विकल्पों की सहायता से रिक्त स्थानों की पूर्ति कीजिए। प्रत्येक संख्या के लिए उपयुक्त विकल्प का चयन कीजिए
अस्तित्ववादी, व्यक्ति का अस्तित्व किसी बाह्य सत्ता के _____ (1) नहीं मानते। उनके अनुसार मनुष्य अपने भाग्य का _____ (2) तथा अपने कर्मों के लिए उत्तरदायी स्वयं है। बिना अस्तित्वबोध के मनुष्य सच्चे अर्थों में _____ (3) भी नहीं हो सकता। अस्तित्ववादी सुख की _____ (4) को ही निरर्थक मानते हैं। उनके लिए किसी प्रकार की भी सामाजिक, धार्मिक, नैतिक, राजनीतिक, अथवा वैज्ञानिक _____ (5) मनुष्य को न तो पूर्णतः संतुष्ट कर सकती है और न सुखी।

SubQuestion No : 16

Q.16 सर्वोचित शब्द से गद्यांश का प्रथम रिक्त स्थान पूर्ण करें-

- Ans
- ✗ 1. शिकंजे
 - ✓ 2. अधीन
 - ✗ 3. अंतर्गत
 - ✗ 4. अनाधीन

Comprehension:

निम्नलिखित गद्यांश में से कुछ शब्द हटा दिए गए हैं। दिए गए विकल्पों की सहायता से रिक्त स्थानों की पूर्ति कीजिए। प्रत्येक संख्या के लिए उपयुक्त विकल्प का चयन कीजिए
अस्तित्ववादी, व्यक्ति का अस्तित्व किसी बाह्य सत्ता के _____ (1) नहीं मानते। उनके अनुसार मनुष्य अपने भाग्य का _____ (2) तथा अपने कर्मों के लिए उत्तरदायी स्वयं है। बिना अस्तित्वबोध के मनुष्य सच्चे अर्थों में _____ (3) भी नहीं हो सकता। अस्तित्ववादी सुख की _____ (4) को ही निरर्थक मानते हैं। उनके लिए किसी प्रकार की भी सामाजिक, धार्मिक, नैतिक, राजनीतिक, अथवा वैज्ञानिक _____ (5) मनुष्य को न तो पूर्णतः संतुष्ट कर सकती है और न सुखी।

SubQuestion No : 17

Q.17 सर्वोचित शब्द से गद्यांश का द्वितीय रिक्त स्थान पूर्ण करें-

- Ans
- ✗ 1. विकासकर्ता
 - ✗ 2. व्याख्याता
 - ✗ 3. प्रस्तुतकर्ता
 - ✓ 4. निर्माता

Comprehension:

निम्नलिखित गद्यांश में से कुछ शब्द हटा दिए गए हैं। दिए गए विकल्पों की सहायता से रिक्त स्थानों की पूर्ति कीजिए। प्रत्येक संख्या के लिए उपयुक्त विकल्प का चयन कीजिए
अस्तित्ववादी, व्यक्ति का अस्तित्व किसी बाह्य सत्ता के _____(1) नहीं मानते। उनके अनुसार मनुष्य अपने भाग्य का _____(2) तथा अपने कर्मों के लिए उत्तरदायी स्वयं है। बिना अस्तित्वबोध के मनुष्य सच्चे अर्थों में _____(3) भी नहीं हो सकता। अस्तित्ववादी सुख की _____(4) को ही निरर्थक मानते हैं। उनके लिए किसी प्रकार की भी सामाजिक, धार्मिक, नैतिक, राजनीतिक, अथवा वैज्ञानिक _____(5) मनुष्य को न तो पूर्णतः संतुष्ट कर सकती है और न सुखी।

SubQuestion No : 18

Q.18 सर्वोचित शब्द से गद्यांश का तृतीय रिक्त स्थान पूर्ण करें-

- Ans
- ☒ 1. जीवित
 - ☒ 2. परतंत्र
 - ☒ 3. स्वछंद
 - ☒ 4. आनंदित

Comprehension:

निम्नलिखित गद्यांश में से कुछ शब्द हटा दिए गए हैं। दिए गए विकल्पों की सहायता से रिक्त स्थानों की पूर्ति कीजिए। प्रत्येक संख्या के लिए उपयुक्त विकल्प का चयन कीजिए
अस्तित्ववादी, व्यक्ति का अस्तित्व किसी बाह्य सत्ता के _____(1) नहीं मानते। उनके अनुसार मनुष्य अपने भाग्य का _____(2) तथा अपने कर्मों के लिए उत्तरदायी स्वयं है। बिना अस्तित्वबोध के मनुष्य सच्चे अर्थों में _____(3) भी नहीं हो सकता। अस्तित्ववादी सुख की _____(4) को ही निरर्थक मानते हैं। उनके लिए किसी प्रकार की भी सामाजिक, धार्मिक, नैतिक, राजनीतिक, अथवा वैज्ञानिक _____(5) मनुष्य को न तो पूर्णतः संतुष्ट कर सकती है और न सुखी।

SubQuestion No : 19

Q.19 सर्वोचित शब्द से गद्यांश का चतुर्थ रिक्त स्थान पूर्ण करें-

- Ans
- ☒ 1. वार्ता
 - ☒ 2. योग्यता
 - ☒ 3. लालसा
 - ☒ 4. लालच

Comprehension:

निम्नलिखित गद्यांश में से कुछ शब्द हटा दिए गए हैं। दिए गए विकल्पों की सहायता से रिक्त स्थानों की पूर्ति कीजिए। प्रत्येक संख्या के लिए उपयुक्त विकल्प का चयन कीजिए
अस्तित्ववादी, व्यक्ति का अस्तित्व किसी बाह्य सत्ता के _____(1) नहीं मानते। उनके अनुसार मनुष्य अपने भाग्य का _____(2) तथा अपने कर्मों के लिए उत्तरदायी स्वयं है। बिना अस्तित्वबोध के मनुष्य सच्चे अर्थों में _____(3) भी नहीं हो सकता। अस्तित्ववादी सुख की _____(4) को ही निरर्थक मानते हैं। उनके लिए किसी प्रकार की भी सामाजिक, धार्मिक, नैतिक, राजनीतिक, अथवा वैज्ञानिक _____(5) मनुष्य को न तो पूर्णतः संतुष्ट कर सकती है और न सुखी।

SubQuestion No : 20

Q.20 सर्वोचित शब्द से गद्यांश का पंचम रिक्त स्थान पूर्ण करें-

- Ans
- ☒ 1. उन्नति
 - ☒ 2. खोज
 - ☒ 3. पराकाष्ठा
 - ☒ 4. अवनति