

Exam Date	05/02/2025
Exam Time	3:00 PM - 4:00 PM
Subject	Constable GD Examination 2025

Section : Part-A-General Intelligence and Reasoning

Q.1 AMBUSH is related to FPIWTH in a certain way based on the English alphabetical order. In the same way, LYPASE is related to QBWCTE. To which of the given options is OCTANE related, following the same logic?

- Ans
- ☐ 1. TFBDME
 - ☐ 2. TFBCOF
 - ☐ 3. TFADME
 - ☒ 4. TFACOE

Q.2 In a certain code language 'USJI' is coded as '49' and 'DPTQ' is coded as '51'. What is the code for 'FAUL' in the given language?

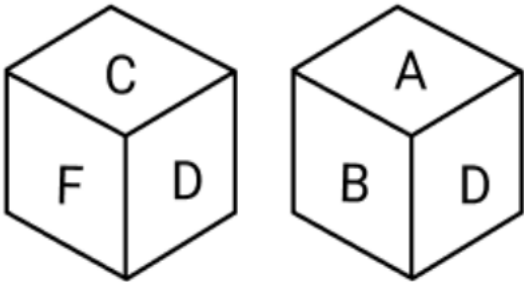
- Ans
- ☐ 1. 62
 - ☐ 2. 57
 - ☒ 3. 68
 - ☐ 4. 59

Q.3 What should come in place of the question mark (?) in the given series?

19 19 20 24 33 ?

- Ans
- ☐ 1. 51
 - ☐ 2. 48
 - ☐ 3. 50
 - ☒ 4. 49

Q.4 A dice has its faces marked by letters A, B, C, D, E and F. Two different positions of the same dice are shown. Select the letter that will be on the face opposite to the one having E?

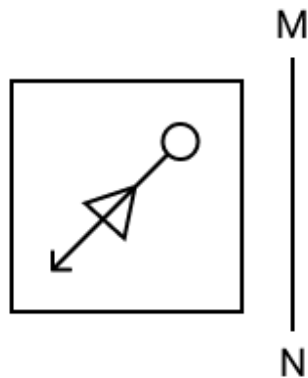


- Ans
- ☐ 1. B
 - ☒ 2. D
 - ☐ 3. A
 - ☐ 4. C

Q.5 In a certain code language.
'Z + H' means 'Z is the daughter of H',
'Z # H' means 'Z is the sister of H',
'Z @ H' means 'Z is the mother of H' and
'Z % H' means 'Z is the brother of H'.
Based on the above, how is R related to E if 'E % L # R + B'?

- Ans** ☒ 1. Sister
☐ 2. Mother
☐ 3. Brother
☐ 4. Daughter

Q.6 Select the correct mirror image of the given figure when the mirror is placed at MN as shown below.



- Ans**
- ☐ 1.
- ☐ 2.
- ☐ 3.
- ☒ 4.

Q.7 What should come in place of the question mark (?) in the given series?

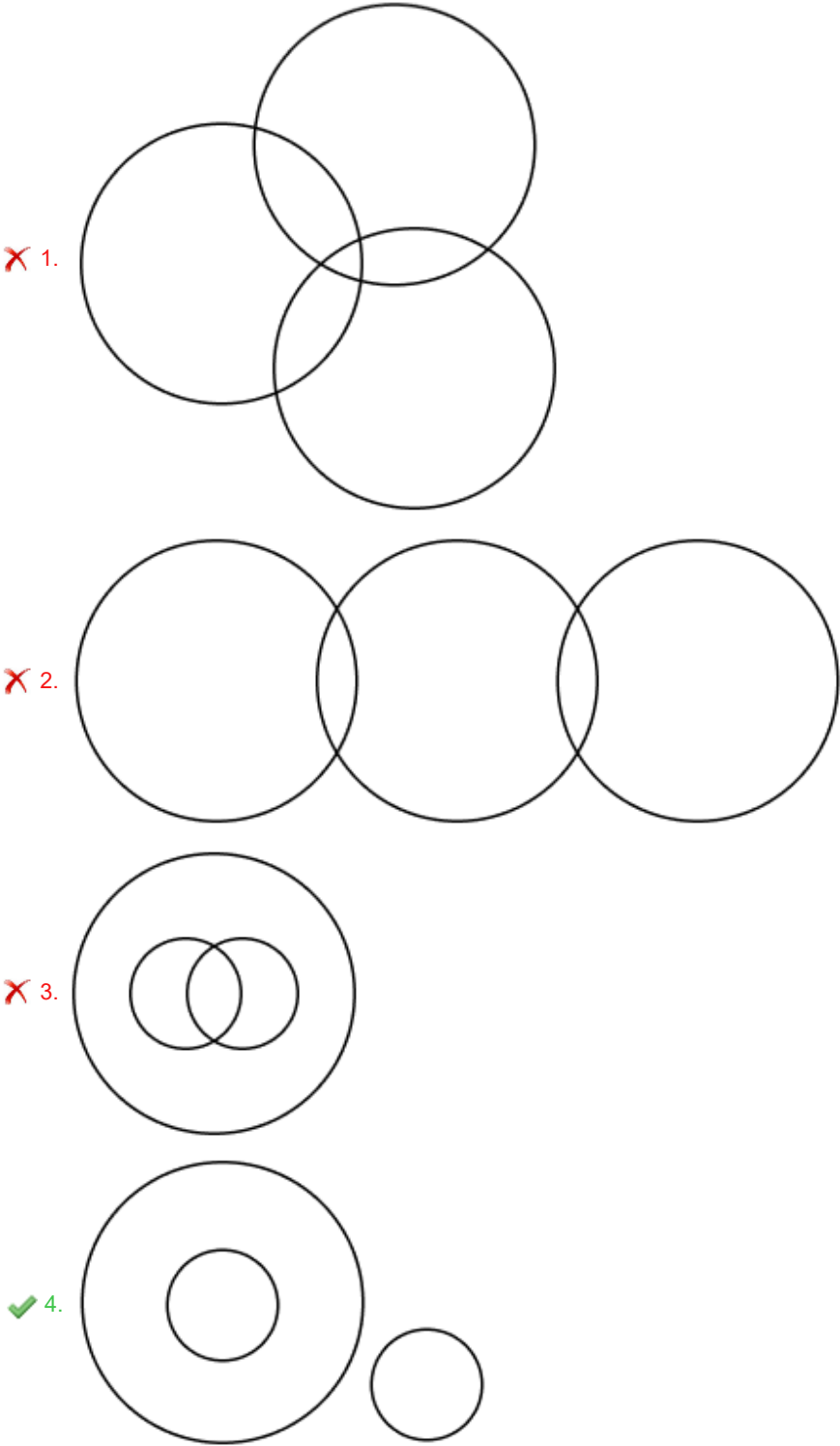
419 424 430 437 445 ?

- Ans
- ☒ 1. 453
 - ☒ 2. 454
 - ☒ 3. 456
 - ☒ 4. 455

Q.8 Select the Venn diagram that best illustrates the relationship between the following classes.

Animals, Horses, Trees

Ans



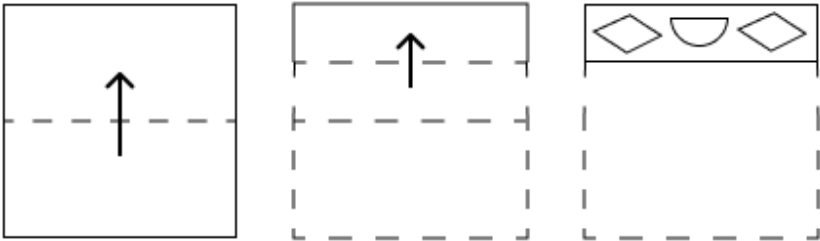
Q.9 Select the option that represents the letters that, when sequentially placed from left to right in the blanks below, will complete the letter series.
_ O _ K R _ _ J K _ E

- Ans
- ☒ 1. RJEEO
 - ☒ 2. EJEOR
 - ☒ 3. OERJE
 - ☒ 4. JEORE

Q.10 Based on the English alphabetical order, three of the following four letter-clusters are alike in a certain way and thus form a group. Which letter-cluster DOES NOT belong to that group?
(Note: The odd one out is not based on the number of consonants/vowels or their position in the letter-cluster.)

- Ans
- ☒ 1. LOU
 - ☒ 2. BEK
 - ☒ 3. HKQ
 - ☒ 4. OIG

Q.11 A paper is folded and cut as shown below. How will it appear when unfolded?



Ans

- ☒ 1.
- ☒ 2.
- ☒ 3.
- ☒ 4.

Q.12 Seven people, G, H, I, J, K, L and M, are sitting in a row, facing north(but not necessarily in the same order) . Only G sits to the left of J. Only four people sit between G and H. Only K sits between L and I, and L is not an immediate neighbour of H. How many people sit between M and J?

- Ans**
- ✔ 1. Four
 - ✗ 2. Two
 - ✗ 3. One
 - ✗ 4. Three

Q.13 In a certain code language, 'LTRH' is coded as '58' and 'NBZW' is coded as '65'. How is 'GSCE' coded in the given language?

- Ans**
- ✔ 1. 34
 - ✗ 2. 40
 - ✗ 3. 31
 - ✗ 4. 39

Q.14 What will come in the place of the question mark (?) in the following equation, if '+' and 'x' are interchanged and '-' and '÷' are interchanged?

$28 - 4 \times 12 \div 5 + 3 = ?$

- Ans**
- ✔ 1. 4
 - ✗ 2. 1
 - ✗ 3. 14
 - ✗ 4. 9

Q.15 What should come in place of the question mark (?) in the given series based on the English alphabetical order?

MAN, OAP, QAR, ? , UAV

- Ans**
- ✗ 1. AST
 - ✗ 2. STA
 - ✔ 3. SAT
 - ✗ 4. SBT

Q.16 E, F, G, H, K, L and N are sitting around a circular table facing the centre (but not necessarily in the same order) .Only three people sit between H and N when counted from the left of H. Only three people sit between L and E when counted from the right of E. K sits to the immediate right of L. F is an immediate neighbour of E as well as N. Who sits second to the right of G?

- Ans**
- ✗ 1. N
 - ✗ 2. E
 - ✗ 3. L
 - ✔ 4. K

Q.17 The position(s) of how many letters will remain unchanged if each of the letters in the word REVERSAL is arranged in the reverse English alphabetical order?

- Ans**
- ✔ 1. Zero
 - ✗ 2. Three
 - ✗ 3. Two
 - ✗ 4. One

Q.18 Read the given statements and conclusions carefully. Assuming that the information given in the statements is true, even if it appears to be at variance with commonly known facts, decide which of the given conclusions logically follow(s) from the statements.
Statements:
All salads are appetizers.
All salads are food.
All food are rice.
Conclusions:
(I): All salads are rice.
(II): Some foods are appetizers.

- Ans**
- ✔ 1. Both conclusions (I) and (II) follow.
 - ✗ 2. Only conclusion (II) follows.
 - ✗ 3. Only conclusion (I) follows.
 - ✗ 4. Neither conclusion (I) nor (II) follows.

Q.19 Identify the figure given in the options which when put in place of the question mark (?) will logically complete the series.



Ans

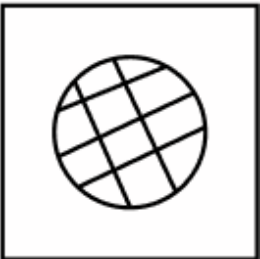
✗ 1.



✔ 2.



✗ 3.



✗ 4.



Q.20 GD 34 is related to HE 24 in a certain way. In the same way, CJ 12 is related to DK 2. To which of the given options is XV 56 related, following the same logic?

- Ans**
- ☐ 1. YX 46
 - ☒ 2. YW 46
 - ☐ 3. XW 46
 - ☐ 4. YW 47

Section : **Part-B-General Knowledge and General awareness**

Q.1 For which country did the former cricketer Roger Binny play cricket?

- Ans**
- ☐ 1. New Zealand
 - ☐ 2. Australia
 - ☒ 3. India
 - ☐ 4. England

Q.2 In June 2024, Yusuf Pathan, a former cricketer, won the Lok Sabha seat in Baharampur; which state was this constituency located in?

- Ans**
- ☒ 1. West Bengal
 - ☐ 2. Uttar Pradesh
 - ☐ 3. Uttarakhand
 - ☐ 4. Tripura

Q.3 A pyranometer is a _____ measuring instrument, commonly used for climate research or monitoring weather performance.

- Ans**
- ☒ 1. solar irradiance
 - ☐ 2. atmospheric pressure
 - ☐ 3. wind speed
 - ☐ 4. cloud ceiling

Q.4 At which of the following places was the final match of the T20 Blind Cricket World Cup 2022 held?

- Ans**
- ☐ 1. Holkar Stadium, Indore
 - ☐ 2. Narendra Modi Stadium, Ahmedabad
 - ☐ 3. Wankhede Stadium, Mumbai
 - ☒ 4. M. Chinnaswamy Stadium, Bengaluru

Q.5 Which Article of the Indian Constitution outlines the principle of just and humane conditions of work?

- Ans**
- ☐ 1. Article 46
 - ☒ 2. Article 42
 - ☐ 3. Article 48
 - ☐ 4. Article 41

Q.6 What was the role of the prime minister in the planning commission?

- Ans**
- ☐ 1. Secretary
 - ☐ 2. Dialogue partner
 - ☒ 3. Ex-Officio chairman
 - ☐ 4. Ex-Officio member

Q.7	Which of the following is NOT responsible for investigating complaints of violations of human rights in India?
Ans	<div><div><div>✖</div><div>1. National Human Rights Commission of India</div></div><div><div>✖</div><div>2. National Commission for Women</div></div><div><div>✖</div><div>3. National Commission for Scheduled Castes</div></div><div><div>✔</div><div>4. International Human Rights Commission</div></div></div>
Q.8	In which of the following years was the Treaty of Bassein signed between the British East India Company and Baji Rao II, the Maratha Peshwa?
Ans	<div><div><div>✖</div><div>1. 1835</div></div><div><div>✔</div><div>2. 1802</div></div><div><div>✖</div><div>3. 1824</div></div><div><div>✖</div><div>4. 1818</div></div></div>
Q.9	Two objects A and B of mass 2 kg and 3 kg, respectively, were dropped from different heights. A took 5 second and B took 3 seconds to touch the ground. What is the ratio of their kinetic energy with which they hit the ground?
Ans	<div><div><div>✖</div><div>1. 10/9</div></div><div><div>✖</div><div>2. 2/3</div></div><div><div>✔</div><div>3. 50/27</div></div><div><div>✖</div><div>4. 5/3</div></div></div>
Q.10	Which organic leavener is used in the baking industry to make bread, pastries and cakes?
Ans	<div><div><div>✔</div><div>1. Yeasts</div></div><div><div>✖</div><div>2. Molds</div></div><div><div>✖</div><div>3. Smuts</div></div><div><div>✖</div><div>4. Rusts</div></div></div>
Q.11	Which of the following Union Ministries introduced the Water (Prevention and Control of Pollution) Amendment Bill, 2024, in the Parliament in February 2024?
Ans	<div><div><div>✖</div><div>1. Ministry of Agriculture & Farmers' Welfare</div></div><div><div>✖</div><div>2. Ministry of Consumer Affairs, Food and Public Distribution</div></div><div><div>✔</div><div>3. Ministry of Environment, Forest and Climate Change</div></div><div><div>✖</div><div>4. Ministry of Civil Aviation</div></div></div>
Q.12	During which period were coal mines nationalised in India?
Ans	<div><div><div>✖</div><div>1. 1961-1965</div></div><div><div>✖</div><div>2. 1966-1970</div></div><div><div>✔</div><div>3. 1971-1975</div></div><div><div>✖</div><div>4. 1976-1980</div></div></div>
Q.13	Which of the following classical dances uses the 'pung' as the most important instrument?
Ans	<div><div><div>✖</div><div>1. Kathakali</div></div><div><div>✖</div><div>2. Odishi</div></div><div><div>✖</div><div>3. Kathak</div></div><div><div>✔</div><div>4. Manipuri</div></div></div>

Q.14 Dalchand Sharma is an eminent Pakhawaj exponent of which of the following gharanas?

- Ans**
- ☒ 1. Rampur - Sahaswan
 - ☒ 2. Nathdwara
 - ☒ 3. Atrauli - Jaipur
 - ☒ 4. Lucknow

Q.15 Which industry is involved in the extraction of raw materials from nature?

- Ans**
- ☒ 1. Service industry
 - ☒ 2. Extractive industry
 - ☒ 3. Manufacturing industry
 - ☒ 4. Construction industry

Q.16 Which Ummathat folk dancer was awarded the Padma Shri in March 2023?

- Ans**
- ☒ 1. Vani Jairam
 - ☒ 2. Suman Kalyanpur
 - ☒ 3. Subhadra Devi
 - ☒ 4. Rani Machaiah

Q.17 On Republic Day 2023, which country’s contingent marched alongside the Indian troops?

- Ans**
- ☒ 1. Germany
 - ☒ 2. Egypt
 - ☒ 3. Japan
 - ☒ 4. France

Q.18 How many times has the Ganga River been mentioned in the Rigveda?

- Ans**
- ☒ 1. 4
 - ☒ 2. 3
 - ☒ 3. 2
 - ☒ 4. 1

Q.19 Garib Kalyan Rojgar Yojana was launched in 2020 by the Government of India to provide work for _____ days.

- Ans**
- ☒ 1. 130
 - ☒ 2. 125
 - ☒ 3. 115
 - ☒ 4. 120

Q.20 In which of the following countries does the Brahmaputra River NOT flow?

- Ans**
- ☒ 1. China
 - ☒ 2. Bangladesh
 - ☒ 3. Nepal
 - ☒ 4. India

Q.1	Find the value of $\left[(63 \div 9) \times \left\{ \frac{14}{7} + \frac{19}{1} \times (7 - 6) \right\} \right]$
Ans	<div><div><div>✗ 1. 150</div><div>✗ 2. 148</div><div>✗ 3. 159</div><div>✓ 4. 147</div></div></div>
Q.2	X is a greatest three-digit number exactly divisible by 12, 20, and 25. The sum of the digits of X is:
Ans	<div><div><div>✗ 1. 5</div><div>✓ 2. 9</div><div>✗ 3. 7</div><div>✗ 4. 8</div></div></div>
Q.3	A retailer buys 12 pairs of shoes for ₹22,400. His overhead expenses are ₹1,600. If he earns ₹28,500 from the sale of these 12 pair of shoes, determine his profit percentage.
Ans	<div><div><div>✗ 1. 20%</div><div>✗ 2. 17.5%</div><div>✗ 3. 19.25%</div><div>✓ 4. 18.75%</div></div></div>
Q.4	4 men and 3 women finish a job in 6 days, and 5 men and 7 women can do the same job in 4 days. How long will 8 men and 6 women take to do the same job?
Ans	<div><div><div>✗ 1. 6 days</div><div>✓ 2. 3 days</div><div>✗ 3. 9 days</div><div>✗ 4. 8 days</div></div></div>
Q.5	The price of fuel decreases by 40%, 50% and 15% in three successive months, but increases by 40% in the fourth month. What is the percentage increase/decrease in the price of fuel in the fourth month as compared to its original price?
Ans	<div><div><div>✓ 1. Decreases by 64.3%</div><div>✗ 2. Increases by 65.91%</div><div>✗ 3. Increases by 65.47%</div><div>✗ 4. Decreases by 69.09%</div></div></div>
Q.6	A car covers four successive 8 km distances at speeds of 12 km/hr, 18 km/hr, 24 km/hr and 36 km/hr, respectively. Its average speed (in km/hr) over this distance is:
Ans	<div><div><div>✓ 1. 19.2</div><div>✗ 2. 20</div><div>✗ 3. 18</div><div>✗ 4. 22.5</div></div></div>
Q.7	The ratio of the walking speeds of A and B is 3 : 5. If B takes 18 minutes to cover a certain distance, how much time will A take to cover the same distance?
Ans	<div><div><div>✗ 1. 25 min</div><div>✗ 2. 20 min</div><div>✗ 3. 33 min</div><div>✓ 4. 30 min</div></div></div>

Q.8	The third proportional to x and x + 100 is 405, find the value of x (where x > 100).
Ans	<div><div><div>✖</div><div>1. 225</div></div><div><div>✔</div><div>2. 125</div></div><div><div>✖</div><div>3. 115</div></div><div><div>✖</div><div>4. 180</div></div></div>
Q.9	Chetan travels from City A to City B. If Chetan drives his car at $\frac{3}{4}$ of his normal speed, then he reaches City B 33 minutes late. Find the time (in minutes) that Chetan would have taken to travel from City A to City B if he drove at his normal speed.
Ans	<div><div><div>✖</div><div>1. 97</div></div><div><div>✖</div><div>2. 100</div></div><div><div>✔</div><div>3. 99</div></div><div><div>✖</div><div>4. 93</div></div></div>
Q.10	If the radius of a hemisphere is $13\sqrt{3}$ cm, find its curved surface area.
Ans	<div><div><div>✔</div><div>1. $1014\pi\text{ cm}^2$</div></div><div><div>✖</div><div>2. $1044\pi\text{ cm}^2$</div></div><div><div>✖</div><div>3. $1024\pi\text{ cm}^2$</div></div><div><div>✖</div><div>4. $1034\pi\text{ cm}^2$</div></div></div>
Q.11	If at same rate of interest, in 2 years, the simple interest is ₹40 and compound interest is ₹65, then what is the principal (in ₹)?
Ans	<div><div><div>✖</div><div>1. 11</div></div><div><div>✔</div><div>2. 16</div></div><div><div>✖</div><div>3. 20</div></div><div><div>✖</div><div>4. 9</div></div></div>
Q.12	The average age of 39 students of a class is 39 years. If the age of the teacher is also included, the average age of the whole group becomes 40 years. The age (in years) of the teacher is:
Ans	<div><div><div>✖</div><div>1. 81</div></div><div><div>✖</div><div>2. 77</div></div><div><div>✔</div><div>3. 79</div></div><div><div>✖</div><div>4. 83</div></div></div>
Q.13	Evaluate: $32 \div 8 \times 4 - 3 \times 4$
Ans	<div><div><div>✖</div><div>1. 3</div></div><div><div>✖</div><div>2. 7</div></div><div><div>✔</div><div>3. 4</div></div><div><div>✖</div><div>4. 6</div></div></div>
Q.14	If the selling price of five Bluetooth devices is ₹14,430 after allowing a discount of 26% on the marked price, then the marked price of one device is:
Ans	<div><div><div>✖</div><div>1. ₹3,000</div></div><div><div>✔</div><div>2. ₹3,900</div></div><div><div>✖</div><div>3. ₹3,365</div></div><div><div>✖</div><div>4. ₹2,886</div></div></div>

Q.15 If the third proportional of $3x^2$ and $4xy$ is 48, then the positive value of y is:

- Ans**
- ☐ 1. 6
 - ☐ 2. 2
 - ☐ 3. 9
 - ☒ 4. 3

Q.16 The price of a computer is ₹22,200. What will be the price of the computer after reduction of 25%?

- Ans**
- ☐ 1. ₹16,550
 - ☐ 2. ₹16,750
 - ☒ 3. ₹16,650
 - ☐ 4. ₹16,450

Q.17 Find the value of $\left[(42 \div 7) \times \left\{ \frac{42}{3} + \frac{19}{4} \times (8 - 4) \right\} \right]$

- Ans**
- ☐ 1. 180
 - ☐ 2. 209
 - ☒ 3. 198
 - ☐ 4. 202

Q.18 Ketan sold 151 chairs and had a gain equal to the selling price of 51 chairs. What is his profit percentage?

- Ans**
- ☐ 1. 56%
 - ☐ 2. 46%
 - ☐ 3. 61%
 - ☒ 4. 51%

Q.19 Amit invests a sum of ₹5400 and Gopal invests a sum of ₹9400 at the same rate of simple interest per annum. If, at the end of 3 years, Gopal gets ₹840 more interest than Amit, then find the rate of interest per annum (in percentage).

- Ans**
- ☐ 1. 5
 - ☒ 2. 7
 - ☐ 3. 9
 - ☐ 4. 6

Q.20 When difference between compound and simple interest for three years is ₹228 at 4% interest per annum, the principal is ₹_____

- Ans**
- ☒ 1. 46875
 - ☐ 2. 48075
 - ☐ 3. 47295
 - ☐ 4. 46300

Section : **Part-D-English**

Q.1 Select the INCORRECTLY spelt word.

- Ans**
- ☐ 1. Grateful
 - ☒ 2. Accross
 - ☐ 3. Navigate
 - ☐ 4. Persuade

Q.2

Select the most appropriate ANTONYM of the given word.
Snug

Ans

1. Aromatic

2. Uncomfortable

3. Persistent

4. Ample

Q.3

Select the most appropriate option to fill in the blank.

The scientist's _____ research into renewable energy sources is expected to revolutionize the industry.

Ans

1. meticulous

2. hasty

3. cursory

4. superficial

Q.4

The given sentence is divided into four segments. Select the option that has the segment with an adverbial usage error.

Mrs. Jennifer, / our English professor, / told us that the wind / reluctantly rustled the branches.

Ans

1. Mrs. Jennifer,

2. our English professor,

3. told us that the wind

4. reluctantly rustled the branches.

Q.5

In the sentence, 'The room was filled with an eerie silence after the announcement', what is a synonym of the word 'eerie'?

Ans

1. Mysterious

2. Soothing

3. Comfortable

4. Tense

Q.6

Select the most appropriate ANTONYM of the given word.
Establish

Ans

1. Enlarge

2. Charge

3. Alert

4. Demolish

Q.7

Select the most appropriate option to fill in the blank and make the sentence meaningful.

You must refrain _____ unpleasant conversations.

Ans

1. by

2. from

3. with

4. to

Q.8 Select the most appropriate option to fill in the blank and complete the given idiom.

Although our backgrounds are different, we sail in the _____ boat.

- Ans**
- ☒ 1. biggest
 - ☒ 2. old
 - ☒ 3. different
 - ☒ 4. same

Q.9 Select the most appropriate option that can substitute the highlighted word segment in the given sentence. If the sentence is grammatically correct, select 'No correction'.

The boy play football since he has come from school.

- Ans**
- ☒ 1. has been playing
 - ☒ 2. was playing
 - ☒ 3. No correction
 - ☒ 4. plays

Q.10 Identify the INCORRECTLY spelt word in the given sentence.

The vicissitudes of life can be incredulus, but the perseverance and unyielding tenacity of the human spirit remain indomitable.

- Ans**
- ☒ 1. indomitable
 - ☒ 2. incredulus
 - ☒ 3. unyielding
 - ☒ 4. vicissitudes

Q.11 Select the most appropriate meaning of the given word.

Ambiguous

- Ans**
- ☒ 1. Uncertain or open to interpretation
 - ☒ 2. Clear and straightforward
 - ☒ 3. Harsh and severe
 - ☒ 4. Funny and humorous

Q.12 Select the most appropriate option to fill in the blank. Determine the collocation through the sentence.

Resolution is the courage to act despite the _____ of failure.

- Ans**
- ☒ 1. hate
 - ☒ 2. love
 - ☒ 3. hope
 - ☒ 4. fear

Q.13 Select the most appropriate synonym of the underlined word.
The explorer ventured into the uncharted territory in search of adventure.

- Ans**
- ☒ 1. Familiar
 - ☒ 2. Undiscovered
 - ☒ 3. Explored
 - ☒ 4. Mapped

Q.14 Select the most appropriate option that can substitute the underlined word in the given sentence.

Give the cake to which asks for it first.

- Ans
- ☒ 1. whoever
 - ☐ 2. whichever
 - ☐ 3. whomever
 - ☐ 4. whom so ever

Q.15 The following sentence has been divided into parts. Select the part that contains a grammatical error from the given options. If you don't find any error, mark 'No error' as your answer.

A tiger be strayed into a village / at Gosaba in the Sundarbans, entered a / cowshed and killed three cows last night.

- Ans
- ☐ 1. at Gosaba in the Sundarbans, entered a
 - ☒ 2. A tiger be strayed into a village
 - ☐ 3. cowshed and killed three cows last night.
 - ☐ 4. No error.

Comprehension:

In the following passage, some words have been deleted. Read the passage carefully and select the most appropriate option to fill in each blank.

Effective time management is (1) _____ for success. By prioritising tasks, individuals can enhance (2) _____ and reduce stress. Planning allows for a balance (3) _____ work and personal life. Studies show that those who manage their time (4) _____ are more likely to achieve their goals. It is a skill (5) _____ positively impacts both professional and personal aspects of life.

SubQuestion No : 16

Q.16 Select the most appropriate option to fill in blank no. 1.

- Ans
- ☐ 1. optional
 - ☒ 2. crucial
 - ☐ 3. desperate
 - ☐ 4. trivial

Comprehension:

In the following passage, some words have been deleted. Read the passage carefully and select the most appropriate option to fill in each blank.

Effective time management is (1) _____ for success. By prioritising tasks, individuals can enhance (2) _____ and reduce stress. Planning allows for a balance (3) _____ work and personal life. Studies show that those who manage their time (4) _____ are more likely to achieve their goals. It is a skill (5) _____ positively impacts both professional and personal aspects of life.

SubQuestion No : 17

Q.17 Select the most appropriate option to fill in blank no. 2.

- Ans
- ☐ 1. capacity
 - ☒ 2. productivity
 - ☐ 3. production
 - ☐ 4. fertility

Comprehension:

In the following passage, some words have been deleted. Read the passage carefully and select the most appropriate option to fill in each blank.

Effective time management is (1) _____ for success. By prioritising tasks, individuals can enhance (2) _____ and reduce stress. Planning allows for a balance (3) _____ work and personal life. Studies show that those who manage their time (4) _____ are more likely to achieve their goals. It is a skill (5) _____ positively impacts both professional and personal aspects of life.

SubQuestion No : 18

Q.18 Select the most appropriate option to fill in blank no. 3.

- Ans
1. around

2. between

3. with

4. beyond

Comprehension:

In the following passage, some words have been deleted. Read the passage carefully and select the most appropriate option to fill in each blank.

Effective time management is (1) _____ for success. By prioritising tasks, individuals can enhance (2) _____ and reduce stress. Planning allows for a balance (3) _____ work and personal life. Studies show that those who manage their time (4) _____ are more likely to achieve their goals. It is a skill (5) _____ positively impacts both professional and personal aspects of life.

SubQuestion No : 19

Q.19 Select the most appropriate option to fill in blank no. 4.

- Ans
1. excitedly

2. strongly

3. effectively

4. efficient

Comprehension:

In the following passage, some words have been deleted. Read the passage carefully and select the most appropriate option to fill in each blank.

Effective time management is (1) _____ for success. By prioritising tasks, individuals can enhance (2) _____ and reduce stress. Planning allows for a balance (3) _____ work and personal life. Studies show that those who manage their time (4) _____ are more likely to achieve their goals. It is a skill (5) _____ positively impacts both professional and personal aspects of life.

SubQuestion No : 20

Q.20 Select the most appropriate option to fill in blank no. 5.

- Ans
1. what

2. those

3. whereby

4. which

Section : Part-D-Hindi

Q.1 माँ ने मुझे दही लाने को कहा है। इस वाक्य में दही शब्द का तत्सम रूप प्रयुक्त कर वाक्य पूर्ण कीजिए।

- Ans
1. माँ ने मुझे दुग्ध लाने को कहा है।

2. माँ ने मुझे पय लाने को कहा है।

3. माँ ने मुझे क्षीर लाने को कहा है।

4. माँ ने मुझे दही लाने को कहा है।

Q.2	"भारत ने इस वर्ष यूरोप को रोहँ किया।" रिक्त स्थान को पूरने के लिए उचित सार्थक शब्द है -
Ans	<div><div>✓</div>1. निर्यात</div> <div><div>✗</div>2. उत्कर्ष</div> <div><div>✗</div>3. संयोग</div> <div><div>✗</div>4. निर्माण</div>
Q.3	आज कारखाने का श्रीगणेश होगा। रेखांकित शब्द के विलोम शब्द का चयन कीजिए।
Ans	<div><div>✓</div>1. इतिश्री</div> <div><div>✗</div>2. हानि</div> <div><div>✗</div>3. कमी</div> <div><div>✗</div>4. बंद</div>
Q.4	निम्नलिखित वाक्यांश के लिए सार्थक शब्द चुनिए - जिसके आर पार देखा जा सकता हो
Ans	<div><div>✗</div>1. पारंगत</div> <div><div>✗</div>2. अपारदर्शी</div> <div><div>✗</div>3. पारलौकिक</div> <div><div>✓</div>4. पारदर्शी</div>
Q.5	निम्नलिखित वाक्य के किस भाग में त्रुटि है? अब हमें उनका धन्यवाद देना चाहिए।
Ans	<div><div>✗</div>1. उनका</div> <div><div>✗</div>2. चाहिए</div> <div><div>✗</div>3. अब हमें</div> <div><div>✓</div>4. धन्यवाद देना</div>
Q.6	निम्नलिखित मुहावरे का उचित अर्थ लिखें। अक्ल के अंधे
Ans	<div><div>✗</div>1. याददाश्त खोना</div> <div><div>✗</div>2. पागल होना</div> <div><div>✗</div>3. तनाव में आना</div> <div><div>✓</div>4. बुद्धिहीन</div>
Q.7	निम्नलिखित में से एकवचन की दृष्टि से शुद्ध वाक्य है-
Ans	<div><div>✗</div>1. कुछ महिलाएँ बाज़ार जा रही हैं।</div> <div><div>✗</div>2. ये दोनों भाई बड़े समझदार हैं।</div> <div><div>✓</div>3. तुम्हें यह आदत छोड़ देनी चाहिए।</div> <div><div>✗</div>4. मैंने नए कपड़े खरीदे।</div>
Q.8	दिए गए शब्द का उचित विलोम शब्द चुनिए- अथ
Ans	<div><div>✗</div>1. अति</div> <div><div>✓</div>2. इति</div> <div><div>✗</div>3. अथा</div> <div><div>✗</div>4. इत्यादि</div>

Q.9	निम्नलिखित वाक्यांश हेतु सार्थक शब्द बताएं। बिना वेतन के कार्य करने वाला
Ans	<div><div><div>✖</div><div>1. वेतन सहित</div></div><div><div>✔</div><div>2. अवैतनिक</div></div><div><div>✖</div><div>3. अन्य वैतनिक</div></div><div><div>✖</div><div>4. वैतनिक</div></div></div>
Q.10	मुहावरे और उसके अर्थ के लिए सही विकल्प चुनें। उल्टी गंगा बहाना
Ans	<div><div><div>✖</div><div>1. उलटा चलना</div></div><div><div>✖</div><div>2. प्रतीकूल कार्य</div></div><div><div>✖</div><div>3. गंगा की तरफ जाना</div></div><div><div>✔</div><div>4. प्रतिकूल कार्य</div></div></div>
Q.11	निम्नलिखित विकल्पों में से कौन सा एक वाक्य वर्तनी की दृष्टि से अशुद्ध है?
Ans	<div><div><div>✖</div><div>1. पुस्तकों का एक सूची पत्र दे दें।</div></div><div><div>✖</div><div>2. वस्तुओं की कीमतें बढ़ रहीं हैं।</div></div><div><div>✖</div><div>3. वह अब नीरोग है।</div></div><div><div>✔</div><div>4. आज रेणू का व्याख्यान होगा।</div></div></div>
Q.12	दिए गए शब्द का सही पर्यायवाची शब्द पहचानिए - नदी
Ans	<div><div><div>✔</div><div>1. सरिता</div></div><div><div>✖</div><div>2. कविता</div></div><div><div>✖</div><div>3. सुनीता</div></div><div><div>✖</div><div>4. सरोज</div></div></div>
Q.13	निम्नलिखित विकल्पों में से कौन सा एक विलोम युग्म सही नहीं है?
Ans	<div><div><div>✖</div><div>1. करुणा-निष्ठुरता</div></div><div><div>✖</div><div>2. क्रोध-क्षमा</div></div><div><div>✖</div><div>3. ऐहिक-पारलौकिक</div></div><div><div>✔</div><div>4. ऐहिक-ऐश्वर्य</div></div></div>
Q.14	निम्नलिखित वाक्यांश हेतु सार्थक शब्द का चुनाव करें। जो संविधान के प्रतिकूल हो।
Ans	<div><div><div>✖</div><div>1. संविधान से संबन्धित</div></div><div><div>✖</div><div>2. अनुकूल</div></div><div><div>✔</div><div>3. असंवैधानिक</div></div><div><div>✖</div><div>4. संवैधानिक</div></div></div>
Q.15	रेखांकित शब्द के स्थान पर सर्वोचित विकल्प चुनिए। उसका घर जलकर राख हो गया इसलिए वह <u>मालामाल</u> हो गया।
Ans	<div><div><div>✖</div><div>1. कैटीला</div></div><div><div>✔</div><div>2. कंगाल</div></div><div><div>✖</div><div>3. कंजूस</div></div><div><div>✖</div><div>4. कंकाल</div></div></div>

Comprehension:

गद्यांश के आधार पर प्रश्न का उत्तर दें।
भरत अयोध्या के राजा _____ के पुत्र थे। इनकी माता का नाम कैकेयी था। कैकेयी ने राजा दशरथ से भरत को राजगद्दी और राम को _____ के वनवास का वरदान माँगा। ननिहाल से लौटने पर जब राजा की मृत्यु के कारण का उनको पता चला तो लज्जा के कारण उनका मुख पीला पड़ गया और उन्होंने अपनी माता को खूब फटकारा। सब मंत्रियों व रानियों ने सिंहासन पर बैठने की प्रार्थना की परन्तु वे गद्दी पर नहीं बैठे। वे वन में राम को लेने गए। जब रामचंद्र जी नहीं लौटे तो वे उनकी _____ लेकर लौट आए। खड़ाऊंओं को सिंहासन पर रखकर राम के _____ के रूप में शासन का काम करने लगे। संसार में ऐसा _____ दूसरा देखने को नहीं मिलता।

SubQuestion No : 16

Q.16 'भरत अयोध्या के राजा _____ के पुत्र थे।'
गद्यांश की पंक्ति में रिक्त स्थान की पूर्ति हेतु उपयुक्त शब्द होगा-

- Ans
- ☒

1. मनु
- ☒

2. अज
- ☒

3. जनक
- ☒

4. दशरथ

Comprehension:

गद्यांश के आधार पर प्रश्न का उत्तर दें।
भरत अयोध्या के राजा _____ के पुत्र थे। इनकी माता का नाम कैकेयी था। कैकेयी ने राजा दशरथ से भरत को राजगद्दी और राम को _____ के वनवास का वरदान माँगा। ननिहाल से लौटने पर जब राजा की मृत्यु के कारण का उनको पता चला तो लज्जा के कारण उनका मुख पीला पड़ गया और उन्होंने अपनी माता को खूब फटकारा। सब मंत्रियों व रानियों ने सिंहासन पर बैठने की प्रार्थना की परन्तु वे गद्दी पर नहीं बैठे। वे वन में राम को लेने गए। जब रामचंद्र जी नहीं लौटे तो वे उनकी _____ लेकर लौट आए। खड़ाऊंओं को सिंहासन पर रखकर राम के _____ के रूप में शासन का काम करने लगे। संसार में ऐसा _____ दूसरा देखने को नहीं मिलता।

SubQuestion No : 17

Q.17 'कैकेयी ने राजा दशरथ से भरत को राजगद्दी और राम को _____ के वनवास का वरदान माँगा।'
गद्यांश की पंक्ति में रिक्त स्थान की पूर्ति हेतु उपयुक्त शब्द होगा-

- Ans
- ☒

1. चौदह वर्ष
- ☒

2. बारह वर्ष
- ☒

3. दस वर्ष
- ☒

4. चार वर्ष

Comprehension:

गद्यांश के आधार पर प्रश्न का उत्तर दें।
भरत अयोध्या के राजा _____ के पुत्र थे। इनकी माता का नाम कैकेयी था। कैकेयी ने राजा दशरथ से भरत को राजगद्दी और राम को _____ के वनवास का वरदान माँगा। ननिहाल से लौटने पर जब राजा की मृत्यु के कारण का उनको पता चला तो लज्जा के कारण उनका मुख पीला पड़ गया और उन्होंने अपनी माता को खूब फटकारा। सब मंत्रियों व रानियों ने सिंहासन पर बैठने की प्रार्थना की परन्तु वे गद्दी पर नहीं बैठे। वे वन में राम को लेने गए। जब रामचंद्र जी नहीं लौटे तो वे उनकी _____ लेकर लौट आए। खड़ाऊंओं को सिंहासन पर रखकर राम के _____ के रूप में शासन का काम करने लगे। संसार में ऐसा _____ दूसरा देखने को नहीं मिलता।

SubQuestion No : 18

Q.18 'जब रामचंद्र जी नहीं लौटे तो वे उनकी _____ लेकर लौट आए।'
गद्यांश की पंक्ति में रिक्त स्थान की पूर्ति हेतु उपयुक्त शब्द होगा-

- Ans
- ☒

1. बाण
- ☒

2. धनुष
- ☒

3. खड़ाऊं
- ☒

4. वस्त्र

Comprehension:

गद्यांश के आधार पर प्रश्न का उत्तर दें।
भरत अयोध्या के राजा _____ के पुत्र थे। इनकी माता का नाम कैकेयी था। कैकेयी ने राजा दशरथ से भरत को राजगद्दी और राम को _____ के वनवास का वरदान माँगा। ननिहाल से लौटने पर जब राजा की मृत्यु के कारण का उनको पता चला तो लज्जा के कारण उनका मुख पीला पड़ गया और उन्होंने अपनी माता को खूब फटकारा। सब मंत्रियों व रानियों ने सिंहासन पर बैठने की प्रार्थना की परन्तु वे गद्दी पर नहीं बैठे। वे वन में राम को लेने गए। जब रामचंद्र जी नहीं लौटे तो वे उनकी _____ लेकर लौट आए। खड़ाऊँओं को सिंहासन पर रखकर राम के _____ के रूप में शासन का काम करने लगे। संसार में ऐसा _____ दूसरा देखने को नहीं मिलता।

SubQuestion No : 19

Q.19 'राम के _____ के रूप में शासन का काम करने लगे।'
गद्यांश की पंक्ति में रिक्त स्थान की पूर्ति हेतु उपयुक्त शब्द होगा-

- Ans
- ☒ 1. स्वामी
 - ☒ 2. भाई
 - ☒ 3. उत्तराधिकारी
 - ☒ 4. प्रतिनिधि

Comprehension:

गद्यांश के आधार पर प्रश्न का उत्तर दें।
भरत अयोध्या के राजा _____ के पुत्र थे। इनकी माता का नाम कैकेयी था। कैकेयी ने राजा दशरथ से भरत को राजगद्दी और राम को _____ के वनवास का वरदान माँगा। ननिहाल से लौटने पर जब राजा की मृत्यु के कारण का उनको पता चला तो लज्जा के कारण उनका मुख पीला पड़ गया और उन्होंने अपनी माता को खूब फटकारा। सब मंत्रियों व रानियों ने सिंहासन पर बैठने की प्रार्थना की परन्तु वे गद्दी पर नहीं बैठे। वे वन में राम को लेने गए। जब रामचंद्र जी नहीं लौटे तो वे उनकी _____ लेकर लौट आए। खड़ाऊँओं को सिंहासन पर रखकर राम के _____ के रूप में शासन का काम करने लगे। संसार में ऐसा _____ दूसरा देखने को नहीं मिलता।

SubQuestion No : 20

Q.20 'संसार में ऐसा _____ दूसरा देखने को नहीं मिलता।'
गद्यांश की पंक्ति में रिक्त स्थान की पूर्ति हेतु उपयुक्त शब्द होगा-'

- Ans
- ☒ 1. कृतघ्न
 - ☒ 2. तिरस्कार
 - ☒ 3. परोपकार
 - ☒ 4. त्याग