

Constable GD in Central Armed Police Forces CAPFs SSF Rifleman GD in Assam Rifles Examination 2024

Exam Date	23/02/2024
Exam Time	2:30 PM - 3:30 PM
Subject	Constable GD Examination 2024

Section : Part-A-General Intelligence and Reasoning

Q.1 Five friends P, B, C, G and H are sitting around a circular table facing towards the centre. B is sitting to the immediate left of C. G and H are not the immediate neighbour of C. H is sitting second to the right of P. Who is sitting on the immediate left of C?

- Ans**
- ☐ 1. H
 - ☐ 2. G
 - ☒ 3. B
 - ☐ 4. P

Q.2 Which one set of letters when sequentially placed at the gaps in the given letter series shall complete it?
c _ d _ o _ c _ dcod

- Ans**
- ☐ 1. ocdd
 - ☐ 2. doco
 - ☐ 3. ooco
 - ☒ 4. ocdo

Q.3 Six family members P, Q, R, S, T, and U are seated at a circular table facing each other. S is to the immediate left of U, and Q is second to the left of S. P is second to the left of R. Who is the immediate neighbour of both U and P?

- Ans**
- ☐ 1. S
 - ☐ 2. P
 - ☐ 3. Q
 - ☒ 4. T

Q.4 In the following question, select the missing number from the given series.

49, 54, 41, 62, 33, 70, ?

- Ans**
- ☐ 1. 29
 - ☐ 2. 27
 - ☐ 3. 23
 - ☒ 4. 25

Q.5 By interchanging which two signs and two numbers (not digits) the equation will be correct?

$$7 \times 5 \div 6 + 2 - 4 = 16$$

- Ans
- ☒ 1. \times and \div , 2 and 4
 - ☒ 2. \times and $-$, 5 and 6
 - ☒ 3. $+$ and $-$, 6 and 2
 - ☒ 4. \div and $+$, 7 and 4

Q.6 Select the option that is related to the third word in the same way as the second word is related to the first word.
Cardiologist : Heart :: Nephrologist : ?

- Ans
- ☒ 1. Heart
 - ☒ 2. Kidneys
 - ☒ 3. Lungs
 - ☒ 4. Liver

Q.7 Pointing towards a photograph of a man, Rimi said, "He is the brother of my father's son". How man is related to Rimi?

- Ans
- ☒ 1. Father
 - ☒ 2. Sister
 - ☒ 3. Brother
 - ☒ 4. Mother

Q.8 In the following question, select the figure which can be placed at the sign of question mark (?) from the given alternatives.



- Ans
- ☒ 1.
 - ☒ 2.
 - ☒ 3.
 - ☒ 4.



Download SSC CGL, CHSL E-BOOKS

[CLICK HERE](#)

99, 116, 133, 150, 167, ?

- Ans
- ☒ 1. 190
 - ☒ 2. 192
 - ☒ 3. 184
 - ☒ 4. 188

Q.10 If a mirror is placed on the line AB, then out of the option figures which figure will be the right image of the question figure?



Ans

☒ 1.



☒ 2.



☒ 3.



☒ 4.



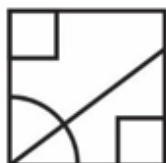
Download SSC CGL, CHSL E-BOOKS

[CLICK HERE](#)

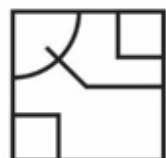


Ans

✗ 1.



✓ 2.



✗ 3.



✗ 4.



Q.12 Two positions of a dice are given below. What will come on the face opposite to the face containing 'K' on it?



Ans

✓ 1. M

✗ 2. Z

✗ 3. X

✗ 4. N



Download SSC CGL, CHSL E-BOOKS

[CLICK HERE](#)

1. TECHNOLOGY
2. TECHNICAL
3. TECHNICIAN
4. TECHNIQUE
5. TECHNOPHOBIA

Ans

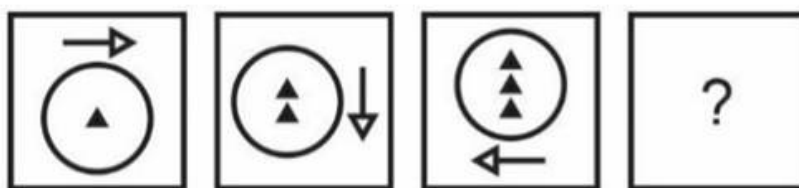
✗ 1. 2,4,1,3,5

✗ 2. 2,1,4,3,5

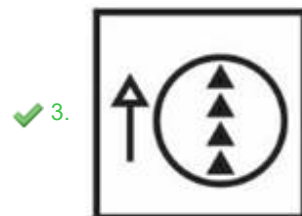
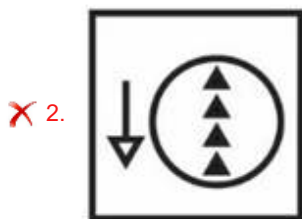
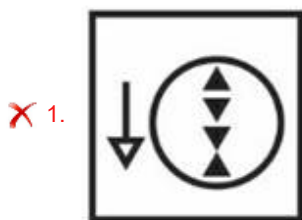
✓ 3. 2,3,4,1,5

✗ 4. 2,3,1,5,4

Q.14 In the following question, select the figure which can be placed at the sign of question mark (?) from the given alternatives.



Ans



Download SSC CGL, CHSL E-BOOKS

[CLICK HERE](#)

Q.15 Three Statements are given followed by two conclusions numbered I and II. Assuming the statements to be true, even if they seem to be at variance with commonly known facts, decide which of the conclusions logically follow(s) from the statements.

Statement I: All drums are guitars.

Statement II: All guitars are flutes.

Statement III: All flutes are sitars.

Conclusion I: Some drums are sitars.

Conclusion II: All sitars are guitars.

- Ans**
- ☒ 1. Only conclusion I follows
 - ☐ 2. Neither conclusion I nor II follows
 - ☐ 3. Only conclusion II follows
 - ☐ 4. Both conclusions I and II follow

Q.16 Select the option that is related to the fifth letter cluster in the same way as the fourth letter cluster is related to the third letter cluster and the second letter cluster is related to the first letter cluster.

AFFECT : FAFETC :: BRIGHT : RBIGTH :: EITHER : ?

- Ans**
- ☐ 1. IEHTRE
 - ☒ 2. IETHRE
 - ☐ 3. TEIERH
 - ☐ 4. ERHTEI

Q.17 Which of the following letter will replace the question mark (?) in the given series?

Y, T, P, M, K, ?

- Ans**
- ☐ 1. I
 - ☐ 2. H
 - ☐ 3. L
 - ☒ 4. J

Q.18 In a certain code language, 'BED' is coded as '120', 'FAT' is coded as '360'. What is the code for 'DBY' in that code language?

- Ans**
- ☐ 1. 400
 - ☐ 2. 500
 - ☒ 3. 600
 - ☐ 4. 450

Q.19 In a certain code language, if TABLE is coded as '80', CHAIR is coded as '78', then what will WINDOW be coded as?

- Ans**
- ☐ 1. 210
 - ☒ 2. 176
 - ☐ 3. 88
 - ☐ 4. 112

Q.20 Which two numbers should be interchanged to make the given equation correct?

$$8 + 7 \times 9 \div 14 - 3 = 10$$

- Ans
- ☐ 1. 3 and 9
 - ☐ 2. 8 and 7
 - ☒ 3. 8 and 9
 - ☐ 4. 14 and 10

Section : Part-B-General Knowledge and General awareness

Q.1 King Asoka of the Mauryan Empire was a follower of _____.

- Ans
- ☐ 1. Sikhism
 - ☒ 2. Buddhism
 - ☐ 3. Islam
 - ☐ 4. Jainism

Q.2 The Socio-Economic and Caste Census (SECC) 2011 (Rural) of India allows ranking of the households under 'Others' category based on their status on _____ deprivation parameters.

- Ans
- ☒ 1. seven
 - ☐ 2. nine
 - ☐ 3. five
 - ☐ 4. three

Q.3 During which religious event in India do devotees take a holy dip in the Ganges River, believing it washes away their sins, and perform various rituals at the riverbanks?

- Ans
- ☐ 1. Diwali
 - ☒ 2. Kumbh Mela
 - ☐ 3. Eid al-Fitr
 - ☐ 4. Navratri

Q.4 Which sport is played by the Indian sportsperson Janet Vidhi?

- Ans
- ☐ 1. Cricket
 - ☒ 2. Squash
 - ☐ 3. Archery
 - ☐ 4. Boxing

Q.5 Which one of the following statements regarding magnetic field is correct?

- Ans
- ☐ 1. Magnetic field lines are open curves
 - ☒ 2. Magnetic field lines are closed curves
 - ☐ 3. Magnetic field is a quantity that has no direction and magnitude
 - ☐ 4. two magnetic field lines are found to cross each other



Download SSC CGL, CHSL E-BOOKS

[CLICK HERE](#)

Q.6 Which union territory of India has the highest population density per 2011 census?

Ans

✓ 1. NCT of Delhi

✗ 2. Daman and Diu

✗ 3. Chandigarh

✗ 4. Ladakh

Q.7 _____ is an initiative of National Bal Bhavan (NBB) to identify the creative potential of children in four main streams and motivate them to pursue and enhance their creative potential. The evaluation and selection is a complex process and procedure which need constant refinement and inputs from creative artists and experts in various fields.

Ans

✓ 1. National Bal Shree honor

✗ 2. National Padma Shree honor

✗ 3. Shree honor

✗ 4. National Matru Shree honor

Q.8 With respect to money and banking, what does SLR stand for?

Ans

✗ 1. Statutory Legal Ratio

✓ 2. Statutory Liquidity Ratio

✗ 3. State Liquidity Ratio

✗ 4. State Legal Ratio

Q.9 Anant Maheshwari, the President of _____ India, has been appointed as the Chairperson of Nasscom for the period 2023-24.

Ans

✗ 1. TCS

✓ 2. Microsoft

✗ 3. Apple

✗ 4. Google

Q.10 Which of the following classical dance form is associated with Kerala?

Ans

✗ 1. Kathak

✗ 2. Odissi

✓ 3. Mohiniyattam

✗ 4. Sattriya

Q.11 The first five-year plan of India was based on which model?

Ans

✗ 1. Capitalist Model

✗ 2. Gadgil formula

✓ 3. Harrod-Domar Model

✗ 4. Mahalanobis Plan

Q.12 Which state's government has unveiled its plan to provide homes for over 47,000 impoverished residents in the state's rural areas as part of the inaugural phase of the "Mukhyamantri Gramin Awas NYAY Yojana"?

- Ans
- ✓ 1. Chhattisgarh
 - ✗ 2. Madhya Pradesh
 - ✗ 3. Tamil Nadu
 - ✗ 4. Maharashtra

Q.13 Which of the following five year plan of India aim was to make India a 'self-reliant' and 'self-generating' economy?

- Ans
- ✗ 1. Second five year Plan
 - ✓ 2. Third five year Plan
 - ✗ 3. First five year Plan
 - ✗ 4. Fourth five year Plan

Q.14 When was the first commonwealth games held?

- Ans
- ✗ 1. 1945
 - ✗ 2. 1935
 - ✓ 3. 1930
 - ✗ 4. 1926

Q.15 Who of the following was elected as President of the Constituent Assembly of India?

- Ans
- ✗ 1. Jawaharlal Nehru
 - ✗ 2. Sardar vallabhbhai Patel
 - ✓ 3. Rajendra Prasad
 - ✗ 4. Bhimrao Ambedkar

Q.16 Who is the presiding officer of the Rajya Sabha (Council of States) in India?

- Ans
- ✗ 1. Speaker
 - ✗ 2. President
 - ✗ 3. Prime Minister
 - ✓ 4. Vice President

Q.17 Who banned the tractor stunt in Punjab in 2023?

- Ans
- ✗ 1. Charanjit Singh Channi
 - ✗ 2. Sukhjinder Singh Randhawa
 - ✗ 3. Sukhbir Singh Badal
 - ✓ 4. Bhagwant Mann

Q.18 Pt. Bhimsen Joshi has received highest civilian award Bharat Ratna in which of the following year?

- Ans
- ✗ 1. 2002



Q.19 In long jump, the take-off has to be made from a _____ cm wide board one meter away from a pit.
 Ans ☒ 1. 15
☒ 2. 24
☒ 3. 12
☒ 4. 20

Q.20 Sardar Vallabhbhai Patel served as President of the Congress in _____.

Ans ☒ 1. 1931
☒ 2. 1935
☒ 3. 1921
☒ 4. 1925

Section : Part-C-Elementary Mathematics

Q.1 If $P : Q = 6 : 5$ and $Q : R = 3 : 4$, then what is the value of $Q : (P + R)$?

Ans ☒ 1. 15 : 37
☒ 2. 14 : 37
☒ 3. 13 : 38
☒ 4. 15 : 38

Q.2 Monil's monthly income is reduced by 18%. By approximate what percentage his monthly income must be increased so that it is again equal to his original monthly income?

Ans ☒ 1. 20%
☒ 2. 18%
☒ 3. 15%
☒ 4. 22%

Q.3 The ratio of the cost price and selling price of a bulb is 20 : 25. What is the profit percentage?

Ans ☒ 1. 20 percent
☒ 2. 25 percent
☒ 3. 15 percent
☒ 4. 30 percent

Q.4 If 75 is subtracted from 25 percent of a number, then the result is 1225. What is the value of the number?

Ans ☒ 1. 5300
☒ 2. 5000
☒ 3. 5100
☒ 4. 5200



Download SSC CGL, CHSL E-BOOKS

[CLICK HERE](#)

Q.5 Height of a cone is 15 cm and radius of its base is 14 cm. What is the volume of the cone?

Ans

- ☐ 1. 3240 cm³
- ☐ 2. 2860 cm³
- ☒ 3. 3080 cm³
- ☐ 4. 3420 cm³

Q.6 Average of 90 results is 38. If 4 is subtracted from each result, then what will be the new average of the results?

Ans

- ☐ 1. 37
- ☒ 2. 34
- ☐ 3. 36
- ☐ 4. 32

Q.7 A principal of Rs. 30000 is borrowed at compound interest (compounding annually) at the rate of 7 percent per annum. What will be the amount after 2 years?

Ans

- ☐ 1. Rs. 31247
- ☐ 2. Rs. 35687
- ☐ 3. Rs. 33248
- ☒ 4. Rs. 34347

Q.8 The marked price of an article is Rs. 1850. If a discount of 60 percent is given, then what will be the selling price of the article?

Ans

- ☐ 1. Rs. 750
- ☐ 2. Rs. 840
- ☐ 3. Rs. 860
- ☒ 4. Rs. 740

Q.9 The marked price on an item was Rs 4800/- but the shopkeeper offered a double discount of 18% and 20%. How much did he finally sell the item for?

Ans

- ☐ 1. Rs. 3642
- ☒ 2. Rs. 3148.8
- ☐ 3. Rs. 2976
- ☐ 4. Rs. 3258.8

Q.10 What is that least value that should be added to 140 to make it exactly divisible by both 5 and 6?

Ans

- ☐ 1. 20
- ☐ 2. 15
- ☐ 3. 12
- ☒ 4. 10

Q.11 In a mixture water and milk are in the ratio of 8 : 21. If it contains 26 litres more milk than water, then what will be the quantity of milk in mixture?

Ans

- ☐ 1. 46 litres



Q.12 Rohit makes four trips of equal distances. His speed on first trip was 400 km/hr and in each subsequent trip his speed was half of the previous trip. What is the average speed of Rohit in these four trips?

- Ans**
- ☒ 1. 100 km/hr
 - ☒ 2. $440/3$ km/hr
 - ☒ 3. $400/3$ km/hr
 - ☒ 4. $320/3$ km/hr

Q.13 Anil sells a table at a loss of 20 percent. If he sells it for Rs. 160 more, then he earns a profit of 20 percent. What should be the selling price of the table to earn a profit of 25 percent?

- Ans**
- ☒ 1. Rs. 750
 - ☒ 2. Rs. 800
 - ☒ 3. Rs. 500
 - ☒ 4. Rs. 700

Q.14 Of the 5 subjects, the average marks of Rakesh in first 3 subjects was 80 and the average marks in the last 3 subjects was 92. If his marks in the third subject was 51, then what was his average marks in all the 5 subjects?

- Ans**
- ☒ 1. 90
 - ☒ 2. 102
 - ☒ 3. 97
 - ☒ 4. 93

Q.15 What is the value of $96 \times 2 \div (88 - 24) + 43 \times 3$?

- Ans**
- ☒ 1. 132
 - ☒ 2. 139
 - ☒ 3. 130
 - ☒ 4. 135

Q.16 A person lent certain sum of money at the annual rate of 3 percent on simple interest and the interest received in 25 years is Rs. 600 less than the sum lent. What is the sum lent?

- Ans**
- ☒ 1. Rs. 1200
 - ☒ 2. Rs. 2400
 - ☒ 3. Rs. 1600
 - ☒ 4. Rs. 800

Q.17 Find the value of $58 - 25 \div 5 + \{55 + 25 - (30 + 20 - 10 + 30)\}$.

- Ans**
- ☒ 1. 68
 - ☒ 2. 63
 - ☒ 3. 56
 - ☒ 4. 66

Q.18 The HCF of two numbers is 14 and their LCM is 490. If one number is 70, find the other number.

- Ans**
- ☒ 1. 74



Q.19 J, K and L together can complete a book in 20 days. J and K together can complete the same book in 25 days. L alone can complete the same book in how many days?

- Ans**
- ☐ 1. 125 days
 - ☐ 2. 110 days
 - ☒ 3. 100 days
 - ☐ 4. 140 days

Q.20 If 15 men can build a house in 18 days, how many days will it take for 12 men to build the same house?

- Ans**
- ☐ 1. 20 days
 - ☐ 2. 19 days
 - ☒ 3. 22.5 days
 - ☐ 4. 18 days

Section : Part-D-English

Q.1 Select the most appropriate option for the given blank.

Let us _____ a meeting to discuss this issue.

- Ans**
- ☐ 1. take
 - ☐ 2. voice
 - ☒ 3. call
 - ☐ 4. say

Q.2 In the following question, out of the given four alternatives, select the alternative which best expresses the meaning of the Idiom/Phrase.

“To stand one’s ground”

- Ans**
- ☐ 1. To give up
 - ☐ 2. Arranged in order
 - ☐ 3. To give in
 - ☒ 4. To refuse to change opinion

Q.3 Choose the word that means the same as the given word.

Curious

- Ans**
- ☐ 1. Callous
 - ☐ 2. Benign
 - ☐ 3. Agile
 - ☒ 4. Interested



Download SSC CGL, CHSL E-BOOKS

[CLICK HERE](#)

Q.4 Choose the word that is opposite in meaning to the given word.

Adequacy

- Ans
- ☐ 1. Opulence
 - ☐ 2. Rational
 - ☐ 3. Surplus
 - ☒ 4. Dearth

Q.5 Select the sentence with no spelling errors.

- Ans
- ☐ 1. After anchoring, the wind was variable and light from the western quarter.
 - ☐ 2. After anchoring, the wind was varieable and light from the western quarter.
 - ☒ 3. After anchoring, the wind was variable and light from the western quarter.
 - ☐ 4. After anchoring, the wind was variable and lite from the westen quarter.

Q.6 Select the most appropriate meaning of the given idiom.

Dot the I's and cross the T's

- Ans
- ☒ 1. To do something carefully.
 - ☐ 2. To make a bad situation worse.
 - ☐ 3. To have no standard of beauty.
 - ☐ 4. To complain about something.

Q.7 Select the most appropriate option for the given blank.

The raging waters _____ the tiny village.

- Ans
- ☐ 1. has submerging
 - ☒ 2. submerged
 - ☐ 3. submerges
 - ☐ 4. has been submerged

Q.8 Select the word segment that substitutes (replaces) the bracketed word segment correctly and completes the sentence meaningfully. Select the option 'no correction required' if the sentence is correct as given.

'This must be it, it's the (countryside; might be that is our) holiday home,' she added hopefully.

- Ans
- ☐ 1. countryside; whenever this is our
 - ☒ 2. countryside; perhaps this is our
 - ☐ 3. countryside; however this is seemed our
 - ☐ 4. No correction required

Q.9 Find the part of the given sentence that has an error in it. If there is no error, choose 'No error'.
The good news is that many large cities, have began to heed climate change warning signs.

- Ans
- ☒ 1. heed climate change warning signs.
 - ☒ 2. large cities, have began to
 - ☒ 3. The good news is that many
 - ☒ 4. No error

Q.10 Find the part of the given sentence that has an error in it. If there is no error, choose 'No error'.

I can't tell you how brilliant his lately ideas were.

- Ans
- ☒ 1. I can't tell you
 - ☒ 2. lately ideas were.
 - ☒ 3. No error
 - ☒ 4. how brilliant his

Q.11 Choose the most appropriate antonym of the underlined word.

I think my malaise is chiefly owing to the depressing influence of town air and town scenes.

- Ans
- ☒ 1. Wellness
 - ☒ 2. Disquiet
 - ☒ 3. Angst
 - ☒ 4. Unease

Q.12 Replace the bracketed word with one of the given options, which suitably replaces the word without changing the meaning of the sentence:

In the age of technology, smartphones have become (ubiquitous), infiltrating every aspect of our lives, from communication and work to entertainment and even our daily routines.

- Ans
- ☒ 1. obsolete
 - ☒ 2. irreplicable
 - ☒ 3. candid
 - ☒ 4. omnipresent

Q.13 Improve the underlined part of the sentence. Choose 'No improvement' as an answer if the sentence is grammatically correct.

Dogs can be more easily domesticates and trained.

- Ans
- ☒ 1. easiest domesticating
 - ☒ 2. easily domesticated
 - ☒ 3. No improvement
 - ☒ 4. easy domesticate

Common sense, uncontrovursal ideas tend to diminish when attention has moved elsewhere.

- Ans
- ☒ 1. sense
 - ☒ 2. attention
 - ☒ 3. uncontrovursal
 - ☒ 4. diminish

Q.15 Find the part of the given sentence that has an error in it. If there is no error, choose 'No error'.
 He had decided to playing until that score reached forty-three thousand.

- Ans
- ☒ 1. No error
 - ☒ 2. He had decided to
 - ☒ 3. playing until that score
 - ☒ 4. reached forty-three thousand.

Comprehension:

In the following passage some words have been deleted. Fill in the blanks with the help of the alternatives given. Select the most appropriate option for each number.

Historians (1) _____ condemn the acquisition of Sindh by the British in strong (2) _____. The causes for annexation were deliberately (3) _____. Like many episodes in the British conquest of India, the Afghan war is also a tale of bullying tactics and (4) _____. However, in the instance of the First Afghan War, the English suffered terribly at the (5) _____ of the Afghans with a corresponding loss of prestige.

SubQuestion No : 16

Q.16 Select the most appropriate option to fill in the blank No. 1.

- Ans
- ☒ 1. unintentional
 - ☒ 2. generally
 - ☒ 3. rigorous
 - ☒ 4. casualty

Comprehension:

In the following passage some words have been deleted. Fill in the blanks with the help of the alternatives given. Select the most appropriate option for each number.

Historians (1) _____ condemn the acquisition of Sindh by the British in strong (2) _____. The causes for annexation were deliberately (3) _____. Like many episodes in the British conquest of India, the Afghan war is also a tale of bullying tactics and (4) _____. However, in the instance of the First Afghan War, the English suffered terribly at the (5) _____ of the Afghans with a corresponding loss of prestige.

SubQuestion No : 17

Q.17 Select the most appropriate option to fill in the blank No. 2.

- Ans
- ☒ 1. letter
 - ☒ 2. poetry
 - ☒ 3. paragraph

Comprehension:

In the following passage some words have been deleted. Fill in the blanks with the help of the alternatives given. Select the most appropriate option for each number.

Historians (1) _____ condemn the acquisition of Sindh by the British in strong (2) _____. The causes for annexation were deliberately (3) _____. Like many episodes in the British conquest of India, the Afghan war is also a tale of bullying tactics and (4) _____. However, in the instance of the First Afghan War, the English suffered terribly at the (5) _____ of the Afghans with a corresponding loss of prestige.

SubQuestion No : 18

Q.18 Select the most appropriate option to fill in the blank No. 3.

Ans ☒ 1. manufactured

☐ 2. consider

☐ 3. fasten

☐ 4. sew

Comprehension:

In the following passage some words have been deleted. Fill in the blanks with the help of the alternatives given. Select the most appropriate option for each number.

Historians (1) _____ condemn the acquisition of Sindh by the British in strong (2) _____. The causes for annexation were deliberately (3) _____. Like many episodes in the British conquest of India, the Afghan war is also a tale of bullying tactics and (4) _____. However, in the instance of the First Afghan War, the English suffered terribly at the (5) _____ of the Afghans with a corresponding loss of prestige.

SubQuestion No : 19

Q.19 Select the most appropriate option to fill in the blank No. 4.

Ans ☐ 1. faith

☐ 2. inconveniences

☒ 3. deceit

☐ 4. harmony

Comprehension:

In the following passage some words have been deleted. Fill in the blanks with the help of the alternatives given. Select the most appropriate option for each number.

Historians (1) _____ condemn the acquisition of Sindh by the British in strong (2) _____. The causes for annexation were deliberately (3) _____. Like many episodes in the British conquest of India, the Afghan war is also a tale of bullying tactics and (4) _____. However, in the instance of the First Afghan War, the English suffered terribly at the (5) _____ of the Afghans with a corresponding loss of prestige.

SubQuestion No : 20

Q.20 Select the most appropriate option to fill in the blank No. 5.

Ans ☐ 1. palms

☐ 2. heart

☒ 3. hands

☐ 4. mind



कस्तूरी

- Ans
- ☒ 1. मदन
 - ☒ 2. मृगनाभि
 - ☒ 3. बाल
 - ☒ 4. काक

Q.2 निम्नलिखित प्रश्न में, दिए गए चार विकल्पों में से, उस विकल्प का चयन करें जो दिए गए मुहावरे के अर्थ को सर्वश्रेष्ठ रूप से व्यक्त करता है।

गिरगिट की तरह रंग बदलना

- Ans
- ☒ 1. एक बात पर स्थिर न रहना
 - ☒ 2. लड़ाई के काम करना
 - ☒ 3. मूर्ख बनाकर अपना काम निकालना
 - ☒ 4. भलाई के काम करना

Q.3 दिए गए वाक्य में उचित विदेशी शब्द का चयन करके रिक्त स्थान की पूर्ति कीजिए।

राजू की नौकरी _____ से लगी है।

- Ans
- ☒ 1. हाल
 - ☒ 2. सिफारिश
 - ☒ 3. अदालत
 - ☒ 4. एतराज

Q.4 दिए गए शब्द का विलोम शब्द ज्ञात कीजिए।

अति

- Ans
- ☒ 1. आदि
 - ☒ 2. अल्प
 - ☒ 3. अंत
 - ☒ 4. इति

Q.5 दिए गए वाक्य में से गलत वर्तनी ज्ञात कीजिए।

कमलेश उत्तम अंको से उत्तीर्ण हो गया।

- Ans
- ☒ 1. अंको
 - ☒ 2. उत्तम



Download SSC CGL, CHSL E-BOOKS

[CLICK HERE](#)

Q.6 निम्नलिखित प्रश्न में चार विकल्पों में से उस विकल्प का चयन करें जो रिक्त स्थान के लिए सही शब्द वाला विकल्प हो।

सभ्यता के विकास एवं विज्ञान की _____ खोजों के कारण मनोरंजन का क्षेत्र भी अछूता न रह सका।

- Ans
- ✓ 1. अद्भुत
 - ✗ 2. अवांछित
 - ✗ 3. अनियमित
 - ✗ 4. अस्वाभाविक

Q.7 दिए गए वाक्य में रेखांकित शब्द का तद्भव शब्द ज्ञात कीजिए।
इतने अश्रु क्यों बहा रहे हो?

- Ans
- ✗ 1. अंधा
 - ✗ 2. अंधेरा
 - ✗ 3. आँख
 - ✓ 4. आँसू

Q.8 दिए गए वाक्य का वह भाग ज्ञात करें, जिसमें कोई त्रुटि है।
किशोरावस्था बचपन से युवा बनने के बीच की व्यवस्था है जब बच्चों में काफी परिवर्तन आते हैं।

- Ans
- ✗ 1. किशोरावस्था बचपन से
 - ✗ 2. में काफी परिवर्तन आते हैं।
 - ✗ 3. युवा बनने के बीच की
 - ✓ 4. व्यवस्था है जब बच्चों

Q.9 दिए गए विकल्पों में से तीन विकल्प त्रुटियुक्त हैं, जबकि एक सही है। उस सही विकल्प का चयन करें।

- Ans
- ✗ 1. अंकित आए और उसने कहा।
 - ✗ 2. अंकित आया और कहा।
 - ✓ 3. अंकित आया और उसने कहा।
 - ✗ 4. अंकित आए और कहा।

Q.10 दिए गए वाक्य में रेखांकित शब्द का विलोम शब्द ज्ञात कीजिए।
दीर्घायु भव!

- Ans
- ✗ 1. मलिन
 - ✗ 2. लंबी
 - ✓ 3. अल्पायु



Download SSC CGL, CHSL E-BOOKS

CLICK HERE

Q.11 निम्नलिखित प्रश्न में दिए गए चार विकल्पों में से उस विकल्प का चयन करें जो दिए गए मुहावरे के अर्थ को सर्वश्रेष्ठ रूप से व्यक्त करता है।

बृहस्पति के समान पण्डित

- Ans
- ✗ 1. गलत ज्ञान होना
 - ✓ 2. श्रेष्ठ पण्डित
 - ✗ 3. अज्ञानी होना
 - ✗ 4. अंगूठा छाप

Q.12 निम्नलिखित प्रश्न में, चार विकल्पों में से, उस सही विकल्प का चयन करें जो वाक्यांशों के लिए एक शब्द का विकल्प हो।

किसी बात पर बार-बार जोर देना

- Ans
- ✗ 1. आश्वस्त
 - ✗ 2. असमान
 - ✗ 3. आमरण
 - ✓ 4. आग्रह

Q.13 निम्नलिखित प्रश्न में, चार विकल्पों में से, उस विकल्प का चयन करें जो कोष्ठक में दिए गए शब्द के पर्यायवाची शब्द का सही विकल्प है।

मेरा इकलौता (पुत्र) _____ अपनी आगे की पढ़ाई के लिए अमेरिका गया है।

- Ans
- ✓ 1. आत्मज
 - ✗ 2. विनीत
 - ✗ 3. कोपल
 - ✗ 4. नलिन

Q.14 दिए गए वाक्यांश के लिए सार्थक शब्द ज्ञात कीजिए।

शरण में आया हुआ

- Ans
- ✗ 1. आश्रित
 - ✗ 2. गृहस्थ
 - ✓ 3. शरणागत
 - ✗ 4. राजाश्रित

Q.15 दिए गए वाक्य में से गलत वर्तनी ज्ञात कीजिए।

नछत्र शब्द का प्रयोग प्रेमचंद ने अपनी कहानी में किया है।

- Ans
- ✗ 1. प्रेमचंद
 - ✗ 2. शब्द
 - ✗ 3. नछत्र
 - ✗ 4. प्रयोग

Comprehension:

नीचे दिए गए गद्य में कुछ शब्द छोड़ दिए गए हैं और प्रत्येक रिक्त स्थान के चार विकल्प दिए गए हैं। इन चारों में से कौन सा विकल्प रिक्त स्थान की पूर्ति करेगा-

जब लोगों ने पहली बार साफ हवा के लिए (1)_____ छेड़ी तो सबसे पहले इस (2)_____ से निपटने के लिए कानूनी रास्तों को (3)_____ का प्रयास किया गया। यह काम आसान नहीं था क्योंकि (4)_____ और भाप इंजनों के मालिक अपनी मशीनों में सुधार के लिए पैसा (5)_____ करने को कतई तैयार नहीं थे।

SubQuestion No : 16

Q.16 रिक्त 1 के लिए सबसे उपयुक्त विकल्प का चयन कीजिए।

- Ans
- ✗ 1. रास्ता
 - ✗ 2. महिला
 - ✗ 3. पुरुष
 - ✓ 4. मुहिम

Comprehension:

नीचे दिए गए गद्य में कुछ शब्द छोड़ दिए गए हैं और प्रत्येक रिक्त स्थान के चार विकल्प दिए गए हैं। इन चारों में से कौन सा विकल्प रिक्त स्थान की पूर्ति करेगा-

जब लोगों ने पहली बार साफ हवा के लिए (1)_____ छेड़ी तो सबसे पहले इस (2)_____ से निपटने के लिए कानूनी रास्तों को (3)_____ का प्रयास किया गया। यह काम आसान नहीं था क्योंकि (4)_____ और भाप इंजनों के मालिक अपनी मशीनों में सुधार के लिए पैसा (5)_____ करने को कतई तैयार नहीं थे।

SubQuestion No : 17

Q.17 रिक्त 2 के लिए सबसे उपयुक्त विकल्प का चयन कीजिए।

- Ans
- ✓ 1. समस्या
 - ✗ 2. लक्षण
 - ✗ 3. गरीमा
 - ✗ 4. खूबसूरत

Comprehension:

नीचे दिए गए गद्य में कुछ शब्द छोड़ दिए गए हैं और प्रत्येक रिक्त स्थान के चार विकल्प दिए गए हैं। इन चारों में से कौन सा विकल्प रिक्त स्थान की पूर्ति करेगा-

जब लोगों ने पहली बार साफ हवा के लिए (1)_____ छेड़ी तो सबसे पहले इस (2)_____ से निपटने के लिए कानूनी रास्तों को (3)_____ का प्रयास किया गया। यह काम आसान नहीं था क्योंकि (4)_____ और भाप इंजनों के मालिक अपनी मशीनों में सुधार के लिए पैसा (5)_____ करने को कतई तैयार नहीं थे।

SubQuestion No : 18

Q.18 रिक्त 3 के लिए सबसे उपयुक्त विकल्प का चयन कीजिए।

- Ans
- ✗ 1. दिशा
 - ✗ 2. कोहरा
 - ✓ 3. आजमाने

Comprehension:

नीचे दिए गए गद्य में कुछ शब्द छोड़ दिए गए हैं और प्रत्येक रिक्त स्थान के चार विकल्प दिए गए हैं। इन चारों में से कौन सा विकल्प रिक्त स्थान की पूर्ति करेगा-

जब लोगों ने पहली बार साफ हवा के लिए (1)_____ छेड़ी तो सबसे पहले इस (2)_____ से निपटने के लिए कानूनी रास्तों को (3)_____ का प्रयास किया गया। यह काम आसान नहीं था क्योंकि (4)_____ और भाप इंजनों के मालिक अपनी मशीनों में सुधार के लिए पैसा (5)_____ करने को कतई तैयार नहीं थे।

SubQuestion No : 19

Q.19 रिक्त 4 के लिए सबसे उपयुक्त विकल्प का चयन कीजिए।

- Ans**
- ☒ 1. कचरे
 - ☒ 2. गंदगी
 - ☒ 3. कारखानों
 - ☒ 4. शहर

Comprehension:

नीचे दिए गए गद्य में कुछ शब्द छोड़ दिए गए हैं और प्रत्येक रिक्त स्थान के चार विकल्प दिए गए हैं। इन चारों में से कौन सा विकल्प रिक्त स्थान की पूर्ति करेगा-

जब लोगों ने पहली बार साफ हवा के लिए (1)_____ छेड़ी तो सबसे पहले इस (2)_____ से निपटने के लिए कानूनी रास्तों को (3)_____ का प्रयास किया गया। यह काम आसान नहीं था क्योंकि (4)_____ और भाप इंजनों के मालिक अपनी मशीनों में सुधार के लिए पैसा (5)_____ करने को कतई तैयार नहीं थे।

SubQuestion No : 20

Q.20 रिक्त 5 के लिए सबसे उपयुक्त विकल्प का चयन कीजिए।

- Ans**
- ☒ 1. आसानी
 - ☒ 2. फुकाने
 - ☒ 3. खर्च
 - ☒ 4. मुश्किल