

Constable GD in Central Armed Police Forces CAPFs SSF Rifleman GD in Assam Rifles Examination 2024

Exam Date	23/02/2024
Exam Time	9:00 AM - 10:00 AM
Subject	Constable GD Examination 2024

Section : Part-A-General Intelligence and Reasoning

Q.1 By interchanging the given two signs which of the following equation will be correct?

\times and \div

I. $5 + 6 \times 2 - 4 \div 1 = 10$

II. $9 \times 3 - 4 \div 2 + 5 = 4$

Ans ☒ 1. Only II

☒ 2. Both I and II

☒ 3. Only I

☒ 4. Neither I nor II

Q.2 In the following question, select the figure which can be placed at the sign of question mark (?) from the given alternatives.



Ans


☒ 1.



☒ 2.



☒ 3.



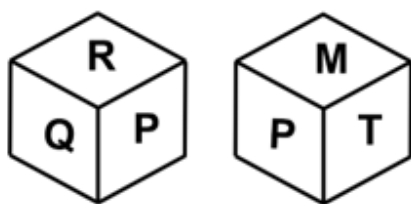
Download SSC CGL, CHSL E-BOOKS

[CLICK HERE](#)

Q.3 Eight persons Reena, Kiran, Rahul, Deepak, Amit, Vikas, Preeti and Priya sit around a square table such that two persons sit in each of the sides. All the persons are sitting facing the centre of the table. Reena sits on the immediate right of Amit and they both sit on the same side. Preeti faces the one who is second to the left of Kiran. Preeti is sitting fourth to the right of Reena. Two persons sit between Vikas and Deepak (when counted from one side only) and Deepak is adjacent to Amit. Only one person sits between Preeti and Rahul (when counted from one side only). Who is sitting to the immediate left of Deepak?

- Ans**
- ☒ 1. Vikas
 - ☒ 2. Priya
 - ☒ 3. Rahul
 - ☒ 4. Kiran

Q.4 Two different positions of the same dice are given below. Find the letter opposite of M.



- Ans**
- ☒ 1. R
 - ☒ 2. Q
 - ☒ 3. T
 - ☒ 4. P

Q.5 In a certain code language, 'LAST' is coded as 'PFWY'. What is the code for 'MEAN' in that code language?

- Ans**
- ☒ 1. QKES
 - ☒ 2. QJFT
 - ☒ 3. QJES
 - ☒ 4. QJET

Q.6 Six persons P1, P2, P3, P4, P5 and P6 are sitting around a circular table facing towards the centre (not necessarily in the same order). Only two persons are sitting between P2 and P6 from the either sides. Only one person is sitting between P2 and P4. P5 is sitting to the immediate right of P3. P1 is sitting second to the right of P6. Who is sitting on the immediate right of P1?

- Ans**
- ☒ 1. P6
 - ☒ 2. P5
 - ☒ 3. P4
 - ☒ 4. P2



Ans

✗ 1.



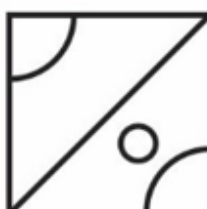
✓ 2.



✗ 3.



✗ 4.



Q.8 In the following question, select the missing number from the given series.

451, 472, 493, 514, ?, 556

Ans

✗ 1. 538

✓ 2. 535

✗ 3. 534

✗ 4. 530

Q.9 Which of the following groups of letters when sequentially placed from left to right will complete the given series?
ee_fgghheeffgg_heeffgghheeff__hh

- Ans
- ☐ 1. ggfh
 - ☐ 2. eeff
 - ☒ 3. fhgg
 - ☐ 4. efgh

Q.10 In the following question, select the missing number from the given series.

64, 72, 45, 109, -16, ?

- Ans
- ☐ 1. 205
 - ☒ 2. 200
 - ☐ 3. 208
 - ☐ 4. 180

Q.11 A series is given with one term missing. Select the correct alternative from the given ones that will complete the series.

MQRT, JNOQ, GKLN, DHIK, ?

- Ans
- ☐ 1. ANRS
 - ☐ 2. AMRQ
 - ☒ 3. AEFH
 - ☐ 4. ANTS

Q.12 Three Statements are given followed by two conclusions numbered I and II. Assuming the statements to be true, even if they seem to be at variance with commonly known facts, decide which of the conclusions logically follow(s) from the statements.

Statement I: All cats are mammals.

Statement II: All mammals are animals.

Statement III: All animals are living beings.

Conclusion I: Some cats are living beings.

Conclusion II: All living beings are cats.

- Ans
- ☐ 1. Only conclusion II follows
 - ☒ 2. Only conclusion I follows
 - ☐ 3. Both conclusions I and II follow
 - ☐ 4. Neither conclusion I nor II follows

Q.13 If $67\text{ L } 50\text{ M } 15\text{ N } 6 = 27$ and $100\text{ L } 50\text{ M } 13\text{ N } 5 = 85$, then $6\text{ L } 8\text{ M } 4\text{ N } 3 = ?$

- Ans
- ☐ 1. 8
 - ☐ 2. 5
 - ☐ 3. 7
 - ☒ 4. 2

Q.14

SSC Constable GD Study Notes : sscportal.in/study-kit/constable-gd

1. Change

2. Chance

3. Channel

4. Chant

5. Chancellor

Ans

✗ 1. 2, 5, 1, 4, 3

✗ 2. 2, 3, 1, 4, 5

✗ 3. 2, 3, 1, 5, 4

✓ 4. 2, 5, 1, 3, 4

Q.15 From the given option figures, select the one in which the question figure is hidden/embedded. (rotation is not allowed)

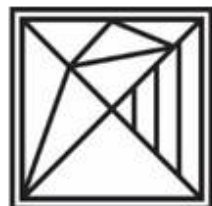


Ans

✗ 1.



✓ 2.



✗ 3.



✗ 4.



Download SSC CGL, CHSL E-BOOKS

[CLICK HERE](#)

If 'R ÷ S' means 'R is the daughter of S'.

If 'R - S' means 'R is the husband of S'.

How is H related to J in the expression 'H - F × I ÷ J'?


- Ans
- ☐ 1. Sister's husband
 - ☐ 2. Son
 - ☒ 3. Daughter's husband
 - ☐ 4. Father

Q.17 In the following question, select the related letters from the given alternatives.

BO : AM :: CP : ?


- Ans
- ☐ 1. AS
 - ☐ 2. YX
 - ☐ 3. HI
 - ☒ 4. BN

Q.18 In the following question, select the figure which can be placed at the sign of question mark (?) from the given alternatives.



Ans

✓ 1.




✗ 2.



✗ 3.



✗ 4.



Q.19 In the following question, select the related letter pair from the given alternatives.

ER : ET :: ?

Ans

✗ 1. EZ : AV

✗ 2. OG : KC

✓ 3. SX : SZ

✗ 4. WK : GR

Q.20 In a certain code language, 'PAGES' is coded as '192', 'ABOVE' is coded as '180'. What is the code for 'PRIOR' in that code language?

Ans

✓ 1. 304

✗ 2. 296



Q.1 Saikhom Mirabai Chanu is an

Ans

- ☒ 1. Indian Boxer
- ☒ 2. Indian Wrestler
- ☒ 3. Indian weightlifter
- ☒ 4. Indian cyclist

Q.2 What are the two main forms of protection used to shield domestic industries from foreign competition in an inward-looking trade strategy?

Ans

- ☒ 1. Tariffs and subsidies
- ☒ 2. Quotas and subsidies
- ☒ 3. Tariffs and price controls
- ☒ 4. Tariffs and quotas

Q.3 India has an open border with which of the following countries?

Ans

- ☒ 1. China
- ☒ 2. Pakistan
- ☒ 3. Myanmar
- ☒ 4. Nepal

Q.4 In India the financial/fiscal year is taken from _____.

Ans

- ☒ 1. 1st October to 30th September
- ☒ 2. 1st April to 31st March
- ☒ 3. 1st Jan to 31st December
- ☒ 4. 1st July to 30th June

Q.5 Which album earned Ricky Kej his third Grammy Award?

Ans

- ☒ 1. Harmony of Elements
- ☒ 2. Divine Tides
- ☒ 3. Melodies of the Universe
- ☒ 4. Nature's Symphony

Q.6 In which type of shooting sport do athletes shoot at targets from a distance of 10 meters, 25 meters, and 50 meters?

Ans

- ☒ 1. Archery
- ☒ 2. Rifle shooting
- ☒ 3. Skeet shooting
- ☒ 4. Biathlon

Q.7 In which state, Kudankulam Nuclear Power Plant is established?

Ans

- ☒ 1. Kerala
- ☒ 2. Bihar
- ☒ 3. Tamil Nadu
- ☒ 4. Madhya Pradesh

Q.8 The oldest Veda is the Rigveda, composed about _____ years ago.

Ans

- ☒ 1. 2500
- ☒ 2. 5000
- ☒ 3. 3500
- ☒ 4. 2000

Q.9 Which among the following Articles of the Indian Constitution deal with 'Right to Freedom of Religion'?

Ans

- ☒ 1. Article 60-65
- ☒ 2. Article 21-24
- ☒ 3. Article 25-28
- ☒ 4. Article 30-35

Q.10 _____ dance form originates from the southern Indian state of Kerala.

Ans

- ☒ 1. Only Mohiniyattam
- ☒ 2. Kathakali and Mohiniyattam
- ☒ 3. Only Kuchipudi
- ☒ 4. Only Kathak

Q.11 Who hosted the 2011 ODI cricket world cup?

Ans

- ☒ 1. Australia
- ☒ 2. India only
- ☒ 3. India, Sri Lanka, Bangladesh
- ☒ 4. Sri Lanka, Bangladesh only

Q.12 In which year did Cripps Mission arrive in India?

Ans

- ☒ 1. 1932
- ☒ 2. 1922
- ☒ 3. 1952
- ☒ 4. 1942

Q.13 Article _____ of the Indian Constitution gives an extensive original jurisdiction to the Supreme Court in regard to enforcement of Fundamental Rights.

Ans

- ☒ 1. 31
- ☒ 2. 226



Download SSC CGL, CHSL E-BOOKS

[CLICK HERE](#)

Q.14 In August 2023, Neeraj Chopra made history by winning the _____ medal/s in the men's javelin throw event at the World Athletics Championships held in Budapest, Hungary.

- Ans
- ☒ 1. bronze
 - ☒ 2. silver
 - ☒ 3. gold
 - ☒ 4. two

Q.15 When Jan Aushadhi Train was flagged off by Dr. Mansukh Mandaviya, Union Minister of Health & Family Welfare and Chemicals & Fertilizers, and Shri Ashwini Vaishnaw, Minister for Railways, Communications, Electronics and Information Technology?

- Ans
- ☒ 1. In 2023
 - ☒ 2. In 2020
 - ☒ 3. In 2021
 - ☒ 4. In 2022

Q.16 Fatorpa Zatra and Mando festival are related with which of the following states?

- Ans
- ☒ 1. Kerala
 - ☒ 2. Karnataka
 - ☒ 3. Madhya Pradesh
 - ☒ 4. Goa

Q.17 The Government of National Capital Territory of Delhi (Amendment) Bill, 2023 establishes the National Capital Civil Services Authority, which consists of the Chief Minister, Chief Secretary of Delhi and _____.

- Ans
- ☒ 1. Cabinet Secretary of India
 - ☒ 2. Revenue Secretary of India
 - ☒ 3. Education Minister of Delhi
 - ☒ 4. Principal Home Secretary of Delhi

Q.18 Which of the following gases, when cooled and compressed, can change from a gas to a supercritical fluid state?

- Ans
- ☒ 1. Oxygen (O₂)
 - ☒ 2. Hydrogen (H₂)
 - ☒ 3. Carbon dioxide (CO₂)
 - ☒ 4. Steam

Q.19 As per Census 2011, India's population was 121.1 Crore with _____ female population.

- Ans
- ☒ 1. 42.5 percent
 - ☒ 2. 48.5 percent
 - ☒ 3. 44.5 percent
 - ☒ 4. 46.5 percent



Download SSC CGL, CHSL E-BOOKS

[CLICK HERE](#)

Q.20 Article 43: The State shall endeavour to promote cottage industries on an individual or cooperative basis in rural areas, it is a Directive based on _____ Principles.

- Ans
- ☒ 1. Intellectual
 - ☒ 2. Socialist
 - ☒ 3. Gandhian
 - ☒ 4. Liberal

Section : Part-C-Elementary Mathematics

Q.1 What is the value of $[36 - (48 \times 7 \div 16) - (19 + 3 - 24)]$?

- Ans
- ☒ 1. 15
 - ☒ 2. 13
 - ☒ 3. 17
 - ☒ 4. 11

Q.2 Find LCM of $9/4$, $21/10$, $63/20$.

- Ans
- ☒ 1. $21/2$
 - ☒ 2. $2/63$
 - ☒ 3. $85/7$
 - ☒ 4. $63/2$

Q.3 M1 alone can do a work in 14 days and M2 alone can do the same work in 70 days. With help of M3, they finish the same work in 7 days. In how many days M3 alone can do the same work?

- Ans
- ☒ 1. 20 days
 - ☒ 2. 17.5 days
 - ☒ 3. 19 days
 - ☒ 4. 21 days

Q.4 If a number R1 is 13 percent less than another number R2 and R2 is 50 percent more than 5600, then what is the value of R1?

- Ans
- ☒ 1. 7510
 - ☒ 2. 7308
 - ☒ 3. 7010
 - ☒ 4. 7101

Q.5 If $x : y = 7 : 2$, then what is the value of $(7x + 4y) : (7x - 4y)$?

- Ans
- ☒ 1. 57 : 41
 - ☒ 2. 40 : 31
 - ☒ 3. 54 : 43
 - ☒ 4. 39 : 29

Q.6 John deposited \$1200 in a bank account. After 4 years, the total amount in the account is \$1400. Find the rate of simple interest per annum.

- Ans
- ☒ 1. 4.17%
 - ☐ 2. 6.23%
 - ☐ 3. 5.83%
 - ☐ 4. 5.13%

Q.7 A group of students has an average weight of 44 kg. One student of weight 40 kg leaves the group and another student of weight 34 kg joins the group. If the new average weight becomes 43.4 kg, then how many students are there in the group?

- Ans
- ☐ 1. 12
 - ☐ 2. 14
 - ☒ 3. 10
 - ☐ 4. 13

Q.8 What is the value of $555 + 44 \times 2 \div 11 - 25 \times 3$?

- Ans
- ☐ 1. 498
 - ☐ 2. 458
 - ☐ 3. 468
 - ☒ 4. 488

Q.9 Mohan buys an old mobile for Rs. 4000 and spends Rs. 500 on its repairs. If he sells the mobile for Rs. 5000, then what is his profit percentage?

- Ans
- ☒ 1. 11.11 percent
 - ☐ 2. 13.5 percent
 - ☐ 3. 12.5 percent
 - ☐ 4. 9.09 percent

Q.10 P can do a work in 14 days. What part of the total work can be done by P in 4 days?

- Ans
- ☐ 1. $\frac{4}{9}$
 - ☒ 2. $\frac{2}{7}$
 - ☐ 3. $\frac{3}{8}$
 - ☐ 4. $\frac{6}{7}$

Q.11 The marked price of an article is 25 percent more than its cost price. What maximum discount percentage can be offered by the shopkeeper to sell his article at profit?

- Ans
- ☐ 1. 12.5 percent
 - ☐ 2. 16.67 percent
 - ☒ 3. 20 percent
 - ☐ 4. 25 percent



Download SSC CGL, CHSL E-BOOKS

[CLICK HERE](#)

Q.12 Riya sold a laptop for ₹35000, earning a profit of 25%. If she wanted to earn a profit of 30%, at what price should she have sold the laptop?

- Ans**
- ☐ 1. Rs. 37200
 - ☐ 2. Rs. 34600
 - ☒ 3. Rs. 36400
 - ☐ 4. Rs. 38400

Q.13 After deducting 10 percent from a certain sum and then deducting 70 percent from the remainder, 1188 is left. What was that sum?

- Ans**
- ☐ 1. 2200
 - ☐ 2. 5500
 - ☒ 3. 4400
 - ☐ 4. 3300

Q.14 Two trains, one 390 metres and the other 250 metres long are running in opposite directions on parallel tracks, at the speed of 78 km/hr and 66 km/hr respectively. How much time will they take to cross each other?

- Ans**
- ☐ 1. 36 seconds
 - ☒ 2. 16 seconds
 - ☐ 3. 24 seconds
 - ☐ 4. 30 seconds

Q.15 Find the fourth proportional of $4x$, $x+4$, $3x-1$, if $x=2$

- Ans**
- ☐ 1. $14/4$
 - ☒ 2. $15/4$
 - ☐ 3. $11/4$
 - ☐ 4. $21/4$

Q.16 Marked price of an article is Rs. 9600 and its selling price is Rs. 6336. What is the discount percentage?

- Ans**
- ☒ 1. 34 percent
 - ☐ 2. 38 percent
 - ☐ 3. 30 percent
 - ☐ 4. 25 percent

Q.17 The average of 28 numbers is 110. If we add a number 'B' in each number, then the average becomes 128. What is the value of B?

- Ans**
- ☐ 1. 12
 - ☐ 2. 24
 - ☒ 3. 18
 - ☐ 4. 14

Q.18 A solid metallic sphere of radius 15 cm is melted and recast into a cone having diameter of the base as 15 cm. What is the height of the cone?

- Ans**
- ☐ 1. 212 cm
 - ☐ 2. 186 cm
 - ☐ 3. 284 cm
 - ☒ 4. 240 cm

Q.19 A person borrowed Rs. 15000 on compound interest at the rate of 30 percent per annum. If the interest is compounded half yearly, then what will be the amount to be paid after 1 year?

- Ans**
- ☐ 1. Rs. 20428.5
 - ☒ 2. Rs. 19837.5
 - ☐ 3. Rs. 17482.5
 - ☐ 4. Rs. 18282.5

Q.20 Three rectangular fields having areas of 70 m², 84 m², and 112 m² are to be divided into identical rectangular flower beds, each having a length of 7 m. Find the breadth of each flower bed.

- Ans**
- ☐ 1. 4 m
 - ☐ 2. 3 m
 - ☒ 3. 2 m
 - ☐ 4. 6 m

Section : Part-D-English

Q.1 Choose the most appropriate antonym of the underlined word.

Raw cut leather coats, and ruffles in all shapes and sizes provided a **delicate** edge.

- Ans**
- ☐ 1. petite
 - ☐ 2. attractive
 - ☐ 3. laborious
 - ☒ 4. crude

Q.2 Choose the option which is antonym of (opposite of) the word "disseminate" in the sentence given below:

He tried to conceal his excitement, but the sparkle in his eyes gave away the joy he felt at the surprise.

- Ans**
- ☐ 1. sparkle
 - ☐ 2. gave
 - ☐ 3. felt
 - ☒ 4. conceal



Download SSC CGL, CHSL E-BOOKS

[CLICK HERE](#)

Q.3 In the following question, out of the given four alternatives, select the alternative which best expresses the meaning of the Idiom/Phrase.

To put somebody to sword

- Ans
- ☒ 1. To be well-informed or up-to-date
 - ☒ 2. To slay or execute someone
 - ☒ 3. To deceive someone
 - ☒ 4. To give challenge

Q.4 Improve the underlined part of the sentence. Choose 'No improvement' as an answer if the sentence is grammatically correct.

I would complain to my grandfather about him.

- Ans
- ☒ 1. complaining to my
 - ☒ 2. complained to my
 - ☒ 3. No improvement
 - ☒ 4. complains to my

Q.5 Select the most appropriate word to fill in the blank.

My father was very distant, but I suppose all men of his generation _____.

- Ans
- ☒ 1. there
 - ☒ 2. was
 - ☒ 3. would
 - ☒ 4. were

Q.6 Choose the word that is opposite in meaning to the given word.

Abuse

- Ans
- ☒ 1. Rebuke
 - ☒ 2. Fester
 - ☒ 3. Flowery
 - ☒ 4. Applause

Q.7 Select the most appropriate synonym of the given word.

Cognitive

- Ans
- ☒ 1. Latent
 - ☒ 2. Perceivable
 - ☒ 3. Obscure
 - ☒ 4. Private

Q.8 Select the most appropriate word to fill in the blank.

There are _____ techniques you can use to cope and overcome it.

- Ans
- ☐ 1. so
 - ☐ 2. much
 - ☒ 3. many
 - ☐ 4. very

Q.9 Four sentences are given, out of which three have all correct spellings. Choose the sentence with the incorrect spelt word/ words.

- Ans
- ☐ 1. But Campion's sensitivity realized it and he changed the subject rather suddenly.
 - ☐ 2. The judge and the widow went to law to get the court to take me away from him and let one of them be my guardian.
 - ☒ 3. He was wepping hard and quietly and shaking in the same parts as a wepping woman.
 - ☐ 4. But Tommy is a watch-dog about the Divers.

Q.10 Select the sentence with no spelling errors.

- Ans
- ☐ 1. Sensational and often reckless reports in the press threaten the fainness of a trial.
 - ☐ 2. Sensational and ofen reckless reports in the press threaten the fairness of a trial.
 - ☒ 3. Sensational and often reckless reports in the press threaten the fairness of a trial.
 - ☐ 4. Sensational and often reckless reports in the press threten the fairness of a trial.

Q.11 The sentence has been divided into three parts, identify the error segment in the sentence given below. Choose no error if there is no error in the sentence.

Her performance in the second round of the/ competition was even most impressive/ than her outstanding debut in the first round.

- Ans
- ☐ 1. Her performance in the second round of the
 - ☒ 2. competition was even most impressive
 - ☐ 3. no error
 - ☐ 4. than her outstanding debut in the first round.

Q.12 Find the part of the given sentence that has an error in it. If there is no error, choose 'No error'.

Some bacterial cells on our hands may have genes that enabling them to be resistant to a given antibacterial agent.

- Ans
- ☐ 1. No error
 - ☒ 2. may have genes that enabling them
 - ☐ 3. to be resistant to a given antibacterial agent
 - ☐ 4. Some bacterial cells on our hands

All the boys of this band are **similar in many ways**.

- Ans
- ☐ 1. Eats like a bird
 - ☐ 2. A piece of cake
 - ☒ 3. Birds of a feather
 - ☐ 4. Flocking birds

Q.14 Find the part of the given sentence that has an error in it. If there is no error, choose 'No error'.
Many students fails to understand the complexities of life.

- Ans
- ☐ 1. No error
 - ☒ 2. Many students fails
 - ☐ 3. complexities of life.
 - ☐ 4. to understand the

Q.15 Improve the underlined part of the sentence. Choose 'No improvement' as an answer if the sentence is grammatically correct.
She plans to meet him at the airport.

- Ans
- ☐ 1. meets him
 - ☒ 2. No improvement
 - ☐ 3. met him
 - ☐ 4. meet himself

Comprehension:

In the following passage some words have been deleted. Fill in the blanks with the help of the alternatives given. Select the most appropriate option for each number.

We should either have prepared ourselves to resist China (1) _____ to make concessions, including border adjustments. We did (2) _____. After 1956 we would not (3) _____ China's territorial claims and therefore accepted the possibility of a (4) _____. Unfortunately, we did not build up militarily to thwart China if she chose to use force to sustain her (5) _____.

SubQuestion No : 16

Q.16 Select the most appropriate option to fill in the blank No. 1.

- Ans
- ☐ 1. nor
 - ☒ 2. or
 - ☐ 3. may be
 - ☐ 4. also

Comprehension:

In the following passage some words have been deleted. Fill in the blanks with the help of the alternatives given. Select the most appropriate option for each number.

We should either have prepared ourselves to resist China (1) _____ to make concessions, including border adjustments. We did (2) _____. After 1956 we would not (3) _____ China's territorial claims and therefore accepted the possibility of a (4) _____. Unfortunately, we did not build up militarily to thwart China if she chose to use force to sustain her (5) _____.

SubQuestion No : 17

Q.17 Select the most appropriate option to fill in the blank No. 2.

- Ans**
- ☐ 1. either
 - ☐ 2. pretty much
 - ☒ 3. neither
 - ☐ 4. not much

Comprehension:

In the following passage some words have been deleted. Fill in the blanks with the help of the alternatives given. Select the most appropriate option for each number.

We should either have prepared ourselves to resist China (1) _____ to make concessions, including border adjustments. We did (2) _____. After 1956 we would not (3) _____ China's territorial claims and therefore accepted the possibility of a (4) _____. Unfortunately, we did not build up militarily to thwart China if she chose to use force to sustain her (5) _____.

SubQuestion No : 18

Q.18 Select the most appropriate option to fill in the blank No. 3.

- Ans**
- ☐ 1. collapse
 - ☐ 2. offend
 - ☐ 3. ridicule
 - ☒ 4. concede

Comprehension:

In the following passage some words have been deleted. Fill in the blanks with the help of the alternatives given. Select the most appropriate option for each number.

We should either have prepared ourselves to resist China (1) _____ to make concessions, including border adjustments. We did (2) _____. After 1956 we would not (3) _____ China's territorial claims and therefore accepted the possibility of a (4) _____. Unfortunately, we did not build up militarily to thwart China if she chose to use force to sustain her (5) _____.

SubQuestion No : 19

Q.19 Select the most appropriate option to fill in the blank No. 4.

- Ans**
- ☐ 1. harmony
 - ☐ 2. contract
 - ☒ 3. clash
 - ☐ 4. burning out

Comprehension:

In the following passage some words have been deleted. Fill in the blanks with the help of the alternatives given. Select the most appropriate option for each number.

We should either have prepared ourselves to resist China (1) _____ to make concessions, including border adjustments. We did (2) _____. After 1956 we would not (3) _____ China's territorial claims and therefore accepted the possibility of a (4) _____. Unfortunately, we did not build up militarily to thwart China if she chose to use force to sustain her (5) _____.

SubQuestion No : 20

Q.20 Select the most appropriate option to fill in the blank No. 5.

- Ans**
- ✓ 1. claims
 - ✗ 2. dignify
 - ✗ 3. denial
 - ✗ 4. morality

Section : Part-D-Hindi

Q.1 निम्नलिखित प्रश्न में, चार विकल्पों में से, उस विकल्प का चयन करें जो रिक्त स्थान के लिए सही जातिवाचक संज्ञा वाला विकल्प हो।

सड़क पर बहुत सी सुंदर-सुंदर _____ आती-जाती दिखाई दीं।

- Ans**
- ✗ 1. पेड़
 - ✗ 2. घर
 - ✗ 3. नदी
 - ✓ 4. गाड़ियाँ

Q.2 दिए गए वाक्य में से निरर्थक शब्द ज्ञात कीजिए।

इनका तो जन्मों-जनमों का साथ है।

- Ans**
- ✗ 1. साथ
 - ✓ 2. जनमों
 - ✗ 3. जन्मों
 - ✗ 4. इनका

Q.3 दिए गए वाक्य में उचित देशज-विदेशज शब्द का चयन करके रिक्त स्थान की पूर्ति कीजिए।

_____ से मेरे कपड़े निकाल दो।

- Ans**
- ✓ 1. अलमारी
 - ✗ 2. तम्बाकू
 - ✗ 3. फीता



Download SSC CGL, CHSL E-BOOKS

[CLICK HERE](#)

Q.4 निम्नलिखित प्रश्न में, दिए गए चार विकल्पों में से, उस विकल्प का चयन करें जो दिए गए मुहावरे के अर्थ को सर्वश्रेष्ठ रूप से व्यक्त करता है।

नाक का बाल होना

Ans

- ✗ 1. जिसे मजबूरन रखना पड़े
- ✓ 2. बहुत प्रिय होना
- ✗ 3. सुरक्षा कवच होना
- ✗ 4. समस्या हल न होना

Q.5 निम्नलिखित प्रश्न में, चार विकल्पों में से, उस सही विकल्प का चयन करें जो वाक्यांश के लिए एक शब्द का विकल्प हो।
जिसकी कोई रक्षा नहीं कर रहा हो

Ans

- ✗ 1. अलभ्य
- ✓ 2. अरक्षित
- ✗ 3. अरसिक
- ✗ 4. अयाचित

Q.6 निम्नलिखित प्रश्न में, चार विकल्पों में से, उस विकल्प का चयन करें जो रिक्त स्थान के लिए सही शब्द वाला विकल्प हो।

बात करने से बड़े-बड़े मसले, अंतर्राष्ट्रीय समस्याएँ तक _____ हो जाती हैं।

Ans

- ✗ 1. बड़ी
- ✗ 2. मुश्किल
- ✓ 3. हल
- ✗ 4. विफल

Q.7 दिए गए वाक्य में रेखांकित शब्द का विलोम शब्द ज्ञात कीजिए।

यह सारा सामान गरीमा ने अग्नि को अर्पण कर दिया।

Ans

- ✗ 1. नकली
- ✓ 2. ग्रहण
- ✗ 3. कुलटा
- ✗ 4. सुगम

आजकल की पीढ़ी लगातार कुछ न कुछ नया सीखने की (आतुर) _____ रहती है।

- Ans
- ✓ 1. इच्छुक
 - ✗ 2. संकल्प
 - ✗ 3. प्रभृति
 - ✗ 4. निवर्तन

Q.9 निम्नलिखित प्रश्न में, चार विकल्पों में से, उस सही विकल्प का चयन करें जो वाक्यांशों के लिए एक शब्द का विकल्प हो।
पृथ्वी से निर्मित -

- Ans
- ✗ 1. पार्थ
 - ✗ 2. पारतीव
 - ✓ 3. पार्थिव
 - ✗ 4. पार्थीव

Q.10 निम्नलिखित प्रश्न में, चार विकल्पों में से, उस विकल्प का चयन करें जो कोष्ठक में दिए गए शब्द के पर्यायवाची शब्द का सही अर्थ नहीं है।

वहाँ उपस्थित सभी व्यक्ति इस सुंदर सी वस्तु को पाने के लिए (आकुल) _____ थे।

- Ans
- ✓ 1. कशिश
 - ✗ 2. अधीर
 - ✗ 3. विक्षुब्ध
 - ✗ 4. उद्विग्न

Q.11 दिए गए वाक्य में से गलत वर्तनी ज्ञात कीजिए।

एक छण में तुमने सब तबाह कर दिया।

- Ans
- ✓ 1. छण
 - ✗ 2. तुमने
 - ✗ 3. कर
 - ✗ 4. तबाह

Q.12 निम्नलिखित प्रश्न में, चार विकल्पों में से, उस सही विकल्प का चयन करें जो वाक्यांशों के लिए एक शब्द का विकल्प हो। किसी व्यक्ति या सिद्धांत का समर्थन करने वाला

- Ans
- ✓ 1. अनुयायी
 - ✗ 2. अधिवक्ता
 - ✗ 3. अनुमोदन
 - ✗ 4. अभ्यन्तर

Q.13 निम्नलिखित प्रश्न में, चार विकल्पों में से, उस विकल्प का चयन करें जो कोष्ठक में दिए गए शब्द के विलोम शब्द का सही विकल्प है।
बच्चों का मन बहुत ही (एकाग्र) _____ होता है।

- Ans
- ✗ 1. कठोर
 - ✗ 2. कोमल
 - ✗ 3. मलिन
 - ✓ 4. चंचल

Q.14 दिए गए वाक्य का वह भाग ज्ञात करें, जिसमें कोई त्रुटि है।
मोरनी को रिझाने के लिए पुरुष मोर-नृत्य करता है।

- Ans
- ✗ 1. रिझाने के लिए
 - ✗ 2. मोरनी को
 - ✗ 3. करता है
 - ✓ 4. पुरुष मोर-नृत्य

Q.15 निम्नलिखित प्रश्न में, दिए गए चार विकल्पों में से, उस विकल्प का चयन करें जो दिए गए मुहावरे के अर्थ को सर्वश्रेष्ठ रूप से व्यक्त करता है।

सूखकर काँटा होना

- Ans
- ✗ 1. ईर्ष्या वश सेहत खराब करना
 - ✗ 2. पेड़ के पत्ते झड़ना
 - ✗ 3. गरीबी के दिन काटना
 - ✓ 4. अत्यधिक कमजोर हो जाना

Comprehension:

नीचे दिए गए गद्य में कुछ शब्द छोड़ दिए गए हैं और प्रत्येक रिक्त स्थान के चार विकल्प दिए गए हैं। इन चारों में से कौन सा विकल्प रिक्त स्थान की पूर्ति करेगा-

दुनियाभर में खुदखुशी की (1)_____ तेज़ी से बढ़ रही है, लेकिन भारत में आत्महत्याओं का आंकड़ा (2)_____ है। लोगों में अवसाद (3)_____ बढ़ रहा है जिसके चलते कुछ लोग आत्महत्या जैसे हृदय (4)_____ कदम उठा रहे हैं। विद्यार्थियों की आत्महत्याओं के आंकड़ों पर नज़र डाले तो स्थिति काफी (5)_____ है।

SubQuestion No : 16

Q.16 रिक्त1 के लिए सबसे उपयुक्त विकल्प का चयन कीजिए।

- Ans
- ✓ 1. घटनाएँ
 - ✗ 2. सौगात
 - ✗ 3. बातें
 - ✗ 4. हालत

Comprehension:

नीचे दिए गए गद्य में कुछ शब्द छोड़ दिए गए हैं और प्रत्येक रिक्त स्थान के चार विकल्प दिए गए हैं। इन चारों में से कौन सा विकल्प रिक्त स्थान की पूर्ति करेगा-

दुनियाभर में खुदखुशी की (1)_____ तेज़ी से बढ़ रही है, लेकिन भारत में आत्महत्याओं का आंकड़ा (2)_____ है। लोगों में अवसाद (3)_____ बढ़ रहा है जिसके चलते कुछ लोग आत्महत्या जैसे हृदय (4)_____ कदम उठा रहे हैं। विद्यार्थियों की आत्महत्याओं के आंकड़ों पर नज़र डाले तो स्थिति काफी (5)_____ है।

SubQuestion No : 17

Q.17 रिक्त2 के लिए सबसे उपयुक्त विकल्प का चयन कीजिए।

- Ans
- ✗ 1. परमात्मा
 - ✓ 2. चिंताजनक
 - ✗ 3. चिंतामणि
 - ✗ 4. कृपालु

Comprehension:

नीचे दिए गए गद्य में कुछ शब्द छोड़ दिए गए हैं और प्रत्येक रिक्त स्थान के चार विकल्प दिए गए हैं। इन चारों में से कौन सा विकल्प रिक्त स्थान की पूर्ति करेगा-

दुनियाभर में खुदखुशी की (1)_____ तेज़ी से बढ़ रही है, लेकिन भारत में आत्महत्याओं का आंकड़ा (2)_____ है। लोगों में अवसाद (3)_____ बढ़ रहा है जिसके चलते कुछ लोग आत्महत्या जैसे हृदय (4)_____ कदम उठा रहे हैं। विद्यार्थियों की आत्महत्याओं के आंकड़ों पर नज़र डाले तो स्थिति काफी (5)_____ है।

SubQuestion No : 18

Q.18 रिक्त3 के लिए सबसे उपयुक्त विकल्प का चयन कीजिए।

- Ans
- ✗ 1. धीमे
 - ✗ 2. भयानक
 - ✗ 3. तेज़

Comprehension:

नीचे दिए गए गद्य में कुछ शब्द छोड़ दिए गए हैं और प्रत्येक रिक्त स्थान के चार विकल्प दिए गए हैं। इन चारों में से कौन सा विकल्प रिक्त स्थान की पूर्ति करेगा-

दुनियाभर में खुदखुशी की (1)_____ तेज़ी से बढ़ रही है, लेकिन भारत में आत्महत्याओं का आंकड़ा (2)_____ है। लोगों में अवसाद (3)_____ बढ़ रहा है जिसके चलते कुछ लोग आत्महत्या जैसे हृदय (4)_____ कदम उठा रहे हैं। विद्यार्थियों की आत्महत्याओं के आंकड़ों पर नज़र डाले तो स्थिति काफी (5)_____ है।

SubQuestion No : 19

Q.19 रिक्त4 के लिए सबसे उपयुक्त विकल्प का चयन कीजिए।

- Ans
- ☒ 1. हानिकारक
 - ☒ 2. विदारक
 - ☒ 3. अपेक्षा
 - ☒ 4. दर्दनाक

Comprehension:

नीचे दिए गए गद्य में कुछ शब्द छोड़ दिए गए हैं और प्रत्येक रिक्त स्थान के चार विकल्प दिए गए हैं। इन चारों में से कौन सा विकल्प रिक्त स्थान की पूर्ति करेगा-

दुनियाभर में खुदखुशी की (1)_____ तेज़ी से बढ़ रही है, लेकिन भारत में आत्महत्याओं का आंकड़ा (2)_____ है। लोगों में अवसाद (3)_____ बढ़ रहा है जिसके चलते कुछ लोग आत्महत्या जैसे हृदय (4)_____ कदम उठा रहे हैं। विद्यार्थियों की आत्महत्याओं के आंकड़ों पर नज़र डाले तो स्थिति काफी (5)_____ है।

SubQuestion No : 20

Q.20 रिक्त5 के लिए सबसे उपयुक्त विकल्प का चयन कीजिए।

- Ans
- ☒ 1. खुशहाली
 - ☒ 2. मूर्खता
 - ☒ 3. चिंताजनक
 - ☒ 4. दुखी