

Exam Date	18/11/2021
Exam Time :	12:30 PM - 2:00 PM
Subject	Constable GD 2021

Section : Part A General Intelligence and Reasoning

Q.1 Select the option that is related to the third number in the same way as the second number is related to the first number.

70 : 8 :: 87 : ?

- Ans
- 1. 8
 - 2. 9
 - 3. 6
 - 4. 7

Question ID : 65497830638
Status : Answered
Chosen Option : 2

Q.2 Select the correct option that indicates the arrangement of the given words in the order in which they appear in an English dictionary.

1. Hostile
2. Hostel
3. Hospital
4. House
5. Hopeless

- Ans
- 1. 5, 3, 1, 2, 4
 - 2. 3, 5, 2, 1, 4
 - 3. 5, 3, 2, 1, 4
 - 4. 4, 3, 2, 1, 5

Question ID : 65497830625
Status : Answered
Chosen Option : 1

Q.3 Eight friends, A, B, C, D, E, F, G and H, are sitting around a round table at equal distance between each other, facing the centre of the table. D is sitting between F and H. A is not sitting between B and G. C is sitting third to the right of A. E is sitting second to the left of D. Who is sitting opposite to A?

- Ans
- 1. E
 - 2. F
 - 3. H
 - 4. D

Question ID : 65497830637
Status : Marked For Review
Chosen Option : 3

Q.4 P, Q, R, S, T and U are sitting on a bench. Q is at the right end. R is sitting to the immediate right of S. U is sitting to the immediate left of T, and T is sitting to the immediate left of Q. P is sitting to the immediate left of S. Who is sitting at the left end?

- Ans
- 1. U
 - 2. T
 - 3. R
 - 4. P

Question ID : 65497830646
 Status : Answered
 Chosen Option : 4

Q.5 Select the number from among the given options that can replace the question mark (?) in the following series.

123, 98, 82, 73, 69, ?

- Ans
- 1. 49
 - 2. 68
 - 3. 52
 - 4. 57

Question ID : 65497830647
 Status : Answered
 Chosen Option : 2

Q.6 A number when added to 4 times to itself, gets equal to 10 times to its predecessor. Find the number.

- Ans
- 1. 2
 - 2. 10
 - 3. 8
 - 4. 5

Question ID : 65497830635
 Status : Answered
 Chosen Option : 1

Q.7 Select the combination of letters that when sequentially placed in the blanks of the given series will complete the series.

Z _ K F _ O K G Z _ K _ Z O _ I

- Ans
- 1. O Z O H K
 - 2. O Z K H K
 - 3. O Z O H Z
 - 4. K Z O H K

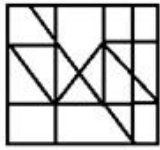
Question ID : 65497830626
 Status : Answered
 Chosen Option : 1

Q.8 Select the option in which the given figure is embedded (rotation is NOT allowed).

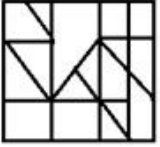


Ans

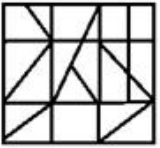
✓ 1.



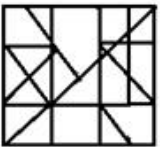
✗ 2.



✗ 3.



✗ 4.



Question ID : 65497830641

Status : Answered

Chosen Option : 1

Q.9 'Dictionary' is related to 'Meaning' in the same way as 'Encyclopaedia' is related to _____.

Ans ✗ 1. Synonyms

✗ 2. Phrase

✗ 3. News

✓ 4. Knowledge

Question ID : 65497830644

Status : Answered

Chosen Option : 4

Q.10 Read the given statements and conclusions carefully. Assuming that the information given in the statements is true, even if it appears to be at variance with commonly known facts, decide which of the given conclusions logically follow(s) from the statements.

Statements:

All girls are actors.
All actors are singers.

Conclusions:

1. Some girls are not singers.
2. No actor is a girl.
3. All girls are singers.

- Ans** 1. Both conclusions 1 and 3 follow
 2. Only conclusion 3 follows
 3. Only conclusion 1 follows
 4. Only conclusion 2 follows

Question ID : 65497830633

Status : Answered

Chosen Option : 2

Q.11 Select the letter-cluster from among the given options that can replace the question mark (?) in the following series.

FPW, EQV, DRU, ?

- Ans** 1. COS
 2. CST
 3. TWX
 4. CSG

Question ID : 65497830642

Status : Answered

Chosen Option : 2

Q.12 In a certain code language, 'GREW' is coded as '209224'. How will 'TYPE' be coded in that language?

- Ans** 1. 721122
 2. 721162
 3. 202511
 4. 511237

Question ID : 65497830645

Status : Answered

Chosen Option : 1

Q.13 In a certain code language, 'Where are you' is written as 'me ki na', 'When you come' is written as 'bel na se', and 'Come back home' is written as 'se ne jo'. How will 'When' be written in that language?

- Ans** 1. ki
 2. se
 3. me
 4. bel

Question ID : 65497830632

Status : Answered

Chosen Option : 4

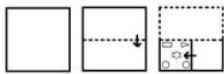
Q.14 Study the given pattern carefully and select the number that can replace the question mark (?) in it.

9 18 ?
18 32 79
27 58 46

- Ans 1. 22
 2. 21
 3. 26
 4. 25

Question ID : 65497830634
Status : Answered
Chosen Option : 4

Q.15 The sequence of folding a piece of paper and the manner in which the folded paper has been cut is shown in the following figures. How would this paper look when unfolded?

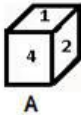
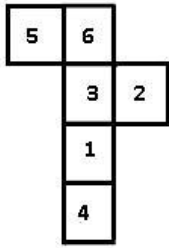


Ans

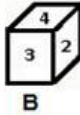
- 1.
- 2.
- 3.
- 4.

Question ID : 65497830636
Status : Answered
Chosen Option : 2

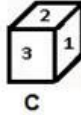
Q.16 Select the dice that can be formed by folding the given sheet along the lines.



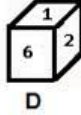
A



B



C



D

- Ans
- 1. Only A
 - 2. D and B
 - 3. A and C
 - 4. Only C


Question ID : 65497830640
 Status : Answered
 Chosen Option : 3

Q.17 Select the figure that will replace the question mark (?) in the following figure series.



Ans

✗ 1.




✗ 2.



✓ 3.



✗ 4.



Question ID : 65497830628
 Status : Answered
 Chosen Option : 3

Q.18 Select the option that is related to the third term in the same way as the second term is related to the first term.

CREAM : FPJYZ :: CHECK : ?

Ans ✗ 1. FZJFV

✓ 2. FFJAV

✗ 3. FPJZV

✗ 4. FFJFV

Question ID : 65497830629
 Status : Answered
 Chosen Option : 2

Q.19 In a certain code language, 'CHAINED' is written as 'EJYGPCF'. How will 'MEADOW' be written in that language?

Ans ✗ 1. PCYFMY

✗ 2. OCYFNY

✓ 3. OCYFMY

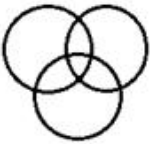
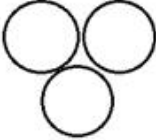

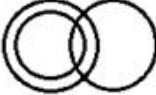
✗ 4. PCYFQY

Question ID : 65497830630
 Status : Answered
 Chosen Option : 3

Q.20 Select the Venn diagram that best represents the relationship between the following classes.

Passengers, Flight, Train

Ans

- ✗ 1. 
- ✗ 2. 
- ✓ 3. 
- ✗ 4. 

Question ID : 65497830649
 Status : Answered
 Chosen Option : 3

Q.21 Select the number from among the given options that can replace the question mark (?) in the following series.

17, 18, 26, 53, 117, ?

- Ans ✗ 1. 302
- ✓ 2. 242
- ✗ 3. 336
- ✗ 4. 232

Question ID : 65497830627
 Status : Answered
 Chosen Option : 2

Q.22 If 'A' denotes 'addition', 'B' denotes 'subtraction', 'C' denotes 'multiplication' and 'D' denotes 'division', then what will be the value of the following expression?

6 C (57 B 8) D 7 B 32 A 9

- Ans ✗ 1. 27
- ✗ 2. 18
- ✗ 3. 15
- ✓ 4. 19

Question ID : 65497830639
 Status : Answered
 Chosen Option : 4

Q.23 Select the correct mirror image of the given combination when the mirror is placed at PQ as shown.

QZ9JFN |

- Ans
- 1. MFI1E5O
 - 2. QZ9JFN
 - 3. MFI1E5O
 - 4. QZ9JFN

Question ID : 65497830648
 Status : Answered
 Chosen Option : 2

Q.24 Four letter-clusters have been given, out of which three are alike in some manner and one is different. Select the letter-cluster that is different.

- Ans
- 1. ODS
 - 2. AHI
 - 3. GNU
 - 4. DOU

Question ID : 65497830643
 Status : Answered
 Chosen Option : 4

Q.25 Ajay and Charul are brother and sister. Manoj and Darshan are the sons of Kripal and Sona. Sona is the mother-in-law of Charul's mother Swapnil. Neha, Niti and Nakul are the daughters of Manoj and the only cousins of Ajay. How many children does Darshan have?

- Ans
- 1. 4
 - 2. 1
 - 3. 3
 - 4. 2

Question ID : 65497830631
 Status : Marked For Review
 Chosen Option : 4