

Exam Date	17/11/2021
Exam Time :	9:00 AM - 10:30 AM
Subject	Constable GD 2021

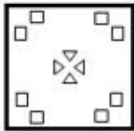
Section : Part A General Intelligence and Reasoning

Q.1 The sequence of folding a piece of paper and the manner in which the folded paper has been cut is shown in the following figures. How would this paper look when unfolded?

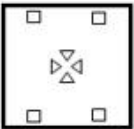


Ans

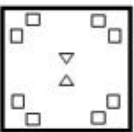
✓ 1.



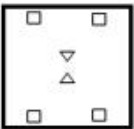
✗ 2.



✗ 3.



✗ 4.



Question ID : 65497831153

Status : Answered

Chosen Option : 1

Q.2 Four letter-clusters have been given, out of which three are alike in some manner and one is different. Select the letter-cluster that is different.

Ans ✗ 1. LOPK

✗ 2. EVIR

✓ 3. CXGV

✗ 4. HSLO

Question ID : 65497831133

Status : Answered

Chosen Option : 3

Q.3 In a certain code language, 'NOTION' is coded as '13127181213'. How will 'BEAUTIFY' be coded in that language?

- Ans 1. 2522266718212
 2. 2505016718212
 3. 2022266818222
 4. 2522268719215

Question ID : 65497831134
 Status : Answered
 Chosen Option : 1

Q.4 In a certain code language, KILOGRAM is written as LZQFNKHJ. How will AIRCRAFT be written in that language?

- Ans 1. BSHZQEZB
 2. ZHSBQZQH
 3. SEZQBQHZ
 4. SEZQHZBQ

Question ID : 65497831143
 Status : Answered
 Chosen Option : 3

Q.5 Select the option that is related to the third term in the same way as the second term is related to the first term.

METHOD : OIZPYP :: NORMAL : ?

- Ans 1. PSXUKX
 2. PXSUXK
 3. QRYVLY
 4. PSXVLX

Question ID : 65497831142
 Status : Answered
 Chosen Option : 1

Q.6 Two different positions of the same dice are shown, the six faces of which are numbered from 1 to 6. Select the number that will be on the face opposite to the face having '6'.



- Ans 1. 1
 2. 3
 3. 4
 4. 2

Question ID : 65497831140
 Status : Answered
 Chosen Option : 1

Q.7 Read the given statements and conclusions carefully. Assuming that the information given in the statements is true, even if it appears to be at variance with commonly known facts, decide which of the given conclusions logically follow(s) from the statements.

Statements:

Some stars are planets.
Some planets are comets.

Conclusions:

I. Some comets are planets.
II. All stars are comets.

- Ans** 1. Only conclusion I follows
 2. Only conclusion II follows
 3. Both conclusions I and II follow
 4. Neither conclusion I nor II follows

Question ID : 65497831150
 Status : Answered
 Chosen Option : 4

Q.8 Select the figure from among the given options that can replace the question mark (?) in the following series.

S	T	1	S	1	U	?
V	U	V	U	V	S	

Ans

1.

S	2	T
3		1
U		V

2.

T	1	V
		2
S	3	U

3.

T	3	S
		2
V	1	U

4.

T	1	U
		2
S	3	V

Question ID : 65497831148
 Status : Answered
 Chosen Option : 4

Q.9 Select the number from among the given options that can replace the question mark (?) in the following series.

16, 9, 27, 19, 76, 67, 335, ?

Ans 1. 650

2. 325

3. 415

4. 90

Question ID : 65497831135

Status : Answered

Chosen Option : 4

Q.10 Select the combination of letters that when sequentially placed in the blanks of the given series will complete the series.

P_RQPS__P__Q_SR_P_RQ

Ans 1. SRQSRPQS

2. SRSQRPQS

3. QRQSRPQS

4. SQQSRPQS

Question ID : 65497831146

Status : Answered

Chosen Option : 1

Q.11 Select the letter-cluster from among the given options that can replace the question mark (?) in the following series.

UC, AE, GG, MI, SK, ?

Ans 1. LM

2. YM

3. YO

4. WN

Question ID : 65497831154

Status : Answered

Chosen Option : 2

Q.12 Select the option that is related to the third number in the same way as the second number is related to the first number and the sixth number is related to the fifth number.

16 : 256 :: 21 : ? :: 19 : 361

Ans 1. 441

2. 324

3. 422

4. 484

Question ID : 65497831138

Status : Answered

Chosen Option : 1

Q.13 आठ मित्र, P, Q, R, S, T, U, V और W, एक गोल मेज़ के परितः इसके केंद्र की ओर अभिमुख होकर बैठे हैं। P, R और S के बीच में है। T, W के बाईं ओर तीसरे स्थान पर है। Q, S के एकदम बाएं बगल में है। T, S के दाईं ओर तीसरे स्थान पर है। V, U और W के बीच में है। S और W के बीच में कौन बैठा है?

- Ans
- 1. T
 - 2. P
 - 3. Q
 - 4. R

Question ID : 65497831137
Status : Answered
Chosen Option : 3

Q.14 Two years ago, T was twice as old as P. P is thrice as old as R. In five years, P will be 29. What is the present age of T?

- Ans
- 1. 42
 - 2. 48
 - 3. 44
 - 4. 46

Question ID : 65497831152
Status : Answered
Chosen Option : 2

Q.15 Select the correct mirror image of the given combination when the mirror is placed at the right side.

s x g 5 A Y

- Ans
- 1. Y A 2 p x z
 - 2. Y A 2 p x z
 - 3. Y A 2 p x z
 - 4. Y A 9 p x z

Question ID : 65497831136
Status : Answered
Chosen Option : 3

Q.16 राधा और ज्ञानेश की तीन बेटियाँ हैं - मनुजा, तारिणी और सुषमा। तारिणी की शादी जय से हुई है और सुषमा की शादी अभय से हुई है। ज्ञानेश का तीसरा दामाद अखिल है। अखिल के दो बच्चे पीयूष और रानी हैं। जय की दो बेटियाँ ऋचा और नेहा हैं। मृदुल, अभय का इकलौता बेटा है। राधा का रानी से क्या संबंध है?

- Ans
- 1. नानी
 - 2. सास
 - 3. माँ
 - 4. मौसेरी बहन

Question ID : 65497831144
Status : Answered
Chosen Option : 1

Q.17 In a certain code language, 'ABSTRACT' is written as 'IYYVDEU'. How will 'INSTINCT' be written in that language?

- Ans
- 1. QUYYNPEU
 - 2. OUYMQEUE
 - 3. OUYYNQEU
 - 4. QUYYPMEU

Question ID : 65497831149
 Status : Answered
 Chosen Option : 1

Q.18 Select the correct option that indicates the arrangement of the given words in the order in which they appear in an English dictionary.

1. Creditor
2. Creature
3. Credible
4. Creditable
5. Credentials

- Ans
- 1. 2, 5, 1, 3, 4
 - 2. 2, 5, 4, 3, 1
 - 3. 2, 5, 3, 4, 1
 - 4. 3, 5, 1, 4, 2

Question ID : 65497831145
 Status : Answered
 Chosen Option : 3

Q.19 Which of the given equations is correctly balanced if 'A' means '+', 'B' means '-', 'C' means 'x', and 'D' means '÷'?

- Ans
- 1. $66 B 2 D 54 C 18 = 135$
 - 2. $45 A 5 C 7 D 14 = 77$
 - 3. $45 D 5 C 7 A 14 = 77$
 - 4. $66 C 2 B 54 D 18 = 135$

Question ID : 65497831139
 Status : Answered
 Chosen Option : 3

Q.20 Select the number from among the given options that can replace the question mark (?) in the following series.

240, 258, 278, 300, ?

- Ans
- 1. 324
 - 2. 312
 - 3. 400
 - 4. 355

Question ID : 65497831147
 Status : Answered
 Chosen Option : 1

Q.21 Study the given pattern carefully and select the number that can replace the question mark (?) in it.

57 28 29
68 ? 33
72 37 35

- Ans
- 1. 34
 - 2. 33
 - 3. 35
 - 4. 29

Question ID : 65497831151
Status : Answered
Chosen Option : 2

Q.22 'Complicated' is related to 'Simple' in the same way as 'Shrink' is related to '_____'.
Ans

- 1. Expand
- 2. Execute
- 3. Shorten
- 4. Narrow

Question ID : 65497831155
Status : Answered
Chosen Option : 1

Q.23 Select the option in which the given figure is embedded (rotation is NOT allowed).



Ans

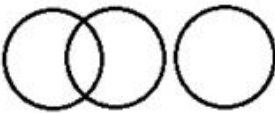
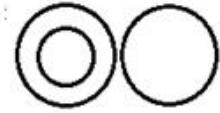
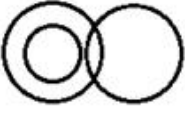
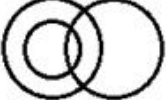
- 1.
- 2.
- 3.
- 4.

Question ID : 65497831141
Status : Answered
Chosen Option : 3

Q.24 Select the Venn diagram that correctly represents the relationship between the following classes.

Mothers, Fathers, Men

Ans

- ✗ 1. 
- ✓ 2. 
- ✗ 3. 
- ✗ 4. 

Question ID : 65497831157

Status : Answered

Chosen Option : 2

Q.25 छः मित्र A, B, C, D, E और F एक सीधी क्षैतिज पंक्ति में उत्तर की ओर मुंह करके बैठे हुए हैं। B, F और C के बीच में बैठा है। E, C के दाईं ओर तीसरे स्थान पर बैठा है। D, E के बाईं ओर ठीक बगल में बैठा है। B के दाईं ओर दूसरे स्थान पर कौन बैठा है?

- Ans ✗ 1. E
- ✗ 2. F
- ✓ 3. A
- ✗ 4. D

Question ID : 65497831156

Status : Answered

Chosen Option : 4