

Section : General Intelligence

Q.1 Three of the following four numbers are alike in a certain way and one is different.
Select the number that is different from the rest.

- Ans
- 1. 4328
 - 2. 3124
 - 3. 6457
 - 4. 2105

Question ID : 6549788779
Status : Not Answered
Chosen Option : --

Q.2 If in a code language, ROHAN is coded as 3136 and SHYAM is coded as 4356, then
how will you code RAM?

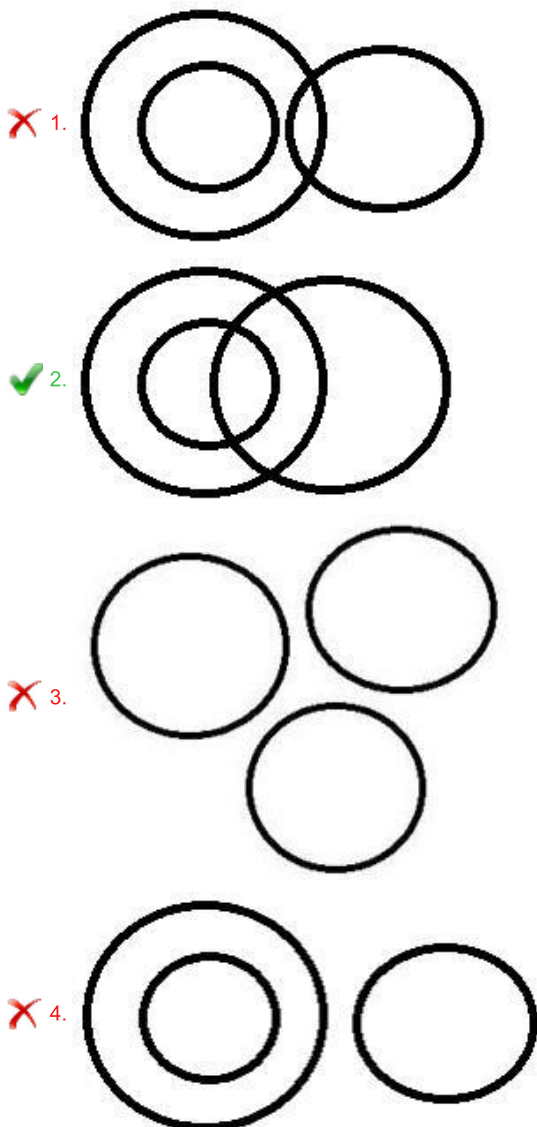
- Ans
- 1. 1234
 - 2. 1024
 - 3. 2315
 - 4. 3412

Question ID : 6549788782
Status : Not Answered
Chosen Option : --

Q.3 Select the Venn diagram that best illustrates the relationship between the following classes.

Women, Gynaecologists, Doctors

Ans



Question ID : 6549788797
Status : Answered
Chosen Option : 2

Q.4 U is the father of M. V is the wife of K. D is the mother of K's only brother M. How is U related to D?

- Ans
- 1. Paternal uncle
 - 2. Brother
 - 3. Father
 - 4. Husband

Question ID : 6549786463
Status : Answered
Chosen Option : 4

Q.5 Select the combination of letters that when sequentially placed in the blanks of the given series will complete the series.

p r _ b n _ r q _ n p _ q b _ p _ q _ n

- Ans
- 1. q, p, b, r, r, n, n
 - 2. q, b, p, n, r, n, r
 - 3. q, p, b, r, n, r, b
 - 4. q, r, n, p, b, r, n

Question ID : 6549787977
Status : Answered
Chosen Option : 3

Q.6 Select the number from among the given options that can replace the question mark (?) in the following series.

34, 39, 50, 67, 90, ?, 162

- Ans
- 1. 102
 - 2. 155
 - 3. 121
 - 4. 98

Question ID : 6549787263
Status : Answered
Chosen Option : 3

Q.7 Select the option in which the given figure is embedded (rotation is NOT allowed).



- Ans
- 1.
 - 2.
 - 3.
 - 4.

Question ID : 6549787279
Status : Answered
Chosen Option : 3

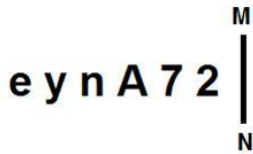
Q.8 Select the option that is related to the third word in the same way as the second word is related to the first word.

Spoon : Feeding :: Microscope : ?

- Ans 1. Magnifying
 2. Heating
 3. Radiating
 4. Grinding

Question ID : 6549787269
Status : Answered
Chosen Option : 1

Q.9 Select the correct mirror image of the given combination when the mirror is placed at MN as shown.



- Ans 1.
 2.
 3.
 4.

Question ID : 6549787281
Status : Answered
Chosen Option : 2

Q.10 Select the option that is related to the third term in the same way as the second term is related to the first term.

Circle : Arc :: Flower : ?

- Ans 1. Perfume
 2. Petal
 3. Smell
 4. Colour

Question ID : 6549788787
Status : Answered
Chosen Option : 2

Q.11 Arrange the following words in a logical and meaningful order.

1. Eat
2. Rinse
3. Buy
4. Cut
5. Cook

- Ans 1. 3, 2, 4, 5, 1
 2. 4, 3, 5, 2, 1
 3. 2, 4, 3, 5, 1
 4. 1, 3, 5, 4, 2

Question ID : 6549788780
Status : Answered
Chosen Option : 1

Q.12 Four options have been given, out of which three are alike in some manner and one is different. Select the option that is different.

- Ans 1. Psoriasis
 2. Eczema
 3. Scurvy
 4. Vitiligo

Question ID : 6549787274
Status : Not Answered
Chosen Option : --

Q.13 There are three books coded as A, B and C. The price of book A is twice the price of book B and one-third the price of book C. If book C costs ₹84, then what are the costs of book A and book B, respectively?

- Ans 1. ₹14 and ₹42
 2. ₹24 and ₹42
 3. ₹14 and ₹7
 4. ₹28 and ₹14

Question ID : 6549788773
Status : Answered
Chosen Option : 4

Q.14 Select the option that is related to the third term in the same way as the second term is related to the first term.

JOKERS : NKOAVO :: ROMING : ?

- Ans 1. WKQDRB
 2. VKRESC
 3. VKQGRB
 4. VKQERC

Question ID : 6549787268
Status : Answered
Chosen Option : 4

Q.15 What will be the value of the given expression if 'A' means '+', 'B' means '-', 'C' means 'x' and 'D' means '÷'?

15 C 7 B (24 D 8) A 16 C 4 B 21 D 3

- Ans
- 1. 165
 - 2. 159
 - 3. 151
 - 4. 179

Question ID : 6549787259
Status : Answered
Chosen Option : 2

Q.16 Which of the following four letter-clusters is different from the other letter-clusters?

- Ans
- 1. ASOJIB
 - 2. ABEGIJ
 - 3. EGIKOT
 - 4. ILORUZ

Question ID : 6549788788
Status : Not Answered
Chosen Option : --

Q.17 In a certain code language, PAINT is written as QZHOU and BASK is written as CZTL. How will MOVIE be written in that language?

- Ans
- 1. NNUHF
 - 2. LNWHF
 - 3. NPWJD
 - 4. NNWHD

Question ID : 6549787266
Status : Answered
Chosen Option : 1

Q.18 Select the option in which the numbers are related in the same way as are the numbers of the following set.

(11, 20, 81)

- Ans
- 1. (14, 29, 64)
 - 2. (12, 30, 224)
 - 3. (36, 28, 25)
 - 4. (25, 36, 121)

Question ID : 6549787261
Status : Answered
Chosen Option : 4

Q.19 Read the given statements and conclusions carefully. Assuming that the information given in the statements is true, even if it appears to be at variance with commonly known facts, decide which of the given conclusions logically follow(s) from the statements.

Statements:

Some lights are wires.
All appliances are lights.
All bulbs are appliances.

Conclusions:

I. Some lights are appliances.
II. Some wires are bulbs.
III. All bulbs are lights.

- Ans** 1. Both conclusions I and III follow.
 2. Both conclusions II and III follow.
 3. Both conclusions I and II follow.
 4. Only conclusion III follows.

Question ID : 6549787275
Status : Answered
Chosen Option : 1

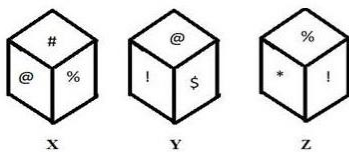
Q.20 Select the option that is related to the third number in the same way as the second number is related to the first number.

54 : 81 :: 6 : ?

- Ans** 1. 9
 2. 15
 3. 21
 4. 11

Question ID : 6549788775
Status : Answered
Chosen Option : 1

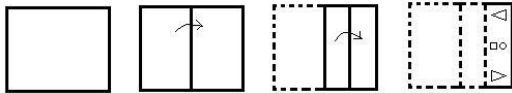
Q.21 Three different positions (X, Y and Z) of the same dice are shown. Which symbol is on the face opposite to the face having the symbol '!'?



- Ans** 1. @
 2. \$
 3. #
 4. %

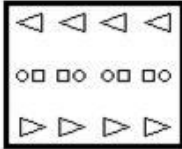
Question ID : 6549788791
Status : Answered
Chosen Option : 4

Q.22 The sequence of folding a piece of paper and the manner in which the folded paper has been cut is shown in the following figures. How would this paper look when unfolded?

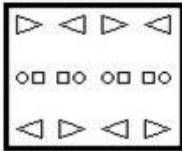


Ans

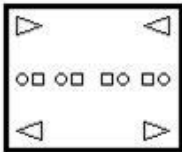
1.



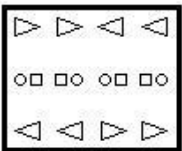
2.



3.



4.




Question ID : 6549787280

Status : Answered

Chosen Option : 2

Q.23 Select the figure that will come next in the following figure series.

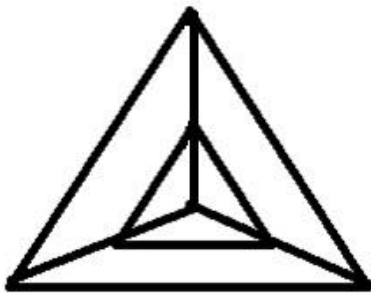


Ans

- 1.
- 2.
- 3.
- 4.

Question ID : 6549788792
Status : Answered
Chosen Option : 4

Q.24 How many triangles are there in the given figure?



- 1. 8
- 2. 10
- 3. 6
- 4. 11

Question ID : 6549788793
Status : Answered
Chosen Option : 1

Q.25 Select the set in which the numbers are related in the same way as are the numbers of the following set.

(1, 2, 6)

- Ans
- 1. (1, 2, 16)
 - 2. (7, 14, 49)
 - 3. (10, 20, 40)
 - 4. (5, 30, 930)

Question ID : 6549788777

Status : Not Answered

Chosen Option : --