

Q.1 Select the correct combination of mathematical signs to sequentially replace the \* signs to balance the following equation.

$$40 * 5 * 7 * 24 * 6 * 38$$

Ans  1. ÷, ×, -, +, =

2. ÷, -, ×, +, =

3. +, ×, ÷, -, =

4. +, ×, -, ÷, =

Question ID : 6549788067

Status : Answered

Chosen Option : 4

Q.2 In a certain code language, LIABILITY is coded as 141 and OFFICIATE is coded as 166. How will STATUTORY be coded in that language?

Ans  1. 156

2. 87

3. 81

4. 159

Question ID : 6549786964

Status : Not Answered

Chosen Option : --

Q.3 Select the correct option that indicates the arrangement of the given words in the order in which they appear in an English dictionary.

1. Deceive
2. Deceptive
3. Decapitate
4. Decency
5. Decamp

Ans  1. 4-2-1-3-5

2. 3-2-1-5-4

3. 5-3-1-4-2

4. 5-3-1-2-4

Question ID : 6549786962

Status : Answered

Chosen Option : 3

Q.4 Select the number that can replace the question mark (?) in the following series.

$$14, 28, 31, 124, 129, ?$$

Ans  1. 447

2. 666

3. 774

4. 644

Question ID : 6549788071

Status : Answered

Chosen Option : 3



Q.5 Select the option that is related to the third letter-cluster in the same way as the second letter-cluster is related to the first letter-cluster.

UDM : YZQ :: QCT : ?

- Ans
- 1. YGZ
  - 2. UYX
  - 3. VZN
  - 4. UYK

Question ID : 6549788076  
Status : Answered  
Chosen Option : 2

Q.6 Select the combination of letters that when sequentially placed in the blanks of the given series will complete the series.

rrpps\_p\_ssr\_ssr\_\_p

- Ans
- 1. prpps
  - 2. srrsp
  - 3. ssrpp
  - 4. sprrp

Question ID : 6549786058  
Status : Answered  
Chosen Option : 4

Q.7 Select the correct mirror image of the given figure when a mirror is placed on the right side of the figure.

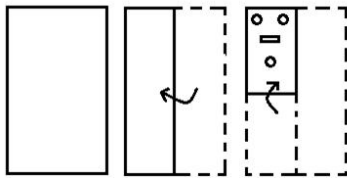


Ans

- 1.
- 2.
- 3.
- 4.

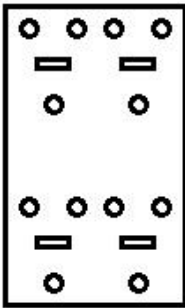
Question ID : 6549788089  
Status : Answered  
Chosen Option : 1

**Q.8** A piece of paper is folded and cut as shown below in the question figures. Select from the given answer figures, how it will appear when unfolded.

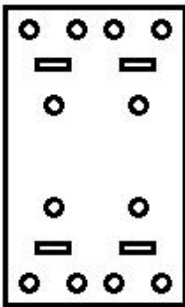


Ans

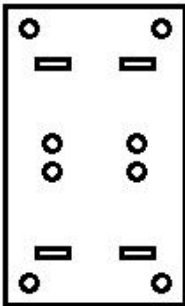
✗ 1.



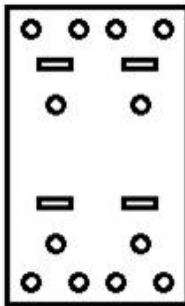
✓ 2.



✗ 3.



✗ 4.



Question ID : 6549788088

Status : Answered

Chosen Option : 2

Q.9 Three of the following four words are alike in a certain way and one is different. Select the odd one.

- Ans
- 1. Applaud
  - 2. Admire
  - 3. Honour
  - 4. Criticise

Question ID : 6549788082

Status : Answered

Chosen Option : 4

Q.10 A father's age at the time of the birth of his son is the same as the present age of the son. If the age of the son was 15 years five years ago, then what is the current age of the father?

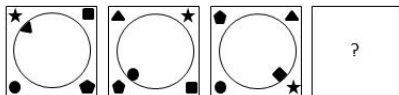
- Ans
- 1. 35 years
  - 2. 30 years
  - 3. 45 years
  - 4. 40 years

Question ID : 6549786955

Status : Answered

Chosen Option : 4

Q.11 Select the figure from among the given options that can replace the question mark (?) in the following series.



Ans

- 1.
- 2.
- 3.
- 4.

Question ID : 6549786974

Status : Answered

Chosen Option : 3

Q.12 Two statements are given, followed by three conclusions numbered I, II and III. Assuming the statements to be true, even if they seem to be at variance with commonly known facts, decide which of the conclusions logically follow(s) from the statements.

Statements:

Some pins are roses.  
No rose is a machine.

Conclusions:

I. Some roses are pins.  
II. Some pins are not machines.  
III. All machines are pins.

- Ans
- 1. Only conclusion I follows
  - 2. Only conclusions I and III follow
  - 3. Only conclusions I and II follow
  - 4. Only conclusion II follows

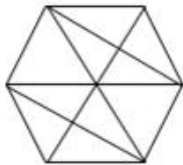
Question ID : 6549788083  
Status : Answered  
Chosen Option : 1

Q.13 In a code language, CANDLE is written as FMEOBD. How will FIXING be written in that language?

- Ans
- 1. HOJYKH
  - 2. FOKYKG
  - 3. HOJYJG
  - 4. HPJWJG

Question ID : 6549788074  
Status : Answered  
Chosen Option : 3

Q.14 How many triangles are there in the given figure?



- Ans
- 1. 22
  - 2. 29
  - 3. 26
  - 4. 25

Question ID : 6549786975  
Status : Answered  
Chosen Option : 1

Q.15 'Guitar' is related to 'Music Instrument' in the same way as 'Car' is related to '\_\_\_\_\_'.  
Ans

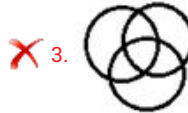
- 1. Petrol
- 2. Road
- 3. Driver
- 4. Vehicle

Question ID : 6549788077  
Status : Answered  
Chosen Option : 4

Q.16 Select the Venn diagram that best represents the relationship between the following classes.

Father, Men, Uncle

Ans



Question ID : 6549786979

Status : Answered

Chosen Option : 2

Q.17 Select the option in which the words share the same relationship as that shared by the given pair of words.

Rat : Rodent

Ans  1. Cattle : Cow

2. Ostrich : Bird

3. Whale : Shark

4. Frog : Reptile

Question ID : 6549786969

Status : Answered

Chosen Option : 4

Q.18 Three different positions of the same dice are shown. Select the letter that will be on the face opposite to the face having F.



Ans  1. C

2. E

3. A

4. D

Question ID : 6549786973

Status : Answered

Chosen Option : 2

Q.19 Select the option in which the numbers share the same relationship as that shared by the given pair of numbers.

263 : 271

- Ans
- 1. 223 : 233
  - 2. 23 : 293
  - 3. 317 : 337
  - 4. 261 : 267

Question ID : 6549786957  
Status : Not Answered  
Chosen Option : --

Q.20 Select the option in which the numbers are related in the same way as are the numbers of the following set.

122 : 340 : 726

- Ans
- 1. 1886 : 3068 : 4606
  - 2. 1951 : 3084 : 4217
  - 3. 2199 : 3377 : 4915
  - 4. 2194 : 3372 : 4910

Question ID : 6549786959  
Status : Not Answered  
Chosen Option : --

Q.21 Four numbers have been given, out of which three are alike in some manner and one is different. Select the number that is different.

- Ans
- 1. 165
  - 2. 177
  - 3. 198
  - 4. 132

Question ID : 6549786961  
Status : Answered  
Chosen Option : 2

Q.22 Revati is the sister of Sujit. Pranjal's mother is married to Sujit. Bhavita has one son and one daughter. Lopa is the sister of Pranjal, who is the paternal grandson of Bhavita. Lopa is the daughter of Ramya. How is Revati related to Ramya?

- Ans
- 1. Sister
  - 2. Husband's sister
  - 3. Daughter
  - 4. Brother's wife

Question ID : 6549787271  
Status : Answered  
Chosen Option : 2

Q.23 Select the option in which the numbers share the same relationship as that shared by the numbers in the given set.

(850, 645, 410)

- Ans
- 1. (550, 402, 135)
  - 2. (440, 229, 422)
  - 3. (558, 256, 356)
  - 4. (751, 396, 544)

Question ID : 6549788069  
Status : Not Answered  
Chosen Option : --

Q.24 Four letter-clusters have been given, out of which three are alike in some manner and one is different. Select the letter-cluster that is different.

- Ans
- 1. USPL
  - 2. MKHD
  - 3. YWTP
  - 4. PMJG

Question ID : 6549786970  
Status : Answered  
Chosen Option : 4

Q.25 Select the option figure which is NOT embedded in figure X as its part (rotation is NOT allowed).



Figure X

- Ans
- 1.
  - 2.
  - 3.
  - 4.

Question ID : 6549788087  
Status : Answered  
Chosen Option : 4