

Section : **General Intelligence**

Q.1 Two statements are given, followed by three conclusions numbered I, II and III. Assuming the statements to be true, even if they seem to be at variance with commonly known facts, decide which of the conclusions logically follow(s) from the statements.

Statements:

All cups are plates.

All plates are spoons.

Conclusions:

I. All plates are cups.

II. Some spoons are neither plates nor cups.

III. No spoon is a cup.

- Ans**
- 1. Only conclusion III follows.
 - 2. Only conclusion I follows.
 - 3. Only conclusion II follows.
 - 4. None of the conclusions follow.

Question ID : **6549788588**

Status : **Answered**

Chosen Option : **4**

Q.2 Four number-pairs have been given, out of which three are alike in some manner and one is different. Select the number-pair that is different.

- Ans**
- 1. 7 : 360
 - 2. 11 : 1342
 - 3. 12 : 1740
 - 4. 6 : 222

Question ID : **6549787365**

Status : **Answered**

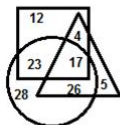
Chosen Option : **1**

Q.3 In a certain code language, UNREAL is coded as 1421518121 and RHYMES is coded as 8181325195. How will AIRWAY be coded in that language?

- Ans**
- 1. 912217215
 - 2. 812218251
 - 3. 912318251
 - 4. 192318125

Question ID : 6549787368
Status : Answered
Chosen Option : 3

Q.4 In the following Venn diagram, the square stands for inspectors, the triangle stands for home owners, and the circle stands for Indians. The given numbers represent the number of persons in that particular category.



How many Indian Inspectors are also home owners?

- Ans**
- 1. 26
 - 2. 17
 - 3. 23
 - 4. 40

Question ID : 6549787383
Status : Answered
Chosen Option : 2

Q.5 Himanshu is the daughter of Anjan. Mrunalini, Archana's sister, has a son Rahul and a daughter Sunayana. Kalpika is the mother of Kripal and sister of Sunayana's mother. Rahul is the cousin of Kripal. Kripal is the brother of Himanshu. How is Archana related to Anjan?

- Ans**
- 1. Niece
 - 2. Cousin
 - 3. Sister
 - 4. Sister-in-law

Question ID : 6549787776
Status : Not Answered
Chosen Option : --

Q.6 Select the option that is related to the third word in the same way as the second word is related to the first word.

Keyboard : Touchpad : : Mouse : ?

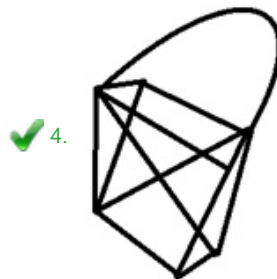
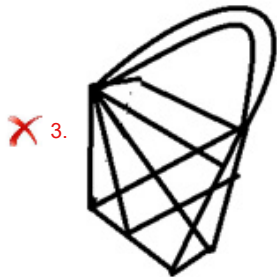
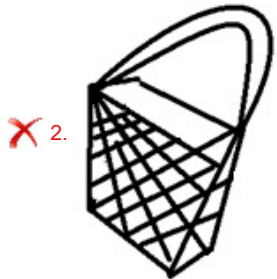
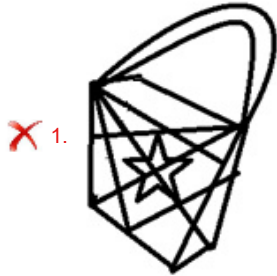
- Ans
- 1. Joystick
 - 2. Monitor
 - 3. Laptop
 - 4. Computer

Question ID : 6549788582
Status : Answered
Chosen Option : 1

Q.7 In which of the following options is the given figure embedded?

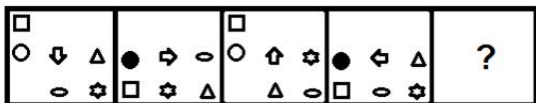


Ans

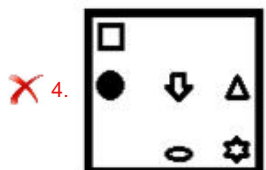
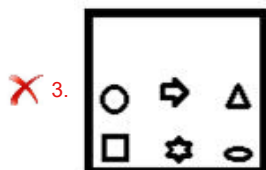
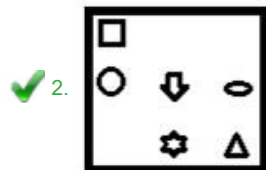
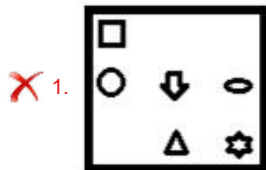


Question ID : 6549788592
Status : Answered
Chosen Option : 4

Q.8 Select the figure from among the given options that can replace the question mark (?) in the following series.



Ans



Question ID : 6549787378
 Status : Not Answered
 Chosen Option : --

Q.9 Select the option in which the words share the same relationship as that shared by the given pair of words.

Trump : Bridge

- Ans
- ✗ 1. Header : Cycling
 - ✗ 2. Pinching : Swimming
 - ✓ 3. Dribble : Football
 - ✗ 4. Crank : Polo

Question ID : 6549787373
 Status : Answered
 Chosen Option : 1

Q.10 Which of the following set of numbers, if placed from left to right in place of the letters, will fit the given equation?

$$A \times B \div C - D + E = 14$$

- Ans
- 1. A = 4, B = 13, C = 3, D = 5, E = 2
 - 2. A = 13, B = 3, C = 4, D = 5, E = 2
 - 3. A = 4, B = 3, C = 2, D = 5, E = 13
 - 4. A = 4, B = 13, C = 2, D = 3, E = 5

Question ID : 6549788572
Status : Answered
Chosen Option : 3

Q.11 Select the option that is related to the fourth number in the same way as the first number is related to the second number and the fifth number is related to the sixth number.

$$14 : 49 :: ? : 256 :: 20 : 100$$

- Ans
- 1. 20
 - 2. 8
 - 3. 16
 - 4. 32

Question ID : 6549787361
Status : Answered
Chosen Option : 4

Q.12 From the given options choose the one in which the set of numbers do not follow the same Logic/Rule/Relation as the numbers given in below set.

(13, 9, 117)

- Ans
- 1. (18, 6, 108)
 - 2. (19, 8, 162)
 - 3. (14, 7, 98)
 - 4. (17, 5, 85)

Question ID : 6549788574
Status : Answered
Chosen Option : 2

Q.13 In a code language, if APTITUDE is written as ADEIPTTU, then how will ATTITUDE be written in the same language?

- Ans
- 1. ADETTUIT
 - 2. ITADEIAE
 - 3. ADEITTTU
 - 4. EIAETUIT

Question ID : 6549788579
Status : Answered
Chosen Option : 3

Q.14 Select the number that can replace the question mark (?) in the following series.

432, 413, 396, ?, 368, 357, 348

- Ans
- 1. 386
 - 2. 381
 - 3. 375
 - 4. 365

Question ID : 6549788576
Status : Answered
Chosen Option : 2

Q.15 Select the correct option that indicates the arrangement of the given words in the order in which they appear in an English dictionary.

- 1. Docket
- 2. Domicile
- 3. Dockyard
- 4. Docile
- 5. Dormitory

- Ans
- 1. 4, 1, 3, 5, 2
 - 2. 1, 4, 3, 2, 5
 - 3. 4, 3, 1, 2, 5
 - 4. 4, 1, 3, 2, 5

Question ID : 6549787366
Status : Answered
Chosen Option : 4

Q.16 Select the option that is related to the third letter-cluster in the same way as the second letter-cluster is related to the first letter-cluster.

CARBON : NOBCAR :: PUZZLE : ?

- Ans
- 1. ZZPULE
 - 2. PELUZZ
 - 3. ZPELUZ
 - 4. ELZPUZ

Question ID : 6549788581
Status : Answered
Chosen Option : 4

Q.17 Select the correct mirror image of the given figure when a mirror is placed on the right side of the figure.

CHEMISTRY

Ans

✓ 1.

CHEMISTRY

✗ 2.

YRTSIMEHC

✗ 3.

CHEMISTRY

✗ 4.

CHEMISTRY

Question ID : 6549788594

Status : Answered

Chosen Option : 1

Q.18 Vishal divided an amount of ₹1,122 among his four friends A, B, C and D in the ratio of 11 : 17 : 14 : 9, respectively. How many more rupees did B get than D?

Ans

✗ 1. ₹164

✗ 2. ₹198

✓ 3. ₹176

✗ 4. ₹274

Question ID : 6549787359

Status : Answered

Chosen Option : 3

Q.19 Select the combination of letters that when sequentially placed in the blanks of the given series will complete the series.

r _ l _ q r p _ b q _ p l b _ r _ l _ q

Ans

✓ 1. p, b, l, r, q, p, b

✗ 2. p, l, b, q, r, b, p

✗ 3. p, p, l, b, r, q, b

✗ 4. l, p, q, b, r, p, b

Question ID : 6549786563

Status : Not Answered

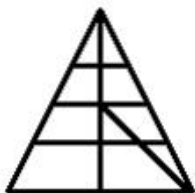
Chosen Option : --

Q.20 Four letter-clusters have been given, out of which three are alike in some manner and one is different. Select the letter-cluster that is different.

- Ans 1. NLID
 2. CAXT
 3. SQNJ
 4. HFCY

Question ID : 6549787374
Status : Answered
Chosen Option : 1

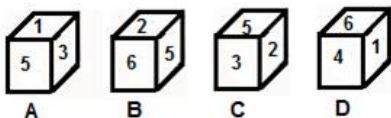
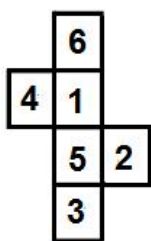
Q.21 How many triangles are there in the given figure?



- Ans 1. 17
 2. 18
 3. 19
 4. 15

Question ID : 6549787379
Status : Answered
Chosen Option : 3

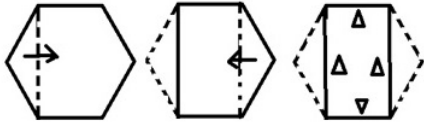
Q.22 Select the cube(s) that can be formed by folding the given sheet along the lines.



- Ans 1. Only C and D
 2. Only A, C and D
 3. Only B and C
 4. Only A and C

Question ID : 6549787377
Status : Answered
Chosen Option : 1

Q.23 A paper is folded and cut as shown in the following figures. How will it appear when unfolded?



Ans

✗ 1.



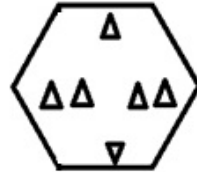
✗ 2.



✗ 3.



✓ 4.



Question ID : 6549788593
Status : Answered
Chosen Option : 1

Q.24 Three of the following four words are alike in a certain way and one is different. Select the odd one.

Ans

- ✗ 1. Mouse
- ✗ 2. Scanner
- ✓ 3. Monitor
- ✗ 4. Keypad

Question ID : 6549788587
Status : Answered
Chosen Option : 3

Q.25 Select the option in which the numbers are related in the same way as are the numbers of the following set.

(12, 8, 116)

- Ans
- 1. (24, 12, 296)
 - 2. (14, 6, 98)
 - 3. (16, 6, 112)
 - 4. (20, 11, 251)

Question ID : 6549787363
Status : Answered
Chosen Option : 4