

Section : General Intelligence

Q.1 Read the given statements and conclusions carefully. Assuming that the information given in the statements is true, even if it appears to be at variance with commonly known facts, decide which of the given conclusions logically follow(s) from the statements.

Statements:

All jasmines are flowers.

No flower is a plant.

Some plants are herbs.

Conclusions:

I. Some jasmines are herbs.

II. No flower is a herb.

III. No jasmine is a flower.

- Ans** 1. Either conclusion I or II follows .
2. Only conclusion I follows .
3. Only conclusions II and III follow .
4. Only conclusions I and II follow.

Question ID : 6549789699
Status : Answered
Chosen Option : 1

Q.2 Four letter-clusters have been given, out of which three are alike in some manner and one is different. Select the letter-cluster that is different.

- Ans** 1. JFCY
2. RVYC
3. MQTX
4. LHFB

Question ID : 6549788990
Status : Answered
Chosen Option : 4

Q.3 Select the option in which the numbers are related in the same way as are the numbers of the following set.

{8, 24, 6}

- Ans
- 1. {8, 16, 3}
 - 2. {3, 12, 8}
 - 3. {14, 44, 8}
 - 4. {9, 40, 8}

Question ID : 6549789685
Status : Answered
Chosen Option : 2

Q.4 Select the option in which the numbers share the same relationship as that shared by the given pair of numbers.

10 : 17

- Ans
- 1. 26 : 37
 - 2. 35 : 50
 - 3. 17 : 28
 - 4. 20 : 32

Question ID : 6549788977
Status : Answered
Chosen Option : 1

Q.5 Four numbers have been given, out of which three are alike in some manner and one is different. Select the number that is different.

- Ans
- 1. 518
 - 2. 344
 - 3. 126
 - 4. 1332

Question ID : 6549788981
Status : Answered
Chosen Option : 1

Q.6 'Accident' is related to 'Carelessness' in the same way as 'Success' is related to _____.

- Ans
- 1. Employment
 - 2. Promotion
 - 3. Diligence
 - 4. Progress

Question ID : 6549789693
Status : Answered
Chosen Option : 4

Q.7 B and D are cousin brothers. A is the father of B and the uncle of C, who is the sister of D. C's mother is married to E, who is the brother of A. How is B related to C's father?

- Ans
- 1. Son
 - 2. Brother-in-law
 - 3. Uncle
 - 4. Nephew

Question ID : 6549788887
Status : Answered
Chosen Option : 4

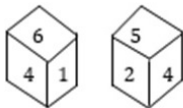
Q.8 Select the option in which the numbers are related in the same way as are the numbers of the following set.

{9, 21, 16}

- Ans
- 1. {4, 20, 18}
 - 2. {36, 42, 64}
 - 3. {8, 60, 12}
 - 4. {16, 32, 25}

Question ID : 6549788979
Status : Answered
Chosen Option : 2

Q.9 Two different positions of the same dice are shown. Select the number that will be at the top if '1' is at the bottom.

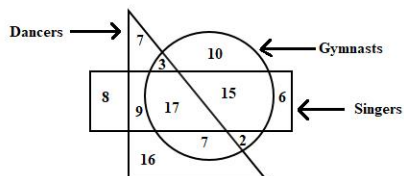


- Ans
- 1. 5
 - 2. 4
 - 3. 6
 - 4. 2

Question ID : 6549788993
Status : Answered
Chosen Option : 1

Q.10 In the given diagram, the shapes indicate the categories of persons. The numbers given in the different segments represent the number of persons in that category.

How many dancers are either gymnasts or singers but NOT both?



- Ans**
- 1. 15
 - 2. 11
 - 3. 19
 - 4. 22

Question ID : 6549788999
 Status : Answered
 Chosen Option : 3

Q.11 Select the option that is related to the third letter-cluster in the same way as the second letter-cluster is related to the first letter-cluster.

PRMV : KMHQ :: SQVM : ?

- Ans**
- 1. VXSB
 - 2. NLPG
 - 3. NLQH
 - 4. OMRJ

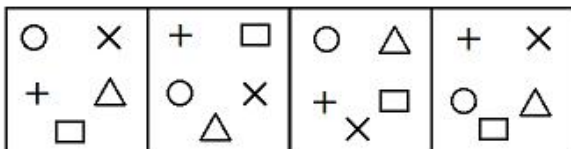
Question ID : 6549789692
 Status : Answered
 Chosen Option : 3

Q.12 In a certain code language, PRICK is coded as 30 and MAKE is coded as 12. How will CRAZY be coded in that language?

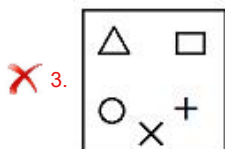
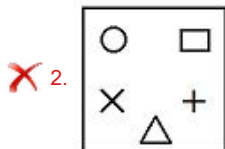
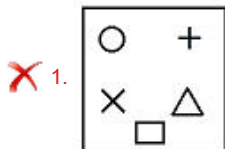
- Ans**
- 1. 28
 - 2. 30
 - 3. 24
 - 4. 35

Question ID : 6549788984
 Status : Answered
 Chosen Option : 1

Q.13 Select the figure that will come next in the following series.



Ans



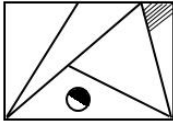
Question ID : 6549788994
 Status : Answered
 Chosen Option : 4

Q.14 In a certain code language, PLEASANT is written as BFMQUOBT. How will DISTANCE be written in that language?

- Ans
- ✗ 1. TJEBUFDO
 - ✗ 2. UTESBFOD
 - ✓ 3. UTJEFDOB
 - ✗ 4. UTJEBODF

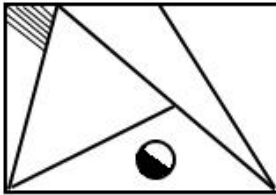
Question ID : 6549789690
 Status : Answered
 Chosen Option : 2

Q.15 Select the correct mirror image of the given figure when the mirror is placed at the right side of the figure.

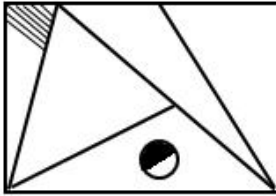


Ans

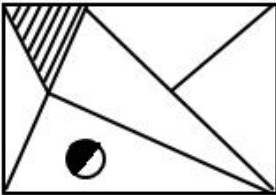
✗ 1.



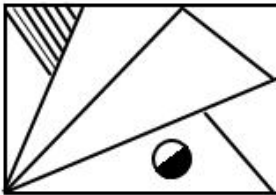
✓ 2.



✗ 3.

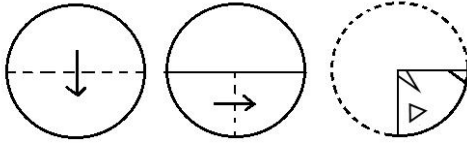


✗ 4.

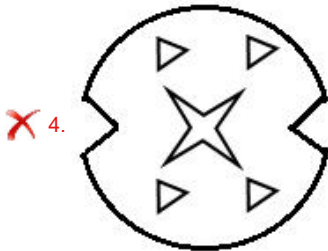
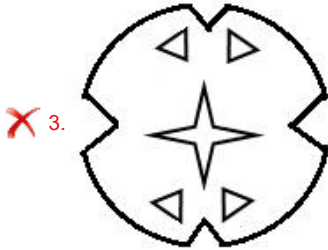
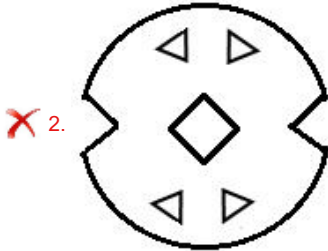
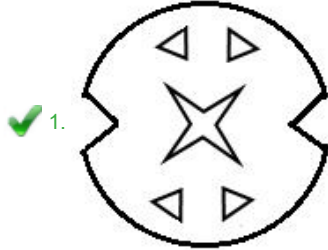


Question ID : 6549789705
Status : Answered
Chosen Option : 1

Q.16 The sequence of folding a piece of circular paper and the manner in which the folded paper has been cut is shown in the following figures. How would this paper look when unfolded?



Ans



Question ID : 6549789704
Status : Answered
Chosen Option : 1

Q.17 Select the number from among the given options that can replace the question mark (?) in the following series.

1, 6, 25, 76, ?, 154

- Ans
- 1. 153
 - 2. 134
 - 3. 164
 - 4. 123

Question ID : 6549789687
Status : Answered
Chosen Option : 3

Q.18 Four letter-clusters have been given, out of which three are alike in some manner and one is different. Select the letter-cluster that is different.

- Ans
- 1. MPJH
 - 2. YBVT
 - 3. DGBZ
 - 4. GJDB

Question ID : 6549789698
Status : Answered
Chosen Option : 3

Q.19 Which two signs should be interchanged to make the following equation correct?

$$18 - 12 \div 4 + 8 \times 2 = 5$$

- Ans
- 1. \div and \times
 - 2. $-$ and $+$
 - 3. $+$ and $+$
 - 4. $+$ and $-$

Question ID : 6549789683
Status : Answered
Chosen Option : 3

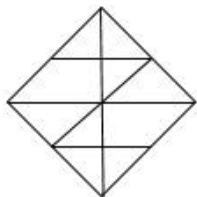
Q.20 Select the option in which the words share the same relationship as that shared by the given pair of words.

Anger : Emotion

- Ans
- 1. Table : Wood
 - 2. Rabbit : Mammal
 - 3. Alertness : Courage
 - 4. Grass : Lawn

Question ID : 6549788989
Status : Answered
Chosen Option : 1

Q.21 How many triangles are there in the following figure?



- Ans
- 1. 18
 - 2. 16
 - 3. 20
 - 4. 22

Question ID : 6549788995
Status : Answered
Chosen Option : 1

Q.22 Select the combination of letters that when sequentially placed in the gaps of the given letter series will complete the series

g_ ctd_ wpmz_ pctdawp_ zgpct_ a_ pmz

- Ans
- 1. pagmdw
 - 2. pgadmw
 - 3. pamgwd
 - 4. pgdamw

Question ID : 6549788179
Status : Answered
Chosen Option : 1

Q.23 The price of fuel has now increased by 20%. If a customer wants to keep his expenditure on fuel the same, he should reduce the consumption of the quantity of fuel by:

- Ans
- 1. $12\frac{1}{2}\%$
 - 2. $16\frac{2}{3}\%$
 - 3. 15%
 - 4. 20%

Question ID : 6549788975
Status : Answered
Chosen Option : 2

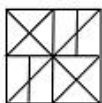
Q.24 Select the option in which the given figure is embedded (rotation is NOT allowed).



Ans



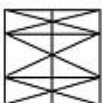
1.



2.



3.



4.



Question ID : 6549789703
Status : Answered
Chosen Option : 1

Q.25 Select the correct option that indicates the arrangement of the given words in a logical and meaningful order.

- 1. Cook
- 2. Morning
- 3. Lunch
- 4. Fish
- 5. Market
- 6. Dish

Ans



1, 2, 5, 4, 1, 6, 3



2, 4, 5, 2, 6, 3, 1



3, 5, 2, 4, 1, 6, 3



4, 4, 1, 6, 3, 2, 5

Question ID : 6549788982
Status : Answered
Chosen Option : 1