

Section : **General Intelligence**

**Q.1** Select the option in which the numbers are related in the same way as are the numbers of the following set.

(23, 4, 92)

- Ans**
- 1. (26, 5, 132)
  - 2. (27, 8, 218)
  - 3. (29, 7, 203)
  - 4. (24, 6, 146)

Question ID : **6549787968**  
Status : **Answered**  
Chosen Option : **3**

**Q.2** Select the option that is related to the third term in the same way as the second term is related to the first term.

Indonesia : Jakarta :: Canada : ?

- Ans
- 1. Doha
  - 2. Ottawa
  - 3. Seoul
  - 4. Muscat

Question ID : 6549787976  
 Status : Answered  
 Chosen Option : 2

**Q.3** Select the option that represents the letters that, when placed from left to right in the blanks below, will complete the letter sequence correctly.

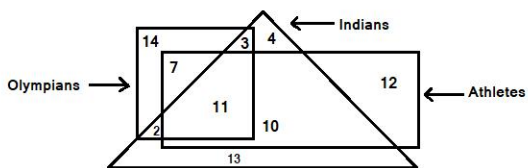
Q \_ \_ R R K Z \_ \_ K Z R T \_ \_ R

- Ans
- 1. K Z R S K Z
  - 2. Q Z R S P R
  - 3. K Z R P R Z
  - 4. K Z R S Z T

Question ID : 6549788482  
 Status : Marked For Review  
 Chosen Option : 1

**Q.4** In the given diagram, the triangle stands for 'Indians', the rectangle stands for 'Athletes', and the square stands for 'Olympians'. The numbers given in the different segments represent the number of persons in that category.

How many Indians are either Athletes or Olympians but NOT both?



- Ans
- 1. 24
  - 2. 15
  - 3. 20
  - 4. 12

Question ID : 6549789302  
 Status : Marked For Review  
 Chosen Option : 4

**Q.5** In a certain code language, PROFANE is written as KOLCZKV. How will DISOBEY be written in that language?

- Ans**
- 1. APRYLVV
  - 2. WFHLYBB
  - 3. WHGYLBB
  - 4. ARPLYVV

Question ID : 6549787973  
Status : Answered  
Chosen Option : 2

**Q.6** Select the option in which the numbers share the same relationship as that shared by the given pair of numbers.

18 : 42

- Ans**
- 1. 24 : 56
  - 2. 15 : 36
  - 3. 9 : 24
  - 4. 12 : 32

Question ID : 6549789280  
Status : Answered  
Chosen Option : 2

**Q.7** Select the correct mirror image of the given combination when the mirror is placed at 'PQ' as shown.

MEDICINES |  
P  
Q

- Ans**
- 1. MEDICINES
  - 2. 2 MEDICINES
  - 3. MEDICINES 2
  - 4. MEDICINES 2

Question ID : 6549787988  
Status : Answered  
Chosen Option : 2

**Q.8** Select the option in which the numbers are related in the same way as are the numbers of the following set.

{5, 15, 20}

- Ans
- 1. {24, 8, 18}
  - 2. {10, 13, 17}
  - 3. {4, 14, 24}
  - 4. {9, 14, 19}

Question ID : 6549789282  
Status : Answered  
Chosen Option : 3

**Q.9** Read the given statements and conclusions carefully. Assuming that the information given in the statements is true, even if it appears to be at variance with commonly known facts, decide which of the given conclusions logically follow(s) from the statements.

**Statements:**

All combs are scales.  
Some routers are combs.  
All gloves are routers.

**Conclusions:**

- I. All gloves are scales.
- II. Some gloves are scales.
- III. Some scales are routers.
- IV. All routers are scales.

- Ans
- 1. Only conclusion III follows .
  - 2. Only conclusion II follows .
  - 3. Only conclusion I follows .
  - 4. Both conclusions I and III follow.

Question ID : 6549787982  
Status : Answered  
Chosen Option : 1

**Q.10** Select the correct option that indicates the arrangement of the given places in a logical and meaningful order.

- 1. Hyderabad
- 2. Nagpur
- 3. Dehradun
- 4. Bhopal
- 5. Madurai
- 6. Agra

- Ans
- 1. 5, 1, 4, 3, 2, 6
  - 2. 3, 6, 2, 4, 1, 5
  - 3. 5, 1, 2, 4, 3, 6
  - 4. 3, 6, 4, 2, 1, 5

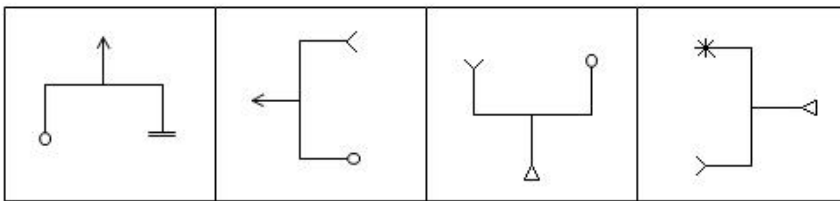
Question ID : 6549789285  
Status : Answered  
Chosen Option : 4

Q.11 Four letter-clusters have been given, out of which three are alike in some manner and one is different. Select the letter-cluster that is different.

- Ans
- 1. DJWQ
  - 2. GBTV
  - 3. CGXT
  - 4. HDSW

Question ID : 6549789293  
Status : Answered  
Chosen Option : 2

Q.12 Select the figure that will come next in the following series.



Ans

- 1.
- 2.
- 3.
- 4.

Question ID : 6549789297  
Status : Marked For Review  
Chosen Option : 4

**Q.13** Select the option in which the words share the same relationship as that shared by the given pair of words.

Car : Truck

- Ans  1. Chair : Bench  
 2. Thunder : Light  
 3. Shoe : Socks  
 4. Ball : Bat

Question ID : 6549789292  
Status : Answered  
Chosen Option : 1

**Q.14** Select the correct combination of mathematical signs that can sequentially replace the \* signs and balance the given equation.

$$216 * 6 * 8 * 64 * 48 = 500$$

- Ans  1. ÷, -, ×, +  
 2. ÷, +, ×, -  
 3. ×, +, ÷, -  
 4. ×, +, -, +

Question ID : 6549787966  
Status : Answered  
Chosen Option : 2

**Q.15** Four words have been given, out of which three are alike in some manner and one is different. Select the word that is different.

- Ans  1. Ridiculous  
 2. Gorgeous  
 3. Exalted  
 4. August

Question ID : 6549787981  
Status : Answered  
Chosen Option : 4

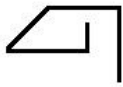
**Q.16** Two different positions of the same dice are shown. Select the number that will be at the top if '6' is at the bottom.



- Ans  1. 5  
 2. 4  
 3. 2  
 4. 1

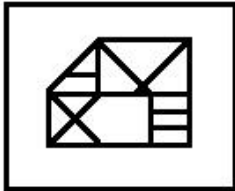
Question ID : 6549789296  
Status : Answered  
Chosen Option : 1

Q.17 Select the option in which the given figure is embedded (rotation is NOT allowed).



Ans

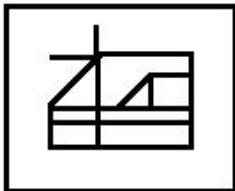
✗ 1.



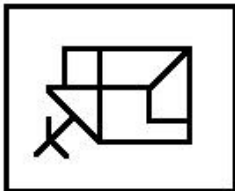
✗ 2.



✓ 3.



✗ 4.



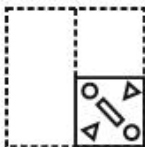
Question ID : 6549787986  
Status : Answered  
Chosen Option : 3

**Q.18** A sheet of paper is folded in a particular manner and several punches are made. When unfurled, the paper looks like the given figure. Select the option that follows the manner in which the paper is folded and punched.

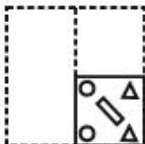


**Ans**

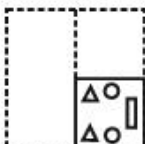
✓ 1.



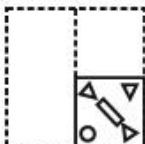
✗ 2.



✗ 3.



✗ 4.



Question ID : 6549787987  
 Status : Answered  
 Chosen Option : 1

**Q.19** Select the number from among the given options that can replace the question mark (?) in the following series.

4, 7, 11, 17, 27, 45, ?

✗ 1. 87

✓ 2. 79

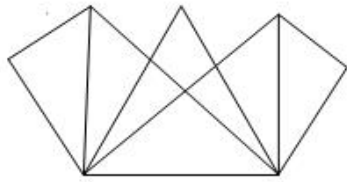
✗ 3. 78

✗ 4. 97

Question ID : 6549787970  
 Status : Answered  
 Chosen Option : 2



Q.20 How many triangles are there in the following figure?



- Ans
- 1. 12
  - 2. 18
  - 3. 16
  - 4. 14

Question ID : 6549789298  
Status : Marked For Review  
Chosen Option : 4

Q.21 Pointing to the photograph of a lady, Sukanya said, "Her son's son is the brother of my daughter's sister." How is the lady related to Sukanya?

- Ans
- 1. Mother
  - 2. Mother-in-law
  - 3. Daughter
  - 4. Sister

Question ID : 6549787170  
Status : Answered  
Chosen Option : 2

Q.22 Krishna gave  $\frac{1}{9}$  of his savings to his son,  $\frac{3}{4}$  of the remaining to his first daughter, and the rest to his second daughter. If the first daughter received ₹880 more than the second one, how much did the son get?

- Ans
- 1. ₹225
  - 2. ₹245
  - 3. ₹200
  - 4. ₹220

Question ID : 6549789278  
Status : Answered  
Chosen Option : 4

Q.23 In a certain code language, MACHINE is coded as 5861944. How will STORK be coded in that language?

- Ans
- 1. 96479
  - 2. 12692
  - 3. 87397
  - 4. 86496

Question ID : 6549789287  
Status : Not Answered  
Chosen Option : --

Q.24 Select the option that is related to the third term in the same way as the second term is related to the first term.

SACRED : VXEPIZ :: WINTER : ?

- Ans
- 1. TPLIRS
  - 2. ZPFIRN
  - 3. ZFPRIN
  - 4. TLPRIS

Question ID : 6549787975  
Status : Answered  
Chosen Option : 3

Q.25 Four numbers have been given, out of which three are alike in some manner and one is different. Select the number that is different.

- Ans
- 1. 678
  - 2. 234
  - 3. 589
  - 4. 345

Question ID : 6549789284  
Status : Marked For Review  
Chosen Option : 3