

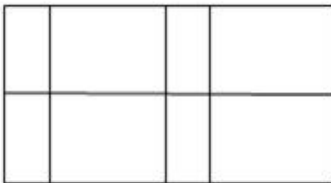
Section : **General Intelligence**

Q.1 Four numbers have been given in the options, out of which three are alike in some manner and one is different. Select the number that is different.

- Ans
- 1. 2704
 - 2. 1948
 - 3. 2116
 - 4. 1936

Question ID : **6549786355**
Status : **Answered**
Chosen Option : **2**

Q.2 How many rectangles are there in the given figure?



- Ans
- 1. 27
 - 2. 33
 - 3. 30
 - 4. 29

Question ID : **6549786369**
Status : **Not Attempted and Marked For Review**
Chosen Option : --

Q.3 Select the correct option that indicates the arrangement of the given words in a logical and meaningful order.

1. Armlet
2. Belt
3. Ascot
4. Socks
5. Turban

- Ans
- 1. 3-5-1-4-2
 - 2. 1-2-5-3-4
 - 3. 5-3-1-2-4
 - 4. 3-2-1-5-4

Question ID : 6549786356
Status : Answered
Chosen Option : 3

Q.4 Select the option in which the numbers are related in the same way as are the numbers of the following set.

173 : 125 : 85

- Ans
- 1. 365 : 293 : 229
 - 2. 285 : 221 : 135
 - 3. 259 : 199 : 147
 - 4. 293 : 228 : 171

Question ID : 6549786353
Status : Answered
Chosen Option : 3

Q.5 Select the combination of letters that when sequentially placed in the blanks of the given series will complete the series.

_ S _ E _ S Z _ F S _ E

- Ans
- 1. F E S Z E
 - 2. Z F S E Z
 - 3. F Z F E Z
 - 4. F S E Z F

Question ID : 6549789777
Status : Answered
Chosen Option : 3

Q.6 तीन मित्रों अमन, ईशान और अनीश के पास क्रमशः 12, 16 और 3 सेब हैं। यदि अमन, ईशान को अनीश के पास मौजूद सेबों के दोगुने सेब देता है और अनीश को 4 सेब देता है, तो अमन के पास कितने सेब बचते हैं?

- Ans
- 1. 3
 - 2. 5
 - 3. 4
 - 4. 2

Question ID : 6549786349
Status : Answered
Chosen Option : 4

Q.7 Select the number from among the given options that can replace the question mark (?) in the following series.

56, 56, 54, 162, 158, ?

- Ans
- 1. 790
 - 2. 830
 - 3. 268
 - 4. 456

Question ID : 6549787465
Status : Marked For Review
Chosen Option : 2

Q.8 Select the option that is related to the third word in the same way as the second word is related to the first word.

Googley : Cricket :: Gambit : ?

- Ans
- 1. Basketball
 - 2. Football
 - 3. Cycling
 - 4. Chess

Question ID : 6549787471
Status : Answered
Chosen Option : 1

Q.9 चार शब्द दिए गए हैं, जिनमें से तीन एक निश्चित प्रकार से समान हैं, जबकि एक उनसे असंगत है। उस असंगत शब्द का चयन कीजिए।

- Ans
- 1. कवक विज्ञान
 - 2. लवचा विज्ञान
 - 3. वृक्क विज्ञान
 - 4. हृदय रोग विज्ञान

Question ID : 6549787476
Status : Answered
Chosen Option : 1

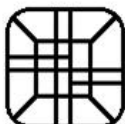
Q.10 Select the option that is related to the third term in the same way as the second term is related to the first term.

TAMPO : SCJ TJ :: FIFTY : ?

- Ans
- 1. EKCYS
 - 2. EKDXU
 - 3. EKCXT
 - 4. ELBXT

Question ID : 6549787470
Status : Answered
Chosen Option : 3

Q.11 Select the option that is embedded in the given figure (rotation is NOT allowed).



- Ans
- 1.
 - 2.
 - 3.
 - 4.

Question ID : 6549787481
Status : Answered
Chosen Option : 4

Q.12 In a certain code language, NAMELY is coded as 74 and MANAGE is coded as 45. How will MUSER be coded in that language?

- Ans
- 1. 88
 - 2. 72
 - 3. 80
 - 4. 68

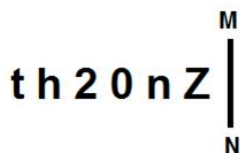
Question ID : 6549786358
Status : Answered
Chosen Option : 1

Q.13 Manyak is the son of Aravind. Manyak and Kashyap are brothers. Durga is the mother of Kashyap. Sanhit is the brother of Aravind. Hruday is the son of Sanhit. How is Hruday related to Kashyap?

- Ans
- 1. Son-in-law
 - 2. Cousin
 - 3. Son
 - 4. Uncle

Question ID : 6549786665
Status : Answered
Chosen Option : 2

Q.14 Select the correct mirror image of the given combination when the mirror is placed at MN as shown.



- Ans
- 1. Σ u 0 Σ h t
 - 2. Σ n 0 Z h t
 - 3. Σ n 0 Σ h t
 - 4. Z n 0 Σ h t

Question ID : 6549787483
Status : Answered
Chosen Option : 3

Q.15 Which two numbers should be interchanged to make the given equation correct?

$$25 \times 7 + 20 - 40 \div 4 = 210$$

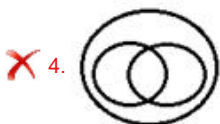
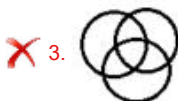
- Ans
- 1. 20 and 7
 - 2. 25 and 20
 - 3. 20 and 40
 - 4. 40 and 25

Question ID : 6549787461
Status : Answered
Chosen Option : 3

Q.16 Select the Venn diagram that best represents the relationship between the following classes.

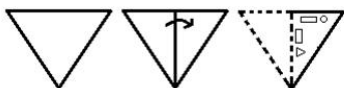
Flowers, White, Cloths

Ans

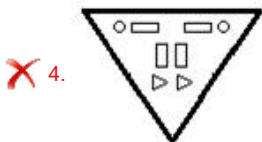
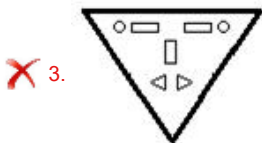
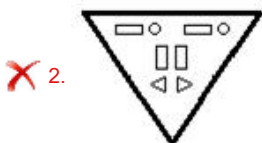
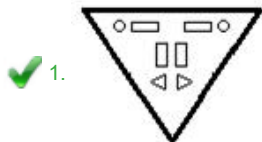


Question ID : 6549786373
Status : Answered
Chosen Option : 1

Q.17 The sequence of folding a piece of paper and the manner in which the folded paper has been cut is shown in the following figures. How would this paper look when unfolded?



Ans



Question ID : 6549787482
Status : Answered
Chosen Option : 1

Q.18 Select the option in which the numbers share the same relationship as that shared by the given pair of numbers.

93 : 87

- Ans
- 1. 96 : 92
 - 2. 64 : 61
 - 3. 58 : 55
 - 4. 49 : 53

Question ID : 6549786351
Status : Answered
Chosen Option : 1

Q.19 Three different positions of the same dice are shown. Select the number that will be on the face opposite to the face having the number 1.



- Ans
- 1. 2
 - 2. 3
 - 3. 4
 - 4. 6

Question ID : 6549786367
Status : Answered
Chosen Option : 3

Q.20 Read the given statements and conclusions carefully. Assuming that the information given in the statements is true, even if it appears to be at variance with commonly known facts, decide which of the given conclusions logically follow(s) from the statements.

Statements:

- Some insects are animals.
- Some animals are frogs.
- All frogs are cats.

Conclusions:

- I. Some cats are frogs.
- II. Some frogs are animals.
- III. Some animals are insects.

- Ans
- 1. Only conclusions II and III follow
 - 2. All conclusions follow
 - 3. Only conclusions I and III follow
 - 4. Only conclusions I and II follow

Question ID : 6549787477
Status : Answered
Chosen Option : 2

Q.21 Four letter-clusters have been given in the options, out of which three are alike in some manner and one is different. Select the letter-cluster that is different.

- Ans 1. JNRV
 2. FKOR
 3. RWAD
 4. LQUX

Question ID : 6549786364
Status : Answered
Chosen Option : 1

Q.22 In a certain code language, 'PENCIL' is written as 'CEILNP' and 'FROST' is written as 'FORST'. How will 'DUSTBIN' be written in that language?

- Ans 1. BDNISTU
 2. BDINSUT
 3. BDINSTU
 4. DIBNSTU

Question ID : 6549787468
Status : Marked For Review
Chosen Option : 3

Q.23 Select the option in which the numbers are related in the same way as are the numbers of the following set.

(4, 25, 105)

- Ans 1. (14, 50, 180)
 2. (26, 52, 275)
 3. (34, 52, 166)
 4. (12, 22, 87)

Question ID : 6549787463
Status : Answered
Chosen Option : 1

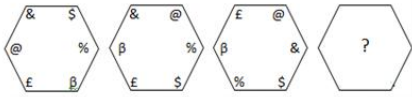
Q.24 Select the option in which the words share the same relationship as that shared by the given pair of words.

Papaya : Vitamin C

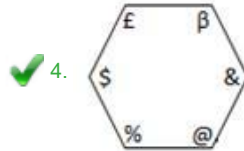
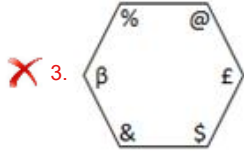
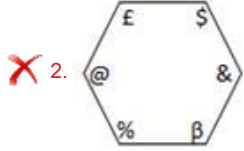
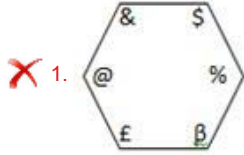
- Ans 1. Carrot : Vitamin B
 2. Apple : Vitamin D
 3. Gooseberry : Vitamin C
 4. Guava : Vitamin A

Question ID : 6549786363
Status : Answered
Chosen Option : 1

Q.25 Select the figure from among the given options that can replace the question mark (?) in the following series.



Ans



Question ID : **6549786368**
Status : **Answered**
Chosen Option : **2**

