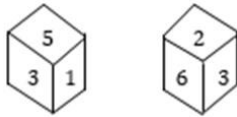


Q.1 Two different positions of the same dice are shown. Select the number that will be at the top if '1' is at the bottom.



- Ans
- 1. 4
 - 2. 5
 - 3. 6
 - 4. 2

Question ID : 6549788892
Status : Answered
Chosen Option : 4

Q.2 Vineet is the husband of Antima. Dev is the brother of Kusha. Shalini is the mother of Kusha's mother. Dev is the son of Vineet. How is Antima related to Shalini?

- Ans
- 1. Mother
 - 2. Maternal aunt
 - 3. Daughter
 - 4. Sister

Question ID : 6549788483
Status : Answered
Chosen Option : 3

Q.3 Select the option in which the numbers are related in the same way as are the numbers of the following set.

{8, 17, 15}

- Ans
- 1. {7, 25, 24}
 - 2. {3, 8, 5}
 - 3. {6, 10, 9}
 - 4. {9, 15, 11}

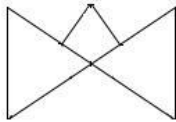
Question ID : 6549788878
Status : Answered
Chosen Option : 1

Q.4 In a certain code language, SEMANTIC is coded as 14485293. How will PRACTICE be coded in that language?

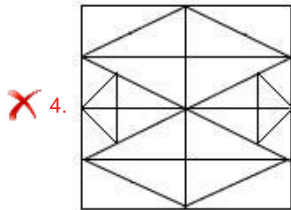
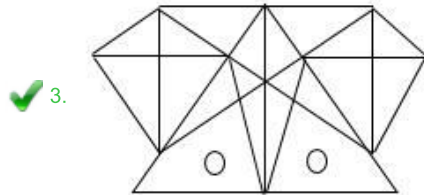
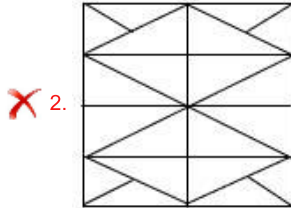
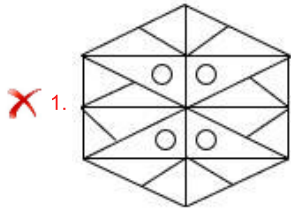
- Ans
- 1. 29137934
 - 2. 81943145
 - 3. 79832934
 - 4. 79132935

Question ID : 6549788883
Status : Marked For Review
Chosen Option : 4

Q.5 Select the option in which the given figure is embedded (rotation is NOT allowed).



Ans



Question ID : 6549789299
Status : Answered
Chosen Option : 3

Q.6 Four letter-clusters have been given, out of which three are alike in some manner and one is different. Select the letter-cluster that is different.

- Ans
- ✗ 1. BASK
 - ✗ 2. SPIT
 - ✗ 3. TRAM
 - ✓ 4. MOVE

Question ID : 6549788889
Status : Marked For Review
Chosen Option : 1

Q.7 Select the number from among the given options that can replace the question mark (?) in the following series.

10, 13, 19, 31, ?, 103

Ans 1. 55

2. 61

3. 73

4. 49

Question ID : 6549789283
Status : Answered
Chosen Option : 1

Q.8 Select the option in which the numbers share the same relationship as that shared by the given pair of numbers.

6 : 54

Ans 1. 10 : 108

2. 4 : 16

3. 2 : 9

4. 8 : 76

Question ID : 6549788876
Status : Marked For Review
Chosen Option : 2

Q.9 Four words have been given, out of which three are alike in some manner and one is different. Select the word that is different.

Ans 1. Termination

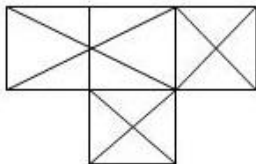
2. Conclusion

3. Progression

4. Valediction

Question ID : 6549789294
Status : Answered
Chosen Option : 3

Q.10 How many triangles are there in the following figure?



Ans 1. 30

2. 24

3. 20

4. 28

Question ID : 6549788894
Status : Marked For Review
Chosen Option : 4

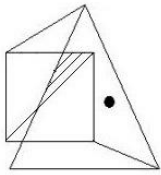
Q.11 Select the option in which the words share the same relationship as that shared by the given pair of words.

Trust : Faith

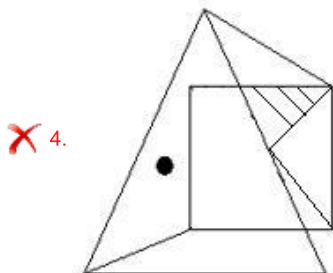
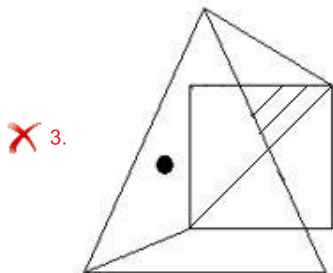
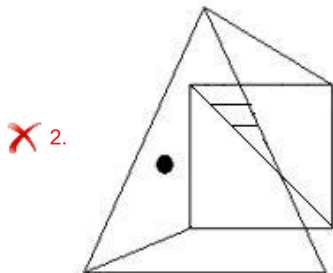
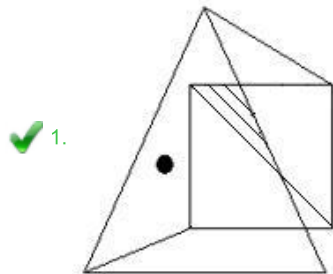
- Ans
- 1. Fair : Wholesome
 - 2. Joy : Success
 - 3. Disgust : Distaste
 - 4. Salary : Employment

Question ID : 654978888
Status : Answered
Chosen Option : 3

Q.12 Select the correct mirror image of the given figure when the mirror is placed at the right side of the figure.



Ans



Question ID : 6549789301
Status : Answered
Chosen Option : 1

Q.13 Select the letter-cluster that can replace the question mark (?) in the following series.

REST, SEST, SFST, ? , SFTU

- Ans
- 1. SFUT
 - 2. SFRT
 - 3. SFTT
 - 4. SGTT

Question ID : 6549788078
Status : Answered
Chosen Option : 3

Q.14 Select the correct option that indicates the arrangement of the given words in a logical and meaningful order.

1. Journey
2. Return
3. Destination
4. Reservation
5. Guided tour

- Ans
- 1. 3, 4, 1, 5, 2
 - 2. 3, 5, 4, 2, 1
 - 3. 4, 5, 3, 1, 2
 - 4. 3, 4, 2, 1, 5

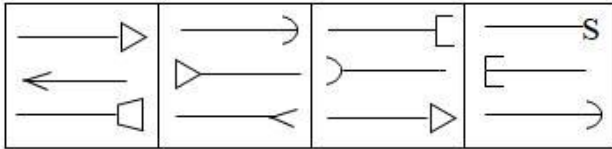
Question ID : 6549788881
Status : Answered
Chosen Option : 3

Q.15 In a certain code language, INTERACT is written as TNIRETCA. How will SATURDAY be written in that language?

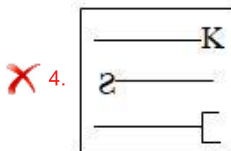
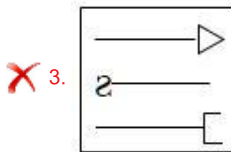
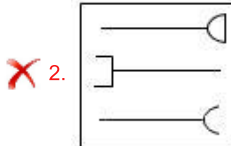
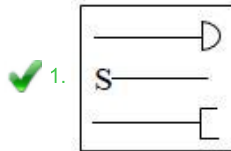
- Ans
- 1. UTASYADR
 - 2. ASUTDRYA
 - 3. TASURYDA
 - 4. TASRUYAD

Question ID : 6549789286
Status : Answered
Chosen Option : 4

Q.16 Select the figure that will come next in the following series.



Ans



Question ID : 6549788893
Status : Answered
Chosen Option : 1

Q.17 Select the option that is related to the third letter-cluster in the same way as the second letter-cluster is related to the first letter-cluster.

DJHF : JPNL :: KTQN : ?

- Ans
- ✗ 1. QWUS
 - ✗ 2. QHKN
 - ✗ 3. PZWS
 - ✓ 4. QZWT

Question ID : 6549789288
Status : Answered
Chosen Option : 4

Q.18 Which two signs should be interchanged to make the following equation correct?

$$8 + 12 \div 6 \times 8 - 9 = 8$$

- Ans
- ✗ 1. + and +
 - ✓ 2. × and +
 - ✗ 3. + and ×
 - ✗ 4. × and -

Question ID : 6549789279
Status : Answered
Chosen Option : 2

Q.19 Four numbers have been given, out of which three are alike in some manner and one is different. Select the number that is different.

- Ans
- 1. 245
 - 2. 385
 - 3. 59
 - 4. 315

Question ID : 6549788880
 Status : Answered
 Chosen Option : 3

Q.20 85 apples are to be distributed in a class consisting of boys and girls. If each boy gets 5 apples, then each girl will get 7 apples, and if each boy gets 4 apples, then each girl will get 9 apples. How many students are there in the class?

- Ans
- 1. 15
 - 2. 14
 - 3. 19
 - 4. 17

Question ID : 6549788874
 Status : Marked For Review
 Chosen Option : 1

Q.21 The sequence of folding a piece of paper and the manner in which the folded paper has been cut is shown below. How would this paper look when unfolded?



Ans

- 1.
- 2.
- 3.
- 4.

Question ID : 6549789300
 Status : Answered
 Chosen Option : 2

Q.22 'Musician' is related to 'Piano' in the same way as 'Farmer' is related to '_____'.
Ans

- 1. Bullock
- 2. Plough
- 3. Field
- 4. Cultivation

Question ID : 6549789289
Status : Answered
Chosen Option : 2

Q.23 Select the option in which the numbers are related in the same way as are the numbers of the following set.

{14, 44, 8}

- Ans
- 1. {12, 36, 9}
 - 2. {18, 54, 13}
 - 3. {5, 32, 11}
 - 4. {9, 38, 12}

Question ID : 6549789281
Status : Answered
Chosen Option : 3

Q.24 Read the given statements and conclusions carefully. Assuming that the information given in the statements is true, even if it appears to be at variance with commonly known facts, decide which of the given conclusions logically follow(s) from the statements.

Statements:

Some vehicles are cars.
All cars are four-wheelers.
Some four-wheelers are trucks.

Conclusions:

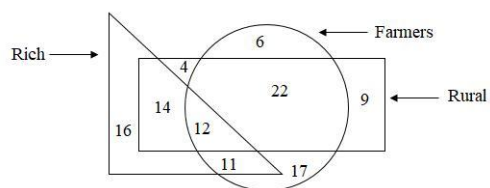
I. Some vehicles are trucks.
II. Some four-wheelers are vehicles.
III. Some trucks are cars.

- Ans
- 1. Only conclusions II and III follow
 - 2. None of the conclusions follow
 - 3. Only conclusion I follows
 - 4. Only conclusion II follows

Question ID : 6549789295
Status : Answered
Chosen Option : 4

Q.25 In the given diagram, the circle stands for 'farmers', the rectangle stands for 'rural', and the triangle stands for 'rich'.
The numbers given in the different segments represent the number of persons of that category.

How many rural people are either farmers or rich but NOT both?



- Ans
- 1. 28
 - 2. 36
 - 3. 25
 - 4. 47

Question ID : 6549788898
Status : Answered
Chosen Option : 2