

Section : **General Intelligence**

Q.1 Select the option in which the numbers are related in the same way as are the numbers of the following set.

(57, 126, 199)

- Ans
- 1. (29, 96, 168)
 - 2. (75, 148, 217)
 - 3. (43, 112, 178)
 - 4. (63, 132, 205)

Question ID : **6549786554**
Status : **Not Answered**
Chosen Option : --

Q.2 Vijay is 8 years younger than Amit. The sum of the current ages of Vijay and Amit is 42 years. What is the current age of Vijay?

- Ans
- 1. 15 years
 - 2. 25 years
 - 3. 21 years
 - 4. 17 years

Question ID : **6549789480**
Status : **Answered**
Chosen Option : **4**

Q.3 Read the given statements and conclusions carefully. Assuming that the information given in the statements is true, even if it appears to be at variance with commonly known facts, decide which of the given conclusions logically follow(s) from the statements.

Statements:

All camels are doves.
Some doves are eagles.

Conclusions:

I. All camels are eagles.
II. Some camels are eagles.
III. Some eagles are doves.
IV. Some doves are camels.

- Ans**
- 1. Both conclusions I and II follow .
 - 2. Both conclusions III and IV follow .
 - 3. Both conclusions II and III follow .
 - 4. Both conclusions I and IV follow .

Question ID : 6549786568

Status : Answered

Chosen Option : 2

Q.4 P and Q are husband and wife. P's father-in-law is R's wife's father. Q is the brother of T. How is P related to R's wife?

- Ans**
- 1. Brother
 - 2. Aunt
 - 3. Cousin
 - 4. Sister-in-law

Question ID : 6549789788

Status : Answered

Chosen Option : 4

Q.5 Select the number from among the given options that can replace the question mark (?) in the following series.

2, 4, 5, 19, 71, ?

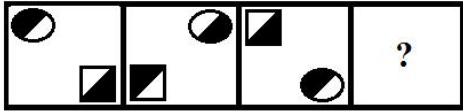
- Ans**
- 1. 216
 - 2. 361
 - 3. 316
 - 4. 261

Question ID : 6549786556

Status : Not Attempted and Marked For Review


Chosen Option : --

Q.6 Select the figure that will come next (in place of the question mark [?]) in the following figure series.

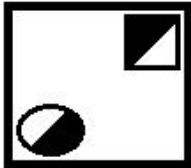


Ans


✗ 1.



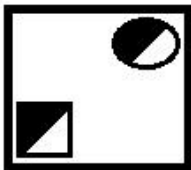
✓ 2.



✗ 3.



✗ 4.



Question ID : 6549789499
Status : Answered
Chosen Option : 2

Q.7 Three of the following four letter-clusters are alike in a certain way and one is different. Select the odd one.

Ans ✓ 1. HLQ

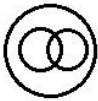
✗ 2. GKO

✗ 3. LPT

✗ 4. QUY

Question ID : 6549789495
Status : Answered
Chosen Option : 1

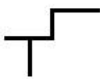
Q.8 Which of the following combinations of words best represents the Venn diagram given below?



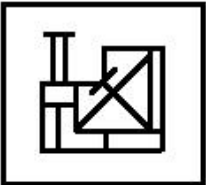
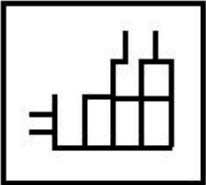

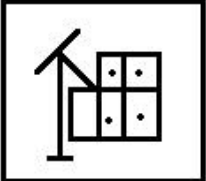
- Ans
- 1. Fathers, Doctors, Males
 - 2. Mothers, Sisters, Brothers
 - 3. Females, Daughters, Sisters
 - 4. Females, Males, Aunts

Question ID : 6549789504
Status : Answered
Chosen Option : 3

Q.9 Select the option in which the given figure is embedded (rotation is NOT allowed).



Ans

- 1. 
- 2. 
- 3. 
- 4. 

Question ID : 6549786572
Status : Answered
Chosen Option : 1

Q.10 Select the option that represents the correct order of the given words as they would appear in an English dictionary.

- 1. Rubric
- 2. Ruminare
- 3. Rose
- 4. Reader
- 5. Reap

- Ans 1. 4, 5, 3, 1, 2
 2. 4, 5, 3, 2, 1
 3. 4, 5, 1, 3, 2
 4. 4, 3, 5, 1, 2

Question ID : 6549789487
Status : Answered
Chosen Option : 1

Q.11 Four number-pairs have been given, out of which three are alike in some manner and one is different. Select the one that is different.

- Ans 1. 8 : 104
 2. 12 : 146
 3. 11 : 143
 4. 5 : 65

Question ID : 6549789486
Status : Not Answered
Chosen Option : --

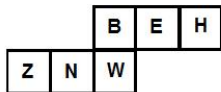
Q.12 Select the correct mirror image of the given combination when the mirror is placed at 'PQ' as shown.

STRUCTURE |^P_Q

- Ans 1. 2LBGULNBE
 2. 2LBGULNBE
 3. ERUTQRTS
 4. ERUTQRTS

Question ID : 6549786574
Status : Answered
Chosen Option : 4

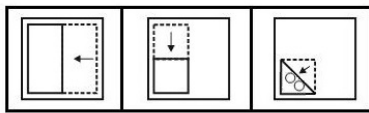
Q.13 Which letter will be on the face opposite to the one showing 'N' when the given sheet is folded to form a cube?



- Ans**
- 1. H
 - 2. B
 - 3. Z
 - 4. E

Question ID : 6549789498
 Status : Answered
 Chosen Option : 4

Q.14 The sequence of folding a piece of paper and the manner in which the folded paper has been cut is shown in the following figures. How would this paper look when unfolded?



- Ans**
- 1.
 - 2.
 - 3.
 - 4.

Question ID : 6549786573
 Status : Answered
 Chosen Option : 4

Q.15 Select the option that is related to the third number in the same way as the second number is related to the first number.

25 : 750 :: 30 : ?

- Ans
- 1. 1275
 - 2. 1050
 - 3. 1625
 - 4. 1110

Question ID : 6549789482
Status : Answered
Chosen Option : 2

Q.16 In a certain code language, BEYOND is written as BDFNPY. How will PROMISE be written in that language?

- Ans
- 1. FJMPPRS
 - 2. ESIMORP
 - 3. FJNPQSR
 - 4. EIMOPRS

Question ID : 6549786559
Status : Not Answered
Chosen Option : --

Q.17 How many triangles are there in the figure given below?



- Ans
- 1. 13
 - 2. 14
 - 3. 12
 - 4. 11

Question ID : 6549789500
Status : Answered
Chosen Option : 3

Q.18 Select the option that is related to the third word in the same way as the second word is related to the first word.

Ohmmeter : Resistance :: Zymometer : ?

- Ans
- 1. Density
 - 2. Fermentation
 - 3. Viscosity
 - 4. Radiation

Question ID : 6549786562
Status : Marked For Review
Chosen Option : 2

Q.19 In a code language, if SEND is written as 168, then how will PURSE be written in the same language?

- Ans
- 1. 185
 - 2. 395
 - 3. 225
 - 4. 415

Question ID : 6549789489
Status : Answered
Chosen Option : 2

Q.20 Select the word-pair in which the two words are related in the same way as are the two words in the following word-pair.

Spoon : Utensil

- Ans
- 1. Kitchen : Cooking
 - 2. House : Expenditure
 - 3. Bus : Passenger
 - 4. Scooter : Vehicle

Question ID : 6549789494
Status : Answered
Chosen Option : 4

Q.21 Select the option that is related to the third term in the same way as the second term is related to the first term.

SLIM : MHQO :: COLD : ?

- Ans
- 1. GPKZ
 - 2. GKPZ
 - 3. GZPK
 - 4. GPZK

Question ID : 6549786561
Status : Not Attempted and Marked For Review
Chosen Option : --

Q.22 Four words have been given, out of which three are alike in some manner and one is different. Select the word that is different.

- Ans
- 1. Equivocal
 - 2. Ambivalent
 - 3. Certain
 - 4. Hesitant

Question ID : 6549786567
Status : Answered
Chosen Option : 3

Q.23 Select the option in which the numbers share the same relationship as that shared by the numbers of the given set.

(8, 44, 224)

- Ans
- 1. (15, 75, 301)
 - 2. (11, 59, 299)
 - 3. (7, 39, 190)
 - 4. (9, 80, 312)

Question ID : 6549789484
Status : Answered
Chosen Option : 2

Q.24 Select the combination of letters that when sequentially placed in the blanks of the given letter series will complete the series.

a _ _ gb _ _ acegb _ _ aceg _ _ _

- Ans
- 1. ddfbcedf
 - 2. cefbdfdf
 - 3. ceddfbdf
 - 4. fdfbdfced

Question ID : 6549788684
Status : Answered
Chosen Option : 3

Q.25 Select the correct combination of mathematical signs that can sequentially replace the * signs and balance the given equation.

$14 * 11 * 552 * 23 * 29 = 159$

- Ans
- 1. $\times, -, \div, +$
 - 2. $\times, \div, -, +$
 - 3. $\times, +, \div, -$
 - 4. $+, -, \div, \times$

Question ID : 6549786552
Status : Answered
Chosen Option : 3