

Section : General Intelligence

**Q.1** Select the option in which the numbers are related in the same way as are the numbers of the following set.

(16, 60, 240)

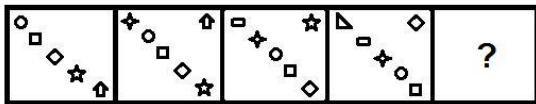
- Ans  1. (16, 38, 260)  
 2. (18, 56, 252)  
 3. (14, 42, 196)  
 4. (20, 12, 121)

Question ID : 6549787665

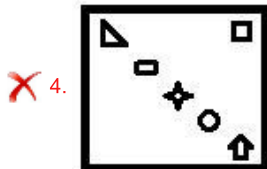
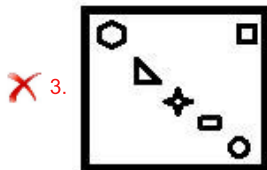
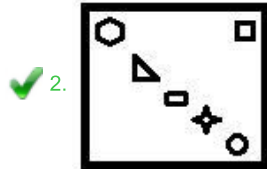
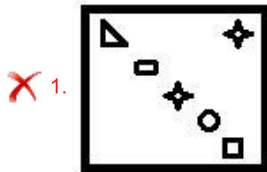
Status : Not Answered

Chosen Option : --

Q.2 Select the figure from among the given options that can replace the question mark (?) in the following series.



Ans



Question ID : 6549787580  
 Status : Answered  
 Chosen Option : 2

Q.3 Select the option that is related to the third word in the same way as the second word is related to the first word.

Entomology : Insects :: Palaeontology : ?

- Ans
- ✗ 1. Earthquakes
  - ✗ 2. Automobile
  - ✗ 3. Minerals
  - ✓ 4. Fossils

Question ID : 6549787673  
 Status : Answered  
 Chosen Option : 4

Q.4 Select the option that is related to the fourth number in the same way as the first number is related to the second number and the fifth number is related to the sixth number.

24 : 144 :: ? : 174 :: 35 : 210

- Ans
- ✗ 1. 33
  - ✗ 2. 38
  - ✗ 3. 27
  - ✓ 4. 29

Question ID : 6549787563  
 Status : Answered  
 Chosen Option : 4

Q.5 Which two signs should be interchanged to make the given equation correct?

$$45 - 49 + 26 \times 70 \div 35 = 42$$

- Ans
- 1. + and ×
  - 2. + and –
  - 3. × and –
  - 4. + and ×

Question ID : 6549787663  
Status : Answered  
Chosen Option : 2

Q.6 Select the option that is related to the third term in the same way as the second term is related to the first term.

SHOVEL : MFWPIT :: NOVICE : ?

- Ans
- 1. WPOHBD
  - 2. FDJWPO
  - 3. OPWJDF
  - 4. MNUHBD

Question ID : 6549787672  
Status : Answered  
Chosen Option : 2

Q.7 Select the correct option that indicates the arrangement of the given words in the order in which they appear in an English dictionary.

1. Ruthless
2. Ruler
3. Routine
4. Rusticate
5. Rugby

- Ans
- 1. 3, 5, 2, 1, 4
  - 2. 3, 2, 5, 4, 1
  - 3. 3, 5, 2, 4, 1
  - 4. 5, 3, 2, 4, 1

Question ID : 6549787568  
Status : Answered  
Chosen Option : 3

Q.8 Four number-pairs have been given, out of which three are alike in some manner and one is different. Select the number-pair that is different.

- Ans
- 1. 20 : 100
  - 2. 30 : 225
  - 3. 14 : 49
  - 4. 24 : 130

Question ID : 6549787567  
Status : Answered  
Chosen Option : 4

Q.9 Read the given statements and conclusions carefully. Assuming that the information given in the statements is true, even if it appears to be at variance with commonly known facts, decide which of the given conclusions logically follow(s) from the statements.

Statements:

Some balls are spoons.  
All stones are balls.  
No ball is a pebble.

Conclusions:

I. Some balls are stones.  
II. No spoon is a stone.  
III. No stone is a pebble.

- Ans
- 1. Both conclusions I and II follow.
  - 2. Both conclusions I and III follow.
  - 3. Both conclusions II and III follow.
  - 4. Only conclusion III follows.

Question ID : 6549787679

Status : Answered

Chosen Option : 2

Q.10 Select the correct mirror image of the given combination when the mirror is placed at MN as shown.

Q r S g y 4



- Ans
- 1. 4 y p 2 1 Q
  - 2. 7 y p 2 1 Q
  - 3. 4 y p 2 1 Q
  - 4. 4 y p S 1 Q

Question ID : 6549787685

Status : Answered

Chosen Option : 1

Q.11 In a certain code language, 'TOPPER' is coded as '66' and 'MARK' is coded as '61'. How will 'INDUCE' be coded in that language?

- Ans
- 1. 96
  - 2. 86
  - 3. 106
  - 4. 100

Question ID : 6549787570

Status : Answered

Chosen Option : 1



Q.12 चार शब्द दिए गए हैं, जिनमें से तीन किसी प्रकार समान हैं और एक भिन्न है। भिन्न का चयन करें।

- Ans
- 1. बांसुरी
  - 2. सैक्सोफोन
  - 3. शहनाई
  - 4. मैडोलिन

Question ID : 6549787678  
Status : Answered  
Chosen Option : 4

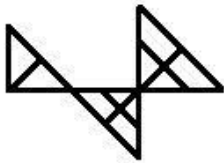
Q.13 अक्षरों के उस संयोजन का चयन करें, जिन्हें दिए गए अक्षर श्रेणी में खाली जगहों पर क्रमिक रूप से रखने पर श्रेणी पूर्ण हो जाएगी।

p \_ t b c p r \_ b c \_ r t b \_ p \_ t \_ c

- Ans
- 1. r, p, t, r, b, c
  - 2. r, t, p, c, r, b
  - 3. r, p, c, t, b, r
  - 4. r, c, p, b, t, r

Question ID : 6549786765  
Status : Answered  
Chosen Option : 2

Q.14 How many triangles are there in the given figure?



- Ans
- 1. 15
  - 2. 17
  - 3. 14
  - 4. 16

Question ID : 6549787581  
Status : Marked For Review  
Chosen Option : 1

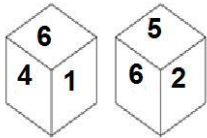
Q.15 Select the option in which the numbers are related in the same way as are the numbers of the following set.

(25, 17, 170)

- Ans
- 1. (49, 20, 140)
  - 2. (24, 60, 240)
  - 3. (23, 18, 421)
  - 4. (36, 12, 144)

Question ID : 6549787565  
Status : Answered  
Chosen Option : 2

Q.16 Two different positions of the same dice are shown, the six faces of which are numbered from 1 to 6. Select the number that will be on the face opposite to the face having '3'.



- Ans
- 1. 4
  - 2. 5
  - 3. 6
  - 4. 2

Question ID : 6549787579  
Status : Answered  
Chosen Option : 3

Q.17 Four letter-clusters have been given, out of which three are alike in some manner and one is different. Select the letter-cluster that is different.

- Ans
- 1. EBCD
  - 2. IFGH
  - 3. NKLM
  - 4. WXYZ

Question ID : 6549787576  
Status : Answered  
Chosen Option : 4

Q.18 Select the option in which the words share the same relationship as that shared by the given pair of words.

Libya : Tripoli

- Ans
- 1. Harare : Zimbabwe
  - 2. Zambia : Lusaka
  - 3. Afghanistan : Jakarta
  - 4. Kampala : Uganda

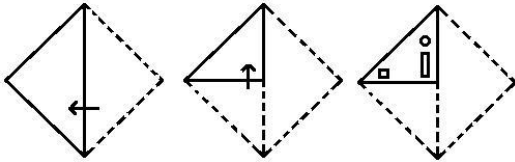
Question ID : 6549787575  
Status : Not Answered  
Chosen Option : --

Q.19 In a certain code language, 'UMBRELLA' is written as 'VNCSDKKZ' and 'FASTENED' is written as 'GBTUDMDC'. How will 'MONUMENT' be written in that language?

- Ans
- 1. NPOVLDMS
  - 2. LNMTLGMS
  - 3. NPOVPFOU
  - 4. NPOWLEOS

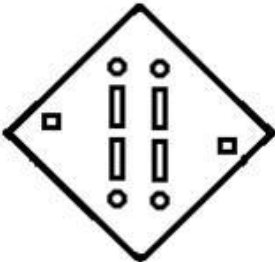
Question ID : 6549787670  
Status : Answered  
Chosen Option : 1

**Q.20** The sequence of folding a piece of paper and the manner in which the folded paper has been cut is shown in the following figures. How would this paper look when unfolded?

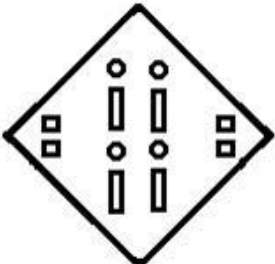


Ans

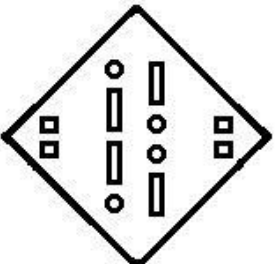
1.



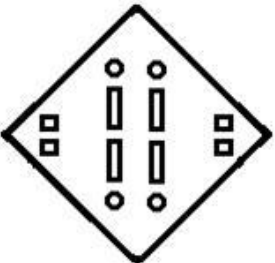
2.



3.



4.



Question ID : 6549787684  
Status : Answered  
Chosen Option : 4

**Q.21** If Aniket is the brother of the son of Priyanka's son, then how is Aniket related to Priyanka?

Ans  1. Grandson

2. Son

3. Cousin

4. Brother

Question ID : 6549786867  
Status : Answered  
Chosen Option : 1

Q.22 What was the day of the week on 31 January 2009?

- Ans  1. Saturday  
 2. Monday  
 3. Friday  
 4. Sunday

Question ID : 6549787561  
Status : Answered  
Chosen Option : 1

Q.23 Select the number from among the given options that can replace the question mark (?) in the following series.

59, 59, 61, 183, 187, ?

- Ans  1. 935  
 2. 876  
 3. 632  
 4. 705

Question ID : 6549787667  
Status : Answered  
Chosen Option : 1

Q.24 Select the option that is embedded in the given figure (rotation is NOT allowed).



- Ans  1.
- 2.
- 3.
- 4.

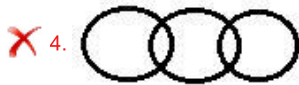
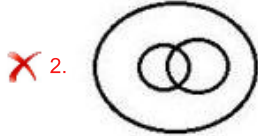
Question ID : 6549787683  
Status : Answered  
Chosen Option : 1



Q.25 Select the Venn diagram that best represents the relationship between the following classes.

Brother, Family, Sister

Ans



Question ID : 6549787585

Status : Answered

Chosen Option : 1