

Section : **General Intelligence**

**Q.1** Three of the following four letter-clusters are alike in a certain way and one is different.  
Select the odd one.

- Ans**
- 1. CXQBO
  - 2. EZSFV
  - 3. UPITG
  - 4. IDWHU

Question ID : **6549788283**  
Status : **Answered**  
Chosen Option : **2**

**Q.2** Read the given statements and conclusions carefully. Assuming that the information given in the statements is true, even if it appears to be at variance with commonly known facts, decide which of the given conclusions logically follow(s) from the statements.

**Statements:**

- All racks are books.
- All racks are pens.

**Conclusions:**

- I. All pens are books.
- II. Some books are pens.

- Ans**
- 1. Both conclusions I and II follow.
  - 2. Only conclusion I follows.
  - 3. Only conclusion II follows.
  - 4. Neither conclusion I nor II follows.

Question ID : **6549786063**  
Status : **Answered**  
Chosen Option : **3**

Q.3 A kid's mother's father-in-law's daughter is Rashmi, whose daughter is Pihoo. How is Pihoo related to the kid?

- Ans
- 1. Sister
  - 2. Niece
  - 3. Aunt
  - 4. Cousin

Question ID : 6549789760  
Status : Answered  
Chosen Option : 4

Q.4 If CALENDAR is coded as 91452313 and FACEMASK is coded as 210142316, then how will SECURITY be coded as?

- Ans
- 1. 723593120
  - 2. 723953210
  - 3. 723933210
  - 4. 729952310

Question ID : 6549788277  
Status : Not Answered  
Chosen Option : --

Q.5 In an entrance test, Tiwari scored 25% marks and failed by 64 marks. If he had scored 40% marks, then he would have secured 32 marks more than the pass marks. Find the pass marks.

- Ans
- 1. 224
  - 2. 295
  - 3. 250
  - 4. 150

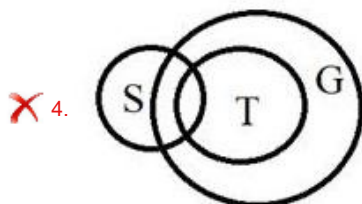
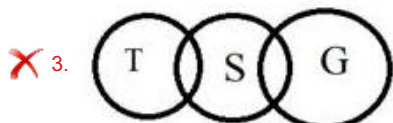
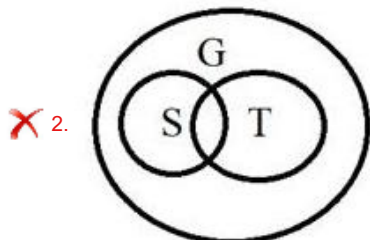
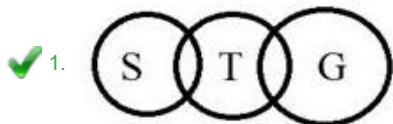
Question ID : 6549788268  
Status : Answered  
Chosen Option : 1

**Q.6** Read the below statements disregarding commonly known facts and then from the given four options, identify the Venn diagram that correctly represents the statements.

Statements:

- Some Shirts are Towels.
- Some Towels are Gloves.

**Ans**



Question ID : 6549788292  
Status : Answered  
Chosen Option : 1

**Q.7** Select the option that is related to the third term in the same way as the second term is related to the first term.

PAINTER : AEINPRT :: GLAMOUR : ?

**Ans**

- ✗ 1. MALGRUO
- ✗ 2. RUOMALG
- ✓ 3. AGLMORU
- ✗ 4. ALGOMRU

Question ID : 6549786056  
Status : Answered  
Chosen Option : 3

Q.8 Select the correct mirror image of the given figure when the mirror is placed at the right side.

A£CαEβ

- Ans
- 1. A£CαEβ
  - 2. βEαC£A
  - 3. βEαC£A
  - 4. A£CαEβ

Question ID : 6549786069  
Status : Answered  
Chosen Option : 3

Q.9 Select the combination of letters that when sequentially placed in the blanks of the given series will complete the series.

K \_ T Z \_ Y \_ M \_ Z O \_ K \_ T \_ O Y

- Ans
- 1. MOKTYMZ
  - 2. MOTTYNZ
  - 3. MOTYKMZ
  - 4. MNKTYKZ

Question ID : 6549787472  
Status : Answered  
Chosen Option : 1

Q.10 चार शब्द दिए गए हैं, जिनमें से तीन किसी प्रकार समान हैं और एक भिन्न है। भिन्न शब्द का चयन करें।

- Ans
- 1. डगमगाना (Waddle)
  - 2. गुर्रना (Growl)
  - 3. घुरघुराना (Grunt)
  - 4. मिमियाना (Bleat)

Question ID : 6549786062  
Status : Answered  
Chosen Option : 1

Q.11 Three of the following number-pairs are alike in a certain way and one is different. Select the odd one.

- Ans
- 1. 181 : 12
  - 2. 398 : 18
  - 3. 305 : 16
  - 4. 271 : 15

Question ID : 6549788274  
Status : Not Answered  
Chosen Option : --

Q.12 Select the set in which the numbers are related in the same way as are the numbers of the following set.

(697, 13, 866)

- Ans
- 1. (747, 25, 1423)
  - 2. (651, 16, 940)
  - 3. (541, 14, 737)
  - 4. (832, 8, 887)

Question ID : 6549788272

Status : Not Attempted and Marked For Review

Chosen Option : --

Q.13 उस विकल्प का चयन कीजिए जिसका तीसरे शब्द से वही संबंध है, जो दूसरे शब्द का पहले शब्द से है।

पूर्ण रूप से : समूचा :: काबू से बाहर : ?

- Ans
- 1. वृद्धि
  - 2. त्रुटिपूर्ण
  - 3. अनियंत्रित
  - 4. सामान्य

Question ID : 6549786057

Status : Answered

Chosen Option : 3

Q.14 Select the word-pair in which the two words are related in the same way as are the two words in the given word-pair.

Resistance : Ohm

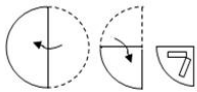
- Ans
- 1. Volume : Joule
  - 2. Pressure : Watt
  - 3. Ampere : Current
  - 4. Angle : Radians

Question ID : 6549788282

Status : Answered

Chosen Option : 4

**Q.15** The sequence of folding a piece of paper and the manner in which the folded paper has been cut are shown in the following figures. How would this paper look when unfolded?



**Ans**

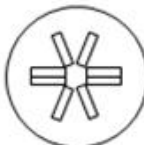
1.



2.



3.



4.



Question ID : 6549786068  
Status : Answered  
Chosen Option : 4

**Q.16** Select the number from among the given options that can replace the question mark (?) in the following series.

89, 79, 71, ?, 53, 43

**Ans**

1. 63

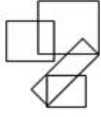
2. 69

3. 67

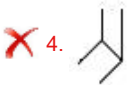

4. 61

Question ID : 6549786051  
Status : Answered  
Chosen Option : 4

Q.17 Select the option that is embedded in the given figure (rotation is NOT allowed).



Ans



Question ID : 6549786067  
Status : Answered  
Chosen Option : 3

Q.18 Which two digits and signs need to be interchanged so as to balance the given equation?

$$26 \div 6 - 54 + 24 \times 8 = 174$$

Ans  1. 8 and 6;  $\times$  and  $\div$

2. 4 and 2; + and  $\div$

3. 6 and 4; - and  $\times$

4. 5 and 8;  $\times$  and +

Question ID : 6549786047  
Status : Not Attempted and Marked For Review  
Chosen Option : --

**Q.19** Select the figure that can replace the question mark (?) in the following figure series.

1 2 W X   Y Z 3 4	1 2   X W A Z Y 4	1 2   A Z Y 5 X W	Y Z B W X 2   A 5	B W X D Y Z   A 5	?
-------------------------------	-------------------------------	-------------------------------	-------------------------------	-------------------------------	---

**Ans**

✗ 1. 

B
G
X W   Z Y
A
5

✗ 2. 

B
X W D Z Y
G
A
5

✓ 3. 

B
D
X W F Z Y
A
5

✗ 4. 

B
D
Y Z H W X
A
5

Question ID : **6549788287**  
 Status : **Answered**  
 Chosen Option : **1**

**Q.20** Select the option that is related to the third number in the same way as the second number is related to the first number.

9 : 99 :: 15 : ?

- Ans**
- ✗ 1. 552
  - ✗ 2. 525
  - ✓ 3. 255
  - ✗ 4. 252

Question ID : **6549788270**  
 Status : **Answered**  
 Chosen Option : **3**



Q.21 Which option represents the correct order of the given words as they would appear in an English dictionary?

1. Pamphlet
2. Paleface
3. Painless
4. Partiality
5. Pabulum

- Ans
- 1. 5, 2, 3, 1, 4
  - 2. 5, 3, 2, 1, 4
  - 3. 5, 3, 1, 2, 4
  - 4. 5, 2, 1, 3, 4

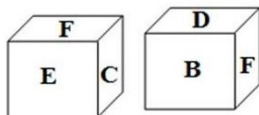
Question ID : 6549788275  
Status : Answered  
Chosen Option : 2

Q.22 In a certain code language, PROMISE is written as WXTQLUF. How will MELTING be written in that language?

- Ans
- 1. TLSAPUN
  - 2. TKQXLPH
  - 3. SJPWKOG
  - 4. SKRZOTM

Question ID : 6549786054  
Status : Answered  
Chosen Option : 2

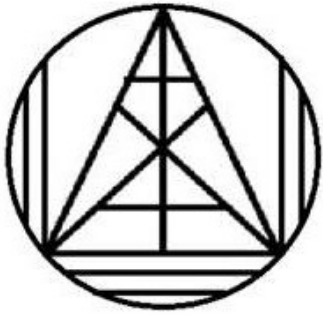
Q.23 Two different positions of the same dice are shown. Select the letter that will be on the face opposite to the face showing 'C'.



- Ans
- 1. A
  - 2. B
  - 3. F
  - 4. D

Question ID : 6549788286  
Status : Answered  
Chosen Option : 2

Q.24 Find the number of triangles in the following figure.



- Ans
- 1. 23
  - 2. 22
  - 3. 21
  - 4. 20

Question ID : 6549788288  
Status : Answered  
Chosen Option : 2

Q.25 Select the option in which the numbers are related in the same way as are the numbers of the following set.

25 : 75 : 150

- Ans
- 1. 29 : 36 : 72
  - 2. 18 : 126 : 253
  - 3. 36 : 108 : 324
  - 4. 13 : 26 : 104

Question ID : 6549786049  
Status : Not Attempted and Marked For Review  
Chosen Option : --