

Section : General Intelligence

Q.1 Select the number that can replace the question mark (?) in the following series.

1, 2, 10, 37, ?, 226

Ans  1. 101

2. 73

3. 89

4. 98

Question ID : 6549788677

Status : Answered

Chosen Option : 1

Q.2 Three of the following four words are alike in a certain way and one is different. Select the odd one.

Ans  1. Doctor

2. Architect

3. Designer

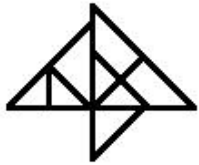
4. Engineer

Question ID : 6549788688

Status : Answered

Chosen Option : 1

Q.3 How many triangles are there in the given figure?



- Ans
- 1. 12
  - 2. 14
  - 3. 15
  - 4. 13

Question ID : 6549787278

Status : Answered

Chosen Option : 4

Q.4 Select the option in which the words share the same relationship as that shared by the given pair of words.

Warrior : Battlefield

- Ans
- 1. Actor : Stage
  - 2. Soldier : Army
  - 3. Sports : Ground
  - 4. Umpire : Cricket

Question ID : 6549787272

Status : Answered

Chosen Option : 1

Q.5 Select the correct option that indicates the arrangement of the given words in the order in which they appear in an English dictionary.

- 1. Fragile
- 2. Freedom
- 3. Fresher
- 4. Fraudster
- 5. Frame

- Ans
- 1. 1, 5, 2, 4, 3
  - 2. 2, 5, 4, 3, 1
  - 3. 1, 4, 5, 2, 3
  - 4. 1, 5, 4, 2, 3

Question ID : 6549787265

Status : Answered

Chosen Option : 4

Q.6 Select the combination of letters that when sequentially placed in the blanks of the given letter series will complete the series.

T \_ R \_ \_ S \_ D T \_ R D \_ S \_ D

- Ans
- 1. S D T D S T T
  - 2. D S T R T T R
  - 3. S D T R S T R
  - 4. S T S R R T R

Question ID : 6549786462  
Status : Answered  
Chosen Option : 3

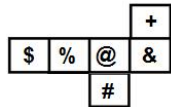
Q.7 Select the option that is related to the third letter-cluster in the same way as the second letter-cluster is related to the first letter-cluster.

BIOLOGY : COUMUHZ :: CHEMISTRY : ?

- Ans
- 1. DAKNOTUSZ
  - 2. DIONUTASZ
  - 3. DIINOTUSZ
  - 4. DJINUTUSZ

Question ID : 6549788682  
Status : Answered  
Chosen Option : 3

Q.8 A cube is made by folding the given sheet. In the cube so formed, what would be the symbol on the opposite side of '@'?



- Ans
- 1. &
  - 2. \$
  - 3. #
  - 4. %

Question ID : 6549787276  
Status : Answered  
Chosen Option : 2

Q.9 The sum of the salaries of three persons, A, B and C, is ₹66,500. B's salary is half the salary of C. B's salary is 125% of A's salary. What is the salary of C?

- Ans
- 1. ₹30,000
  - 2. ₹28,000
  - 3. ₹34,000
  - 4. ₹35,000

Question ID : 6549787258  
Status : Answered  
Chosen Option : 4

Q.10 Four letter-clusters have been given, out of which three are alike in some manner and one is different. Select the letter-cluster that is different.





- Ans
- 1. TWZCF
  - 2. BEGLN
  - 3. DGJMP
  - 4. HKNQT

Question ID : 6549787273  
Status : Answered  
Chosen Option : 2

Q.11 Select the Venn diagram that best represents the relationship between the following classes.

Mammals, Animals, Giraffe

Ans

- 1. 
- 2. 
- 3. 
- 4. 

Question ID : 6549787282  
Status : Answered  
Chosen Option : 4

Q.12 Which of the following equations will be correct when the signs + and  $\times$ , and the numbers 3 and 6 are interchanged?

- Ans
- 1.  $9 \times 3 + 6 = 33$
  - 2.  $11 \times 6 + 3 = 69$
  - 3.  $7 + 3 \times 6 = 48$
  - 4.  $12 \times 3 + 6 = 30$

Question ID : 6549788673

Status : Answered

Chosen Option : 4

Q.13 Two statements are given, followed by two conclusions numbered I and II. Assuming the statements to be true, even if they seem to be at variance with commonly known facts, decide which of the conclusions logically follow(s) from the statements.

Statements:

Some managers are bosses.

Some doctors are managers.

Conclusions:

I. Some managers are executives.

II. Some doctors are bosses.

- Ans
- 1. Neither conclusion I nor II follows .
  - 2. Both conclusions I and II follow .
  - 3. Only conclusion I follows .
  - 4. Only conclusion II follows .

Question ID : 6549788689

Status : Answered

Chosen Option : 1

Q.14 Select the option in which the given figure is embedded.



Ans

1.



2.



3.



4.



Question ID : 6549788693

Status : Answered

Chosen Option : 4

Q.15 Select the option that is related to the fourth number in the same way as the first number is related to the second number and the fifth number is related to the sixth number.

68 : 4 :: ? : 7 :: 220 : 6

Ans  1. 347

2. 112

3. 301

4. 220

Question ID : 6549787260

Status : Answered

Chosen Option : 1

Q.16 In a certain code language, DORM is coded as 4303626 and FIRST is coded as 69363840. How will CANCER be coded in that language?

- Ans
- 1. 61283638
  - 2. 31283536
  - 3. 612661036
  - 4. 322831036

Question ID : 6549787267  
Status : Answered  
Chosen Option : 4

Q.17 Select the correct mirror image of the given figure when the mirror is placed to the right side of the figure.

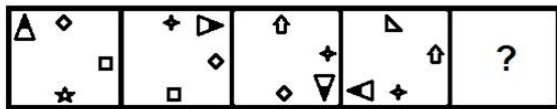


Ans

- 1.
- 2.
- 3.
- 4.

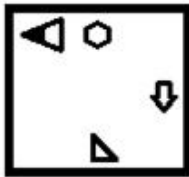
Question ID : 6549788695  
Status : Answered  
Chosen Option : 4

Q.18 Select the figure from among the given options that can replace the question mark (?) in the following series.

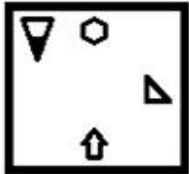


Ans

1.



2.



3.



4.



Question ID : 6549787277  
 Status : Answered  
 Chosen Option : 4

Q.19 Three of the following four number triads are alike in a certain way and one is different. Select the one that is different.

- Ans
- 1. (201, 402, 603)
  - 2. (202, 404, 909)
  - 3. (108, 300, 501)
  - 4. (111, 222, 333)

Question ID : 6549788675  
 Status : Answered  
 Chosen Option : 3



Q.20 Select the option in which the numbers are related in the same way as are the numbers of the following set.

(5, 14, 350)

- Ans
- 1. (8, 16, 340)
  - 2. (3, 20, 380)
  - 3. (7, 9, 441)
  - 4. (6, 12, 232)

Question ID : 6549787262

Status : Answered

Chosen Option : 3

Q.21 'Eye' is related to 'Glasses' in the same way as '\_\_\_\_\_' is related to 'Dialyser'.

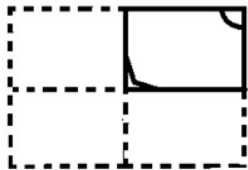
- Ans
- 1. Heart
  - 2. Ear
  - 3. Spine
  - 4. Kidney

Question ID : 6549788683

Status : Answered

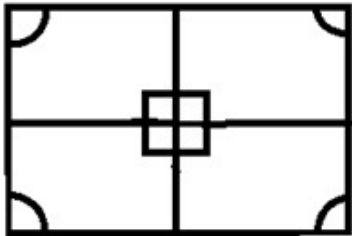
Chosen Option : 4

Q.22 A paper is folded and cut as shown in the following figure. How will it appear when unfolded?

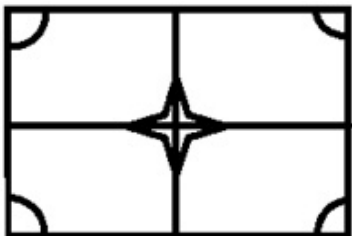


Ans

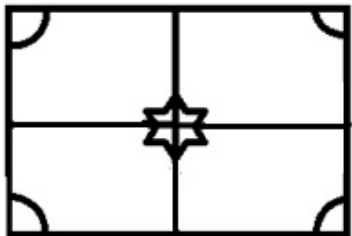
1.



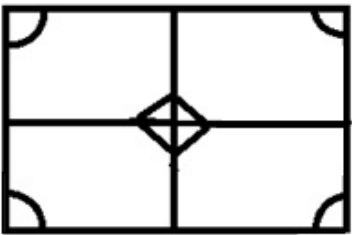
2.



3.



4.



Question ID : 6549788694

Status : Answered

Chosen Option : 2

Q.23 Four number-pairs have been given, out of which three are alike in some manner and one is different. Select the number-pair that is different.

Ans  1. 7 : 84

2. 9 : 99

3. 11 : 132

4. 17 : 204

Question ID : 6549787264

Status : Answered

Chosen Option : 2

Q.24 In a family, Divya and Monika are sisters. Monika is the mother of Anamika. Kishore is the son of Anamika. Lillu is the son of Divya. How is Anamika related to Lillu?

- Ans
- 1. Niece
  - 2. Mother
  - 3. Sister-in-law
  - 4. Cousin

Question ID : 6549787877

Status : Answered

Chosen Option : 4

Q.25 If in a code language, GOD is coded as 15 and DEVIL is coded as 43, then how will you code HUMEN?

- Ans
- 1. 56
  - 2. 72
  - 3. 42
  - 4. 81

Question ID : 6549788680

Status : Not Answered

Chosen Option : --