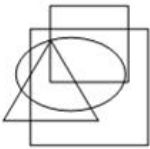


Section : **General Intelligence**

Q.1 Select the option that is embedded in the given figure (rotation is NOT allowed).

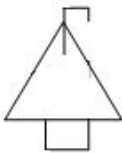


Ans

✓ 1.



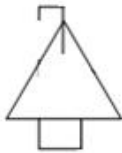
✗ 2.



✗ 3.

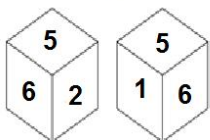


✗ 4.



Question ID : **6549786976**
Status : **Answered**
Chosen Option : **1**

Q.2 Two different positions of the same dice are shown, the six faces of which are numbered from 1 to 6. Which number is on the face opposite to the face showing '2'?



- Ans
- 1. 5
 - 2. 1
 - 3. 6
 - 4. 3

Question ID : 6549789397
Status : Answered
Chosen Option : 2

Q.3 Three of the following four letter-clusters are alike in a certain way and one is different. Select the odd one.

- Ans
- 1. LNQU
 - 2. KMQT
 - 3. ACFJ
 - 4. QSVZ

Question ID : 6549789394
Status : Answered
Chosen Option : 2

Q.4 Select the option that is related to the third term in the same way as the second term is related to the first term.

DEBONAIR : EDRIOBAN :: HALLMARK : ?

- Ans
- 1. LLAMKRAM
 - 2. AHLLAMKR
 - 3. AHKRLLEMA
 - 4. AHKRLLEAM

Question ID : 6549786965
Status : Answered
Chosen Option : 4

Q.5 Four options have been given, out of which three are alike in some manner and one is different. Select the option that is different.

- Ans
- 1. Delhi
 - 2. Chandigarh
 - 3. Jammu & Kashmir
 - 4. Puducherry

Question ID : 6549786971
Status : Answered
Chosen Option : 1

Q.6 In a code language, if FORTUNE is written as 716192122156, then how will OCTOBER be written in the same language?

- Ans
- 1. 14422163519
 - 2. 1532063618
 - 3. 16421163619
 - 4. 16420173819

Question ID : 6549789388
Status : Answered
Chosen Option : 3

Q.7 Select the option that is related to the third word in the same way as the second word is related to the first word.

Bed : Mattress :: Chair : ?

- Ans
- 1. Foam
 - 2. Pillow
 - 3. Sack
 - 4. Cushion

Question ID : 6549786966
Status : Answered
Chosen Option : 3

Q.8 Select the word-pair in which the two words are related in the same way as are the two words in the following word-pair.

Growth : Expansion

- Ans
- 1. Child : Birth
 - 2. First : Last
 - 3. Temporary : Permanent
 - 4. Urge : Request

Question ID : 6549789393
Status : Answered
Chosen Option : 4

Q.9 Select the number from among the given options that can replace the question mark (?) in the following series.

8, 24, 48, 80, ?, 168

- Ans
- 1. 122
 - 2. 118
 - 3. 120
 - 4. 116

Question ID : 6549786960
Status : Answered
Chosen Option : 3

Q.10 Vishal has a total of ₹4,100 in the denominations of 5, 10, 20 and 50 rupee notes. He has an equal number of 5 and 10 rupee notes. The number of 20 rupee notes is double the number of 5 rupee notes. The number of 50 rupee notes is thrice the number of 10 rupee notes. How many 5 rupee notes are there with Vishal?

- Ans
- 1. 10
 - 2. 40
 - 3. 30
 - 4. 20

Question ID : 6549789379

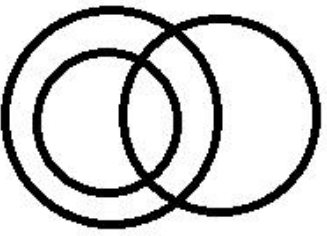
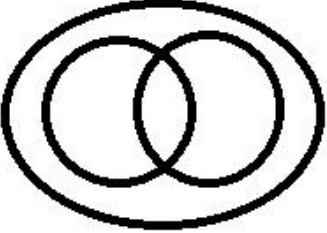
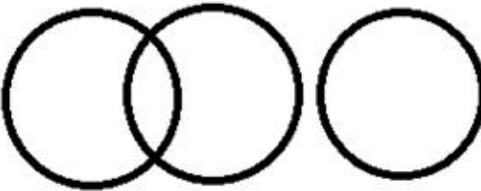
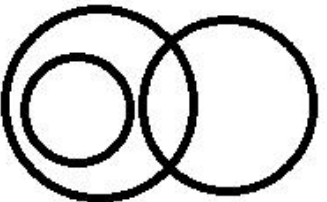
Status : **Not Attempted and Marked For Review**

Chosen Option : --

Q.11 Which of the following Venn diagrams best represents the words given below?

Engineers, Educated Persons, Males

Ans

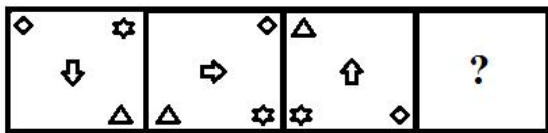
- 1. 
- 2. 
- 3. 
- 4. 

Question ID : 6549789403

Status : **Answered**

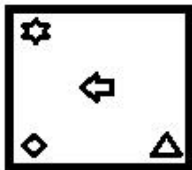
Chosen Option : 1

Q.12 Select the figure that will replace the question mark (?) in the following figure series.

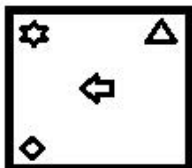


Ans

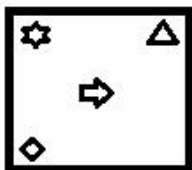
✗ 1.



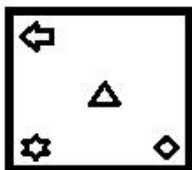
✓ 2.



✗ 3.



✗ 4.



Question ID : 6549789398
Status : Answered
Chosen Option : 2

Q.13 Four number-pairs have been given, out of which three are alike in some manner and one is different. Select the one that is different.

Ans ✓ 1. 13 : 169

✗ 2. 11 : 123

✗ 3. 17 : 291

✗ 4. 15 : 227

Question ID : 6549789385
Status : Answered
Chosen Option : 1

Q.14 Select the option in which the numbers share the same relationship as that shared by the numbers in the given set.

(7, 4, 33)

- Ans
- 1. (7, 4, 71)
 - 2. (11, 8, 175)
 - 3. (8, 5, 40)
 - 4. (9, 5, 56)

Question ID : 6549789383
Status : Answered
Chosen Option : 4

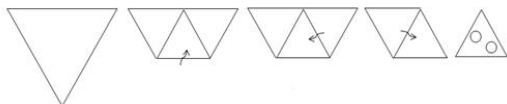
Q.15 Select the option that is related to the third number in the same way as the second number is related to the first number.

6 : 27 :: 9 : ?

- Ans
- 1. 66
 - 2. 110
 - 3. 95
 - 4. 74

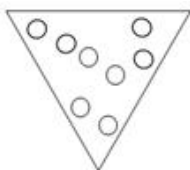
Question ID : 6549789381
Status : Answered
Chosen Option : 4

Q.16 The sequence of folding a piece of paper and the manner in which the folded paper has been cut is shown in the following figures. How would this paper look when unfolded?

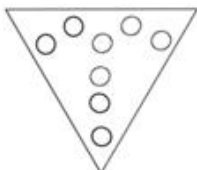


Ans

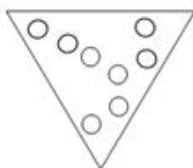
1.



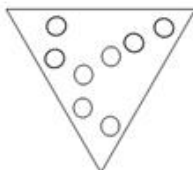
2.



3.



4.



Question ID : 6549786977

Status : Answered

Chosen Option : 3

Q.17 Select the option in which the numbers are related in the same way as are the numbers of the following set.

29 : 36 : 39

1. 78 : 79 : 82

2. 54 : 58 : 61

3. 69 : 72 : 76

4. 48 : 52 : 55

Question ID : 6549786958

Status : Not Answered

Chosen Option : --

Q.18 In a certain code language, ENDORSE is written as VMWLIHV. How will INSTRUCT be written in that language?

- Ans
- 1. RMHGIFXG
 - 2. SNRGS AOT
 - 3. SMSGSZPR
 - 4. RMSHRZPG

Question ID : 6549786963
Status : Answered
Chosen Option : 1

Q.19 Select the combination of letters that when sequentially placed in the blanks of the given letter series will complete the series.

a _ bcd _ _ aabc _ dea _ _ cd _ e

- Ans
- 1. adebdda
 - 2. adabded
 - 3. dabdade
 - 4. adedabd

Question ID : 6549788583
Status : Answered
Chosen Option : 4

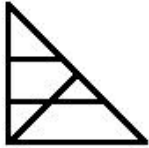
Q.20 Select the correct option that indicates the arrangement of the following words in a logical and meaningful order.

- 1. Universe
- 2. Chennai
- 3. World
- 4. Asia
- 5. Tamil Nadu

- Ans
- 1. 1, 3, 4, 2, 5
 - 2. 1, 4, 3, 5, 2
 - 3. 1, 3, 4, 5, 2
 - 4. 3, 1, 5, 4, 2

Question ID : 6549789386
Status : Answered
Chosen Option : 3

Q.21 How many triangles are there in the figure given below?



- Ans
- 1. 7
 - 2. 9
 - 3. 8
 - 4. 6

Question ID : 6549789399
Status : Answered
Chosen Option : 3

Q.22 Which two digits need to be interchanged so as to balance the given equation?

$$75 \div 18 + 51 \times 8 - 82 = 87$$

- Ans
- 1. 8 and 2
 - 2. 1 and 5
 - 3. 5 and 2
 - 4. 7 and 8

Question ID : 6549786956
Status : Answered
Chosen Option : 3

Q.23 Select the correct mirror image of the given figure when the mirror is placed at the right side.

GRS?@915

- Ans
- 1. 519@? SRG
 - 2. 519@? SRG
 - 3. 519@? SRG
 - 4. 519@? SRG

Question ID : 6549786978
Status : Answered
Chosen Option : 1

Q.24 Read the given statements and conclusions carefully. Assuming that the information given in the statements is true, even if it appears to be at variance with commonly known facts, decide which of the given conclusions logically follow(s) from the statements.

Statements:

All computers are calculators.
All calculators are boxes.

Conclusions:

I. All computers are boxes.
II. Some boxes are computers.

- Ans**
- 1. Neither conclusion I nor II follows.
 - 2. Only conclusion II follows.
 - 3. Only conclusion I follows.
 - 4. Both conclusions I and II follow.

Question ID : 6549786972

Status : Answered

Chosen Option : 4

Q.25 If Raman is the brother of the son of Kshitij's son, how is Raman related to Kshitij?

- Ans**
- 1. Nephew
 - 2. Grandson
 - 3. Cousin
 - 4. Son

Question ID : 6549786059

Status : Answered

Chosen Option : 2