

Section : **General Intelligence**

Q.1 Select the option in which the numbers are related in the same way as are the numbers of the following set.

{6, 15, 27}

- Ans
- 1. {4, 10, 18}
 - 2. {8, 24, 34}
 - 3. {12, 32, 54}
 - 4. {14, 38, 57}

Question ID : **6549789180**
Status : **Answered**
Chosen Option : 1

Q.2 Select the combination of letters that when sequentially placed in the blanks of the given letter series will complete the series.

a c _ d a _ d d a _ _ d a c _ d

- Ans
- 1. d c c d d
 - 2. a c d c a
 - 3. d a c c d
 - 4. c c d a d

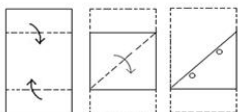
Question ID : **6549786361**
Status : **Answered**
Chosen Option : 1

Q.3 In a certain code language, CHECK is written as 6165622 and SURGE is written as 392136145. How will PRIEST be written as in that language?

- Ans
- 1. 3236953840
 - 2. 1618953840
 - 3. 3236185384
 - 4. 3436953640


Question ID : **6549787166**
Status : **Answered**
Chosen Option : 1

Q.4 The sequence of folding a piece of paper and the manner in which the folded paper has been cut is shown in the following figures. How would this paper look when unfolded?




Ans


✓ 1.




✗ 2.



✗ 3.



✗ 4.



Question ID : 6549789199

Status : Answered

Chosen Option : 1

Q.5 उस विकल्प का चयन कीजिए जिसके शब्दों के मध्य वही संबंध है, जो दिए गए शब्द-युग्म के शब्दों के मध्य है।

मुर्गा : मुर्गी

Ans

✗ 1. बिल्ली : बिल्ली का बच्चा

✓ 2. घोड़ा : घोड़ी

✗ 3. मेंढक : टैंडपोल

✗ 4. मालिक : मकान मालिक

Question ID : 6549787171

Status : Answered

Chosen Option : 2

Q.6 Select the option in which the numbers are related in the same way as are the numbers of the following set.

(11, 5, 246)

- Ans**
- 1. (12, 9, 224)
 - 2. (16, 9, 331)
 - 3. (14, 6, 412)
 - 4. (10, 7, 355)

Question ID : **6549787161**
Status : **Answered**
Chosen Option : **3**

Q.7 Read the given statements and conclusions carefully. Assuming that the information given in the statements is true, even if it appears to be at variance with commonly known facts, decide which of the given conclusions logically follow(s) from the statements.

Statements:

Some teachers are graduates.
Some graduates are females.
All females are women.

Conclusions:

- I. Some females are teachers.
- II. Some women are teachers.
- III. All women are females.

- Ans**
- 1. None of the conclusions follow.
 - 2. Only conclusion I follows.
 - 3. Only conclusion II follows.
 - 4. Only conclusions II and III follow.

Question ID : **6549789194**
Status : **Answered**
Chosen Option : **1**

Q.8 Four letter-clusters have been given, out of which three are alike in some manner and one is different. Select the odd one.

- Ans**
- 1. NRW
 - 2. QUZF
 - 3. CGLR
 - 4. LPTA

Question ID : **6549787172**
Status : **Answered**
Chosen Option : **4**

Q.9 Select the correct option that indicates the arrangement of the given words in the order in which they appear in an English dictionary.

1. Pleasant
2. Placard
3. Plentiful
4. Pleased
5. Plight

- Ans
- 1. 1, 2, 4, 3, 5
 - 2. 4, 1, 2, 3, 5
 - 3. 2, 1, 4, 3, 5
 - 4. 2, 1, 4, 5, 3

Question ID : 6549787164
Status : Answered
Chosen Option : 3

Q.10 In a certain code language, HIGHER is written as JIIHSF. How will CODING be written in that language?

- Ans
- 1. PDEJOK
 - 2. OHJEPD
 - 3. FOHEND
 - 4. PDJEHO

Question ID : 6549789185
Status : Not Answered
Chosen Option : --

Q.11 Select the option that is related to the third letter-cluster in the same way as the second letter-cluster is related to the first letter-cluster.

DGKP : BJGU :: HKOT : ?

- Ans
- 1. JIRP
 - 2. FNKY
 - 3. GJNS
 - 4. FMKW

Question ID : 6549789187
Status : Answered
Chosen Option : 2

Q.12 Which two signs should be interchanged to make the following equation correct?

$$10 - 15 \times 9 \div 6 + 8 = 8$$

- Ans
- 1. \times and $-$
 - 2. $+$ and $+$
 - 3. $+$ and \times
 - 4. $-$ and $+$

Question ID : 6549789178
Status : Answered
Chosen Option : 4



Q.13 Select the option that is related to the fourth number in the same way as the first number is related to the second number and the fifth number is related to the sixth number.

12 : 146 :: ? : 443 :: 16 : 258

- Ans
- 1. 19
 - 2. 21
 - 3. 23
 - 4. 20

Question ID : 6549787159
Status : Answered
Chosen Option : 2

Q.14 M is the only son of R. P is the sister of Q. X is the father of C, who is the wife of R. Q is the daughter of X's only daughter. How is M related to X?

- Ans
- 1. Brother
 - 2. Son
 - 3. Nephew
 - 4. Grandson

Question ID : 6549788382
Status : Answered
Chosen Option : 4

Q.15 How many triangles are there in the given figure?



- Ans
- 1. 18
 - 2. 16
 - 3. 15
 - 4. 17

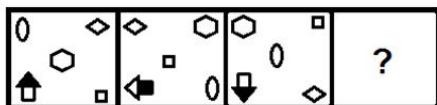
Question ID : 6549787177
Status : Answered
Chosen Option : 4

Q.16 If 31 August 2008 was Sunday, then what was the day of the week on 30 August 2012?

- Ans
- 1. Wednesday
 - 2. Thursday
 - 3. Monday
 - 4. Tuesday

Question ID : 6549787157
Status : Answered
Chosen Option : 2

Q.17 Select the figure from among the given options that can replace the question mark (?) in the following series.



Ans

- 1.
- 2.
- 3.
- 4.

Question ID : 6549787176
Status : Answered
Chosen Option : 3

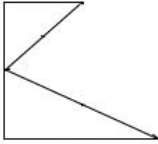
Q.18 Select the number from among the given options that can replace the question mark (?) in the following series.

7, 9, 14, 24, ?, 67

- Ans
- 1. 43
 - 2. 41
 - 3. 37
 - 4. 45

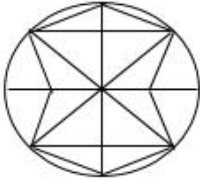
Question ID : 6549789182
Status : Answered
Chosen Option : 2

Q.19 Select the option in which the given figure is embedded (rotation is NOT allowed).

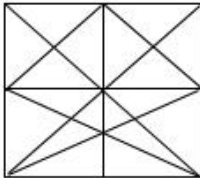


Ans

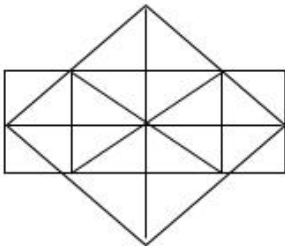
✗ 1.



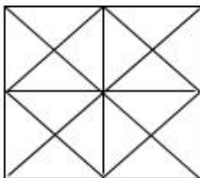
✓ 2.



✗ 3.



✗ 4.



Question ID : 6549789198
Status : Answered
Chosen Option : 2

Q.20 'Craniology' is related to 'Skull' and 'Oology' is related to 'Eggs' in the same way as 'Pedology' is related to _____.

Ans

✓ 1. Soil

✗ 2. Fossils

✗ 3. Artifacts

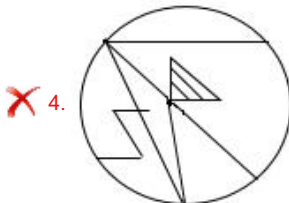
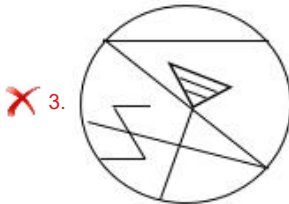
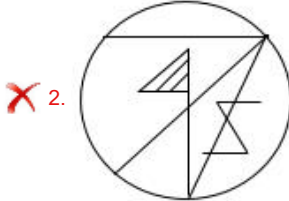
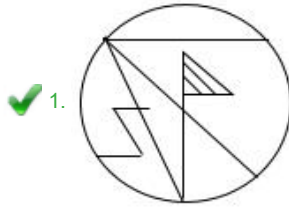
✗ 4. Shells

Question ID : 6549789188
Status : Answered
Chosen Option : 1

Q.21 Select the correct mirror image of the given figure when the mirror is placed at the right side of the figure.



Ans



Question ID : 6549789200
Status : Answered
Chosen Option : 1

Q.22 Four number-pairs have been given, out of which three are alike in some manner and one is different. Select the one that is different.

Ans ✓ 1. 8 : 66

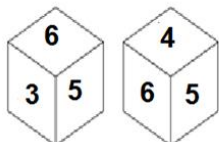
✗ 2. 5 : 30

✗ 3. 7 : 56

✗ 4. 9 : 90

Question ID : 6549787163
Status : Answered
Chosen Option : 1

Q.23 Two different positions of the same dice are shown. Select the number that will be on the face opposite to the one having 4.



- Ans
- 1. 5
 - 2. 1
 - 3. 2
 - 4. 3

Question ID : 6549787175
Status : Answered
Chosen Option : 4

Q.24 Four words have been given, out of which three are alike in some manner and one is different. Select the word that is different.

- Ans
- 1. Cucumber
 - 2. Bean
 - 3. Potato
 - 4. Pumpkin

Question ID : 6549789193
Status : Answered
Chosen Option : 3

Q.25 Select the Venn diagram that best represents the relationship between the following classes.

Kings, Queens, Mothers

Ans

- 1.
- 2.
- 3.
- 4.

Question ID : 6549787181
Status : Answered
Chosen Option : 3