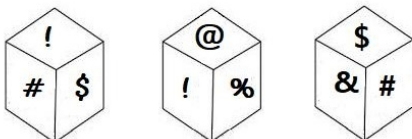

Section : **General Intelligence**

Q.1 Three different positions of the same dice are shown. Which symbol is on the face opposite to the face having the symbol '!'?



- Ans
- ☒ 1. %
 - ☒ 2. \$
 - ☒ 3. #
 - ☒ 4. &

Question ID : 6549788589

Status : Answered

Chosen Option : 4

Q.2 If in a code language, ORGAN is coded as 17141518 and FINGER is coded as 56791418, then how will you code NECK?

- Ans
- ☒ 1. 113497
 - ☒ 2. 351114
 - ☒ 3. 248741
 - ☒ 4. 532761

Question ID : 6549788580

Status : Answered

Chosen Option : 2

Q.3 Arrange the following words in a meaningful sequence.

1. Manager
2. Worker
3. General manager
4. Supervisor
5. Owner

- Ans
- ☒ 1. 5, 3, 1, 4, 2
 - ☒ 2. 4, 3, 2, 1, 5
 - ☒ 3. 3, 5, 4, 1, 2
 - ☒ 4. 1, 3, 5, 2, 4

Question ID : 6549788578

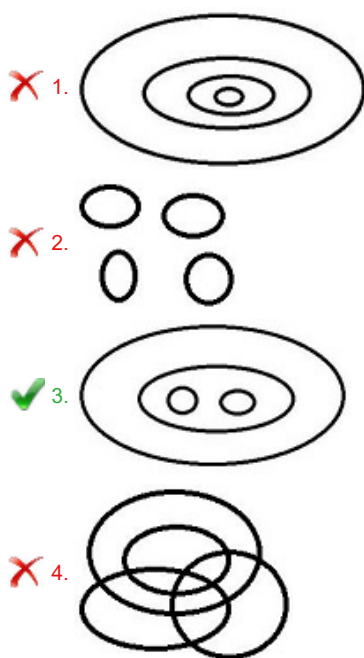
Status : Answered

Chosen Option : 1

Q.4 Select the Venn diagram that best represents the relationship between the following four classes.

Books, Library, Chapter, Index

Ans



Question ID : 6549788595
Status : Answered
Chosen Option : 4

Q.5 Select the word-pair in which the two words are related in the same way as are the two words in the given word-pair.

Mathematics : Teacher

Ans

- 1. Student : Tutor
- 2. Hockey : Coach
- 3. Science : Researcher
- 4. Story : Book

Question ID : 6549788585
Status : Answered
Chosen Option : 2

Q.6 Four words have been given, out of which three are alike in some manner and one is different. Select the word that is different.

Ans

- 1. Bronze
- 2. Nickel
- 3. Steel
- 4. Brass

Question ID : 6549786163
Status : Answered
Chosen Option : 3

Q.7 Three of the following four letter-clusters are alike in a certain way and one is different.
Select the odd one.

- Ans
- ☒ 1. AEKM
 - ☒ 2. IMPV
 - ☒ 3. YTSR
 - ☒ 4. JMSU

Question ID : 6549788586
Status : Answered
Chosen Option : 3

Q.8 In a certain code language, HUSBAND is written as ABDHNSU. How will HOUSEWIFE be written in that language?

- Ans
- ☒ 1. EHEFOIUWS
 - ☒ 2. ESEFUOIWH
 - ☒ 3. EEFHIOSUW
 - ☒ 4. EFIWESUOH

Question ID : 6549786155
Status : Answered
Chosen Option : 3

Q.9 Select the combination of letters that when sequentially placed in the blanks of the given series will complete the series.

s _ t m s r _ m _ r t _ s _ t m

- Ans
- ☒ 1. r, s, m, r, t
 - ☒ 2. r, t, r, m, s
 - ☒ 3. r, s, t, r, m
 - ☒ 4. r, t, s, m, r

Question ID : 6549787775
Status : Answered
Chosen Option : 4

Q.10 Select the option that is related to the third number in the same way as the second number is related to the first number.


166 : 415 :: 256 : ?

- Ans
- ☒ 1. 428
 - ☒ 2. 597
 - ☒ 3. 549
 - ☒ 4. 640

Question ID : 6549788573
Status : Not Attempted and Marked For Review
Chosen Option : --

Q.11 M's wife is N's daughter-in-law. P is the husband of O, who is the sister of M. How is P related to N?

Ans  1. Son-in-law

 2. Brother

 3. Nephew

 4. Cousin

Question ID : 6549789767

Status : Answered

Chosen Option : 1

Q.12 Select the set in which the numbers are related in the same way as are the numbers of the following set.

(313, 2732, 98211)

Ans  1. (201, 4532, 65712)

 2. (103, 7341, 92501)

 3. (601, 9401, 71427)

 4. (301, 6543, 94263)

Question ID : 6549788575

Status : Not Attempted and
Marked For Review

Chosen Option : --



Q.13 Select the correct mirror image of the given figure when the mirror is placed at the right side.



Ans

- ✓ 1.
- ✗ 2.
- ✗ 3.
- ✗ 4.

Question ID : 6549786170

Status : Answered

Chosen Option : 1

Q.14 The cost of 5 pens and 12 pencils is ₹45. What would be the cost for 20 pens and 48 pencils?

- Ans** ✗ 1. ₹235
- ✓ 2. ₹180
- ✗ 3. ₹135
- ✗ 4. ₹210

Question ID : 6549788571

Status : Answered

Chosen Option : 2

Q.15 Select the option that is related to the third word in the same way as the second word is related to the first word.

Wakeful : Sleepless : : Sitting : ?

- Ans
- ☒ 1. Steadily
 - ☒ 2. Idle Resting
 - ☒ 3. Sedentary
 - ☒ 4. Situated

Question ID : **6549786158**
Status : **Answered**
Chosen Option : **2**

Q.16 Read the given statements and conclusions carefully. Assuming that the information given in the statements is true, even if it appears to be at variance with commonly known facts, decide which of the given conclusions logically follow(s) from the statements.

Statements:
All rats are cats.
Some cats are not dogs.

Conclusions:
I. Some dogs are not rats.
II. Some dogs are rats.

- Ans
- ☒ 1. Both conclusions I and II follow.
 - ☒ 2. Neither conclusion I nor II follows.
 - ☒ 3. Only conclusion II follows.
 - ☒ 4. Only conclusion I follows.

Question ID : **6549786164**
Status : **Answered**
Chosen Option : **2**

Q.17 Which of the following numbers does NOT belong to the group?

423, 171, 801, 900, 701

- Ans
- ☒ 1. 171
 - ☒ 2. 801
 - ☒ 3. 701
 - ☒ 4. 423

Question ID : **6549788577**
Status : **Answered**
Chosen Option : **3**

Q.18 Select the option in which the numbers are related in the same way as are the numbers of the following set.

28 : 50 : 94

- Ans
- ☒ 1. 41 : 77 : 149
 - ☒ 2. 22 : 37 : 67
 - ☒ 3. 19 : 40 : 82
 - ☒ 4. 36 : 66 : 126

Question ID : 6549786150

Status : Answered

Chosen Option : 4

Q.19 Select the option that is related to the third term in the same way as the second term is related to the first term.

SHORTLY : OHSYLTR :: WALKING : ?

- Ans
- ☒ 1. LAWNIG
 - ☒ 2. LAWGNIG
 - ☒ 3. AWKLNIG
 - ☒ 4. KLAWGNI

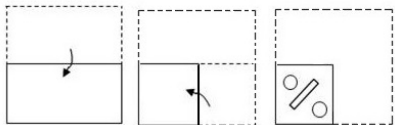
Question ID : 6549786157

Status : Answered

Chosen Option : 2

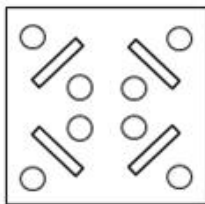


Q.20 The sequence of folding a piece of paper and the manner in which the folded paper has been cut are shown in the following figures. How would this paper look when unfolded?

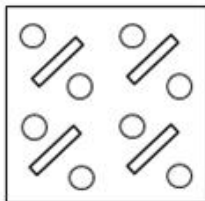


Ans

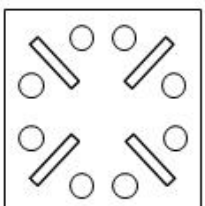
☒ 1.



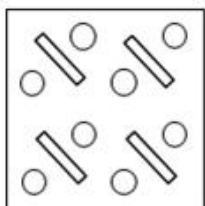
☒ 2.



☒ 3.



☒ 4.



Question ID : 6549786169

Status : Answered

Chosen Option : 3

Q.21 Select the number from among the given options that can replace the question mark (?) in the following series.

8, 8, 11, 11, 14, 14, ?

Ans ☒ 1. 17

☒ 2. 14

☒ 3. 22


☒ 4. 18

Question ID : 6549786152

Status : Answered

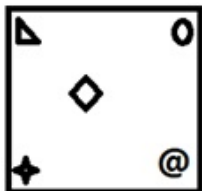
Chosen Option : 1

Q.22 Select the figure that will come next in the following figure series.

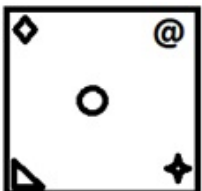


Ans

✗ 1.



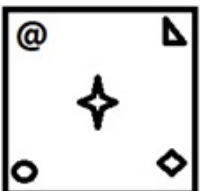
✗ 2.



✓ 3.



✗ 4.



Question ID : 6549788590

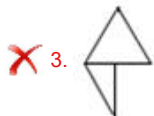
Status : Answered

Chosen Option : 3

Q.23 Select the option that is embedded in the given figure (rotation is NOT allowed).



Ans




Question ID : 6549786168

Status : Answered

Chosen Option : 4

Q.24 Find the number of triangles in the given figure.



Ans

✗ 1. 26

✓ 2. 34

✗ 3. 24

✗ 4. 22





Question ID : 6549788591

Status : Answered

Chosen Option : 1

Q.25 Which two digits and signs need to be interchanged so as to balance the given equation?

$$75 - 13 + 19 \times 8 \div 5 = 93$$

- Ans
-  1. 3 and 5; - and \times
 -  2. 8 and 3; \times and \div
 -  3. 5 and 8; - and \div
 -  4. 7 and 9; + and \times

Question ID : 6549786148

Status : Answered

Chosen Option : 3

