

Section : **General Intelligence**

Q.1 Which two digits and signs need to be interchanged so as to balance the given equation?

$$97 \div 24 - 16 \times 5 + 37 = 53$$

- Ans**
- 1. 2 and 3; + and ×
 - 2. 7 and 6; + and -
 - 3. 4 and 7; + and +
 - 4. 2 and 3; + and -

Question ID : **6549786855**

Status : **Answered**

Chosen Option : **2**

Q.2 In a certain code language, BOOTLACE is coded as 49960372 and CAPELIN is coded as 7382015. How will TAPIOCA be coded in that language?

- Ans
- 1. 6582975
 - 2. 3673819
 - 3. 5381963
 - 4. 6381973

Question ID : 6549786156
Status : Answered
Chosen Option : 4

Q.3 Select the option that is related to the third word in the same way as the second word is related to the first word.

Hindi : Devanagari :: English : ?

- Ans
- 1. Latin
 - 2. Persian
 - 3. Greek
 - 4. British

Question ID : 6549786865
Status : Answered
Chosen Option : 1

Q.4 Select the number from among the given options that can replace the question mark (?) in the following series.

12, 22, 40, 74, 140, ?

- Ans
- 1. 270
 - 2. 274
 - 3. 280
 - 4. 268

Question ID : 6549786859
Status : Answered
Chosen Option : 1

Q.5 Select the option in which the numbers are related in the same way as are the numbers of the following set.

221 : 348 : 517

- Ans
- 1. 995 : 1326 : 1723
 - 2. 1005 : 1336 : 1733
 - 3. 343 : 512 : 729
 - 4. 1331 : 1728 : 2744

Question ID : 6549786151
Status : Answered
Chosen Option : 2

Q.6 Select the option in which the numbers are related in the same way as are the numbers of the following set.

(72, 56, 42)

- Ans 1. (132, 110, 90)
 2. (80, 68, 58)
 3. (80, 48, 24)
 4. (126, 102, 80)

Question ID : 6549786857
Status : Answered
Chosen Option : 1

Q.7 Select the option in which the words share the same relationship as that shared by the given pair of words.

Virus : Ebola

- Ans 1. Bacteria : Plague
 2. Season : Common cold
 3. Fungi : Diarrhoea
 4. Mosquito : Jaundice

Question ID : 6549786161
Status : Answered
Chosen Option : 2

Q.8 Four numbers have been given in the options, out of which three are alike in some manner and one is different. Select the number that is different.

- Ans 1. 345
 2. 218
 3. 514
 4. 733

Question ID : 6549786153
Status : Answered
Chosen Option : 4

Q.9 Four words have been given, out of which three are alike in some manner and one is different. Select the word that is different.

- Ans 1. Mycology
 2. Geology
 3. Entomology
 4. Genomics

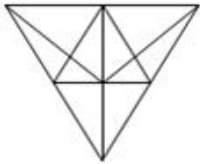
Question ID : 6549786870
Status : Answered
Chosen Option : 2

Q.10 A notebook costs ₹12 each. A pen costs ₹9 each. Tina spends ₹123 on a total of 11 pieces of these articles. How many notebooks did she purchase?

- Ans
- 1. 8
 - 2. 9
 - 3. 11
 - 4. 6

Question ID : 6549786147
Status : Answered
Chosen Option : 1

Q.11 How many triangles are there in the given figure?



- Ans
- 1. 22
 - 2. 26
 - 3. 24
 - 4. 28

Question ID : 6549786167
Status : Answered
Chosen Option : 4

Q.12 Tushar is the only son of Jitendra, and Kirti is the daughter of Jitendra's father's brother. Suhani is the sister of Tushar. How is Suhani related to Kirti?



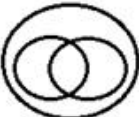

- Ans
- 1. Sister
 - 2. Aunt
 - 3. Niece
 - 4. Cousin

Question ID : 6549789809
Status : Answered
Chosen Option : 4

Q.13 Select the Venn diagram that best represents the relationship between the following classes.

Women, Mothers, Sisters

Ans

- 1. 
- 2. 
- 3. 
- 4. 

Question ID : 6549786171
Status : Answered
Chosen Option : 3

Q.14 Four letter-clusters have been given in the options, out of which three are alike in some manner and one is different. Select the letter-cluster that is different.

Ans

- 1. ILPU
- 2. KOSW
- 3. ORVA
- 4. EHLQ

Question ID : 6549786162
Status : Answered
Chosen Option : 2

Q.15 Read the given statements and conclusions carefully. Assuming that the information given in the statements is true, even if it appears to be at variance with commonly known facts, decide which of the given conclusions logically follow(s) from the statements.

Statements:

Some ducks are hens.
Some hens are chickens.

Conclusions:


- I. Some ducks are chickens.
- II. Some hens are ducks.

Ans

- 1. Neither conclusion I nor II follows.
- 2. Only conclusion II follows.
- 3. Both conclusions I and II follow.
- 4. Only conclusion I follows.


Question ID : 6549786871
Status : Answered
Chosen Option : 2

Q.16 Select the figure from among the given options that can replace the question mark (?) in the following series.



Ans

1.



2.



3.



4.



Question ID : 6549786166
Status : Answered
Chosen Option : 3

Q.17 Select the combination of letters that when sequentially placed in the blanks of the given series will complete the series.

O _ E _ O Z _ T _ Z _ T

Ans

1. Z T E O E

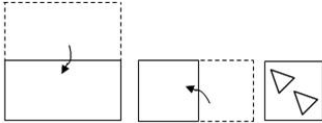
2. T E Z O Z

3. O E T Z T

4. E Z T O E

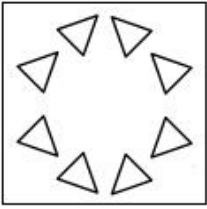
Question ID : 6549789770
Status : Answered
Chosen Option : 1

Q.18 The sequence of folding a piece of paper and the manner in which the folded paper has been cut is shown in the following figures. How would this paper look when unfolded?

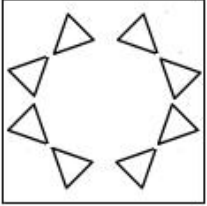


Ans

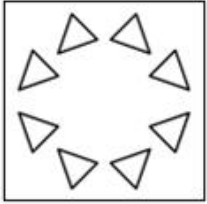
X 1.



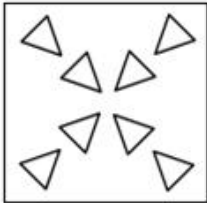
X 2.



✓ 3.



X 4.



Question ID : **6549786876**
Status : **Answered**
Chosen Option : **3**

Q.19 Select the option that is embedded in the given figure (rotation is NOT allowed).



Ans

✓ 1.



✗ 2.



✗ 3.



✗ 4.



Question ID : 6549786875

Status : Answered

Chosen Option : 1

Q.20 In a certain code language, ENVELOPE is written as IQZHPRTH. How will INTIMATE be written in that language?

Ans

✓ 1. MQXLQDXH

✗ 2. KPVKOCVG

✗ 3. NRYMREYI

✗ 4. LPWPCWG

Question ID : 6549786862

Status : Answered

Chosen Option : 1

Q.21 Three different positions of the same dice are shown. Select the letter that will be on the face opposite to the face having the letter E.



Ans

✗ 1. A

✓ 2. F

✗ 3. C

✗ 4. D

Question ID : 6549786165

Status : Answered

Chosen Option : 2

Q.22 Select the option in which the numbers share the same relationship as that shared by the given pair of numbers.

12 : 20

- Ans 1. 30 : 42
 2. 42 : 57
 3. 24 : 36
 4. 18 : 28

Question ID : **6549786149**
Status : **Answered**
Chosen Option : **1**

Q.23 Select the option that is related to the third term in the same way as the second term is related to the first term.

QUORATE : AEOQRTU :: SANDBOX : ?

- Ans 1. ASDNOBX
 2. DNASXOB
 3. ABDNOSX
 4. BOXSAND

Question ID : **6549786864**
Status : **Answered**
Chosen Option : **3**

Q.24 Select the correct option that indicates the arrangement of the given words in the order in which they appear in an English dictionary.

1. Expanse
2. Expansive
3. Expandable
4. Expansion
5. Expanded

- Ans 1. 1-2-5-3-4
 2. 3-5-1-4-2
 3. 3-2-1-5-4
 4. 5-3-1-2-4

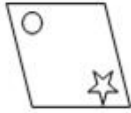
Question ID : **6549786154**
Status : **Answered**
Chosen Option : **2**

Q.25 Select the correct mirror image of the given figure when the mirror is placed at the right side.

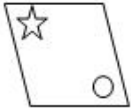


Ans

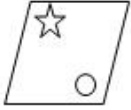
1.



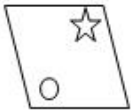
2.



3.



4.



Question ID : 6549786877

Status : Answered

Chosen Option : 2