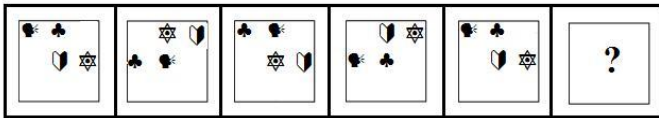


Section : General Intelligence

Q.1 Select the figure from among the given options that can replace the question mark (?) in the following series.



Ans

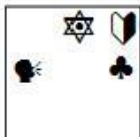
✓ 1.



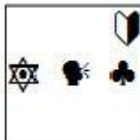
✗ 2.



✗ 3.



✗ 4.



Question ID : 6549787782

Status : Answered

Chosen Option : 1

Q.2 Select the option that is related to the third term in the same way as the second term is related to the first term.

OUTSTAY : AOSTTUY :: ROUGHLY : ?

- Ans
- 1. GUROHLY
 - 2. ORGULHY
 - 3. GHLOORUY
 - 4. GUORYLH

Question ID : 6549786359
Status : Answered
Chosen Option : 3

Q.3 The District Transport Authority has started special bus services for college going students. One bus starts from village P. The number of girls in the bus is one-fourth of the number of boys. In village Q, 20 boys leave the bus at their college stop and ten girls enter the bus. Now the number of boys and girls is equal. How many students enter the bus in the beginning?

- Ans
- 1. 50
 - 2. 40
 - 3. 30
 - 4. 60

Question ID : 6549787763
Status : Not Answered
Chosen Option : --

Q.4 Select the number from among the given options that can replace the question mark (?) in the following series.

71, 56, 44, 35, 29, ?

- Ans
- 1. 26
 - 2. 29
 - 3. 20
 - 4. 23

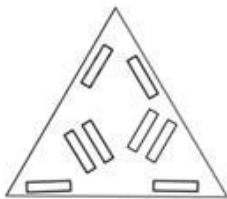
Question ID : 6549786354
Status : Answered
Chosen Option : 1

Q.5 The sequence of folding a piece of paper and the manner in which the folded paper has been cut is shown in the following figures. How would this paper look when unfolded?

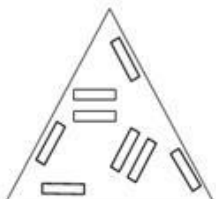


Ans

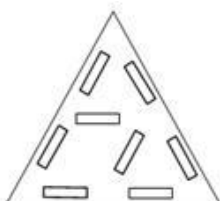
1.



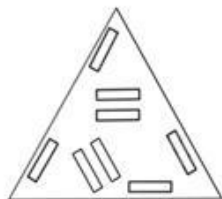
2.



3.



4.



Question ID : 6549786371
Status : Answered
Chosen Option : 2

Q.6 Four numbers have been given, out of which three are alike in some manner and one is different. Select the number that is different.

Ans 1. 308

2. 229

3. 137

4. 463


Question ID : 6549787769
Status : Answered
Chosen Option : 1

Q.7 Select the correct mirror image of the given figure when the mirror is placed at the right side.



Ans

1.



2.



3.



4.



Question ID : 6549786372
Status : Answered
Chosen Option : 3

Q.8 Select the option that is related to the third word in the same way as the second word is related to the first word.

Flock : Sheep :: Crowd : ?

Ans 1. Fly

2. Fish

3. Human

4. Swans

Question ID : 6549786360
Status : Answered
Chosen Option : 3

Q.9 Select the option in which the numbers are related in the same way as are the numbers of the following set.

47 : 58 : 71

Ans 1. 68 : 80 : 88

2. 72 : 81 : 90

3. 76 : 89 : 105

4. 89 : 98 : 106

Question ID : 6549786352
Status : Answered
Chosen Option : 3

Q.10 Select the correct option that indicates the arrangement of the given words in the order in which they appear in an English dictionary.

1. Inhaler
2. Inimitable
3. Inhabitant
4. Ingenuous
5. Inheritance

- Ans
- 1. 4, 3, 1, 5, 2
 - 2. 4, 5, 2, 1, 3
 - 3. 4, 1, 3, 5, 2
 - 4. 4, 3, 5, 1, 2

Question ID : 6549787770
Status : Answered
Chosen Option : 1

Q.11 Four options have been given, out of which three are alike in some manner and one is different. Select the option that is different.

- Ans
- 1. Indonesia
 - 2. Bangladesh
 - 3. Singapore
 - 4. Sri Lanka

Question ID : 6549786365
Status : Answered
Chosen Option : 3

Q.12 In a certain code language, EXTREME is written as VCGIVNV. How will INITIAL be written in that language?

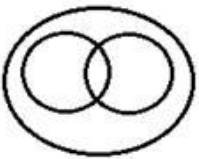

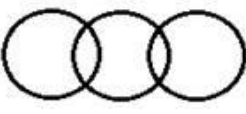

- Ans
- 1. RMSHRZP
 - 2. SNRGS AO
 - 3. RMRGRZO
 - 4. SMSGSZP

Question ID : 6549786357
Status : Answered
Chosen Option : 3

Q.13 Select the Venn diagram that best represents the relationship between the following classes.

Statisticians, Men, Pathologists

Ans

1. 
2. 
3. 
4. 

Question ID : 6549787787
Status : Answered
Chosen Option : 3

Q.14 Select the combination of letters that when sequentially placed in the blanks of the given letter series will complete the series.

k j i _ k _ _ i k j i _ k _ _ i

- Ans 1. j k j k j k
2. k i j k i j
3. i j i i j i
4. i k j i k j

Question ID : 6549786967
Status : Answered
Chosen Option : 3

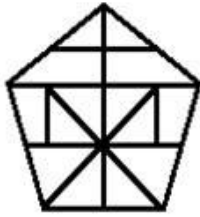
Q.15 Which two digits and signs need to be interchanged so as to balance the given equation?

$$65 + 13 - 119 \div 32 \times 8 = 175$$

- Ans 1. 5 and 8; - and \times
2. 8 and 3; \times and +
3. 9 and 8; + and +
4. 2 and 9; + and \times

Question ID : 6549786350
Status : Answered
Chosen Option : 3

Q.16 Find the number of triangles in the given figure.



- Ans
- 1. 19
 - 2. 16
 - 3. 17
 - 4. 18

Question ID : 6549787783
Status : Answered
Chosen Option : 2

Q.17 Select the option that is related to the third number in the same way as the second number is related to the first number.

18 : 163 :: 24 : ?

- Ans
- 1. 298
 - 2. 289
 - 3. 216
 - 4. 222

Question ID : 6549787765
Status : Not Answered
Chosen Option : --

Q.18 In a certain code language, VICTORY is coded as 29472435 and HASTY is coded as 278119. How will SUBLIME be coded in that language?

- Ans
- 1. 1213141585
 - 2. 1514131285
 - 3. 2143152558
 - 4. 2134152558

Question ID : 6549787772
Status : Not Answered
Chosen Option : --

Q.19 Select the option in which the words share the same relationship as that shared by the given pair of words.

Mosquito : Swarm

- Ans
- 1. Shark : School
 - 2. Cat : Murder
 - 3. Monkey : Pride
 - 4. Snake : Sleuth

Question ID : 6549787777
Status : Answered
Chosen Option : 4

Q.20 Ruchi's husband's grandfather is Abhinav, whose grandson's father is Viyan. If Abhinav and his wife have only one son, how is Viyan related to Ruchi's husband?

- Ans
- 1. Cousin
 - 2. Brother-in-law
 - 3. Father
 - 4. Uncle

Question ID : 6549789774
Status : Answered
Chosen Option : 3

Q.21 Read the given statements and conclusions carefully. Assuming that the information given in the statements is true, even if it appears to be at variance with commonly known facts, decide which of the given conclusions logically follow(s) from the statements.

Statements:

Some dogs are bulls.
All bulls are donkeys.

Conclusions:

- I. All dogs are donkeys.
- II. Some donkeys are dogs.

- Ans
- 1. Only conclusion I follows.
 - 2. Only conclusion II follows.
 - 3. Neither conclusion I nor II follows.
 - 4. Both conclusions I and II follow.

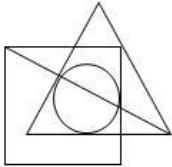
Question ID : 6549786366
Status : Answered
Chosen Option : 2

Q.22 Four letter-clusters have been given, out of which three are alike in some manner and one is different. Select the letter-cluster that is different.

- Ans
- 1. TXBV
 - 2. QUFZ
 - 3. KOLF
 - 4. GKPJ

Question ID : 6549787778
Status : Answered
Chosen Option : 4

Q.23 Select the option that is embedded in the given figure (rotation is NOT allowed).



Ans

1.



2.



3.



4.



Question ID : 6549786370

Status : Answered

Chosen Option : 2

Q.24 Study the given pattern carefully and select the number that can replace the question mark (?) in it.

13 50 8
12 39 5
15 51 ?

Ans

1. 10

2. 12

3. 7

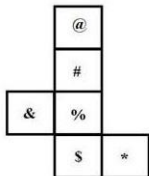
4. 9

Question ID : 6549787767

Status : Not Answered

Chosen Option : --

Q.25 A cube is made by folding the given sheet. In the cube so formed, what would be the symbol on the opposite side of 'S'?



Ans

1. &

2. #

3. *

4. @

Question ID : 6549787781

Status : Answered

Chosen Option : 2