

Section : General Intelligence

Q.1 Select the correct option that indicates the arrangement of the given words in the order in which they appear in an English dictionary.

1. Multifocal
2. Movement
3. Multinomial
4. Moviemaker
5. Mutual fund

- Ans
- 1. 4, 2, 1, 3, 5
 - 2. 4, 2, 3, 1, 5
 - 3. 1, 5, 2, 3, 4
 - 4. 2, 4, 1, 3, 5

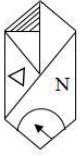
Question ID : 6549789588
Status : Answered
Chosen Option : 4

Q.2 The sales boy of a washing machine store charges his customers 24% more than the cost price. If a customer paid ₹6,200 for a washing machine, then what was the cost price of the washing machine?

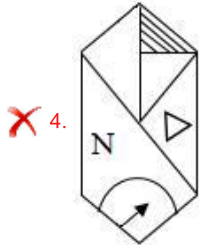
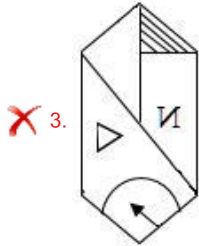
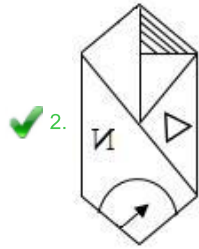
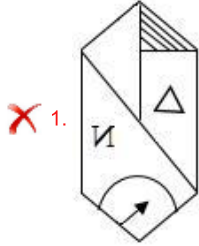
- Ans
- 1. ₹6,200
 - 2. ₹5,000
 - 3. ₹7,200
 - 4. ₹5,500

Question ID : 6549789581
Status : Answered
Chosen Option : 2

Q.3 Select the correct mirror image of the given figure when the mirror is placed at the right side of the figure.



Ans



Question ID : 6549789099
Status : Answered
Chosen Option : 2

Q.4 सिग्दा ने कहा कि वह अपनी माँ के इकलौते भाई के बेटे की माँ के ससुर से मिली। वह किससे मिली?

- Ans
- ✗ 1. पिता
 - ✗ 2. भाई
 - ✗ 3. मामा
 - ✓ 4. नाना

Question ID : 6549788281
Status : Answered
Chosen Option : 1

Q.5 Select the option that is related to the third number in the same way as the second number is related to the first number.

12 : 150 :: 14 : ?

- Ans
- 1. 302
 - 2. 205
 - 3. 203
 - 4. 502

Question ID : 6549789583
Status : Answered
Chosen Option : 3

Q.6 In a certain code language, FORWARD is written as CSZXQPE. How will NUMERAL be written in that language?

- Ans
- 1. KBQFLVM
 - 2. MUNELAR
 - 3. MZSDNTO
 - 4. KZQDLTL

Question ID : 6549789084
Status : Answered
Chosen Option : 1

Q.7 Select the option in which the words share the same relationship as that shared by the given pair of words.

Ammeter : Electric current

- Ans
- 1. Hygrometer : Humidity
 - 2. Pressure : Barometer
 - 3. Density : Lactometer
 - 4. Polarimeter : Steps

Question ID : 6549789595
Status : Answered
Chosen Option : 1

Q.8 Select the number from among the given options that can replace the question mark (?) in the following series.

3, 5, 15, 41, ?, 173

- Ans
- 1. 106
 - 2. 91
 - 3. 78
 - 4. 112

Question ID : 6549789081
Status : Answered
Chosen Option : 2

Q.9 Select the option that is related to the third letter-cluster in the same way as the second letter-cluster is related to the first letter-cluster.

BYDW : UFSH :: CXFU : ?

- Ans
- 1. TGQJ
 - 2. RIOL
 - 3. RIPK
 - 4. SHQJ

Question ID : 6549789086
Status : Answered
Chosen Option : 4

Q.10 Select the option in which the numbers are related in the same way as are the numbers of the following set.

{9, 12, 18}

- Ans
- 1. {5, 12, 24}
 - 2. {13, 19, 31}
 - 3. {7, 13, 27}
 - 4. {21, 29, 44}

Question ID : 6549789079
Status : Answered
Chosen Option : 2

Q.11 Study the given pattern carefully and select the number that can replace the question mark (?) in it.

28 16 27
44 16 15
84 ? 24

- Ans
- 1. 27
 - 2. 28
 - 3. 29
 - 4. 30

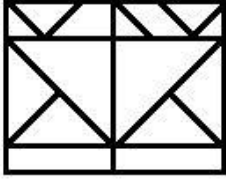
Question ID : 6549789585
Status : Not Answered
Chosen Option : --

Q.12 Four words have been given, out of which three are alike in some manner and one is different. Select the word that is different.

- Ans
- 1. Truthfulness
 - 2. Integrity
 - 3. Joviality
 - 4. Honesty

Question ID : 6549789092
Status : Answered
Chosen Option : 3

Q.13 Find the number of triangles in the given figure.



- Ans
- 1. 15
 - 2. 11
 - 3. 13
 - 4. 14

Question ID : 6549789601
Status : Answered
Chosen Option : 4

Q.14 Select the Venn diagram that best represents the relationship between the following classes.

Women, Professors, Widows

Ans

- 1.
- 2.
- 3.
- 4.

Question ID : 6549789605
Status : Answered
Chosen Option : 1

Q.15 जिस प्रकार 'तिनका', 'घोसला' से संबंधित है ठीक उसी प्रकार 'कपास', '_____' से संबंधित है।

- Ans
- 1. ऊन
 - 2. कपड़ा उद्योग
 - 3. सिलाई
 - 4. धागा

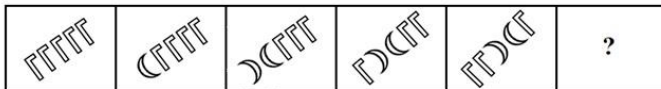
Question ID : 6549789087
Status : Answered
Chosen Option : 2

Q.16 Four numbers have been given, out of which three are alike in some manner and one is different. Select the number that is different.

- Ans
- 1. 1652
 - 2. 6138
 - 3. 6341
 - 4. 5423

Question ID : 6549789587
Status : Answered
Chosen Option : 2

Q.17 Select the figure from among the given options that can replace the question mark (?) in the following series.



Ans

- 1.
- 2.
- 3.
- 4.

Question ID : 6549789600
Status : Answered
Chosen Option : 3

Q.18 In a certain code language, HAMPER is coded as 17212322036 and INSULT is coded as 16286421340. How will SAFETY be coded in that language?

- Ans
- 1. 621910550
 - 2. 610195320
 - 3. 629101350
 - 4. 612195030

Question ID : 6549789590
Status : Answered
Chosen Option : 1

Q.19 Read the given statements and conclusions carefully. Assuming that the information given in the statements is true, even if it appears to be at variance with commonly known facts, decide which of the given conclusions logically follow(s) from the statements.

Statements:

All computers are machines.
No television is a computer.
All televisions are instruments.

Conclusions:

I. Some instruments are machines.
II. Some machines are computers.
III. Some televisions are machines.

- Ans
- 1. Only conclusion I follows.
 - 2. Only conclusion II follows.
 - 3. None of the conclusions follow.
 - 4. Only conclusions II and III follow.

Question ID : 6549789093
Status : Answered
Chosen Option : 2

Q.20 Four letter-clusters have been given, out of which three are alike in some manner and one is different. Select the letter-cluster that is different.

- Ans
- 1. NRJQ
 - 2. DHSZ
 - 3. GKPW
 - 4. TXCJ

Question ID : 6549789596
Status : Answered
Chosen Option : 1

Q.21 Which two signs should be interchanged to make the following equation correct?

$$12 - 8 + 4 \div 2 \times 8 = 4$$

- Ans
- 1. \times and $+$
 - 2. $-$ and \times
 - 3. \div and $-$
 - 4. \times and \div

Question ID : 6549789077
Status : Answered
Chosen Option : 1

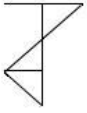
Q.22 Select the combination of letters that when sequentially placed in the blanks of the given letter series will complete the series.

a _ _ bcde _ _ abbcd _ _ aabb _ _ ee

- Ans
- 1. aeaebeed
 - 2. abeaeeed
 - 3. abecdeae
 - 4. aeecdbea

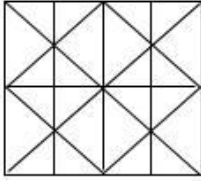
Question ID : 6549788785
Status : Answered
Chosen Option : 2

Q.23 Select the option in which the given figure is embedded (rotation is NOT allowed).

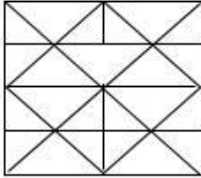


Ans

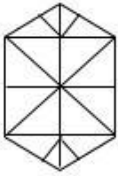
✓ 1.



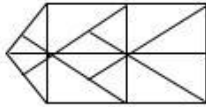
✗ 2.



✗ 3.



✗ 4.

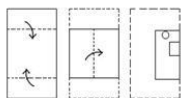


Question ID : 6549789097

Status : Answered

Chosen Option : 1

Q.24 The sequence of folding a piece of paper and the manner in which the folded paper has been cut is shown in the following figures. How would this paper look when unfolded?

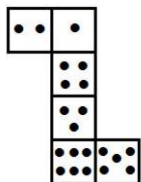


Ans

- ✓ 1.
- ✗ 2.
- ✗ 3.
- ✗ 4.

Question ID : 6549789098
 Status : Answered
 Chosen Option : 1

Q.25 A cube is made by folding the given sheet. In the cube so formed, how many dots lie opposite to the face having 4 dots?



- Ans
- ✗ 1. 1
 - ✓ 2. 6
 - ✗ 3. 2
 - ✗ 4. 5

Question ID : 6549789599
 Status : Answered
 Chosen Option : 2