

---

## SSC CGL (Tier - 1) Online Exam Paper - 2016 "held on 4 September 2016" Morning Shift (Reasoning)

---

**EXAM DATE** : - 4 September-2016

**EXAM START TIME** : 10:00:00

**EXAM NAME** : SSC Examination 2016

**Question 1.** Select the related word/letters/number from the given alternatives.

Play : Actor :: Concert:?

**Options:**

- 1) Symphony
- 2) Musician
- 3) Piano
- 4) Percussion

**Correct Answer:** Musician

**Question 2.** Select the related word/letters/number from the given alternatives.

EGIK : FILO :: FHJL : ?

**Options:**

- 1) JGMP
- 2) JGPM

3) GJMP

4) GMJP

**Correct Answer:** GJMP

**Question 3.**Select the related word/letters/number from the given alternatives.

583 : 295 :: 486 : ?

**Options:**

1) 291

2) 378

3) 487

4) 581

**Candidate Answer:** 378

**Question 4.**Find the odd word/letters/number pair from the given alternatives.

(A) Fire

(B) Light

(C) Gas

(D) Water

**Options:**

1) A

2) B

3) C

4) D

**Correct Answer:** D

**Question 5.**Find the odd word/letters/number pair from the given alternatives.

(A) ECBY

(B) RTUX

(C) GEDA

(D) WUTQ

**Options:**

1) A

2) B

3) C

4) D

**Correct Answer:** B

**Question 6.**Find the odd word/letters/number pair from the given alternatives.

(A) 52-61

(B) 43-54

(C) 72-83

(D) 18-29

**Options:**

1) A

2) B

3) C

4) D

**Correct Answer:** A

**Question 7.** Arrange the following words as per order in the dictionary.

1. Fraudulent

2. Fraught

3. Fraternity

4. Franchise

5. Frantic

**Options:**

1) 5,4,1,2,3

2) 4,5,3,1,2

3) 4,3,5,1,2

4) 3,4,5,2,1

**Correct Answer:** 4,5,3,1,2

**Question 8.** Which one set of letters when sequentially placed at the gaps in the given letter series shall complete it?

H \_ JH \_ IJHHI \_ HH \_ JH

**Options:**

1) I H J I

2) H I H I

3) I H I J

4) H J H J

**Correct Answer:** I H J I

**Question 9.** Which number will complete the series?

63, 72, 81, 90, \_\_\_\_, 108

**Options:**

- 1) 80
- 2) 99
- 3) 100
- 4) 117

**Correct Answer:** 99

**Question 10.**Rajiv is the brother of Arun. Sonia is the sister of Sunil. Arun is the son of Sonia. How is Rajiv related to Sunil?

**Options:**

- 1) nephew
- 2) son
- 3) brother
- 4) father

**Correct Answer:** nephew

**Question 11.**A mother is five times older than her daughter. After 5 years, she would be 3 times older than her daughter. Find the mother's present age.

**Options:**

- 1) 20 years
- 2) 22 years
- 3) 25 years
- 4) 29 years

**Correct Answer:** 25 years

**Question 12.**From the given alternative words, select the word which cannot be formed using the letters of the given word:

PRONOUNCEMENT

**Options:**

- 1) MOUNT
- 2) CEMENT
- 3) PAVEMENT
- 4) NOUN

**Correct Answer:** PAVEMENT

**Question 13.**If SYSTEM is written as RXRSDL. How can CORRECT be written in that code?

**Options:**

- 1) BNQQDBS

# SSC CGL Tier-2 Study Kit



- 100% Syllabus Covered
- 3 Books, 750+ Pages
- 2000+ MCQs
- 5 Mock Practice Tests (PDF Copy)
- 1 year Current Affairs (PDF Copy)



~~₹ 6,000/-~~  
**₹ 1,999/-**

>>>> [Click Here for More Details](#)

[CLICK HERE](#)

SSCPOTAL.IN

## What you will get:

- 100% Syllabus Covered
- 3 Booklets
- 750+ Pages
- 2,000+ MCQs
- 5 Practice Papers also provided
- One Year Current Affairs (PDF Copy)
- Guidance & Support from Our Experts

Price of the Kit:

~~Rs. 6,000~~

**Rs. 1,999/-**

*(Limited time Offer)*



Net Banking

[CLICK HERE FOR MORE DETAILS](#)

**Order Online (100% Safe)**

[Click here for Other Payment Options \(Cash/NEFT/etc\)](#)

**50%  
OFF**

[CLICK HERE](#)

2) BQQNDBS

3) BNQQBDS

4) BNQDQBS

**Correct Answer:** BNQQBDS

**Question 14.** If A means +, B means  $\times$ , C means  $\div$ , D means  $-$ , then the value of given equation will be?

9A2B6D4C2

**Options:**

1) 16

2) 19

3) 27

4) 30

**Correct Answer:** 19

**Question 15.** If,  $4 \times 3 = 14$ ;  $5 \times 4 = 18$ ;  $6 \times 5 = 22$ ; Then find the value of  $7 \times 6 = ?$

**Options:**

1) 20

2) 26

3) 30

4) 42

**Correct Answer:** 26

**Question 16.** Select the missing number from the given responses:

7	56	8
9	45	?
11	99	9

**Options:**

1) 6

2) 9

3) 5

4) 4

**Correct Answer:** 5

**Question 17.** Rita travelled 35 Km from a point towards South and then turned left and travelled 20 Km and finally turned left again and travelled 35 Km. In which direction is she from the starting point?

**Options:**

1) East

2) West

3) North

4) South

**Correct Answer:** East

**Question 18.** Consider the given statement/s to be true and decide which of the given conclusions/assumptions can definitely be drawn from the given statement.

**Statement:** To achieve economic development, people should work hard.

**Conclusions:** I: Economic development is directly related to people's hardwork.

II: Working hard by all the people is impossible

**Options:**

1) Only I follows

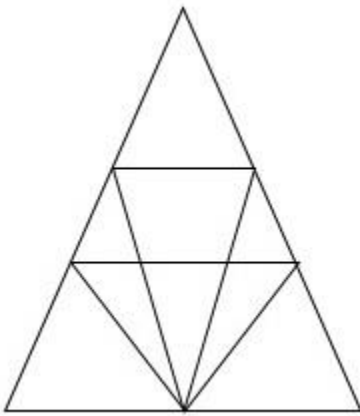
2) Only II follows

3) Both I and II follow

4) Neither I nor II follows

**Correct Answer:** Only I follows

**Question 19.** Find the number of triangles in the figure.



**Options:**

1) 12

2) 18

3) 22

4) 26

**Correct Answer:** 18

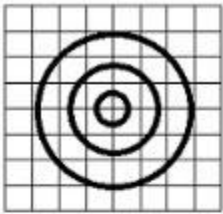
**Question 20.** Which of the answer figures best represents the relation between:

Shirt, Garments, Clothes

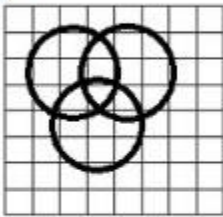
Options:

Options:

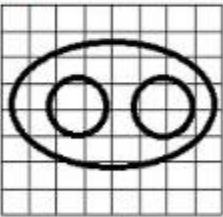
1)



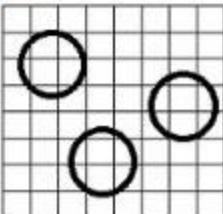
2)



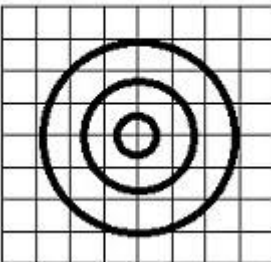
3)



4)

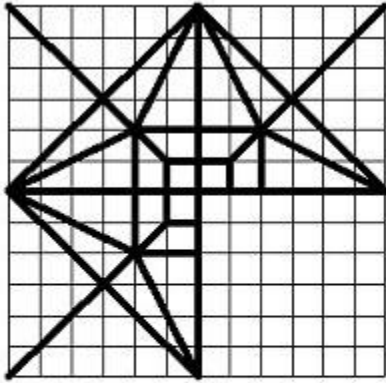


Correct Answer:



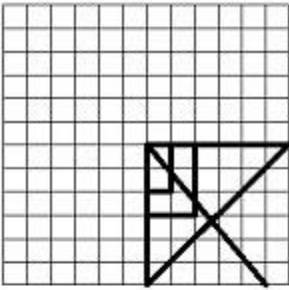
Question 21. Which answer figure will complete the pattern in the question figure?



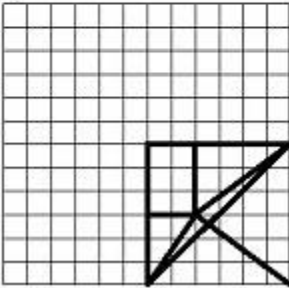


Options:

1)



2)



# Study Kit for SSC Stenographers (Grade 'C' & 'D') Examination (Paper - 1)



- Medium: English
- 100% Syllabus Covered
- 3000 + MCQs
- 700+ Pages

**SPECIAL  
OFFER**

**Only**  
**MRP ₹ 3000/-**  
**Offer ₹ 1499/-**

[Click Here for More Details](#)

## What you will get:

- 100% Syllabus Covered
- 6 Booklets
- 700+ Pages
- 3000+ MCQs
- Five Practice Papers
- One Year Current Affairs
- Guidance & Support from Our Experts

Price of the Kit:

~~Rs. 3,000~~

**Rs. 1,499/-**  
(Limited time Offer)



Net Banking

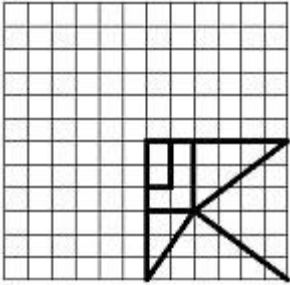
[FOR MORE DETAILS CLICK HERE](#)

[Order Online \(100% Safe\)](#)

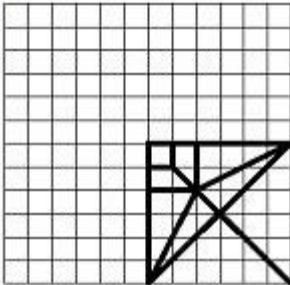
[Click here for Other Payment Options \(Cash/NEFT/etc\)](#)

**50%  
OFF**

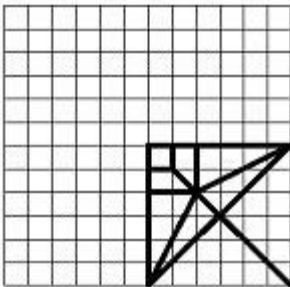
3)



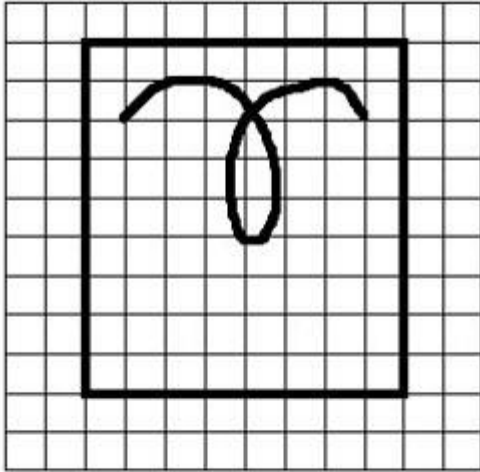
4)



Correct Answer:




Question 22. From the given answer figures, select the one in which the question figure is hidden/embedded.




Options:

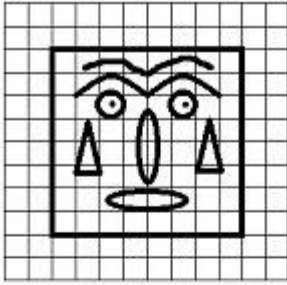
1)



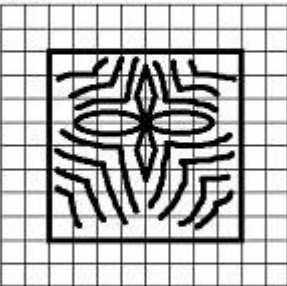
2)




3)



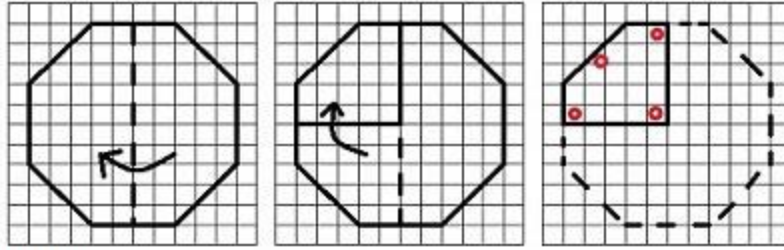
4)



Correct Answer:

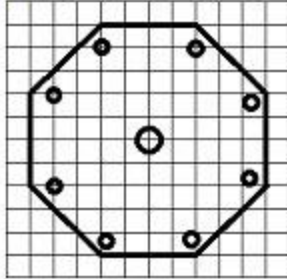


Question 23. A piece of paper is folded and punched as shown below in question figures. From the given answer figures, indicate how it will appear when opened.

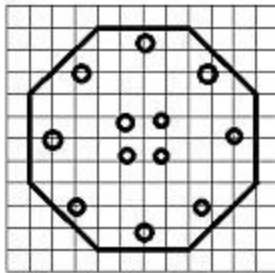


Options:

1)



2)



# कर्मचारी चयन आयोग (CGL) परीक्षा अध्ययन सामग्री



- 100% Syllabus Covered
- 4 Books, 900+ Pages
- 2500+ MCQs
- 08 Year Solved Papers & Mock Tests (PDF Copy)
- 1 year Current Affairs (PDF Copy)

**50% OFF**

~~₹ 4,200/-~~  
**₹ 2,100/-**

FREE SHIPPING 

for Exam Help Call Us at: +91 8800734161

 **SSCPortal.IN**

## आप क्या प्राप्त करेंगे?

- माध्यम: हिन्दी
- 100% पाठ्यक्रम
- कुल 4 पुस्तिकाएँ, 900 से अधिक पृष्ठ
- 2,500 से अधिक वस्तुनिष्ठ प्रश्न (MCQ)
- 8 Year Solved Papers (PDF Copy)
- Five Practice Papers (PDF Copy)
- हमारे विशेषज्ञों द्वारा मार्गदर्शन और सहायता

Price of the Kit:

Rs. 4,200

**Rs. 2,100/-**

*(Limited time Offer)*



Buy Online



Net Banking

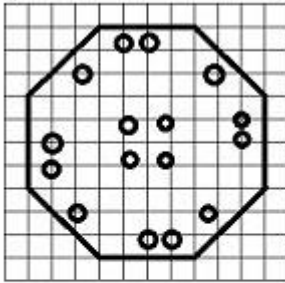
**Order Online (100% Safe)**

[Click here for Other Payment Options \(Cash/NEFT/etc\)](#)

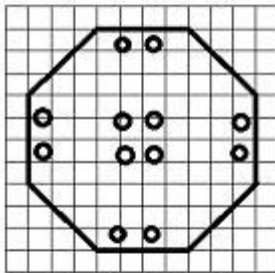
[FOR MORE DETAILS CLICK HERE](#)

**50% OFF**

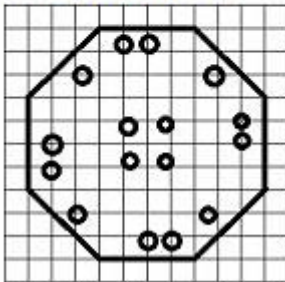
3)



4)

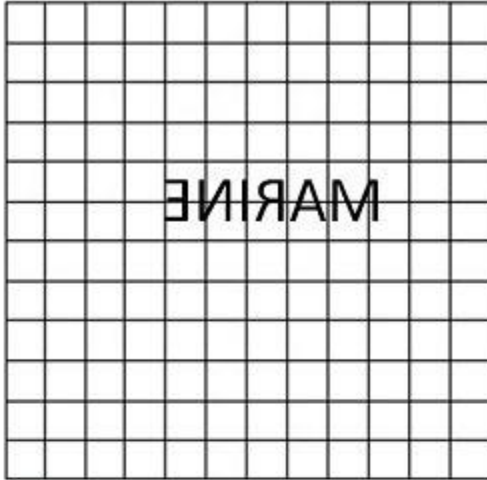


Correct Answer:



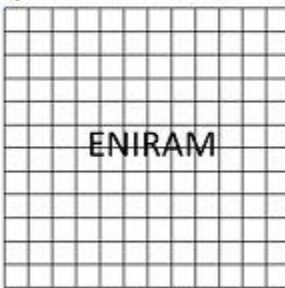
Question 24. The mirror image of a word is seen as given below. What is the actual word?





Options:


1)




2)




3)



4)



**Correct Answer:**



Question 25. In the question, a word is represented by only one set of numbers as given in any one of the alternatives. The sets of numbers given in the alternatives are represented by two classes of alphabets as in two matrices given below. The columns and rows of Matrix I are numbered from 0 to 4 and that of Matrix II are numbered from 5 to 9. A letter from these matrices can be represented first by its row and next by its column, e.g., B can be represented by 00,13, etc, and A can be represented by 55,69, etc. You have to identify the set for the word 'LION'.

Matrix-I

	0	1	2	3	4
0	B	N	G	L	D
1	G	L	D	B	N
2	D	B	N	G	L
3	N	G	L	D	B
4	L	D	B	N	G

Matrix-II

	5	6	7	8	9
5	A	I	K	O	R
6	I	K	O	R	A
7	K	O	R	A	I
8	O	R	A	I	K
9	R	A	I	K	O

**Options:**

- 1) 03, 55, 76, 33
- 2) 11, 65, 77, 22
- 3) 23, 79, 85, 43
- 4) 11, 88, 99, 22

**Correct Answer:** 11, 88, 99, 22



<a href="#">Study Material for SSC CGL (Tier-1) Examination</a>	<a href="#">English</a>	<a href="#">CLICK HERE</a>
<a href="#">Study Kit for SSC CGL (Tier-2) Exam</a>	<a href="#">English</a>	<a href="#">CLICK HERE</a>
<a href="#">Study Kit for SSC CHSL (10+2) Examination</a>	<a href="#">English</a>	<a href="#">CLICK HERE</a>
<a href="#">Study Kit for SSC Stenographers (Grade 'C' &amp; 'D')</a>	<a href="#">English</a>	<a href="#">CLICK HERE</a>
<a href="#">Study Kit for Multitasking (Non-Technical) - MTS</a>	<a href="#">English</a>	<a href="#">CLICK HERE</a>
<a href="#">Study Kit for SSC Constables (GD) Exam</a>	<a href="#">English</a>	<a href="#">CLICK HERE</a>
<a href="#">Study Kit For SSC Sub-Inspectors in Delhi Police, CAPFs, CISF</a>	<a href="#">English</a>	<a href="#">CLICK HERE</a>
<a href="#">Study Kit for SSC Junior Engineer Exam (Paper-1)</a>	<a href="#">English</a>	<a href="#">CLICK HERE</a>
<b>IAS EXAMS STUDY MATERIALS</b>		
<a href="#">Study Kit for IAS (Pre) GENERAL STUDIES Paper-1 (GS)</a>	<a href="#">English</a>	<a href="#">CLICK HERE</a>
<a href="#">Study Kit for IAS (Pre) CSAT Paper-2(Aptitude)</a>	<a href="#">English</a>	<a href="#">CLICK HERE</a>
<a href="#">सामान्य अध्ययन (GS) प्रारंभिक परीक्षा (Pre) पेपर-1</a>	<a href="#">हिन्दी</a>	<a href="#">CLICK HERE</a>
<a href="#">आई. ए. एस. (सी-सैट) प्रारंभिक परीक्षा पेपर -2</a>	<a href="#">हिन्दी</a>	<a href="#">CLICK HERE</a>
<a href="#">Gist of NCERT Study Kit For UPSC Exams</a>	<a href="#">English</a>	<a href="#">CLICK HERE</a>
<a href="#">यूपीएससी परीक्षा के लिए एनसीईआरटी अध्ययन सामग्री</a>	<a href="#">हिन्दी</a>	<a href="#">CLICK HERE</a>